

ARMY PUBLIC SCHOOL GWALIOR

CLASS -VI

ACADEMIC SESSION 2021-22

WORKSHEET (SELF –ASSESSMENT)

Subject: English

Assignment No. : 7

Allotment Date: 15 October 2021

S. NO.	QUESTIONS	MARKS	SKILLS/ COMPETENCIES	
1	What lesson do you learn from the story Fair Play?	4 m	Information	
2	Fill in the blanks with since or for: i) I have been in this town ----- 1968. ii) He has been married ----- six years. iii) He had been here ----- last Friday.	3m	Understanding	
3	Which is more desirable- friendship or enmity? When does a person hear strongly the voice of his conscience?	4m	HOT	
4	Is sleep a biological process or physiological process? Explain.	3m	Interdisciplinary	
5	Replace the italicized portion of the given sentence with a suitable phrase from the box. Make necessary changes, wherever required. <table border="1" data-bbox="209 1563 975 1608"><tr><td>a tight spot my heart sank take chances</td></tr></table> 1. He has been told not to <i>take risks</i> while driving a car through a crowded street. 2. I was in a <i>difficult situation</i> till my friends came to my rescue. 3. When I saw a pile of dirty dishes, I <i>felt very disappointed</i> .	a tight spot my heart sank take chances	3m	Analytical Skill
a tight spot my heart sank take chances				
6	'Wisdom comes in handy in times of trouble' . How it fits in the story of 'The Monkey and the Crocodile'? Explain.	4m	Critical Thinking and Problem Solving	

7	Answer the following questions in about 20-30 words. 1. Why was the panchayat held for the first time? 2. Why are dreams important? Mention any two reasons. 3. Why was the monkey happy/unhappy?	3x2=6m	Evaluation
8	How does a sound sleep prove wonderful ? Express your thoughts.	3m	Communication Skills



ARMY PUBLIC SCHOOL GWALIOR

CLASS -VI

ACADEMIC SESSION 2021-22

WORKSHEET (SELF –ASSESSMENT)


Subject: Hindi

Assignment No. : 7

Allotment Date: 15 October 2021

क्रम संख्या	प्रश्न	अंक	प्रकृति
1.	टिकट अल्बम का शौक रखने के राजप्पा और नागराजन के तरीके में क्या फर्क है? तुम अपने शौक के लिये कौन सा तरीका अपनाओगे ?	5	INFORMATIVE
2.	अल्बम चुराते समय राजप्पा किस मानसिक स्थिति से गुजर रहा था?	1x4=4	UNDERSTANDING
3.	रेखांकित संज्ञा का भेद लिखिए। 1. मेरी दादी <u>बचपन</u> में बहुत शरारती थीं। 2. <u>हिरण जंगल</u> में घूम रहा है। 3. ये सब <u>बजरंग</u> दल के लोग हैं। 4. उसके पास <u>सोने</u> की घड़ी है। 5. सोनू ने <u>हैदराबाद</u> में चारमीनार देखा।	1x5=5	HOT

4.	<p>निम्नलिखित शब्दों के लिंग बदलकर लिखिए।</p> <p>1. भगवान</p> <p>2. चिड़ा</p> <p>3. संपादक</p> <p>4. पंडित</p> <p>5. प्राचार्य</p>	5	INTERDISCIPLINARY
5.	<p>कई लोग चीजें इकट्ठी करते हैं और गिनीज बुक ऑफ वर्ल्ड रिकार्ड में अपना नाम दर्ज करवाते हैं, इसके पीछे उनकी क्या प्रेरणा होती होगी? सोचो और अपने विचार लिखो।</p>	5	<p>CRITICAL THINKING AND PROBLEM SOLVING</p>
6	<p>निम्नांकित प्रश्नों के उत्तर दीजिए</p> <p>1^व संज्ञा की परिभाषा उदाहरण सहित लिखिए।</p> <p>2^व लेखक के राजप्पा के टिकट इकट्ठा करने की तुलना मधुमक्खी से क्यों की।</p> <p>3. षलिंग की परिभाषा उदाहरण सहित लिखिए।</p>	3x2=6	EVALUATION



ARMY PUBLIC SCHOOL GWALIOR

CLASS -VI

ACADEMIC SESSION 2021-22

WORKSHEET (SELF –ASSESSMENT)

Subject: Mathematics

Assignment No. : 7

Allotment Date: 15 October 2021

S. NO.	QUESTIONS	MARKS	SKILLS/ COMPETENCIES
1	1. Write the names of number 87595762 according to Indian System of Numeration.	1	Informative
2	Find the common factors of 20 and 28	1	Problem solving
3	Where will the hand of a clock stop if it starts at 2 and makes $1\frac{1}{2}$ of a revolution, clockwise?	1	Understanding
4	What fraction of a day is 8 hours?	1	Evaluation
5	Write the following numbers with appropriate signs : (a) 100 m below sea level. (b) 25°C above 0°C temperature.	1	Understanding
6	Number of lines which can be drawn from one point	1	Informative
7	Which of the following statement is true: (a) 2 subtracted from -3 gives 1 (b) -1 subtracted from -5 gives 6 (c) 3 subtracted from -8 gives -11 (d) 1 subtracted from -7 gives -6	1	Analytical skills and problem solving
8	Write the names of number 87595762 according to Indian System of Numeration.	1	Informative
9	Find the sum of 137 and -354	1	Informative

10	Find the HCF of 15, 25 and 30 OR Write the smallest 5-digit number and express it in the form of its prime factors	2	Understanding & problem solving
11	Estimate the product 5981×4428 by rounding off each number to the nearest hundreds	2	Problem solving
12	Give a rough estimate (by rounding off to nearest hundreds) : $439 + 334 + 4,317$	2	Problem solving
13	Find the product using suitable properties. (a) 738×103 (b) 854×102	2	Evaluation
14	Name the types of following triangles : (a) Triangle with lengths of sides 7 cm, 8 cm and 9 cm. (b) $\triangle ABC$ with $AB = 8.7$ cm, $AC = 7$ cm and $BC = 6$ cm. (c) $\triangle PQR$ such that $PQ = QR = PR = 5$ cm.	2	Evaluation
15	Using divisibility tests, determine which of following two numbers are divisible by 6: (a) 297144 (b) 1258	2	Understanding & problem solving
16	Find (a) $(-7) - 8 - (-25)$ (b) $(-13) + 32 - 8 - 1$ (c) $(-7) + (-8) + (-90)$	3	Problem solving
17	In a morning walk, three persons step off together. Their steps measure 80 cm, 85 cm and 90 cm respectively. What is the minimum distance each should walk so that all can cover the same distance in complete steps?	3	Critical Thinking & Problem solving

18	Find the least number which when divided by 6, 15 and 18 leave remainder 5 in each case.	3	problem solving
-----------	--	----------	-----------------



ARMY PUBLIC SCHOOL GWALIOR

CLASS -VI

ACADEMIC SESSION 2021-22

WORKSHEET (SELF –ASSESSMENT)


Subject: Science

Assignment No. : 7

Allotment Date: 15 October 2021

S.NO.	QUESTIONS	MARKS	SKILLS/ COMPETENCIES
1.	Answer the following questions: (i). What is light? (ii). Give one natural source of light.	1X2=2	Information
2.	Fill in the blanks: (i). Light travels in a _____ line. (ii). _____ objects allow light to pass through them partially.	2X2=4	Understanding
3.	(i). When does a shadow form? (ii). What do we need in order to see a shadow?	2X2=4	HOTS
4.	(i). What is the difference between transparent and opaque objects? (ii). What are luminous objects? (iii). In a completely dark room, if you hold up a mirror in front of you, will you see a reflection of yourself in the mirror?	2X3=6	Interdisciplinary
5.	(i). How does the colour of an opaque object affects the colour of the shadow?	3X3=9	Analytical skill

	(ii). Have you ever seen an ambulance? It is written in the form of mirror image on vehicles. Explain why it is done so and give the mirror image of AMBULANCE.?		Critical Thinking and Problem Solving
	(iii). What is reflection of light?		Evaluation
6.	What is a pinhole camera? How can we make a simple pinhole camera?	5X1=5	Communication skills



ARMY PUBLIC SCHOOL GWALIOR

CLASS -VI

ACADEMIC SESSION 2021-22

WORKSHEET (SELF –ASSESSMENT)

Subject: Social Science

Assignment No. : 7

Allotment Date: 15 October 2021

S.NO	QUESTIONS	MARKS	SKILLS/COMPETENCIES
1.	Name the book which gives the rules of the Buddhist 'Sangha'	1	Information
2.	What is external process?	2	Understanding
3.	In what ways are present-day elections different from the ways in which rulers were chosen in janapadas?	3	Interdisciplinary
4.	Define the terms: i) Deposition ii) Ashrama:	4	Analytical Skill
5	Why is the river plains thickly populated?	3	HOT

6.	Who were the groups who could not participate in the Assemblies of the ganas?	2	Critical Thinking and Problem Solving
7.	How many types of mountains are there?	2	Evaluation
8.	On an outline political map of India locate and mark the following:- (i) Panchala (ii) Kosala (iv) Magadh	3	Identification and location



ARMY PUBLIC SCHOOL GWALIOR

CLASS -VI

ACADEMIC SESSION 2021-22

WORKSHEET (SELF –ASSESSMENT)

Subject: Sanskrit


Assignment No. : 7

Allotment Date: 15 October 2021

S. No.	QUESTIONS	MARKS	SKILLS/ COMPETENCIES
1	<p>रेखांकित शब्दों को शुद्ध करके लिखिए -</p> <p>(क) शिवं ----- नमः ।</p> <p>(ख) धिक् चौराय ----- ।</p> <p>(ग) विद्यालयस्य ----- उभयतः वक्षाः सन्ति ।</p> <p>(घ) पुत्रः जनकस्य ----- सह गच्छति ।</p> <p>(ङ) भिक्षुकः भवनस्य ----- बहिः तिष्ठति ।</p>	5	Understanding
2	<p>निम्नलिखित अव्यय-पदों का स्वरचित संस्कृत वाक्यों में प्रयोग कीजिए -</p> <p>क) अद्य -----</p> <p>ख) श्वः -----</p>	5	Thinking Skill

	<p>ग) तत्र -----</p> <p>घ) अपि -----</p> <p>ङ) तूष्णीम् -----</p>														
3	<p>स्तम्भ 'क' तथा स्तम्भ 'ख' का मिलान कीजिए-</p> <table style="width: 100%; border: none;"> <thead> <tr> <th style="text-align: center; width: 50%;">स्तम्भ 'क'</th> <th style="text-align: center; width: 50%;">स्तम्भ 'ख'</th> </tr> </thead> <tbody> <tr> <td>क) सह</td> <td>तृतीया</td> </tr> <tr> <td>ख) बहिः</td> <td>पन्चमी</td> </tr> <tr> <td>ग) उभयतः</td> <td>द्वितीया</td> </tr> <tr> <td>घ) सर्वतः</td> <td>द्वितीया</td> </tr> <tr> <td>ङ) धिक्</td> <td>द्वितीया</td> </tr> </tbody> </table>	स्तम्भ 'क'	स्तम्भ 'ख'	क) सह	तृतीया	ख) बहिः	पन्चमी	ग) उभयतः	द्वितीया	घ) सर्वतः	द्वितीया	ङ) धिक्	द्वितीया	5	Memory Skill
स्तम्भ 'क'	स्तम्भ 'ख'														
क) सह	तृतीया														
ख) बहिः	पन्चमी														
ग) उभयतः	द्वितीया														
घ) सर्वतः	द्वितीया														
ङ) धिक्	द्वितीया														
4	<p>श्लोकांशान् योजयत -</p> <table style="width: 100%; border: none;"> <tbody> <tr> <td style="width: 50%;">क) गृहं जीर्णं न वर्षासु</td> <td style="width: 50%;">तौ तु क्षेत्राणि कर्षतः ।</td> </tr> <tr> <td>ख) हलेन च कुदालेन</td> <td>या शुष्का कण्टकावृता ।</td> </tr> <tr> <td>ग) पादयोर्न पदत्राणे</td> <td>सस्यपूर्णानि सर्वदा ।</td> </tr> <tr> <td>घ) तयोः श्रमेण क्षेत्राणि</td> <td>शरीरे वसनानि नो ।</td> </tr> <tr> <td>ङ) धरित्री सरसा जाता</td> <td>वृष्टिं वारयितुं क्षमम् ।</td> </tr> </tbody> </table>	क) गृहं जीर्णं न वर्षासु	तौ तु क्षेत्राणि कर्षतः ।	ख) हलेन च कुदालेन	या शुष्का कण्टकावृता ।	ग) पादयोर्न पदत्राणे	सस्यपूर्णानि सर्वदा ।	घ) तयोः श्रमेण क्षेत्राणि	शरीरे वसनानि नो ।	ङ) धरित्री सरसा जाता	वृष्टिं वारयितुं क्षमम् ।	5	Analytical Skill		
क) गृहं जीर्णं न वर्षासु	तौ तु क्षेत्राणि कर्षतः ।														
ख) हलेन च कुदालेन	या शुष्का कण्टकावृता ।														
ग) पादयोर्न पदत्राणे	सस्यपूर्णानि सर्वदा ।														
घ) तयोः श्रमेण क्षेत्राणि	शरीरे वसनानि नो ।														
ङ) धरित्री सरसा जाता	वृष्टिं वारयितुं क्षमम् ।														

5	<p>उपयुक्तकथनानां समक्षम् 'आम्' अनुपयुक्तकथनानां समक्षं 'न' इति लिखत -</p> <p>क) कृषकाः सर्वेभ्यः अन्नं यच्छन्ति I []</p> <p>ख) कृषकाणां जीवनं कष्टप्रदं न भवति I []</p> <p>ग) कृषकः क्षेत्राणि सस्यपूर्णानि करोति I []</p> <p>घ) शीते शरीरे कम्पनं न भवति I []</p> <p>ङ) श्रमेण धरित्री सरसा भवति I []</p>	5	Critical Thinking
6	<p>प्रश्नानाम उत्तराणि लिखत -</p> <p>क) कृषकाः केन क्षेत्राणि कर्षन्ति I</p> <p>ख) केषां कर्मवीरत्वं न नश्यति I</p> <p>ग) श्रमेण का सरसा भवति I</p> <p>घ) कृषकाः सर्वेभ्यः किं किं यच्छन्ति I</p> <p>ङ) कृषकात् दूरे किं तिष्ठति I</p>	5	Information



ARMY PUBLIC SCHOOL GWALIOR

CLASS -VI

ACADEMIC SESSION 2021-22


WORKSHEET (SELF –ASSESSMENT)

Subject: Computer

Assignment No. : 7

Allotment Date: 15 October 2021

S. No.	Questions	Marks	SKILLS/ COMPETEN CIES
1	Tick The Correct Answer	5x 1/2=2.5	Information
	A) You can make a worksheet look more attractive and legible by a) Storage device b) Formatting c) Output device		
	B) The position in which data is places within the boundary of a cell is referred to a) Alignment b) Pen drive c) CPU		
	C) The number of styles offered by Excel 2010 is a) 16 b) 255 c) 14		
	D) To apply a combination of formatting settings, _____ is used. a) Conditional Formatting b) Formatting toolbar c) Quick		
E) By default, Excel aligns text data to the ____ of the cells. a) Centre b) Left c) Right			
2	Fill in the blanks a) _____ number format multiples cell value by 100. b) _____ is used for centering titles over the data. c) _____ can be added to the cells for separating the data from surrounding cells. d) To control the appearance of _____ data number formatting is done. e) _____ number format style works with a list and database values.	5 x 1/2=2.5	Understandin g
3	Answer the following question i) What do you mean by formatting? ii) Why do we need to do conditional formatting in MS-Excel?	2 x 2.5 =5	HOT



ARMY PUBLIC SCHOOL GWALIOR

CLASS -VI

ACADEMIC SESSION 2021-22

WORKSHEET (SELF –ASSESSMENT)


Subject: G.K

Assignment No. : 7

Allotment Date: 15 October 2021

S.NO.	QUESTIONS	MARKS	SKILLS/ COMPETENCIES
1.	Fill in the blanks: (i). _____ has been referred to as the Upanyas Samrat or Emperor of Novels by Hindi writers. (ii). _____ is an English language daily newspaper started in 1838. (iii). The _____ was the first news agency in India.	3	Understanding
2.	Write True or False: (i). Lathi is an ancient armed martial art of India. () (ii). Badminton is associated with British Cup.() (iii). Butler English is also known as Eastern Indian English. ()	3	Information
3.	Tick the correct answer: (i). March 21 is celebrated as _____. (a). Friendship Day (b). World Puppetry Day (c). Amjad Ali Khan Day	2	Information

	(ii). The writer of 'The Shadow Lines' is _____. (a). Amish Tripathi (b). Ruskin Bond (c). Amitav Ghosh		
4.	What are the Navarasas?	1	Critical thinking
5.	What is an idiom?	1	Interdisciplinary



ARMY PUBLIC SCHOOL GWALIOR

CLASS -VI

ACADEMIC SESSION 2021-22

WORKSHEET (SELF –ASSESSMENT)

Subject: Art Education

Assignment No. : 7

Allotment Date: 15 October 2021


S.NO	QUESTIONS	MARKS	SKILLS / COMPETENCIES
1	Prehistoric painting was basically _____. (a) Animal-based (b) Human-based (c) Nature-based (d) Art-based	1	Creative skills
2	Which of these is not a category of Prehistoric Paintings? (a) Man (b) Animal (c) Tree (d) Geometric symbols	1	Creative skills
3	_____ Caves are the major sites of excellent prehistoric paintings in India. (a) Ajanta (b) Bhimbetka (c) Armamalai (d) Bagh	1	Creative skills
4	In which forms Pahari paintings are mostly done? (a) Portrait	1	Creative skills

	<p>(b) Miniature</p> <p>(c) Still life</p> <p>(d) Sculpture</p>		
5	<p>What is the most common theme of Rajasthani miniature paintings?</p> <p>(a) love between Krishna and Radha.</p> <p>(b) love between Romeo and Juliet.</p> <p>(c) love between Ram and Sita.</p> <p>(d) love between Heer and Ranjha.</p>	1	Creative skills
6	<p>The colour from rajasthani paintings were usually extracted from minerals, plant body parts, valuable stones and shavings of gold and silver.</p> <p>(a) True</p> <p>(b) False</p>	1	Creative skills
7	<p>What are the mugal paintings based upon?</p> <p>(a) Observation of nature</p> <p>(b) Observation of human figures</p> <p>(c) Observation of perspective</p> <p>(d) Observation of colour scheme</p>	1	Creative skills
8	<p>Whose portraiture was the emperor Jahangir very fond of?</p> <p>(a) Human</p> <p>(b) Tree</p> <p>(c) Birds and animals</p> <p>(d) Land</p>	1	Creative skills
9	<p>Which Asian miniature painting is a style of Mughal art?</p> <p>(a) South East</p> <p>(b) South</p> <p>(c) North</p> <p>(d) South West</p>	1	Creative skills
10	<p>Which one of these is the picture of prehistoric painting:</p> <p>(a)</p>	1	Creative skills



(b)




(c)



(d)





ARMY PUBLIC SCHOOL GWALIOR

CLASS -VI

ACADEMIC SESSION 2021-22

WORKSHEET (SELF –ASSESSMENT)


Subject: Work Education

Assignment No. : 7

Allotment Date: 15 October 2021

S.N O	QUESTIONS	MARKS	SKILLS/COMPETENCIES
1	How is a decimal written? (a) Special form (b) Normal form (c) Alphabetic form (d) Roman form	1	Creative skills
2	Which of these is not a type of decimal? (a) Non-terminating decimal numbers (b) Recurring decimal numbers (c) Non-definite decimal numbers (d) Terminating decimal numbers	1	Creative skills
3	Which of these is the material we need to make a decimal craft? (a) Wood (b) Colored papers (c) Glass (d) Handmade sheet	1	Creative skills
4	Which shape is used to make decimal craft? (a) Square (b) Triangle (c) Rectangle (d) Circle	1	Creative skills

5	<p>What is the measure we will use to make the circles?</p> <p>(a) 4 centimeters (b) 14 centimeters (c) 10 centimeters (d) 1 centimeter</p>	1	Creative skills
6	<p>In how many parts we will divide the circles in to?</p> <p>(a) 4 parts (b) 10 parts (c) 16 parts (d) 7 parts</p>	1	Creative skills
7	<p>When we will divide $1/10$ which decimal number do we get?</p> <p>(a) 0.1 (b) 0.10 (c) 0.100 (d) 0.1000</p>	1	Creative skills
8	<p>How many circles are used in decimal craft?</p> <p>(a) 2 (b) 7 (c) 8 (d) 6</p>	1	Creative skills
9	<p>How many times do we divide $1/10$ so we get 0.3 in decimal form?</p> <p>(a) 9 times (b) 3 times (c) 10 times (d) 7 times</p>	1	Creative skills
10	<p>What does this picture represent?</p>	1	Creative skills



- (a) Decimal craft
- (b) Algebraic craft
- (c) Addition craft
- (d) Subtraction craft



ARMY PUBLIC SCHOOL GWALIOR

CLASS -VI

ACADEMIC SESSION 2021-22


WORKSHEET (SELF –ASSESSMENT)

Subject: Library

Assignment No. : 7

Allotment Date: 15 October 2021

S.NO	QUESTIONS	MARKS	SKILLS / COMPETENCIES
1	Why is electricity considered as an important Resource?	01	Interpretation
2	What are the other resources around us?	01	Classification
3	What would happen to our natural resources if we are not careful in conserving them?	01	Observation
4	What can we do around the house to save water?	01	Analysis
	Find out whether you are careful in saving resources by ticking Y or N		
1.	I switch off lights and fans when I leave a room. (Y)(N)	01	Responsibility
2.	I take only as much food on my plate as I really need. (Y)(N)	01	Responsibility
3.	I don't leave milk in my glass. I finish every drop of it. (Y)(N)	01	Responsibility
4.	I never waste food at a marriage or a birthday party. (Y)(N)	01	Self- Awareness
5.	While having bath, I never waste water unnecessarily. (Y)(N)	01	Understanding
6	If I find a water tank leaking at school, I inform my teacher without delay. (Y) (N)	01	Responsibility



ARMY PUBLIC SCHOOL GWALIOR
CLASS -VI
ACADEMIC SESSION 2021-22
WORKSHEET (SELF –ASSESSMENT)

Subject: Health and Physical Education

Assignment No. : 7

Allotment Date: 15 October 2021

S.N	QUESTIONS	MARKS	SKILLS/ COMPETENCIES
	Multiple Choice 1. "FIFA" is Governing body which game? A. Hockey B. Swimming C. Kho kho D. Football	1	INFORMATION
	2. How many "LAW" in football ? A. 12 B. 23 C. 17 D. 19	1	INFORMATION
	3. The shape of the "Kho-Kho" field is? A. Rectangular B. Square C. Diamond D. Circle	1	INFORMATION
	4. How many players in a kho kho team? A. 12 B. 8 C. 7 D. 5	1	INFORMATION

	<p>5. Which is the first law in Football?</p> <p>A. Ball</p> <p>B. Off side</p> <p>C. The field of play</p> <p>D. Free kick</p>	1	INFORMATION
	<p><u>FILL IN THE BLANKS:-</u></p> <p>6. Less than _____ players can not be allowed for a team to play match (4, 3, 7,)</p>	1	INTERDISCIPLINARY
	<p>7. Two yellow cards are equal to _____ which means sending off offense. (white, Green card, orange, Red card)</p>	1	INTERDISCIPLINARY
	<p>8. Chaser in kho kho is also called.....? (Runner, defence, home player)</p>	1	INTERDISCIPLINARY
3	<p>TRUE AND FALSE</p> <p>9. The " throw in" a method of restarting play .</p> <p>_____</p>	1	UNDERSTANDING

	10. Running team is divided in to three groups.....	1	UNDERSTANDING
--	---	---	---------------



ARMY PUBLIC SCHOOL GWALIOR

CLASS -VI

ACADEMIC SESSION 2021-22



WORKSHEET (SELF –ASSESSMENT)

Subject: Music (Dance)

Assignment No. : 7

Allotment Date: 15 October 2021

S.NO	QUESTIONS	MARKS	SKILLS/ COMPETENCIES
1	Who is known as the Kathak Samrat? (a) Pandit Zakir Hussain (b) Pandit Birju Maharaj (c) Pandit Bhimsen Joshi	1	Fine moter, Integrity
2	Birju maharaja is a dancer of which gharana? (a) Banaras. (b) Jaipur (c) Luckhnow	1	Fine moter, Integrity
3	Birju maharaja is related to which Vidha? (a) Guitar (b) Kathak (c) Nritya table	1	Fine moter, Integrity
4	Kathak dance is originated from _____ in North India. (a) Andhra Pradesh (b) Tamil Nadu (c) Uttar Pradesh	1	, Integrity
5	Kathak originated within _____ temples. (a) Hindu (b) Muslim (c) Sikhs	1	Integrity
6	How many gharanas of Kathak are there? (a) 4 gharanas (b) 6 gharanas (c) 5 gharanas	1	Integrity
7	Mudras formed with _____ are called Samyukta Hasta Mudras. (a) Single hand (b) Both hands	1	Integrity

	(c) None of the above		
8	<p>Mudras formed with only single hand are called Asamyukta Hasta Mudras.</p> <p>(a) True (b) False</p>	1	Integrity
9.	<p>There are 28 mudras enumerated in the Natyashastra.</p> <p>(a) True (b) False</p>	1	Integrity
10	<p>Which one is the picture of Kathak?</p> <p>(a) </p> <p>(b) </p> <p>(c)</p>	1	Integrity





ARMY PUBLIC SCHOOL GWALIOR

CLASS -VI

ACADEMIC SESSION 2021-22

WORKSHEET (SELF –ASSESSMENT)


Subject: Music (Vocal)

Assignment No. : 7

Allotment Date: 15 October 2021

S. No	Answer the following questions:	Marks	Skills
1.	Bundelkhandifolk music is very popular in Jhanshi. a. Rai b. Lavani	1	Informative
2.is a semi classical style of Indian music. a. Thumri b. Dhrupad	1	Informative
3.	Alankar is an organized chain of group of.....connected together. a. swaras b. raga	1	Informative
4.	Arohana is the ascending scale of notes in raga. a.YES b.NO	1	Informative
5.	Avrohana is the ascending scale of notes in raga. a.YES b.NO	1	Informative
6.	In dadra taal there are 7 beats . a. YES b. NO	1	Informative
7.	How many parts are there in dadra taal? a. 1 b. 2 c. 3	1	Informative
8.	Which form of music is folk music style? a. Khyak b. Dhrupad c. Lavani	1	Informative
9.	How many beats are there in dadra taal? a. 5 b. 6 c. 7	1	Informative

10.	Dha Dhe Na Dha Tu Na which taal bol is this. a. Rupak b. Dadra c. Tritaal	1	Informative
-----	--	---	-------------



ARMY PUBLIC SCHOOL GWALIOR

CLASS -VI

ACADEMIC SESSION 2021-22

WORKSHEET (SELF –ASSESSMENT)

Subject: Discipline

Assignment No. : 7

Allotment Date: 15 October 2021

S.NO	QUESTIONS	MARKS	SKILLS/ COMPETENCIES
1.	<p>Fill in the blanks-</p> <p>i. It is so important to take care of our _____</p> <p>ii. It is our _____ health.</p> <p>iii. It is our _____ health.</p> <p>iv. It is taking care of our _____.</p> <p>v. Taking care of your _____.</p> <p>vi. We can _____our friends plants on their birthdays.</p>	03	Knowledge & Understanding
2.	<p>Choose the correct answers-</p> <p>How can we take care of our heath?</p> <p>i. By being active- Playing outside home on playground or in park</p> <p>ii. You can ride by cycle to stay fit and healthy</p> <p>iii. Eating healthy food each day</p> <p>iv. Eating less of maggi, pasta, pizza and burger</p> <p>v. Eating salads and fruits daily</p> <p>vi. By helping mom in kitchen or small work like watering plants</p>	03	
3.	<p>True and False</p> <p>i. We must take care of our eyes.</p> <p>ii. We must remain attentive during on line</p>		Thinking and Writing Skills

	classes.	01	
4.	<p>How can we take care of our mind- Choose all that apply-</p> <ul style="list-style-type: none"> i. Reading good story books helps us to develop our thinking power ii. Watching good stuff on TV also helps us develop our thinking ability. iii. Our mind does not get good message when we watch a video where people shout or fight; so we should not watch such videos. 	01	
5.	<p>How can we take care of our environment- Choose all that apply</p> <ul style="list-style-type: none"> i. We can plant more plants ii. Gift our friends plants on their birthdays. iii. Plant trees on our birthday. iv. Use less plastic v. Keeping environment clean 	02	