



ARMY PUBLIC SCHOOL GWALIOR

CLASS -X

ACADEMIC SESSION 2021-22

WORKSHEET (SELF –ASSESSMENT)



Subject: English

Assignment No. : 5


Allotment Date: 15 August 2021

S. NO.	QUESTIONS	MARKS	NATURE																																			
1	<p>You are Raman/Ramita. You placed an order on Flipkart a few days ago. When you received the order, you noticed that one of the items is missing in the order. Write a letter to the Customer Service Department of Flipkart describing the situation and asking them to send the missing item at the earliest(100-120 words).</p>	6	Information																																			
2	<p>The table illustrates the proportion of monthly household income five European countries spend on food and drink, housing, clothing and entertainment. Using the given data, write an analytical paragraph in 100-120 words.</p> <p>Proportion of Household Income of Five European Countries Spend on Food and Drink, Housing, Clothing and Entertainment.</p> <table border="1" style="width: 100%; border-collapse: collapse; text-align: center;"> <thead> <tr> <th>country</th> <th>Food and drink</th> <th>Housing</th> <th>Clothing</th> <th>Entertainment</th> </tr> </thead> <tbody> <tr> <td>France</td> <td>25%</td> <td>31%</td> <td>7%</td> <td>13%</td> </tr> <tr> <td>Germany</td> <td>22%</td> <td>33%</td> <td>15%</td> <td>19%</td> </tr> <tr> <td>UK</td> <td>27%</td> <td>37%</td> <td>11%</td> <td>11%</td> </tr> <tr> <td>Turkey</td> <td>36%</td> <td>20%</td> <td>12%</td> <td>10%</td> </tr> <tr> <td>Spain</td> <td>31%</td> <td>18%</td> <td>8%</td> <td>15%</td> </tr> <tr> <td> </td> <td> </td> <td> </td> <td> </td> <td> </td> </tr> </tbody> </table>	country	Food and drink	Housing	Clothing	Entertainment	France	25%	31%	7%	13%	Germany	22%	33%	15%	19%	UK	27%	37%	11%	11%	Turkey	36%	20%	12%	10%	Spain	31%	18%	8%	15%						6	Analytical Skill
country	Food and drink	Housing	Clothing	Entertainment																																		
France	25%	31%	7%	13%																																		
Germany	22%	33%	15%	19%																																		
UK	27%	37%	11%	11%																																		
Turkey	36%	20%	12%	10%																																		
Spain	31%	18%	8%	15%																																		
3	<p>Choose the correct options to fill in the blanks to complete the note.</p> <p>In business, growth (a) ; one has to grow if one (b) out. This is particularly true today with liberalisation of imports and increasing competition. Moreover, growth and higher productivity (c) and higher employment creates larger markets both for industrial and consumer products.</p>	3	Communication Skill																																			

- (a) (i) will be needed for survival
- (ii) were needed for survival
- (iii) is needed for survival
- (iv) was needed for survival
- (b) (i) did not want to be wiped
- (ii) does not want to be wiped
- (iii) will not want to be wiped
- (iv) can not want to be wiped
- (c) (i) create employment
- (ii) creates employment
- (iii) created employment
- (iv) had created employment

4 Choose the correct options to fill in the blanks to complete the narration.

3 Interdisciplinary



Darren sighed and exclaimed with sadness that he felt like (a) He grumbled that couldn't go to the movie theatre or pizza parlour. He even missed his classmates. His father immediately (b) that Anne Frank and her family had spent two years in an attic. He then looked at his son's face and said that (c) to the information.

- (a) (i) he has been inside the house forever
- (ii) he will have been inside the house forever
- (iii) would have been inside the house forever
- (iv) he had been inside the house forever
- (b) (i) informed him
- (ii) said to him
- (iii) asked him

	(iv) shouted at him (c) (i) he has expected his blank look and no comment (ii) he had been expecting his blank look and no comment (iii) he had expected his blank look and no comment (iv) he was expecting his blank look and no comment.		
5	Fill in the blanks by choosing the correct option . 1. According to the schedule, the teachers have to come together_____ other week to discuss the problems of their students. a) any b) some c) each d) every 2. Children have difficulty_____ numbers_____ two until the age of three or four. a) in grasping, as many as b) to grasp, as big as c) grasping, greater than d) having grasped, fewer 3. Although the scientific community had hoped that _____ the field of transplantation_____, the shortage of organ donors has curtailed research. a) has progressed b) would progress c) must have progressed d) is progressing 4. In some ways, we know little more about the planets than _____ the ancients who worshipped them. a) had done b) have done c) did d) would do 5. A lot of people want to become surgeons, but _____ make the grade. a) few b) not much c) very little d) any 6. While the parades for the opening of Parliament were being rehearsed, the President _____ a sobering message for his countrymen. a) prepared b) has prepared c) was preparing d) is preparing	6	Interdisciplinary
6	Read the extract given below and answer the questions that follow: "He stalks in his vivid stripes The few steps of his cage, On pads of velvet quiet, In his quiet rage." 1. Who is 'he' here in the first line? 2. Why does he move only a few steps? 3. Find a from the stanza that means 'walks with pride'. 4. Where is 'he' at present?	4	Understanding
7	Anne bid a 'heartbreaking farewell' to Mrs. Kuperus. As Anne, write a brief farewell note to Mr. Keesing after being promoted to the next class. Dear Mr. Keesing It has been	6	HOT
8	Answer the following questions in 30-40 words: a) How did Mr. Keesing react after reading Anne Frank's arguments in 'A Chatterbox'? b) When and why do Peggy and Maddie notice Wanda's absence? c) How would you assess Griffin as a scientist?	6	Evaluation



ARMY PUBLIC SCHOOL GWALIOR

CLASS -X

ACADEMIC SESSION 2021-22

WORKSHEET (SELF –ASSESSMENT)



Subject: Hindi

Assignment No. : 5

Allotment Date: 15 August 2021

S. NO.	QUESTION	MARKS	NATURE
		40	
	प्रश्न- 1 सप्ताह में किसी एक दिन के लिए बैंक का कार्यकाल सायंकाल 8बजे तक करने का अनुरोध करते हुए बैंक प्रबंधक को पत्र लिखिए ।	5	Information
2	<p>प्रश्न- 2समय की उपेक्षा करने वालों को समय नष्ट कर देता है ।महात्मा गांधी सभी कार्य निर्धारित समय पर करते थे इसलिए अत्यंत व्यस्त होते हुए भी निरंतर प्रगति करते हुए सफलतम महान व्यक्तियों की श्रेणी में पहुँचे ।जेम्स वाट, मैडम क्यूरी और एडिसन ने समय के प्रत्येक पल का सही प्रयोग कर संसार को महान आविष्कार प्रदान किए । समय का सदुपयोग भाग्य-निर्माणकी आधारशिला है ।असमय कार्य करने वाले कायर और निरुद्यमी बन जाते हैं ।अपने कर्तव्यकर्म को यथाशीघ्र बिना विलंब से करना ही समय का सदुपयोग है और वही समय का परखी भी है ।जो समय का सदुपयोग करना जान गया वही जीवन को सही ढंग से जीना सीख जाता है ।हर व्यक्ति को पैसों की अपेक्षा समय का अधिक हिसाब रखना होगा, तभी वह अपने अपने क्षेत्र में सफल हो पाएगा ।</p> <p>उपरोक्त गद्यांश को पढ़कर दिए गए प्रश्नों के उत्तर लिखिए---</p> <p>प्रश्न- 1 समय किन्हें नष्ट कर देता है?</p> <p>प्रश्न- 2 महान लोगों ने संसार को नये आविष्कार और अपना योगदान कैसे दिया ?</p>	5	Understanding

	<p>प्रश्न- 3 समय का सदुपयोग की आधारशिला क्या है ?</p> <p>प्रश्न - 4 असमय कार्य करने वाले क्या बन जाते हैं ?</p> <p>प्रश्न- 5 समय को किससे अधिक महत्वपूर्ण बताया है</p>		
3	<p>प्रश्न - 3 प्रकृति असंतुलन का क्या परिणाम हुआ? 'अब कहाँ दूसरे के दुख से दुखी होने वाले ' पाठ के आधार पर लिखिए?</p>	5	HOT
4	<p>प्रश्न- 4 निम्नलिखित प्रश्नों के उत्तर निर्देशानुसार लिखिए -</p> <p>क - 'वह बाजार गया और मेरे लिए फल लाया ।' रचना के आधार पर वाक्य का भेद बताइए -</p> <p>ख - जहाँ चाह , वहाँ राह । रचना के आधार पर वाक्य भेद क्या है</p> <p>ग - जब वह सच बोलता है तो किसी से क्यों डरेगा । वाक्य का प्रकार बताइए-</p> <p>घ - (तालीम जैसे मामले में वह) जल्द बाजी से काम लेना पसंद नहीं करते थे । कोष्ठक में दिए गए पदबन्ध का प्रकार बताइए?</p> <p>ङ - दो -तीन बजे कई आदमियों को (पकड़ लिया गया) कोष्ठक में दिए गए पदबन्ध का प्रकार बताइए -</p>	5	Interdisciplinary
5	<p>प्रश्न - 5 अपनी पुरानी साइकिल बेचने के लिए एक आकर्षक विज्ञापन तैयार कीजिए ।</p>	5	Analytical Skill
6	<p>प्रश्न- 6 मनुष्य के बढ़ते लालच और आकांक्षाओं का असर पक्षियों पर किस रूप में पड़ा है? अपने विचार लिखिए ।</p>	5	Critical Thinking and Problem Solving
7	<p>प्रश्न- 7 निम्नलिखित शब्दों का समास विग्रह करके समास का नाम भी लिखिए-</p> <p>मृगलोचन , देहलता , पंचवटी, आजीवन, दशानन ।</p>	5	Evaluation
8	<p>प्रश्न-8 निम्न विषयों पर अनुच्छेद लिखिए -</p> <p>(क)- जीवन में खेल कूद का महत्व (ख) पुस्तकालय का महत्व</p>	5	Communication Skills



ARMY PUBLIC SCHOOL GWALIOR

CLASS -X

ACADEMIC SESSION 2021-22

WORKSHEET (SELF -ASSESSMENT)



Subject: Mathematics


Assignment No. : 5

Allotment Date: 15 August 2021

S. NO.	QUESTIONS	MARKS	NATURE
1	The value of $(\tan 1^\circ \tan 2^\circ \tan 3^\circ \dots \tan 89^\circ)$ is (A) 0 (B) 1 (C) 2 (D) 1/2	1	Understanding
2	If $\sin A + \sin^2 A = 1$, then $\cos^2 A + \cos^4 A = ?$ (A) 1 (B) 0 (C) 2 (D)	1	Understanding
3	The value of the expression $[\operatorname{cosec} (75^\circ + \theta) - \sec (15^\circ - \theta) - \tan (55^\circ + \theta) + \cot (35^\circ - \theta)]$ is (A) 1 (B) -1 (C) 0 (D) 1/2	1	Application
4	Given that: $\sin A = a/b$, then $\cos A = ?$ (A) $\frac{\sqrt{b^2 + a^2}}{b}$ (B) $\frac{\sqrt{b^2 - a^2}}{b}$ (C) b/a (D) a/b	1	Interdisciplinary
5	If $\sin A = 8/17$, find the value of $\sec A \cos A + \operatorname{cosec} A \cos A$	1	Analytical Skill
6	If $5 \tan \theta = 4$, then find the value of $(5 \sin \theta - 4 \cos \theta) / (5 \sin \theta + 4 \cos \theta)$	1	Critical Thinking and Problem Solving

7	The value of : $(\sin 30^\circ + \cos 30^\circ) - (\sin 60^\circ + \cos 60^\circ)$ (A) -1 (B) 0 (C) 1 (D) 2	1	Application
8.	The probability of getting a spade card from a well shuffled deck of 52 cards is : (a) $\frac{1}{13}$ (b) $\frac{1}{4}$ (c) $\frac{12}{13}$ (d) $\frac{3}{4}$	1	Analytical Thinking
9	. One card is drawn from a well shuffled deck of 52 playing cards. The probability of getting a non-face card is (a) $\frac{3}{13}$ (b) $\frac{10}{13}$ (c) $\frac{7}{13}$ (d) $\frac{4}{13}$	1	Understanding
10	Cards marked with numbers 5,6,7,.....74 are placed in a bag and mixed thoroughly. One card is drawn at random from the bag. Find the probability that the number on the card is a perfect square.	1	Interdisciplinary
11	A bag contains 5 red balls and 3 black balls .A ball is drawn at random from the bag. What is the probability that the ball drawn is (i) red (ii) not red?	2	Interdisciplinary
12.	From a well-shuffled pack of cards,black kings,black aces ,and black jacks are removed.A card is then drawn at random From the pack.Find the probability of getting (i) a red card (ii) not a diamond card	.2	Interdisciplinary
13	If $\tan (A+B)=\sqrt{3}$ and $\tan (A-B)=1/\sqrt{3}$, then find A &B	2	Evaluation
14	If $p \cos A + q \sin B = x$ and $p \sin A - q \cos B = Y$,then prove that $p^2 + q^2 = x^2 + y^2$	2	Evaluation
15.	Prove that: $\sin^2 A + \cos^2 A = 1$	2	Evaluation
16.	If a two digit number is chosen at random ,then find the probability that it is a multiple of 3 or 5	2	Evaluation
17.	If a number is chosen from the numbers 1,2,3,4,5,.....25,, then find the probability of the number to be prime.	2	Application
18.	i. Prove that: $\frac{1 + \sin A - \cos A}{1 + \sin A + \cos A} = \sqrt{\frac{1 - \cos A}{1 + \cos A}}$	3	Problem solving

19.	Prove that $(1+\cot\theta-\operatorname{cosec}\theta)(1+\tan\theta+\sec\theta) = 2$.	3	Interdisciplinary
20.	If $A + B = 90^\circ$, prove that $\sqrt{\frac{\tan A \tan B + \tan A \cot B - \frac{\sin^2 B}{\cos^2 A}}{\sin A \sec B}} = \tan A$	5	Logical thinking
21	Prove that $\sqrt{\frac{\sec A - 1}{\sec A + 1}} + \sqrt{\frac{\sec A + 1}{\sec A - 1}} = 2 \operatorname{cosec} A$.	5.	Logical thinking



ARMY PUBLIC SCHOOL GWALIOR

CLASS -X

ACADEMIC SESSION 2021-22

WORKSHEET (SELF -ASSESSMENT)



Subject: Science

Assignment No. : 5

Allotment Date: 15 August 2021

S. NO.	QUESTIONS	MARKS	NATURE
1	Q1. What is the common name and chemical name of the compound CaOCl_2 ?	1	Information
	Q2. State difference between the wire used in the element of an electric heater and in a fuse wire.	1	
	Q3. Name the process in plants by which water is lost as water vapour.	1	
2	Q4. Why the athletes develop cramps sometimes. Write the reason.	3	Understanding
	Q5. How is the amount of urine produced regulated?	3	
	Q6. How is Plaster of Paris chemically different from Gypsum? How can they be interconverted? Write two uses of Plaster of Paris.	3	
3	Q7. An electric bulb of resistance 200Ω draws a current of 1 Ampere. Calculate the power of the bulb the potential difference at its ends and the energy in kWh consumed burning it for 5h.	3	HOT
	Q8. A calcium compound which is a yellowish white powder is used as a disinfectant and also in textile industry. (i) Name the compound. (ii) How it is prepared by dry slaked lime? (iii) Which gas is released when this compound is left exposed to air?	3	
4	Q9. What are the differences between the transport of material in xylem and phloem?	3	Interdisciplinary
	Q10. Draw a well labelled diagram of human excretory system.	3	
5	Q11. . (i) A chemical compound X is used in glass and soap industry. Identify the compound and give its chemical formula. (ii) How many water of crystallisation are present in compound X. (iii) How will you prepare this compound starting from sodium chloride?	5	Analytical Skill
6	Q12. (a) Calculate the resistance of 1 km long copper wire of radius 1 mm. Resistivity of the copper is $1.72 \times 10^{-8} \Omega \text{ m}$. (b) Draw a schematic diagram of a circuit consisting of a	5	Critical Thinking and Problem Solving

	battery of 4 cells of 2V each connected to a key, an ammeter and two resistors of 2 Ω and 3 Ω respectively in series and a voltmeter to measure potential difference across 3		
7	Q13. Compare the functioning of alveoli in lungs and nephrons in the kidneys with respect to their structure and functioning. Q14. An electric bulb is rated at 60 W, 240 V. Calculate its resistance. If the voltage drops to 192 V, calculate the power consumed and the current drawn by the bulb. (Assume that the resistance of the bulb remain unchanged.)	3 3	Evaluation



ARMY PUBLIC SCHOOL GWALIOR

CLASS -X

ACADEMIC SESSION 2021-22

WORKSHEET (SELF -ASSESSMENT)




Subject: Social Science

Assignment No. : 5

Allotment Date: 15 August 2021

S. NO.	QUESTIONS	MARKS	NATURE								
1	What is the importance of Lahore Congress Session of 1929?	1	Information								
2	Which one of the following is true with reference to Civil Disobedience Movement? (a) There was an atmosphere of suspicion and distrust between communities. (b) On 13 th April the infamous Jallianwala Bagh incident took place.. (c) On 31 st January 1931 Gandhiji wrote a letter to viceroy Irwin stating eleven demands. (d) None of above.	1	Understanding								
3	What is the main characteristic of commercial farming?	1	Understanding								
4	Match the following items given in Column I with those in Column II. <table border="1" data-bbox="240 1727 1067 2132"><thead><tr><th>Column I</th><th>Column II</th></tr></thead><tbody><tr><td>a) Golden Fibre</td><td>i) Rubber</td></tr><tr><td>b) Equatorial Crop</td><td>ii) Tea and Coffee</td></tr><tr><td>c) Staple crop</td><td>iii) Jute</td></tr></tbody></table>	Column I	Column II	a) Golden Fibre	i) Rubber	b) Equatorial Crop	ii) Tea and Coffee	c) Staple crop	iii) Jute	1	Interdisciplinary
Column I	Column II										
a) Golden Fibre	i) Rubber										
b) Equatorial Crop	ii) Tea and Coffee										
c) Staple crop	iii) Jute										

	iii) Beverage crop	iv) Rice		
5	Correct the following statement and rewrite it: Wheat is used as both food and fodder.		1	Critical Thinking and Problem Solving
6	Study the picture and answer the following questions:		1	Critical Thinking and Problem Solving
				
	(i) Who painted the image ?			
7	What were the demands of the Awadh peasants?		1	Understanding
8	Correct the following statement and rewrite it . The Gandhi – Irwin pact gave reserved seats to depressed classes in provincial and Central Legislative Council		1	Understanding
9	Which one of the following leaders has headed Awadh Kisan Sabha? (a) Jawahar Lal Nahru (b) Mahatma Gandhi (c) Subhash Chandra Bose (d) Moti Lal Nehru		1	Information
10	In the question given below, there are two statements marked as assertion (A) and reason (R) . Read the statements and choose the correct option .		1	Critical Thinking and Problem Solving

	<p>Assertion (A) Cotton cannot be grown in Assam. Reason (R) The crop needs bright sunshine and 210 frost free days.</p> <p>(a) Both (A) and (R) are true and (R) is the correct explanation of (A). (b) Both (A) and (R) are true and (R) is not the correct explanation of (A). (c) (A) is true, but (R) is false. (d) (A) is false, but (R) is true.</p>		
11	Who has designed the 'swaraj flag' by 1921? Explain the main features of this 'swaraj flag' ?	3	Information
12	How was Rowlatt act opposed by the people in India ? Explain with examples.	3	Analytical Skill
13	Describe geographical conditions required for the growth of cotton crop.	3	Evaluation
14	Describe any three characteristics of plantation agriculture.	3	Communication Skills

15	What were the reasons for the launching of the Non-Cooperation Movement ? What was Gandhiji's idea behind launching it as stated in his book 'Hind Swaraj'?	5	Information
16	How did history and fiction, folklore and songs, popular prints and symbols, all played important part in the making of Indian nationalism in the nineteenth century ? Explain.	5	HOT
17	Enlist the various institutional reform programmes introduced by the government in the interest of farmers.	5	Evaluation
18	<p>On an outline map of India locate and label the following with suitable symbols.</p> <p>(i) Any one Tea producing state. (ii) One major Wheat producing state (iii) Coffee producing state</p>	3	Information



ARMY PUBLIC SCHOOL GWALIOR

CLASS -X

ACADEMIC SESSION 2021-22

WORKSHEET (SELF -ASSESSMENT)



Subject: Computer

Assignment No. : 5

Allotment Date: 15 August 2021

S.NO.	QUESTIONS	MARKS	NATURE
1	<p>Choose and write the correct option (MCQ):-</p> <p>(i). For Import/Export data operation. Click on :</p> <ul style="list-style-type: none">(a) Home Tab(b) External Data Tab(c) Import/Export Tab(d) None of these <p>(ii). To remove Filter, click on the following button:</p> <ul style="list-style-type: none">(a) Filter(b) Toggle Filter(c) Delete Filter(d) None of these <p>(iii) To apply filter, you need to apply : :</p> <ul style="list-style-type: none">(a) Encryption(b) Sort(c) Criteria(d) Glue <p>(iv) The password should be the combination of:</p> <ul style="list-style-type: none">(a) Upper case letters(b) Lower case letters(c) Digits(d) All of these	$\frac{1}{2} \times 4=2$	Information
2	<p>Fill in the blanks-</p> <p>(i) File extension of MS-Access Database file is ___.</p>	$\frac{1}{2} \times 4=2$	Understanding and Problem Solving

	<p>(ii) For Applying number filters, in the Filter menu point to _____ options.</p> <p>(iii) A ___ is a name assigned to a column of data in a table...</p> <p>(iv) Using ___ we can provide password security to our database.</p>		
3	<p>Write short notes on following-</p> <p>(i) DBMS</p> <p>(ii) Filtering</p> <p>(iii) Field Name</p> <p>(iv) Record Selector</p>	$\frac{1}{2} \times 4 = 2$	Critical Thinking
4	<p>Answer the following questions -</p> <p>(i) Find out and write names of the file types in which access data can be exported?</p> <p>(ii) How can Encryption safeguard your database?</p> <p>(iii) What do you understand by text filters? Explain with an example.</p> <p>(iv) Write down steps involved in sorting of data.</p>	$1 \times 4 = 4$	HOT



ARMY PUBLIC SCHOOL GWALIOR

CLASS -X



ACADEMIC SESSION 2021-22

WORKSHEET (SELF -ASSESSMENT)

Subject: Health and Physical Education

Assignment No. : 5

Allotment Date: 15 August 2021

S.N	QUESTIONS	NATURE	MARKS
1	MCQ 1. Which colour bucket used for Paper waste? a) Yellow b) Green c) Blue Red	Analytical	4x1=4
	2. There are _____ R's for waste management. a) 3 b) 4 c) 5 d) 6	Analytical	
	3. The waste in Compost Pit is due to the action of ____ a) Virus b) Protozoa c) Fungi d) Bacteria	Understanding	
	4. Which colour bucket used for Paper waste? a) Yellow b) Green c) Blue d) Red	Informatory	
2.	Fill in the blanks 1. Organic waste cause production of _____ gas.	Understanding	3x1=3
	2. Dry paints, old bulb , old battery are _____ waste.	Informatory	
	3. Cholera is caused by _____ of garbage.	Understanding	

3.	True or False 1. Vegetable peels, paper, wood are Non-Biodegradable waste.	Understanding	3×1=3
	2. Non – biodegradable material cannot be degraded easily.	Understanding	
	3. All types of waste are used in landfills.	Understanding	



ARMY PUBLIC SCHOOL GWALIOR

CLASS -X



ACADEMIC SESSION 2021-22

WORKSHEET (SELF -ASSESSMENT)

Subject: Music

Assignment No. : 5

Allotment Date: 15 August 2021

SR. NO.	ANSWER THE FOLLOWING QUESTION	NATURE	MARKS 1X10= 10
1	How many Counting are there in Teen taal? A)16 B)15 C)14 Ans.- 16	Informative	1
2	How many divisions are there in Teen taal? A)2 B)3 C)4 Ans.- 4	Informative	1
3	At what volume is it empty in Teen taal? A)9 B) 8 C) 12 Ans.- 9	Informative	1
4	What is the empty symbol in Teen taal? A)1 B)2 C)0 Ans.- 0	Informative	1
5	How many times Dugun is done in Teen Tal? A) 2 B) 3 C)4 Ans. -2	Informative	1
6	The chougun is performed four times in Teen taal. True False Ans.- True	Informative	1
7	Every Tabla and Kathak student learns Teen taal. True False Ans. – True	Informative	1
8	Dugun is performed twice in Teentaal. True False Ans. – True	Informative	1

9	The first volume of the taal is called sama. True False Ans.- True	Informative	1
10	There is a clap at 1,5 ,13. True False Ans. - True	Informative	1