



# ARMY PUBLIC SCHOOL GWALIOR

## CLASS -I

### ACADEMIC SESSION 2020-21





### WORKSHEET



Subject: English

Assignment No.: 9

Allotment Date: 15<sup>th</sup> January 2021

S.N	QUESTIONS	MARK	NATURE						
		<b>S</b>							
1	<p>Fill in the blanks by choosing the correct words from the brackets</p> <p>(a)  ..... are tulips. (These are/ Those are)</p> <p>(b) ..... Helicopters.(These are/ Those are) </p> <p>(c)  ..... Watermelon. .(These are/ Those are)</p> <p>(d) ..... butterflies.(These are/ Those are) </p>	4X.5=2	Information						
2	<p>Match the following with their babies.</p> <table><tr><td>Column A</td><td>Column B</td></tr><tr><td>1. Cow</td><td>Foal</td></tr><tr><td>2. Frog</td><td>Caterpillar</td></tr></table>	Column A	Column B	1. Cow	Foal	2. Frog	Caterpillar	6X.5=3	Understanding
Column A	Column B								
1. Cow	Foal								
2. Frog	Caterpillar								

	<p>3. Cat <span style="float: right;">Calf</span></p> <p>4. Dog <span style="float: right;">Tadpole</span></p> <p>5. Horse <span style="float: right;">Kitten</span></p> <p>6. Butterfly <span style="float: right;">Puppy</span></p>		
<b>3</b>	<p>Fill in the blanks and choose correct Tense from the brackets. (Present or Past tense).</p> <p>1. She ..... (live / lives) near my house.</p> <p>2. We ..... (enjoy / enjoys) playing together.</p> <p>3. She ..... (complete / completed) her work on time.</p> <p>4. They ..... (look / looked) at the tall tree.</p>	4X.5=2	Interdisciplinary
<b>4</b>	<p>Write word meaning.</p> <p>(i) Fondly:</p> <p>(ii) Hope :</p> <p>(iii) Riverbank:</p>	3X1=3	Analytical Skill
<b>5</b>	<p>Complete these sentences using 'and' or 'but'.</p> <p>1. I like cakes ..... ice creams.</p> <p>2. My grandma is old ..... healthy.</p> <p>3. I like to swim ..... my friends like to skate.</p> <p>4. Nida ..... I play on the swings.</p>	2X1=2	Critical  Thinking and  Problem  Solving
<b>6</b>	<p>Answer the following questions :</p> <p>Q1. When was Pandit Jawaharlal Nehru born?</p> <p>_____</p>	4X1=4	Evaluation

	<p>Q2. What does Tingo bring for Jingo?</p> <p>_____</p> <p>Q3. Why did Pandit Nehru start wearing a rose on his jacket?</p> <p>_____</p> <p>Q4. Who has caught the turtle?</p> <p>_____</p>		
7	<p><b>Fill in the blanks using the words given below.</b></p> <p>(jackal, Children's Day, friends, children,)</p> <p>1. Jingo and Tingo are .....</p> <p>2. 14<sup>th</sup> November is celebrated as .....</p> <p>3. Chacha Nehru loved .....</p> <p>4. The clever ..... saves his friend.</p>	4X1=4	Communication Skills



# ARMY PUBLIC SCHOOL GWALIOR

## CLASS -I

### ACADEMIC SESSION 2020-21







### WORKSHEET









Subject: Hindi

Assignment No.: 9

Allotment Date: 15<sup>th</sup> January 2021

संख्या	प्रश्न/उत्तर	अंक	प्रकृती				
प्र.1	<p><u>सही शब्द चुनकर वाक्य की खाली जगह में लिखो –संख्या</u></p> <p>1-गिलहरियाँ मूँगफली उठाकर ----- जाती । ( बाग /भाग )</p> <p>2- ----- हवा चल रही थी । ( ठंडी /डंडी )</p> <p>3-बगीचे में आम का एक ----- था । ( पेट/पेड़ )</p> <p>4-बबलू बगीचे में उदास ----- था । ( बीटा /बैठा )</p> <p>5-कुटकुट ऊपर की ----- पर चढ़ गई । ( डाल/ढाल )</p> <p>6-कुटकुट ने आम नीचे ----- दिया । ( गिरा /घिरा )</p>	6x.5=3	बोधात्मक				
प्र 2	<table border="1"><tr><td>जानवर</td><td>ये कहाँ रहते हैं ? मिलाइये</td></tr><tr><td></td><td></td></tr></table>	जानवर	ये कहाँ रहते हैं ? मिलाइये			4 x1=4	सूचनापरक
जानवर	ये कहाँ रहते हैं ? मिलाइये						
							

प्र-3

नीचे दिए गए प्रश्नों के उत्तर लिखो

4x 1=4

गहन सोच और  
समस्या समाधान

प्रश्न 1. ऋषि का आश्रम किस नदी के किनारे था ?

-----

प्रश्न 2. ज्ञान और अक्षय को जंगल में ढूँढने कौन आया ?

-----

प्रश्न 3. चींटियाँ क्यों ठिठक गई थीं ?

-----

प्रश्न 4. टिड्डे ने बिल्ली से क्या पूछा ?

-----

<p>प्र-4</p>	<p><u>सही शब्द चुनकर वाक्य की खाली जगह में लिखो –</u>  <b>ऋषि, आश्रम , गंगा, लकड़ियाँ</b></p> <p>. ऋषि का आश्रम ----- नदी के किनारे था ।  . दूर– दूर से बालक ऋषि के -----में शिक्षा लेने आते थे ।  . ज्ञान और अक्षय जंगल में ----- बीनने गए ।  . ज्ञान और अक्षय को जंगल में ढूँढने ----- आये ।</p>	<p>4x.5=2</p>	<p>उच्चस्तरीय चिंतन</p>
<p>प्र-5</p>	<p><b>नीचे दिए गए प्रश्नों के उत्तर लिखो</b></p> <p>1. प्रश्न. कौन पहली बार घर से निकला था ?</p> <p>-----</p> <p>2. प्रश्न. बल्ली पेड़ पर क्यों चढ़ गई ?</p> <p>-----</p> <p>3. प्रश्न . बबलू पेड़ के पास मूंगफली क्यों बिखेरता था ?</p> <p>-----</p>	<p>3x1=3</p>	<p>विश्लेषणात्मक</p>
<p>प्र-7</p>	<p>दिए गए शब्दों के विलोम शब्द लिखो</p> <p>1 नया • पुराना  2 सुबह • शाम  3 आगे • पीछे  4 मीठा • खट्टा</p>	<p>4x.5=2</p>	
<p>प्र-6</p>	<p><u>होली पर निबंध लिखो ( चार पंक्तियाँ )</u></p>	<p>4x.5=2</p>	<p>भाषाई कौशल</p>

	----- ----- ----- -----		
--	----------------------------------	--	--

-----**XXXX**-----**XXXX**-----



# ARMY PUBLIC SCHOOL GWALIOR

## CLASS -I

### ACADEMIC SESSION 2020-21

### WORKSHEET



Subject: Mathematics

Assignment No.: 9

Allotment Date: 15<sup>th</sup> January 2021

S. NO.	QUESTIONS	MARKS	NATURE
1	Tick(√) the correct word:  (i) I get up in the <b>morning / evening.</b>  (ii) I eat my dinner at <b>night / noon.</b>	2x1=2	Information
2	Which of the following events take longer time?  (i) To <b>tie laces/ eat breakfast.</b>  (ii) To <b>play a cricket match / take a bath.</b>	2x1=2	Understanding
3	Fill in the missing numbers in the space provided.  (i) $2 \times 8 = \underline{\quad} \times 2$  (ii) $9 \times \underline{\quad} = 2 \times 9$	2x1=2	AnalyticalSkill



<b>4</b>	<p>Answer the following questions:</p> <p>(i) Which day comes after Thursday?</p> <p>Ans _____</p> <p>(ii) Which day is always a government holiday?</p> <p>Ans _____</p> <p>(iii) Which day comes between Monday and Wednesday?</p> <p>Ans _____</p> <p>(iv) Which day comes before Friday?</p> <p>Ans _____</p>	4X1=4	Interdisciplinary

<p><b>5</b></p>	<p>Write the answer in the placeholders.</p> <p>(i) <math>4 \times 7 = \underline{\hspace{2cm}}</math></p> <p>(ii) <math>5 \times 8 = \underline{\hspace{2cm}}</math></p> <p>(iii) <math>3 \times 2 = \underline{\hspace{2cm}}</math></p> <p>(iv) <math>2 \times 2 = \underline{\hspace{2cm}}</math></p>	<p>2X1=2</p>	<p>Critical</p> <p>Thinking and</p> <p>Problem</p> <p>Solving</p>
<p><b>6</b></p>	<p>Word Problems :</p> <p>(i) A cat has 2 eyes. How many eyes 5 cats have?</p> <p>(ii) How many feet will 4 dogs have?</p> <p>(iii) How many hands will 9 men have?</p> <p>(iv) A child has 3 books. How many books 6 children have?</p>	<p>4x1=4</p>	<p>Evaluation</p>

7

Count and fill in the boxes:



- (i) There are \_\_\_\_\_ books.
- (ii) There are \_\_\_\_\_ crayons.
- (iii) There are \_\_\_\_\_ pencils.
- (iv) There are \_\_\_\_\_ notebooks.

4x1=4

Communication

Skills



# ARMY PUBLIC SCHOOL GWALIOR

## CLASS -I

ACADEMIC SESSION 2020-21

### WORKSHEET



Subject: EVS

Assignment No.: 9

Allotment Date: 15<sup>th</sup> January 2021

S.N	QUESTIONS	MARKS	NATURE
1	<p><b>Tick ( √ ) the correct options :</b></p> <p>a) Our national song is _____.</p> <p>a. Jana Gana Mana      b. Vande Mataram      c. Om bhurbhaba Swaha</p> <p>b) A _____ occurs with heavy wind and rain.</p> <p>a. storm                      b. breeze                      c. cloud</p>	2X1=2	Information
2	<p><b>Write 'T' for True and 'F' for False :</b></p> <p>1. Our national flag is four coloured.      ( )</p> <p>2. We must respect other religions.      ( )</p> <p>3. India has 28 states      ( )</p> <p>4. We should waste food.      ( )</p>	4X1=4	Understanding
3	<p><b>Name them:</b></p> <p>a. On Eid day, Muslim children get this in the form of a gift _____.</p> <p>b. The common practice of continuous recitation of sacred religious texts in Sikhism. _____ .</p>	2X1=2	Interdisciplinary

4	<p><b>Name the holy book of the following religions:</b></p> <p>1.Sikhs:- .....</p> <p>2.Christians:- .....</p> <p>3.Muslims:- .....</p> <p>4.Hindus:-.....</p>	4X1=4	Analytical Skill
5	<p><b>Choose the correct option:</b></p> <p>1.Sewayian is distributed on _____ .</p> <p>a. Holi                      b. Eid-ul-Fitr                      c. Dusshera</p> <p>2.On _____, we have a special meal called langar.</p> <p>a. Bihu                      b. Eid                      c. Gurpurab</p>	2X1=2	Critical Thinking and Problem Solving
6	<p><b>Answer the following :</b></p> <p>1. How will you feel if you wear woolen clothes during sunny days? Ans. ....</p> <p>2. Find out the names of synthetic materials used in making clothes. Ans. ....</p>	2X1=2	HOT
7	<p><b>Fill in the blanks:-</b></p> <p>1. .... is a special sweet made during Holi.</p> <p>2. .... is celebrated by Muslims.</p> <p>3. We are known as .....</p> <p>4. One of the great leaders of India is .....</p>	4X1=4	Evaluation

8	<p><b>. Answer the following :</b></p> <p>1. What do we get from a cotton plant and sheep respectively?</p> <p>Ans. ----- ---</p> <p>2. Why do we need to wear clothes?</p> <p>Ans. ----- -- .</p>	2X1=2	Commu nication  Skills
---	--	-------	---------------------------------

-----XXXXX-----XXXXX-----



# ARMY PUBLIC SCHOOL GWALIOR

CLASS -I

ACADEMIC SESSION 2020-21

WORKSHEET






Subject: Computer

Assignment No.: 9

Allotment Date: 15<sup>th</sup> January 2021

S. NO	QUESTIONS	MARKS	NATURE
1	<p><b><u>Tick the correct answer</u></b></p> <p>1) _____ program is used to draw and colour objects.</p> <p>MS-Paint Notepad Calculator</p> <p>2) _____ tool is used to draw straight lines.</p> <p>Line Circle Brush</p> <p>3) _____ contains all the tools for drawing.</p> <p>Canvas Colour Box Tool Box</p>	3X1=3	Information

2	<p><b><u>Write 'T' for TRUE and 'F' for FALSE statements</u></b></p> <ol style="list-style-type: none"> <li>1. Tool Box is used to make straight and slanting line. ( )</li> <li>2. Pencil Tool is used to draw wavy lines. ( )</li> <li>3. Oval Tool is used to make circles and ovals. ( )</li> </ol>	3X1=3	Understanding
3	<p><b><u>Match the following:</u></b></p> <p><b>Column A</b>                      <b>Column B</b></p> <ol style="list-style-type: none"> <li>1.  Used to erase the drawing</li> <li>2.  Used to draw straight or wavy lines.</li> <li>3.  Used to fill colour in the objects.</li> </ol>	3X1=3	Interdisciplinary





# ARMY PUBLIC SCHOOL GWALIOR

## CLASS -I

ACADEMIC SESSION 2020-21

### WORKSHEET



Subject: Art and Craft

Assignment No.: 9

Allotment Date: 15<sup>th</sup> January 2021

S.no	Question	Marks
1.	<b>Where are cave paintings found in India?</b> a.) Punjab b.) Ajanta c.) Agra	10 x 1 = 10
2.	<b>Which animals are shown in cave paintings?</b> a.) Horses b.) Bison c.) Deer d.) All of above	
3.	<b>Who was known as the Picasso of India?</b> a.) Maqbool Fida Husain b.) Mona Lisa	
4.	<b>Which colours are used in Gond art?</b> a.) Made from plant sap b.) Leaves coloured soil c.) All of above	

5.

**Where are Gond art found in India?**

- a.) Himachal
- b.) Madhya Pradesh
- c.) Kerala

-----**XXXXXX**-----

---



# ARMY PUBLIC SCHOOL GWALIOR

## CLASS -I

### ACADEMIC SESSION 2020-21

### WORKSHEET



Subject: Dance

Assignment No.: 9

Allotment Date: 15<sup>th</sup> January 2021

क्र.	सही विकल्प चुनकर लिखिए।	अंक	प्रकृति
1.	बिहू किस राज्य का लोक नृत्य है ? (अ) असम (ब) केरल (स) हिमाचल	1×2= 2	बोधोत्प्रेरक
2.	सत्त्रिया शास्त्रीय नृत्य किस राज्य का है ? (अ) गुजरात (ब) असम (स) पंजाब	1×2= 2	सूचनापरक
3.	ढोल, पेपा, बाँसुरी वाद्ययन्त्र असम के किस नृत्य में बजाया जाता है ? (अ) बिहू नृत्य (ब) कजरी नृत्य (स) घूमर नृत्य	1×2= 2	अंतःविषयात्मक
4.	असम का बिहू नृत्य क्या है ? (अ) (ग्रुप) समूह नृत्य (ब) (डुएट) जुगल नृत्य (स) (सोलो) एकल नृत्य	1×2= 2	समस्यासमाधान

5.	असम का बिहू नृत्य किस गति से आरम्भ होता है ?  (अ) धीमी गति से तेज गति (ब) तेज गति से धीमी गति, (स) मध्य गति से धीमी गति	1 × 2 = 2	उच्चस्तरीयचिंतन
----	---	-----------------------	-----------------

-----XXXXXXXXXXXXXXXXXXXX-----XXXXXXXXXXXXXXXXXXXX-----



# ARMY PUBLIC SCHOOL GWALIOR

## CLASS -I

### ACADEMIC SESSION 2020-21

### WORKSHEET



**Subject: Physical Education**

**Assignment No.: 9**

**Allotment Date: 15<sup>th</sup> January 2021**

S.no	Questions	Marks
1.	Rope is the most important Equipment used in? a) Introducing Skipping b) Treasure Hunter c) Jumping for height d) All of the above.	10x1= 10
2.	What is the Safety Measure of Treasure hunt? a) Watch out for others all the time. b) Keep spaced out so that ropes do not hi? others. c) Swing ropes low to the ground. d) All of the Above	
3.	Swing ropes low to the ground. Is the Safety Measure of? a) Jumping and Hoping b) Treasure Hunt c) Introducing Skipping d) None of the Above	
4.	Practice running, jumping, hopping and moving in different ways of. a) Jumping and Hoping b) Treasure Hunt c) Introducing Skipping d) None of the Above	
5.	Use more colored object is the Variation of which game? a) Jumping and Hoping b) Treasure Hunt c) Introducing Skipping d) None of the Above	

6.	<p>Run, stepping over the ropes or lines is the activity of which game?</p> <ul style="list-style-type: none"><li>a) Treasure Hunt</li><li>b) Introducing Skipping</li><li>c) Both A and B</li><li>d) None of the above</li></ul>	
7.	<p>What is the Variation of Treasure hunter?</p> <ul style="list-style-type: none"><li>a) Increase the space of the playing area so children have to run further.</li><li>b) Decrease the space of the playing area so children have to dodge and swerve each other.</li><li>c) Use more colored objects.</li><li>d) All of the Above</li></ul> <p><b>True and False</b></p>	
8.	<p>Skipping can be done at home?</p> <ul style="list-style-type: none"><li>a) True</li><li>b) False</li></ul>	
9.	<p>We play Treasure hunt with our Parents?</p> <ul style="list-style-type: none"><li>a) True</li><li>b) False</li></ul>	
10.	<p>Skipping can be done without rope?</p> <ul style="list-style-type: none"><li>a) True</li><li>b) False</li></ul>	