



**ARMY PUBLIC SCHOOL GWALIOR**  
**CLASS – VI**  
**ACADEMIC SESSION 2021-22**  
**WORKSHEET (SELF- ASSESSMENT)**



Subject: English

Assignment No. : 6

Allotment Date: 15 September 2021

S. NO.	QUESTIONS	MARKS	NATURE
1	Write a short paragraph on “ <b>True Friendship is based on Trust and Honesty</b> ” in about 100 words.	4m	Information
2	<b>Read the following extract and answer the questions given below:</b> All that you do is match the words To the brightest thoughts in your head So that they come out clear and true And handsomely groomed and fed For many of the loveliest things Have never yet been said. <b>Questions:</b> 1. How brightest thought can be expressed? 2. Why thoughts need to be groomed? 3. Write the meaning of word “groomed”.	3m	Understanding
3	“ <b>Everyone is unique in their own ways.</b> ” Explain in about 100 words.	4m	HOT
4	<b>Grammar</b> <b>Fill in the blanks with correct form of verbs given in the bracket.</b> 1. One of the thieves _____ been caught. (has). 2. Ram and Shyam _____ playing chess. (be) 3. Mahi as well as her teachers _____ very much concerned. (be)	3m	Interdisciplinary
5	<b>Fill in the blanks with words from the brackets.</b> 1. That plug is faulty. You _____ not touch it. (must/could) 2. _____ I request you to show me this file? (May/ Should) 3. You _____ obey the rules. (must / ought to)	3m	Analytical Skill

6	What do we learn from the self-description of the children in lesson "Who I Am"? Does it make an interesting reading? Answer in 100 words.	4m	Critical Thinking and Problem Solving
7	<b>Answer the following questions in about 20-30 words.</b> 1. What did the crocodile tell the monkey midstream? 2. What does bodily intelligence reflect to? 3. How did the monkey save himself?	3x2=6m	Evaluation
8	You won the first prize in a painting competition organised in your school. Write a diary entry and express your feelings.	3m	Communication Skills



ARMY PUBLIC SCHOOL GWALIOR  
CLASS VI  
ACADEMIC SESSION 2021-22  
WORKSHEET (SELF- ASSESSMENT)



Subject: Hindi  
Allotment Date: 15 September 2021

Assignment No.: 6

क्रम संख्या	प्रश्न	अंक	प्रकृति
1.	ऐसे कौन कौन से बहाने होते हैं जिन्हें मास्टर जी एक बार में सुनकर समझ जाते हैं कुछ बहानों के बारे में लिखो।	5	INFORMATIVE
2.	इस गीत को तुम किस माहौल में गुनगुना सकते हो	1x4=4	UNDERSTANDING
3.	रेखांकित शब्दों के स्थान पर उचित शब्द लिखकर वाक्यों को शुद्ध कीजिये  1. अशोक महान <u>राजा</u> थे। 2. सभी भाई-बहनों में बहुत <u>वात्सल्य</u> था। 3. नीम की <u>परछाई</u> घनी होती है। 4. रमेश की <u>स्त्री</u> डॉक्टर है। 5. राहुल गांधी सोनिया गांधी का <u>बालक</u> है।	1x5=5	HOT

4.	<p>निम्नलिखित शब्दों के दो-दो पर्यायवाची शब्द लिखिए।</p> <p>1<sup>ण</sup> बादल .....</p> <p>.....</p> <p>2<sup>ण</sup> चन्द्रमा .....</p> <p>.....</p> <p>3<sup>ण</sup> संसार .....</p> <p>.....</p> <p>4<sup>ण</sup> हाथ .....</p> <p>.....</p> <p>5<sup>ण</sup> मनुष्य .....</p> <p>.....</p>	5	INTERDISCIPLINARY
5.	<p>मान लो कि तुम मोहन की तबियत पूछने जाते हो, तुम अपने और मोहन के बीच की बातचीत को संवाद के रूप में लिखो।</p>	5	<p>CRITICAL THINKING</p> <p>AND PROBLEM</p> <p>SOLVING</p>
6	<p>निम्नलिखित प्रश्नों के उत्तर दीजिये</p> <p>1<sup>ण</sup> मां मोहन के ऐसे-ऐसे कहने पर क्यों घबरा रही थी</p> <p>2<sup>ण</sup> यह गीत (साथी हाथ बढ़ाना) नया दौर</p>	3x2=6	EVALUATION

	<p>फिल्म में कहानी के किस मोड़ पर आता है।</p> <p>3<sup>७</sup> संकट के समय के लिये कौन कौन से नम्बर याद रखे जाने चाहिये।</p>		
--	--	--	--



**ARMY PUBLIC SCHOOL GWALIOR**  
**CLASS – VI**



**ACADEMIC SESSION 2021-22**  
**WORKSHEET (SELF- ASSESSMENT)**


**Subject: Mathematics**

**Assignment No. : 6**

**Allotment Date: 15 September 2021**

S. NO.	QUESTIONS	MARKS	NATURE
1	Represent the following on number line: (a) -5 (b) 4	1	Informative
2	Identify the negative integers from the given numbers. - 5, 3, 0, 5, - 6, 7, 3, 4, - 4, - 7	1	Informative
3	What is the additive identity of - 20?	1	Understanding
4	What is the successor of - 7?	1	Application
5	What is the predecessor of - 5?	1	Understanding
6	Write the opposite of 50 km towards north?	1	Reasoning
7	Using the number line write the integer which is: 1 more than 2	1	Analytical skills
8	Write the following integers in their increasing order. - 3, 0, - 6, 5, - 4, 6, 3, - 8	1	Informative
9	Find the sum using number line $1 + (- 4)$	1	Informative
10	What is 3 less than - 4 ?	1	Understanding
11	write True (T) or False (F). If the statement is false, correct the statement. (a) -1 lies on the left of 1 (b) - 11 is greater than - 25.	2	Problem solving

12	Write all the integers between the following pair of integers: (a) 0 and $-4$ (B) $-5$ and $5$	2	Evaluation
13	Find the solution of the following additions using number line: (a) $(-3) + 5$ (B) $(-5) + (-2)$	2	Evaluation
14	write True (T) or False (F ) (a) The sum of two negative integers is a positive integer (b) The lowest whole number is 0	2	Evaluation
15	Find ; (a) $(-5)+(-6)$ (b) $(-1)-(-1)-(-3)$ .	2	Understanding
16	Fill in the blanks (a) $2 + (-3) = (-5) + (10) + (...)$ (b) $(-11) + (... ) = (6) + (7) + (-10)$	2	Problem solving
17	Find the sum of the following integers: (a) $(-8) + (+5) + (-3) + (-2)$ (B) $(-7) + (-9) + (+4) + (+3)$	2	Problem solving
18	Fill in the blanks with $>$ , $<$ or $=$ sign. (a) $(-1) + (-3)$ _____ $(-1) - (-3)$ (b) $(-25) + (-10)$ _____ $(-25) - (-11)$ (c) $256 - (-11)$ _____ $260 + (-4)$	3	Logical thinking
19	Comparing the following pairs of number use $>$ or $<$ . (a) $0$ <input type="checkbox"/> $-6$ (b) $-10$ <input type="checkbox"/> $-2$ (c) $-100$ <input type="checkbox"/> $100$ (d) $2$ <input type="checkbox"/> $-2$	3	Problem solving
20	Ramesh thinks of an integer. He subtracts 12 from it and gets the result as $-6$ . What was the integer he thought of?	5	Application
21	Fill in the blanks: (a) To subtract $(-8)$ from 13, we add ..... to 13. (b) To subtract 5 from $(-12)$ , we add ..... to $(-13)$ (c) The negative of a negative integer is a ..... integer. (d) An integer when added to its opposite gives ..... as the sum. (e) $-4 + \dots = 1$ .	5	HOTS



**ARMY PUBLIC SCHOOL GWALIOR**  
**CLASS – VI**  
**ACADEMIC SESSION 2021-22**  
**WORKSHEET (SELF- ASSESSMENT)**



**Subject: Science**

**Assignment No. : 6**

**Allotment Date: 15 September 2021**

S.NO.	QUESTIONS	MARKS	NATURE
1.	Answer the following questions: (i). Are all the plants same in size? (ii). What is lamina?	1X2=2	Information
2.	Fill in the blanks:  (i). _____ conduct water to the leaves.  (ii). The process by which water comes out from the leaves in the form of vapour is called _____.	2X2=4	Understanding
3.	(i). Why are petals colourful?  (ii). What are weeds?	2X2=4	HOTS
4.	(i). Differentiate between tap root and fibrous root.  (ii). What are the raw materials for photosynthesis?  (iii). How many types of leaf venation are there?	2X3=6	Interdisciplinary
5.	(i). Is it possible for you to recognise the leaves without seeing them? How?	3X3=9	Analytical skill



	(ii). Why do we see dew drops on leaves in the early morning?		Critical Thinking and Problem Solving
	(iii). Name the process by which leaves can prepare their food.		Evaluation
6.	Explain the structure of a typical flower with the help of a diagram.	5X1=5	Communication skills



**ARMY PUBLIC SCHOOL GWALIOR**  
**CLASS – VI**  
**ACADEMIC SESSION 2021-22**  
**WORKSHEET (SELF- ASSESSMENT)**



**Subject: Social Science**

**Assignment No. : 6**

**Allotment Date: 15 September 2021**

S.NO.	QUESTIONS	MARKS	NATURE
1.	What is a map?	1	Understanding
2.	Port-holes were used for _____.	1	Information
3.	In a _____ the country's citizens are allowed to elect whomever they want.	1	Information
4.	_____ maps provide more information.	1	Information
5.	Who were the 'Aryas' and the 'Dasas'?	1	Understanding
6.	True/ False:  Political maps show natural features of the earth. ( )	1	Information
7.	What is Government?	1	Understanding

8.	The impression of the seal is known as a _____.	1	Information
9.	Do you think it is important for people to be involved in decisions that affect them?	3	Critical Thinking
10.	Was iron used in the Harappan cities?	3	HOTS
11.	What are 'mummies'? Do you think kings would have needed these things after death?	5	HOTS
12.	What are cardinal points and intermediate directions?	3	Understanding
13.	What does the government do for the welfare of its citizens?	5	Understanding
14.	On an outline political map of India locate and mark the following:- (a) Mohenjodaro (b) Kalibangan (c) Lothal	3	Identification and location.



**ARMY PUBLIC SCHOOL GWALIOR**  
**CLASS – VI**  
**ACADEMIC SESSION 2021-22**  
**WORKSHEET (SELF- ASSESSMENT)**



**Subject: Sanskrit**


**Assignment No. : 6**

**Allotment Date: 15 September 2021**

S.No.	QUESTIONS	MARKS	NATURE									
1	<p><b>कोष्ठकात् उचितं शब्दं चित्वा रिक्तस्थानानि पूरयत -</b></p> <p>(क) ----- पठामि । (वयम्/अहम्)</p> <p>(ख) ----- गच्छथः । (युवाम्/यूयम्)</p> <p>(ग) एतत् ----- पुस्तकम् । (माम्/मम)</p> <p>(घ) ----- क्रीडनकानि । (युष्मान्/युष्माकम्)</p> <p>(ङ) ----- छात्रे स्वः । (वयम्/आवाम्)</p>	5	Understanding									
2	<p><b>अधोलिखितानि पदानि आधृत्य सार्थकानि वाक्यानि रचयत -</b></p> <table border="1" style="width: 100%;"><tbody><tr><td>यूयम्</td><td>लेखं</td><td>पश्यामि</td></tr><tr><td>वयम्</td><td>शिक्षिकां</td><td>रचयामः</td></tr><tr><td>युवाम्</td><td>दूरदर्शनं</td><td>कथयिष्यथः</td></tr></tbody></table>	यूयम्	लेखं	पश्यामि	वयम्	शिक्षिकां	रचयामः	युवाम्	दूरदर्शनं	कथयिष्यथः	5	Thinking Skill
यूयम्	लेखं	पश्यामि										
वयम्	शिक्षिकां	रचयामः										
युवाम्	दूरदर्शनं	कथयिष्यथः										

	<table border="1"> <tr> <td>अहम्</td> <td>कथां</td> <td>पठिष्यावः</td> </tr> <tr> <td>त्वम्</td> <td>पुस्तकं</td> <td>लेखिष्यसि</td> </tr> <tr> <td>आवाम्</td> <td>चित्राणि</td> <td>नंस्यथ</td> </tr> </table>	अहम्	कथां	पठिष्यावः	त्वम्	पुस्तकं	लेखिष्यसि	आवाम्	चित्राणि	नंस्यथ		
अहम्	कथां	पठिष्यावः										
त्वम्	पुस्तकं	लेखिष्यसि										
आवाम्	चित्राणि	नंस्यथ										
3	<p>एकवचनपदस्य बहुवचनपदं, बहुवचनपदस्य एकवचन पदं च लिखत-</p> <p>सः -----</p> <p>ताः -----</p> <p>त्वम् -----</p> <p>एताः -----</p> <p>तव -----</p>	5	Memory Skill									
4	<p>कोष्ठक में दिए गए संख्यावाची शब्दों को संस्कृत में लिखिए -</p> <p>(क) (4) ----- अश्वाः ।</p> <p>(ख) (5) ----- पुष्पाणि ।</p> <p>(ग) (1) ----- कलिका ।</p> <p>(घ) (3) ----- बालकाः ।</p> <p>(ङ) (2) ----- सैनिकौ ।</p>	5	Analytical Skill									

5	<p><b>अशुद्ध संख्याओं को विशेष्य के आधार पर शुद्ध कीजिए -</b></p> <p>(क) द्वौ पुस्तके।                   -----</p> <p>(ख) द्वे बालकौ।                   -----</p> <p>(ग) त्रयः कन्याः।                   -----</p> <p>(घ) एकः फलम्।                   -----</p> <p>(ङ) एका पुस्तकम्।                   -----</p>	5	Critical Thinking
6	<p><b>निम्नलिखित क्रियापदों में धातु बताइए -</b></p> <p>(क) नमसि                   -----</p> <p>(ख) खादतः                   -----</p> <p>(ग) चलन्ति                   -----</p> <p>(घ) वदथः                   -----</p> <p>(ङ) लिखामि                   -----</p>	5	Information



**ARMY PUBLIC SCHOOL GWALIOR**  
**CLASS – VI**



**ACADEMIC SESSION 2021-22**  
**WORKSHEET (SELF- ASSESSMENT)**

**Subject: Computer**

**Assignment No. : 6**

**Allotment Date: 15 September 2021**

<b>S. No.</b>	<b>Questions</b>	<b>Marks</b>	<b>Nature</b>
<b>1</b>	Tick The Correct Answer	5x 1/2=2.5	Information
	A) CD-ROM and DVD-ROM are the example of a) Storage device    b) Input device    c) Output device		
	B) ALU, CU and MU are the parts of a) Monitor    b) Pen drive    c) CPU		
	C) The program which is used to create documents like letters, resumes, etc. is known as a) Excel    b) Word    c) PowerPoint		
	D) Save, Undo and Redo options are present on a) Status bar    b) Formatting toolbar    c) Quick Access Toolbar		
E) Running a program to get the output is called a) Execution    b) Run    c) Debug			
<b>2</b>	Fill in the blanks a) The information printed on paper is known as_____ b) Data that has been processed into a useful form is called_____ c) MS-Word is a word_____ program. d) Macro function is available in _____ tab. e) You can open a _____ by using Adobe's free Acrobat Reader.	5 x 1/2=2.5	Understanding
<b>3</b>	Answer the following question i) What is a CPU? ii) Differentiate between moving and copying.	2 x 2.5 =5	HOT



**ARMY PUBLIC SCHOOL GWALIOR**  
**CLASS – VI**  
**ACADEMIC SESSION 2021-22**  
**WORKSHEET (SELF- ASSESSMENT)**



**Subject: G.K**

**Assignment No. : 6**

**Allotment Date: 15 September 2021**

S.NO.	QUESTIONS	MARKS	NATURE
1.	Fill in the blanks:  (i). The full form of E-mail is _____.  (ii). _____ is a certification mark employed on agricultural products in India.  (iii). We should not eat anything that a _____ offers to us.	3	Understanding
2.	Write True or False:  (i). The process of recording a movie onto a CD is called burning. ( )  (ii). We should not respect all the religions. ( )  (iii). The BIS hallmark is a hallmarking system for gold as well as silver jewellery. ( )	3	Information
3.	Tick the correct answer::  (i). When did the first personal computer, the Apple II, appear?  (a). 1977  (b). 1978	2	Information



	<p>(c). 1980</p> <p>(ii). Which certification mark is mandatory on the processed fruit products?</p> <p>(a). Eco Mark</p> <p>(b). Agmark</p> <p>(c). FPO Mark</p>		
4.	What are laws? Why do we need them?	1	Critical thinking
5.	What is etiquette?	1	Interdisciplinary



**ARMY PUBLIC SCHOOL GWALIOR**  
**CLASS – VI**  
**ACADEMIC SESSION 2021-22**  
**WORKSHEET (SELF- ASSESSMENT)**



**Subject: Art Education**


**Assignment No. : 6**


**Allotment Date: 15 September 2021**

S.N	QUESTIONS	MARKS	NATURE
1	<b>Madhubani art is over _____ years old.</b> <b>(a) 1000</b> <b>(b) 1500</b> <b>(c) 2000</b> <b>(d) 2500</b>	0.5	Creative Skills
2	<b>'Madhubani', a style of folk paintings, is popular in _____ states in India?</b> <b>(a) Uttar Pradesh</b> <b>(b) Rajasthan</b> <b>(c) Bihar</b> <b>(d) Madhya Pradesh</b>	0.5	Creative Skills
3	<b>_____ element is not used in Madhubani.</b> <b>(a) Line</b> <b>(b) Colour</b> <b>(c) Shape</b> <b>(d) Value</b>	0.5	Creative Skills
4	<b>You can easily identify Madhubani art by its _____.</b> <b>(a) Colourful, geometric designs.</b> <b>(b) Eyes, that are big and sideways.</b> <b>(c) The colour of the dyes that make the paint.</b> <b>(d) Depiction of queen Sita.</b>	0.5	Creative Skills

5	<p>_____ colours are mostly used in Madhubani Paintings.</p> <p>(a) Bright</p> <p>(b) Dark</p> <p>(c) Primary</p> <p>(d) Secondary</p>	0.5	Creative Skills
6	<p>The ritual dance of the “Warli” tribe, danced in rows or circles, holding hands at the waist-is called_____.</p> <p>(a) Dhimsa</p> <p>(b) Tarpa</p> <p>(c) Dhemse</p> <p>(d) Chhau</p>	0.5	Creative Skills
7	<p>Turmeric powder is the framework of Madhubani paintings.</p> <p>(a) True</p> <p>(b) False</p>	0.5	Creative Skills
8	<p>Madhubani Art is kind of Folk art.</p> <p>(a) True</p> <p>(b) False</p>	0.5	Creative Skills
9	<p>Rhombus geometric shapes we used in Warli Art.</p> <p>(a) True</p> <p>(b) False</p>	0.5	Creative Skills
10	<p>Warli painting is identified by Colourful borders.</p> <p>(a) True</p> <p>(b) False</p>	0.5	Creative Skills

11	<p><b>2D shapes- circle, square are the shapes are used in making Madhubani art.</b></p> <p>(a) True (b) False</p>	0.5	Creative Skills
12	<p><b>The language spoken by Warli tribe is Varli language.</b></p> <p>(a) True (b) False</p>	0.5	Creative Skills
13	<p><b>Warli painting is indigenous to Maharashtra.</b></p> <p>(a) True (b) False</p>	0.5	Creative Skills
14	<p><b>How many types of different forms of art are there?</b></p> <p>(a) 2 forms (b) 5 forms (c) 7 forms (d) 10 forms</p>	0.5	Creative Skills
15	<p><b>Which among these is the example of 3D art?</b></p> <p>(a) Decorative art (b) Clay modeling (c) Painting (d) Print making</p>	0.5	Creative Skills
16	<p><b>Which of these is the example of 2D art?</b></p> <p>(a) Drawing (b) Clay modeling (c) Mix media (d) Wood craft</p>	0.5	Creative Skills

17	<p><b>Which art uses a tool such as a brush to transfer pigment on to a surface?</b></p> <p>(a) Printmaking  (b) Painting  (c) Sculpture  (d) Drawing</p>	0.5	Creative Skills
18	<p><b>What comes under dry media?</b></p> <p>(a) Pastle  (b) Water colour  (c) Clay  (d) Ink</p>	0.5	Creative Skills
19	<p><b>What wet media do we use to make paintings?</b></p> <p>(a) Chalk  (b) Pencil  (c) Water colour  (d) Sketch pen</p>	0.5	Creative Skills
20	<p><b>What is pictured here?</b></p>  <p>(a) A wedding scene  (b) Dancers and a tarpa instrument player.  (c) Dancers and a bagpipe player  (d) Warli villagers celebrating a religious holiday</p>	0.5	Creative Skills



**ARMY PUBLIC SCHOOL GWALIOR**  
**CLASS – VI**  
**ACADEMIC SESSION 2021-22**  
**WORKSHEET (SELF- ASSESSMENT)**



Subject: Work Education

Assignment No. : 6

Allotment Date: 15 September 2021

S. NO.	QUESTIONS	MARKS	NATURE
1	<p>The traditional method of making paper-mache adhesive is to use a mixture of _____.</p> <p>(a) Water and wheat (b) Water and grains (c) Water and flour (d) Water and colour</p>	0.5	Creative Skills
2	<p>The _____ type of paper mache is most often used to create molded and sculpted pieces.</p> <p>(a) Pulp (b) Strip (c) Rough (d) Glossy</p>	0.5	Creative Skills
3	<p>Paper mache was invented in _____.</p> <p>(a) India (b) China (c) Australia (d) Sweden</p>	0.5	Creative Skills
4	<p>_____ material is not required in paper mache.</p>	0.5	Creative Skills

	<p>(a) Plastic putty  (b) Glue  (c) Chalk powder  (d) Coconut oil</p>		
5	<p>_____ brought paper mache to Kashmir.</p> <p>(a) Sultan Zain-ul-Abadin  (b) Maqbool Fida Hussain  (c) Raja Ravi Varma  (d) Amrita Sher-Gil</p>	0.5	Creative Skills
6.	<p>_____ initiated the texture of plaster and stucco.</p> <p>(a) French  (b) German  (c) Japanese  (d) Spanish</p>	0.5	Creative Skills
7	<p><b>Blue pottery art is Ceramic craft.</b></p> <p>(a) True  (b) False</p>	0.5	Creative Skills
8	<p><b>Tie and dye is Textile Craft.</b></p> <p>(a) True  (b) False</p>	0.5	Creative Skills
9	<p><b>Origami is a Textile craft.</b></p> <p>(a) True  (b) False</p>	0.5	Creative Skills
10	<p><b>'Wooden rose wood scoop' is a craft under house ware category.</b></p> <p>(a) True  (b) False</p>	0.5	Creative Skills
11	<p><b>Fashion is the self expression of hairstyle.</b></p> <p>(a) True  (b) False</p>	0.5	Creative Skills
12	<p><b>A trend or look that is spread across a population at a specific time and place is called Fashion trend.</b></p> <p>(a) True</p>	0.5	Creative Skills

	<b>(b) False</b>		
13	<b>Which shape is used to make fractions bird?</b> <b>(a) Rectangle</b> <b>(b) Circle</b> <b>(c) Square</b> <b>(d) Triangle</b>	0.5	Creative Skills
14	<b>On which part of bird 1/2 fraction of circle was used?</b> <b>(a) In beak</b> <b>(b) In feathers</b> <b>(c) In crown</b> <b>(d) In center body</b>	0.5	Creative Skills
15	<b>What type of fraction was used to make the feathers?</b> <b>(a) 1/3</b> <b>(b) 1/2</b> <b>(c) 1/8</b> <b>(d) 1/1</b>	0.5	Creative Skills
16	<b>Which tool is used to make the eye and legs?</b> <b>(a) Pencil</b> <b>(b) Sketch pen</b> <b>(c) Eraser</b> <b>(d) Charcoal</b>	0.5	Creative Skills
17	<b>What part of the circle is used to make the beak of the bird?</b> <b>(a) 1/1</b> <b>(b) 1/3</b> <b>(c) 1/16</b> <b>(d) 1/2</b>	0.5	Creative Skills
18	<b>How many types of fraction circles are used in the bird?</b> <b>(a) 4</b> <b>(b) 6</b> <b>(c) 7</b> <b>(d) 2</b>	0.5	Creative Skills
19	<b>What kind of material were used to make fractions bird?</b> <b>(a) Water colour</b> <b>(b) Brush</b> <b>(c) Coloured papers</b> <b>(d) Ink</b>	0.5	Creative Skills



20


This is the picture of:



- (a) Bird
- (b) Peacock
- (c) Fractions bird
- (d) Parrot

0.5

Creative Skills



**ARMY PUBLIC SCHOOL GWALIOR**  
**CLASS – VI**  
**ACADEMIC SESSION 2021-22**  
**WORKSHEET (SELF- ASSESSMENT)**




**Subject: Library**

**Assignment No. : 6**

**Allotment Date: 15 September 2021**

S.NO	QUESTIONS	MARKS	NATURE
1	Why did Traf-o-data fail to take off ?	01	Comprehension
2	Why did the first version of windows flop ?	01	Analysis
3	How did bill gates become the richest man on forbes list at 40 ?	01	Analysis
4	Where did colonel sanders discover his famous recipe?	01	Analysis
5	Why was sanders forced to sell his service station ?	01	Understanding
6	From where was walt disne thrown out ?	01	Analysis
7	What is one of the greatest virtues that a person can possess ?	01	Comprehension
8	How many rejection did Sanders face before he was able to sell his first franchise?	01	Comprehension
9	How many attempts did Thomas Edison have to make before he was successful?	01	Understanding
10	When have you ever failed in anything and how did you deal with that failure?	01	Understanding



**ARMY PUBLIC SCHOOL GWALIOR**  
**CLASS – VI**  
**ACADEMIC SESSION 2021-22**  
**WORKSHEET (SELF- ASSESSMENT)**



**Subject: Health and Physical Education**

**Assignment No. : 6**

**Allotment Date: 15 September 2021**

<b>S.NO</b>	<b>QUESTIONS</b>	<b>NATURE</b>	<b>MARKS 1X10</b>
1.	What is Sports Injuries ..... A. Injuries that most occur during sports. B. Injuries that most occur during walking C. When fall down from bed D. Injuries that most occur during talking	Informatory	1
2	What is most common sports injury... A. Fracture B. Dislocation C. Sprain D. Headdick	Analytical	1
3	When Abrasion Occurred A. Fall in rufh surface B. Fall in soft surface C. Hit Sharp edges D. By Hitting hard object	Informatory	1

4	<p>What is sprain</p> <p>A. Soft tissue injury</p> <p>B. Dislocation</p> <p>C. Concussion</p> <p>D. Fracture</p>	Understanding	1
5	<p><b>Fill in the Blank</b></p> <p>By ..... injury can be diagnosis</p> <p>(Talk, ignore, disregard)</p>	Informatory	1
6	<p>Break bones is also known as.....</p> <p>(Fracture, Soft tissue injury, sprain)</p>	Understanding	1
7	<p>Protection, Rest, ....., Compression, Elevation is the PRICE Management</p> <p>( Injury, Ice, Isolated )</p>	Understanding	1
8	<p><b>True/False</b></p> <p>Fracture is a bone injury</p> <p>True/False</p>	Informatory	1
9	<p>Sprains occur when ligament at joints get stretched and torn .</p> <p>True/False</p>	Informatory	1
10	<p>Injuries are the part of games.</p> <p>True/False</p>	Critical thinking	1



# ARMY PUBLIC SCHOOL GWALIOR

## CLASS – VI

### ACADEMIC SESSION 2021-22

### WORKSHEET (SELF- ASSESSMENT)



Subject: Music (Dance)

Assignment No. : 6

Allotment Date: 15 September 2021

S. NO.	प्रश्न	अंक	प्रकृति
1.	जिसमें भक्ति भाव हो उसे----- कहते हैं? (अ) शांत रस (ब) शृंगार रस (स) वीर रस	0.5 marks	बोधात्मक
2.	तानसेन -----वाद्य यंत्र बजाते थे (अ) तानपुरा (ब) सारंगी (स) वीणा	0.5 marks	
3.	भरतनाट्यम -----राज्य का शास्त्रीय नृत्य है? (अ) तमिलनाडु (ब) गुजरात (स) असम	0.5 marks	सूचनापरक
4.	क्या मोहिनीअट्टम शास्त्रीय नृत्य है? (अ) हाँ (ब) नहीं	0.5 marks	
5.	क्या वीर रस में आँखों में तेज रहता है?	0.5 marks	अंतःविषयात्मक

	(अ) हाँ (ब) नहीं		
6.	क्या शास्त्रीय नृत्य 8 प्रकार के होते हैं? (अ) हाँ (ब) नहीं	0.5 marks	
7.	कथक कहाँ का शास्त्रीय नृत्य है? (अ) उत्तर प्रदेश (ब) पंजाब (स) हरियाणा	0.5 marks	गहनसोचऔर समस्यासमाधान
8.	तानसेन संगीत समारोह कब मनाया जाता है? (अ) दिसंबर के महीने में मध्य प्रदेश के ग्वालियर जिले में (ब) फरवरी के महीने में असम जिले में (स) अप्रैल के महीने में ग्वालियर जिले में	0.5 marks	
9.	शास्त्रीय नृत्य कितने प्रकार के होते हैं? (अ) आठ (ब) दस (स) चार	0.5 marks	उच्चस्तरीय चिंतन
10.	संगीत सम्राट तानसेन कौन सा राग गाते थे जिससे बरसात होने लगती थी? (अ) मेघ मल्हार राग (ब) राग बसंत (स) भैरवी राग	0.5marks	
11.	भारतीय संगीत का मूल स्रोत ..... से माना जाता है। (अ) वेदों (ब) संगीत (स) तीन (द) भजन	0.5 marks	बोधात्मक

12.	ब्रह्मा ने नारद मुनि को ..... का वरदान दिया था। (अ) वेदों (ब) संगीत (स) तीन (द) भजन	0.5 marks	
13.	भारतीय संगीत के मूल रूप से ..... भेद किये जाते हैं। (अ) वेदों (ब) संगीत (स) तीन (द) भजन	0.5 marks	सूचनापरक
14.	..... सुगम संगीत की एक शैली है। (अ) वेदों (ब) संगीत (स) तीन (द) भजन	0.5 marks	
15.	संगीत में लय नहीं होती। (अ) सही (ब) गलत	0.5 marks	अंतःविषयात्मक
16.	लय तीन प्रकार की होती है। (अ) सही (ब) गलत	0.5 marks	
17.	म का विकृत स्वर ऊपर होता है। (अ) सही (ब) गलत	0.5 marks	गहनसोचऔर समस्यासमाधान
18.	सा और प के विकृत स्वर होते हैं। (अ) सही	0.5 marks	

	(ब) गलत		
19.	भारतीय संगीत के भेद होते हैं। (अ) 1 (ब) 2 (स) 3 (द) 4	0.5 marks	उच्चस्तरीय चिंतन
20.	म <sup>०</sup> स्वर का पूरा नाम है। (अ) मानव (ब) मन (स) मध्यम (द) मंदिर	0.5 marks	





**ARMY PUBLIC SCHOOL GWALIOR**  
**CLASS – VI**  
**ACADEMIC SESSION 2021-22**  
**WORKSHEET (SELF- ASSESSMENT)**



**Subject: Discipline**

**Assignment No. : 6**

**Allotment Date: 15 September 2021**

S. No	Questions	Marks	Nature
1.	<p><b>Fill in the blanks-</b></p> <p>i. Being a teenager can be _____ at times</p> <p>ii. You might feel like you have the _____ of the world is on your shoulders.</p> <p>iii. Instead of seeing these as stressors, consider all the opportunities you have _____.</p> <p>iv. Keep your room clean and organized.</p> <p>v. Take care of _____ and clean up yourself.</p> <p>vi. Carly never let her friends _____.</p> <p>vii. The three boys got the project done they were _____.</p> <p>viii. Carly was very _____.</p>	04	Knowledge & Understanding
2.	<p><b>How do you show your responsibility?</b></p> <p>i. _____</p> <p>ii. _____</p>		Thinking and Writing Skills

	iii. _____ iv. _____	04	
3	<p><b>Choose the correct answer-</b></p> <p>A voice spoke in the dream: “The present is nothing more than the outcome of the choices made in the past. The future will only be the results of the choices we make today.”</p> <ul style="list-style-type: none"> <li>i. Whatever we are doing today, will make our future.</li> <li>ii. We can waste as much time as we want.</li> <li>iii. The future is unpredictable</li> <li>iv. The present can be made beautiful.</li> </ul>	02	Thinking Skill