

ARMY PUBLIC SCHOOL GWALIOR

CLASS -V

ACADEMIC SESSION 2020-21

WORKSHEET



Subject: English

Assignment No.: 10

Allotment Date: 15th January 2021

S.NO	QUESTIONS	MARKS	NATURE
1	Complete the following sentences: 1. Eskimos live in _____. 2. Feeling scared gives a _____ to get help.	2	Information
2	Write one word for the following: 1. A group of monkeys _____ 2. A group of lions _____	2	Understanding
3	How does the poet, Sanchit Saluja has described the blizzards in the poem " The Polar Region"? _____ _____	2	Interdisciplinary
4	What are you scared of and why? _____ _____ _____	2	Analytical skills
5	Fill in the blanks with suitable adverbs to complete the following sentences: 1. The flowers are _____ pretty. 2. Sit _____.	2	Critical thinking and Problem Solving
6	What would you do when someone touches you and you don't like?	3	HOT
7	Write meanings of the following words: 1. adapt _____ 2. regions _____ 3. pleas _____ 4. convey _____	4	Evaluation
8	Write a character sketch describing Ira Ma'am and her qualities.	3	Communication Skills



ARMY PUBLIC SCHOOL GWALIOR

CLASS -V

ACADEMIC SESSION 2020-21

WORKSHEET



Subject: Hindi

Assignment No.: 10

Allotment Date: 15th January 2021

क्र०	प्रश्न	अंक	प्रश्न का प्रकार
1.	<p>प्र०1. निम्नलिखित प्रश्नों के सही उत्तर के सामने सही का निशान लगाओ:</p> <p>क. महारानी ने झलकारी को अपनी सेना में क्यों नियुक्त किया ?</p> <p>1. स्वर की दृढ़ता से प्रभावित होकर <input type="checkbox"/></p> <p>2. परिश्रम से प्रभावित होकर <input type="checkbox"/></p> <p>ख. लोग झलकारी को किस नाम से पुकारते थे ?</p> <p>1. शेरनी <input type="checkbox"/></p> <p>2. राजकुमारी <input type="checkbox"/></p> <p>ग. महारानी को सुरक्षित स्थान पर पहुँचाने में किसने सहायता की ?</p> <p>1. झलकारी ने <input type="checkbox"/></p> <p>2. दुलाजी ठाकुर ने <input type="checkbox"/></p>	3	बोधार्थक
2.	<p>प्र०2. निम्न शब्दों के अर्थ लिखो :</p> <p>1. विश्वासपात्र - _____</p> <p>2. सतर्क - _____</p> <p>3. रसद - _____</p>	3	ज्ञानार्थक
3.	<p>प्र०3. निम्न शब्दों के लिंग बदलो -</p>	4	रचनात्मक

	<p>1. पुरुष - _____</p> <p>2. विद्वान - _____</p> <p>3. सम्राट - _____</p> <p>4. वीर - _____</p>		
4.	<p>प्र ०4. रेखांकित शब्दों का वचन बदलकर दुबारा लिखो -</p> <p>1. महारानी शत्रु पर टूट पड़ीं ।</p> <p>_____</p> <p>2. एकाएक उसकी दृष्टि अंग्रेज़ सैनिक पर पड़ी ।</p> <p>_____</p> <p>3. किले में खतरे की घंटी बज उठी ।</p> <p>_____</p> <p>4. भारतीय खिलाड़ी ने करिश्मा कर दिखाया ।</p> <p>_____</p>	4	सूचनात्मक
5.	<p>प्र ०5. निम्नलिखित प्रश्नों के उत्तर लिखो -</p> <p>प्र०1. महारानी ने झलकारी को उन्नाव दरवाजे पर क्यों नियुक्त किया होगा ?</p> <p>उ०1. _____</p> <p>_____</p> <p>प्र०2. झलकारी का अंत किस प्रकार हुआ ?</p> <p>उ०2. _____</p> <p>_____</p> <p>प्र०3. ' हार और अपमान से जनरल तिलमिला उठा ' । कौनसी हार और अपमान से जनरल तिलमिला उठा ?</p> <p>उ०3. _____</p> <p>_____</p>	3	विश्लेषणात्मक
6.	<p>प्र ०6. इन वाक्यों में सम्बन्धबोधक शब्दों के नीचे रेखा खींचो -</p> <p>क. मेरे घर के बाहर एक गाड़ी आकर रुकी ।</p> <p>ख. स्कूल के पास जामुन के पेड़ लगे हैं ।</p> <p>ग. हम अध्यापक के साथ पुस्तक मेला देखने गए ।</p>	3	उच्चस्तरीयचिंतन



ARMY PUBLIC SCHOOL GWALIOR

CLASS -V

ACADEMIC SESSION 2020-21

WORKSHEET



Subject: Mathematics

Assignment No.: 10

Allotment Date: 15th January 2021

S. NO.	QUESTIONS	MARKS	NATURE
1	Fill in the blanks: (i) Bars may be drawn either _____ or _____ (ii) The eye of the projector (viewing position) is called _____	2x1=2	Understanding
2	Write 'True' or 'False': (i) Pictograph is a representation of given data by pictures. () (ii) When two parallel lines appear to meet at a point after some distance is called vanishing point. ()	2x1=2	HOTS
3	Tick the correct answer from the given options: (i) Find the perimeter of square whose side is 2.2 m. (a) 8.8 m (b) 19.36 m (c) 13.2 m (d) 4.84 m (ii) Find the perimeter of rectangle whose length and breadth are 25 cm and 16 cm respectively. (a) 28 cm	5x1=5	Critical thinking

	<p>(b) 82 cm (c) 400 cm (d) 402 cm</p> <p>(iii) Convert 15 sq m into 150 sq dm (a) 0.15 sq dm (b) 1500 sq dm</p> <p>(iv) Convert 25000 sq cm into sq m (a) 4.5 sq m (b) 0.45 sq m (c) 450 sq m (d) 45 sq m</p> <p>(v) Area of rectangle will be, whose length is 20 m, breadth is 10 m. (a) 60 sq m (b) 62 sq m (c) 200 sq m (d) 30 sq m</p>		
--	---	--	--

4	<p>Solve the following questions: -</p> <p>Solve the following:</p> <p>(i) What will be the area of square whose sides are a) 5 mm b) 5.5 m</p> <p>(ii) Find the side of a square whose perimeter are: (a) 1624 cm (b) 180 m</p> <p>(iii) Find the breadth of the rectangle whose length is 4 m and perimeter is 14 m.</p> <p>(iv) The internal dimensions of a tank are 24 m, 14 m and 10m. How much water can be filled in it?</p> <p>(v) The number of bed-sheets manufactured by a factory during five consecutive weeks is given below.</p> <table border="1" style="width: 100%; border-collapse: collapse; text-align: center;"> <thead> <tr> <th style="color: blue;">Week</th> <th>First</th> <th>Second</th> <th>Third</th> <th>Fourth</th> <th>Fifth</th> </tr> </thead> <tbody> <tr> <td style="color: blue;">Number of Bed-sheets</td> <td>600</td> <td>850</td> <td>700</td> <td>300</td> <td>900</td> </tr> </tbody> </table> <p>Draw the bar graph representing the above data.</p>	Week	First	Second	Third	Fourth	Fifth	Number of Bed-sheets	600	850	700	300	900	5x1=5	Interdisciplinary
Week	First	Second	Third	Fourth	Fifth										
Number of Bed-sheets	600	850	700	300	900										

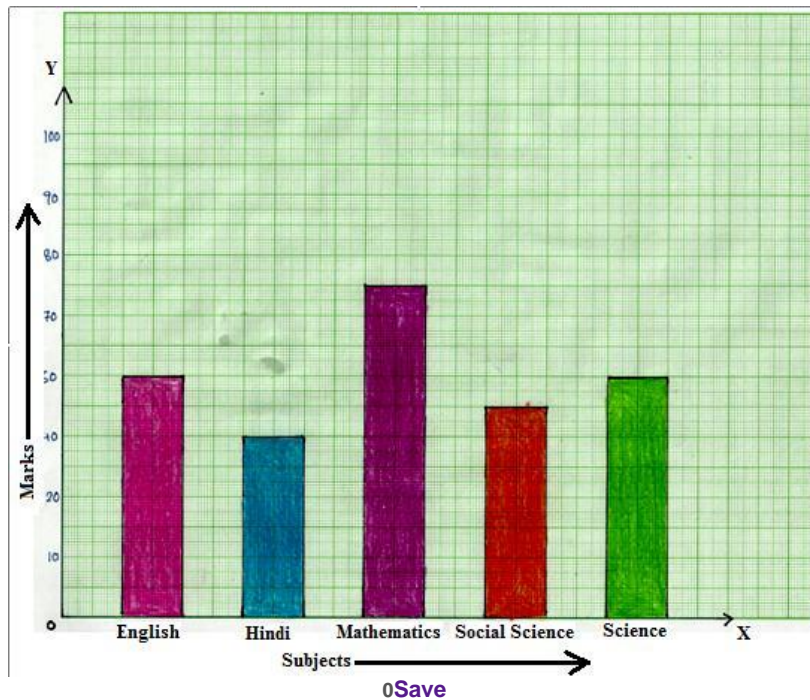
5

Solve the following questions:

2x3 =6

Problem

- (i) A floor is 680 cm long and 320 cm wide. It is to be paved with square marble tiles of side 20cm. How many such tiles will be required?
- (ii) A cheese block is 25 cm long, 15 cm wide and 10 cm high. It is cut into solid cubical blocks of the same size. Find the number of cubical blocks, if each side measures 2.5 cm.
- (iii) Look at the bar graph given below:



Read it carefully and answer the following questions.

- (i) What information does the bar graph give?
- (ii) In which subject is the student very good
- (iii) In which subject is he poor?
- (iv) What is the average of his marks?

Solving



ARMY PUBLIC SCHOOL GWALIOR

CLASS -V

ACADEMIC SESSION 2020-21



WORKSHEET




Subject: EVS

Assignment No.: 10


Allotment Date: 15th January 2021

S.NO.	QUESTIONS	MARKS	NATURE
1.	Name the following i)The speaker of India _____. ii)The largest continent _____.	2x1=2	Information
2.	Identify the following picture i)  ii)  iii) _____	3x1=3	Understanding



3.	<p>Write True or False</p> <p>i)The Prime Meridian is the 0° longitude. _____</p> <p>ii)The High Court is the highest court of justice. _____</p>	2x1=2	Interdisciplinary
4.	<p>Define the term</p> <p>i)Axis-</p> <p>ii)Parliament-</p>	2x1=2	Analytical skill
5.	<p>Which is more important –invention of the wheel or steam engine? Discuss</p>	3x1=3	HOTS
6.	<p>i)Write the name of fastest train in India?</p> <p>ii)What is Cartography?</p>	2x1=2	Evaluation
7.	<p>Why do you think the constitution gives more power to the central government?Discuss.</p>	3x1=3	Critical thinking and problem solving

8.	Discuss any three advantages of Air transport.	3x1=3	Communication Skill



ARMY PUBLIC SCHOOL GWALIOR

CLASS -V

ACADEMIC SESSION 2020-21

WORKSHEET



Subject: Computer

Assignment No.: 9

Allotment Date: 15th January 2021

S. NO	QUESTIONS	MARKS	NATURE
1	<p><u>Tick the correct answer:-</u></p> <p>a. Which finger is used to type the characters S, W and X? Index finger Ring finger Middle finger</p> <p>b. Which finger is used to type the characters A, Q and Z? Index finger Little finger Middle finger</p> <p>c. Which software program is used to type text. LOGO MS-Word MS-Powerpoint</p> <p>d. Your fingers must be in the middle row of your keyboard known as Home keys Arrow keys Function keys</p>	4X1=4	Information

2	<p><u>Fill in the blanks:-</u></p> <ol style="list-style-type: none">1. _____ is a process of inputting text with the keyboard.2. You can press the spacebar with your _____.3. Avoid looking at the _____ while typing.4. Position your fingers back on the _____ after pressing any keys.	4X1=4	Understanding
3	<p><u>Answer the following question:-</u></p> <p>What is typing?</p>	2X1=2	Analytical Skill



ARMY PUBLIC SCHOOL GWALIOR

CLASS -V

ACADEMIC SESSION 2020-21

WORKSHEET



Subject: Art and Craft

Assignment No.: 9

Allotment Date: 15th January 2021

S.no	Question	Marks
1.	Where are cave paintings found in India? a.) Punjab b.) Ajanta c.) Agra	5x 2 = 10
2.	Which animals are shown in cave paintings? a.) Horses b.) Bison c.) Deer d.) All of above	
3.	Who was known as the Picasso of India? a.) Maqbool Fida Husain b.) Mona Lisa	

4.

Which colours are used in Gond art?

- (a) Made from plant sap
- (b) Leaves coloured soil
- (c) All of above

5.

Where are Gond art found in India?

- a.) Himachal
- b.) Madhya Pradesh



ARMY PUBLIC SCHOOL GWALIOR

CLASS -V

ACADEMIC SESSION 2020-21

WORKSHEET



Subject: Physical Education

Assignment No.: 9

Allotment Date: 15th January 2021

S.no	Questions	Marks
1.	What are the Equipment used in Skipping? a) Cones and markers b) Long and Short Skipping Ropes c) Both A and B d) None of the Above	10 X 1 = 10
2.	Use sufficient space for the runners and chasers to run safely between the lines is the Safety Measure of? a) Skipping b) Roads and Lanes c) Both A and B d) None of the above	
3.	In Roads and Lanes two players are nominated one as the Chaser and other as the runner the rest of the group must stand in lines of. a) 5/6 b) 3/7 c) 7/2 d) 8/5	
4.	Skip to a beat is the variation of which game? a) Skipping b) Roads and Lanes c) Both A and B d) None of the above	
5.	What is the Variation of Skipping? a) Try skipping with a partner facing them and back to bock. b) Try skipping in time with a partner. c) Skip to a beat. d) All of the Above	

6. Play with two chasers and one runner is the variation of which game?

- a) Skipping
- b) Roads and Lanes
- c) Both A and B
- d) None of the above

True and False.

7. Can we do Skipping activity at home?

- a) True
- b) False

8. Do we have to follow all the Safety Measures?

- a) True
- b) False

9. Can we do Skipping without Skipping Ropes?

- a) True
- b) False

10. Can we play roads and lanes without runner and chaser?

- a) True
- b) False



ARMY PUBLIC SCHOOL GWALIOR

CLASS -V

ACADEMIC SESSION 2020-21

WORKSHEET



Subject: Dance

Assignment No.: 9

Allotment Date: 15th January 2021

क्र.	सही विकल्प चुनकर लिखिए।	अंक	प्रकृति
1.	बिहू किस राज्य का लोक नृत्य है ? (अ) असम (ब) केरल (स) हिमाचल	1×2= 2	बोधात्मक
2.	सत्त्रिया शास्त्रीय नृत्य किस राज्य का है ? (अ) गुजरात (ब) असम (स) पंजाब	1×2= 2	सूचनापरक
3.	ढोल पेपा बाँसुरी वाद्ययन्त्र असम के किस नृत्य में बजाया जाता है ? (अ) बिहू नृत्य (ब) कजरी नृत्य (स) घूमर नृत्य	1×2= 2	अंतःविषयात्मक
4.	असम का बिहू नृत्य क्या है ?	1×2= 2	गहनसोचऔर

	(अ) (ग्रुप) समूह नृत्य (ब) (डुएट) जुगल नृत्य (स) (सोलो) एकल नृत्य		समस्यासमाधान
5.	असम का बिहू नृत्य किस गति से आरम्भ होता है ? (अ) धीमी गति से तेज गति (ब) तेज गति से धीमी गति, (स) मध्य गति से धीमी गति	1×2= 2	उच्चस्तरीयचिंतन