

ARMY PUBLIC SCHOOL GWALIOR
CLASS - I





ACADEMIC SESSION 2021-22
WORKSHEET (SELF –ASSESSMENT)


Subject: English

Assignment No. : 9

Allotment Date: 15 December 2021

S.N	QUESTIONS	MARKS	SKILLS/COMPETENCIES
1	<p>Fill in the blanks using the words given in the box below.</p> <p>Weekend, Nitin, fence, cookies, wrapped</p> <p>a. All cousins met on the last _____.</p> <p>b. Mummy had baked some special _____.</p> <p>c. _____ was the seeker.</p> <p>d. Priya ran along the _____ and fell into the pool.</p>	4X1=4	Information
2	<p>Answer the following questions.</p> <p>Q1. Where did mummy arrange the party ?</p> <p>_____</p> <p>Q2. Which game did the children play ?</p> <p>_____</p> <p>Q3. Write three things hanging from the tree.</p> <p>_____</p> <p>_____</p> <p>Q4. What scared Priya ?</p> <p>_____</p>	4X1=4	Understanding
4	<p>Circle / underline describing words in these sentences.</p>	4X1=4	Analytical Skill

	<p>a. I am hungry.</p> <p>b. There are dark clouds in the sky.</p> <p>c. Milk is good for health.</p> <p>d. Disha has curly hair.</p>		
5.	<p>Write two describing words that go with these nouns.</p> <p>Flower : _____, _____</p> <p>Apple : _____, _____</p>	2X1=2	Critical Thinking and Problem Solving
6.	<p>Look at the following pictures and fill in the blanks with the appropriate position words.</p> <p>a. A bird is sitting _____ the branch. (in/on)</p>  <p>b. Raju is standing _____ the tree. (on/behind)</p> 	2X1=2	Evaluation
7.	<p>Write the meaning of the following words .</p> <p>a. yummy -</p> <p>b. seeker -</p> <p>c. suddenly -</p> <p>d. screamed -</p>	4x1=4	Communication Skills



ARMY PUBLIC SCHOOL GWALIOR

CLASS - I

ACADEMIC SESSION 2021-22



WORKSHEET (SELF -ASSESSMENT)

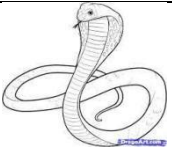


Subject: Hindi

Assignment No. : 9

Allotment Date: 15 December 2021

संख्या	प्रश्न / उत्तर	अंक	प्रकृति
प्र.1	अँ व अः की मात्रा लगाकर सही शब्द बनाओ 1 नम ऊट अत भवरा पुन	5x.5=2.5	बोधात्मक
प्र 2	नीचे दिए गए शब्दों के विलोम शब्द लिखो 1 1. मोटा 2. दिन 3. बड़ा 4. सोना 5. हँसना 6. काला	6x1=6	गहन सोच
प्र-3	नीचे दिए गए प्रश्नों के उत्तर लिखो 1 प्रश्न: मँगरू मुँह फुलाए क्यों बैठा था ? प्रश्न: माँ ने मँगरू को खाना क्यों नहीं दिया था ? प्रश्न: ऊँटवाले ने मँगरू से क्या कहा ?	3x 1=3	समस्या समाधान
प्र-4	नीचे दिए गए चित्रों के नाम लिखो 1  -----  -----	4x1=4	उच्चस्तरीय चिंतन





प्र-5


नीचे दिए गए प्रश्नों के उत्तर लिखो 1

प्रश्न: मँगरू ने ऊँटवाले की क्या मदद की ?

2

विश्लेषणात्मक

प्र-6



दिए गए चित्र का वर्णन करो (पाँच वाक्य लिखो)

2.5

भाषाई कौशल



ARMY PUBLIC SCHOOL GWALIOR

CLASS - I

ACADEMIC SESSION 2021-22

WORKSHEET (SELF –ASSESSMENT)




Subject: Mathematics

Assignment No. : 9

Allotment Date: 15 December 2021

S. NO.	QUESTIONS	MARKS	NATURE
1	<p>Tick(√) the correct word:</p> <p>(i) I sleep in the day / night.</p> <p>(ii) I eat my dinner in the day/night.</p> <p>(iii) I go to school in the morning/evening.</p> <p>(iv) I play in the morning / evening.</p>	4x1=4	Information
2	<p>Which of the following events take longer time?</p> <p>(i) To tie laces / eat breakfast.</p> <p>(ii) To play a cricket match / take a bath.</p> <p>(iii) To fill a bucket / fill a glass.</p> <p>(iv) Reach school by cycle / reach school by car.</p>	4x1=4	Understanding
3	<p>Answer the following questions:</p> <p>(i) Which day comes after Thursday?</p> <p>Ans _____</p> <p>(ii) Which day is always a government holiday?</p>	4X1=4	Interdisciplinary

	<p>Ans _____</p> <p>(iii) Which day comes between Monday and Wednesday?</p> <p>Ans _____</p> <p>(iv) Which day comes before Friday?</p> <p>Ans _____</p>		
--	--	--	--

4	<p>Fill in the blanks :-</p> <p>(i) There are _____ students in my class.</p> <p>(ii) I have _____ brothers.</p> <p>(iii) I am _____ years old.</p> <p>(iv) I have _____ sisters.</p>	4x1=4	Analytical Skill
5	<p>Count and fill in the boxes:</p>  <p>(i) There are _____ books.</p> <p>(ii) There are _____ crayons.</p>	4x1=4	Communication Skills

(iii) There is _____pencil.

(iv) There are _____notebooks.



ARMY PUBLIC SCHOOL GWALIOR

CLASS - I

ACADEMIC SESSION 2021-22

WORKSHEET (SELF –ASSESSMENT)







Subject: EVS

Assignment No. : 9

Allotment Date: 15 December 2021

S.N	QUESTIONS	MARKS	SKILLS/ COMPETENCIES
1.	<p>Tick (✓) the correct options :</p> <p>1. The biggest water body is _____.</p> <p>a. River b. Lake c. Ocean</p> <p>2. We see the blue sky far above the _____.</p> <p>a. Earth b. Sun c. Stars</p> <p>3. _____ cause rain.</p> <p>a. Day b. Clouds c. Night</p> <p>4. We cannot touch, _____ or taste air.</p> <p>a. Feel b. hold c. smell</p>	3X1=3	Information
2	<p>A. Put a tick against the right statement and cross against the wrong statement:</p> <p>1. The Sun rises in the west. _____</p> <p>2. Land covers most part of the earth. _____</p> <p>3. Plants and animals need air to breathe. _____</p>	3X1=3	HOTS Analytical Skill

<p>3.</p>	<p>Match the following:</p> <p>1. Air bubbles </p> <p>2 Sailing </p> <p>3. Inflated tyres </p> <p>4. Storm </p>	<p>4X1=4</p>	<p>Understanding</p>
<p>4</p>	<p>Answer the following :</p> <p>Q 1. Write two uses of air.</p> <p>Ans----- <hr style="border: 0; border-top: 1px solid black; margin: 5px 0;"/> <hr style="border: 0; border-top: 1px solid black; margin: 5px 0;"/></p> <p>Q.2 Why can we not see stars during the day?</p> <p>Ans----- <hr style="border: 0; border-top: 1px solid black; margin: 5px 0;"/></p> <p>Q.3 Write two uses of water</p> <hr style="border: 0; border-top: 1px solid black; margin: 5px 0;"/> <hr style="border: 0; border-top: 1px solid black; margin: 5px 0;"/>	<p>3x2=6</p>	<p>Communication</p> <p>Skills</p>

5

Fill in the blanks:-

4X1=4

Evaluation

1. We keep water in a freezer to make it into _____.
2. Fish _____ in air which is present in water.
3. We see the blue sky far above the _____.
4. Very fast moving air is called _____.



ARMY PUBLIC SCHOOL GWALIOR
CLASS - I



ACADEMIC SESSION 2021-22
WORKSHEET (SELF –ASSESSMENT)

Subject: Computer

Assignment No. : 9

Allotment Date: 15 December 2021

S.NO	QUESTIONS	MARKS	SKILLS/COMPETENCIES
1	<p><u>Tick the correct answer</u></p> <p>1. A mouse is a device. Holding Pointing Typing</p> <p>2. A is used for drawing and painting on computer. Mouse Keyboard CPU</p> <p>3. The small arrow that moves on the screen is called 'Shape' Picture Pointer</p> <p>4. Choose the correct spelling..... Pointing device Ponting devic Poiniting device</p>	4x1=4	Information
2	<p><u>Write 'T' for TRUE and 'F' for FALSE statements</u></p> <p>1. You can draw pictures using a mouse. ()</p> <p>2. Pressing the left mouse button is called single-click. ()</p> <p>3. Pressing and releasing the right mouse button is called double-click. ()</p> <p>4. We keep index finger on the left button. ()</p>	4x1=4	Understanding
3	<p><u>Identify the pictures</u></p>	2x1=2	Analytical Skill





ARMY PUBLIC SCHOOL GWALIOR

CLASS - I

ACADEMIC SESSION 2021-22



WORKSHEET (SELF -ASSESSMENT)



Subject: G.K

Assignment No. : 9

Allotment Date: 15 December 2021

S.NO	QUESTIONS	MARKS	NATURE
1.	<p>Tick the correct answer:</p> <p>Q 1. How many days make a fortnight ? a) 14 b) 15 c) 7</p> <p>Q 2. How many months in a year have 31 days ? a) 8 b) 6 c) 7</p> <p>Q 3. In a leap year ,how many days are there in February ? a) 28 b) 31 c) 29</p> <p>Q 4. In a year, how many months have 30 days ? a) 4 b) 5 c) 6</p>	4x1=4	Information
2.	<p>Identify the pictures of the leaders and write their names</p> <p>.</p> <p></p> <p>_____</p> <p></p> <p>_____</p>	4x1=4	Understanding



3.

Match the following sportspersons with the sports they play



1.

MS Dhoni

badminton



2.

Saina Nehwal

cricket



3.

Mary Kom

lawn tennis







4.

Leander Paes

boxing

4x1=4

Interdisciplinary

5.	<p>Look at the pictures of the flags and write the names of their countries .</p>  _____  _____  _____  _____	4x1=4	HOT
6.	<p>1. Write two sources of water.</p> <p>1. _____ 2. _____</p> <p>2 Write two names of musical instruments which you would like to play.</p> <p>1. _____ 2. _____</p>	2x2=4	HOT
7.	<p>1. On which date do we celebrate New Year's Eve ?</p> <p>_____</p> <p>2. How many weeks are there in a year ?</p> <p>_____</p>	2x1=2	Evaluation



ARMY PUBLIC SCHOOL GWALIOR

CLASS - I

ACADEMIC SESSION 2021-22

WORKSHEET (SELF –ASSESSMENT)



Subject: Health and Physical Education

Assignment No. : 9

Allotment Date: 15 December 2021

S.no	Questions	Marks	Nature
1.	Fill in the blacks Water helps in maintaining of body _____. a) Power b) Temperature c) Both A and B d) None of the above.	10x1=10 3x1=3	Understanding
2.	Water also helps to excrete _____ out of body. a) Nutrients b) Fats c) Waste d) Proteins.		Understanding
3.	Water also maximizes _____ performance. a) Physical b) Metal c) Both A and B d) None of the above.		Informative
4.	True and False Saliva created with the help of water.	3x1=3	informative
5.	Water lubricates joints.		Understanding
6.	We need more water in hot climate.		Understanding
7.	MCQ's Water protects our. a) Kidneys	4x1=4	Informative

	<p>b) Rids c) Spinal Cord d) Liver.</p>		
8.	<p>When our body need more water?</p> <p>a) More physically active b) Running a fever c) Having diarrheal or vomiting d) All of the above.</p>		Understanding
9.	<p>Water keeps our body on _____ temperature.</p> <p>a) High b) Normal c) Low d) None of the above.</p>		Informative
10.	<p>We get rid of waste through Which process?</p> <p>a) Urination b) Perspiration c) Bowel d) All of the above</p>		Informative



ARMY PUBLIC SCHOOL GWALIOR

CLASS - I

ACADEMIC SESSION 2021-22

WORKSHEET (SELF –ASSESSMENT)



Subject: Discipline

Assignment No. : 9

Allotment Date: 15 December 2021

S.NO	QUESTIONS	MARKS	SKILLS/COMPETENCIES
1.	Fill in the blanks i. Say please and _____. (thank you/ please) ii. Be _____ (polite/humble) iii. Raise your _____ (hand/voice) iv. Follow rules. (rule/code) v. Share with _____. (others/more) vi. Take _____. (turns/pride) vii. We must respect our _____. (parents/toys) viii. We must take care of our _____ (belongings/ games) ix. We must always _____ elders. (respect/take care) x. Give respect _____ respect. (get/have)	10	Knowing and Understanding



ARMY PUBLIC SCHOOL GWALIOR

CLASS - I

ACADEMIC SESSION 2021-22

WORKSHEET (SELF –ASSESSMENT)




Subject: Music (Dance)

Assignment No. : 9

Allotment Date: 15 December 2021

S.no.	Answer the following questions:	Marks	Skills
1.	Who is the famous dancer of Kathak? a. Rukmini Devi b. Pandit Birju Maharaj c. None of the above	1	Informative
2.	Birju Maharaj has his own school of? a. Dancing b. Singing c. Painting	1	Informative
3.	Guru Bipin Singh is a famous dancer of which dance? a. Manipuri b. Odissi c. Sattriya	1	Informative
4.	Who is known as the father of Manipuri dance? a. Guru Bipin Singh b. Pandit Birju Maharaj c. None of the above	1	Informative
5.	Sonal Mansingh is a famous dancer of? a. Odissi b. Kathakali c. Mohiniyattam	1	Informative
6.	Sonal Mansingh is _____ women artist to win 'Balasaraswati'. a. 2 nd b. 3 rd c. 1 st	1	Informative
7.	Mallika Saabhai is a famous dancer of? a. Bharatanatyam b. Kathak c. Kuchipudi	1	Informative
8.	Mallika Sarabhai is a natural dancer and famous _____ dancer of India. a. Classical b. Western c. None of the above	1	Informative
9.	Which dancer practices Hindustani Classical music? a. Pandit Birju Maharaj	1	Informative

	b. Mallika Sarabhai c. None of the above		
10.	Guru Bipin Singh practiced dancing and _____? a. Painting b. Singing c. None of the above	1	Informative



ARMY PUBLIC SCHOOL GWALIOR

CLASS - I

ACADEMIC SESSION 2021-22

WORKSHEET (SELF -ASSESSMENT)



Subject: Music (Instrumental)

Assignment No. : 9

Allotment Date: 15 December 2021

S. No	Answer the following questions:	Marks	Skills
i)	How many matra are there in Dadra Taal? a. Six b. Eight c. Nine	1	Informative
ii)	Dadra taal is played with which singing style? a. Thumari b. Hori c. Gajal	1	Informative
iii)	On what matra is it tali in Dadra Tal? a. One b. Two c. Three	1	Informative
iv)	How many khali are there in Dadra Tal? a. one b. two c. three	1	Informative
(i)	How many tali are there in Dadra Tal? A. One B. Two C. Three	1	Informative
(ii)	How many vibhag are there in Dadra Tal? a. One b. Two c. None of the above	1	Informative
(iii)	How much matra is there in each vibhag in Dadra Tal ? a. Three b. Four c. Five	1	Informative
(iv)	Into how many parts is the matra of Dadra Tal divided? (i) Two (ii) Three (iii) Four	1	Informative
(v)	In what type of lay is Dadra Taal played? a. Vilambit b. Madya c. Drute	1	Informative

(vi)	On what matra is it khali in Dadra Tal ? 1. Four 2. Five 3. Six	1	Informative
------	--	---	-------------



ARMY PUBLIC SCHOOL GWALIOR

CLASS - I

ACADEMIC SESSION 2021-22

WORKSHEET (SELF –ASSESSMENT)



Subject: Library

Assignment No. : 9

Allotment Date: 15 December 2021

S.NO	QUESTIONS	MARKS	NATURE
	Exercises on the basis of the story “everything in its place” given in the notes.		
1	Put a tick mark against correct statements : Ajai keeps all things in proper places .	01	Comprehension
2	He faces difficulties while preparing for school.	01	Analysis
3	His mother is not happy with him.	01	Analysis
4	He helps in house- hold work .	01	Understanding
5	He keeps things of others also in proper places .	01	Analysis
6	He has to face difficulty in finding his things.	01	Understanding
7	Fill in the blanks : Ajai is a boy .	01	Understanding
8	Ajai his mother.	01	Analysis
9	It saves him a lot of and keeps his house	01	Analysis
10	He keeps all his things	01	Analysis