



ARMY PUBLIC SCHOOL GWALIOR
CLASS -IV
ACADEMIC SESSION 2021-22
WORKSHEET (SELF –ASSESSMENT)



Subject: English

Assignment No. : 7

Allotment Date: 15 October 2021

S. NO.	QUESTIONS	MARKS	NATURE
1	Who was knocking at the door? Which creatures could be heard knocking? <hr/> <hr/> <hr/> <hr/> <hr/> <hr/>	2	Information
2	Complete the following sentences using words from the chapter, "Who is the Greatest" (i) Cat dropped the _____ when she saw _____ (ii) The farmer _____ healed the wounds of the mouse and out the mouse into a _____.	2	Understanding
3	What are the various voices other than human beings who seem to knock at the door? Can it be wind, insect or some animal? Write any two examples. <hr/> <hr/> <hr/> <hr/> <hr/> <hr/> <hr/>	2	Interdisciplinary

4	<p>Make a sentence using the following words:</p> <p>(i) Wee</p> <p>_____</p> <p>_____</p> <p>(ii) Nought</p> <p>_____</p> <p>_____</p>	2	Analytical Skill
5	<p>Was farmer a kind hearted man? What would you do if you find a wounded animal in your locality?</p> <p>_____</p> <p>_____</p> <p>_____</p> <p>_____</p> <p>_____</p> <p>_____</p>	2	Critical Thinking and Problem Solving
6	<p>At how many places did the farmer go to find the "Greatest"? Who was found to be the greatest?</p> <p>_____</p> <p>_____</p> <p>_____</p> <p>_____</p> <p>_____</p> <p>_____</p> <p>_____</p> <p>_____</p> <p>_____</p>	3	HOT
7	<p>Imagine you are sun and you are telling clouds that you do not like when they come in front of you because sun cannot shine as bright as it is, when clouds come in front of it. Then clouds reply to you that it is necessary to maintain the balance between the hot and cold climatic cycle. Write a dialogue between the sun and clouds.</p> <p>Sun: _____</p> <p>_____</p>	3	Communication skills

	Clouds: _____ _____ Sun: _____ _____		
8.	Write a letter to your grandmother telling her about your performance in the half yearly examinations conducted online. Tell her that you will teach her also how to work online, when you visit her next time.	4	Evaluation



ARMY PUBLIC SCHOOL GWALIOR
CLASS -IV
ACADEMIC SESSION 2021-22
WORKSHEET (SELF -ASSESSMENT)



Subject: Hindi
Allotment Date: 15 October 2021

Assignment No. : 7

क्र०	प्रश्न	अंक	प्रश्नकाप्रकार
1.	<p>प्र०1. निम्नलिखित प्रश्नों के सही उत्तर के सामने सही का निशान लगाओ :</p> <p>क. पचमढ़ी में कौन - सी नदी बहती है ?</p> <p>बेतवा <input type="checkbox"/></p> <p>देनवा <input type="checkbox"/></p> <p>नर्मदा <input type="checkbox"/></p> <p>ख. धूपगढ किस पर्वत श्रेणी की ऊँची चोटी है ?</p> <p>सतपुड़ा <input type="checkbox"/></p> <p>विध्याचल <input type="checkbox"/></p> <p>अरावली <input type="checkbox"/></p> <p>ग. बीफाल को क्या कहते हैं ?</p> <p>सोन प्रताप <input type="checkbox"/></p> <p>हरीक प्रताप <input type="checkbox"/></p> <p>रजत प्रताप <input type="checkbox"/></p>	3	बोधात्मक
2.	<p>प्र०2. निम्न शब्दों के अर्थ लिखो :</p> <p>क. आकर्षक - _____</p> <p>ख. मनोरम - _____</p> <p>ग. सँवार - _____</p>	3	ज्ञानात्मक

3.	<p>प्र०3. सही शब्द चुनकर खाली स्थान में भरो :</p> <div style="border: 1px solid black; padding: 5px; width: fit-content; margin: 10px auto;">आकर्षित , लंबाई , स्थापना , सौंदर्य</div> <p>क. गुफा का द्रश्य बहुत ही _____ था । ख. इस पुल की _____ लगभग एक किलोमीटर है । ग. आज मंदिर में मूर्ति की _____ है । घ. हिमालय का _____ दर्शनीय है ।</p>	4	रचनात्मक
4.	<p>प्र०4. बहुवचन लिखो -</p> <p>क. घंटी - _____ ख. मूर्ति - _____ ग. सीडी - _____ घ. गुफा - _____</p>	4	सूचनात्मक
5.	<p>प्र०5. निम्नलिखित प्रश्नों के उत्तर लिखो -</p> <p>प्र० क. महादेव गुफा की क्या विशेषता है ? उ० क. _____ _____</p> <p>प्र० ख. पतंग ने अपना रूप सजाने के लिए किस - किसने क्या - क्या लिया है ? उ० ख. _____ _____</p> <p>प्र० ग. पतंग को सैलानी क्यों कहा है ? उ० ग. _____ _____</p>	3	विश्लेषणात्मक
6.	<p>प्र०6. नीचे लिखे शब्दों के समानार्थी शब्द चुनकर लिखो -</p> <p>क. बादल - _____ ख. गगन - _____ ग. धरती - _____</p>	3	उच्चस्तरीयचिंतन



ARMY PUBLIC SCHOOL GWALIOR
CLASS -IV
ACADEMIC SESSION 2021-22
WORKSHEET (SELF –ASSESSMENT)



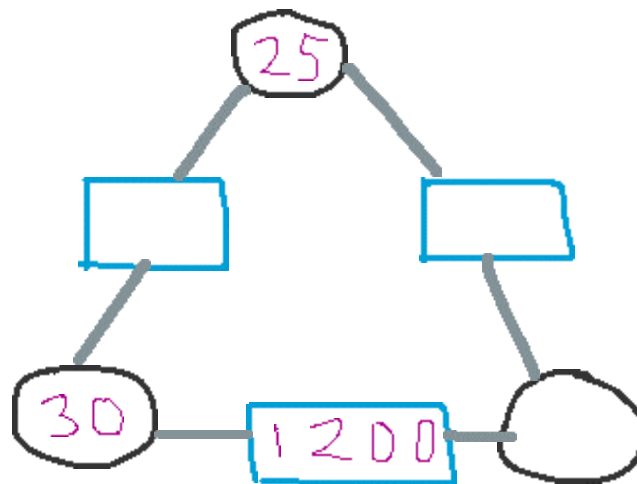
Subject: Mathematics
Allotment Date: 15 October 2021

Assignment No. : 7

S. NO.	QUESTIONS	MARKS	NATURE
1	Fill in the blanks: (i) 1 litre= _____ milliliters. (ii) 5,15,25,35,45,55,_____,_____,_____	2x1=2	Understanding
2	Write 'True' or 'False': (i) Convert $\frac{1}{4}$ kg =350g. () (ii) Convert $\frac{2}{5}$ kg = 500g. ()	2x1=2	HOTS
3	Tick the correct answer from the given options: (i) 25 L 30 mL is equivalent to _____ (a) 25300 mL (b) 25003 mL (c) 25030 mL (d) 2530 mL (ii) 12 L 500 mL oil is put in 5 bottles. Each bottle contains _____ (a) 2 L 50 mL (b) 2 L 500 mL (c) 2 L 5 mL (d) 2 L 300 mL (iii) Multiply: 9L 30 mL by 11 = _____ (a) 98 L 330 mL (b) 99 L 330 mL (c) 99 L 430 mL	5x1=5	Critical thinking

	<p>(d) 98 L 430 mL</p> <p>(iv) 25 L 40 mL by 4 = _____</p> <p>(a) 6L 260 mL (b) 7L 260 mL (c) 6L 660 mL (d) 7L 560 mL</p> <p>(v) 1 kg rice costs Rs 47.20. Find the cost of 250 g of rice _____</p> <p>(a) Rs 12.80 (b) Rs 13.20 (c) Rs 11.80 (d) Rs 13.30</p>		
4	<p>Solve the following questions: -</p> <p>Solve the following:</p> <p>(i) Add: 10 L 900mL and 12 L 500mL</p> <p>(ii) Subtract: 17 L 840 mL from 30 L</p> <p>(iii) Multiply: 33 kg 60 g by 4</p> <p>(iv) Divide: 49 kg 20g by 8</p> <p>(v) Check the answer by casting 9:</p> $ \begin{array}{r} 7835 \\ + 4906 \\ \hline \hline \end{array} $	5x1=5	Interdisciplinary
5	<p>Solve the following questions:</p> <p>(i) Sunita bought 25 kg 850 g and sold $\frac{1}{5}$ of them. How much apples are left with her?</p> <p>(ii) If the cost of 1 litre of a cough syrup is Rs 480.40, find the cost of:</p> <p>(a) 500mL (b) 250 mL (c) 200mL</p> <p>(iii) Study the pattern in the given figure and the</p>	2x3 =6	Problem Solving

complete others.





ARMY PUBLIC SCHOOL GWALIOR
CLASS -IV
ACADEMIC SESSION 2021-22
WORKSHEET (SELF –ASSESSMENT)



Subject: EVS
Allotment Date: 15 October 2021

Assignment No. : 7

S. NO.	QUESTIONS	MARKS	NATURE
1	Fill in the blanks: i. SEWA works for the welfare of ii. Railway stations and parks areproperty. iii. The first municipal government was started in	3x1=3	Information
2	Write True or False: i. There are five levels of government in India. () ii. We should not cut the trees. () iii. RWAs maintains the cleanliness of the colony. ()	3x1=3	Understanding
3	Choose the correct option: i. Which one is the women’s organization? a) CRY b) WWF c) UNICEF ii. Name the government that looks after the important matters of the country? a) State government b) central government c) Municipal Corporation iii. They provide playground for the children to play games..... a) school b) market c) banks	3x1=3	Interdisciplinary
4	Define the terms: i. Tax ii. Pavement	2x2=4	Analytical Skill
5	Why it is important for us to vote ?	3	HOT

	<hr/> <hr/> <hr/> <hr/> <hr/>		
6	Write two reasons why it is good to have roads lined with trees ? <hr/> <hr/> <hr/> <hr/> <hr/>	2	Critical Thinking and Problem Solving
7	What are the benefits of having a gram panchayat ? <hr/> <hr/> <hr/> <hr/> <hr/>	2	Evaluation



ARMY PUBLIC SCHOOL GWALIOR
CLASS -IV
ACADEMIC SESSION 2021-22
WORKSHEET (SELF –ASSESSMENT)



Subject: Computer
Allotment Date: 15 October 2021

Assignment No. : 7

S. No.	Questions	Marks	SKILLS/ COMPETENCIES
1	Define: a) Booting b) Program Window	2 x 2=4	Understanding
3	Answer the following question a) What is Windows 7? Write any one function of it. b) What does a Taskbar contain and where is it located? c) What is the use of Start Button?	2 x 3 =6	HOT



ARMY PUBLIC SCHOOL GWALIOR
CLASS -IV
ACADEMIC SESSION 2021-22
WORKSHEET (SELF –ASSESSMENT)



Subject: G.K

Assignment No. : 7

Allotment Date: 15 October 2021

S. NO.	QUESTIONS	MARKS	SKILLS / COMPETENCIES
1.	Fill in the blanks: i.is the Chinese way of fighting without arms. ii. Anacondas are found incontinent. iii. The New year of Parsis are called.....	3x1=3 marks	Understanding, Information, interdisciplinary
2.	State True / False: i. Dhaka is the capital of Pakistan. () ii. The Commonwealth Games held in every four years. () iii. Brazil has won the FIFA world cup five times. ()	3x1=3 marks	Information, Understanding, Analytical skills,
3.	Tick the correct answer: i. What is the natural habitat of Rhino? a) grassland b) pond c) cage ii. Which fish looks like a snake? a) whale b) eel c) shark	2x1=2 marks	Information, Understanding Interdisciplinary
4.	Which animal is also named as painted dogs? ----- -----	1 marks	Information, Understanding
5.	Who invented television ? -----	1 marks	Information








ARMY PUBLIC SCHOOL GWALIOR
CLASS -IV
ACADEMIC SESSION 2021-22
WORKSHEET (SELF –ASSESSMENT)

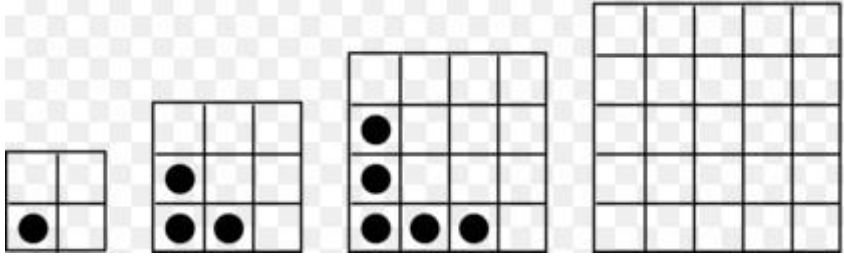



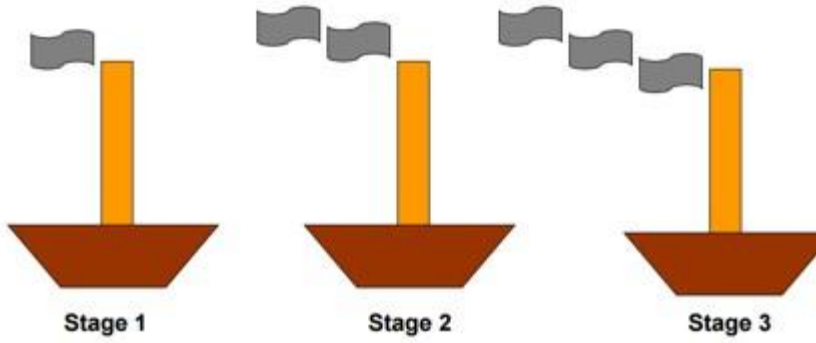
Subject: Art Education
Allotment Date: 15 October 2021

Assignment No. : 7

S.NO	QUESTIONS	MARKS	SKILLS/ COMPETENCIES
1.	<p>Principle of art which refers to the decoration of the surface of art with repeated units.</p> <ul style="list-style-type: none">i. Contrastii. Rhythmiii. Movementiv. Pattern	1	Creativity
2.	<p>This artwork illustrates this Element of Art:</p>  <ul style="list-style-type: none">i. Patternii. Coloursiii. Perspectiveiv. Variety	1	Creativity
3.	<p>Colours and shapes that repeat in below image are called_____.</p> 		Creativity

	<ul style="list-style-type: none"> i. A pattern. ii. A dash. iii. A mood. iv. Exotic. 		
4.	<p>The pattern in this image below is made of?</p>  <ul style="list-style-type: none"> i. Geometric forms ii. Geometric shapes iii. Organic shapes iv. Organic forms 	1	Creativity
5.	<p>Is repetition regular or different patterns</p> <ul style="list-style-type: none"> i. Regular. ii. Different 	1	Creativity
6.	<p>The sequence of figures shows a pattern. If the pattern repeats, how many small squares will figure 5 have?</p>  <ul style="list-style-type: none"> i. 12 small squares ii. 8 small squares iii. 9 small squares iv. 10 small squares 		Creativity
7.	<p>The sequence of figures shows a pattern. If the pattern repeats, how many bubbles will Stage 6 have?</p> 	1	Creativity

	<ul style="list-style-type: none"> i. 6 bubbles ii. 4 bubbles iii. 5 bubbles iv. 7 bubbles 		
<p>8.</p>	<p>The sequence of figures shows a pattern. If the pattern repeats, how many small circles will figure 4 have?</p>  <ul style="list-style-type: none"> i. 7 small circles ii. 5 small circles iii. 9 small circles iv. 6 small circles 	<p>1</p>	<p>Creativity</p>
<p>9.</p>	<p>The sequence of 3 figures shows a pattern. If the pattern repeats, how many triangles will the figure 5 have?</p>  <ul style="list-style-type: none"> i. seven triangles ii. six triangles iii. four triangles iv. five triangles 	<p>1</p>	<p>Creativity</p>
<p>10.</p>	<p>The sequence of figures shows a pattern. If the pattern repeats, how many smoke signs will Stage 4 have?</p>	<p>1</p>	<p>Creativity</p>



- i. 3 smoke signs
- ii. 4 smoke signs
- iii. 5 smoke signs
- iv. 6 smoke signs



ARMY PUBLIC SCHOOL GWALIOR
CLASS -IV
ACADEMIC SESSION 2021-22
WORKSHEET (SELF –ASSESSMENT)



Subject: Work Education
Allotment Date: 15 October 2021

Assignment No. : 7

S.NO	QUESTIONS	MARKS	SKILLS/ COMPETENCIES
1.	What is the purpose of rangoli? i. Decoration ii. Bring good luck iii. Desperation iv. Sorrow	1	Creativity
2.	What designs are used in a rangoli ? i. Flowers ii. Lamps iii. Geometric iv. All of the above	1	Creativity
3.	What is it made of rangoli.? i. Rice powder ii. Vermillion iii. Tumeric iv. All of the above	1	Creativity
4.	Where did it originate ? i. Europe ii. Asia iii. India	1	Creativity
5.	Is Rangoli art permanent? i. a.True ii. b.False	1	Creativity
6.	How many types of rangoli are there? i. Three ii. One iii. Two.	1	Creativity

7.	What's another word for rangoli?	1	Creativity
8.	What is the meaning of word rang in Rangoli?	1	Creativity
9.	Who started rangoli?	1	Creativity
10.	1. What are the common rangoli designs and motifs?	1	Creativity



ARMY PUBLIC SCHOOL GWALIOR
CLASS -IV
ACADEMIC SESSION 2021-22
WORKSHEET (SELF –ASSESSMENT)



Subject: Music (Instrument)

Assignment No. : 7

Allotment Date: 15 October 2021

S.No	Answer the following questions:	Marks	Skills
1.	What are the types of rhythm (lay) in classical music? i. One ii. Two iii. Three	1	Informative
2.	When the rhythm (lay) is slow, it is called? i. Vilambit ii. Chalat iii. Drut	1	Informative
3.	When the rhythm (lay) is simple, it is called? i. Drut ii. Madhya iii. None of the above	1	Informative
4.	When the rhythm (lay) is faster than normal, it is called? i. Drut ii. Madhya iii. Vilambit	1	Informative
5.	What is called rhythm (lay) in music? i. To the same speed ii. To vowels swar iii. None of them	1	Informative
6.	According to Sangeet Ratnakar, which varna groups are called Alankaras? i. Regular varna group ii. regular lay iii. regular rhythm	1	Informative
7.	What is the first step in the learning of music? i. Alankar ii. Sargam iii. Rhythm	1	Informative
8.	What is Alankar number 1(one)? i. Sa, re, ga, ma, pa, dha, ni, sa, ii. Sasa, rere, gaga, mama, papa, dha, dha, nini, sasa, iii. None of them	1	Informative
9.	What is Alankar number 4(four)? i. Sarega, regama, gamapa, mapadha, padhani, dhanisa, ii. Saregama, regamapa, gamapadha, mapadhani, padhanisa, iii. None of them.	1	Informative
10.	What is speed in music called? i. Swar ii. rhythm (Taal) iii. Lay	1	Informative




ARMY PUBLIC SCHOOL GWALIOR
CLASS -IV
ACADEMIC SESSION 2021-22
WORKSHEET (SELF –ASSESSMENT)



Subject: Music (Dance)
Allotment Date: 15 October 2021

Assignment No. : 7

S.NO	Questions	Marks	Skills
1.	Dance patterns are also known as i. Dance moves ii. Dance iii. None of them	1	Informative
2.	Dance pattern is combination of what? i. Quick and slow ii. Steady iii. None of them	1	Informative
3.	In dance pattern legs are usually what? i. Bent ii. Straight iii. Folded	1	Informative
4.	In dance patterns jumps are _____ i. Low ii. High iii. Medium	1	Informative
5.	Footwork goes according to what in dance pattern? i. Rhythm ii. Song iii. None of the above	1	Informative
6.	Styles of patterns in classical dance are very? i. Easy ii. Different iii. Complicated	1	Informative
7.	Torso, face, arms and hand are extremely i. Active ii. Less active iii. None of them	1	Informative
8.	How many gestures are there in dance? i. 14 ii. 13 iii. 10	1	Informative
9.	This dance form is delicate and elegant i. Kathakali ii. Kuchipudi iii. Bharatanatyam	1	Informative
10.	Bharatanatyam is traditionally performed by whom? i. Women ii. Men iii. Children	1	Informative



ARMY PUBLIC SCHOOL GWALIOR
CLASS- IV
ACADEMIC SESSION 2021-22
WORKSHEET (SELF- ASSESSMENT)



Subject: Health and Physical Education
Allotment Date: 15 October 2021

Assignment No. : 7

S. No	Question	Marks	SKILLS / COMPETENCIES
	Fill in blanks:	10 x 1 = 10	
1.	_____ is the most common and perceivable effect of eating junk food i. Fever ii. Malaria iii. Obesity iv. None of the above	3x1=3	Understanding
2.	By eating junk food, we get the problem of _____. i. Learning ii. Memory problem iii. Both A and B iv. None of the above		Informative
3.	_____ are the way of getting fuel for body. i. Food ii. Nutrients iii. Junk food iv. Both A and B		Informative
	True and false		
4.	Junk food is rich in proteins		
5.	Junk food and wholesome food are same	3x1=3	Understanding
6.	We should have a balanced diet		Analytic skill Informative
	MCQs		
7.	Why human suffer from Loss of appetite and digestion? i. They eat healthy food ii. The don't have balanced diet iii. They eat junk food iv. Both B and C	4x1=4	Understanding

8.	<p>What is an important component of nutrients?</p> <ul style="list-style-type: none"> i. Water ii. Pizza iii. Coca cola iv. Burger 		Informative
9.	<p>What we need to replace in our bodies with new supply every day?</p> <ul style="list-style-type: none"> i. Nutrients ii. Carbohydrate iii. Proteins iv. Nothing 		Understanding
10.	<p>We need nutrients in our body?</p> <ul style="list-style-type: none"> i. For healthy functioning of body ii. For growth iii. For healthy lifestyle iv. All of the above 		informative



ARMY PUBLIC SCHOOL GWALIOR
CLASS -IV
ACADEMIC SESSION 2021-22
WORKSHEET (SELF –ASSESSMENT)



Subject: Discipline
Allotment Date: 15 October 2021

Assignment No. : 7

S.No	Questions	Marks	Skills/ Competencies
1.	<p>Fill in the blanks-</p> <p>i. It is so important to take care of our _____</p> <p>ii. It is our _____ health.</p> <p>iii. It is our _____ health.</p> <p>iv. It is taking care of our _____.</p> <p>v. Taking care of your _____.</p> <p>vi. We can _____our friends plants on their birthdays.</p>	03	Knowledge & Understanding
2.	<p>Choose the correct answers-</p> <p>How can we take care of our heath? Choose all that apply-</p> <p>i. By being active- Playing outside home on playground or in park</p> <p>ii. You can ride by cycle to stay fit and healthy</p> <p>iii. Eating healthy food each day</p> <p>iv. Eating less of maggi, pasta, pizza and burger</p> <p>v. Eating salads and fruits daily</p> <p>vi. By helping mom in kitchen or small work like watering plants</p>	03	
3.	<p>True and False</p> <p>i. We must take care of our</p>		Thinking and Writing Skills

	<p>eyes. ii. We must remain attentive during on line classes.</p>	01	
4.	<p>How can we take care of our mind- Choose all that apply-</p> <p>i. Reading good story books helps us to develop our thinking power ii. Watching good stuff on TV also helps us develop our thinking ability. iii. Our mind does not get good message when we watch a video where people shout or fight; so we should not watch such videos.</p>	01	
5.	<p>How can we take care of our environment- Choose all that apply</p> <p>i. We can plant more plants ii. Gift our friends plants on their birthdays. iii. Plant trees on our birthday. iv. Use less plastic v. Keeping environment clean</p>	02	



ARMY PUBLIC SCHOOL GWALIOR
CLASS -IV
ACADEMIC SESSION 2021-22
WORKSHEET (SELF –ASSESSMENT)



Subject: Library
Allotment Date: 15 October 2021

Assignment No. : 7

S.NO	QUESTIONS	MARKS	SKILLS/ COMPETENCIES
	Answer the following questions on the basis of the story ' God loves us' given in the notes.		
1	Why does god love us all ?	01	Comprehension
2	What does god give to those who love his creatures ?	01	Analysis
3	What kind of a person was Abu bin Adam ?	01	Comprehension
4	What did Abu see in his his room at midnight ?	01	Comprehension
5	What was the angel doing ?	01	Understanding
	FILL IN THE BLANKS	01	Thinking
6	God loves all his		
7	All are..... in this eyes	01	Cognitive skills
8	One night Abu was..... in his room.	01	Analysis
9	Abu saw a dazzlingin one	01	Critical analysis
10	Abu's name was on the of the list	01	Understanding