



**ARMY PUBLIC SCHOOL GWALIOR**  
**CLASS -V**  
**ACADEMIC SESSION 2021-2022**  
**WORKSHEET (SELF ASSESSMENT)**



**Subject: English**

**Assignment No. : 6**


**Allotment Date: 15 September 2021**

S. NO.	QUESTIONS	MARKS	NATURE
1	How old was Anne Frank when the World War II broke out?  Ans _____  -----	2	Information
2	What were the terms and conditions of the game of dice that the two sets of cousins had played?  -Ans -----  -----	2	Understanding
3	Mention the role and importance of peace in our world (in your own words).  Ans	2	Interdisciplinary

4	<p>Make two sentences each of the following words used as noun and verb.</p> <p>1. present</p> <p>2. wish</p>	2	Analytical skill										
5	<p>Match the following phrasal verbs with their meanings:</p> <table border="0" style="width: 100%;"> <thead> <tr> <th style="text-align: left;">Words</th> <th style="text-align: left;">Meanings</th> </tr> </thead> <tbody> <tr> <td>1. look out</td> <td>start to fly</td> </tr> <tr> <td>2. take off</td> <td>return from a journey</td> </tr> <tr> <td>3. run away</td> <td>be careful</td> </tr> <tr> <td>4. get back</td> <td>escape</td> </tr> </tbody> </table>	Words	Meanings	1. look out	start to fly	2. take off	return from a journey	3. run away	be careful	4. get back	escape	2	Critical Thinking and Problem Solving
Words	Meanings												
1. look out	start to fly												
2. take off	return from a journey												
3. run away	be careful												
4. get back	escape												
6	<p>What role does cleanliness play in your life? (in your own words).</p>	3	HOT										

7	<p>Answer the following questions briefly.</p> <p>1. What are some of the virtues that the people of a nation must have in order for it to achieve greatness ?</p> <p>Ans.</p> <p>2. Why is the Lane of Magic called so?</p> <p>Ans.</p>	4	Evaluation

<b>8</b>	<p>Describe how you felt when your friend won some contest.</p> <p>Use past tense only.</p>	<b>3</b>	<b>Communication Skills</b>



ARMY PUBLIC SCHOOL GWALIOR  
CLASS -V  
ACADEMIC SESSION 2021-2022  
WORKSHEET (SELF ASSESSMENT)



Subject: Hindi

Assignment No. : 6

Allotment Date: 15 September 2021

क्र०	प्रश्न	अंक	प्रश्नका प्रकार
1.	<p>प्र०1. निम्नलिखित प्रश्नों के सही उत्तर के सामने सही का निशान लगाओ :</p> <p>1. ' गुज़र गए उनकी दुनिया के मेले - ठेले ' का अर्थ है -</p> <p>क. पहले की तरह उनके आस - पास लोगों की भीड़ नहीं रही। <input type="checkbox"/></p> <p>ख. उनकी खुशियों के दिन बीत गए हैं। <input type="checkbox"/></p> <p>ग. उनका व्यवसाय चौपट हो गया है। <input type="checkbox"/></p> <p>ख ' चूको मत ' से कवि का क्या अर्थ है ?</p> <p>क. जब से उनकी उम्र बढ़ी है। <input type="checkbox"/></p> <p>ख. जब से दादी जी नहीं रहीं। <input type="checkbox"/></p> <p>ग. जब से कोई उन्हें आवाज़ नहीं देता। <input type="checkbox"/></p> <p>ग. चूको मत से कवि का अर्थ है ?</p> <p>क. और देर न करो। <input type="checkbox"/></p> <p>ख. और गलती न करो। <input type="checkbox"/></p> <p>ग. और नाराज़ मत रहो। <input type="checkbox"/></p>	3	बोधात्मक
2.	<p>प्र०2. निम्न शब्दों के अर्थ लिखो :</p> <p>1. मूढ़ - _____</p> <p>2. गुज़र गए - _____</p> <p>3. गुमसुम - _____</p>	3	ज्ञानात्मक
3.	<p>प्र०3. निम्न शब्दों के विपरीतार्थी शब्द लिखिए -</p> <p>1. आज - _____</p> <p>2. चतुर - _____</p> <p>3. अपना - _____</p>	4	सूचनात्मक

	4. खुशी - _____		
4.	<p>प्र०4. सर्वनाम के सही रूप से वाक्य पूरे करो –</p> <div style="border: 1px solid black; padding: 5px; width: fit-content; margin: 10px auto;"> कौन मैं हम तुम </div> <ol style="list-style-type: none"> <li>1. दरवाज़े पर _____ खड़ा है ?</li> <li>2. _____ स्कूल नहीं जाऊँगा ।</li> <li>3. _____ सब मैदान में खेलेंगे ।</li> <li>4. अब _____ क्या करोगे ?</li> </ol>	4	रचनात्मक
5.	<p>प्र०5. निम्नलिखित प्रश्नोंके उत्तर लिखो -</p> <p>प्र०1. दादा जी को क्या हुआ है ? उ०1. _____</p> <p>प्र०2. दादा जी क्या चाहते हैं ? उ०2. _____</p> <p>प्र०3. कवि किस बात के लिए आगाह कर रहा है ? उ०3. _____</p>	3	विश्लेषणात्मक
6.	<p>प्र०6. अनेकार्थी शब्दों का वाक्य प्रयोग करिए -</p> <ol style="list-style-type: none"> <li>1. भूल <span style="display: inline-block; vertical-align: middle;">→ भूलने का भाव _____</span> गलती <span style="display: inline-block; vertical-align: middle;">→ _____</span></li> <li>2. कल <span style="display: inline-block; vertical-align: middle;">→ आने वाला दिन _____</span> यंत्र ( मशीन ) <span style="display: inline-block; vertical-align: middle;">→ _____</span></li> <li>3. चोटी <span style="display: inline-block; vertical-align: middle;">→ शिखर _____</span> गुँथे हुए बाल <span style="display: inline-block; vertical-align: middle;">→ _____</span></li> </ol>	3	उच्चस्तरीय चिंतन



**ARMY PUBLIC SCHOOL GWALIOR**  
**CLASS - V**  
**ACADEMIC SESSION 2021-2022**  
**WORKSHEET (SELF ASSESSMENT)**



**Subject: Mathematics**

**Assignment No. : 6**

**Allotment Date: 15 September 2021**

S. NO.	QUESTIONS	MARKS	NATURE
1	<p><b>Fill in the blanks:</b></p> <p>(i) A line has _____ end point. (ii) A _____ can be extended on both sides.</p>	2x1=2	Understanding
2	<p><b>Write 'True' or 'False':</b></p> <p>(i) An angle which measures less than <math>90^\circ</math> is called obtuse angle ( ) (ii) If two lines are at right angles to each other, they are called perpendicular lines. ( )</p>	2x1=2	HOTS
3	<p><b>Tick the correct answer from the given options:</b></p> <p>(i) Add: <math>2080706 + 3887765</math></p> <p>(a) 6868471 (b) 5968471 (c) 5868471</p> <p>(ii) <math>1/7</math> _____ <math>1/9</math></p> <p>(a) &lt; (b) &gt; (c) =</p> <p>(iii) The place value of 5 in 6520619 is _____</p> <p>(a) 50000 (b) 5000</p>	5x1=5	Critical thinking

	<p>(c) 50000</p> <p>(iv) Six tenths in decimal form is _____</p> <p>(a) .006 (b) .6 (c) .06</p> <p>(v) <math>432570 - 87391 = \underline{\hspace{2cm}}</math></p> <p>(a) 345169 (b) 445189 (c) 345179</p>		
<b>4</b>	<p><b>Solve the following questions: -</b></p> <p>Solve the following:</p> <p>(i) Find the LCM of 20,50 (ii) Add: <math>\frac{1}{7} + \frac{1}{14} + \frac{1}{21}</math> (iii) Multiply: <math>\frac{9}{16} \times 12</math> (iv) Add: <math>60 + 63 + 0.8 + 0.005</math> (v) Find all the factors of 54.</p>	<b>5x1=5</b>	Interdisciplinary
<b>5</b>	<p><b>Solve the following questions:</b></p> <p>(i) Arrange the following in descending order: 8775923,878919,2023785,423610 (ii) A shopkeeper bought 775 watches for Rs 724625. What did he pay for a watch? (iii) Use division method to find the HCF of: 198 and 360</p>	<b>2x3 =6</b>	Problem Solving





**ARMY PUBLIC SCHOOL GWALIOR**  
**CLASS -V**  
**ACADEMIC SESSION 2021-2022**  
**WORKSHEET (SELF ASSESSMENT)**



**Subject: EVS**

**Assignment No. : 6**

**Allotment Date: 15 September 2021**

<b>S. NO.</b>	<b>QUESTIONS</b>	<b>MARKS</b>	<b>NATURE</b>
<b>1</b>	Name the trees found in the Himanchal range.	<b>2</b>	Information
<b>2</b>	a) A moving river of ice is called a -----  b) Shimla hill station is found in -----	<b>2</b>	Understanding
<b>3</b>	List two ways by which communicable diseases spread	<b>2</b>	Interdisciplinary
<b>4</b>	Define the terms:  Terrace farming:    Microorganisms:	<b>2x2=4</b>	Analytical Skill

<b>5</b>	Why do we find no trees or plants in Himadri?	3	HOT
<b>6</b>	What is a magnifying glass?	2	Critical Thinking and Problem Solving
<b>7</b>	Name the water bodies that surround India	2	Evaluation
<b>8</b>	What is a food chain?	3	Communication Skills



**ARMY PUBLIC SCHOOL GWALIOR**  
**CLASS -V**  
**ACADEMIC SESSION 2021-2022**  
**WORKSHEET (SELF ASSESSMENT)**



**Subject: Computer**

**Assignment No. : 6**

**Allotment Date: 15 September 2021**

S. NO.	QUESTIONS	MARKS	NATURE
1.	Fill in the blanks:  1. Rectangle is used to show the _____.  2. The file/folder you delete is stored in _____.	2x1=2	Information
2.	<b>Write True or False:</b>  1. A file can have any number of folders in it. ( )  2. The flowchart helps in finding out errors( )	2x1=2	Understandin g
3.	<b>Choose the correct answer: -</b>  1. The document you create is called Folder	2x1=2	HOT





**ARMY PUBLIC SCHOOL GWALIOR**  
**CLASS -V**  
**ACADEMIC SESSION 2021-2022**  
**WORKSHEET (SELF ASSESSMENT)**



Subject: G.K

Assignment No. : 6

Allotment Date: 15 September 2021

S. NO.	QUESTIONS	MARKS	NATURE
1.	<b>Fill in the blanks:</b> (a) .....is the closest star to our solar system. (b) The largest member of deer family found in the Northern Hemisphere is..... (c) .....is known as 'Flying Sikh'. (d) .....was the first Indian woman to reach the final of an Olympic athletics event. (e) .....founded the Bachpan Bachao Andolan. (f) Valmiki wrote the .....	6X0.5=3 marks	Understanding, Information, interdisciplinary
2.	<b>State True / False:</b> (a) India is the largest country in terms of population. ( ) (b) Netaji Subhash Chandra Bose International Airport is in Kolkata. ( ) (c) Tanjore painting originated in Odisha. ( ) (d) Phulkari is the famous form of embroidery from Delhi. ( ) (e) River Ganges originates in Uttarakhand. ( ) (f) Indian gooseberry is rich source of vitamin C. ( )	6X0.5=3 marks	Information, Understanding, Analytical skills,
3.	<b>Tick the correct answer:</b> (a) Who started the car company Ford? (i) John Dewey (ii) Henry Ford (iii) Carl Lewis  (b) Which game is played by Prakash Padukone? (i) football (ii) swimming (iii) badminton  (c) Which state of India is famous for Madhubani painting? (i) Punjab (ii) Bihar (iii) Tamilnadu	4X0.5=2 marks	Information, Understanding Interdisciplinary

	<p>(d) What is the traditional system of Indian medicine called?</p> <p>(i) Ayurveda</p> <p>(ii) Allopathy</p> <p>(iii) Homeopathy</p>		
4.	<p>Which is the smallest country in the world ?</p> <p>-----</p> <p>-----</p>	1 marks	Information, Understanding
5.	<p>On which continent will you find the rare black spider monkey ?</p> <p>-----</p>	1 marks	Information



**ARMY PUBLIC SCHOOL GWALIOR**  
**CLASS -V**  
**ACADEMIC SESSION 2021-2022**  
**WORKSHEET (SELF ASSESSMENT)**





**Subject: Art Education**



**Assignment No. : 6**


**Allotment Date: 15 September 2021**


<b>S.NO</b>	<b>QUESTIONS</b>	<b>MARKS</b>	<b>NATURE</b>
1.	Warli painting is a _____. A. White paint on red background B. Simple shapes and lines C. People dancing	1X0.5=0.5	Information
2.	White paint created in Warli Art using _____. A. Grounding rice into powder B. Mixing flour and salt C. Using acrylic or tempera D. Using chalk and water	1X0.5=0.5	Understand ing
3.	The softer the lead, the _____ the mark will be. A. Darker B. Lighter C. Wider D. Softer	1X0.5=0.5	Information

4.	<p>_____ are the basic Shapes</p> <p>A. Triangle, oval, square</p> <p>B. Square, rectangle, Circle</p> <p>C. Circle, oval, triangle</p> <p>D. Square, Triangle, Circle</p>	1X0.5=0.5	Creativity
5.	<p>The lighter the value, the lead in the pencil is ____.</p> <p>A. Hard</p> <p>B. Soft</p> <p>C. Dark</p> <p>D. Wide</p>	1X0.5=0.5	Creativity
6.	<p>Rectangle is a basic Shape</p> <p>A. True</p> <p>B. False</p>	1X0.5=0.5	Creativity
7.	<p>We use circles, triangles, and squares shapes in Warli Art.</p> <p>A. True</p> <p>B. False</p>	1X0.5=0.5	Creativity
8.	<p>This is Blending.</p>  <p>A. True</p> <p>B. False</p>	1X0.5=0.5	Creativity
9.	<p>Is this a warli art?</p>  <p>A. Yes</p> <p>B. No</p>	1X0.5=0.5	Creativity



10.	Pencils today are made of graphite. A. True B. False	1X0.5=0.5	Creativity
11	This is the  A. Light Source B. Core Shadow C. Cast Shadow D. Highlight	1X0.5=0.5	Creativity
12	Which state is known for its Warli paintings? A. Gujarat B. Rajasthan C. Maharashtra	1X0.5=0.5	Creativity
13	What type of scale shows the range of values from black to white and light to dark?  A. Monetary scale B. Proportion scale C. Pentatonic scale D. Value scale	1X0.5=0.5	Creativity

14	<p>What is the shape of square?</p> <p>A. 2D B. 3D C. 5D D. Not any</p>	1X0.5=0.5	Creativity
15	<p>What is pictured here?</p>  <p>A. A wedding scene B. Dancers and a tarpa instrument player. C. Dancers and a bagpipe player D. Warli villagers celebrating a religious holiday</p>	1X0.5=0.5	Creativity
16	<p>How many sides triangle have?</p> <p>A. 4 B. 5 C. 3 D. 2</p>	1X0.5=0.5	Creativity
17	<p>This technique creates a gradation from light to dark</p> <p>A. Burnishing B. Shading C. Hatching D. Scumbling</p>	1X0.5=0.5	Creativity
18	<p>Which pencil is capable of making the darkest values?</p> <p>A. HB B. B C. 2B D. 4B</p>	1X0.5=0.5	Creativity

19	<p>This drawing is called a: 1 mark Shading</p>  <p>A. Still life B. Landscape C. Gesture drawing D. Contour drawing</p>	1X0.5=0.5	Creativity
20	<p>I have four sides and all sides are equal, who am I?</p> <p>A. Square B. Triangle C. Rectangle</p>	1X0.5=0.5	Creativity



**ARMY PUBLIC SCHOOL GWALIOR**  
**CLASS -V**  
**ACADEMIC SESSION 2021-2022**  
**WORKSHEET (SELF ASSESSMENT)**




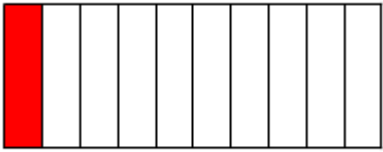
**Subject: Work Education**

**Assignment No. : 6**

**Allotment Date: 15 September 2021**

S.N	QUESTIONS	MARKS	NATURE
1.	_____ is the another name of string puppet? A. Marionette B. Bear C. Human D. Dog	1X0.5=0.5	Information
2.	Tie and dye is_____. A. Textile Craft B. Fiber craft C. Needle craft D. None	1X0.5=0.5	Understanding
3.	.Origami is_____. A. Paper craft B. Textile craft C. Flower craft D. None	1X0.5=0.5	Information

4.	<p>This picture is related to _____.</p>  <p>A. Multiplication B. Subtraction C. Addition D. Decimal</p>	1X0.5=0.5	Creativity
5.	<p>Fashion is the self-expression of_____.</p> <p>A. Clothing B. Features C. Hairstyle D. All</p>	1X0.5=0.5	Creativity
6.	<p>We use puppets for Painting.</p> <p>A. True B. False</p>	1X0.5=0.5	Creativity
7.	<p>Finger puppets are hand puppets?</p> <p>A. True B. False</p>	1X0.5=0.5	Creativity
8.	<p>Puppets stimulate imagination encourage creative Play.</p> <p>A. False B. True</p>	1X0.5=0.5	Creativity
9.	<p>There were five colours used in the video multiplication flower.</p> <p>A. True B. False</p>	1X0.5=0.5	Creativity

10.	We learn countings through the videomultiplication flower. C. True D. False	1X0.5=0.5	Creativity
11	How manycolours used in the video Multiplication through flower craft? E. Five F. Three G. Two H. Four	1X0.5=0.5	Creativity
12	What decimal number is illustrated?  A. 0.1 B. 0.6 C. 0.5 D. 0.3	1X0.5=0.5	Creativity
13	What is the Meaning of Paper Mache? A. Chewed or crushed paper B. Coloured paper C. Sheets D. Stencils	1X0.5=0.5	Creativity
14	What We learn through the video Multiplication through flower craft A. Counting B. Tables C. Addition D. Subtraction	1X0.5=0.5	Creativity
15	Blue pottery art is A. Ceramic craft B. Needle craft C. Textile craft D. None	1X0.5=0.5	Creativity

16	Which state is famous for puppets? A. Punjab B. Rajasthan C. Orissa D. Madhya Pradesh	1X0.5=0.5	Creativity
17	Finger puppets can be used for?  A. To tease others B. To learn counting using fingers C. Just for playing in playground	1X0.5=0.5	Creativity
18	'Wooden rose wood scoop' is a craft under which category a) House ware b) Leather work c) Fashion d) None	1X0.5=0.5	Creativity
19	Which state is famous for Kathputli (Dance) puppet? A. Rajasthan B. Maharashtra C. Tamil Nadu	1X0.5=0.5	Creativity
20	Clay modelling is a craft which comes under a) House ware b) Fashion c) Ceramics d) All	1X0.5=0.5	Creativity



**ARMY PUBLIC SCHOOL GWALIOR**  
**CLASS -V**  
**ACADEMIC SESSION 2021-2022**  
**WORKSHEET (SELF ASSESSMENT)**



**Subject: Health and Physical Education**

**Assignment No. : 6**

**Allotment Date: 15 September 2021**

<b>S.NO</b>	<b>MULTIPLE CHOICE QUESTIONS (1 to 4)</b>	<b>MARKS 1X10</b>	<b>NATURE</b>
1.	What is the colour of Blood  A. Blue  B. Yellow  C. Red  D. Pink	<b>1</b>	Informatory
2	White blood cells act .....  A. As a defiance against infection  B. As source of energy  C. For clotting blood  D. crlobin	<b>1</b>	Analytical
3	How many type of circulatory system.....  A. 1  B. 4  C. 5  D. 3	<b>1</b>	Informatory



4	The main organs of the circulatory system ..... A. Heart B. Bone C. Muscle D. Eye	1	Understanding
5	<b>True/False</b> The circulatory system consists of three independent system ..... True/False	1	Informatory
6	The 7 organs work in respiration system ..... True/false.	1	Understanding
7	There are four chamber in heart ... True/false.	1	Understanding
8	<b>Fill in the Blank</b> Nose, mouth, pharynx, larynx, trachea, branchi, and ..... are the 7 organs of respiration system (Heart, lever, lungs)	1	Informatory
9	The exchange of gases between inhaled air and blood is referred as ..... (Internal respiration, external Respiration)	1	Informatory
10	The trachea divides in to ..... smaller tubes) (1, 2, 4, 3)	1	Critical thinking



**ARMY PUBLIC SCHOOL GWALIOR**  
**CLASS -V**  
**ACADEMIC SESSION 2021-2022**  
**WORKSHEET (SELF ASSESSMENT)**



**Subject: Library**

**Assignment No. : 6**

**Allotment Date: 15 September 2021**

S.NO	QUESTIONS	MARKS	NATURE
	<b>Answer the following questions on the basis of the story ' story : SPOTS' given in the notes.</b>		
1	How could you tell that spots was old ? ..... .....	01	Analysis
2	Why did the leopard become a man-eater ? ..... .....	01	Analysis
3	Why was he never caught? ..... .....	01	comprehension
4	What Was The Tracker's Name ? ..... .....	01	Analysis
5	Who first noticed spots ? ..... .....	01	Analysis
6	How did spots meet his death ? ..... .....	01	Understanding
7	What trap had they set for the leopard ? ..... .....	01	comprehension
8	Who made many efforts to catch him? ..... .....	01	comprehension
9	What Was The Title Of The Story ? ..... .....	01	Analysis
10	What instructions did the forest officer give to badri? ..... .....	01	Understanding



**ARMY PUBLIC SCHOOL GWALIOR**  
**CLASS -V**  
**ACADEMIC SESSION 2021-2022**  
**WORKSHEET (SELF ASSESSMENT)**



**Subject: Music (Dance / Instrumental)**

**Assignment No. : 6**

**Allotment Date: 15 September 2021**

<b>S. No</b>	<b>A. Fill in the blanks:</b>	<b>Marks 0.5x1=0.5</b>	<b>Nature</b>
1.	"RA" in BHARATANATYAM stands for ____. a. Raaga b. Rhythm c. Rasa	0.5	Informative
2.	Sign, object which represents something is known as ____. a. Symbol b. Signal c. Direction	0.5	Informative
3.	Symbolic hand gestures and finger posture are known as a. Mudras b. Adavus c. Taala	0.5	Informative
4.	There are ____ in teen taal. a. 17 b. 18 c. 16	0.5	Informative
5.	There are ____ divisions in teen taal. a. 2 b. 3 c. 4	0.5	Informative
<b>B.</b>	<b>True/False:</b>		
6.	Samyukta Hasta Mudras are known as Two hand mudra. a. True b. False	0.5	Informative
7.	"NATYA" in bharataNATYAM means music. a. True b. False	0.5	Informative
8.	Every kathak and tabla student learns teen taal. a. True b. False	0.5	Informative
9.	We represent the rhythm with the clap clap. a. True b. False	0.5	Informative
10.	The first volume of the taal is called sam. a. True b. False	0.5	Informative
<b>C.</b>	<b>Multiple Choice Question:</b>		
11.	How many types of mudra are there? a. 2	0.5	Informative

	<ul style="list-style-type: none"> <li>b. 4</li> <li>c. 5</li> </ul>		
12.	<p>In nrityanatika how many members participate?</p> <ul style="list-style-type: none"> <li>a. One</li> <li>b. No one</li> <li>c. More than one</li> </ul>	0.5	Informative
13.	<p>What is panchbhootam?</p> <ul style="list-style-type: none"> <li>a. Earth, water, fire, air, space</li> <li>b. River, ocean, tree, sea</li> <li>c. Respect, motivation, dignity.</li> </ul>	0.5	Informative
14.	<p>Hand gestures and finger postures shown through one hand is known as</p> <ul style="list-style-type: none"> <li>a. Asamyukta hasta mudra</li> <li>b. Samyukta hasta mudra</li> <li>c. Greevabhed</li> </ul>	0.5	Informative
15.	<p>How many mudras are there in Asamyukta Hasta Mudra.</p> <ul style="list-style-type: none"> <li>a. 28</li> <li>b. 3</li> <li>c. 70</li> </ul>	0.5	Informative
16.	<p>How many type of rhythms are there?</p> <ul style="list-style-type: none"> <li>a. 9</li> <li>b. 12</li> <li>c. 5</li> </ul>	0.5	Informative
17.	<p>What is the empty symbol in teen taal.</p> <ul style="list-style-type: none"> <li>a. 1</li> <li>b. 2</li> <li>c. 0</li> </ul>	0.5	Informative
18.	<p>What is the first volume(matra) of taal called?</p> <ul style="list-style-type: none"> <li>a. Sam</li> <li>b. Khali</li> <li>c. Vibhaag</li> </ul>	0.5	Informative
19.	<p>How many gharana does tabla have?</p> <ul style="list-style-type: none"> <li>a. 4</li> <li>b. 5</li> <li>c. 6</li> </ul>	0.5	Informative
20.	<p>How many hands do we use in Samyukta Hasta Mudras?</p> <ul style="list-style-type: none"> <li>a. Two hands</li> <li>b. One hands</li> <li>c. None of the above</li> </ul>	0.5	Informative



**ARMY PUBLIC SCHOOL GWALIOR**  
**CLASS -V**  
**ACADEMIC SESSION 2021-2022**  
**WORKSHEET (SELF ASSESSMENT)**



**Subject: Discipline**

**Assignment No. : 6**

**Allotment Date: 15 September 2021**

S.NO	QUESTIONS	MARKS	NATURE
1.	<p><b>Fill in the blanks-</b></p> <p>i. Being responsible is a good_____</p> <p>ii. Responsible children grow _____.</p> <p>iii. Responsibility is being _____.</p> <p>iv. If you are responsible people can _____ on you.</p> <p>v. Steven, Robert and Tim had a _____ project.</p> <p>vi. Carly never let her friends _____.</p> <p>vii. The three boys got the project done they were_____.</p> <p>viii. Carly was very _____.</p> <p>ix. Change your_____ Change your _____</p> <p>x. Gertrude was just an _____kid with an average _____.</p>	05	Knowledge & Understanding
2.	<p><b>Choose the correct answer-</b></p> <p>A voice spoke in the dream: “The present is nothing more than the outcome of the choices made in the past. The future will only be the results of the choices we make today.”</p> <p>i. Whatever we are doing today, will make our future.</p> <p>ii. We can waste as much time as we want.</p> <p>iii. The future is unpredictable</p>	02	

	iv. The present can be made beautiful		
3.	<p><b>How do you show your responsibility.</b></p> <p>i. _____</p> <p>ii. _____</p> <p>iii. _____</p> <p>iv. _____</p> <p>v. _____</p> <p>vi. _____</p>	03	Thinking and Writing Skills