



ARMY PUBLIC SCHOOL GWALIOR

CLASS- I

ACADEMIC SESSION 2020-2021

WORKSHEET (SELF -ASSESSMENT TEST)



Subject: English

Assignment No. : 10

Allotment Date: 12 February 2021

S.N	QUESTIONS	MARKS	NATURE
1	Circle the describing words in these sentences:- (i) This room is large. (ii) I am hungry. (iii) This cake is Yummy. (iv) This towel is wet.	4x.5=2	Information
2	Match the opposite pairs: Column A 1. Weak 2. Day 3. Happy 4. Rich 5. Up 6. Good Column B Down Sad Strong Bad Night Poor	6X.5=3	Understandin g

<p>3</p>	<p>Fill in the blanks and choose the correct Past Tense from the brackets.</p> <ol style="list-style-type: none"> 1. Sonam (asked / ask) the teacher to explain addition again. 2. My mother (laugh / laughed) at my brother's joke. 3. She (complete / completed) her work on time. 4. They (look / looked) at the tall tree. 5. Our class(enjoy/ enjoyed) a lot in the amusement park. 	<p>5x.5=2.5</p>	<p>Interdisciplin ary</p>
<p>4</p>	<p>Write word meaning.</p> <ol style="list-style-type: none"> (i) Fondly: (ii) Hope : (iii) Riverbank: (iv) Founded: (v) Entertain: 	<p>5x.5=2.5</p>	<p>Analytical Skill</p>
<p>5</p>	<p>Complete these sentences using 'and' or 'but'.</p> <ol style="list-style-type: none"> 1. I like cakes ice creams. 2. My grandma is old healthy. 3. I like to swim my friends like to skate. 4. Nida I play on the swings. 5. 5 vowels 21 consonants together make 26 letters of English Alphabet. 	<p>5x1=5</p>	<p>Critical Thinking and Problem Solving</p>

<p>6</p>	<p>Answer the following questions :</p> <p>Q1. Why did Pandit Nehru start wearing a rose on his jacket?</p> <p>_____</p> <p>Q2. Who has caught the turtle?</p> <p>_____</p> <p>Q3. What did Pandit Nehru love to do?</p> <p>_____</p>	<p>3X1=3</p>	<p>Evaluation</p>
<p>7</p>	<p>Choose the correct option:</p> <p>(i) The clever _____ saves his friend.</p> <ul style="list-style-type: none"> • Turtle • Jackal • Lingo <p>(ii) A child had pinned a _____ on his jacket.</p> <ul style="list-style-type: none"> • Rose • Flag • Napkin <p>(iii) 14th November is celebrated as</p> <ul style="list-style-type: none"> • Parent's Day 	<p>4X.5=2</p>	<p>Communicati on Skills</p>

	<ul style="list-style-type: none">• Children's Day• Baby's Day <p>(iv) Friends are there to _____.</p> <ul style="list-style-type: none">• Help and care• Take and run away• tease		
--	---	--	--



ARMY PUBLIC SCHOOL GWALIOR

CLASS- I

ACADEMIC SESSION 2020-2021


WORKSHEET (SELF -ASSESSMENT TEST)



Subject: Hindi

Assignment No. : 10

Allotment Date: 12 February 2021

संख्या	प्रश्न / उत्तर	अंक	प्रकृती
प्र.1	<p>सही शब्द चुन कर खाली स्थान भरो</p> <p>क.गिल्लू ऊपर की ----- पर चढ़ गई। (ढाल/डाल)</p> <p>ख- बगीचे में आम का एक ----- था ।(पेड़/पेट)</p> <p>ग- गिल्लू ने आम नीचे ----- दिया स (गिरा/घिरा)</p> <p>घ- अचानक जोर की ----- आई । (आधी/आँधी)</p>	4x.5=2	बोधार्थक
प्र 2	<p>दिए गए चित्रों के नीचे उनके लिंग एवं वचन का नाम लिखो</p> <p>।</p>  <p>_____</p>	4x.5=2	अंतःविषयात्मक



प्र-3

नीचे दिए गए प्रश्नों के उत्तर लिखो

5x1=5

सूचनापरक

प्रश्न. बबलू बगीचे में उदास क्यों बैठा था ?

प्रश्न .ऋषि का आश्रम किस नदी के किनारे था ?

प्रश्न . बबलू ने गिल्लू का धन्यवाद क्यों किया ?

प्रश्न . बबलू और गिल्लू अच्छे दोस्त कैसे बने ?

प्रश्न. ज्ञान और अक्षय को जंगल में ढूँढने कौन आया ?

प्र-4	<p>प्रश्न. जंगल से आश्रम लौटते समय ज्ञान और अक्षय के साथ क्या हुआ ?</p> <p>-----</p> <p>प्रश्न . ज्ञान और अक्षय जंगल में क्यों गए ?</p> <p>-----</p> <p>प्रश्न . बबलू पेड़ के पास मूंगफली क्यों बिखेरता था ?</p> <p>-----</p> <p>प्रश्न . दूर- दूर से बालक आश्रम क्यों आते थे ?</p> <p>-----</p>	4x1=4	गहन सोच और समस्या समाधान
प्र-5	<p>नीचे लिखे शब्दों के बहुवचन शब्द लिखो ।</p> <p>आँख - _____</p> <p>टोपी - _____</p> <p>बस्ता - _____</p> <p>डंडी - _____</p> <p>लड़का - _____</p>	6x.5=3	उच्चस्तरीय चिंतन

	तितली - _____		
प्र-6	<p>नीचे लिखे अंकों के नाम हिंदी की गिनती में लिखो</p> <p>१५ - _____</p> <p>१४ - _____</p> <p>६ - _____</p> <p>९ - _____</p>	4x.5=2	विश्लेषणात्मक
प्र-7	<p>दिए गए शब्दों के उलटे अर्थ वाले शब्द लिखो</p> <p>नया _____</p> <p>दिन _____</p> <p>हँसना _____</p> <p>गरीब _____</p>	8x.5=2	भाषाई कौशल



ARMY PUBLIC SCHOOL GWALIOR

CLASS- I

ACADEMIC SESSION 2020-2021

WORKSHEET (SELF -ASSESSMENT TEST)



Subject: Mathematics

Assignment No. : 10

Allotment Date: 12 February 2021

S. NO.	QUESTIONS	MARKS	NATURE
1	Tick(✓) the correct word: (i) The sun rises in the morning / evening . (ii) The moon is seen in the night / day .	2x1=2	Information
2	Which of the following events take longer time? (i) To tie laces / eat breakfast . (ii) To play a cricket match / take a bath .	2x1=2	Understanding

3	Fill in the missing numbers in the space provided. (i) $7 \times 8 = \underline{\quad} \times 7$ (ii) $5 \times \underline{\quad} = 2 \times 5$	2x1=2	AnalyticalSkill
4	Answer the following questions: (i) Which is heavier, a flower or a flowerpot? Ans _____ (ii) Which day is always a government holiday? Ans _____ (iii) Which day comes between Sunday and Tuesday? Ans _____ (iv) Which is the first day of the week? Ans _____	4X1=4	Interdisciplinary

<p>5</p>	<p>Write the Table of 4.</p> <p>(i) $4 \times 1 = \underline{\hspace{2cm}}$</p> <p>(ii) $4 \times 2 = \underline{\hspace{2cm}}$</p> <p>(iii) $4 \times 3 = \underline{\hspace{2cm}}$</p> <p>(iv) $4 \times 4 = \underline{\hspace{2cm}}$</p> <p>(v) $4 \times 5 = \underline{\hspace{2cm}}$</p> <p>(vi) $4 \times 6 = \underline{\hspace{2cm}}$</p> <p>(vii) $4 \times 7 = \underline{\hspace{2cm}}$</p> <p>(viii) $4 \times 8 = \underline{\hspace{2cm}}$</p> <p>(ix) $4 \times 9 = \underline{\hspace{2cm}}$</p> <p>(x) $4 \times 10 = \underline{\hspace{2cm}}$</p>	<p>$10 \times 2 = 2$</p>	<p>Critical Thinking and Problem Solving</p>
<p>6</p>	<p>Word Problems :</p> <p>(i) An elephant has 4 legs. How many legs 3 elephants have?</p> <p>(ii) How many feet will 4 dogs have?</p> <p>(iii) Which is wider----- a river or a drain in</p>	<p>$4 \times 1 = 4$</p>	<p>Evaluation</p>

front of your house?

- (iv) A child has 3 books. How many books
6 children have?

7

Giovanni sells cheese at the town market. Look at his sales record below and answer the questions.

Type of Cheese	Number of Cheese Sold
Mozzarella	
Cheddar	
Blue Cheese	
Feta	
Goat Cheese	

- (i) How much goat cheese did Giovanni sell?

- (ii) What kind of cheese was the most popular?
How much was sold?

- (iii) How much feta cheese and mozzarella
cheese did he sell in total?

- (iv) What kind of cheese sold the least?

$$4 \times 1 = 4$$

Communication
Skills



ARMY PUBLIC SCHOOL GWALIOR

CLASS- I

ACADEMIC SESSION 2020-2021

WORKSHEET (SELF -ASSESSMENT TEST)







Subject: EVS

Assignment No. : 10

Allotment Date: 12 February 2021

S.N	QUESTIONS	MARKS	NATURE
1	<p>Tick (✓) the correct options :</p> <p>1.Our national song is _____.</p> <p>a. Jana Gana Mana b. Vande Mataram c. Om bhurbhaba Swaha</p> <p>2.The biggest water body is_____:</p> <p>a. River b. Lake c.ocean</p> <p>3.We see the blue sky far above the_____.</p> <p>a. Earth b. Sun c. Stars</p> <p>4.Air helps in _____.</p> <p>a. Burning b. playing c. dancing</p>	4X.5=2	Information
2	<p>Fill in the blanks.</p> <p>1. We are known as_____.</p> <p>2. One of the great leaders of India is _____.</p> <p>3. Our national water animal is _____.</p> <p>4. We breathe in _____.</p> <p>5.We keep water in a freezer to make it into _____.</p> <p>6.Ocean water is very _____.</p>	6X.5=3	Evaluation

<p>3</p>	<p>Match the following:-</p> <div style="display: flex; flex-direction: column; align-items: center;"> <div style="display: flex; align-items: center; margin-bottom: 20px;">  <div style="margin-left: 20px;">a) Hills</div> </div> <div style="display: flex; align-items: center; margin-bottom: 20px;">  <div style="margin-left: 20px;">c) Ocean</div> </div> <div style="display: flex; align-items: center; margin-bottom: 20px;">  <div style="margin-left: 20px;">b) Mountains</div> </div> <div style="display: flex; align-items: center;">  <div style="margin-left: 20px;">d) Plains</div> </div> </div>	<p>2X1=2</p>	<p>Interdisciplinary</p>
<p>4</p>	<p>Write true (T) or false (F) against the following statements:</p> <ol style="list-style-type: none"> 1.The Sun rises in the west. () 2.Land covers most part of the earth.. () 3.Our national flag is four coloured. () 4. Our national fruit is banana. () 5. India has 28 states () 6. The capital city of India is New Delhi. () 	<p>6X.5=3</p>	<p>Analytical Skill</p>

5	<p>Draw any six national symbols and write their name .</p>	6X.5=3	<p>Critical Thinking and Problem Solving</p>
6	<p>Q1. Name the mountain range in the north and the ocean in the south which are protecting India.</p> <hr/> <hr/> <p>Q2. Why can we not see stars during the day?</p> <hr/> <hr/> <p>Q3. Write two uses of water?</p> <hr/> <hr/> <p>Q4. How water vapour is formed?</p> <hr/> <hr/>	4X1=4	HOT
7	<p>Answer the following question:</p> <p>Q1 Write three properties of air.</p> <hr/> <hr/>	3X1=3	<p>Communication Skills</p>

	<p>Q2. Write two ways to protect our water bodies.</p> <hr/> <hr/> <p>Q3. Write two uses of air.</p> <hr/> <hr/>		
--	--	--	--



ARMY PUBLIC SCHOOL GWALIOR

CLASS- I

ACADEMIC SESSION 2020-2021

WORKSHEET (SELF -ASSESSMENT TEST)



Subject: Computer




Assignment No. : 10

Allotment Date: 12 February 2021

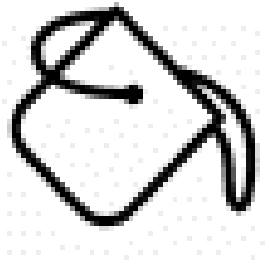
S. NO	QUESTIONS	MARKS	NATURE
1	<p><u>Tick the correct answer</u></p> <p>1) _____ Program is used to draw and colour objects.</p> <p>MS-Paint Notepad Calculator</p> <p>2) _____ Tool is used to draw straight lines.</p> <p>Line Circle Brush</p> <p>3) _____ contains all the tools for drawing.</p> <p>Canvas Colour Box Tool Box</p> <p>4) _____ is present on the top of Paint screen.</p> <p>Tool box Drawing Area Canvas</p> <p>5) _____ is used to draw wavy lines.</p>	5X1=5	Information

	<p>Pencil tool Line tool Oval tool</p>		
2	<p><u>Write 'T' for TRUE and 'F' for FALSE</u></p> <p><u>statements</u></p> <ol style="list-style-type: none"> 1. Tool Box is used to make straight and slanting line. () 2. Pencil Tool is used to draw wavy lines. () 3. Oval Tool is used to make circles and ovals. () 4. Tool Box is on the bottom of the paint programs. () 5. We start MS- Paint by clicking on Start -> All Programs -> Accessories -> Paint. () 	5X1=5	Understanding
3	<p><u>Fill in the blanks.</u></p> <ol style="list-style-type: none"> 1. _____ is present on the top of Paint screen. 2. _____ program is used to make drawings. 3. _____ is used to make straight and slanting line. 4. _____ is used to draw wavy lines. 5. _____ is used to make circles and ovals. 	5X1=5	Interdisciplinary

--	--	--	--

4	<u>Identify the tool in the picture :-</u>	5X1=5	Analytical Skill
(i)	 _____		
(ii)	 _____		
(iii)	 _____		

(iv)



(v)





ARMY PUBLIC SCHOOL GWALIOR

CLASS- I

ACADEMIC SESSION 2020-2021

WORKSHEET (SELF -ASSESSMENT TEST)











Subject: G.K

Assignment No. : 2

Allotment Date: 12 February 2021

S. NO.	QUESTIONS	MARKS	NATURE
1.	Ti ck the correct answer: 1.Refrigerator is used for making chutneys and shakes. () 2.We can find dinosaurs in India. () 3.Sun sets in the west direction. () 4.Japan is the country of islands. ()	2X.5=2	Information
2.	Fill in the blanks 1. _____ is the king of the jungle. 2. _____ gives us honey. 3. _____ colour of the Indian flag is for purity and truth. 4. _____ colour of the Indian flag is for courage and sacrifice. 5. _____ colour of the Indian flag is for courage fertility and growth. 6. _____ of the Indian flag is for progress. 7. Blue wheel of the Indian flag is called	4X.5=4	Understanding

	8. _____. _____ is a city as well as a country.																		
3.	<p>Match the pictures of the flags with names of their countries .</p>  <p>Russia</p>  <p>United Kingdom</p>  <p>India</p>  <p>Singapore</p>  <p>Japan</p>  <p>United States of America</p>	4X.5=2	Interdisciplinary																
4.	<p>A. Match the following:</p> <table border="0"> <tr> <td>1.MS Dhoni</td> <td>Hot water</td> </tr> <tr> <td>2.Honeybee</td> <td>Gymnastics</td> </tr> <tr> <td>3.Sandesh</td> <td>Cricket</td> </tr> <tr> <td>4.Marrykom</td> <td>India</td> </tr> <tr> <td>5.DipaKarmakar</td> <td>Boxing</td> </tr> <tr> <td>6.SainaNehwal</td> <td>West Bengal</td> </tr> <tr> <td>7.TajMahal</td> <td>Badminton</td> </tr> <tr> <td>8.Geyser</td> <td>Honey.</td> </tr> </table>	1.MS Dhoni	Hot water	2.Honeybee	Gymnastics	3.Sandesh	Cricket	4.Marrykom	India	5.DipaKarmakar	Boxing	6.SainaNehwal	West Bengal	7.TajMahal	Badminton	8.Geyser	Honey.	8X.5=4	Analytical Skill
1.MS Dhoni	Hot water																		
2.Honeybee	Gymnastics																		
3.Sandesh	Cricket																		
4.Marrykom	India																		
5.DipaKarmakar	Boxing																		
6.SainaNehwal	West Bengal																		
7.TajMahal	Badminton																		
8.Geyser	Honey.																		

6.	<p>B. Jumbled words:-</p> <ol style="list-style-type: none"> 1. FFNORSA - 2. DIAIN - 3. IWIK - 4. GERTI - 	4X.5=2	Critical Thinking and Problem Solving
7.	<p>Tick the correct option</p> <p>1. Which state gave us the gift of the food items like “ make di roti and sarson da saag ?</p>  <p>a) Punjab b) Andhra Pradesh c) West Bengal</p> <p>2. To which of the following states does the food item “ idli sambar belong ?</p>  <p>a) Uttar Pradesh b) Tamil Nadu c) West Bengal</p>	2X1= 2	Evaluation

8.	Answer the following <ol style="list-style-type: none">1. How many colours can we see on the flag of India?2. Which month do we celebrate New Year's Day?3. Which animal has a long trunk?4. How many spokes does the wheel on the Indian flag have ?5. To which state does “ sandesh ” a popular sweet, belong ?	2*1=2	Communication Skills
-----------	--	--------------	----------------------



ARMY PUBLIC SCHOOL GWALIOR

CLASS- I

ACADEMIC SESSION 2020-2021



WORKSHEET (SELF -ASSESSMENT TEST)

Subject: Dance

Assignment No. : 10

Allotment Date: 12 February 2021

S.NO	QUESTION
	<p>रिक्तस्थान।</p> <p>प्रश्न 1. लावणीनृत्यकावाद्ययन्त्र _____.</p> <p>a). ढोलक b). सितार c). डमरू</p> <p>प्रश्न 2. असमकालोकनृत्य _____ है।</p> <p>a). भांगड़ा b). बिहू c). झूमर</p> <p>प्रश्न 3. गरवीनृत्य _____ किया जाता है।</p> <p>a). पुरुषोद्वारा b). महिलाओद्वारा c). कोई नहीं</p> <p>प्रश्न 4. पंजाबमेंस्त्रियाँ _____ नृत्य करती हैं।</p> <p>a). गिधदा b). घूमर c). झूमर</p>

प्रश्न 5. तीनतालमें _____ मात्राहोतीहै।

- a). 16
- b).14
- c).15

1.

हाँयानहीं।

प्रश्न 1. गुजरातकालोकनृत्यडांडियाहै।

- a). हाँ
- b).नहीं

प्रश्न 2. क्याविद्याकीदेवीलक्ष्मीहै।

- a).हाँ
- b).नहीं

प्रश्न 3. कृष्णाकीमाताकानामदेवकीथा।

- a).हाँ
- b).नहीं

प्रश्न 4. राजस्थानकालोकनृत्यभांगड़ाहै।

- a).हाँ
- b).नहीं

प्रश्न 5. नृत्यकरतेसमयपैरोमेंपायलपेहेनतेहैं।

- a).हाँ
- b).नहीं

प्रश्न 6. क्यापंजाबकावाद्ययन्त्रढोलहै।

- a).हाँ
- b).नहीं

बहुवैकल्पिक प्रश्न

प्रश्न 1. राजस्थानकाराज्यनृत्यकोनसाहै।

- a). घूमर
- b). गरबा
- c). भांगड़ा

प्रश्न 2. लावणीनृत्यकितनेप्रकारकीहोतीहै।

- a). 4
- b). 2
- c). 3

प्रश्न 3. डांडियाकहाँकाप्रसिद्धनृत्यहै।

- a). उड़ीसा
- b). गुजरात
- c). असम

प्रश्न 4. कोलीकिसजातिकानृत्यहै।

- a). मछुआराजाती
- b). आदिवासी
- c). भील

प्रश्न 5. बिहूकिसराज्यकालोकनृत्यहै।

- a). असम
- b). करेला
- c). हिमाचल

प्रश्न 6. घूमरनृत्यमेंकिसवाद्ययन्त्रकाउपयोगकियाजाताहै।

- a). नगाड़ाशेननाइ
- b). सितार
- c). गिटार

प्रश्न 7. गरवीनृत्यकिसकेद्वाराकियाजाताहै।

- a).पुरुषोद्वारा
- b).महिलाओद्वारा
- c).भीलजातिद्वारा

प्रश्न 8. गरबानृत्यकबकियाजाताहै।

- a).नवरात्रोमें
- b).ओणममें
- c).बैसाखीमें

प्रश्न 9. कालवैलियानृत्यमेंकिसवाद्ययन्त्रकाउपयोगकियाजाताहै।

- a).मुरली
- b).तबला
- c).बीन



ARMY PUBLIC SCHOOL GWALIOR

CLASS- I

ACADEMIC SESSION 2020-2021

WORKSHEET (SELF -ASSESSMENT TEST)

Subject: Physical Education

Assignment No. : 10

Allotment Date: 12 February 2021



S.no	Questions	Marks
------	-----------	-------

7.	<p>a) True b) False</p> <p>We play Treasure hunt with our Parents?</p>	
8.	<p>a) True b) False</p> <p>Skipping can be done without rope?</p>	
9.	<p>a) True b) False</p> <p>Does lime powder is necessary for Responding and signals?</p>	
10.	<p>a) True b) False</p> <p>Use soft object only is the safety measure of take aim?</p> <p>a) True b) False</p>	10 x 1 = 10
MCQ's		
11.	<p>Mats or soft surfaces are used in.</p> <p>e) Static balance f) Responding to command and signals g) Take Aim h) All of the above</p>	
12.	<p>What are the variations used in Take aim?</p> <p>e) Increase the distance from the target. f) Lime powder or markers to define the playing area. g) Different visual and auditory stimuli: colours for 'traffic lights' h) Combine more actions.</p>	
13.	<p>Which equipment used in responding to command?</p> <p>a) Sufficient space for actions to be undertaken safety. b) Watch out for others when working. c) Both A and B d) None of these</p>	

<p>14.</p> <p>15.</p> <p>16.</p> <p>17.</p> <p>18.</p> <p>19.</p> <p>20.</p>	<p>Rope is the most important Equipment used in?</p> <p>a) Introducing Skipping b) Treasure Hunter c) Jumping for height d) All of the above.</p> <p>What is the Safety Measure of Treasure hunt?</p> <p>a) Watch out for others all the time. b) Keep spaced out so that ropes do not hi? others. c) Swing ropes low to the ground. d) All of the Above</p> <p>Swing ropes low to the ground. Is the Safety Measure of?</p> <p>a) Jumping and Hoping b) Treasure Hunt c) Introducing Skipping d) None of the Above</p> <p>Run, stepping over the ropes or lines is the activity of which game?</p> <p>a) Treasure Hunt b) Introducing Skipping c) Both A and B d) None of the above</p> <p>What is the Variation of Treasure hunter?</p> <p>a) Increase the space of the playing area so children have to run further. b) Decrease the space of the playing area so children have to dodge and swerve each other. c) Use more colored objects. d) All of the Above</p> <p>Mats or soft surfaces are used in.</p> <p>i) Static balance j) Responding to command and signals k) Take Aim l) All of the above</p> <p>What Seema says in responding to command and signals?</p> <p>a) Run b) Jump c) Stop</p>	
--	--	--

	d) All of the above.	
--	----------------------	--



ARMY PUBLIC SCHOOL GWALIOR

CLASS- I

ACADEMIC SESSION 2020-2021

WORKSHEET (SELF -ASSESSMENT TEST)



Subject: Music

Assignment No. : 10

Allotment Date: 12 February 2021

S.NO	QUESTION
	<p>रिक्त स्थान में सही उत्तर भरे –</p> <p>प्र1. संगीत में स्वर होते हैं ?</p> <p>1)6</p> <p>2)7</p> <p>3)9</p> <p>4) 10</p> <p>प्र2. दादरा ताल में मात्रा होती है?</p> <p>1) 10</p> <p>2) 8</p> <p>3) 6</p> <p>4) 7</p> <p>प्र3. इस प्रार्थना को पूरा करे ---</p> <p>तुम ही हो माता तुम ही हो ?</p> <p>1) जान</p> <p>2) पिता</p>

3) गुरु

4) भगवान

सही या गलत पहचानिए ---

प्र 4 . गिटार में 4 तार होती है ?

1.

1) सही

2) गलत

प्र5. हारमोनियम एक ताल वाद्य है ?

1) सही

2) गलत

प्र6. ताल तबले पर बजाई जाती है ?

1) सही

2) गलत

सही विकल्प चुनकर लिखिए

प्र7. तानसेन कौन थे ?

1) गायक

2) नृतक

3) कवि

4) लेखक

प्र8. इस ताल वाद्य को पहचानिए ?

1) ड्रम

2) ढोलक

3) सितार

4) तबला

प्र9. ताल दादरा के बोल है ?

1) धा धी ना धा ती ना

2) धा धिं धीं धा

3) धा धा दिन ता तिट कत गदी गन

4) क धित धिट धा का तीट टित ता

प्र10. उस्ताद जाकिर हुसैन कोनसा वाद्य बजाते है ?

1) गिटार

2) सितार

3) तबला

4) हारमोनियम



ARMY PUBLIC SCHOOL GWALIOR

CLASS- I

ACADEMIC SESSION 2020-2021

WORKSHEET (SELF -ASSESSMENT TEST)



Subject: Art Education

Assignment No. : 10

Allotment Date: 12 February 2021

S.NO	QUESTION
1.	<p><u>Fill in the blanks:-</u></p> <p>_____state is famous for block painting.</p> <p>a.) Rajasthan b.) Madhya Pradesh c.) Tamil Nadu d.) None of these</p>
2.	<p>_____pencil is used for light shading.</p> <p>a.) HB b.) 2B c.) 4B d.) None of these</p>
3.	<p>Green colour is made by mixing _____.</p> <p>a.) Yellow+Red b.) Yellow+Blue c.) Red+Black d.) None of these</p> <p><u>True & False:-</u></p> <p>Primary colours are Red, Yellow & Blue.</p> <p>1. a.) True b.) False</p>

2.

Secondary colours are Black & White.

- a.) True
- b.) False

3.

Three Primary shapes are Circle, Square & Triangle.

- a.) True
- b.) False

Multiple Choice Questions:-

1.

Where are cave painting found in India?

- a.) Punjab
- b.) Ajanta
- c.) Agra
- d.) None of the above

2.

Where are Gond art found in India?

- a.) Himachal Pradesh
- b.) Madhya Pradesh
- c.) Kerala
- d.) None of the above

3.

Which one is not a type of Landscape?

- a.) Mountain Landscape
- b.) Water drainage
- c.) Flat landscape
- d.) Coastal landscape

4.

Pattern made by human being is called.

- a.) Natural pattern
- b.) Man made pattern
- c.) None of the above