



ARMY PUBLIC SCHOOL GWALIOR
CLASS - VI
ACADEMIC SESSION 2024-25
WORKSHEET (SELF –ASSESSMENT)

Subject: English

Assignment No. : 1

Allotment Date: 30 April 2024

S. NO.	QUESTIONS	MARKS	NATURE
1	How a house is different from a home? Which do you think is better? Answer in about 100 words.	4m	Information
2	Read the following extract and answer the and questions given below: Then one day he found his cat playing with a little doll and he grabbed it away. To his surprise it wasn't a doll at all, but a man of the tiniest size. He has a little wool shirt with old fashion britches and a high tall hat much like a witches. He yelled, "Save me! Don't give me back to that cat. I'll grant you a wish. I promise you that." Questions: 1. Why was Patrick surprised? 2. What was the problem of the tiny man? 3. How did Patrick help the tiny man?	3m	Understanding
3	What do you feel about homework? According to you, how does it help you in your studies? Answer in about 100 words.	4m	HOT
4	Grammar Identify the type of sentences. 1. He eats a banana every day. 2. Can I go? 3. She is not well.	3m	Interdisciplinary
5	The words given below have been jumbled. Put them back in their right order so that they make proper sentences. 1. Switzerland/the/Kashmir/of/called/is/India 2. beings/all/ living/to /noises/harmful/loud/are 3. praised/his /him/teacher	3m	Analytical Skill
6	Do you think that different company affect the character and behaviour of a person? Answer in about 100 words in reference to the story- 'A tale of two birds'.	4m	Critical Thinking and Problem Solving
7	Answer the following questions in about 20-30 words. 1. What changes came in Patrick's behaviour in the end? 2. What purpose do chimneys serve? 3. How did the other bird greet the king? (Supplementary book)	3x2=6m	Evaluation
8	Write a dialogue between you and your friend about the plans of summer vacation in about 50 words.	3m	Communication Skills



ARMY PUBLIC SCHOOL GWALIOR
CLASS - VI
ACADEMIC SESSION 2024-25
WORKSHEET (SELF -ASSESSMENT)



Subject: Hindi
Allotment Date: 30 April 2024

Assignment No. : 1

क्रम सं.	प्रश्न	अंक	प्रकृति
1.	निम्न शब्दों के अर्थ लिखिए- कंठ, विजन, गरबीली, जुंडी, मौन, पोशाक ,सेहत, दिलचस्पी, रौनक, किस्म।	5	Informative Communication Skills
2.	निम्नलिखित प्रश्नों के उत्तर दीजिए- (क) चिड़िया को किन-किन चीजों से प्यार है? (ख) लेखिका बचपन में इतवार की सुबह क्या क्या काम करती थीं? (ग) लेखिका अपनी बचपन में कौन-कौन सी चीज़ें मजा ले-लेकर खाती थीं? उनमें से प्रमुख फलों के नाम लिखो।	6	Critical Thinking and Problem Solving
3.	हिंदी वर्णमाला का वर्गीकरण कीजिए।	5	Interdisciplinary
4.	निम्नलिखित शब्दों का वर्ण-विच्छेद कीजिए। (क) विद्यालय (ख) जन्मोत्सव (ग) आश्चर्यजनक (घ) प्रयत्नशील (ङ) भविष्यवाणी (च) संस्कृति (छ) शक्तिहीन (ज) मार्गदर्शन	4	Understanding
5.	•अगर तुम्हें पोशाक बनाने को कहा जाए तो कैसी पोशाक बनाओगे और पोशाक बनाते समय किन बातों का ध्यान रखोगे? अपनी कल्पना से पोशाक का डिज़ाइन बनाओ।	5	Evaluation
6.	(क) (महर्षि विश्वामित्र राजा दशरथ के पास क्यों आए थे? (ख) (जनक कौन थे? उनकी क्या प्रतिज्ञा थी? (ग) (मिथिला में किस-किस का विवाह हुआ? (घ) राम का जन्म कब हुआ था? (ङ) कैकेयी ने राजा दशरथ से कितने वर माँगे थे?	5	Analytical



ARMY PUBLIC SCHOOL GWALIOR
CLASS - VI
ACADEMIC SESSION 2024-25
WORKSHEET (SELF –ASSESSMENT)

Subject: Mathematics
Allotment Date: 30 April 2024

Assignment No. : 1

S.NO.	QUESTIONS	MARKS	NATURE
1	The product of the place values of two 2's in 428721 is- (A) 4 (B) 40000 (C) 400000 (D) 40000000	1	Understanding
2	Number of whole numbers between 38 and 68 is- (A) 31 (B) 30 (C) 29 (D) 28	1	Critical Thinking
3	The largest 4-digit number, using any one digit twice, from digits 5, 9, 2 and 6 is (A) 9652 (B) 9562 (C) 9659 (D) 9965	1	Informative
4	The product of successor and predecessor of 999 is (A) 999000 (B) 998000 (C) 989000 (D) 1998	1	Understanding
5	In Indian System of Numeration, the number 58695376 is written as (A) 58, 69, 53, 76 (B) 58, 695, 376 (C) 5, 86, 95, 376 (D) 586, 95, 376	1	Analytical
6	One million is equal to (A) 1 lakh (B) 10 lakh (C) 1 crore (D) 10 crore	1	Informative
7	All natural numbers are whole numbers. a) True b) False	1	Analytical

8	The expanded form of the number 9578 is (A) $9 \times 10000 + 5 \times 1000 + 7 \times 10 + 8 \times 1$ (B) $9 \times 1000 + 5 \times 100 + 7 \times 10 + 8 \times 1$ (C) $9 \times 1000 + 57 \times 10 + 8 \times 1$ (D) $9 \times 100 + 5 \times 100 + 7 \times 10 + 8 \times 1$	1	Critical Thinking
9	Place commas correctly and write the numerals: Nine crore five lakh forty one. a)9,05,00,041 b)90,500,41 c)90,500,041 d)9,500,041	1	Understanding
10	Write the three whole numbers occurring just before 10001.	2	Understanding
11	make the greatest and the smallest 4-digit numbers by using any one digit twice 9, 0, 5.	2	Critical Thinking
12	If 1 is added to the greatest 7-digit number, it will be equal to-	2	Informative
13	A student multiplied 7236 by 65 instead of multiplying by 56. By how much was his answer greater than the correct answer?	3	Problem Solving
14	A merchant had rs78,592 with her. She placed an order for purchasing 40 radio sets at rs1200 each. How much money will remain with her after the purchase?	3	

15	In one state, the number of bicycles sold in the year 2002-2003 was 7,43,000. In the year 2003-2004, the number of bicycles sold was 8,00,100. In which year were more bicycles sold? and how many more?	$2+2=4$	Case Study
16	Medicine is packed in boxes, each weighing 4 kg 500g. How many such boxes can be loaded in a van which cannot carry beyond 800 kg?	5	Problem Solving



ARMY PUBLIC SCHOOL GWALIOR
CLASS - VI
ACADEMIC SESSION 2024-25
WORKSHEET (SELF –ASSESSMENT)

Subject: Science
Allotment Date: 30 April 2024

Assignment No. : 1


S. NO.	QUESTIONS	MARKS	NATURE
Q1.	Answer the following questions. I. List any two energy giving foods. II Name the nutrient present in boiled egg (white portion) . III. What are nutrients?	1x3=3	Information
Q2.	I. What is the role of vitamins and minerals in our diet? II. State the importance of balanced diet in our life.	2x2=4	Understanding
Q3.	I. What will happen if a person's diet is deficient in both carbohydrates and proteins? II. What happens if a person eats well but does not drink water at all?	2x3=6	HOT
Q4.	I. Define dietary fibers. Why are they an important part of our diet? II. Mention any two important roles of water as in our body.	3x2=6	Interdisciplinary
Q5.	I. How will you test the presence of protein in a given sample of food?	3x1=3	Analytical Skill
Q6.	II. Write a short note on obesity.	3x1=3	Critical Thinking and Problem Solving
Q7.	I. Discuss about all living beings, do they need the same kind of food?	5x1=5	Communication Skills and Evaluation



ARMY PUBLIC SCHOOL GWALIOR
CLASS - VI
ACADEMIC SESSION 2024-25
WORKSHEET (SELF –ASSESSMENT)

Subject: Social Science
Allotment Date: 30 April 2024

Assignment No. : 1

SECTION	QUESTIONS	MARKS	NATURE
A	Fill in the blanks and rewrite the sentences. 1. The Discovery of India' is a book by _____. 2. Onam festival is celebrated in the state of _____. 3. The Hindi word for the New Moon night is _____. 4. People who gathered their food are called _____. 5. Travelling from one place to another led to _____.	5x1=5	Objective Type Question
B	1. What is the position of our planet, the earth in our Solar System? 2. How are city people different from the people living in the Andaman Islands.	2x2=4	Very Short Question
C	1. What was used in ancient times to write manuscripts? 2. State some characteristics of Stars.	2x3=6	Short Question
D	i) What are the different ways to find out about the past? Describe briefly. ii) Define Solar System and In-list all its planet? How earth is different from other planets?	2x5=10	Long Question
E	Look at the picture given below and answer the following questions:  i) What are constellations? ii) Name the constellation showing in above figure. iii) State True or False. The position of Pole Star keeps changing from time to time.	1x3=3	Case Based Question

F	On the political map of India, mark and locate the following: i. Place where Rice was first grown ii. Indus River iii. Ganga and its tributary iv. Garo Hills	4x.5=2	Map Based Question
----------	--	---------------	---------------------------



ARMY PUBLIC SCHOOL GWALIOR
CLASS - VI
ACADEMIC SESSION 2024-25
WORKSHEET (SELF –ASSESSMENT)

Subject: Sanskrit

Assignment No. : 1

Allotment Date: 30 April 2024

S. NO.	QUESTIONS	MARKS	NATURE																								
1.	शब्दानाम् अर्थान् लिखत- चषकः = सौचिकः = स्यूताः = घटिका = अजाः =	1*5= 5	Information																								
2.	पदानि संयोज्य वाक्यानि रचयत- गजाः - नृत्यति सिंहौ - गायति गायकः - गायकः बालकौ - चलन्ति मयूराः - गर्जतः	1*5=5	Analytical skill																								
3.	वचनानुसारं रिक्तस्थानानि पूरयत- <table border="1" style="width: 100%;"><thead><tr><th>एकवचनम्</th><th>द्विवचनम्</th><th>बहुवचनम्</th></tr></thead><tbody><tr><td>म्</td><td>लते</td><td>लताः</td></tr><tr><td>लता</td><td>.....</td><td>.....</td></tr><tr><td>गीता</td><td>पेटिके</td><td>.....</td></tr><tr><td>.....</td><td>.....</td><td>खट्वाः</td></tr><tr><td>.....</td><td>.....</td><td>.....</td></tr><tr><td>सा</td><td>पेटिके</td><td>.....</td></tr><tr><td>.....</td><td>.....</td><td>.....</td></tr></tbody></table>	एकवचनम्	द्विवचनम्	बहुवचनम्	म्	लते	लताः	लता	गीता	पेटिके	खट्वाः	सा	पेटिके	1*5=5	Understanding
एकवचनम्	द्विवचनम्	बहुवचनम्																									
म्	लते	लताः																									
लता																									
गीता	पेटिके																									
.....	खट्वाः																									
.....																									
सा	पेटिके																									
.....																									
4.	विकल्पेभ्यः उचितम् उत्तरं चित्वा रिक्तस्थानानि पूरयत- क)..... चरतः । अजाः, अजे ख)सन्ति। द्विवचक्रिके, द्विवचक्रिकाः ग)..... चलति। नौका, नौके घ)..... अस्ति। सूचके, सूचके ङ)..... उत्पतन्ति । मक्षिकाः, मक्षिके	1*5=5	Thinking skill																								
5.	पदानां वर्णविच्छेदं प्रदर्शयत- (क) चटके _____ (ख) बालिका _____ (ग) खट्वा _____	1*5=5	Critical thinking																								

	(घ) छुरिका _____ (ङ) नौका _____		
6.	सा,ते,ति इत्येतेभ्यः उचितं सर्वनामपदं चित्वा रिक्तस्थानानि पूर्यत- - (क) लता अस्ति।, (ख) सुधा वदति। (ग) चटके कूजतः। (घ) सौम्या नृत्यति। (ङ) बालिकाः पठन्ति।	1*5=5	Memory skill



ARMY PUBLIC SCHOOL GWALIOR
CLASS - VI
ACADEMIC SESSION 2024-25
WORKSHEET (SELF –ASSESSMENT)

Subject: Music

Assignment No. : 1

Allotment Date: 30 April 2024

S. NO.	QUESTIONS	MARKS	NATURE
1	How Many Types Of Sanyukt Hasta ? A) 28 B) 10	1	Information
2	Which Is The Sanyukta Hasta ? A) Shivling B) Pataka	1	critical Thinking
3	What Is The Time Of Bhoomi Pranam ? A)1 Minute B)15 Second	1	Understanding
4	What Is The Meaning Of Bhoomi Pranam? A)Take Permissions From Earth Before Start Dancing B)Give Thanks To Earth End Of Dancing	1	Information

5	<p>Kathak Is The Dance Of Which State ?</p> <p>A) Uttar Pradesh</p> <p>B)Madhya Pradesh</p>	1	Critical thinking
6	<p>Pratham _____ Shri Ganesh</p> <p>a) Gauri</p> <p>b) Sumir</p>	1	Information
7	<p>How many komal Swars are there in music?</p> <p>a) 5</p> <p>b) 4</p>	1	Information
8	<p>How many vikrit Swar?</p> <p>a) 8</p> <p>b) 5</p>	1	Critical thinking
9	<p>How many notes are there in music?</p> <p>a) 5</p> <p>b) 12</p>	1	Understanding
10	<p>_____ Udar bhuj vishal</p> <p>a) lamb</p> <p>b) kar trishool</p>	1	Understanding



ARMY PUBLIC SCHOOL GWALIOR
CLASS - VI
ACADEMIC SESSION 2024-25
WORKSHEET (SELF –ASSESSMENT)


Subject: ATL

Assignment No. : 1

Allotment Date: 30 April 2024

S. NO.	QUESTIONS	MARKS	NATURE
1.	Choose the correct answer.		
A)	What is an STL? a. A file that stores information about 3D models. b. The coding program. c. A type of filament.	1	Understanding
B)	What is infill? a. Extra material printed inside to avoid collapse. b. The designed object is turned into layers. c. Extra material printed on the outside of the object to support overhangs.	1	Understanding
C)	What is a nozzle? a. It is the part of the printer that melts the filament. b. It is the part of the printer that pushes the filament down. c. It is the part of the printer that holds the 3D object as it prints. It is heated to a lower temperature.	1	Understanding
D)	What are the basic characteristics of 3D Printing? a. 3D objects are made in layers, it is an additive process b. 3D objects are created using a subtractive process c. 3D objects print from the computer	1	Understanding
2.	State whether these statements are true or false.		
A)	Full sized houses and structures now have the ability to be 3D printed.	1	Analytical Thinking
B)	3D Printers can print solutions to problems	1	Understanding
C)	3D Printer can print multicolor models?	1	Understanding
3.	Fill in the blanks.		

A)	_____ is the part of the printer that pushes the filament down.	1	Understanding
B)	In a common 3D printer, _____ determines the color of the model	1	Understanding
C)	_____ is the file format we export to print.	1	Understanding








ARMY PUBLIC SCHOOL GWALIOR
CLASS - VI
ACADEMIC SESSION 2024-25
WORKSHEET (SELF –ASSESSMENT)



Subject: Art and Work Education
Allotment Date: 30 April 2024

Assignment No. : 1

S.NO	QUESTIONS	MARKS	SKILLS
1.	How many types of Lines in Art are there? a) Two b) Four c) Five d) one	1	Creativity
2.	_____ lines convey action and excitement. a) curved lines b) slanted lines c) horizontal lines d) zigzag lines	1	Creativity
3.	What type of line is this?  a) curved lines b) slanted lines c) horizontal lines d) vertical lines	1	Creativity
4.	A _____ is one of the seven elements of art. a) Line b) Perspective c) Shading d) Painting	1	Creativity
5.	What type of line is this?  a) Zigzag line b) curved lines c) slanted lines d) horizontal lines	1	Creativity

6.	<p>Zigzag lines are a series of diagonal lines joined at ends.</p> <p>a) True b) False</p>	1	Creativity
7.	<p>Vertical lines are lines that move left and right.</p> <p>a) True b) False</p>	1	Creativity
8.	<p>Curved lines can be simply wavy or _____.</p> <p>a) Straight b) Spiral c) Slant d) Square</p>	1	Creativity
9.	<p>Diagonal lines are straight lines that _____ in any direction except horizontal or vertical.</p> <p>a) Straight b) Spiral c) Slant d) Zigzag</p>	1	Creativity
10.	<p>Which among these is the picture of Zigzag line?</p> <p>A</p>  <p>B</p>  <p>C</p> 	1	Creativity



ARMY PUBLIC SCHOOL GWALIOR
CLASS - VI
ACADEMIC SESSION 2024-25
WORKSHEET (SELF –ASSESSMENT)



Subject: Yoga

Assignment No. : 1

Allotment Date: 30 April 2024

QUESTIONS	MARKS	SKILLS
Fill in the blanks 1. Yogic games combine elements of _____ and _____. 2. Yogic games promote physical, mental, and _____ well-being. 3. Tree Pose Tag is a game where students play tag while holding the _____ pose.	3X1=3	INFORMATIVE
<u>True and False:</u> 1. Yogic games only focus on physical fitness. (True/False) 2. Partner Poses in Yogic games don't require cooperation. (True/False) 3. Yogic games can help reduce stress and anxiety. (True/False)	3X1=3	CRITICAL THINKING
<u>MULTIPLE CHOICE QUESTIONS:</u> 1. What are the benefits of Yogic games? a) Only physical benefits b) Physical, mental, and social benefits c) Only mental benefits d) Only social benefits 2. Which Yogic game involves performing different yoga poses at each station? a) Tree Pose Tag b) Partner Poses c) Yoga Relay d) Breathing Buddies 3. What should students do to prevent injuries before starting Yogic games? a) Warm up b) Cool down c) Stretch intensely d) None of the above 4. What is the main purpose of Yogic games? a) To promote competition b) To encourage isolation c) To promote health and well-being d) To discourage teamwork	4X1=4	ANALYTICAL THINKING



ARMY PUBLIC SCHOOL GWALIOR
CLASS - VI
ACADEMIC SESSION 2024-25
WORKSHEET (SELF –ASSESSMENT)



Subject: Karate

Assignment No. : 1

Allotment Date: 30 April 2024

S. NO	QUESTIONS	Marks 10
1	What is the meaning of Kata? a) Fight b) Leg Fight c) Pre – decided techniques of offense and defense d) None of these	1
2	Which Japanese word is used at the time of wish in Kata? a) Os b) Ous c) Osu d) Oos	1
3	What is the Japanese name of middle block? a) Jodan age uke b) Chudan sota uke c) Gaidan barai uke d) None of these	1
4	Which stance is used in step punch? a) Zenkotsudachi b) Heikodachi c) Soto heikodachi d) Sanchin dachi	1
5	Which position is used at the time of block in kata ki hon ich? a) Hidari heikodachi b) Migi heikodachi c) Hidari and migi heikodachi d) None of these	1
6	How many steps in ki hon ich kata?	1

	<ul style="list-style-type: none"> a) 10 b) 20 c) 30 d) 40 	
7	<p>In heikodachi dachi legs should be</p> <ul style="list-style-type: none"> a) Parallel to your shoulder b) Inside the shoulder c) Outside the shoulder d) None of these 	1
8	<p>How many sequence in ki hon ich kata?</p> <ul style="list-style-type: none"> a) 10 b) 20 c) 30 d) 40 	1
9	<p>Which punch is used in kata ki hon ich?</p> <ul style="list-style-type: none"> a) Jodan tsuki b) Chudan tsuki c) Gaidan tsuki d) Nidan tsuki 	1
10	<p>What is the starting position of ki hon ich kata?</p> <ul style="list-style-type: none"> a) Heikondachi b) Shikodachi c) Zenkotsudachi d) None of these 	1



ARMY PUBLIC SCHOOL GWALIOR
CLASS - VI
ACADEMIC SESSION 2024-25
WORKSHEET (SELF –ASSESSMENT)



Subject: Health and Physical Education
Allotment Date: 30 April 2024

Assignment No. : 1

S.N	QUESTIONS	MARKS	SKILLS/ COMPETENCIES
1	Multiple Choice 1. which of the followings types of jumps you learn A) Standing jump B) Broad jumps C) Hurdle jump D) All of the above	1	INFORMATION
2	2. What is the purpose of recreational games A) Fitness with fun and games B) Earn more chocolate C) To cry D) To get angry	1	INFORMATION
3	3. On which command children will pick the bottle A) Take B) Snatch c) Push D) Buy	1	INFORMATION

4	<p>4. In the opposite game what you have to do when teacher will say stand up?</p> <p>A. Jump B. Stand up C. Sit down D. Sleep</p>	1	INFORMATION
5	<p>FILL IN THE BLANKS: -</p> <p>1. Jump can be done on _____</p> <p>A) Stairs B) Ground C) Road D) Bus stand</p>	1	INFORMATION
6	<p>2. jumping games make students legs _____</p> <p>A) Strong B) Weak C) Mad D) Fat</p>	1	INTERDISCIPLINARY
7	<p>3. Jumping games good for student _____.</p> <p>A) Health B) Ground C) Cone D) Dress</p>	1	INTERDISCIPLINARY

8	1) We can play recreational games indoor as well as outdoor. (True/False)	1	INTERDISCIPLINARY
9	9. We play games to be healthy and strong. (True/ False)	1	UNDERSTANDING
10	10.Junk food is good for health. (True/False)	1	UNDERSTANDING



ARMY PUBLIC SCHOOL GWALIOR
CLASS - VI
ACADEMIC SESSION 2024-25
WORKSHEET (SELF –ASSESSMENT)



Subject: Computer

Assignment No. : 1

Allotment Date: 30 April 2024

S.NO.	QUESTIONS	MARKS	NATURE
1	<p>Choose and write the correct option (MCQ):-</p> <p>(i) Which of the following is primarily responsible for converting input into meaningful output?</p> <p>(a) RAM (b) CPU (c) Storage device (d) Input and output device</p> <p>(ii) A microphone is a _____ device</p> <p>(a) input (b) output (c) processing (d) none</p> <p>(iii) How many keys does the keyboard have?</p> <p>(a) 101 to 110 (b) 101 to 105 (c) 250 (d) 208</p> <p>(iv) A smart board is a _____ device.</p> <p>(a) output (b) input (c) Processing (d) none</p>	0.5x4=2	Information
2	<p>Fill in the blanks-</p> <p>(i) A blu-ray disc-ROM has the storage capacity of _____ GB.</p> <p>(ii) ALU, CU, and MU are the parts of _____</p> <p>(iii) A _____ is a pointing device which is used to control the actions in a computer game.</p>	4 x0.5=2	Understanding

	(iv) Printers that do not have direct contact between printer head and paper are known as _____.		
3	<p>Write True or False against the statements:-</p> <p>(i) Barcode reader is a output device. ()</p> <p>(ii) A digital camera also called as digicam. ()</p> <p>(iii) The full form of LPM is line post minute.()</p> <p>(iv) The height and width of a memory card is usually no bigger than 1.5 inches. ()</p>	4x0.5=2	Interdisciplinary
4	<p>Answer the following questions -</p> <p>(i) Explain types of printer.</p> <p>(ii) What is ALU? Explain its components.</p> <p>(iii) Explain compact disc.</p> <p>(iv) What is mouse? Explain its types.</p>	1x4= 4	Critical Thinking and Problem Solving