



ARMY PUBLIC SCHOOL GWALIOR
CLASS - V
ACADEMIC SESSION 2024-25
WORKSHEET (SELF –ASSESSMENT)



Subject: English

Assignment No. : 1

Allotment Date: 30 April 2024

S. NO.	QUESTIONS	MARKS	NATURE
1.	<p>Write the meaning of the following words:</p> <p>(i) Fetch -</p> <p>(ii) Escape -</p> <p>(iii) Wearily -</p> <p>(iv) Cease -</p> <p>(v) Pretend -</p>	5x1=5	Information
2.	<p>Complete the spellings:</p> <p>(i) wh__te w__s__</p> <p>(ii) p__e__t__nd</p> <p>(iii) __e__i__gh__ed</p> <p>(iv) f__nc__</p> <p>(v) __umm__r</p>	5x0.5=2.5	Literacy skills
3.	<p>Read the following sentences carefully. Identify whether they are declarative(D), interrogative(I) , imperative(IM) or Exclamatory (E).</p> <p>(i) It is very hot outside. <input type="text"/></p> <p>(ii) Whom do you want to meet? <input type="text"/></p> <p>(iii) Hurray! Team India has won the match. <input type="text"/></p>	5x0.5=2.5	Problem Solving

	<p>(iv) Please call me whenever you are free. <input type="checkbox"/></p> <p>(v) Switch off the lights. <input type="checkbox"/></p>		
<p>4.</p>	<p>Answer the following questions.</p> <p>(i) Why was Aunt Polly delighted?</p> <hr/> <hr/> <hr/> <p>(ii) What did Tom get before the afternoon was over?</p> <hr/> <hr/> <hr/>	<p>2x2=4</p>	<p>Understanding</p>
<p>5.</p>	<p>How was Tom successful in getting others to do the work for him?</p> <hr/> <hr/> <hr/>	<p>3x1=3</p>	<p>HOTS</p>
<p>6.</p>	<p>Fill in the blanks.</p> <p>(i) Tom had to whitewash the.....</p> <p>(ii) Aunt Polly was happy to see fence looking so.....white.</p> <p>(iii)was carrying a bucket to fetch water from the water pump.</p>	<p>3x1=3</p>	<p>Inquiry</p>



ARMY PUBLIC SCHOOL GWALIOR
CLASS - V
ACADEMIC SESSION 2024-25
WORKSHEET (SELF -ASSESSMENT)



Subject: Hindi

Assignment No. : 1

Allotment Date: 30 April 2024

क्रमसं	प्रश्न	अंक	प्रश्न के प्रकार
1.	निम्नलिखित शब्दों के 2-2 पर्यायवाची शब्द लिखो- (i) सेवक - (ii) जग - (iii) प्रभु -	3x1=3	बोधार्थक
2.	निम्नलिखित शब्दों के अर्थ लिखें - (i) निशिदिन - (ii) दंभ - (iii) विनम्र -	3x1=3	ज्ञानार्थक
3.	कविता "वह शक्ति हमें दो" की कोई चार पंक्तियाँ लिखें ।	4x1=4	रचनात्मक

4.	दिए गए शब्दों के समानार्थक शब्द लिखो - (i) वर्षा - (ii) धरती - (iv) शिष्य - (v) भोजन -	4x1=4	सूचनात्मक
5.	निम्नलिखित राज्यों में बोली जाने वाली भाषा लिखिए - (i) बंगाल - (ii) गुजरात - (iii) तमिलनाडु - (iv) पंजाब -	4x1=4	विश्लेषणात्मक
6.	यदि आपके मित्र का खाने का डिब्बा गिर जाए तो आप क्या करोगे? ----- ----- ----- -----	2x1=2	उच्चस्तरीय चिंतन



ARMY PUBLIC SCHOOL GWALIOR
CLASS - V
ACADEMIC SESSION 2024-25
WORKSHEET (SELF –ASSESSMENT)

Subject: Mathematics

Assignment No. : 1

Allotment Date: 30 April 2024

S. NO.	QUESTIONS	MARKS	NATURE
1	Fill in the blanks: (i) One million = Lakh (ii) Roman numeral for 49 is	2*1=2	Understanding
2	Write 'True' or 'False': A) The place value of 8 in 97894 is 800 () B) The face value of 6 in 25643 is 600 ()	2*1=2	HOTS
3	Tick the correct answer from the given options: A. The sum of 3703895 + 2887098 is (i) 5525275 (ii) 6497798 (iii) 9078921 (iv) 6590993 B. The estimate sum of 380419 and 218765 is a) 500000 b) 600000 c) 700000 d) 400000 C. The difference of 503481 – 218375 is a) 345179 b) 285106 c) 651878 d) 109889	3*1=3	Critical thinking
4	Solve the following questions: - (i) The successor of 22,368,089: _____ (ii) 10 thousand more than 35 thousand: _____	3*1=3	Interdisciplinary

	(iii) Expanded form of 79345201 is _____		
5	<p>Solve the following questions:</p> <p>a) The sum of two numbers is 41482308. If one number is 3918695 then, find the other number.</p> <p>b) Mr. Jones deposited Rs2,78,475 in a bank in his account. Later he withdrew Rs1,55,755 from his account. How much money was left in the bank in his account?</p> <p>c) The population of a country in 1990 was 906450600 and next year it is increased by 9889700. What was the population of that country in the year of 1991?</p> <p>d) In an election 23875501 votes were polled. There were three candidates in the election. Two of them got 9823823 and 11575923 votes respectively. How many votes were polled in favor of the third candidate?</p> <p>e) Form the greatest and smallest 6 digit number using digits 3,0,9,5,8,7 and</p> <p>(i) Find the sum of the greatest and smallest number formed</p> <p>(ii) Find the difference of the greatest and smallest number formed</p>	5*2=10	Problem Solving



ARMY PUBLIC SCHOOL GWALIOR
CLASS - V
ACADEMIC SESSION 2024-25
WORKSHEET (SELF –ASSESSMENT)

Subject: EVS

Assignment No. : 1

Allotment Date: 30 April 2024

S. NO.	QUESTIONS	MARKS	NATURE
Q1.	Fill in the blanks: i) When a family is forced to move from its village due to flooding, it is called _____. ii) _____ is an example of man-made calamity. iii) Famine and drought are the examples of _____ calamities. iv) People who settle in other countries are called _____. v) _____ communicate with sign language.	5x1=5	Information
Q2.	State 'True' and 'False': i) Special people need our normal care and love. _____ ii) Our occupation influences our likes and dislikes. _____ iii) We have six sense organs. _____ iv) A family is a group of people tracing their origin from common ancestors. _____ v) Immigration is an aid provided by the government. _____	5X1=5	Understanding

Q3.	Define the term: i) Demolition _____ _____	2X1=2	Analytical skills
Q4.	Differentiate between the following: i) Migration and Displacement _____ _____ _____ _____	3x1=3	Interdisciplina ry
Q5.	i) How do our sense organs work? _____ _____ _____ ii) List the positive and negative impacts of migration? _____ _____ _____ _____	2x2=4	Evaluation skills
Q 6.	Why do blind and deaf people become very sensitive towards smells and sounds? _____	1x1=1	Comprehension

--	--	--	--



ARMY PUBLIC SCHOOL GWALIOR
CLASS - V
ACADEMIC SESSION 2024-25
WORKSHEET (SELF –ASSESSMENT)




Subject: Computer

Assignment No. : 1

Allotment Date: 30 April 2024

S.NO.	QUESTIONS	MARKS-10	NATURE
1	Choose and write the correct option (MCQ):-	1/2x5=2.5	Information
i)	The first calculating device was _____. a) Napier's Bones b) Abacus c) Pascaline		
ii)	Which calculating device was developed by Gottfried Wilhelm von Leibniz? a) Pascaline b) Mark I c) Step Reckoner		
iii)	_____ is known as the 'Father of Computer'. a) Charles Babbage b) Herman Hollerith c) Blaise Pascal		
iv)	The second generation computers used _____. a) Transistors b) Vacuum tube c) IC		
v)	The _____ generation computers are based on Artificial Intelligence. a) First b) Third c) Fifth		
2	Fill in the blanks- a) Abacus was invented by the _____. b) _____ was invented by Blaise Pascal in 1642. c) _____ invented Difference Engine and Analytical Engine. d) The fifth generation computers are still in _____ and _____ phase.	1/2 x 4=2	Understanding

3.	<p>Write 'T' for True and 'F' for False statements.</p> <ul style="list-style-type: none"> a) Early man used to count with the help of stones, fingers, etc. b) Herman Hollerith invented Tabulating Machine in 1950. c) Mark I was first electro-mechanical computer. d) The third generation of computers used vacuum tubes. e) Integrated circuits are used in the fourth generation of computers. 	1/2x5=2.5	Understand ding
4.	<p>Answer the following questions:-</p> <ul style="list-style-type: none"> a) Name any five key features that Charles Babbage used in Analytical Engine. b) What is a microprocessor? Which generation used it? c) What is the main goal of fifth generation of computers? 	1 x 3=3	Evaluation






ARMY PUBLIC SCHOOL GWALIOR
CLASS - V
ACADEMIC SESSION 2024-25
WORKSHEET (SELF –ASSESSMENT)



Subject: Art and Work Education
Allotment Date: 30 April 2024

Assignment No. : 1

S.NO	QUESTIONS	MARKS	SKILLS
1.	How many types of Lines in Art are there? a) Two b) Four c) Five d) one	1	Creativity
2.	_____ lines convey action and excitement. a) curved lines b) slanted lines c) horizontal lines d) zigzag lines	1	Creativity
3.	What type of line is this?  a) curved lines b) slanted lines c) horizontal lines d) vertical lines	1	Creativity
4.	A _____ is one of the seven elements of art. a) Line b) Perspective c) Shading d) Painting	1	Creativity
5.	What type of line is this?  a) Zigzag line b) curved lines c) slanted lines d) horizontal lines	1	Creativity

6.	<p>Zigzag lines are a series of diagonal lines joined at ends.</p> <p>a) True b) False</p>	1	Creativity
7.	<p>Vertical lines are lines that move left and right.</p> <p>a) True b) False</p>	1	Creativity
8.	<p>Curved lines can be simply wavy or _____.</p> <p>a) Straight b) Spiral c) Slant d) Square</p>	1	Creativity
9.	<p>Diagonal lines are straight lines that _____ in any direction except horizontal or vertical.</p> <p>a) Straight b) Spiral c) Slant d) Zigzag</p>	1	Creativity
10. A B C	<p>Which among these is the picture of Zigzag line?</p> 	1	Creativity



ARMY PUBLIC SCHOOL GWALIOR
CLASS - V



ACADEMIC SESSION 2024-25
WORKSHEET (SELF –ASSESSMENT)

Subject: Health and Physical Education

Assignment No. : 1

Allotment Date: 30 April 2024

S.N	QUESTIONS	MARKS	SKILLS/ COMPETENCIES
1	Multiple Choice 1. which of the followings types of jumps you learn A) Standing jump B) Broad jumps C) Hurdle jump D) All of the above	1	INFORMATION
2	2. What is the purpose of recreational games A) Fitness with fun and games B) Earn more chocolate C) To cry D) To get angry	1	INFORMATION
3	3. On which command children will pick the bottle A) Take B) Snatch c) Push D) Buy	1	INFORMATION

4	<p>4. In the opposite game what you have to do when teacher will say stand up?</p> <p>A. Jump B. Stand up C. Sit down D. Sleep</p>	1	INFORMATION
5	<p>FILL IN THE BLANKS: -</p> <p>1. Jump can be done on_____</p> <p>A) Stairs B) Ground C) Road D) Bus stand</p>	1	INFORMATION
6	<p>2. jumping games make students legs _____</p> <p>A) Strong B) Weak C) Mad D) Fat</p>	1	INTERDISCIPLINARY
7	<p>3. Jumping games good for student_____.</p> <p>A) Health B) Ground C) Cone D) Dress</p>	1	INTERDISCIPLINARY

8	1) We can play recreational games indoor as well as outdoor. (True/False)	1	INTERDISCIPLINARY
9	9. we play games to be healthy and strong. (True/False)	1	UNDERSTANDING
10	10.Junk food is good for health. (True/False)	1	UNDERSTANDING



ARMY PUBLIC SCHOOL GWALIOR
CLASS - V
ACADEMIC SESSION 2024-25
WORKSHEET (SELF –ASSESSMENT)



Subject: Music

Assignment No. : 1

Allotment Date: 30 April 2024

S. NO.	QUESTIONS	MARKS	NATURE
1	How Many Types Of Asumyukta Hasta? A) 10 B) 15	1	Information
2	Kathak Is A Classical Dance Form Of Which State ? A) Uttar Pradesh B) Arunachal Pradesh	1	critical Thinking
3	How Many Dance Form In India ? A)11 B)5	1	Understanding
4	Mohiniattam Is Classical Dance Form Of Which State ? A)Tamilnadu B)Karnataka	1	Information
5	How Many Matra's In Teen Taal ? A) 16 Matra's B)18 Matra's	1	Critical thinking

6	Hamri uljhan _____ Bhagwan a) Palan hare b) Suljhao	1	Information
7	O Palanhare _____ nyare a) Nirgun b) Hamri	1	Information
8	SaGa ReMa _____ Madha PaNi dhaSa a) GaPa b) dhaNi	1	Critical thinking
9	MaMa PaPa _____ NiNi SaSa a) ReRe b) dhadha	1	Understanding
10	_____ Keshavam Krishna damodram a) Kaun kehta hai b) Achyutam	1	Understanding