

ARMY PUBLIC SCHOOL GWALIOR
CLASS - IV
ACADEMIC SESSION 2024-25
WORKSHEET (SELF –ASSESSMENT)



Subject: English

Allotment Date: 30 April 2024

Assignment No. : 1

S. NO.	QUESTIONS	MARKS	NATURE
1.	<p>Read the following Unseen Passage and answer the given questions:</p> <p>There is a park near Raman's house. It is very big and green. It has a pond. It also has a swing, sea-saw slide and merry-go-round. Children love to walk in this park. They have a lot of fun here.</p> <p>Q.1) Where is the park?</p> <p>Ans. _____ _____</p> <p>Q.2) Is it big or small?</p> <p>Ans. _____ _____</p> <p>Q.3) What is there in the park for the children to enjoy?</p> <p>Ans. _____ _____</p> <p>Q.4) What you like to do in a park?</p> <p>Ans. _____ _____</p>	4	Reading & Understanding
2.	<p>Complete the following sentences:</p> <p>(i) The _____ is an old monument. (use proper noun)</p> <p>(ii) She takes _____ in her work. (use abstract noun)</p> <p>(iii) A large _____ had gathered to watch the match. (use collective noun)</p> <p>(iv) _____ fly in the sky. (use common noun)</p>	2	Critical Thinking
3.	<p>Match the following word with their meanings:</p> <p>(i) sighed (a) an imperial headdress</p> <p>(ii) stump (b) expressing sorrow</p> <p>(iii) crown (c) part of tree trunk</p>	3	Understanding and analytical

4.	<p>Answer the following questions.</p> <p>(i) Why did the boy want money? Ans. _____ _____</p> <p>(ii) How did the boy make the boat? Ans. _____ _____</p>	2	HOTS									
5.	<p>Fill in the blanks of the box:</p> <table border="1" data-bbox="193 763 1067 1070"> <thead> <tr> <th data-bbox="193 763 330 860">S.no.</th> <th data-bbox="330 763 691 860">Singular noun</th> <th data-bbox="691 763 1067 860">Plural noun</th> </tr> </thead> <tbody> <tr> <td data-bbox="193 860 330 965">(i)</td> <td data-bbox="330 860 691 965">_____</td> <td data-bbox="691 860 1067 965">tables</td> </tr> <tr> <td data-bbox="193 965 330 1070">(ii)</td> <td data-bbox="330 965 691 1070">hair</td> <td data-bbox="691 965 1067 1070">_____</td> </tr> </tbody> </table>	S.no.	Singular noun	Plural noun	(i)	_____	tables	(ii)	hair	_____	2	Evaluation
S.no.	Singular noun	Plural noun										
(i)	_____	tables										
(ii)	hair	_____										
6.	<p>(i) List out some benefits that we get from the trees? Ans. _____ _____</p> <p>(ii) What you can do to save the trees? Write your views. Ans. _____ _____</p>	4	Interdisciplinary									
7.	<p>(i) Is the title of the story "The Giving Tree" appropriate? Support your answer with reasons? _____ _____ _____ _____ _____ _____</p>	3	Communication Skills									



ARMY PUBLIC SCHOOL GWALIOR
CLASS - IV
ACADEMIC SESSION 2024-25
WORKSHEET (SELF -ASSESSMENT)



Subject: Hindi
Allotment Date: 30 April 2024

Assignment No. : 1

क्रम सं.	प्रश्न	अंक	प्रकृति
1.	निम्नलिखित शब्दों का अर्थ लिखिए— साहस - तन - टक्कर लेना - बाधाओं - तनिक - पूर्ण -	.5x6=3	सूचनात्मक संचार कौशल (Informative Communication Skills)
2.	निम्नलिखित प्रश्नों के उत्तर दीजिए— प्रश्न-1 भारत के बच्चों के कोई दो गुण लिखो? प्रश्न-2 बच्चे नई राह कैसे बनाएंगे? प्रश्न-3 भारत मां की अभिलाषा कैसे पूरी की जा सकती हैं? प्रश्न-4 बच्चे कैसे लोगों की मदद करना चाहते हैं?	1x4=4	गंभीर सोच और समस्या समाधान (Critical Thinking and Problem Solving)
3.	निम्नलिखित प्रश्न का उत्तर दीजिए— (क) देश के जागरूक नागरिकों में कौन-कौन से गुण होने चाहिए ?	1x5=4	अंतःविषयी (Interdisciplinary)
4.	सही विकल्प का चयन कीजिए— (क)1. कवि ने बच्चों को किसके पुतले कहा है? दुर्गुणों के साहस के मिट्टी के सोने के 2. बच्चे टक्कर लेने वालों को क्या सिखाएंगे? गणित अंग्रेजी सबक नाचना 3. मां किसको कहा गया है?	1x5=5	समझ (Understanding)

	माता को गाय को चट्टानों को भारत माता को 4. अभिलाषा का समानार्थक है- चाह ,इच्छा कामना , जरूरत फूल,सुंदर मांगना ,परेशान करना 5. राह का समानार्थक शब्द है- कार्य, कर्म मार्ग, रास्ता कर्म ,करुं राहगीर, रही		
5.	समानार्थक शब्दों का मिलान कीजिए- तूफान हिम्मत,हौसला राह कार्य,कर्म साहस इच्छा ,चाह अभिलाषा आंधी, झंझा काम। मार्ग, रास्ता	1x5=5	मूल्यांकन (Evaluation)
6.	निम्नलिखित शब्दों का वर्ण विच्छेद कीजिए- पूर्ण – तनिक- बच्चा- चट्टान- अभिलाषा-	1x5=5	विश्लेषणात्मक (Analytical)
7.	प्रत्येक पंक्ति में आए संज्ञा शब्दों पर गोला लगाइए- पिता बच्चे बढ़ते तूफान तन दुबले साहस मां चट्टान लड़की बहादुर झंडा देश फुल सुंदर बगीचा	1x4=4	समझ (Understanding)



ARMY PUBLIC SCHOOL GWALIOR
CLASS - IV
ACADEMIC SESSION 2024-25
WORKSHEET (SELF –ASSESSMENT)




Subject: Mathematics
Allotment Date: 30 April 2024

Assignment No. : 1

S. NO.	QUESTIONS	MARKS	NATURE
1.	Fill in the blanks:- a. There are _____ periods in 6 digits international place value system. b. $4000+600+_____+_____ = 4609$ c. Complete the series $9425, 9475, 9525, _____, _____, _____, _____$ d. _____ roman number represent the sum of numeral $(50+10+5+1=6)$. e. The numerals _____, _____, and _____ are never repeated.	5	Observation
2.	Write the expended form of the following :- (Indian place value) a. 7348 - _____ b. 890462- _____ c. 45621- _____ d. 68055- _____	4	Mental Ability
3.	Put the comma's and rewrite the number:- (International place value) a. 62453 - _____ b. 264980- _____ c. 808937- _____ d. 968055- _____	4	Decision Making
4.	Write the number names for the given numbers in both Indian and international place value system:- a) 634721- _____ _____ b) 381764- _____ _____	2	Problem-Solving

5.	Match the roman numeral with number:- Roman Number number a. X i. 50 b. C ii. 1000 c. D iii.100 d. M iv. 10 e. L v. 500	5	Critical Thinking
-----------	---	----------	-------------------



ARMY PUBLIC SCHOOL GWALIOR
CLASS - IV
ACADEMIC SESSION 2024-25
WORKSHEET (SELF –ASSESSMENT)



Subject: EVS

Allotment Date: 30 April 2024

Assignment No. : 1

S. NO.	QUESTIONS	MARKS	NATURE
Q1	Choose an example of egg laying animal. a. Snake b Hen c. Both a and b	1x1=1	Information
Q2	Choose the correct option. 1. A joint family has ----- set/sets of family. a. one b. many c. none 2. Adopted children ----- inherited traits. a. carry b. don't carry	2X1=2	Understanding
Q3	Why do the children resemble with their parents? _____ _____	2x1=2	HOT
Q4	i. How do you feel when you walk near a heap of garbage? Think of the children who spend the whole day picking things from such garbage? _____ _____ ii. Why do people adopt babies? _____ _____	2x2=4	Interdisciplinary
Q5	i. For an activity find out the likes and dislikes of your family members. Observe the similarities and differences between them. _____ _____	3x2=6	Analytical Skill

	<hr/>		
	ii. What kind of questions came to your mind after seeing the animals with their babies? <hr/> <hr/>		Critical Thinking and Problem Solving
Q 6.	i. What are Planets? ii. What is another name of Earth? iii. Who are cartographers? iv. Which negative impact of migration you will not like? v. Who is the head of paternal family? <hr/> <hr/> <hr/> <hr/> <hr/>	1x5=5	Comprehension



ARMY PUBLIC SCHOOL GWALIOR
CLASS - IV
ACADEMIC SESSION 2024-25
WORKSHEET (SELF –ASSESSMENT)




Subject: Computer

Allotment Date: 30 April 2024

Assignment No. : 1

S.NO.	QUESTIONS	MARKS-10	NATURE
1	Choose and write the correct option (MCQ):-	1/2x5=2.5	Information
i)	_____ protects the internal electronic components from damage. a) RAM b) ALU c) System Unit		
ii)	_____ controls each part of computer. a) Motherboard b) CPU c) CD-ROM		
iii)	Speed of a CPU is measured in _____. A) MHz B) GHz C) Both a and b		
iv)	_____ is a volatile memory. a) Hard Disk b) RAM c) ROM		
v)	_____ drives are used for holding data and instructions for future use. a) ROM b) CPU c) Disk		
2	Fill in the blanks- a) A _____ is a large circuit-board inside the system unit. b) CPU is also called _____ or _____. c) _____ is also called the primary memory. d) An _____ enhances the functionality of components of the computer. e) _____ port is used to connect the Internet and network cable.	1/2 x 5=2.5	Understanding

3.	Write 'T' for True and 'F' for False statements. a) Motherboard is also known as system board. b) Memory of the computer is measured in MHz. c) RAM stores the data permanently. d) Hard disk drive reads information stored on CDs/DVDs.	$\frac{1}{2} \times 4=2$	Understanding
4.	Answer the following questions:- a) What do you mean by System unit? b) Write any two uses of motherboard in a computer. c) What are the uses of ports? Write down the names of some ports.	$1 \times 3=3$	Evaluation



ARMY PUBLIC SCHOOL GWALIOR
CLASS - IV
ACADEMIC SESSION 2024-25
WORKSHEET (SELF –ASSESSMENT)




Subject: Health and Physical Education
Allotment Date: 30 April 2024

Assignment No. : 1

S.N	QUESTIONS	MARKS	SKILLS/COMPETENCIES
1	Multiple Choice 1. which of the followings types of jumps you learn A) Standing jump B) Broad jumps C) Hurdle jump D) All of the above	1	INFORMATION
2	2. What is the purpose of recreational games A) Fitness with fun and games B) Earn more chocolate C) To cry D) To get angry	1	INFORMATION
3	3. On which command children will pick the bottle A) Take B) Snatch c) Push D) Buy	1	INFORMATION
4	4. In the opposite game what you have to do when teacher will say stand up? A. Jump B. Stand up C. Sit down D. Sleep	1	INFORMATION
5	FILL IN THE BLANKS: - 1. Jump can be done on _____ A) Stairs B) Ground C) Road D) Bus stand	1	INFORMATION

6	2. jumping games make students legs _____ A) Strong B) Week C) Mad D) Fat	1	INTERDISCIPLINARY
7	3. Jumping games good for student_____. A) Health B) Ground C) Cone D) Dress	1	INTERDISCIPLINARY
8	1) We can play recreational games indoor as well as outdoor. (True/False)	1	INTERDISCIPLINARY
9	9. we play games to be healthy and strong. (True/ False)	1	UNDERSTANDING
10	10.Junk food is good for health. (True/False)	1	UNDERSTANDING





ARMY PUBLIC SCHOOL GWALIOR
CLASS - IV
ACADEMIC SESSION 2024-25
WORKSHEET (SELF -ASSESSMENT)






Subject: Art Education

Assignment No. : 1

Allotment Date: 30 April 2024

S.NO	QUESTIONS	MARKS	SKILLS
1.	How many types of Lines in Art are there? a) Two b) Four c) Five d) one	1	Creativity
2.	_____ lines convey action and excitement. a) curved lines b) slanted lines c) horizontal lines d) zigzag lines	1	Creativity
3.	What type of line is this?  a) curved lines b) slanted lines c) horizontal lines d) vertical lines	1	Creativity
4.	A _____ is one of the seven elements of art. a) Line b) Perspective c) Shading d) Painting	1	Creativity
5.	What type of line is this?  a) Zigzag line b) curved lines c) slanted lines d) horizontal lines	1	Creativity
6.	Zigzag lines are a series of diagonal lines joined at ends. a) True b) False	1	Creativity

7.	<p>Vertical lines are lines that move left and right.</p> <p>a) True b) False</p>	1	Creativity
8.	<p>Curved lines can be simply wavy or _____.</p> <p>a) Straight b) Spiral c) Slant d) Square</p>	1	Creativity
9.	<p>Diagonal lines are straight lines that _____ in any direction except horizontal or vertical.</p> <p>a) Straight b) Spiral c) Slant d) Zigzag</p>	1	Creativity
10.	<p>Which among these is the picture of Zigzag line?</p> <p>A</p>  <p>B</p>  <p>C</p> 	1	Creativity



ARMY PUBLIC SCHOOL GWALIOR
CLASS - IV
ACADEMIC SESSION 2024-25
WORKSHEET (SELF –ASSESSMENT)



Subject: Music
Allotment Date: 30 April 2024

Assignment No. : 1

S. NO.	QUESTIONS	MARKS	NATURE
1	How many types of Hasta Mudra in Kathak? a) 5 b) 2	1	Information
2	How many types of Asumyukta Hasta Mudra? a) 28 b) 26	1	critical Thinking
3	what is the use of Pataka Hasta in kathak dance ? a)To give blessing b)To give money	1	Understanding
4	What is the meaning of Bhoomi Pranam? a)Take permissions from earth before start dancing b)Give thanks to earth end of dancing	1	Information
5	Which one is the example of Asumyukta Hasta Mudra ? a)Pranam Hasta b)Tri-Pataka Hast	1	Critical thinking
6	So high Get over it a) you can't b) it's so wonder full	1	Information
7	Teri hai Tera aasma a)khuda da mere b)zameen	1	Information
8	Sa sa, rě rě,.....Ma mà, pa pa dha dha ni a)ni ni b)Ga Ga	1	Critical thinking
9	Sa rě, ga mà , mà pa , pa dha a)pa dha b) re ga	1	Understanding
10	How many notes are There in music? a) 5 b) 7	1	Understanding