



**ARMY PUBLIC SCHOOL GWALIOR**  
**CLASS - III**  
**ACADEMIC SESSION 2023-24**  
**REVISION WORKSHEET (SELF –ASSESSMENT)**



Subject: English

Allotment Date: 10 February 2024

Assignment No. : 9

S. NO.	QUESTIONS	MARKS	NATURE
1	<p><b>Read the following <u>unseen passage</u> for class 2 carefully and answer the questions given below the unseen passage:</b></p> <p>Emily found a lost kitten. It was small and scared. She took it home and gave it food and a soft bed. The kitten purred happily. Now, they are best friends. Now Emily plays with her kitten. They enjoy fully each other's company. Emily calls her cat " Binny."</p> <p><b>Please read the questions carefully asked from the unseen passage and answer them":</b></p> <p>1. What did Emily find?</p> <hr/> <p>2.. What does Emily call her cat?</p> <hr/>	4x1=4	Understanding
2.	<p><b>Fill in the blanks with a suitable answer:-</b></p> <p>3. Emily found a lost _____.</p> <p><b>Tick the correct True/False answer:</b></p> <p>5. Emily and her kitten are not best friends. (True or False)</p> <p><b>Read the given <u>unseen poem</u> carefully and answer the questions that follow:</b></p> <p>I put on a clean shirt And go to work Which of us Which of us will come back? Four and twenty moons Not seeing women Not seeing my hand Which of us Which of us will die? I put on a clean shirt And go to work my contract To work far away</p> <p>I go beyond the mountain</p>	3.5x1=3.5	

Into the bush  
 Where the roads end  
 And the rivers run dry  
 Which of us  
 Which of us will come back?  
 Which of us  
 Which of us will die?

**Answer the following questions:**

1. What will the poet do as he put on a clean shirt?

---



---

2. Make sentence on these words:

a) river

3. Make a list of any two places where the port would go.

---

4. Give a suitable title to the poem.

---



---

3.

**(SECTION - B)**

4x1=4

Write a letter to the principal of your school requesting him for two days leave due to a marriage function of your cousin. ( Write the Letter on back side of this sheet or on rough notebook)

4.

3.5x1=3.5

Write one of your favourite story based on English Grammar book. ( Use another blank side of sheet or write it in rough notebook)

5.

1.5x1=1.5

**SECTION - C**

Choose the correct option for the following questions

(i) Write the correct pronoun in the following sentence:

Radha is my sister .....is eight years old.

(a) She (b) They (c) He

(ii) Fill in the blank with suitable adjective:

Ice cream is cold but tea is.....

(a) hot (b) horror (c) loud

(iii) Fill in the blanks with suitable comparative form of adjective:

Rohan is ..... than his'friend.

(a) Tall (b) taller (c) tallest

6.

5x1=5

**Fill in the blanks by following the instructions given below:**

(a) Shalini \_\_\_\_\_ to her hometown by bus. (use simple present tense of **go**)

(b) I am playing football. (underline the **verb**)

(c) Sakhi is \_\_\_\_\_ because he failed her exam.. (use present continuous tense of **cry**)

(d) He \_\_\_\_\_ the monitor of our class for one week. (use simple past tense of **be**)

Problem Solving

	(e) We _____ yesterday. (use past continuous tense of <b>play</b> )		
7.	<p><b>State whether the following statements are 'True' or False':</b></p> <p>(a) Humpty Dumpty spoke very politely. _____</p> <p>(b) We use shall to give an order to someone and <b>not</b> to offer a suggestion _____;</p> <p>(c) Definite and indefinite are two types of adjectives. _____</p>	1.5x1=1.5	Observation
8.	<p><b>Answer the following questions in one word only:</b></p> <p>(i) What is a definite article?</p>	3x1=3	
9.	<p>(ii) The train arrived..... the station late. (use preposition)</p> <p>(iii) Beauty..... (use <b>suffix</b> to make a new word)</p>		
10.	<p><b>Rewrite the following sentence by doing the proper punctuation:</b></p> <p>Oh you like wooden pencil or pen pencil asked Rohan</p>	0.5x1=0.5	
11.	<p><b>Make sentences using the following verbs:</b></p> <p>(i) learn-</p>	1x1=1	
	<p><b>SECTION – D</b></p> <p><b>Choose the correct option for the following questions:</b></p> <p>(i) Dr. Abdul Kalam was elected the president of india in (a) 2002 (b) 2000 (c) 2004</p> <p>(ii) Fourscore is equal to (a) Eighty (b) hundred (c) sixty</p> <p>(iii) The cricket match was played at the (a) Eden Garden (b) Feroze Shah Kotla Stadium (c) Wankhede Stadium</p>	3x1=3	Critical Thinking
12.		1x1=1	
13.	<p><b>Frame sentences using the following words</b></p> <p>(i) funny-</p>	3x1=3	
	<p><b>Answer the following questions in one word:</b></p> <p>(i) What did Deepak want to become initially?</p>		

14.	<hr/> <hr/> (ii) Have you seen any naughty boys in your class?	1x1=1	
15.	<hr/> <hr/> (iii) Where did Ravi and Krishnan buy snacks from?	2x1=2	
16.	<hr/> <hr/> <b>Answer the following questions with reference to the context:</b> <b>“Don’t you think you’d be safer down on the ground?”</b> <b>Answer the following questions on the basis of above lines.</b> (i) Who said these words to whom?	1x2=2	
17.	<hr/> <hr/> <b>Answer the following questions in short :</b> (i) How did Dr APJ Abdul Kalam earn money when he was studying in the school?	0.5x1=0.5	HOTS
	<hr/> <hr/> (ii) What had the king promised to Humpty Dumpty?		
	<hr/> <hr/> <b>Answer the following questions in detail :</b> (i) According to the poet of the poem, ‘How Many Greens’, what is the importance of big trees?		
	<hr/> <hr/> <hr/> <hr/> <b>Think and answer the question given below:</b> (i) Do you think that it is important to work hard to be successful in life? Explain with reference to Dr APJ Abdul Kalam.		

	<hr/> <hr/> <hr/> <hr/> <hr/> <hr/>		
--	---	--	--



ARMY PUBLIC SCHOOL GWALIOR  
CLASS - III



ACADEMIC SESSION 2023-24  
REVISION WORKSHEET (SELF -ASSESSMENT)

Subject: Hindi

Assignment No. : 9

Allotment Date: 10 February 2024

सं ख्या	प्रश्न	अंक
प्र 1.	<p>निम्नलिखित गद्यांश को ध्यान पूर्वक पढ़कर दिए गए प्रश्नों के उत्तर दें-</p> <p>भारत देश त्योहारों का देश कहा जाता है। यहाँ का खास पर्व है दीपावली   इस दिन भगवान राम 14 साल का वनवास काटकर अपने राज्य में लौटे थे। दीपावली का मतलब होता है, दीपों की अवली। दिवाली के दिन हर जगह रौनक होती है। इसे बुराई पर अच्छाई की जीत के रूप में भी बनाया जाता है। ऐसा माना जाता है कि इस दिन अपने घर, दुकान, और कार्यालय आदि में साफ- सफाई रखने से उस स्थान पर लक्ष्मी का प्रवेश होता है। इस दिन घरों को दियों से सजाया जाता है और पटाखे फोड़े जाते हैं। इस दिन सभी लोग खास तौर से बच्चे उपहार, पटाखे, मिठाइयां और नये कपड़े बाजार से खरीदते हैं। शाम के समय, सभी अपने घर में लक्ष्मी पूजा करते हैं तथा घरों को रोशनी से सजाते हैं। इस दिन पटाखे और विभिन्न खेलों से सभी दीवाली की मस्ती में डूब जाते हैं।</p> <p>निम्नलिखित प्रश्नों के उत्तर दें-</p> <p>(1) सही या गलत का निशान लगाइए-</p> <p>(क) दिवाली के दिन भगवान राम 14 दिन का वनवास काटकर वापस लौटे थे। ( )</p> <p>(2) खाली स्थान भरों -</p> <p>(क) दिवाली के दिन हर जगह _____ होती है।</p> <p>(3) विलोम शब्द लिखो-</p> <p>(क) अंधकार (ख) अच्छाई</p> <p>(4) निम्नलिखित प्रश्न का उत्तर एक वाक्य में लिखें -</p> <p>(क) दिवाली का पर्व क्यों मनाया जाता है?</p> <p>निम्नलिखित पद्यांश को ध्यान पूर्वक पढ़कर दिए गए प्रश्नों के उत्तर दें-</p>	5x1=5
		3x1=3

प्र.2

कुछ तो लगते हैं तूफानी,  
कुछ रह - रह करते शैतानी।  
कुछ अपने थैलों से चुपके,  
झर-झर झर बरसाते पानी।  
नहीं किसी की सुनते कुछ भी,  
ढोलक ढोल बजाते बादल।

(1) समान तुक वाले शब्द लिखो-

(क) शैतानी \_\_\_\_\_

(ख) बजाते \_\_\_\_\_

(2) निम्नलिखित प्रश्न के उत्तर एक वाक्य में लिखें-

(क) बादल अपने साथ क्या-क्या लाते हैं?

प्र.3

विद्यालय में प्रवेश प्राप्ति हेतु प्रधानाचार्य को प्रार्थना पत्र लिखें -

---

---

---

---

---

---

---

---

---

---

---

---

---

---

---

---

---

---

---

---

---

---

---


---

5x1=5

5x1=5

प्र.4

दिए गए चित्र को देखकर पांच वाक्य लिखें-



2x1=2

सही (✓) या गलत (x) का निशान लगाएँ -

(क) भाषा को लिखने के लिए निश्चित को लिपि कहते हैं। \_\_\_\_\_

(ख) अंग्रेजी भाषा सबसे ज्यादा बोली जाने वाली भाषा है। \_\_\_\_\_

2x1=2



प्र.5	वाक्यों में आए संज्ञा शब्द रेखांकित करें- (क) सूरज की रोशनी चंद्रमा को भी चमकाती हैं। (ख) आज मेरे स्कूल में वार्षिक महोत्सव है।	2x1=2
प्र.6	निम्नलिखित शब्दों के वर्णों को अलग-अलग (वर्ण विच्छेद) करके लिखिए- (क) कहानी - _____	0.5x2=1
प्र.7	(ख) अध्यापक - _____	
प्र.8	नीचे दिए गए वाक्यों में सही विराम चिन्ह चुनकर लगाइए। (क) हे भगवान यह कैसे हुआ (ख) राधा कृष्णा और मीरा सुबह जल्दी सो कर उठते हैं	2x1=2
प्र.9	सही योजक शब्द लिखकर वाक्य पूरे करें- (क) आज राम नहीं खेलेगा _____ उसे बुखार है। (ख) तना _____ शाखाएं पौधों को आकार प्रदान करते हैं। किसने, किससे कहा लिखिए। (क) "गाना, कमल ककड़ी पौधे के तने का रूप हैं?"	1x1=1
प्र.10	_____	
प्र.11	(ख) "तुम कहां पढ़ते हो।" _____	2x1=2
प्र.12	मुहावरों का वाक्य में प्रयोग करें। (क) छप्पर फाड़कर देना। _____ _____ वर्तनी शुद्ध करके वाक्यों को दोबारा लिखिए। (क) सब्जी हरी से मिलता है पोषण। _____ (ख) सजाते हैं घर दिवाली पर। _____	2x1=2
	निम्नलिखित प्रश्नों के उत्तर लिखें -	

<p>प्र.13</p>	<p>माइकल की इच्छा किस प्रकार पूरी हुई?</p> <hr/> <hr/> <hr/>	
	<p>(च) पेड़ की जड़े पौधों के लिए क्या काम करती हैं?</p> <hr/> <hr/> <hr/>	<p>3x1=3</p>
<p>प्र.14</p>	<p>निम्नलिखित मूल्यपरक प्रश्नों के उत्तर लिखो-</p> <p>अधिक पटाखे जलाने से हवा दूषित होती है इसे कम करने के लिए आप क्या करेंगे?</p> <hr/> <hr/> <hr/>	<p>2x1=2</p>
	<p>समान अर्थ वाले शब्द लिखें-</p> <p>(1) किताब</p> <p>(2) वृक्ष</p>	<p>3x1=3</p>
<p>प्र.15</p>	<p>वाक्य के लिए एक शब्द लिखो-</p> <p>(1) जो अपने देश का हो - _____</p> <p>(2) जिसमें बल ना हो- _____</p> <p>(3) जो वर्ष में एक बार हो - _____</p>	
<p>प्र.16</p>		



ARMY PUBLIC SCHOOL GWALIOR  
CLASS - III



ACADEMIC SESSION 2023-24  
REVISION WORKSHEET (SELF –ASSESSMENT)

Subject: Mathematics

Assignment No. : 9

Allotment Date: 10 February 2024

S. NO.	QUESTIONS	MARKS	NATURE
1.	<b>Fill in the blanks:</b> a) The even number is always ends in _____. b) What will come next in the pattern of numbers? 5,10,15,20, ____, ____, ____. c) There are _____ 5p in Rs 1000. d) 6530ml=_____ L e) _____ means to cover an area with tiles.	1*5=5	Creative thinking
2.	<b>Write whether the following statements are 'True' or 'False':</b> a) $982.56 > 87923$ _____ b) I have no vertices but two edges. I am a curved shape with three faces. I am a <b>cone</b> . _____ c) When we multiply an odd and an odd number, we get an odd number. _____. d) Z,P,R,J letters have no line of symmetry. _____ e) Descending order means arranging the numbers from largest to smallest. _____.	1*5=5	Remember
3.	<b>Match the column A with column B:</b> A a) Three-tenths b) 1000 grams c) Triangle d) Circle e) Cone B 1 kilogram $\frac{3}{10}$ 1 vertex(corner) 3 sides No sides		Mental Maths
4.	<b>Multiple Choice Questions:</b> (i) The rule followed in the pattern of numbers 95, 85,75, ....., 55 (a) adding 1 (b) adding 10 (c) subtracting 10 (ii) How many odd numbers are there from 115 to 131? (a) 8 (b) 9 (c) 6 (iii) Which figures has curved line? (a) Square (b) triangle (c) circle (iv) Which of the following is even number? (a) 63 (b) 38 (c) 85 (v) Quarter hour means _____ (a) 60 minutes (b) 30 minutes (c) 15 minutes	1*5=5	Memory based
5.	<b>Do as directed:</b> a) How many even numbers are there from 155 to 181? b) Add the following: (i) $78.85 + 23.89$	1*5=5	Calculative skills

6.	<p>(ii) ₹ 465.70 + ₹ 478.50</p> <p>c) Subtract the following.  (i) ₹ 196.60 - ₹ 34.10</p> <p>(ii) Subtract ₹ 510.10 from ₹ 725.50</p> <p>d) Write the following in words.  (i) ₹ 112.75-</p> <hr/> <p>(ii) ₹ 640.35</p> <hr/> <p>e) Convert the Following into.  (i) 5 days 3 hours into hours.</p> <p>(ii) 1010 p into ₹ and paise</p> <p>f) Solve the word problem.  a) Subtract the sum of ₹ 10.95 and ₹ 11.50 from ₹ 70.50.</p> <p>b) Aisha went to a grocery store. He bought 2 kg of flour for ₹ 35.50 per kg, 5 kg of rice for ₹ 20.00 per kg, a packet of salt for ₹ 10. Make a bill for her.</p>	<p>1</p> <p>1</p> <p>1</p> <p>1</p> <p>2</p> <p>1</p>	<p>Problem Solving</p>
----	---	---	------------------------

c) A boy mischievously interchanged the minute hand and hour hand on a wall clock. If the clock is showing 2:30 pm, what will be the actual time of the day?

1

HOTS

e) How many horizontal, vertical or slanting sides do the following have?

(i) A square -

Horizontal lines .....


Vertical lines .....

Slanting lines .....

1

7.

Tell the time given in the clock in both ways.





1

Observation skills

8.

Jake recorded the number of pizzas sold over five days.  
Read the chart and answer the questions.



 = 5 pizzas

1. How many pizzas did he sell on Thursday? \_\_\_\_\_
2. Which day did he sell the fewest pizzas? \_\_\_\_\_
3. Which day did he sell the most pizzas? \_\_\_\_\_
4. Which day did he sell 25 pizzas? \_\_\_\_\_
5. How many pizzas did he sell on Monday and Wednesday? \_\_\_\_\_
6. Were more pizzas sold on Monday or Friday? \_\_\_\_\_
7. How many fewer pizzas were sold on Friday than Thursday? \_\_\_\_\_
8. How many pizzas did he sell in five days? \_\_\_\_\_

1

3

9.

The following data shows the number of students participating in vacation sports.

Crick et	Hocke y	Footbal l	Badminton	Chess	Table tennis
20	30	35	15	10	5

Represent the data using pictograph (1 picture=5 students).


4

10.

How many minutes have passed if the minute hand has moved from:  
(a) 5 to 9

2

	2 to 10		
--	---------	--	--



**ARMY PUBLIC SCHOOL GWALIOR**  
**CLASS - III**  
**ACADEMIC SESSION 2023-24**  
**REVISION WORKSHEET (SELF –ASSESSMENT)**




**Subject: EVS**

**Assignment No. : 9**


**Allotment Date: 10 February 2024**

S. NO.	QUESTIONS	MARKS	NATURE										
Q.1.	<p><b>Choose the correct option:</b></p> <p>(i) _____ is an unstitched cloth            (a)Frock                    (b) Flowers                    (c)Dhoti</p> <p>(ii) An ideal house must get _____.            (a) Air                    (b) Sunlight                    (c) Both a.and b.</p> <p>(iii) The top view of a place is called _____.            (a) Sketch                    (b) Plan                    (c) Map</p> <p>(iv) We can take out ground water by _____.            (a) Wells                    (b) Hand pump                    (c) All Of These</p> <p>(v) There are _____ main directions.            (a) 5                    (b) 4                    (c) 3</p> <p>(vi) Plants get water through their _____.            (a) Roots                    (b) Flowers                    (c) Leaves</p>	6x1=6	Understanding										
Q.2.	<p><b>Match the column A with column B:</b></p> <table style="width: 100%; border: none;"> <tr> <td style="text-align: center;"><b>A</b></td> <td style="text-align: center;"><b>B</b></td> </tr> <tr> <td>(i) silkworm</td> <td>(a) atlas</td> </tr> <tr> <td>(ii) a book of maps</td> <td>(b) is used to make pots</td> </tr> <tr> <td>(vii) copper</td> <td>(g) Diwali</td> </tr> <tr> <td>(viii) diyas</td> <td>(h) silk</td> </tr> </table>	<b>A</b>	<b>B</b>	(i) silkworm	(a) atlas	(ii) a book of maps	(b) is used to make pots	(vii) copper	(g) Diwali	(viii) diyas	(h) silk	4x1=4	
<b>A</b>	<b>B</b>												
(i) silkworm	(a) atlas												
(ii) a book of maps	(b) is used to make pots												
(vii) copper	(g) Diwali												
(viii) diyas	(h) silk												
Q.3.	<p><b>Fill in the blanks by choosing the correct options:</b>  <b>( stilt, cactus, air)</b></p> <p>(a) _____ houses are made in states like Assam.</p> <p>(b) _____ transport is the fastest and costliest means of transport.</p> <p>(c) _____ does not require much water for growth.</p>	3x1=3	Reasoning										
Q.4.	<p><b>State whether the given statements are True/False:</b></p> <p>1) People need to travel for work,pleasure and social gatherings.                    .....</p> <p>2) Aeroplanes land on helipads.                    .....</p> <p>3) All birds have feathers,wings,beaks and claws.                    .....</p>	3x1=3	Problem Solving										
Q.5.	<p><b>Answer the following questions in one word:</b></p>												



<p><b>Q.6.</b></p>	<p>(i) It is a rough drawing of a place. ....</p> <p>(ii) The prepared pots are baked in an oven at high temperature. ....</p> <p><b>Circle the odd one out.</b></p> <p>(i) Cucumber, Carrot, Tomato, Potato</p> <p>(ii) Discovery, Star Plus, Colors, Reynolds</p>	<p>2x1=2</p> <p>2x1=2</p>	
<p><b>Q.7.</b></p> <p><b>Q.8.</b></p> <p><b>Q.9.</b></p> <p><b>Q.10.</b></p>	<p><b>Identify the following pots and name them.</b></p>  <p>_____</p> <p><b>Draw the diagram of any (1) land transport</b></p> <p><b>Write the full form of STD</b></p> <p>.....</p> <p><b>Give one example of each:</b></p> <p>Use of water _____</p>	<p>1x1=1</p> <p>1x1=1</p> <p>1x1=1</p> <p>1x1=1</p>	<p><b>Observation</b></p>
<p><b>Q.11.</b></p> <p><b>Q.12.</b></p>	<p><b>Answer the following questions in short:</b></p> <p>(i) Define weaving.</p> <p>(ii) What is communication?</p> <p><b>Answer the following questions in detail:</b></p> <p>(i) List any three uses of pots.</p> <p>(ii) Why do different animals need a different amount of water?</p> <p>(iii) Why do we need a house?</p>	<p>2x2=4</p> <p>3x3=9</p>	<p><b>HOTS</b></p>

<b>Q.13.</b>	<b>Choose the correct option:</b> (i) Which state lies in the eastern part of our country? (a) Arunachal Pradesh (b) Assam (c) Punjab (ii) What is the capital of Arunachal Pradesh? (a) Itanagar (b) Bhopal (c) Srinagar	2x1=2	<b>Critical Thinking</b>
<b>Q.14.</b>	<b>On the given outline of Indian Political Map locate the following:</b> (i) Locate any one Northern state	1x1=1	



**ARMY PUBLIC SCHOOL GWALIOR**  
**CLASS - III**  
**ACADEMIC SESSION 2023-24**  
**REVISION WORKSHEET (SELF –ASSESSMENT)**




**Subject: Computer**

**Assignment No. : 9**

**Allotment Date: 10 February 2024**

S.NO.	QUESTIONS	MARKS	NATURE
1.	<p><b>Tick the correct answer.</b></p> <p>(i) Decision-making capability of AI is _____.</p> <p>a) Unbiased b) Biased c) weak</p> <p>(ii) The default sprite present in the Scratch is _____.</p> <p>a) Dog b) Cat c) Mouse</p> <p>(iii) Computers connected to _____ exchange information with one another.</p> <p>a) Television b) Internet c) Telephone</p> <p>iv) _____ shows all the blocks available to us for use in programming.</p> <p>a) Toolbar b) Blocks Palette c) Menu Bar</p>	4x0.5=2	Information
2.	<p><b>Fill in the blanks-</b></p> <p>a) Google assistant is an example of _____ AI.</p> <p>b) Each page on the web has a unique address called the _____.</p> <p>c) _____ are mistakes that are committed while writing an algorithm.</p> <p>d) _____ is a social humanoid robot created by Hanson Robotics.</p>	4x0.5=2	Understanding

<p><b>3.</b></p>	<p><b>Write 'T' for True or 'F' for False against the statements:-</b></p> <p>a) At present, all AI systems are weak.  b) A link is a built-in connection to another related web page or the part of a Web page  c) Debugging is the particular order in which instructions are performed in an algorithm.  d) Planning is the series of action to be taken to achieve a goal.</p>	<p>4x0.5=2</p>	<p>Interdisciplinary</p>
<p><b>4.</b></p>	<p><b>Answer the following questions :-</b></p> <p>1. What do you mean by Internet?  _____  _____</p> <p>2. Write any two differences between human intelligence and Artificial Intelligence.  _____  _____</p> <p>3. What is a sprite? What is its role in Scratch?  _____  _____</p> <p>4. Write any four uses of Internet.  _____  _____  _____</p>	<p>4x1=4</p>	<p>Understanding</p>



**ARMY PUBLIC SCHOOL GWALIOR**  
**CLASS - III**  
**ACADEMIC SESSION 2023-24**  
**REVISION WORKSHEET (SELF –ASSESSMENT)**



**Subject: G.K**

**Assignment No. : 9**

**Allotment Date: 10 February 2024**

SNO.	QUESTIONS	MARKS	NATURE										
1.	<b>Fill in the blanks.</b>  a. .... is the founder of Space X and Tesla . b. .... Is used in making pencil leads. c. .... Is the largest planet. d. .... is the smallest state.	4X1=4	Understanding										
2.	<b>Match the following:</b> <table style="width: 100%; border: none;"><tr><td style="width: 50%; text-align: center;">A</td><td style="width: 50%; text-align: center;">B</td></tr><tr><td>1. Dainik Bhaskar</td><td>Dal lake &amp; Wular lake</td></tr><tr><td>2. Meghalaya</td><td>world's largest flower</td></tr><tr><td>3. Rafflesia</td><td>Hindi newspaper</td></tr><tr><td>4. Kashmir</td><td>Abode of clouds</td></tr></table>	A	B	1. Dainik Bhaskar	Dal lake & Wular lake	2. Meghalaya	world's largest flower	3. Rafflesia	Hindi newspaper	4. Kashmir	Abode of clouds	4X1=4	
A	B												
1. Dainik Bhaskar	Dal lake & Wular lake												
2. Meghalaya	world's largest flower												
3. Rafflesia	Hindi newspaper												
4. Kashmir	Abode of clouds												
3.	<b>True or False</b>  1. The 32 <sup>nd</sup> Olympic Games were held in Tokyo. _____ 2. MRP shows the weight of the product.. _____ 3. Pankaj Advani is a famous cricketer. .. _____ 4. The regional language of Kerala is gujarati. .. _____ _____ ..	4x1=4	Analytical Skill										
4.	<b>Answer the following questions.</b>  a. Which is the tallest building in the world. _____  b. Name the hottest planet. _____  c. Which is a huge piece of land surrounded by water on all sides. _____	4x1=4											

d. Which tree bears largest seed in the world?

\_\_\_\_\_

**Identify the following.**

5.

4x1=4

a)



.....

b)



.....

c)



.....

d)



.....

—