



ARMY PUBLIC SCHOOL GWALIOR
CLASS - II
ACADEMIC SESSION 2023-24
REVISION WORKSHEET (SELF –ASSESSMENT)



Subject: English

Assignment No. : 9

Allotment Date: 10 February 2024

S. NO.	QUESTIONS	MARKS 20	NATURE
1.	<p>Read the passage carefully and answer the following questions.</p> <p>This is the story of a little girl named Mini. She goes to her grandmother's orchard one day. There are many fruit trees in the orchard. She sees five mango trees in the orchard. There are six litchi trees also. There are ten jamun trees too. Three guava trees also grow there.</p> <p>Mini is very happy. Grandmother plucks a big mango and gives her. She loves it.</p> <p>Q1. Write the correct answer for the following questions.</p> <p>a) What is the name of the girl in the story? Ans _____</p> <p>b) How many litchi trees are there in the orchard? Ans _____</p> <p>c) Which of the fruit does the grandmother pluck for Mini ? Ans _____</p>	1x3=3	Reading skill
2.	<p>Q2. Make sentences with the words given below.</p> <p>a).Uncle- _____</p> <p>b) Sky- _____</p>	1x2=2	Writing skill
3.	<p>Q3. Fill in the blanks with the correct adjectives given in the brackets:</p> <p>a) The cake was _____. (delicious / fast)</p> <p>b) The garden has _____ flowers. (much / many)</p>	1x2=2	Problem Solving

<p>4.</p>	<p>Q4. Join the sentences with suitable joining words and rewrite them:</p> <p>(i) There is a cat. There is a mouse.</p> <hr/> <p>(ii) My room was dirty. I cleaned it.</p> <hr/>	<p>1x2=2</p>	<p>Language skill</p>
	<p>Q5. Arrange the words to form a meaningful sentence using capital letters, full stop or question mark.</p> <p>(i) the barking is dog</p> <hr/> <p>(ii) beautiful looking very pink the lotus is</p> <hr/>	<p>1x2=2</p>	<p>Problem solving</p>
	<p>Q6. Add suitable subject to the following :</p> <p>(i) _____ has strong branches.</p> <p>(ii) _____ purchased a new car.</p>	<p>1x2=2</p>	<p>Knowledge</p>
	<p>Q7. Answer the following questions:</p> <p>Q1. What happened when Murali climbed the mango tree?</p> <p>Ans _____</p> <hr/> <p>Q2. Why did people call Bholaram's shop the magic repair toy shop?</p> <p>Ans _____</p> <hr/>	<p>1x2=2</p>	<p>Literacy skill</p>

	<p>Q8. Write the meanings of the given words.</p> <p>a). repair - _____</p> <p>b). ripe - _____</p>	1x2=2	Understanding
	<p>Q9. Underline the adverbs in the following sentences.</p> <p>a) The old lady speaks softly.</p> <p>b) The soldiers fought bravely.</p> <p>c) The sun is shining brightly.</p>	1x3=3	Knowledge




ARMY PUBLIC SCHOOL GWALIOR
CLASS - II
ACADEMIC SESSION 2023-24
REVISION WORKSHEET (SELF –ASSESSMENT)



Subject: Hindi

Assignment No. : 9

Allotment Date: 10 February 2024

संख्या	प्रश्न	अंक	प्रश्न के प्रकार
1.	<p>निम्नलिखित गद्यांश को ध्यानपूर्वक पढ़े। एक दिन जब मैं स्कूल पहुँचा तो अध्यापिका ने बताया कि कल हम पिकनिक पर चलेंगे। यह सुनकर सब बहुत खुश हुए। अगले दिन सब अच्छी-अच्छी और मनपसंद खाने की चीज़ें लेकर स्कूल पहुँचे। जब बस में बैठने लगे तो सब में नया जोश था। पार्क में पहुँचकर सब हरी-हरी घास पर लोटपोट हो गए। वहाँ सुंदर-सुंदर फूल, तितलियाँ थीं। सबने नाच गाना किया, खेले, खाना-पीना खाया और स्कूल वापस आ गए।</p> <p>क) पढ़े गए गद्यांश के आधार पर नीचे दिए गए प्रश्नों के उत्तर दीजिये-</p> <p>i) अध्यापिका ने कहा जाने की बात कही?</p> <p>ii) पार्क में पहुँच कर बच्चों ने क्या किया?</p> <p>ख) निम्नलिखित वाक्यों में खाली स्थान भरिए-</p> <p>i) जब बस में बैठने लगे तो सब में नया _____ था।</p> <p>ii) अगले दिन सब अच्छी-अच्छी और _____ खाने की चीज़ें लेकर स्कूल पहुँचे।</p>	2x1=2	बोधार्थक
2.	<p>नीचे दिए गए चित्र को ध्यान से देखिए तथा निम्नलिखित प्रश्नों के उत्तर दीजिए_</p>  <p>उपर्युक्त चित्र के आधार पर निम्नलिखित वाक्यों में खाली स्थान भरिए-</p> <p>क) यह एक _____ का चित्र है।</p> <p>ख) बगीचे में कुछ _____ झुला झूल रहे हैं।</p> <p>ग) सीमा के हाथ में _____ रंग का गुब्बारा है।</p> <p>घ) एक बच्ची _____ उड़ा रही है।</p>	2x1=2	ज्ञानार्थक

3.	अनुच्छेद लेखन- 'मेरा प्रिय विद्यालय' 	3x1=3	रचनात्मक
4.	<p style="text-align: center;">व्याकरण</p> प्र. क) अनेक शब्दों के लिए एक शब्द- i) जो साथ में पढ़ता है _____ ii) जो जूते ठीक करता है _____ प्र. ख) निम्नलिखित शब्दों के समान अर्थ वाले शब्द लिखिए- i) हाथ - _____ ii) पुस्तक - _____	2x1=2 2x1=2	सूचनात्मक
5	<p style="text-align: center;">पाठमाला</p> प्र. क) कविता की पंक्तियाँ पूरी करिए- सर्दी, गर्मी, वर्षा को भी हँसकर _____ आप खुशी से जीती है _____ प्र. ख) निम्नलिखित शब्दों के अर्थ लिखिए- i) इस्तेमाल- _____ ii) नीड- _____ प्र. ग) निम्नलिखित शब्दों से वाक्य बनाइए- i) दाना- _____ ii) मौसम- _____ प्र. घ) निम्नलिखित प्रश्नों के उत्तर दीजिए- i) गरमी में नदी, तालाबों में पानी कम क्यों हो जाता है? _____ _____ _____ ii) शेरुदा के लिए कौन-कौन भोजन लाया?	2x1=2 2x1=2 3x1=3	विश्लेषणात्मक



**ARMY PUBLIC SCHOOL GWALIOR
CLASS - II**

**ACADEMIC SESSION 2023-24
REVISION WORKSHEET (SELF –ASSESSMENT)**





Subject: Mathematics

Assignment No. : 9

Allotment Date: 10 February 2024

S. NO.	QUESTIONS	MARKS	NATURE
1.	Write True or False for the following- a) We denote kilogram by 'kg'. () b) The symbol of rupee is ₹. () c) 1 litre is 1000 mL. ()	3x1=3	Critical thinking and Analytical Skills
2.	Match the following- a) Capacity b) AB, BC, CD, c) Millilitre	3x1=3	
3.	Choose the correct option- a) Two hundred and thirty rupees will be written as- i) ₹230 ii) ₹203 iii) ₹23 b) PQR, RPQ, QRP, _____ i) QRP ii) RRP iii) PQR c) 5kg 50g – 2kg 50g is- i) 5kg ii) 3 kg 50 g iii) 3 kg	3x1=3	

4.	Fill in the blanks- a) The amount of liquid that a container can hold is called its _____. b) Quarter means _____ minutes. c) The short hand of the clock tells us the _____.	3x1=3	Understanding
5.	Observe the given figure and answer the following- <div style="text-align: center; border: 1px solid black; border-radius: 50%; padding: 20px; margin: 20px auto; width: fit-content;"> <p>Tomato Soup - ₹30</p> <p>Sweet Corn Soup - ₹50</p> <p>French Onion Soup - ₹80</p> </div> <p>(a) What is the price of Tomato Soup and French Onion Soup?</p> <p>Ans- _____.</p> <p>(b) What is the difference between the price of Sweet Corn Soup and French Onion Soup?</p> <p>Ans- _____.</p>	2x1=2	HOTS
6.	Read the time in the clocks and write it in words (using quarter past / half past / quarter to / o' clock). <div style="display: flex; flex-direction: column; align-items: center;"> <div style="display: flex; align-items: center; margin-bottom: 20px;">  <div style="margin-left: 10px;">(a) _____</div> </div> <div style="display: flex; align-items: center;">  <div style="margin-left: 10px;">(b) _____</div> </div> </div>	2x1=2	Observation

7.	<p>Word Problems-</p> <p>a) A man mixed 25 mL of white paint and 38 mL of red paint. How much paint did he get in all?</p> <p>Solution:</p> <p>b) The weight of a boy was 108kg 200g. he lost the 35kg 150g. what is his present weight?</p> <p>Solution:</p>	2x2=4	Problem Solving
----	--	-------	-----------------



ARMY PUBLIC SCHOOL GWALIOR
CLASS - II
ACADEMIC SESSION 2023-24
REVISION WORKSHEET (SELF –ASSESSMENT)

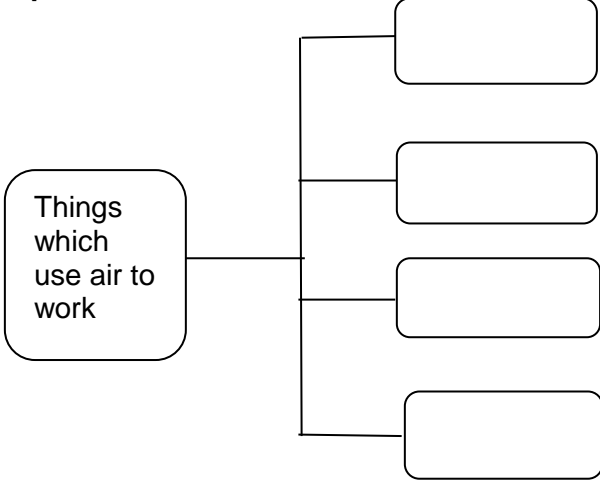


Subject: EVS

Assignment No. : 9

Allotment Date: 10 February 2024

S.NO.	QUESTIONS	MARKS 20	NATURE
1.	Tick the correct answer: 1. Earth is also called _____ planet. a) Green b) Red c) Blue 2. We carry raincoat in this season. a) Summer b) Monsoon c) Autumn 3. It is the largest land animal. a) Elephant b) Bear c) Lion 4. National emblem of India has _____ lions. a) 4 b) 2 c) 3	1X4=4	Understanding
2.	Fill in the blanks: a) Playing games keeps us _____ and _____. b) _____ part of the Earth is covered with water.	1X2=2	Analytical skill
3.	State whether the following statements are 'True/False'. a) Hot winds called loo blow during Autumn season. () b) The name of our Present Prime Minister is Shri Narendra Modi. ()	1x2=2	Problem solving
4.	Match the following questions. Column- A Column- B a) mornings are foggy wind b) football heavenly body c) moving air outdoor game d) stars winter season	0.5x4=2	Analytical skill
5.	Give two examples of each of the following: a) Summer fruits- _____ _____ b) Milk giving animals- _____ _____	1X4=4	Information
6.	Define the following terms: a) Orbit	1x2=2	Observation

	<hr/> <hr/> <hr/> <hr/> <hr/> <hr/> <hr/> <hr/> <p>b) Habitat</p> <hr/> <hr/> <hr/> <hr/>		
7.	<p>Complete the flowchart.</p> 	0.5x4=2	Understanding
8.	<p>Why is India known as the land of 'Unity in Diversity'?</p> <hr/> <hr/> <hr/> <hr/> <hr/>	1x1=1	HOTS
9.	<p>How are omnivores different from carnivores?</p> <hr/> <hr/> <hr/> <hr/> <hr/> <hr/>	1x1=1	Thinking and Writing Skills



ARMY PUBLIC SCHOOL GWALIOR
CLASS - II
ACADEMIC SESSION 2023-24
REVISION WORKSHEET (SELF –ASSESSMENT)




Subject: G.K

Assignment No. : 9

Allotment Date: 10 February 2024

S.NO	QUESTIONS	MARKS	NATURE
1.	Q1. Tick the correct option from the following. 1. This is a traditional dress of Mexico. a. Kimono b. Gho c. Kilt d. Huipil 2. The currency of Russia is called _____. a. Baht b. Yen c. Ruble d. Taka	2X1=2	Identification and General Awareness
2.	Q2. Fill in the blanks with the help of Help Box. Help box - (coat, book) 1. note + _____ = _____ 2. rain + _____ = _____	2X1=2	Informative and General Awareness
3.	Q3. Mark the following statements as True or False. 1. The currency of India is called Yen . () 2. Sonu Nigam is Indian singer. ()	2X1=2	Informative and General Awareness
4.	Q4. Match the following columns. Column 'A' column 'B' (i) Snake a). trumpet (ii) Elephant b). hiss	2X1=2	Identification and General Awareness
5.	Q5. Answer the following questions in one word. 1. What is the name of an important religious place of Christians and is located at Kolkata in West Bengal? _____	2X1=2	Informative and General Awareness
	2. What is the name of traditional dress of Spain? _____		



ARMY PUBLIC SCHOOL GWALIOR
CLASS - II
ACADEMIC SESSION 2023-24
REVISION WORKSHEET (SELF –ASSESSMENT)



Subject: Computer

Assignment No. : 9

Allotment Date: 10 February 2024

S.NO.	QUESTIONS	MARKS	NATURE
1.	<p>Tick the correct answer.</p> <p>(i) Script is also known as a _____.</p> <p>a) Page b) Program c) Character</p> <p>(ii) An AI-powered games maintain the _____ of the players.</p> <p>a) interest b) relations c) balance</p> <p>(iii) _____ Patterns do not add anything to itself.</p> <p>a) Design b) Repeating c) Non repeating</p> <p>(iv) _____ is a famous AI personal assistant.</p> <p>a) Alexa b) Sophia c) Bella</p>	4x0.5=2	Information
2.	<p>Fill in the blanks-</p> <p>a) _____ suggests us similar kind of videos.</p> <p>b) Artificial Intelligence is a machine's ability to _____ human intelligence.</p> <p>c) When we represent information using symbols or pictures, it is called _____.</p> <p>d) The sequence of actions is called _____.</p>	4x0.5=2	Understanding
3.	<p>Write 'T' for True or 'F' for False against the statements:-</p> <p>a) A music system gives output in the form of text.</p> <p>b) Blocks category lists the six categories of color-coded blocks.</p>	4x0.5=2	Interdisciplinary

	<p>c) ScratchJr can only run on Tablets. d) We use decomposition in our daily lives too.</p>		
4.	<p>Answer in one word .</p> <p>a) Give two examples of AI in our daily life. Ans. _____ _____</p> <p>b) What is Sprite? Ans. _____ _____ _____</p> <p>c) Name any two color-coded blocks available in Block category. Ans. _____ _____</p> <p>d) Name any two famous AI personal assistants. Ans. _____ _____</p>	4x1=4	Critical Thinking and Problem Solving