


**ARMY PUBLIC SCHOOL GWALIOR**  
**CLASS - I**  
**ACADEMIC SESSION 2023-24**  
**REVISION WORKSHEET (SELF –ASSESSMENT)**


Subject: English

Assignment No. : 9

Allotment Date: 10 February 2024

S.N	QUESTIONS		
Q.I	<p>Read the following passage carefully and answer the question given below.</p> <p style="text-align: center;"><b>A trip to a beach</b></p>  <p>Ravi and his friends went for the trip on a beach. It was a bright and beautiful day. Ravi and his friends were playing on a beach. Pihu was making a sand castle. Aarav and Ravi were playing with a ball. Tia was sitting under an umbrella. Simi was taking sun bath. There were many fishes in the sea. Rohan was having an ice-cream. Pratik was reading a book. They all were having fun.</p> <p>A.1 Tick (✓) the correct option from the passage:</p> <p>(i) Where did Ravi and his friends go for trip?</p> <p>a. zoo <input type="checkbox"/>      b. beach <input type="checkbox"/></p> <p>c. water park <input type="checkbox"/>      d. amusement park <input type="checkbox"/></p> <p>(ii) There were many..... in the sea.</p> <p>a. fishes <input type="checkbox"/>      b. snakes <input type="checkbox"/></p> <p>c. crocodiles <input type="checkbox"/>      d. turtles <input type="checkbox"/></p>	1X5=5	Language and  Communication,  Cognitive

	<p>(iii) Arav and Ravi were playing with a.....</p> <p>a. badminton <input type="checkbox"/>      b. volleyball <input type="checkbox"/></p> <p>c. frisbee <input type="checkbox"/>      d. ball <input type="checkbox"/></p> <p>(iv) Who was taking sun bath?</p> <p>a. Tia <input type="checkbox"/>      b. Ravi <input type="checkbox"/></p> <p>c. Simi <input type="checkbox"/>      d. Arav <input type="checkbox"/></p> <p>(v) Who was reading a book?</p> <p>a. Simi <input type="checkbox"/>      b. Pratik <input type="checkbox"/></p> <p>c. Arav <input type="checkbox"/>      d. Tia <input type="checkbox"/></p>		
<p><b>Q.II</b></p>	<p><b>Answer in one word from the given passage:</b></p> <p>Q.1 Who was having an ice-cream?</p> <p>Ans .....</p> <p>Q.2 Who was sitting under an umbrella?</p> <p>Ans .....</p> <p>Q.3 From the given passage write the opposite of 'dull'.</p> <p>Ans .....</p> <p>Q.4 Was everyone having fun on a beach?</p> <p>Ans .....</p>	<p>1 X 5 = 5</p>	<p>Interdisciplinary</p>

	<p>Q.5 Which is your favourite place, you would like to go for a trip?</p> <p>Ans .....</p>		
<b>Q.III</b>	<p><b>Fill in the blanks with 'has or 'have'</b></p> <p>1. Siya and Riya ..... many toys.</p> <p>2. My father ..... a black car.</p>	1X 2=2	Application
<b>Q.IV</b>	<p><b>Underline the words that should start with a capital letter and write them in the given space:</b></p> <p>1. desk    table    india    chair    .....</p> <p>2. rohan    girl    teacher    boy    .....</p> <p>3. city    house    toy    gwalior    .....</p>	1X 3=3	Cognitive
<b>Q.V</b>	<p><b>Observe the picture given below and answer the questions followed:</b></p> <p style="text-align: center;"><b>Sam's Birthday Party</b></p>  <p>B.1 From the given help box fill in the blanks given below: [friends, enjoying, Sam's, birthday, gifts]</p> <p>(i) Today is ..... birthday.</p> <p>(ii) Mom and dad have organized .....party for Sam.</p> <p>(iii) Sam has invited his .....on his birthday party.</p> <p>(iv) Sam's friends have brought ..... for Sam.</p> <p>(v) Everyone is .....the birthday party.</p>	1X5=5	Analytical



**ARMY PUBLIC SCHOOL GWALIOR**  
**CLASS - I**  
**ACADEMIC SESSION 2023-24**  
**REVISION WORKSHEET (SELF –ASSESSMENT)**


Subject: Hindi

Assignment No. : 9

Allotment Date: 10 February 2024

संख्या	प्रश्न/उत्तर	अंक	प्रकृति
प्र.1	<p><b>प्रश्न 1. निम्नलिखित गद्यांश को ध्यानपूर्वक पढ़ें।</b></p> <p>नेताजी सुभाष चंद्र बोस का जन्म उड़ीसा के कटक क्षेत्र में 23 जनवरी 1897 को हुआ। उनकी माता का नाम प्रभावती तथा पिता जानकीनाथ बोस कटक के एक मशहूर सरकारी वकील थे। लगभग 40000 भारतीयों के साथ नेताजी ने 1943 में आजाद हिन्द फ़ौज बनाई थी।</p> <p>एक विमान दुर्घटना में 18 अगस्त 1945 को ताइवान में उनकी मृत्यु हो गई।</p> <p>उपरोक्त गद्यांश के आधार पर निम्नलिखित प्रश्नों के उत्तर दीजिए।</p> <p>अ) सही वाक्य के सामने (✓) तथा गलत वाक्य के सामने (x) का निशान लगाएं:</p> <p>क) नेताजी की मृत्यु 18 अगस्त 1945 को ताइवान में हुई थी। <input type="checkbox"/></p> <p>ख) नेताजी ने 1943 में आजाद हिन्द फ़ौज बनाई थी। <input type="checkbox"/></p> <p>ब) खाली स्थान भरें:</p> <p>क) उनकी माता का नाम ----- था। (प्रतिभा / प्रभावती)</p> <p>ख) आजाद हिन्द फ़ौज में लगभग ----- भारतीय थे। (40000 / 4000)</p>	0.5x8=4	बोधोत्प्रेरक

	<p>स) निम्नलिखित वाक्यों के लिए सही विकल्प चुनकर उत्तर दीजिए।</p> <p>क) नेताजी सुभाष चंद्र बोस का जन्म कब हुआ था?  अ) 23 जनवरी 1898  ब) 23 जनवरी 1897</p> <p>ख) नेता जी के पिताजी कहाँ के एक मशहूर सरकारीवकील थे?  अ) कर्नाटक                      ब) कटक</p> <p>ग) नेता जी के पिताजी का क्या नाम था ?  अ) जानकीनाथ बोस      ब) जगन्नाथ बोस</p> <p>घ) नेता जी की मृत्यु कैसे हुई थी ?  अ) एक विमान दुर्घटना में  ब) बीमारी से</p>		
<p>प्र 2</p>	<p>नीचे दिए गए समान अर्थ वाले शब्दों को मिलाओ :</p> <p>अ                      ब</p> <p>क ) उपवन                      बारिश</p> <p>ख ) वाहन                      बगीचा</p> <p>ग ) बरखा                      सवारी</p>	<p>1X3=3</p>	<p>गहन सोच</p>

<p>प्र-3</p>	<p>नीचे लिखे शब्दों के अर्थ लिखो:</p> <p>कुटिया - -----</p> <p>मृग - -----</p>	<p>1x2=2</p>	<p>समस्या समाधान</p>
<p>प्र-4</p>	<p>दिए गए चित्र को पहचानकर खाली स्थान में सही शब्द चुनकर लिखो :</p>  <p>( अनाज, सुंदर, राष्ट्रीय, जंगलों, वर्षा )</p> <p>भारतका----- पक्षी मोर है।</p> <p>मोर बहुत ही----- होते हैं।</p> <p>मोरको----- ऋतु बहुत पसंद है।</p> <p>मोर----- में रहते हैं।</p> <p>वह कीड़े-मकोड़े, फल, ----- आदि चीजें खाते हैं।</p>	<p>1x5=5</p>	<p>भाषाई कौशल</p>
<p>प्र-5</p>	<p>दिए गए शब्दों के लिए उल्टे अर्थ वाले शब्द लिखो</p> <p>क ) छोटा -----</p> <p>ख ) काला - -----</p>	<p>1x2=2</p>	<p>विश्लेषणात्मक</p>

प्र-6	<p><b>निम्नलिखित प्रश्नोंके उत्तरदीजिए:</b></p> <p>प्रश्न 1. मानव और रत्ना क्यों खुश थे ?</p> <p>उत्तर 1.</p> <p>प्रश्न 2.आसमान में कैसी पतंगे उड़ रहीथीं ?</p> <p>उत्तर 2.</p> <p>प्रश्न 3. मेले से अँगूठी किसने खरीदी?</p> <p>उत्तर 3.</p> <p>प्रश्न 4. रत्ना ने ई रिक्शावाले से क्या कहा?</p> <p>उत्तर 4.</p>	1x4=4	बोधात्मक
-------	--	-------	----------



**ARMY PUBLIC SCHOOL GWALIOR**  
**CLASS - I**  
**ACADEMIC SESSION 2023-24**  
**REVISION WORKSHEET (SELF –ASSESSMENT)**










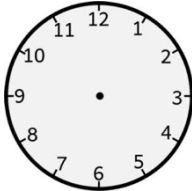
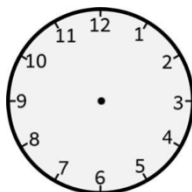
**Subject: Mathematics**

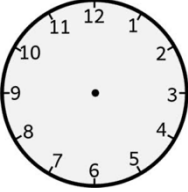
**Assignment No. : 9**


**Allotment Date: 10 February 2024**

S. No	Questions	Marks	पैपर्ससे												
Q1.	<p>Fill in the blanks using the given help box: (28, Eighth, July, October, 26 January)</p> <p>a. _____ comes between September and November.</p> <p>b. August is the _____ month of the year.</p> <p>c. _____ is the seventh month of the year.</p> <p>d. _____ days are there in four weeks.</p> <p>e. _____ is our Republic day.</p>	1X5=5	Understanding												
Q2.	<p><b>Match the columns.</b></p> <table style="width: 100%;"><thead><tr><th style="text-align: center;">Column I</th><th style="text-align: center;">Column II</th></tr></thead><tbody><tr><td>(i) <math>4 \div 2</math></td><td>Gram</td></tr><tr><td>(ii) Weight</td><td>12 months</td></tr><tr><td>(iii) A year</td><td>2</td></tr><tr><td>(iv) A Clock</td><td>3 sides</td></tr><tr><td>(v) Triangle</td><td>Long and short hands</td></tr></tbody></table>	Column I	Column II	(i) $4 \div 2$	Gram	(ii) Weight	12 months	(iii) A year	2	(iv) A Clock	3 sides	(v) Triangle	Long and short hands	1X5=5	Intellectual
Column I	Column II														
(i) $4 \div 2$	Gram														
(ii) Weight	12 months														
(iii) A year	2														
(iv) A Clock	3 sides														
(v) Triangle	Long and short hands														



<p><b>Q3.</b></p>	<p><b>Look at the fruits Iva and Naina eat every week.</b></p> <table style="margin-left: auto; margin-right: auto;"> <tr> <td style="border-right: 1px solid black; padding-right: 5px;">Banana</td> <td></td> </tr> <tr> <td style="border-right: 1px solid black; padding-right: 5px;">Apple</td> <td></td> </tr> <tr> <td style="border-right: 1px solid black; padding-right: 5px;">Cherry</td> <td></td> </tr> </table> <p><b>Now answer the following questions:</b></p> <p>(i) How many bananas do they eat in a week? Ans .....</p> <p>(ii) How many total fruits they eat in a week? Ans .....</p>	Banana		Apple		Cherry		<p><math>1 \times 2 = 2</math></p>	<p>Critical thinking</p>
Banana									
Apple									
Cherry									
<p><b>Q4.</b></p>	<p><b>Multiple choice questions.</b></p> <p>(i) Distribution into equal groups is called _____. a) Division. b) Addition c) Multiplication</p> <p>(ii) There are 10 fishes in all. There are 2 groups and 5 fishes in each group. What will be the division fact? a) <math>10 \div 2 = 5</math>. b) <math>5 \times 2 = 10</math>. c) <math>10 - 5 = 2</math></p> <p>(iii) A square has _____ sides. a) 4 b) 6 c) 10</p> <p>(iv) In India, we use money in the form of _____. a) dollars b) coins. c) notes and coins</p> <p>(v) _____ is the second day of week. a) Tuesday b) Sunday c) Friday</p>	<p><math>1 \times 5 = 5</math></p>	<p>Problem solving</p>						
<p><b>Q5.</b></p>	<p><b>Draw hands on the clocks to show the time :</b></p> <p>(i) 9:00</p>  <p>(ii) 7:00</p> 	<p><math>3 \times 1 = 3</math></p>	<p>Cognitive</p>						

	<p><b>(iii)</b> 12:00</p>		
--	---------------------------	---	--



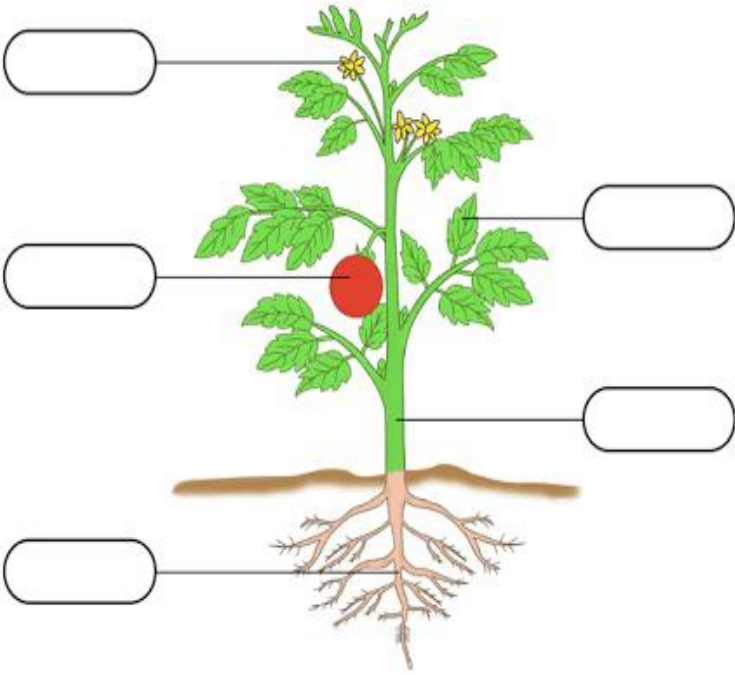
**ARMY PUBLIC SCHOOL GWALIOR**  
**CLASS - I**  
**ACADEMIC SESSION 2023-24**  
**REVISION WORKSHEET (SELF –ASSESSMENT)**


**Subject: EVS**

**Assignment No. : 9**

**Allotment Date: 10 February 2024**

Sr. No.	Questions	Marks	Skills
<b>Q1.</b>	<b>Tick the correct option:</b>  (i) Aquatic animals live here. a. Sand                      b. Water                      c. Air  (ii) Water is needed by _____. a. Plants                      b. Animals                      c. (a) and (b) both  (iii) It is a big hot ball of fire. a. Sun                      b. Clouds                      c. Moon  (iv) Mango is a _____ fruit.. a. winter                      b. spring                      c. summer  (v) We use quilts in _____ season. a. winter                      b. spring                      c. summer	1X5=5	Cognitive
<b>Q2.</b>	<b>Fill in the blanks using help box :</b>  (summer, jute, plant, six or eight, Astronauts )  a. We sweat a lot in _____ season.  b. We get fibre from _____.  c. People who go to space are _____.  d. Insects have _____ legs.  e. A _____ has a root, leaves, and a stem.	1x5=5	Under- -standing

<p><b>Q3.</b></p>	<p><b>Match the following :</b></p> <table style="width: 100%; border: none;"> <tr> <td style="width: 50%;">i)Independence day</td> <td style="width: 50%;">Gulal</td> </tr> <tr> <td>ii)Holi</td> <td>15<sup>th</sup> August</td> </tr> <tr> <td>iii)Hot days</td> <td>Dog</td> </tr> <tr> <td>iv)Pet animal</td> <td>Tea, Coffee</td> </tr> <tr> <td>v)Cold days.</td> <td>Ice cream</td> </tr> </table>	i)Independence day	Gulal	ii)Holi	15 <sup>th</sup> August	iii)Hot days	Dog	iv)Pet animal	Tea, Coffee	v)Cold days.	Ice cream	<p>1x5=5</p>	<p>Critical thinking</p>
i)Independence day	Gulal												
ii)Holi	15 <sup>th</sup> August												
iii)Hot days	Dog												
iv)Pet animal	Tea, Coffee												
v)Cold days.	Ice cream												
<p><b>Q4.</b></p>	<div style="text-align: center;">  </div> <p><b>Label the parts of given plant:</b></p>	<p>1X5=5</p>	<p>Intellectual</p>										








**ARMY PUBLIC SCHOOL GWALIOR**  
**CLASS - I**  
**ACADEMIC SESSION 2023-24**  
**REVISION WORKSHEET (SELF –ASSESSMENT)**

**Subject: G.K**  
**Allotment Date: 10 February 2024**

**Assignment No. : 9**

S.No.	Questions	Marks	Skills												
Q1.	<p><b>Fill in the blanks using given help box:</b></p> <p>(Sanskrit, Nail cutter, Phiran, Ektara, Lotus)</p> <ol style="list-style-type: none"><li>The people of Kashmir wear a long coat called .....</li><li>..... is a one-stringed musical instrument of India.</li><li>..... is one of the oldest language of India.</li><li>..... is the national flower of our country.</li></ol> <p>..... is a tool used to trim nails.</p>	1x5=5	Information												
Q2.	<p><b>Match the columns:</b></p> <table><thead><tr><th>Column A</th><th>Column B</th></tr></thead><tbody><tr><td>1. Tricolour</td><td>Tennis</td></tr><tr><td>2. Tulip</td><td>Computer</td></tr><tr><td>3. Paddle</td><td>Tool used to cut wire</td></tr><tr><td>4. Pliers</td><td>Flower</td></tr><tr><td>5. CPU</td><td>National Flag of India</td></tr></tbody></table>	Column A	Column B	1. Tricolour	Tennis	2. Tulip	Computer	3. Paddle	Tool used to cut wire	4. Pliers	Flower	5. CPU	National Flag of India	1x5=5	Cognitive
Column A	Column B														
1. Tricolour	Tennis														
2. Tulip	Computer														
3. Paddle	Tool used to cut wire														
4. Pliers	Flower														
5. CPU	National Flag of India														
Q3.	<p><b>Answer the following in one word using the given help box:</b></p> <p>( Hammer, Garrett Morgan, Badminton, Charles Babbage, Wait)</p> <p>Q. 1 Shuttlecock is the playing equipment of which game? Ans.....</p> <p>Q. 2 Who invented traffic lights? Ans.....</p>	1x5=5	HOTS												

	<p>Q. 3 Which tool is used to fix nail into the wall?          Ans.....</p> <p>Q. 4 What does yellow light signifies?          Ans.....</p> <p>Q. 5 Who invented computer?          Ans.....</p>		
<p><b>Q4.</b></p>	<p><b>Recognize the picture and circle the correct word:</b></p> <p>1.  Tamil, Punjabi</p> <p>2.  Joe Biden, Elon Musk</p> <p>3.  Guitar, Piano</p> <p>4.  United Kingdom, France</p> <p>5.  Sarojini Naidu, Kamala Devi</p> <p>Harri</p>	<p>1x5=5</p>	<p>Inter-disciplinary</p>



**ARMY PUBLIC SCHOOL GWALIOR**  
**CLASS - I**  
**ACADEMIC SESSION 2023-24**  
**REVISION WORKSHEET (SELF –ASSESSMENT)**

**Subject: Computer**

**Assignment No. : 9**

**Allotment Date: 10 February 2024**

Sr. No.	Questions	Marks	Skills
Q1.	<p><b>Tick the correct answer.</b></p> <p>(i) Fill button is present in the _____ tool.</p> <p>a) Paint</p> <p>b) Text</p> <p>c) Magic</p> <p>(ii) Arranging things makes them look_____.</p> <p>a) heavy</p> <p>b) tidy</p> <p>c) untidy</p> <p>(iii) _____ is an AI- based drawing program.</p> <p>a) Tux Paint</p> <p>b) AutoDraw</p> <p>c) MS Paint</p> <p>(iv) _____ is a free drawing and coloring program.</p> <p>a)Tux Paint</p> <p>b) MS-Word</p>	0.5x1=2	Information

	c) Word pad		
<b>Q2.</b>	<b>Fill in the blanks-</b> a) _____ tool is used to add special effects. b) _____ is created when figures or shapes are arranged in a design. c) _____ canvas is the largest part of the screen where we draw. d) For starting AutoDraw , we need a computer with _____ connection.	0.5x1=2	Understanding
<b>Q3.</b>	<b>Write 'T' for True or 'F' for False against the statements:-</b> a) Quit tool is used to close the program. b) Decomposition of a problem makes it difficult to solve. c) Paint tool is used to draw shapes. d) AI helps us in doing things faster and accurately.	0.5x1=2	Inter disciplinary
<b>Q4.</b>	<b>Answer the following questions in one word.</b> a) Which tool is used to paste pre-drawn images on canvas? Ans. _____ b) What is the name of AI-based drawing program? Ans. _____ c) Which tool is used to erase any part of the drawing. Ans. _____ d) Breaking up of a problem into smaller parts is known as? Ans. _____	1x4=4	Cognitive