

ARMY PUBLIC SCHOOL GWALIOR
CLASS – V
ACADEMIC SESSION 2023-24
WORKSHEET (SELF –ASSESSMENT)



Subject: English

Assignment No.: 8

Allotment Date: 30 January 2024

S. NO.	QUESTIONS	MARKS	NATURE
Q1.	<p style="text-align: center;">SECTION A (READING)</p> <p>Read the following paragraph and answer the questions given below:</p> <p style="text-align: center;">CLEVER ELLIE</p> <p>Once upon a time, there was an elephant named Ellie. One day when Ellie was walking alone in the peaceful forest, she suddenly heard a rustling sound. To her surprise, it was a hunter. Ellie quickly hid behind a big banyan tree, using her big ears to listen. The hunter searched for a while but he gave up and left. Ellie was safe. She decided to warn her animal friends about the hunter, teaching them to stay vigilant. Together, they all lived happily ever, after protecting their forest home.</p> <p>Now on the basis of above paragraph, answer the following questions:</p> <p>1 Choose the correct option for the following questions:</p> <p>i) What is the elephant's name ?</p> <p>a). Ellies</p> <p>b) Ellie</p> <p>c) Elliee</p>	4 marks	Reading and understanding

ii) Where was Ellie when she heard the rustling sound?

3.5marks

a) in the forest

b) in the peaceful forest

c) near the jungle

2. Fill in the blanks:

i) Ellie hid behind to avoid the_____.

3. Find the opposite word of 'non-vigilant' from the above passage.

4. Answer the following questions in one word:

i) Where was Ellie walking?

ii) About whom Ellie warned to her animal friends?

5. State the following statements as True or False:

i) Ellie was a clever hunter. []

Read the following lines of the poem:

“ One by one the casement catch
Her beams beneath the silvery thatch;
Couched in his kennel, like a log,
With paws of silver sleeps the dog;”

Now, on the basis of the above lines of the poem, answer the following questions:

1. Fill in the blanks:

i) The window casements of the houses
thatched roof turn _____.

(ii) The dog's _____ also appear 'silver'.

Q2.

	<p>2. From the above line of the poem, find out the rhyming words of:</p> <p>(i) catch- (ii) log -</p> <p>3. Find the opposite word of 'above' from the above stanza of the poem.</p> <p>4. Answer the following question in one word:</p> <p>(i) Who is turning everything silver?</p>		
Q3	<p align="center">SECTION-B (WRITING)</p> <p>Complete the following dialogue between a waiter and a customer for ordering food at a restaurant.</p> <p>Waiter: Good evening, what can _____?</p> <p>Customer: I'd like to order _____.</p> <p>Waiter: Would you _____.</p> <p>Customer: No, _____ . Thank _____.</p> <p>Waiter: Alright, I'll have that ready for you in a few minutes.</p> <p>Write a letter to your friend describing him about the magic show which you have recently watched with your family members.</p>	4 marks	Critical and creative thinking, Imagination and constructive skills
Q4		3.5 marks	

SECTION – C (GRAMMAR)			Understanding , analytical skill, Interdisciplinary
Q5	<p>Choose the correct option for the following questions:</p> <p>(i) Identify the verb in the following sentence – ‘Raj is playing football.’ (a) Raj (b) playing (c) football</p> <p>(ii) ‘She is the most beautiful girl’. The degree of comparison used here is- (a) Positive (b) Comparative (c) Superlative</p> <p>(iii) ‘I was standing at the door’. Here, the Preposition ‘in’ used is the Preposition of..... (a) time (b) place (c) direction</p> <p>(iv) Tick the kind of conjunction used in the following sentence- Soni has a hectic job yet she manages her house well. (a) Coordinating (b) Correlative (c) Subordinating</p> <p>(v) Choose the correct Pronoun. _____ is this untidy chart? (a) Whom (b) Whose (c) Who</p>	2.5marks	
Q6	<p>Fill in the blanks as directed:</p> <p>(i) Fill the appropriate demonstrative pronoun from the words given in the bracket: are the shoes I want. (That / This / Those)</p> <p>(ii) Fill in the blank with an appropriate interjection: ! You look great tonight.(Wow / Alas / Bravo)</p> <p>(iii) Fill the appropriate Preposition from the words given in the bracket: Roy got.....the car. (into / through / above)</p>	2.5marks	

<p>Q7</p>	<p>(iv) Fill in the blank with appropriate infinitive.</p> <p>Our family is planning around the world.</p> <p>(to sleep/ to tour/ to score)</p> <p>(v) Fill in the blanks with the suitable gerunds.</p> <p>..... is her favorite sport.</p> <p>(Baking/Skiing/Walking)</p> <p>State the following statements as True or False:</p>	<p>2.5 marks</p>	
<p>Q8</p>	<p>(i) Antonym of abundant is scarce. []</p> <p>(ii) He hurt himself while playing. []</p> <p>(iii) An elephant is an land animal. []</p> <p>(iv) I were watching Star Wars at 5.00 p.m. []</p> <p>(v) Rubys father is out on a world tour []</p> <p>Answer the following questions in one word:</p>	<p>2.5marks</p>	
<p>Q9</p>	<p>(i) A word expressing a sudden or strong feeling is called an</p> <p>(ii) The comparative degree of the adjective 'cunning' is.....</p> <p>(iii) Write any one example of Preposition of Place.</p> <p>(iv) A word opposite in meaning to the other word is an</p> <p>(v) Write the synonym of starving.</p> <p>Rewrite the following sentence by using punctuation marks.</p>	<p>2.5marks</p>	
<p>Q10</p>	<p>(i) radhika has done ma in psychology</p> <p>(ii) geeta is living in the us</p> <p>(iii) this pen is aryas</p> <p>(iv) its so hot humid and sticky</p> <p>(v) he has completed his mmbbs this year</p>	<p>1marks</p>	

	<p>MCQ</p> <p>(i) The shortened form of should not is</p> <p>(a) should'nt (b) shouldn't (c) shouldnt'</p>		
Q11	<p align="center">SECTION – D (LITERATURE)</p> <p>Fill in the blanks:</p> <p>(i) The 2018 Commonwealth Games are officially known as _____.</p> <p>(ii) _____ is known as the 'Lady with the lamp'.</p> <p>(iii) The Howrah Bridge is made on the river _____.</p> <p>(iv) Matilda Jane is the name of a _____.</p> <p>(v) Andrew has planned to go with his friends to pluck _____.</p> <p>Reference to context :</p> <p>“I would like to watch this puppet show every evening. I am delighted.”</p> <p>(i) Who said this to whom?</p> <p>(ii) Why was he so delighted?</p> <p>(iii) Write the meaning of 'delighted'.</p> <p>Answer the following questions in short :</p> <p>(i) Why did the King Krishnadevaraya admire Tenali Rama?</p> <p>(ii) How did the priest make the puppets?</p> <p>(iii) Why did the boat sink?</p> <p>Long Answer Question.</p> <p>What was special about the medals the india won in the 2018 Commonwealth Games?</p>	<p>2.5marks</p> <p>3marks</p> <p>3marks</p> <p>3marks</p>	<p>Evaluation, Understanding, Critical thinking</p>

ARMY PUBLIC SCHOOL GWALIOR



CLASS – V ACADEMIC SESSION 2023-24 WORKSHEET (SELF –ASSESSMENT)




Subject: Hindi

Assignment No.:8

Allotment Date: 30 January 2024


क्र०	प्रश्न	अंक	प्रश्नकाप्रकार
	<p>प्र 1. निम्नलिखित अपठित गद्यांश को ध्यानपूर्वक पढ़कर नीचे दिए गए प्रश्नों के उत्तर दीजिये- (5×1=5)</p> <p>रक्षाबंधन भाई-बहन के प्यार का प्रतीक त्यौहार है। इस त्यौहार पर बहनें अपने भाइयों की कलाईयों पर राखी बाँधती हैं। यह भाइयों के प्रति बहनों के प्यार और उनकी खुशहाली की कामना की प्रतीक होती है।</p> <p>भाई अपनी बहन की हमेशा रक्षा करने का वचन देता है। राखी सामान्यतः सुनहरे, चमकीले और रेशमी धागे से बनती है। यह त्यौहार जुलाई-अगस्त में श्रावण मास में पड़ता है। यह त्यौहार ऐतिहासिक रूप से भी प्रसिद्ध है।</p> <p>चित्तौड़ के राजा की विधवा रानी कर्णावती ने मुगल बादशाह हुमायूँ को राखी भेजकर सहायता माँगी थी और रक्षा का अनुरोध किया था। हुमायूँ राखी पाकर इतना भावुक हुआ कि उसने तुरंत ही कर्णावती की रक्षा के लिए अपनी सेना भेज दी थी।</p> <p>रक्षाबंधन के दिन बहनें पूजा की थाली तैयार करती हैं और उसमें राखियाँ, चावल के दाने, अगरबत्तियाँ और मिठाइयाँ सजाती हैं। अपने भाइयों की आरती करने के बाद वे उनकी कलाईयों पर आकर्षक राखियाँ बाँधती हैं।</p> <p>(क) रक्षाबंधन किसका प्रतीक है?</p> <p>(ख) किसमस बर्ष में कब मनाया जाता है ?</p> <p>(ग) राखी कैसे बनाई जाती है?</p> <p>(घ) रक्षाबंधन किस माह में मनाया जाता है??</p> <p>(ङ) रक्षाबंधन के दिन बहनें पूजा की थाली में क्या-क्या सजाते हैं?</p>		
	<p>प्र 1. निम्नलिखित अपठित पद्यांशको ध्यानपूर्वक पढ़कर नीचे दिए गए प्रश्नों के उत्तर दीजिये-</p> <p>बात सभी ने यह है मानी।</p>		

<p>हवा सुबह की बड़ी सुहानी। सदा ताज़गी देती है यह। आलस को हर लेती है यह ॥ यह रोगी न होने देती। तनिक न सेहत खोने देती। सुबह सैर पर जाकर देखो। हवा निराली पाकर देखो। अगर सैर पर नित जाओगे। अच्छी सेहत तुम पाओगे।</p> <p>(कइस कविता में (किसका गुणगान किया गया है?) (खसुबह की हवा के बारे में क्या बताया गया है (? (गसुबह सैर पर जाने से क्या लाभ मिलेगा (? (घसबसे उपयुक्त शीर्षक होगा इस कविता का (</p>		
<p>प्र०3. नीचे दिए गए चित्र का अपनी समझ के अनुसार 100 शब्दों में वर्णन कीजिये।</p> 		
<p>प्र०4. अपने मित्र को अपने जन्मदिवस पर आमंत्रित करने के लिए 100 शब्दों में एक पत्र लिखिए।</p>		
<p>प्र०5. निम्नलिखित मुहावरों के अर्थ लिखिए-</p> <p>(क) अंतिम साँस लेना (ख) पीठ थपथपाना (ग) बाल बाँका न होना</p>		
<p>प्र०6. अनेकार्थक शब्द लिखो- वार -</p>		

	<p>व्यंजन-</p> <p>सूत-</p> <p>सोना-</p> <p>मगर-</p>		
	<p>प्र०7. वाक्यांश के लिए एक शब्द लिखो-</p> <p>कविता लिखनेवाली-</p> <p>इतिहास से संबंध रखनेवाला -</p> <p>समाज से संबंध रखनेवाला -</p> <p>जो सुननेवाला हो -</p>		
	<p>. प्र०8 वाक्यों को दिए गए काल की क्रिया से पूरा करो-</p> <p>क. नेहा काम.....।(वर्तमानकाल)</p> <p>ख. किसान खेत में हल.....।(भूतकाल)</p> <p>ग. मधुमक्खी फूलों का रस.....।(वर्तमानकाल)</p> <p>घ. क्या तुम कल बाज़ार.....?(भविष्यकाल)</p>		
1.	<p>प्र०9.निम्नलिखित प्रश्नों के सही उत्तर लिखो</p> <p>(1)"मेरी आँखों से आँसू निकल पड़े।" किसकी आँखों में आँसू आ गए और क्यों?</p> <p>(2) फूलों को खिलने के लिए क्या-क्या चाहिए?</p> <p>(3) घर में सब नेहा को क्यों प्यार करते थे ?</p> <p>(4). कर्ण ने सूर्य से क्या प्रार्थना की और क्यों?</p>	5	
2.	<p>प्र०10. निम्न शब्दों के अर्थ लिखो :</p> <p>रक्त-</p> <p>स्वभाव-</p> <p>सरल-</p> <p>खोखला-</p>	5	

3.	प्र०11. दिए गए इन विराम चिन्हों के नाम लिखिए- ? !	6	
	प्र०12. निम्नलिखित वाक्यों में क्रियाविशेषण शब्दों _____ पर लगाइए- i. <u>आज</u> धूप निकली है। ii. <u>वहाँ</u> मत जाइए, बंदर है।		
	प्र०13. वर्ण-विच्छेद करो- ध्यान उन्नति		
	प्र०14. पर्यायवाची शब्द लिखो- उपवन वायु		

ARMY PUBLIC SCHOOL GWALIOR



CLASS – V ACADEMIC SESSION 2023-24 WORKSHEET (SELF –ASSESSMENT)




Subject: Mathematics

Assignment No.:8

Allotment Date: 30 January 2024

S. NO.	QUESTIONS	MARKS	NATURE
1	Fill in the blanks. (i) The points which do not lie in a straight line are said to be (ii) The radius of a circle with diameter 24cm is (iii) 6 h 36 min = _____ sec (iv) _____ divides an object into two identical mirror images.	4X1=4	
2	State 'True' or 'False' for following statements. (i) A 6-sided Polygon is known as Hexagon (T/F) (ii) 1 Decameter = 10 m (T/F) (iii) The sum of two consecutive triangular numbers is a square number (T/F) (iv) If CP > SP then loss occurs (T/F)	4X1=4	
3	Tick the correct answer from the given options: (i) The average of 12,20,30, 42 is (a) 24 (b) 18 (c) 36 (d) 42 (ii) The area of a rectangle of length 8cm and breadth 6cm is (a) 12 sq cm (b) 24 sq cm (c) 36 sq m (d) 48 sq cm (iii) Number of times a particular value in data occurs itself is called a) Data b) Frequency c) Array d) None of these (iv) 9:15 pm in 24 h clock is (a) 1815 hours (b) 2015 hours (c) 2115 hours (d) 2315 hours	4X1=4	

4	<p>Match the following columns:</p> <p>(i) An angle with measure 60° is an (ii) An angle with measure 150° is an (iii) A square number (iv) A triangular number</p> <p>a.) 49 b.) 45 c.) Obtuse angle d.) Acute angle</p>		
5	<p>Solve the following questions: -</p> <p>Q5. The average cost of 5 articles is ₹ 40. Find the total cost of these 5 articles Q6. Two angles of a triangle are 65° and 35°. Find the third angle of the triangle. Q7. The perimeter of an equilateral triangle is 29.7 cm. Find the length of each side of the triangle. Q8. Find the interval between 7:25 am and 3:10 pm Q9. Find the profit or loss if CP = ₹ 1000; and SP = ₹ 975 Q10. Convert the following into units as mentioned in brackets. (i) 25km (as m) (ii) 5m 30 cm (as cm)</p>	6 X 2 = 12	
6	<p>Solve the following questions: -</p> <p>Q11. A brick measures 20 cm x 10 cm x 3.5 cm. What will be the total volume of 275 bricks? Q12. Aditya bought a music system for ₹ 6485 and spent ₹ 500 on its repair. He sold it for ₹ 7500. Find his profit or loss .OR Find the average of first five composite numbers.</p> <p>Q13. The length and breadth of a rectangular field are 210m and 95 m respectively. Find the perimeter of the field .How much will it cost to fence the field at the rate of Rs 46 per metre? OR A box is 15.2cm long, 7.5cm wide and 4 cm high. What is the volume of the box.</p> <p>Q14. Mr Sharma bought a house for ₹ 6,20,000 and paid ₹ 30,000 for furnishing the house. If he sold it for ₹ 7,00,000, what is his loss or gain OR Give one example of each ; Cube, cuboid and cylinder and draw its line of symmetry.</p>	4 x 3 = 12	



ARMY PUBLIC SCHOOL GWALIOR
CLASS – V
ACADEMIC SESSION 2023-24
WORKSHEET (SELF –ASSESSMENT)

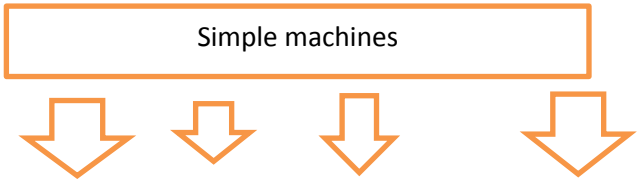


Subject: EVS


Assignment No.: 8

Allotment Date: 30 January 2024

S. NO.	QUESTIONS	MARKS MM:40	NATURE
Q1	<p>Choose the correct option.</p> <p>i). It Float in water</p> <p>a. Ice</p> <p>b. Iron nail</p> <p>c. storn</p> <p>ii). It is Space Research Organization.</p> <p>a. ISRO</p> <p>b. NASA</p> <p>c. BOTH a& b</p> <p>iii). Houseboats are found in .</p> <p>a. Kashmir</p> <p>b. Kerala</p> <p>c. Both a & b</p> <p>iv). Golden Temple is located on?</p> <p>a. Punjab</p> <p>b. Haryana</p> <p>c. Rajasthan</p> <p>v) Taj Mahal is located in on the Bank of the river?</p> <p>a. Yumuna</p> <p>b. ganga</p> <p>c. Narmada</p>	4x1=4	
Q2	<p>Match the following options:</p> <p>i). Largest slum</p> <p>ii). water</p> <p>iii). Earthquake</p> <p>iv). Konak temple</p> <p>a. Reichter scale</p> <p>b. odisha</p> <p>c. universal solvent</p> <p>d. Dharavi</p>	4X1=4	

Q3	Fill in the blanks: i). Full form of ISRO _____ ii). The study of earthquakes is known as _____. iii) . _____ is the highest mountain of the world. iv). Water is cooling is converted into _____.	4X1=4	
Q4	State whether the following statements are „True“ or „False“. i). Rice needs a lot of water to grow. ii). Perishable food spoil quickly iii). Charminar is located in Mumbai iv). Taj Mahal is built by Shah Jahan	4x1=4	
Q5	Complete this flowchart : <div style="text-align: center;">  </div>	1x2=2	
Q 6.	Circle the odd word. i). Kalpana Chawla ,Rakesh Sharma, sunita Williams ,Neilarmstrong ii). Fish , wheel, dolphin, jellyfish iii). Sugar, salt, watercolor, sand	3x1=3	
Q 7.	Give reason of the following i). Millets are grown in Rajasthan ii). Water is universal solvent iii). spongy become heavier when dip in water	3x1=3	
Q 8.	Define the following terms: i). canning ii). Fossil fuel	2x1=2	
Q 9.	Answer the following in one word: i). Disease caused by anopheles mosquitoes _____ ii). The first person in the space. _____	2x1=2	

Q 10.	Give example of the following: i). submerged plant _____ ii). Monument built by slave king __	2x1=2	
Q 11.	Answer the following questions in short: i). What do people like to take part in the adventurous activity? ii). What is Irrigation?	2x2=4	
Q 12.	Answer the following questions in long: i). Write the five way to tackle the effect of disaster? ii). Describe the various type of bees in a bee hive? iii). List the five way to control the wastage of food?	3x2=6	



ARMY PUBLIC SCHOOL GWALIOR
CLASS – V
ACADEMIC SESSION 2023-24
WORKSHEET (SELF –ASSESSMENT)




Subject: Computer
Allotment Date: 30 January 2024

Assignment No: 8

S.NO.	QUESTIONS	MARK	NATURE
1.	<p>Tick the correct answer.</p> <ol style="list-style-type: none">1. _____ represents data that has an assigned value of either True or False.<ol style="list-style-type: none">a. Booleanb. Integerc. String 2. _____ is a numeric value that does not include a decimal point.<ol style="list-style-type: none">a. Stringb. Integerc. Boolean 3. A _____ statement shows one or more actions following each other.<ol style="list-style-type: none">a. Conditionalb. Sequentialc. Repeat 4. The _____ block is formed when we insert a Repeat block inside another Repeat block.<ol style="list-style-type: none">a. Nested Repeatb. Repeat loopc. Repeat Until	1X4=4	Interdisciplinary

<p>2.</p>	<p>Fill in the blanks.</p> <ol style="list-style-type: none"> 1. A program is a set of instructions which are executed in _____ manner. 2. The _____ block is a control block which runs the script for an number of times. 3. _____ is a good way to have sprites and scripts communicate. 	<p>1X3=3</p>	<p>Analytical Skill</p>
<p>3.</p>	<p>Answer the following.</p> <ol style="list-style-type: none"> 1. What are variables? 2. What is conditional statement? 3. What is the use of broadcast in Scratch? 	<p>1 X3=3</p>	<p>Analytical Skill</p>



ARMY PUBLIC SCHOOL GWALIOR
CLASS – V
ACADEMIC SESSION 2023-24
WORKSHEET (SELF –ASSESSMENT)



Subject: GK

Assignment No:8

Allotment Date: 30 January 2024

S. NO.	QUESTIONS	MARKS	NATURE
Q1	<p>Choose the correct option.</p> <p>ii). Who was the writer of discovery of India</p> <p>a. Pandit Jawaharlal Nehru</p> <p>b. Mahatma Gandhi</p> <p>c. Sarajini Naidu</p> <p>d.</p> <p>ii) who was the writer of Gitanjali?</p> <p>d. Ravindra tagore</p> <p>e. Khushwant Singh</p> <p>f. Both a & b</p> <p>g. none</p> <p>iv). The autobiography of my Experiment with truth</p> <p>a. Mahatma Gandhi</p> <p>b. Rajendra Prasad</p> <p>c. Both a & b</p> <p>v). “The god of small thing” is written by</p> <p>a. Mitra Pushkan</p> <p>b. Arun DhatiRoy</p> <p>c. Rabindranath tagore</p>	4x1=4	information
Q2	<p>Fill in the blanks:</p> <p>iii). _____ The largest flightless word in the world is_____</p> <p>ii) The second smallest planet in our solar system is_____</p> <p>iv). The second most abundant element in the earth</p>	4X1=4	

crust is _____

iv). Cartoon Network started broadcasting in India in _____

Q 4.

Identify pictures

5x2=10

General knowledge

iii).



iv).



iii)




iv)



v)





ARMY PUBLIC SCHOOL GWALIOR
CLASS – V
ACADEMIC SESSION 2023-24
WORKSHEET (SELF –ASSESSMENT)





Subject: Art and Work Education

Assignment No.: 8

Allotment Date: 30 January 2024

S.NO	QUESTIONS	MARKS
Q1.	What blocks are used for block printing? a) Stone b) Ceramic c) Wood d) Metal	1
Q2.	Who invented block printing? a) Japanese b) Indian c) Malaysia d) Chinese	1
Q3.	Which paint is best for block printing on fabric? a) Water color b) Emulsion paint c) Acrylic fabric paint d) Varnish	1
Q4.	Which state is famous for block printing? a) Rajasthan b) Madhya Pradesh c) Utter Pradesh d) Maharashtra	1
Q5.	A woodcut is an example of a common, modern block print process? a) True b) False	1
Q6.	A plastic tool is used in block printing. a) True b) False	1

Q7.	<p>Which of the following block print techniques is the newest?</p> <p>a) Stamping b) Pressing c) Rubbing d) Squeezing</p>	1
Q8.	<p>Which of these woods are used for block printing?</p> <p>a) Balsa wood b) Oak wood c) teak or see sham wood d) Mahogany</p>	1
Q9.	<p>Which Colours are mostly used for block printing?</p> <p>a) White b) saffron, yellow, blue and red c) black d) violet</p>	1
Q10.	<p>Which of these is an example of block printing?</p> <p>a)</p>  <p>b)</p> 	1

c)



d)



ARMY PUBLIC SCHOOL GWALIOR



CLASS – V ACADEMIC SESSION 2023-24 WORKSHEET (SELF –ASSESSMENT)



Subject: Health and Physical Education

Assignment No.:8

Allotment Date: 30 January 2024

S.NO	QUESTIONS	MARKS	SKILLS/COMPETENCIES
1.	<p>Tick The Correct Answer</p> <p>Q-1- What is the weight of football? a.410gm to 450gm b.310gm to 350gm c.510gm to 550gm d.350gm to 400gm</p> <p>Q-2 Who won the 2018 football cup? a.Brazil b.Portugal c.France d.Argentina</p> <p>Q-3- What colour cards do referee carry in a football match? a.Red and orange b.Yellow and blue c.Red and yellow d.Green and blue</p> <p>Q-4- What is the time duration of football match? a.80 minutes b.90 minutes c.70 minutes d.95 minutes</p>	4	Informative
2	<p>Fill in the blanks</p> <p>Q-5- Football world cup 2022 organising by _____ (Qatar,france)</p> <p>Q-6 Penalty area is_____ far away from</p>	3	Understanding

	<p>the touch line.(18yard,20 yard)</p> <p>Q-7 _____ won the most football world cup title.(Argentina,Brazil)</p>		
3	<p><u>True False</u></p> <p>Q-8- 12 players from each team allowed to play at a time?</p> <p>A. True</p> <p>B. False</p> <p>Q-9 Portugal won their world cup title in 2014?</p> <p>A. True</p> <p>B. False</p> <p>Q-10- Cristiano ronaldo plays for Portugal?</p> <p>A. True</p> <p>B. False</p>	3	Knowledge

ARMY PUBLIC SCHOOL GWALIOR



CLASS – V ACADEMIC SESSION 2023-24 WORKSHEET (SELF –ASSESSMENT)



Subject: Dance and Music

Assignment No.: 8

Allotment Date: 30 January 2024

S. NO.	QUESTIONS	MARKS	NATURE
1	Do dance performances on the environment aim to entertain or raise awareness? a) Entertain b) Raise awareness	1	Understanding
2	What can dancers embody in environmentally-themed performances? a) Historical events b) Elements like wind, water, or trees	1	Creative thinking
3	Do environmentally-themed dance performances encourage reflection on personal responsibility? a) No impact on reflection b) Yes, encourages reflection	1	Understanding
4	How do choreographers often represent environmental elements in dance? a) Through political commentary b) Symbolic movements mirroring nature's balance	1	Creative thinking
5	How does dance contribute to raising awareness about the environment? a) By telling fictional stories b) By embodying environmental themes and encouraging reflection	1	Understanding

6	What is the official color of ashoka chakra on indian national flag? A) Blue B) Navy blue	1	Knowledge
7	Who designed the indian national flag? A) Lal bahadur shahtri B) Pingalli venkaiya	1	Knowledge
8	What is the sequence of colours on the Indian National Flag? A) Saffron,white,green B) White,saffron,green	1	Understanding
9	Which color is on the top while hoisting indian national flag? A) Saffron B) Green	1	Knowledge
10	Which color in on the bottom while hoisting Indian national flag? A) Green B) White	1	Knowledge