

4.	<p>Answer the following questions:</p> <p>Q1. Where did Sona live? Ans. _____ _____</p> <p>Q2. How did Mohit act to save himself? Ans. _____ _____</p> <p>Q3. Who were Sona's friends? Ans. _____ _____</p>	3×2=6	Critical thinking
----	---	-------	-------------------






ARMY PUBLIC SCHOOL GWALIOR
CLASS - I
ACADEMIC SESSION 2023-24
WORKSHEET (SELF -ASSESSMENT)

Subject: Hindi

Assignment No. : 8

Allotment Date: 30 January 2024

संख्या	प्रश्न/उत्तर	अंक	प्रकृति
प्र.1	दिए गए चित्रों का उनके सही नाम से मिलन करो:  श्रमिक यज्ञ त्रिकोण कक्ष	1x4=4	बोधात्मक
प्र 2	ऐसे शब्द लिखो जिनमें नीचे दिए गए वर्णों का प्रयोग किया हो ट्र ----- क्र ----- क्ष -----	1 x3 =3	गहनसोच
प्र-3	नीचे लिखे शब्दों के अर्थ लिखो: 1. इशारा - ----- 2. तुरंत - ----- 3. कचहरी - ----- 4. आँखें तरेरना - -----	4x 1=4	समस्या समाधान

<p>प्र-4</p>	<p>नाम की जगह प्रयोग होने वाले सही शब्द लिखकर वाक्य पूरे करो।</p> <p>(वे, उसका ,हमारा, वह)</p> <p>1. विशाल और कमल अच्छे दोस्त हैं। -----रोज साथ-साथ पढ़ते हैं।</p> <p>2. आकाश फुटबॉल खेलता है। ----- अच्छा खिलाड़ी है।</p> <p>3. कल ----- मैच है।</p> <p>4. अमर -----भाई है।</p>	<p>4 x1=4</p>	<p>भाषाई कौशल</p>
<p>प्र-5</p>	<p>चित्रों के नाम लिखो:</p> <div style="display: flex; justify-content: space-around; align-items: center;"> <div style="text-align: center;">  <p>_____</p> </div> <div style="text-align: center;">  <p>_____</p> </div> </div>	<p>2x1=2</p>	<p>विश्लेषणात्मक</p>
<p>प्र-6</p>	<p>नाम लिखो -</p> <p>मेरा नाम= -----</p> <p>माँ = -----</p> <p>पिताजी= -----</p> <p>बहन/भाई= -----</p>	<p>4x1=4</p>	




ARMY PUBLIC SCHOOL GWALIOR
CLASS - I
ACADEMIC SESSION 2023-24
WORKSHEET (SELF -ASSESSMENT)



Subject: Mathematics
Allotment Date: 30 January 2024

Assignment No. : 8

S.NO	QUESTIONS	MARKS	SKILLS
1.	<p>Put 20 flowers equally Into 4 vases.</p>  <p>Total number of flowers = _____ Number of vases = _____ Division fact = $__ \div __ = ___$ So, number of flowers in each vase = _____</p>	$5 \times 1 = 5$	Computational skills
2.	<p>Divide the following :</p> $12 \div 4 = \underline{\quad}$ $15 \div 5 = \underline{\quad}$ $20 \div 5 = \underline{\quad}$ $24 \div 6 = \underline{\quad}$ $35 \div 7 = \underline{\quad}$	$5 \times 1 = 5$	Computational skills
3.	<p>Fill in the boxes.</p> <p>1. $15 \div \underline{\quad} = 5$</p> <p>2. $10 \div \underline{\quad} = 2$</p> <p>3. $25 \div \underline{\quad} = 5$</p> <p>4. $\underline{\quad} \div 9 = 3$</p> <p>5. $16 \div 4 = \underline{\quad}$</p> <p>6. $27 \div \underline{\quad} = 9$</p> <p>7. $36 \div 6 = \underline{\quad}$</p>	$7 \times 1 = 7$	Problem solving

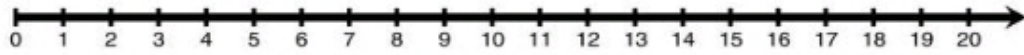
4.

Divide the following using number line.

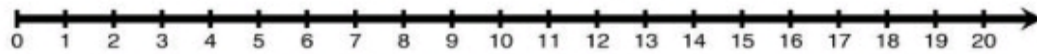
$3 \times 1 = 3$

Critical thinking

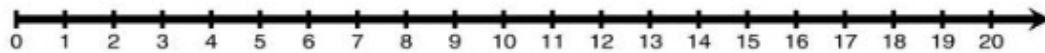
$9 \div 3 = \underline{\quad}$



$10 \div 5 = \underline{\quad}$



$20 \div 4 = \underline{\quad}$





ARMY PUBLIC SCHOOL GWALIOR
CLASS - I
ACADEMIC SESSION 2023-24
WORKSHEET (SELF –ASSESSMENT)

Subject: EVS

Assignment No. : 8

Allotment Date: 30 January 2024

S.NO	QUESTIONS	MARKS	SKILLS										
1.	<p>Fill in the blanks using the help box given below: (Metro, religious festivals, 15th August, Holi, Air transport)</p> <p>a) _____ is known as the festival of colours .</p> <p>b) The festivals which are celebrated by all the people of nation are called _____</p> <p>c) _____ is the fastest means of transport.</p> <p>d) Many big cities have _____ trains.</p> <p>e) Independence Day is celebrated on _____.</p>	5×1=5	Application and analytical skills										
2.	<p>Match the following:</p> <table style="width: 100%; border: none;"><tr><td style="width: 50%;">1. Diwali</td><td style="width: 50%;">a. Ravana</td></tr><tr><td>2. Glider</td><td>b. Water transport</td></tr><tr><td>3. Dussehra</td><td>c. Diyas</td></tr><tr><td>4. Raft</td><td>d. Bonfire</td></tr><tr><td>5. Lohri</td><td>e. Air transport</td></tr></table>	1. Diwali	a. Ravana	2. Glider	b. Water transport	3. Dussehra	c. Diyas	4. Raft	d. Bonfire	5. Lohri	e. Air transport	5×1=5	Cognitive skills
1. Diwali	a. Ravana												
2. Glider	b. Water transport												
3. Dussehra	c. Diyas												
4. Raft	d. Bonfire												
5. Lohri	e. Air transport												
3.	<p>Write 'T' for true and 'F' for false in the given blanks below.</p> <p>a. Water transport is very slow means of transport. (.....)</p> <p>b. Eid is the religious festival of muslims. (.....)</p> <p>c. Gandhi Jayanti is celebrated on 26th January every year. (.....)</p> <p>d. Trains have rubber wheels which move on railway tracks. (.....)</p> <p>e. Gurburab is celebrated as the birth anniversary of Guru Nanak Dev Ji. (.....)</p>	5×1=5	Analytical skills										



4.	<p>Answer the following questions:</p> <p>a. How do we celebrate Christmas? Ans</p> <p>b. Name any two vehicles which move on land. Ans</p> <p>c. Which festival is known as the festival of lights? Ans</p> <p>d. Name any two vehicles which carry loads from one place to another. Ans</p> <p>e. Why do we celebrate festivals? Ans</p>	5×1=5	Language, critical thinking



ARMY PUBLIC SCHOOL GWALIOR
CLASS - I
ACADEMIC SESSION 2023-24
WORKSHEET (SELF –ASSESSMENT)

Subject: G.K
Allotment Date: 30 January 2024

Assignment No. : 8

S.N	QUESTIONS	MARKS	SKILLS												
Q.1	<p>Match the playing equipment with their related sports:</p> <table style="width: 100%;"><tr><td style="text-align: center;">Column A</td><td style="text-align: center;">Column B</td></tr><tr><td>a. Hockey</td><td>Bat</td></tr><tr><td>b. Table tennis</td><td>Shuttlecock</td></tr><tr><td>c. Cricket</td><td>Hoop</td></tr><tr><td>d. Badminton</td><td>Stick</td></tr><tr><td>e. Basketball</td><td>Paddle</td></tr></table>	Column A	Column B	a. Hockey	Bat	b. Table tennis	Shuttlecock	c. Cricket	Hoop	d. Badminton	Stick	e. Basketball	Paddle	5 x 1 = 5	Cognitive Skills
Column A	Column B														
a. Hockey	Bat														
b. Table tennis	Shuttlecock														
c. Cricket	Hoop														
d. Badminton	Stick														
e. Basketball	Paddle														
Q.2	<p>Identify the pictures and write their names from the given help box: [Manipuri, Sitar, Punjabi, Guitar, Kashmiri]</p> <div style="display: flex; flex-direction: column; align-items: center;"><div style="text-align: center;"></div><div style="text-align: center;"></div></div>	5 x 1 = 5	Social and Emotional, Analytical												



.....



.....



.....




ARMY PUBLIC SCHOOL GWALIOR
CLASS - I
ACADEMIC SESSION 2023-24
WORKSHEET (SELF –ASSESSMENT)

Subject: Computer

Assignment No. : 8

Allotment Date: 30 January 2024

S.NO.	QUESTIONS	MARKS	NATURE
1.	<p>Tick the correct answer.</p> <p>(i) Arranging things makes them look _____.</p> <p>a) heavy b) tidy c) untidy</p> <p>(ii) _____ means breaking up of a problem into smaller parts.</p> <p>a) Decomposition b) Arranging c) Pattern</p>	2x1=2	Information
2.	<p>Fill in the blanks-</p> <p>a) _____ is created when figures or shapes are arranged in a design.</p> <p>b) Decomposition of a problem makes it easy to _____.</p>	2x2=4	Understanding
3.	<p>Write 'T' for True or 'F' for False against the statements:-</p> <p>a) Patterns do not repeat over and over again. b) We use decomposition in our daily lives too. c) Decomposition of a problem makes it difficult to solve. d) Arranging things makes them look tidy.</p>	4x1=4	Interdisciplinary



ARMY PUBLIC SCHOOL GWALIOR
CLASS - I
ACADEMIC SESSION 2023-24
WORKSHEET (SELF –ASSESSMENT)

Subject: Art and WE

Assignment No. : 8

Allotment Date: 30 January 2024

S. NO.	QUESTIONS	MARKS	NATURE
Q.1	What are the primary colours?	2	Knowledge
Ans			
Q.2	What are the secondary colours?	2	Knowledge
Ans			
Q.3	What are the Tertiary colours?	2	Knowledge
Ans			
Q.4	What are the warm colours?	2	Knowledge
Ans			
Q.5	What are the cool colours?	2	Knowledge
Ans			



ARMY PUBLIC SCHOOL GWALIOR
CLASS - I
ACADEMIC SESSION 2023-24
WORKSHEET (SELF –ASSESSMENT)

Subject: Health and Physical Education
Allotment Date: 30 January 2024

Assignment No. : 8

S.NO.	QUESTIONS	MARKS	NATURE
1.	<p>Tick the correct answer.</p> <p>(i) Throwing is a action which involves the movement of your_</p> <p>a) hands b) head c) feet d) legs</p> <p>(ii) _____is used to grab/hold or catch the ball.</p> <p>a) shoulder b) legs c) foot d) hands</p> <p>(iii)Gross motor develops skills like</p> <p>a) catching b)rolling c)trapping d) all of these</p> <p>(iv)March Past is conducted for _</p> <p>a)small group b)2-4 participants c)large group d)none of these</p>	4x1=4	Information
2.	<p>Fill in the blanks-</p> <p>a)March Past involves the movement of _____&_____.</p> <p>b) _____ is an outdoor game.</p> <p>c) _____ makes you fit and healthy.</p>	3x1=3	Understanding

3.	Write 'T' for True or 'F' for False against the statements:- a) March Past can be conducted for small group. b) Badminton is an outdoor game. c) Hockey is an outdoor game.	3x1=3	Interdisciplinary
----	---	-------	-------------------



ARMY PUBLIC SCHOOL GWALIOR
CLASS - I
ACADEMIC SESSION 2023-24
WORKSHEET (SELF –ASSESSMENT)



Subject: Music

Assignment No. : 8

Allotment Date: 30 January 2024

S. NO.	QUESTIONS	MARKS	NATURE
1	Christmas Day celebrates on which Date? a) 20 December b) 25 December	1	Information
2	Which is the western dance form? a) Hip-Hop b) Kathak	1	Critical Thinking
3	Western dance forms are dedicated to _____-culture. a) Indian b) western	1	Understanding
4	Which is the basic taal of kathak? a) Teentaal b) Dadra taal	1	Information
5	Christmas is thefestival? a) Muslim's b) Christian's	1	Critical thinking
6	Lakdi ki kaathi , kaathi.pe? a) Ghoda b) Haathi	1	Information

7	Naani Teri morni ko legae ? a) Mor b) Chor	1	Information
8	Baaki jo bacha tha kale legae ? a) Chor b) Mor	1	Critical thinking
9	Nanna Munna Rahi hu ka sipahi hu ? a) Desh b) Ghar	1	Understanding
10	Identify the Voice of cat ? a) Meow b)Roar	1	Understanding