

ARMY PUBLIC SCHOOL GWALIOR
CLASS – V
ACADEMIC SESSION 2023-24
WORKSHEET (SELF –ASSESSMENT)



Subject: English

Allotment Date: 30 December 2023

Assignment No. : 7

S. NO.	QUESTIONS	MARKS	NATURE
1.	<p>Read the following paragraph and answer the following questions:</p> <p>The atmosphere of the Earth is divided into many layers. One of the layers is the stratosphere. In the stratosphere, there is a thin layer of ozone gas. The ozone layer is like a protective umbrella which protects the Earth from harmful ultraviolet rays (UV). In 1980s, scientists discovered a hole in the ozone layer caused by chlorofluorocarbons (CFCs). These are man-made chemicals and are used in refrigerators, air conditioners and aerosol sprays. CFCs damage the ozone layer. UV rays can pass through the ozone hole. These rays can cause skin cancer and eye problems. These rays also harm plants and animals.</p> <p>(i) Fill in the blank:</p> <p>a) The full form of CFCs is.....</p> <p>b) Ozone gas is present in the.....</p> <p>(ii) Write the opposite word of following from the above paragraph.</p> <p>a) defensive -</p> <p>b) repair -</p> <p>(iii) What is the cause of hole in ozone layer?</p> <p>.....</p> <p>.....</p> <p>.....</p>	3	Reading skills / Understanding

2.	<p>Make sentences using following words:</p> <p>(i) delighted </p> <p>(ii) departed </p>	2	Critical thinking
3.	<p>Fill in the blanks:</p> <p>(i) The emperor was invited to watch a</p> <p>(ii) The emperor was sad because he missed his</p> <p>(iii) The stories were narrated by the</p>	3	Understanding and Analytical skills
4.	<p>Answer the following question:</p> <p>(i) What is the message behind the priest's puppet show?</p> <hr/> <hr/> <hr/> <hr/> <hr/>	2	HOTS
5.	<p>Answer the following questions:</p> <p>Q1. What would the emperor watch whenever he sat in his palace garden?</p> <p>.....</p> <p>.....</p> <p>.</p>	2	Evaluation

	<p>Q2. What did the emperor build in the memory of his queen?</p> <p>.....</p> <p>.....</p> <p>.....</p> <p>.....</p>		
<p>6.</p>	<p>Fill in the blanks with the hints given in the bracket:</p> <p>(i) I purchased a precious ear rings. (Change into passive voice)</p> <p>(ii) My brother decided(settle) in America. (Use infinitive)</p> <p>(iii) (Swim) is a good exercise. (Fill with gerund).</p> <p>(iv)we have won the trophy. (Fill in with suitable Interjection).</p>	<p>4</p>	<p>Interdisciplinary</p>
<p>7.</p>	<p>Write a letter to your brother/sister staying as a hosteller of the school called 'Little Ones on March' in Dehradun. In the letter, tell him/her what he/she should try to learn from the school to make him/her a better human being.</p>	<p>4</p>	<p>Communication skills</p>



ARMY PUBLIC SCHOOL GWALIOR
CLASS – V
ACADEMIC SESSION 2023-24
WORKSHEET (SELF –ASSESSMENT)



Subject: Hindi

Allotment Date: 30 December 2023

Assignment No. : 7

क्र०	प्रश्न	अंक	प्रश्नकाप्रकार
1.	<p>प्र०1. निम्नलिखित प्रश्नों के सही उत्तर लिखो:</p> <p>क. रक्त लाल रंग का क्यों दिखाई देता है ?</p> <p>ख. रक्तकण शरीर के किस भाग में बनते हैं ?</p> <p>ग. खून के सफेद कण हमारी क्या सहायता करते हैं ?</p> <p>घ. हमें खाने की किन चीज़ों से लौहत्व मिलता है ?</p> <p>च. रक्तकण कितने प्रकार के होते हैं? इन्हें हम कैसे देख सकते हैं ?</p>	5	बोधात्मक
2.	<p>प्र०2. निम्न शब्दों के अर्थ लिखो :</p> <p>रक्त</p> <p>स्वभाव</p> <p>खोखला</p> <p>चिकित्सक</p> <p>रोचक</p>	5	ज्ञानात्मक
3.	<p>प्र०3 सही वाक्यांशों को चुनकर वाक्यों को पूरा करो-</p> <ul style="list-style-type: none">कार्बन डाइऑक्साइड होती है, रक्तकणों, प्लाज़्मा कहते हैं, ऑक्सीजन होती है •	6	सूचनात्मक

	<p>i. खून के पानी जैसे तरल भाग को..... ।</p> <p>ii. छोटे.....को हम केवल माइक्रोस्कोप से ही देख सकते हैं।</p> <p>iii. जो हवा हम ग्रहण करते हैं, उसमें</p> <p>iv. जो हवा हम बाहर छोड़ते हैं, उसमें.....।</p>		
<p>4.</p>	<p>प्र०4. वाक्यों को दिए गए काल की क्रिया से पूरा करो-</p> <p>क. नेहा काम.....।(वर्तमानकाल)</p> <p>ख. किसान खेत में हल.....।(भूतकाल)</p> <p>ग. मधुमक्खी फूलों का रस.....।(वर्तमानकाल)</p> <p>घ. क्या तुम कल बाज़ार.....?(भविष्यतकाल)</p>	<p>4</p>	<p>रचनात्मक</p>
<p>5.</p>	<p>प्र०5. (i)इन वाक्यों के अंत में ऐसे विराम चिह्न प्रयोग कीजिए कि वाक्य का अर्थ बदल जाए-</p> <p>i. वह आज चला जाएगा।</p> <p>ii. वह आज चला जाएगा</p> <p>iii. वह आज चला जाएगा</p> <p>अब इन्हें विराम चिह्न के अनुसार पढ़िए।</p> <p>(ii) सही विराम चिह्न से मिलाइए-</p> <p>i. । क. योजक चिह्न</p> <p>ii. , ख. पूर्णविराम</p> <p>iii ! ग. अल्प-विराम</p> <p>iv. - घ. विस्मयादिबोधक चिह्न</p>	<p>3</p>	<p>विश्लेषणात्मक उच्चस्तरीयचिंतन</p>
<p>6.</p>	<p>प्र०6. (i) इस संवाद में उचित विराम चिह्न लगाइए-</p> <p>अरे भाई जाते कहाँ हो हम भी साथ चलेंगे बहन आग्रह से बोली</p> <p>पर बहन बड़ी दूर जाना है तुम थक जाओगी</p> <p>नहीं भैया</p>	<p>7</p>	<p>बोधात्मक</p>

नहीं बहन


जुलूस कौन बनाएगा तुम झंडा उठाना हम जुलूस बनाकर चलेंगे पीछे पीछे

(ii) दिए गए विराम-चिह्नों का प्रयोग कर वाक्य बनाइए-

!

" "

?



ARMY PUBLIC SCHOOL GWALIOR
CLASS – V
ACADEMIC SESSION 2023-24
WORKSHEET (SELF –ASSESSMENT)




Subject: Mathematics

Allotment Date: 30 December 2023

Assignment No. : 7

S. NO.	QUESTIONS	MARKS	NATURE
1	Fill in the blanks. (a) 3 h 35 min = _____ min (b) 9 min 29 sec = _____ s (c) 6 h 36 min = _____ s (d) 720 min = _____ h	4X1=4	
2	Write the time using am or pm: (a) 1256 h (b) 0130 h (c) 2357 h (d) 0200 h	4X1=4	
3	Tick the correct answer from the given options: 1. 9:15 pm in 24 h clock is [a] 1815 hours [b] 2015 hours [c] 2115 hours [d] 2315 hours 2. The time 31 2 h before 2:20 pm is [a] 10:30 am [b] 10:40 am [c] 10:50 pm [d] 10:50 am 3. A puppet show began at 7:35 pm and lasted for 35 minutes. At what time the show ended? [a] 8:00 pm [b] 8:05 pm [c] 8:10 pm [d] 8:15 pm	3X1=3	
4	Convert the following (a) 10 h into minutes (b) 3 days 12 h 25 min into minutes (c) 9 min into seconds (d) 5 h 5 min 5 sec into seconds	4X1=4	

<p>5</p>	<p>1. Convert the following temperature in °C. (i) 154°F (ii) 42°F</p> <p>2. Convert the following temperature in °F. (i) 65°C (ii) 85°C</p> <p>3. Find the interval between 7:25 am and 3:10 pm.</p> <p>4. What time will it be 6 h 45 min after 9:40 pm?</p> <p>5. Find the interval between 7:25 am and 4:10 pm.</p> <p>6. What time was it 8 h 35 min before 7:20 pm?</p>	<p>6 X 2 = 12</p>	
<p>6</p>	<p>1. Reeta's school starts at 8:15 am and closes at 3:40 pm. What are the working hours of the school?</p> <p>2. A bell rings 3 times in 1 minute. How many times will it ring in a day?</p> <p>3. Ashish began studying at 4:30 pm and finished his studies at 7:20 pm. How long did he study?</p>	<p>4 x 3 = 12</p>	



ARMY PUBLIC SCHOOL GWALIOR
CLASS – V
ACADEMIC SESSION 2023-24
WORKSHEET (SELF –ASSESSMENT)

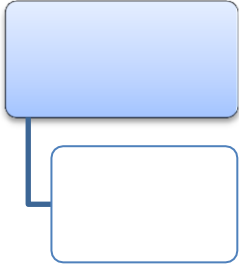


Subject: EVS

Allotment Date: 30 December 2023

Assignment No. : 7

S. NO.	QUESTIONS	MARKS	NATURE
Q1	<p>Choose the correct option.</p> <p>i). It is a substance used to produce heat and energy</p> <p>a. fuel b. air c. water</p> <p>ii). <u>what resource can be regenerated by biogeochemical cycle.</u></p> <p>a. Renewable source b. Non Renewable source c. Both a & b d. none</p> <p>iii). Example of fossil fuel .</p> <p>a. oil b. Natural gas c. Both a & b</p> <p>iv). Full form LPG?</p> <p>a. Liquified petroleum gas b. Liquified petroleum gasline c. both</p>	4x1=4	Information
Q2	<p>Fill in the blanks:</p> <p>i). Coal is dug out of the Earth by.....</p> <p>ii). We should reduce our dependence onfuel</p> <p>iii). ----- is used as domestic fuel.</p> <p>iv). -----is more expensive</p>	4X1=4	

Q3	Complete this flowchart : Name of Indian Astronauts 	1x2=2	
Q 4.	Write full form: i). LPG ii). CNG iii) NASA iv) ISRO	4x1=4	General knowledge
Q 5	Answer the following questions in short: i). How are artificial satellites useful? ii). What are fossil fuel and gives example? iii). What is Biogas?	3x2=6	



ARMY PUBLIC SCHOOL GWALIOR
CLASS V
ACADEMIC SESSION 2023 -24
WORKSHEET (SELF -ASSESSMENT)



Subject: Computer

Assignment No. : 7

Allotment Date: 30 December 2023

S.NO.	QUESTIONS	MARK	NATURE
1.	<p>Tick the correct answer.</p> <ol style="list-style-type: none">1. The direction of flow in any flowchart should be from _____.<ol style="list-style-type: none">a. top to bottomb. bottom to topc. right to left2. The symbol used to indicate input and output of a program is _____.<ol style="list-style-type: none">a. Rectangleb. Parallelogramc. Circle3. _____ language is directly understood by computer.<ol style="list-style-type: none">a. Machineb. High levelc. Assembly4. _____ language is machine – independent language.<ol style="list-style-type: none">a. Low levelb. Assemblyc. High level	1X4=4	Interdisciplinary

2.	Fill in the blanks. <ol style="list-style-type: none">1. The rhombus-shaped symbol is known as _____.2. Natural language is sometimes called _____ generation language.3. A computer only understands _____ digits directly.	1X3=3	Analytical Skill
3.	Answer the following. <ol style="list-style-type: none">1. What do you mean by flowchart?2. What do you mean by computer language?3. What do you understand by HLL?	1 X3=3	Analytical Skill



ARMY PUBLIC SCHOOL GWALIOR
CLASS V
ACADEMIC SESSION 2023 -24
WORKSHEET (SELF –ASSESSMENT)



Subject: GK

Allotment Date: 30 December 2023

Assignment No. : 7

S. NO.	QUESTIONS	MARKS	NATURE
Q1	<p>Choose the correct option.</p> <p>ii). What language is spoken the most in Brazil</p> <p>a. Portuguese b. French c. Spanish</p> <p>iii). <u>What is the scientific study of language called.</u></p> <p>a. Linguistics b. Bilingual c. Both a & b d. None</p> <p>iv). Which is the most spoken in the world .</p> <p>a. Mandarin b. English c. Both a & b</p> <p>v). Who wrote Gitanjali?</p> <p>a. Nehru b. Gandhiji c. Rabindranath Tagore</p>	4x1=4	Information
Q2	<p>Fill in the blanks:</p> <p>iv). An.....is any planet beyond our solar system</p> <p>ii) the second highest peak of the Himalayas-----</p> <p>v). ----- tree also called the Bodhi tree.</p> <p>iv). -----are an optical instrument with a lens for each eye used for viewing distant objects</p>	4X1=4	

Q 4.

Identify pictures

5x2=10

General knowledge

iii).



iv).



iii)




iv)



v)





ARMY PUBLIC SCHOOL GWALIOR
CLASS V
ACADEMIC SESSION 2023 -24
WORKSHEET (SELF –ASSESSMENT)

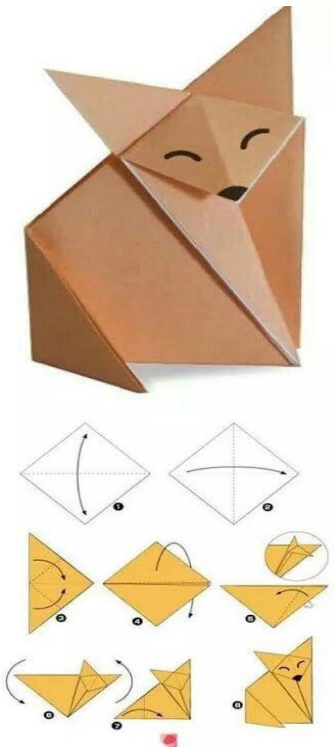


Subject: Art and Work Education

Allotment Date: 30 December 2023

Assignment No. : 7

S.NO	QUESTIONS	MARKS	SKILLS/ COMPETENCIES
1.	Origami is the art of paper folding using a sheet of - _____ paper. a) Square b) Circle c) Rectangle d) Oval	1	Creativity
2.	Who invented origami? a) Chinese b) Italian c) Japanese d) Portuguese	1	Creativity
3.	It can also be used as a fun activity to learn about trigonometry. a) True b) false	1	Creativity
4.	Who is the world's famous origami artist? a) Leonardo di vinci b) Akira Yoshizawa c) M.F.Hussan d) Meera gupta	1	Creativity
5.	_____ is the most famous origami? a) Snake b) Panda c) Crocodile d) Crane	1	Creativity
6.	Origami flamingo is the easiest origami. a) True b) False	1	Creativity
7.	What is the hardest origami in the world? a) 187 days folding a beautiful paper dragon.	1	Creativity

	<p>b) 143 days folding a beautiful paper elephant. c) 156 days folding a beautiful paper rhino. d) 124 days folding a beautiful paper crocodile.</p>		
8.	<p>The most famous origami model is called the “Orizuru”.</p> <p>a) True b) False</p>	1	Creativity
9.	<p>Origami is a form of craft which acts as an exercise for our_____.</p> <p>a) Muscles b) Jaw c) Brain d) Legs</p>	1	Creativity
10.	<p>The following picture shows the making of which of the these animals-</p>  <p>The image shows a completed 3D paper fox origami model in brown paper. Below it are the step-by-step folding instructions for the fox, starting from a square sheet of paper and showing various folds and creases.</p> <p>a) Fox b) Leopard c) Parrot d) Bird</p>	1	Creativity



ARMY PUBLIC SCHOOL GWALIOR
CLASS V
ACADEMIC SESSION 2023 -24
WORKSHEET (SELF –ASSESSMENT)



Subject: Health and Physical Education

Allotment Date: 30 December 2023

Assignment No. : 7

S.NO	QUESTIONS	MARKS	SKILLS/ COMPETENCIES
1.	<p>Tick The Correct Answer</p> <p>Q-1 Neeraj chopra belongs to which event?</p> <ul style="list-style-type: none">a. Pole vaultb. Discuss throw.c. Javelin throwd. Shot put. <p>Q-2 How many lanes are there in track?</p> <ul style="list-style-type: none">a.3b.5c.7d.8 <p>Q-3 which of the following is not a field event?</p> <ul style="list-style-type: none">a. 100 Mb. Discuss throwc. Javelind. Shot put <p>Q-4 Which of the following is track event?</p> <ul style="list-style-type: none">a. Long jumpb. High jumpc. Shot putd. 100m	4	INFORMATION
2	<p><u>Fill in the blanks</u></p> <p>Q-5 100 meter considered a _____.</p> <ul style="list-style-type: none">a) Sprint	3	

	<p>b) Middle race c) Long distance d) Field event</p> <p>Q-6- _____ is the famous sprinter in the world.</p> <p>a) Usain bolt b) Bob jones c) Hema das d) Preeti singh</p> <p>Q-7 100m, 200m 400m 800 meter sprints come under_____.</p> <p>a) Long distance race b) Shorts distance relay c) marathon d) sprints</p>		<p>Knowledge</p>
<p>3</p>	<p><u>True False</u></p> <p>Q-08- A marathon consider as a long distance race.</p> <p>(ii) True (iii) False</p> <p>Q-9- Discus throw is considered a jump event.</p> <p>A. True B. False</p> <p>Q-10 Javelin throw consider a field event.</p> <p>(iv) True (v) False</p>	<p>3</p>	<p>Understanding</p>



ARMY PUBLIC SCHOOL GWALIOR
CLASS V
ACADEMIC SESSION 2023 -24
WORKSHEET (SELF –ASSESSMENT)



Subject: Dance and Music

Assignment No. : 7

Allotment Date: 30 December 2023

S. NO.	QUESTIONS	MARKS	NATURE
1	Which two elements are typically featured in a Pure Dance Tarana in Kathak? a) Rhythmic footwork and storytelling b) Hand gestures and facial expressions	1	Understanding
2	What is the primary purpose of a Pure Dance Tarana in Kathak? a) To convey a narrative or story b) To showcase intricate footwork and rhythm patterns	1	Creative thinking
3	Which of the following best describes the musical accompaniment for a Pure Dance Tarana in Kathak? a) Live tabla and vocal percussion b) Recorded instrumental music	1	Understanding
4	In a Pure Dance Tarana, what is the predominant focus of the dancer's movements? a) Expressing emotions and storytelling b) Displaying complex and fast-paced footwork	1	Creative thinking
5	Which of the following Indian classical dance styles is known for incorporating Pure Dance Tarana as a prominent feature? a) Bharatanatyam b) Kathak	1	Understanding
6	What is an Inspirational song also called A) Motivational song B) Patriotic song	1	Understanding

7	Complete the lyrics “ Milke chalo miljulke chalo” A) Ek swarg utara jaae B) Chalo desh sanwara jaae	1	Creativity
8	Which swar comes after Pa ? A) Ni B) Dha	1	Knowledge
9	8 beats Taal is known as? A) Keherwa taal B) Dadra taal	1	Creativity
10	What is the first swar is called A) Re B) Sa	1	Knowledge