



ARMY PUBLIC SCHOOL GWALIOR
CLASS IV
ACADEMIC SESSION 2023-24
WORKSHEET- (SELF – ASSESSMENT)




Subject: English

Assignment No: 07

Allotment Date: 30 December 2023

S. No.	QUESTIONS	MARKS	NATURE
1	Make sentences with the following words- i) awesome ii) strange iii) peeped	3 Marks	Critical Thinking
2	Choose the correct options- i) The strange -looking creatures were a) dinosaurs b) wild animals c) aliens d) tortoises ii) Robin went to the meadow a) on a cycle b) by car c) by bus d) by train iii) Where is Great Barrier Reef located? a) America b) Australia c) Antartica d) Europe	3 Marks	Understanding
3	Answer the following question- i) Who accompanied Robin to the meadow at night? ii) Which places did Medha and her parents plan to visit in Australia? iii) Why was Robin upset later?	3 Marks	HOT
4	Grammar: Underline the conjunctions in the following sentences. i) I like ice but not lemonade ii) The dog and Ben are best friends.	2Marks	Interdisciplinary

5	Fill up the blanks with suitable conjunctions- i) He is a wealthy man _____ not helpful. ii) Tigers _____ lions are wild animals. iii) Run fast _____ you will miss the bus.	3 Marks	Analytical Skill
6	Choose the correct options- i) He hurt his legs so he (can/ cannot) run fast. ii) I (could/ can) swim when I was five years old. iii) (Can/ Cannot) we go for swimming, please?	3 Marks	Critical Thinking and Problem Solving
7	Answer the following questions in one word- i) Where was Shaggy taken by Robin and Tom? _____ ii) In which year Great Barrier Reef was selected as a World Heritage Site?_____ iii) Who labelled the reef as one of the seven wonders of the world ? _____	3 Marks	Evaluation



ARMY PUBLIC SCHOOL GWALIOR
CLASS IV
ACADEMIC SESSION 2023-24
WORKSHEET (SELF – ASSESSMENT)



Subject: Hindi

Assignment No. : 7

Allotment Date: 30 December 2023

संख्या	प्रश्न	अंक	प्रकृति
प्र 1	<p>अपठित गद्यांश -</p> <p>विचार-विनिमय के लिए मनुष्य को ही वाणी का वरदान प्राप्त है। पशु - पक्षी अपने भाव और विचार शारीरिक मुद्राओं ध्वनि संकेतों द्वारा प्रकट करते हैं। वाणी के अनेक रूप हैं, जिन्हें भाषा या बोली कहते हैं। संसार में इस समय भाषा के 3000 से भी अधिक रूप प्रचलित हैं। प्रायः सभी देशों की अपनी-अपनी भाषाएं हैं, उनके साथ- साथ स्थानीय बोलिया भी हैं, जो भाषा के ही प्रादेशिक रूप होते हैं। सबसे अधिक सरल, सुगम और स्वाभाविक भाषा मातृ भाषा कहलाती है; यह बालक को जन्मजात संस्कारों से मिलती है।</p> <p>निम्न लिखित प्रश्नों के उत्तर लिखिए-</p> <p>(क) वाणी का वरदान किसे प्राप्त है।</p> <p>-----</p> <p>(ख) पशु पक्षी अपने भाव किस प्रकार प्रकट करते हैं।</p> <p>-----</p> <p>(ग) 'स्वभाविक' में प्रत्यय है।</p> <p>-----</p> <p>(घ) संसार शब्द का पर्याय है।</p> <p>-----</p>	4x1=4	बोधोत्प्रेरक
प्र2	<p>दिए गए शब्दों के दो -दो अर्थ लिखें-</p> <p>1 गोल _____</p>	3x1=3	ज्ञानोत्प्रेरक

	<p>2. मत _____</p> <p>3. पर _____</p>		
प्र 3	<p>निम्नलिखित शब्दों के अर्थ लिखो -</p> <p>1 विजेता _____</p> <p>2 चित्रकारी _____</p> <p>3 इति _____</p> <p>4 प्रवास _____</p>	4x1=4	रचनात्मक
प्र 4	<p>वाक्यांश के लिए एक शब्द लिखें-</p> <p>1. जो सप्ताह में एक बार हो - _____</p> <p>2. जो सेवा में काम करें- _____</p> <p>3. जो चित्र बनाता है - _____</p> <p>4. जो सुन नहीं सकता- _____</p>	4x1=4	सूचनात्मक
प्र 5	<p>(अ) निम्नलिखित प्रश्नों के उत्तर दो -</p> <p>(i) पत्र लिखना शुरू करने के समय प्राकृतिक वातावरण कैसा था?</p> <p>(ii) दादाजी शांतिनिकेतन में अपना समय कैसे बिताना चाहते हैं?</p> <p>(iii) दादाजी पत्र लिखते- लिखते बीच में उठकर क्या करने गए थे?</p>	3x1=3	विश्लेषणात्मक

प्र 6	मूल्यपरक प्रश्न - अगर आप विदेश जाएंगे तो अपने देश की क्या - क्या बातें याद आएँगी ? <hr/> <hr/>	2	उच्चस्तरी य चिंतन
-------	------------------------------------------------------------------------------------------------------	---	----------------------



ARMY PUBLIC SCHOOL GWALIOR
CLASS - IV
ACADEMIC SESSION 2023-24
WORKSHEET (SELF –ASSESSMENT)



Subject: Mathematics

Assignment No. : 7

Allotment Date: 30 December 2023

S. NO.	QUESTIONS	MARKS	NATURE
1	Fill in the blanks: (a) The _____ hand of the clock tells us the hours. (b) In a day, the hour hand takes _____ rounds of the clock. (c) Between two consecutive numbers on the clock, there is a difference of _____. (d) The time taken for the minute hand to complete one round of the clock is called _____.	4×1 = 4	Observation
2	Convert the following: (a) to minutes: 5 hours and half an hour (b) To seconds: 3 minutes 15 seconds	2×1 = 2	Mental Ability
3	How many hours and minutes have passed from: (a) 11.00 am to 3.00 pm _____ (b) 12 noon to 9:20 pm _____	2×1 = 2	Decision Making
4	Do as directed: (a) Convert the following into days. (i) 2 months (ii) 3 weeks + 4 days (b) Convert the following into hours. (i) 2 days and half a day (ii) 1 day and a quarter of an hour	4×1 = 4	Understanding

5	Do as directed: (a) Add: Rs. 56.75 + Rs. 34.10 (b) Subtract: Rs. 897.20 - Rs. 665.70 (c) Multiply: Rs 55.25 by 3 (d) Divide: 57.20 by 4	4×1 = 4	Problem-Solving
6	Read the word problems and solve them: (a) A packet of pencils costs Rs 35.75. How much will it cost to buy 12 such packets? (b) Lakshita has Rs 50.50. Vasu has three times as much money as Lakshita. How much money does Vasu have ?	4×1 = 4	Critical Thinking



ARMY PUBLIC SCHOOL GWALIOR
CLASS - IV
ACADEMIC SESSION 2023-24
WORKSHEET (SELF –ASSESSMENT)



Subject: Environmental Studies

Assignment No. : 7

Allotment Date: 30 December 2023

S. NO.	QUESTIONS	MARKS	NATURE
1	Tick the correct options: i.is not an aquatic animal. a. Lion b. Sea horse c. Crab d. Fish ii. All water filters have a.....to remove impurities. a. Iodine b. Ultraviolet rays c. Candle d. strainer iii.tablets kills the germs in the water. a. Fluorine b. Carbon c. Chlorine d. Hydrogen iv. Water that is safe for drinking is calledwater a. Polluted b. Potable c. purified d. Plain	4x1=4	Information
2	Give two examples of the following: i. Water borne diseases: _____, _____ ii. Water pollutants: _____, _____ iii. Aquatic animals: _____, _____ iv. Water purification methods: _____, _____	4x1=4	Understanding
3	Answer the following question: i. Name some major water pollutants. _____ _____	4x3=12	Analytical Skill

ii. What are the reasons behind the increase in demand for fresh water?

iii. Why the water conservation is essential?

iv. How can drinking water be made safe for consumption?



ARMY PUBLIC SCHOOL GWALIOR
CLASS – IV
ACADEMIC SESSION 2023-24
WORKSHEET (SELF –ASSESSMENT)



Subject: General Knowledge

Assignment No.-7

Allotment Date: 30 December 2023

S.NO	QUESTIONS	MARKS	SKILLS
1.	<p>Answer the following one-word questions:</p> <p>(a) Who was the founder of Maurya Empire? Ans. _____</p> <p>(b) Who is founder CEO of SpaceX? Ans. _____</p> <p>(c) Who is the chairperson and founder of the Adani group? Ans. _____</p> <p>(d) Name one place where you can enjoy caving? Ans. _____</p> <p>(e) Name an Indian gymnast who represented India at the 2016 Olympics in Rio de Janeiro. Ans. _____</p>	5	Informative and general awareness

2.

Identify the following pictures.



(a) _____



(b) _____



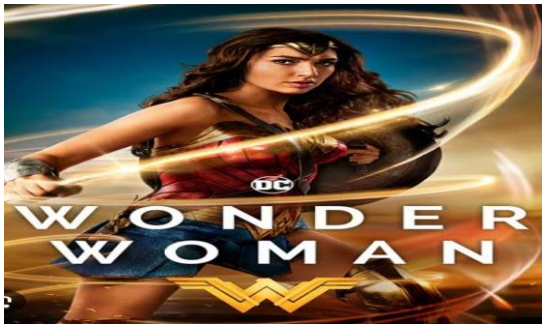
(c) _____

5

Identification
and general
awareness



(d) _____



(e) _____



ARMY PUBLIC SCHOOL GWALIOR
CLASS - IV
ACADEMIC SESSION 2023-24
WORKSHEET (SELF –ASSESSMENT)

Subject: Computer

Assignment No. : 7

Allotment Date: 30 December 2023

S.NO.	QUESTIONS	MARK	NATURE
1.	<p>Tick the correct answer.</p> <ol style="list-style-type: none">1. We can change how a sprite looks by giving it a different_____.<ol style="list-style-type: none">a. Propb. Costumec. Sprite2. Snapping the blocks together into stacks is called_____.<ol style="list-style-type: none">a. Costumeb. Stagec. Script3. _____block makes the Sprite's legs move, like it is walking.<ol style="list-style-type: none">a. Next Costumeb. Motionc. Pen Down4. _____ sprite button is used to create a new sprite.<ol style="list-style-type: none">a. Draw Newb. Paint Newc. Select New	1X4=4	Interdisciplinary

<p>2.</p>	<p>Fill in the blanks.</p> <ol style="list-style-type: none"> 1. Scratch provides _____ different options for adding sprite to our applications. 2. Stage provides the _____ upon which sprites are displayed and interact with one another. 3. A _____ is a set of repeatable instructions that we can store to carry out later. 	<p>1X3=3</p>	<p>Analytical Skill</p>
<p>3.</p>	<p>Answer the following.</p> <ol style="list-style-type: none"> 1. What does changing the costume mean? 2. What are the various ways of changing backdrop of stage? 3. What do you mean by the Forever block? Why is it used? 	<p>1 X3=3</p>	<p>Analytical Skill</p>



ARMY PUBLIC SCHOOL GWALIOR
CLASS -IV
ACADEMIC SESSION 2023-24
WORKSHEET (SELF –ASSESSMENT)

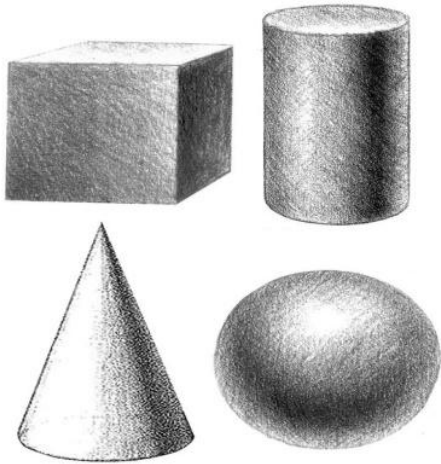


Subject: Art & Work Education

Assignment No. 7

Allotment Date: 30 December 2023

S.NO	QUESTIONS	MARKS	SKILLS/ COMPETENCIES
1.	What is the shape with four equal sides? a) Rectangle b) Square c) Triangle	1	Creativity
2.	Which of these is a basic shape? a) Cube b) Circle c) Sphere	1	Creativity
3.	A cube is a _____. a) One dimensional shape b) Two dimensional Shape c) Three dimensional Shape	1	Creativity
4.	What is the shape of a football? 1. Cube 2. Sphere 3. Cuboid	1	Creativity
5.	What is the shape of a birthday cap? a) Cone b) Square c) Circle	1	Creativity
6.	How many right angles does a rectangle have? a) 1 b) 2	1	Creativity

	<p>c) 4</p> <p>d) 5</p>		
7.	<p>A triangle is a 2D figure:</p> <p>a) true</p> <p>b) false</p>	1	Creativity
8.	<p>Which of these is a three dimensional shape?</p> <p>a) Rectangle</p> <p>b) cone</p> <p>c) square</p>	1	Creativity
9.	<p>Is Cuboid is a 3D form of rectangle?</p> <p>a) True</p> <p>b) False</p>	1	Creativity
10.	<p>What shapes are this?</p>  <p>a) 2D</p> <p>b) 4D</p> <p>c) 3D</p> <p>d) Circle</p>	1	Creativity



ARMY PUBLIC SCHOOL GWALIOR
CLASS – IV
ACADEMIC SESSION 2023-24
WORKSHEET (SELF-ASSESSMENT)



Subject: Dance and Music
Allotment Date: 30 December 2023

Assignment No. 7

S. NO.	QUESTIONS	MARKS	NATURE
1	What is the primary characteristic of Semi-Classical Dance? a) It blends classical dance elements with contemporary styles b) It strictly follows traditional classical dance forms	1	Understanding
2	Which of the following dance forms is often considered a part of Semi-Classical Dance? a) Kathak b) Bharatanatyam	1	Information
3	In Semi-Classical Dance, what kind of music is commonly used? a) Classical ragas and talas b) Contemporary or fusion music	1	Understanding
4	What role do expressions and emotions typically play in Semi-Classical Dance? a) They are essential for storytelling b) They are minimal, with the focus on technical movements	1	Creative thinking

5	Which of the following best describes the costume worn in Semi-Classical Dance? a) Elaborate traditional attire b) A fusion of traditional and modern costumes	1	Understanding
6	1. Where was Mahatma Gandhi born? A) Porbandar B) Rajkot	1	Knowledge
7	Mohandas Karamchand Gandhi was born on A) 2 October B) 5 October	1	Knowledge
8	What is Gandhiji's father's Name A) Mohandas B) karamchand	1	Understanding
9	Which swar comes after dha A) Ga B) Ni	1	Knowledge
10	What is the first swar called A) sa B) pa	1	Creativity



ARMY PUBLIC SCHOOL GWALIOR
CLASS - IV
ACADEMIC SESSION 2023-24
WORKSHEET (SELF –ASSESSMENT)



Subject: Health and Physical Education

Assignment No. 7

Allotment Date: 30 December 2023

S.NO	QUESTIONS	MARKS	SKILLS/ COMPETENCIES
1.	<p>Tick The Correct Answer</p> <p>Q-1 Neeraj chopra belongs to which event?</p> <ul style="list-style-type: none">a. Pole vaultb. Discuss throw.c. Javelin throwd. Shot put. <p>Q-2 How many lanes are there in track?</p> <ul style="list-style-type: none">a.3b.5c.7d.8 <p>Q-3 which of the following is not a field event?</p> <ul style="list-style-type: none">a. 100 Mb. Discuss throwc. Javelind. Shot put <p>Q-4 Which of the following is track event?</p> <ul style="list-style-type: none">a. Long jumpb. High jumpc. Shot putd. 100m	4	INFORMATION
2	<p><u>Fill in the blanks</u></p> <p>Q-5 100 meter considered a _____.</p>	3	Knowledge

	<p>a) Sprint b) Middle race c) Long distance d) Field event</p> <p>Q-6- _____ is the famous sprinter in the world.</p> <p>a) Usain bolt b) Bob jones c) Hema das d) Preeti singh</p> <p>Q-7 100m, 200m 400m 800 meter sprints come under_____.</p> <p>a) Long distance race b) Shorts distance relay c) marathon d) sprints</p>		
<p>3</p>	<p><u>True False</u></p> <p>Q-08- A marathon consider as a long distance race.</p> <p>4. True 5. False</p> <p>Q-9- Discus throw is considered a jump event.</p> <p>a) True b) False</p> <p>Q-10 Javelin throw consider a field event.</p> <p>I) True II) False</p>	<p>3</p>	<p>Understanding</p>