

ARMY PUBLIC SCHOOL GWALIOR
CLASS – III
ACADEMIC SESSION 2023-24
WORKSHEET (SELF –ASSESSMENT)

Subject: English


Allotment Date: 30 December 2023.

Assignment No.:7

S. NO.	QUESTIONS	MARKS	NATURE
1.	<p>Fill in the blanks by following the instructions given below:</p> <p>(a) Sarah _____ stamps. (use simple present tense of collect)</p> <p>(b) Chop the bananas into small pieces. (underline the verb)</p> <p>(c) They _____ hard to finish their work. (use present continuous tense of try)</p> <p>(d) She _____ to school. (use simple past tense of go)</p> <p>(e) I _____ a bicycle yesterday till 7pm. (use past continuous tense of ride)</p> <p>(f) I _____ the bookshelf. (simple future tense of clean)</p>	6x1=6	Understanding
2.	<p>State whether the following statements are 'True' or 'False':</p> <p>(a) Alice stood very far from the egg. _____</p> <p>(b) Alice thought that un-birthday presents were better than birthday presents. _____</p> <p>(c) Humpty Dumpty spoke very politely. _____</p> <p>(d) Humpty Dumpty said that there is no meaning of his name _____</p>	4x1=4	Observation

<p>3.</p>	<p>Match the words of column 'A' with their meanings in column 'B':</p> <table style="width: 100%; border: none;"> <tr> <td style="width: 50%; vertical-align: top;"> <p>A</p> <p>(a) offended</p> <p>(b) weighty</p> <p>(c) knapsack</p> </td> <td style="width: 50%; vertical-align: top;"> <p>B</p> <p>(i) shoulder bag</p> <p>(ii) felt upset</p> <p>(iii) heavy</p> </td> </tr> </table>	<p>A</p> <p>(a) offended</p> <p>(b) weighty</p> <p>(c) knapsack</p>	<p>B</p> <p>(i) shoulder bag</p> <p>(ii) felt upset</p> <p>(iii) heavy</p>	<p>3x1=3</p>	<p>HOTS</p>
<p>A</p> <p>(a) offended</p> <p>(b) weighty</p> <p>(c) knapsack</p>	<p>B</p> <p>(i) shoulder bag</p> <p>(ii) felt upset</p> <p>(iii) heavy</p>				
<p>4.</p>	<p>Read the given poem carefully and answer the questions that follow:</p> <p>There was a naughty boy A naughty boy was he He would not stop at home He could not quiet be— He took In his knapsack A book Full of vowels And a shirt With some towels— A slight cap For night cap— A hair brush Comb ditto New stockings For old ones Would split O!</p> <p>B. Answer the following questions:</p> <p>(a) What is the name of the poem and the poet?</p> <hr style="border: 0.5px solid black;"/> <hr style="border: 0.5px solid black;"/> <p>(b) Make sentence on these words: (i) Naughty (ii) knapsack</p> <p>(c) Make a list of any four items carried in the knapsack of the boy.</p> <hr style="border: 0.5px solid black;"/> <hr style="border: 0.5px solid black;"/>	<p>3x1=3</p>	<p>Problem Solving</p>		
<p>5.</p>	<p>Write a Paragraph on. "Humpty Dumpty visited our class." (Write Well)</p>	<p>4x1=4</p>	<p>Critical Thinking</p>		

<p>प्र.3</p>	<p>निम्नलिखित शब्दों के अर्थ लिखिए-</p> <p>उजियारा - _____</p> <p>महकते - _____</p>	<p>2x1=2</p>
<p>प्र.4</p>	<p>निम्नलिखित प्रश्नों के उत्तर लिखें –</p> <p>(क) दिवाली पर बच्चे क्या करते हैं और कैसे खुश होते हैं?</p> <p>_____</p> <p>_____</p> <p>_____</p> <p>_____</p> <p>_____</p> <p>(ख) आप दिवाली कैसे मानते हैं ?</p> <p>_____</p> <p>_____</p> <p>_____</p> <p>_____</p> <p>_____</p> <p>(ग) दिवाली पर घर सुन्दर क्यों लगते हैं?</p> <p>_____</p> <p>_____</p> <p>_____</p>	<p>3x2=6</p>
<p>प्र.5</p>	<p>निम्नलिखित शब्दों के बहुवचन लिखिए –</p> <p>कुर्सी - _____</p> <p>सब्जी - _____</p>	<p>2x1=2</p>



ARMY PUBLIC SCHOOL GWALIOR
CLASS – III
ACADEMIC SESSION 2023-24
WORKSHEET (SELF –ASSESSMENT)

Subject: Mathematics


Allotment Date: 30 December 2023

Assignment No. : 7

S. No.	QUESTIONS	MARKS	NATURE
1	<p>Solve the following questions:</p> <p>(a) Convert the following in to minutes.</p> <p>(i) 13 hours (ii) 24 hours (iii) 1 hours 30 minutes</p> <p>(b) Convert the following in to seconds.</p> <p>(i) 15 minutes (ii) 5 hours (iii) 5 minutes 10 seconds</p>	6x1=6	Problem solving

<p>2</p>	<p>Choose the correct option:</p> <p>(i) How many months have 31 days? (a) 4 (b) 6 (c) 7 (d) 8</p> <p>(ii) How many days are there in a leap year? (a) 366 (b) 364 (c) 367 (d) 365</p> <p>(iii) 4:30 in the evening is written as (a) 4:30am (b) 4:30pm (c) 16:30am (d) 16:30pm</p> <p>(iv) Which is the seventh month of the year? (a) July (b) August (c) April (d) September</p>	<p>4x1=4</p>	<p>Information</p>
<p>3</p>	<p>Fill in the blanks.</p> <p>(i) The hour hand takes _____ hours to move from 3 to 9.</p> <p>(ii) There are _____ Sundays in November.</p> <p>(iii) February has _____ days in a normal year.</p> <p>(iv) Leap year comes after every _____ years.</p>	<p>2x0.5=2</p>	<p>Understanding</p>
<p>4</p>	<p>(A) Convert the following into days.</p> <p>(i) 4 weeks + 10 days</p> <p>(ii) June + 3 weeks + 20 days</p>	<p>2x1=2</p>	<p>Critical thinking</p>

--	--	--	--



ARMY PUBLIC SCHOOL GWALIOR
CLASS – III
ACADEMIC SESSION 2023-24
WORKSHEET (SELF –ASSESSMENT)

Subject: EVS

Allotment Date: 30 December 2023

Assignment No. : 7


S.N	QUESTIONS	MARKS	NATURE
1	<p>Fill in the blanks by choosing the correct options :</p> <p>a) means exchange of informations. (Safety/ Communication)</p> <p>b) Usage of mobile phones has reduced the number of in a city. (phone booths/ hospitals)</p>	2X1=2	Information
2	<p>Answer the following :</p> <p>What are the uses of mobile phones ?</p> <hr/>	3	Understanding

3	Define communication. <hr/>	2	Interdisciplinary
4	Write true (T) or false (F) against the following statements: i) Postcards and Parcels are the means of postal communication. <input type="checkbox"/> ii) Newspapers and Magazines are the examples of mass communication. <input type="checkbox"/> (iii) India has the largest postal network in the world. <input type="checkbox"/>	3X1=3	Analytical Skill
5	Choose the correct option: (i) Panchtantra is a collection of famous for children. a) story b) songs (ii)is the name of a famous English newspaper . a) Dainik Bhaskar b) Times of India.	2X1=2	Critical Thinking and Problem Solving

6	<p>Why is television a better means of mass communication ?</p> <hr/> <hr/> <hr/>	2	HOT
7	<p>Answer the following questions:</p> <p>(i) Define pincode.</p> <hr/> <hr/> <p>(ii) Why is communication important for everyone ?</p> <hr/> <hr/> <p>(iii) Name any two western states of India.</p> <hr/> <hr/>	3X1=3	Evaluation
8	<p>Answer the following questions :</p> <p>(i) Name any two eastern states of India.</p> <hr/>	3x1=3	Communication Skills

(ii) Name any three means of postal communication.

(iii) Why are mobile phones becoming so popular now-a-days ?



ARMY PUBLIC SCHOOL GWALIOR
CLASS – III
ACADEMIC SESSION 2023-24
WORKSHEET (SELF –ASSESSMENT)


Subject: Computer

Allotment Date: 30 December 2023.

Assignment No: 7

S.NO.	QUESTIONS	MARKS	NATURE
1	<p>Tick the correct answer</p> <p>(i) _____ in paint 3D are used to add texture and icons.</p> <p>a) Images b) Stamps c) Stickers</p> <p>(ii) Paint 3D is a drawing program developed by_____.</p> <p>a) Microsoft b) Google c) Facebook</p> <p>(iii) Click on _____ icon to add 3D text to the projects.</p> <p>a) Add text b) 2D text c) 3D text</p> <p>(iv) We can add 3D objects in our project from 3D_____.</p> <p>a) Library b) Filter c) Rotation</p>	4x0.5=5	Information

2	<p>Fill in the blanks-</p> <p>1. _____ is the area where we draw in paint 3D.</p> <p>2. _____ tools appear around an object when we select it from 3D library.</p> <p>3. _____ option is used to add 3D text in paint 3D.</p> <p>4. We can erase a shape with _____ tool.</p>	4x0.5=2	Understanding
3	<p>Write True or False against the statements:-</p> <p>1. We can use filter tools to see the 3D effects.</p> <p>2. We can change the color of 3D objects according to our choice.</p> <p>4. Only 2D text can be added to a project in paint 3D.</p> <p>5. 3D shapes are known as flat shapes.</p>	4x0.5=2	Interdisciplinary
4	<p>Answer the following questions</p> <p>1. What the types of stickers available are in paint 3D?</p> <p>2. Why do we need rotation tool?</p> <p>3. What do you mean by 2D shape?</p> <p>4. What is the use of Fill tool?</p>	4x0.5=2	Critical Thinking and Problem Solving



ARMY PUBLIC SCHOOL GWALIOR
CLASS – III
ACADEMIC SESSION 2023-24
WORKSHEET (SELF –ASSESSMENT)

Subject: General Knowledge

Allotment Date: 30 December 2023

Assignment No: 7

S. NO.	QUESTIONS	MARKS	NATURE												
1.	<p>Solve the following puzzles:</p> <p>(i) A house is made of it.</p> <p>(ii) One that is deadly.</p> <p>(iii) Something that is surprising.</p> <p>(iv) One who does not tell the truth.</p> <p>(v) A person who does all his work on time.</p>	5	Information												
2.	<p>Match the column 'A' with column'B':</p> <table style="width: 100%; border: none;"><tr><td style="text-align: center;">A</td><td style="text-align: center;">B</td></tr><tr><td>(i) Assam</td><td>(a) Dogri</td></tr><tr><td>(ii) Maharashtra</td><td>(b) Assamese</td></tr><tr><td>(iii) Odisha</td><td>(c) Marathi</td></tr><tr><td>(iv) Jammu and Kashmir</td><td>(d) Konkani</td></tr><tr><td>(v) Goa</td><td>(e) Odio</td></tr></table>	A	B	(i) Assam	(a) Dogri	(ii) Maharashtra	(b) Assamese	(iii) Odisha	(c) Marathi	(iv) Jammu and Kashmir	(d) Konkani	(v) Goa	(e) Odio	5x0.5= 2.5	Thinking Skill
A	B														
(i) Assam	(a) Dogri														
(ii) Maharashtra	(b) Assamese														
(iii) Odisha	(c) Marathi														
(iv) Jammu and Kashmir	(d) Konkani														
(v) Goa	(e) Odio														

3.	Write the language in which each of the following newspapers are published (i) The Times of India - (ii) Sakhi - (iii) Dainik Bhaskar - (iv) Jagbani -	5x0.5= 2.5	HOTS
----	---	-----------------------	-------------



ARMY PUBLIC SCHOOL GWALIOR
CLASS – III
ACADEMIC SESSION 2023-24
WORKSHEET (SELF –ASSESSMENT)




Subject: Art & Craft

Allotment Date: 30 December 2023.

Assignment No: 7

S. NO.	QUESTIONS	MARKS	NATURE
1.	What are the primary colours?	2	Knowledge
2.	What are the secondary colours?	2	Knowledge
3.	What are the Tertiary colours?	2	Knowledge
4.	What are the warm colours?	2	Knowledge
5.	What are the cool colours?	2	Knowledge



ARMY PUBLIC SCHOOL GWALIOR
CLASS – III
ACADEMIC SESSION 2023-24
WORKSHEET (SELF –ASSESSMENT)


Subject: Health & Physical Education

Allotment Date: 30 December 2023.

Assignment No: 7

S.NO	QUESTIONS	MARKS	SKILLS/COMPETENCIES
1.	<p>Tick The Correct Answer</p> <p>Q-1 Neeraj Chopra belongs to which event?</p> <ul style="list-style-type: none">a. Pole vaultb. Discuss throw.c. Javelin throwd. Shot put. <p>Q-2 How many lanes are there in track?</p> <ul style="list-style-type: none">a.3b.5c.7d.8 <p>Q-3 which of the following is not a field event?</p> <ul style="list-style-type: none">a. 100 Mb. Discuss throwc. Javelind. Shot put <p>Q-4 Which of the following is track event?</p> <ul style="list-style-type: none">a. Long jumpb. High jumpc. Shot put	4	INFORMATION

	d. 100m		
2	<p><u>Fill in the blanks</u></p> <p>Q-5 100 meter considered a _____.</p> <p>a) Sprint b) Middle race c) Long distance d) Field event</p> <p>Q-6- _____ is the famous sprinter in the world.</p> <p>a) Usain bolt b) Bob jones c) Hema das d) Preeti singh</p> <p>Q-7 100m, 200m 400m 800 meter sprints come under_____.</p> <p>a) Long distance race b) Shorts distance relay c) marathon d) sprints</p>	3	Knowledge
3	<p><u>True False</u></p> <p>Q-8- A marathon consider as a long distance race.</p> <p>A. True B. False</p> <p>Q-9- Discus throw is considered a jump event.</p> <p>(a) True (b) False</p> <p>Q-10 Javelin throw consider a field event.</p> <p>A. True B. False</p>	3	



ARMY PUBLIC SCHOOL GWALIOR
CLASS – III
ACADEMIC SESSION 2023-24
WORKSHEET (SELF –ASSESSMENT)

Subject: Dance/Music

Allotment Date: 30 December 2023.

Assignment No: 7

S. NO.	QUESTIONS	MARKS	NATURE
1	How many types of hasta mudras? a) 23 b) 2	1	Information
2	How many fingers do u have in a hand? a)10 b)05	1	critical Thinking
3	How many matras in teentaal? a)12 b)16	1	Understanding

4	How many section in teentaal? a)8 b)4	1	Information
5	which is the basic taal of kathak ? a)kahrwa taal b)Teentaal	1	Critical thinking
6	How many beats are there in ek taal ? a) 12 b) 16	1	Information
7	How many beats are there in teen taal ? a) 16 b) 12	1	Information

8	Cycle of beats is called? a) Taal b) Matras	1	Critical thinking
9	One cycle of beats in taal is called ? a) Avartan b) Rhytm	1	Understanding
10	How many types of laya are there ? a) 3 b) 2	1	Understanding