

ARMY PUBLIC SCHOOL GWALIOR
CLASS - II
ACADEMIC SESSION 2023-24
WORKSHEET (SELF –ASSESSMENT)



Subject: English

Assignment No. : 7

Allotment Date: 30 December 2023

S. NO.	QUESTIONS	MARKS 20	NATURE										
1.	Complete the stanza of the poem 'Tall Trees' : With their feet _____ _____ _____	5x1=5	Information										
2.	Match the words with their opposites. <table style="width: 100%; border: none;"><tr><td style="text-align: center;">A</td><td style="text-align: center;">B</td></tr><tr><td>(i) work</td><td>a) sky</td></tr><tr><td>(ii) quickly</td><td>b) rest</td></tr><tr><td>(iii) heads</td><td>c) slowly</td></tr><tr><td>(iv) earth</td><td>d) feet</td></tr></table>	A	B	(i) work	a) sky	(ii) quickly	b) rest	(iii) heads	c) slowly	(iv) earth	d) feet	4x0.5=2	Literacy skills
A	B												
(i) work	a) sky												
(ii) quickly	b) rest												
(iii) heads	c) slowly												
(iv) earth	d) feet												
3.	Fill in the blanks with the correct joining words given in the brackets: (i) The cat chased the rat _____ could not catch it. (so, but) (ii) Soham played well _____ could not won the match. (and, but) (iii) Ria has a pet dog _____ a cat. (and, but) (iv) He is a loyal _____ honest man. (but, and) (v) Is that a monkey _____ chimpanzee. (or, and)	5x1=5	Problem Solving										
4.	Answer the following questions: Q1. Where are the heads and feet of trees? Ans _____ _____ Q2. Join the sentences with suitable joining words and rewrite them: (i) He will buy a cap. He will buy a football. _____ (ii) I saw the monkey. I could not see the tiger. _____	1x2=2 2x1=2	Understanding										



ARMY PUBLIC SCHOOL GWALIOR
CLASS - II
ACADEMIC SESSION 2023-24
WORKSHEET (SELF -ASSESSMENT)



Subject: Hindi

Assignment No. : 7

Allotment Date: 30 December 2023

संख्या	प्रश्न	अंक	प्रकृति
प्र -1	निम्नलिखित काम वाले शब्दों से वाक्य बनाइए । क.) चलना - ----- ख.) खाना - ----- ग.) लिखना - ----- घ.) पीना - -----	4x2=8	भाषाई कौशल
प्र -2	1. क्रिया वाले चित्रों पर निशान (✓) लगाओ - 	4x1=4	सूचनापरक
प्र -3	नीचे दिए गए चित्रों के आधार पर सही शब्द चुनकर खाली स्थान भरिए ।	5x1=5	गहन सोच और समस्या समाधान



[दौड़ पढ़ चित्र बना गा नाच]

1. लड़कियाँ गीत _____ रही हैं ।
2. बच्चे तेज़ _____ रहे हैं ।
3. हरिता _____ रही है ।
4. सुरेश किताब _____ रहा है ।
5. एक लड़का _____ रहा है ।

प्र -4

निम्नलिखित काम वाले शब्दों का उनके उलटे अर्थ वाले शब्द के साथ मिलान कीजिए ।

- क.) गिरना
ख.) हँसना
ग.) जागना

- सोना
उठना
रोना

3x1=3

बोधात्मक



ARMY PUBLIC SCHOOL GWALIOR
CLASS - II
ACADEMIC SESSION 2023-24
WORKSHEET (SELF –ASSESSMENT)



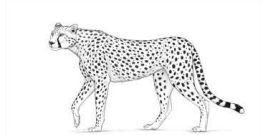
Subject: Mathematics
Allotment Date: 30 December 2023

Assignment No. : 7

S. NO.	QUESTIONS	MARKS 20	NATURE
1	Fill in the blanks: (i) _____ and _____ are the standard units of weight. (ii) _____ is the standard unit for measuring capacity. (iii) We denote kilograms by _____. (iv) The amount of liquid that a container can hold is called its _____. (v) _____ is used to weigh lighter objects.	5X1=5	Understanding
2	Write 'True' or 'False': (i). Substances such as milk, water, cooking oil and petrol are called liquids. () (ii). Gram is used to weigh heavier objects ()	2X1=2	HOTS
3	Tick the correct answer from the given options: (a) 1 kilogram is equal to _____. (i) 100 grams (ii) 1000 grams (iii) 10 grams (iv) 2000 grams (b) 1 litre is equal to _____. (i) 50 millilitres (ii) 100 millilitres (iii) 1000 millilitres (iv) 10 millilitres (c) Big capacity is measured in _____. (i) litres (ii) millilitres (iii) grams (iv) kilograms	3X1=3	Critical thinking
4	Solve the following questions: - (i) Convert 3 L into mL.	4X1=4	Interdisciplinary

	<p>(ii) Convert 25000 g into kg.</p> <p>(iii). Subtract 151 g from 160 g.</p> <p>(iv). Add 685 L 248 mL and 100 L 372 mL</p>		
5	<p>Solve the following questions.</p> <p>(i) A truck is carrying 150 kg 250 g of sugar and 365 kg 480 g of rice. How much weight is the truck carrying?</p> <p>(ii) A family bought 22 L of milk for a birthday party. 12 L was used for the party. How much milk is left?</p>	2X3=6	Problem Solving

	<p>(iii) The weight of a boy was 108 kg 220 g. He lost 35 kg 150 g. What is his present weight?</p>		
--	---	--	--



HEECHTA _____

b)



PRGSNI _____



c)

BWORINA _____



d)

MLLINDWI _____

5.

Why is there a ban on hunting of animals in the jungles?
What is the punishment given to people who are caught hunting animals?

2x1=2

HOTS

6.

Answer the following questions-

1. What are the harmful effects of dirty and impure air?

Ans - _____

1x2=2

Thinking and Writing Skills

2. What is the difference between a weather and a season?

Ans - _____





ARMY PUBLIC SCHOOL GWALIOR
CLASS - II
ACADEMIC SESSION 2023-24
WORKSHEET (SELF –ASSESSMENT)




Subject: G.K


Assignment No. : 7

Allotment Date: 30 December 2023

S.NO	QUESTIONS	MARKS	NATURE
1.	<p>Write the name of famous religious places.</p> <p>(i) It is located in Delhi. It is an important religious place for Bahai people. _____</p> <p>(ii) It is an important religious place of Hindus. It is located near Katra in Jammu and Kashmir. _____</p> <p>(iii) It is an important religious place of Sikhs. It is located at Amritsar in Punjab. _____</p>	3x1=3	Informative and general awareness
2.	<p>Identify the famous Indian personalities and write their names.</p> <p>(i)</p>  <p>_____</p> <p>(ii)</p>  <p>_____</p> <p>(iii)</p>	3x1=3	Identification and general awareness



	 _____		
3.	Complete the names of freedom fighters. i) M_HA_M_ GA_D_I ii) JA_AHA_LA_ N_HR_ iii) SA_O_IN_ N_ID_ iv) SU_HA_H C_AN_RA B_SE	4x0.5=2	Informative and general awareness
4.	Name the traditional dresses of the following countries. i) This is the traditional dress of Japan. _____ ii) This is the traditional dress of Mexico. _____	2x1=2	Enquiry and general awareness



ARMY PUBLIC SCHOOL GWALIOR
CLASS - II
ACADEMIC SESSION 2023-24
WORKSHEET (SELF –ASSESSMENT)



Subject: Computer

Assignment No. : 7

Allotment Date: 30 December 2023

S.NO.	QUESTIONS	MARKS	NATURE
1.	<p>Tick the correct answer.</p> <p>(i) To make the sprite move, use the _____ blocks.</p> <p>a) Motion b) Looks c) control</p> <p>(ii)Scratch Jr app runs on the _____.</p> <p>a) Server b) Smartphone c) tablet</p> <p>(iii) Script is also known as _____.</p> <p>a)page b)program c)character</p>	3x1=3	Information
2.	<p>Fill in the blanks-</p> <p>a) _____ is the place where sprite moves. b) _____ is the place where we can make our program by assembling blocks. c) Using BlueStacks software, we can use ScratchJr on _____.</p>	3x1=3	Understanding
3.	<p>Write 'T' for True or 'F' for False against the statements:-</p> <p>a) In ScratchJr, sequence of actions is called a script. b) When the script runs, each block is highlighted. c) ScratchJr can only run on Tablets. d) We cannot add more characters in the projects.</p>	4x1=4	Interdisciplinary




ARMY PUBLIC SCHOOL GWALIOR
CLASS - II
ACADEMIC SESSION 2023-24
WORKSHEET (SELF -ASSESSMENT)



Subject: Art and Work Education
Allotment Date: 30 December 2023

Assignment No. : 7

S. NO.	QUESTIONS	MARKS	NATURE
1.	What are the primary colours?	2	Understanding
2.	What are the secondary colours?	2	Observation
3.	What are the tertiary colours?	2	Understanding
4.	What are the warm colours?	2	Problem solving
5.	What are the cool colours?	2	Understanding



ARMY PUBLIC SCHOOL GWALIOR
CLASS - II
ACADEMIC SESSION 2023-24
WORKSHEET (SELF –ASSESSMENT)



Subject: Health and Physical Education
Allotment Date: 30 December 2023

Assignment No. : 7

S.NO.	QUESTIONS	MARKS	NATURE
1.	<p>Tick the correct answer.</p> <p>(i) Throwing is an action which involves the movement of your _____.</p> <p>a) hands b) head c) feet d) legs</p> <p>(ii) _____ is used to grab/hold or catch the ball.</p> <p>a) shoulder b) legs c) foot d) hands</p> <p>(iii) Gross motor develops skills like</p> <p>a) catching b) rolling c) trapping d) all of these</p> <p>(iv) March Past is conducted for _</p> <p>a) small group b) 2-4 participants c) large group d) none of these</p>	4x1=4	Information
2.	<p>Fill in the blanks-</p> <p>a) March Past involves the movement of _____ and _____.</p> <p>b) _____ is an outdoor game.</p> <p>c) _____ makes you fit and healthy.</p>	3x1=3	Understanding

3.	Write 'T' for True or 'F' for False against the statements:- a) March Past can be conducted for small group. b) Badminton is an outdoor game. c) Hockey is an outdoor game.	3x1=3	Interdisciplinary
----	---	-------	-------------------



ARMY PUBLIC SCHOOL GWALIOR
CLASS - II
ACADEMIC SESSION 2023-24
WORKSHEET (SELF –ASSESSMENT)



Subject: Music and Dance

Assignment No. : 7

Allotment Date: 30 December 2023

S. NO.	QUESTIONS	MARKS	NATURE
1	How many classical dance forms are there in India ? a) 8 b) 9	1	Information
2	How many Gharanas are there in kathak ? a) Four b) Six	1	Critical Thinking
3	To which art, PT Birju Maharaj Ji belong? a) Dancer b) Musician	1	Understanding
4	Complete the statement- Dandiya is thedance. a) Folk b) Western	1	Information

5	<p>How many sections are there in Teentaal ?</p> <p>a)8 b)4</p>	1	Critical thinking
6	<p>Fill the missing Swara- Sa re ga ma dha ni sa</p> <p>a) pa b) Sa</p>	1	Information
7	<p>How many Shudh Swaras are there in music ?</p> <p>a) 7 b) 5</p>	1	Information
8	<p>Complete the statement- Jingle bells is a song.</p> <p>a) Christmas b) Diwali</p>	1	Critical thinking
9	<p>Complete the line- Dashing through the _____.</p> <p>a) Snow b) Road</p>	1	Understanding

10	Complete the line- On a one open sleigh. a) Horse b) Deer	1	Understanding
-----------	--	----------	---------------