



**ARMY PUBLIC SCHOOL GWALIOR**  
**CLASS - VIII**  
**ACADEMIC SESSION 2023-24**  
**REVISION WORKSHEET (SELF –ASSESSMENT)**



**Subject: English**

**Assignment No. : 6**

**Allotment Date: 20 November 2023**

<b>S.NO.</b>	<b>QUESTIONS</b>	<b>MARKS</b>	<b>NATURE</b>
Q1.	<p>Change the speech of the following sentences</p> <ol style="list-style-type: none"><li>1. John said, 'I am very busy now.'</li><li>2. He said, 'The horse has been fed.'</li><li>3. 'I know her name and address,' said John.</li><li>4. 'German is easy to learn,' she said.</li><li>5. He said, 'I am writing letters.'</li><li>6. 'It is too late to go out,' Alice said.</li></ol>	6 m	Understanding
Q2.	<p>Change the following sentences to active voice</p> <ol style="list-style-type: none"><li>1. Lightning struck the school.</li><li>2. This morning the police arrested the burglar.</li><li>3. Hydrocarbons cause one type of air pollution.</li><li>4. Mr. Patel and his children prepared an elaborate supper for the miners.</li><li>5. The Mad Hatter stole the cookies.</li><li>6. F.L. Olmsted and Calbert Vaux designed New York City's Central Park in 1857.</li></ol>	6 m	Understanding

Q3.	<p>Answer the following questions:</p> <p>a) How did Jody bring the fawn back home ?</p> <p>b) How did Jody look after the fawn, after he accepted the responsibility for doing this?</p> <p>c) How does Jody know that the fawn is a male?</p>	9 m	Hot
Q4.	<p>Do you think is it right to kill an animal to save a human life? Give reasons for your answer. ( This is Jody's Fawn)</p>	3 m	Hot
Q5.	<p>'Grow more trees to reduce pollution.' Write an article in 150-200 words on the topic given above for your school magazine.</p>	3 m	Evaluation
Q6.	<p>Freedom practices its own logic. It puts a bouquet of rights in your right hand and a basket of duties in your left hand. This is merely to help you walk straight. Elaborate the statement in light to the chapter Princess September.</p>	3 m	Hot



**ARMY PUBLIC SCHOOL GWALIOR**  
**CLASS - VIII**  
**ACADEMIC SESSION 2023-24**  
**REVISION WORKSHEET (SELF –ASSESSMENT)**


**Subject: Hindi**

**Assignment No. : 6**

**Allotment Date: 20 November 2023**

क्रम सं.	प्रश्न	अंक	प्रकृति
1.	निम्न शब्दों के अर्थ लिखिए- फबती, यकीन, घिसीपिटी, अदब, मुंडेर, गढ़न, खुराफाती, पारसाल, तन्मयता, सांगोपांग।	5	Informative Communication Skills
2.	निम्नलिखित प्रश्नों के उत्तर दीजिए – 1- 'साइकिल आंदोलन' से पुदुकोट्टई की महिलाओं के जीवन में कौन-कौन से बदलाव आए हैं? 2- बिलवासी जी ने रुपयों का प्रबंध कहाँ से किया था? 3- आपके विचार से अंग्रेज ने यह पुराना लोटा क्यों खरीद लिया?	6	Critical Thinking and Problem Solving
3.	(क) क्रियाविशेषण की परिभाषा देते हुए उसके भेदों को उदाहरण देकर समझाइए। (ख) विराम- चिह्न की परिभाषा देकर इनके उदाहरण सहित 2 वाक्य प्रयोग भी लिखिए।	4	Interdisciplinary
4.	अगर दुनिया के सभी पहिए हड़ताल कर दें तो क्या होगा? इस विषय पर दस वाक्य लिखिए।	5	Understanding
5.	निम्नलिखित में से किसी एक विषय पर विज्ञापन तैयार कीजिए - 1- डायमंड साइकिल 2- चॉकलेट बिस्कुट	5	Evaluation

6.	(क) स्वामी विवेकानंद के बारे में बताइये? (ख) रवीन्द्रनाथ टैगोर कौन थे?	5	Analytical
----	---	---	------------



ARMY PUBLIC SCHOOL GWALIOR  
CLASS - VIII



ACADEMIC SESSION 2023-24  
REVISION WORKSHEET (SELF –ASSESSMENT)

Subject: Mathematics


Assignment No. : 6

Allotment Date: 20 November 2023

S. NO.	QUESTIONS	MARKS	NATURE
1	<p><b>Choose the correct alternatives in each of the following:</b></p> <p>The area of a parallelogram with length (l) and breadth (b) is:</p> <p>A <math>\frac{1}{2} lb</math> B <math>2lb</math> C <math>lb</math> D <math>(lb)^2</math></p>	1	Understanding
2	<p>1 cm is equal to how many millimeters?</p> <p>A 10 B 100 C <math>\frac{1}{10}</math> D <math>\frac{1}{100}</math></p>	1	Understanding
3	<p>What is the value of <math>5x^{25} - 3x^{32} + 2x^{-12}</math> at <math>x=1</math>?</p> <p>A 0 B 2 C 4 D None of these</p>	1	Evaluation
4	<p>The value of <math>2^{-2}</math> is:</p> <p>A 4 B <math>\frac{1}{4}</math> C 2</p>	1	Evaluation

	D $\frac{1}{2}$		
5	<p><math>2^2 \times 2^3 \times 2^4</math> is equal to:</p> <p>A. <math>2^{24}</math></p> <p>B. <math>2^{-5}</math></p> <p>C. <math>2^9</math></p> <p>D. <math>2^{-9}</math></p>	1	Analytical
	<b>Fill in the blanks.</b>		
6	_____ is the numerical coefficient of $x^2y^2$ ?	1	Analytical
7	$5x+6y$ is a _____ term.	1	Informative
8	Volume of a cylinder with base radius = $r$ and height = $h$ , is_____.	1	Understanding
9	A cuboid has _____ pairs of identical faces.	1	Evaluation
10	The area of a rhombus is $240 \text{ cm}^2$ and one of the diagonals is 16 cm. Find the other diagonal.	2	Problem solving
11	Simplify and express the result in power notation with a positive exponent: a) $-(3)^4 \times (5/3)^4$ (b) $2^{-3} \times (-7)^{-}$	2	Understanding and Analytical
12	Add the following. $2p^2q^2 - 3pq + 4, 5 + 7pq - 3p^2q^2$	2	Analytical
13	The parallel sides of a trapezium measure 12 cm and 20 cm. Calculate its area if the distance between the parallel lines is 15 cm.	3	Evaluation
14	Subtract $4p^2q - 3pq + 5pq^2 - 8p + 7q - 10$ from $18 - 3p - 11q + 5pq - 2pq^2 + 5p^2q$	3	Evaluation

<b>15</b>	A square and a rectangle have the same perimeter. If the side of the square is 60 cm and the length of the rectangle is 80 cm, then  a) What is the perimeter of a square? b) Calculate the area of a square. c) Calculate the area of a rectangle.	$4(1+1+2)$	Case Study
<b>16</b>	Simplify $a(a^2 + a + 1) + 5$ and find its value for (i) $a = 0$ , (ii) $a = 1$ (iii) $a = -1$ .	<b>5</b>	Interdisciplinary



**ARMY PUBLIC SCHOOL GWALIOR**  
**CLASS - VIII**  
**ACADEMIC SESSION 2023-24**  
**REVISION WORKSHEET (SELF –ASSESSMENT)**



**Subject: Science**

**Assignment No. : 6**

**Allotment Date: 20 November 2023**

S. NO.	QUESTIONS	MARKS	NATURE
Q1.	Answer the following questions. I. What is the cause of friction? II. In which medium sound propagates the maximum? III. What is the maximum displacement of an oscillating object is called?	1x3=3	Information
Q2.	I. Why is it easier for the fish to swim in water? II. When the two surfaces are pressed harder, friction increases. Explain why?	2x2=4	Understanding
Q3.	I. Suppose a bell is ringing in a vacuum. Will you able to hear the sound? II. Two identical metal sheets, A and B, are rubbed with paper and sand paper respectively. Which one of them will shine more?	2x3=6	HOT
Q4.	I. Explain increasing and decreasing friction with suitable examples. II. If you play a musical instrument, bring it to the class and demonstrate how you play it.	3x2=6	Interdisciplinary
Q5.	I. Imagine that friction suddenly vanishes. How would life be affected? List such situations.	3x1=3	Analytical Skill
Q6.	II. How friction can be reduced in the following: Shoes, Vehicle tyres and Brakes	3x1=3	Critical Thinking and Problem Solving
Q7.	I. What role does friction play in the sport of your choice? Collect some pictures of that sport in action where friction is either supporting it or opposing it. Display these pictures with proper captions on the display board of your classroom.	5x1=5	Communication Skills and Evaluation





**ARMY PUBLIC SCHOOL GWALIOR  
CLASS - VIII**



**ACADEMIC SESSION 2023-24  
REVISION WORKSHEET (SELF –ASSESSMENT)**

**Subject: Social Science**

**Assignment No. : 6**

**Allotment Date: 20 November 2023**

S. NO.	QUESTIONS	MARKS	NATURE
1.	<b>Fill in the blank:</b> i. When soldiers as a group disobey their officers in the army then it is called a _____ ii. A person who can read, write and teach Persian is called a _____ iii. _____ sector industries are owned, managed and controlled by the state or central government . iv. _____ continued to fight a guerrilla war against British. v. The English education Act introduced in India in _____ year. vi. Basket weaving falls in the category of _____. vii. Subsidiary Alliance was imposed on Awadh in _____. viii. _____ was the President of the Board of Control in England who sent a dispatch.	<b>08</b>	<b>Information and understanding</b>
2.	Why did the Mughal emperor agree to support the rebels?	<b>3</b>	<b>HOTS</b>
3.	Why do high technology industries group together?	<b>3</b>	<b>Analytical skill</b>
4.	Mention the reasons behind the discontent of the Indian sepoy employed in the company.	<b>3</b>	<b>Communication Skill</b>
5.	Find out the full forms of BEL, BHEL, HAL, NAL, DRDO, ISRO, ITI, IISc, NCBS and UAS	<b>5</b>	<b>Critical Thinking And problem Solving</b>
6.	Imagine you were born in a poor family in the 1850s. How would you have responded to the coming of the new system of government regulated pathshalas?	<b>5</b>	<b>Inter disciplinary</b>
7	Make a list of places where the uprising took place in May, June and July 1857.	<b>5</b>	<b>Evaluation</b>



**ARMY PUBLIC SCHOOL GWALIOR**  
**CLASS - VIII**  
**ACADEMIC SESSION 2023-24**  
**REVISION WORKSHEET (SELF –ASSESSMENT)**

Subject: Sanskrit

Assignment No. : 6

Allotment Date: 20 November 2023

S.NO.	QUESTIONS	MARKS	NATURE																														
1	निम्नलिखित शब्दों के अर्थ लिखिए - पातुम्, सविनोदम्, आलपन्ती, समासेन, विद्यात्।	(5)	Information																														
2	संस्कृतभाषयां वाक्यप्रयोगं कुरुत- (क) विद्या (ख) तपः (ग) समाचरेत् (घ) परितोषः (ङ) नित्यम्	(5)	Understanding																														
3	पदानां लिङ्गम् विभक्तिः वचनम् च लिखत - <table style="width: 100%; border-collapse: collapse;"><thead><tr><th></th><th>पदानि</th><th>लिङ्गम्</th><th>विभक्तिः</th><th>वचनम्</th></tr></thead><tbody><tr><td>(क)</td><td>नापितैः</td><td>-----</td><td>-----</td><td>-----</td></tr><tr><td>(ख)</td><td>नाम्नि</td><td>-----</td><td>-----</td><td>-----</td></tr><tr><td>(ग)</td><td>अपरः</td><td>-----</td><td>-----</td><td>-----</td></tr><tr><td>(घ)</td><td>कन्यानाम्</td><td>-----</td><td>-----</td><td>-----</td></tr><tr><td>(ङ)</td><td>सहभागिता</td><td>-----</td><td>-----</td><td>-----</td></tr></tbody></table>		पदानि	लिङ्गम्	विभक्तिः	वचनम्	(क)	नापितैः	-----	-----	-----	(ख)	नाम्नि	-----	-----	-----	(ग)	अपरः	-----	-----	-----	(घ)	कन्यानाम्	-----	-----	-----	(ङ)	सहभागिता	-----	-----	-----	(5)	Interdisciplinary
	पदानि	लिङ्गम्	विभक्तिः	वचनम्																													
(क)	नापितैः	-----	-----	-----																													
(ख)	नाम्नि	-----	-----	-----																													
(ग)	अपरः	-----	-----	-----																													
(घ)	कन्यानाम्	-----	-----	-----																													
(ङ)	सहभागिता	-----	-----	-----																													
4	शुद्धवाक्यानां समक्षम् आम् अशुद्धवाक्यानां समक्षं च नैव इति लिखत- (क) अभिवादनशीलस्य किमपि न वर्धते। (ख) मनुष्यः सदैव तदैव कर्म कुर्यात् येनान्तरात्मा तुष्यते। (ग) आत्मवशं तु सर्वमेव दुःखमस्ति। (घ) येन पितरौ आचार्यः च सन्तुष्टाः तस्य सर्वं तपः समाप्यते। (ङ) मनुष्यः सदैव मनः पूतं समाचरेत्।	(5)	Analytical Skill																														
5	मञ्जूषातः चित्वा उचिताव्ययेन वाक्यपूर्तिं कुरुत- <table style="width: 100%; border-collapse: collapse;"><tbody><tr><td>अपि</td><td>एव</td><td>यथा</td><td>नित्यं</td><td>यादृशम्</td></tr></tbody></table>	अपि	एव	यथा	नित्यं	यादृशम्	(5)	Critical Thinking and Problem Solving																									
अपि	एव	यथा	नित्यं	यादृशम्																													

	(क) तयोः ..... प्रियं कुर्यात्। (ख) ..... कर्म करिष्यसि। तादृशं फलं प्राप्स्यसि। (ग) वर्षशतैः ..... निष्कृतिः न कर्तुं शक्या। (घ) तेषु ..... त्रिषु तुष्टेषु तपः समाप्यते। (ङ) ..... राजा तथा प्रजा।		
6	<b>अधोलिखितपदानां समानार्थकपदानि लिखत-</b> (क) शिक्षणे - (ख) पथि - (ग) हृदय - (घ) इच्छानुसारम् - (ङ) योगदानम् - (च) निरन्तरम् -	(5)	Evaluation



**ARMY PUBLIC SCHOOL GWALIOR**  
**CLASS - VIII**  
**ACADEMIC SESSION 2023-24**  
**REVISION WORKSHEET (SELF –ASSESSMENT)**

**Subject: Computer**

**Assignment No. : 6**

**Allotment Date: 20 November 2023**

S.NO.	QUESTIONS	MARKS-10	NATURE
1	Choose and write the correct option (MCQ):-	0.5x5=2.5	Information
i)	A blog is a _____having frequently updated collection of information and entries. a) software b) website c) app		
ii)	_____transition is used to change the direction of transition effects. a) Reverse b) Change c) Modify		
iii)	A_____is a visual effect that appears when our movie plays from one video clip or picture to the next. a) transition b) animation c) timeline		
iv)	_____are used to layer to layer video and images. a) Play Heads b) Tracks c) Filter boxes		
v)	We should enter our personal and financial information through a _____connection. a) Secure web b) Insecure web c) Common web		

2	<p>Fill in the blanks-</p> <p>a) OpenShot allows us to add special _____ effects to our project.</p> <p>b) Movies are recorded using _____ and _____ recording equipment.</p> <p>c) Online auction is the most popular mode for _____ e-commerce model.</p> <p>d) In the web browser, we should look for a _____ icon for security concern.</p> <p>e) The term _____ refers to the worldwide collection of blogs.</p>	0.5x 5=2.5	Understand  ding
3.	<p>Write 'T' for True and 'F' for False statements.</p> <p>a) Split Clip tool is used to remove unwanted section of a movie clip.</p> <p>b) We cannot add text in OpenShot Video Editor.</p> <p>c) A secure website has https instead of http in web address.</p>	0.5x3=1.5	Understand  ding
4.	<p><b>Answer the following questions:-</b></p> <p>a) Define Real Movies.</p> <p>b) Define Animated Movies.</p> <p>c) What is OpenShot?</p> <p>d) What is timeline in OpenShot?</p> <p>e) What do you mean by blogging?</p> <p>f) What are the advantages of e-commerce?</p> <p>g) What is a blog? Write down its uses.</p>	0.5x 7=3.5	Evaluation



**ARMY PUBLIC SCHOOL GWALIOR  
CLASS - VIII**



**ACADEMIC SESSION 2023-24**  
**REVISION WORKSHEET (SELF –ASSESSMENT)**

Subject: ATL

Assignment No. : 6

Allotment Date: 20 November 2023

S. NO.	QUESTIONS	MARKS	NATURE
1.	Choose the correct answer.		
A)	What is Design Thinking? a. A process for creating software applications b. A creative problem-solving approach c. A design methodology for industrial products d. A project management methodology	1	Understanding
B)	What is the main goal of design thinking? a. To design products and services. b. To create a cognitive style of thinking like a designer. c. To provide a general theory of design. d. To approach complex problems in a designerly way.	1	Understanding
C)	What is the first stage in the Design Thinking process? a. Define b. Ideate c. Empathize d. Prototype	1	Understanding
D)	What are the different uses of the term design thinking? a. A specific cognitive style of thinking like a designer. b. A general theory of design. c. A set of pedagogical resources d. All of the above.	1	Understanding
2.	State whether these statements are true or false.		
A)	To solve complex problems is the goal of Design Thinking?	1	Analytical Thinking
B)	Design Thinking is a Non-Linear Process?	1	Understanding
C)	One doesn't need to have professional training in design to become a design thinker.	1	Understanding

<b>3.</b>	<b>Fill in the blanks.</b>		
<b>A)</b>	In Design Thinking, the process of creating a tangible representation of ideas is known as _____.	<b>1</b>	<b>Understanding</b>
<b>B)</b>	To understand the users and their needs is the primary purpose of the _____ stage in Design Thinking.	<b>1</b>	<b>Understanding</b>
<b>C)</b>	_____ stage in the Design Thinking process involves defining the problem statement based on the user's needs.	<b>1</b>	<b>Understanding</b>



**ARMY PUBLIC SCHOOL GWALIOR  
CLASS - VIII  
ACADEMIC SESSION 2023-24**




## REVISION WORKSHEET (SELF –ASSESSMENT)

Subject: Music

Assignment No. : 6

Allotment Date: 20 November 2023

S. NO.	QUESTIONS	MARKS	NATURE
1.	katthak is. dance of which state? A) Uttar Pradesh B) Lucknow	1	Informative
2.	which are the famous Gharanas of Kathak dance? A) Lucknow Jaipur Banaras Gharana B) Gwalior Rajasthan Raigarh Gharana	1	Informative
3.	which dance is Kathak? A) classical dance B) folk dance	1	Informative
4.		1	Informative
5	How many part of congo instrument A) 3 B) 1	1	Informative
6.	What is the Congo musical instrument made of? A) wood B) metal	1	Informative
7.	What is the Congo instrument played with? A) hand B) stick	1	Informative
8.	What is Congo skin made of? A) plastic B) leather	1	Informative
9,	How many part of bongo? A) 1 B) 2	1	Informative
10.	What is the bongo instrument played with? A) hand B) stick	1	Informative



ARMY PUBLIC SCHOOL GWALIOR  
CLASS - VIII






**ACADEMIC SESSION 2023-24**  
**REVISION WORKSHEET (SELF –ASSESSMENT)**

**Subject: Art Education**

**Assignment No. : 6**

**Allotment Date: 20 November 2023**

<b>S. No.</b>	<b>QUESTIONS</b>	<b>MARKS</b>	<b>NATURE</b>
<b>1</b>	What is human anatomy in art?	2	Informative
<b>2</b>	What are the 7 ways to study human anatomy?	2	Informative
<b>3</b>	How do you study human anatomy for art?	2	Understanding
<b>4</b>	What is Kolam Art?	2	Informative
<b>5</b>	Which state art is kolam?	2	Understanding



**ARMY PUBLIC SCHOOL GWALIOR**  
**CLASS - VIII**  
**ACADEMIC SESSION 2023-24**  
**REVISION WORKSHEET (SELF –ASSESSMENT)**


**Subject: Yoga**

**Allotment Date: 20 November 2023**

**Assignment No. : 6**

<b>QUESTIONS</b>	<b>MARKS</b>	<b>SKILLS</b>
<p><b>Fill in the blanks</b></p> <p>1] Pratyahara is the _____ limb of Asthang Yoga. [fourth/fifth].</p> <p>2] Prati means _____. [away from / nearby.]</p> <p>3] Pratyahara is about going _____ your will. [ against/ with]</p>	3X1=3	INFORMATIVE
<p><b><u>True and False:</u></b></p> <p>1. Pratyahara is not a limb of Asthang Yoga.</p> <p>2. It means collecting materialistic things.</p> <p>3. Pratyahara starts before yama.</p>	3X1=3	CRITICAL  THINKING

<p><b>Multiple Choice Questions:</b></p> <p>1] Pratyahara is derived from? A] Urdu scriptures B] Sanskrit roots. C] Devanagari Lipi. D] Non-of-these</p> <p>2] Pratyahara is about? A]the pathway to more confusion B] controlling the thirst of your senses C] Both D] None of these</p> <p>3] Asana prepare body for ? A] Sleep B] Pranayama C] None of these</p> <p>4] Pratyahara can lead an individual to ? A] confusion B] depression C] a deeper spiritual understanding D] None of the above</p>	4X1=4	ANALYTICAL  THINKING
--	-------	----------------------------



**ARMY PUBLIC SCHOOL GWALIOR**  
**CLASS - VIII**  
**ACADEMIC SESSION 2023-24**  
**REVISION WORKSHEET (SELF –ASSESSMENT)**

**Subject: Karate**

**Assignment No. : 6**

**Allotment Date: 20 November 2023**

<b>S.N</b>	<b>QUESTIONS</b>	<b>Point</b>
	<p>What is the meaning of kumite ?</p> <ul style="list-style-type: none"><li>A. Fight</li><li>B. Fukushin</li><li>C. Kansa</li><li>D. Niquashi</li></ul> <p>What is the meaning of wazari?</p> <ul style="list-style-type: none"><li>A. 2 point</li><li>B. 3 point</li><li>C. 3 point</li><li>D. 4 point</li></ul> <p>How many scoring criteria of kumite?</p> <ul style="list-style-type: none"><li>A. 3</li><li>B. 5</li><li>C. 6</li><li>D. None of these</li></ul> <p>Gyaku tsuki is called .....?</p> <ul style="list-style-type: none"><li>A. Reverse hand punch</li><li>B. Chudan gari</li><li>C. Upper punch</li><li>D. Kentekigari</li></ul> <p><b>FILL IN THE BLANKS</b></p> <p>..... scoring criteria of kumite.(5,6,)</p> <p>Partner training is usefull for .....(kumite,kata)</p>	<p>1X10=10</p>

Waza-ari is the japeese name of .....point.(two,three )

**TRUE AND FALSE**

Gyaku tsuki is usefull for face kick.

Gari is called for kick

Zanshin is the scoring criteria of kumite



**ARMY PUBLIC SCHOOL GWALIOR**  
**CLASS - VIII**  
**ACADEMIC SESSION 2023-24**  
**REVISION WORKSHEET (SELF –ASSESSMENT)**

Subject: Physical Education

Assignment No. : 6

Allotment Date: 20 November 2023

S.NO	QUESTIONS	MARKS	SKILLS/ COMPETENCIES
1.	<p><b>Tick The Correct Answer</b></p> <p>Q-1 Full form of AFI IS?</p> <ul style="list-style-type: none"><li>a. ATHLETICS FEDERATION OF INDIA.</li><li>b. ATHLETICS FEDERATION OF IMPHAL.</li><li>c. ATHLETICS FIELD OF IINDIA.</li><li>d. ATTRACTIVE FEDERATION OF INDIA.</li></ul> <p>Q-2 How many athletes run on a relay team?</p> <ul style="list-style-type: none"><li>a.3</li><li>b.5</li><li>c.7</li><li>d.4</li></ul> <p>Q-3which of the following is a field event?</p> <ul style="list-style-type: none"><li>a. 1500m</li><li>b. 1600m</li><li>c. Javelin</li><li>d. 200m</li></ul> <p>Q-4 Which of the following is track event?</p> <ul style="list-style-type: none"><li>a. Long jump</li><li>b. High jump</li><li>c. Shot put</li><li>d. 100m</li></ul>	4	<b>INFORMATION</b>
2	<b><u>Fill in the blanks</u></b>	3	

	<p>Q-5 100 meter considered a _____.</p> <p>a) Sprint b) Middle race c) Long distance d) Field event</p> <p>Q-6- _____ is the famous sprinter in the world.</p> <p>a) Usain bolt b) Bob jones c) Hema das d) Preeti singh</p> <p>Q-7 100m, 200m 400m 800 meter sprints come under_____.</p> <p>a) Long distance race b) Shorts distance relay c) marathon d) sprints</p>		<b>Knowledge</b>
<b>3</b>	<p><b><u>True False</u></b></p> <p>Q-08- A marathon consider as a long distance race.</p> <p style="padding-left: 40px;"><b>A.</b> True <b>B.</b> False</p> <p>Q-9- Discus throw is considered a jump event.</p> <p style="padding-left: 40px;"><b>A.</b> True <b>B.</b> False</p> <p>Q-10 Javelin throw consider a field event.</p> <p style="padding-left: 40px;">4. True 5. False</p>	<b>3</b>	<b>Understanding</b>