



ARMY PUBLIC SCHOOL GWALIOR
CLASS - VI
ACADEMIC SESSION 2023-24
REVISION WORKSHEET (SELF –ASSESSMENT)

Subject: English

Assignment No. : 6

Allotment Date: 20 November 2023

S. NO.	QUESTIONS	MARKS	NATURE
1	<p>Read the Passage carefully.</p> <p>My next pet was a pigeon, the most revolting bird to look at, with his feathers pushing through the wrinkled scarlet skin, mixed with the horrible yellow down that covers baby pigeons and makes them look as though they have been peroxidizing their hair. Because of his repulsive and obese appearance, we called him Quasimodo. Since he had an unorthodox upbringing, without parents to teach him, Quasimodo became convinced that he was not a bird at all, and refused to fly. He walked everywhere. He was always eager to join us in anything we did.</p> <p>He would even try to come for walks with us. So you had to either carry him on your shoulder, which was risking an accident to your clothes, or else you let him walk behind. If you let him walk, then you had to slow down your own pace to suit his, for should you get too far ahead, you would hear the most frantic and imploring coos and turn around to find Quasimodo running desperately after you.</p> <p>On the basis of your reading choose the correct options for the given statements:</p> <p>1. The narrator describes the pigeon as a 'revolting bird' because</p> <p>(a) He could not fly (b) He had to be carried everywhere (c) He had wrinkled skin covered with yellow feathers (d) He was fat.</p> <p>2. Quasimodo got his name because</p> <p>(a) He was fat and ugly (b) He was attractive (c) He could not fly (d) He loves behaving like human beings</p> <p>3. We know that Quasimodo was always eager to go on walks because</p> <p>(a) He walked everywhere (b) He did not know how to fly (c) He complained loudly if he was not taken along (d) He always copied whatever humans did</p> <p>4. Quasimodo protested when he was</p> <p>(a) Left at home (b) Lifted on human shoulders (c) Taken for a walk (d) Left behind during walks.</p>	5 Marks	Informative and Understanding

	<p>5. The phrase 'risking an accident to your clothes' means</p> <p>(a) The bird pecked at their clothes</p> <p>(b) There was a chance of the bird soiling their clothes</p> <p>(c) The bird risked a fall</p> <p>(d) The bird did not like their clothes</p>		
2.	<p>Read the given passage carefully and answer the questions that follow:</p> <p>One day she spoke to Jumman, "My son, it is now obvious that I am not wanted in your house. Kindly give me a monthly allowance so that I can set up a separate kitchen." "My wife knows best how to run the house. Be patient," said Jumman shamelessly. This made his aunt very angry and she decided to take her case to the village panchayat.</p> <p>1. Who does 'she' refer to?</p> <p>2. What did she complain of?</p> <p>3. What was Jumman's shameless reply?</p> <p>4. Find a word from the above passage that means the same as to 'clear'.</p>	4 Marks	Problem Solving
3.,	<p>Read the given passage carefully and answer the questions that follow:</p> <p>When the gong sounds ten in the morning and I walk to school by our lane, Every day I meet the hawker crying, "Bangles, crystal bangles!</p> <p>There is nothing to hurry him on, there is no road he must take, no place he must go to, no time when he must come home.</p> <p>I wish I were a hawker, spending my day in the road, crying, "Bangles, crystal bangles!"</p> <p>1. When does the gang sound? (a) 10 a.m (b) 11 a.m (c) 8 a.m</p> <p>2. The poet walks to school by _____ (a) lane (b) road (c) street</p> <p>3. Who is crying "Bangles crystal bangles"! (a) The shopkeeper (b) The hawker (c) The driver</p>	3 Marks	Critical Thinking

2	You are Ruchi/Arpit. You have lost your library card. Write a letter to the librarian to issue you a duplicate card.	5 Marks	Communication Skills
3	Fill in the blanks with appropriate adverbs: 1. The hawk soars ----- above the hills. 2. He is ----- right. 3. Did you understand the concept -----?	3 Marks	Analytical Skill
4	In your opinion , what qualities should a true friend have?	3 Marks	Interdisciplinary
7	Answer the following questions in about 20-30 words. a)Why was Jumman happy over Algu's nomination as head punch? b)How did the monkey and the crocodile become good friends?	2x2 = 4 Marks	Evaluation
8	Freedom is remarkable for the child in the poem, 'Vocation'. How?	3 Marks	HOT



ARMY PUBLIC SCHOOL GWALIOR
CLASS - VI
ACADEMIC SESSION 2023-24
REVISION WORKSHEET (SELF –ASSESSMENT)

Subject: Hindi

Allotment Date: 20 November 2023

Assignment No. : 6

क्रम सं.	प्रश्न	अंक	प्रकृति
1.	निम्नलिखित शब्दों के अर्थ लिखिए— (क) दृष्टि (ख) टापू (ग) आबाद (घ) आदी (ङ) बालू (च) मुग्ध	0.5x6=3	सूचनात्मक संचार कौशल (Informative Communication Skills)
2.	निम्नलिखित प्रश्नों के उत्तर लिखिए— (क) लाखों-करोड़ों वर्ष पहले हमारी धरती कैसी थी? (ख) जिन लोगों के पास आँखें हैं, वे सचमुच बहुत कम देखते हैं- हेलेन केलर को ऐसा क्यों लगता था? (ग) गोल, चमकीला रोड़ा अपनी क्या कहानी बताता है? (घ) कान से न सुन पाने पर आस-पास की दुनिया कैसी लगती होगी?	4	गंभीर सोच और समस्या समाधान (Critical Thinking and Problem Solving)
3.	(क) हनुमान के रास्ते में कौन-कौन सी राक्षसियाँ आईं? (ख) हनुमान ने अशोक वाटिका में क्या देखा? (ग) सुग्रीव कहाँ रहते थे? (घ) शबरी ने राम को क्या सलाह दी?	4	अंतःविषयी (Interdisciplinary)
4.	निम्नलिखित विषयों में से किसी एक पर लगभग 60-80 शब्दों में अनुच्छेद लिखिए— (i) दीपावली का त्योहार (ii) शीतकालीन ऋतु	5	मूल्यांकन (Evaluation)
5.	निम्नलिखित विषयों में से किसी एक विषय पर पत्र लिखिए— (i) आपके आसपास की दुकानों में मिलावटी सामान बेचा जा रहा है। इसकी सूचना देते हुए जिला स्वास्थ्य अधिकारी को शिकायती पत्र लिखिए। (ii) अपने नए विद्यालय का वर्णन करते हुए अपने चाचा जी को पत्र लिखिए।	5	मूल्यांकन (Evaluation)

6.	निम्नलिखित वाक्यों में से विशेषण छाँटकर लिखिए— (i) ज़्यादा चीनी नहीं खानी चाहिए। (ii) गरीब लोग मज़दूरी करते हैं। (iii) माता जी ने आज स्वादिष्ट चटनी बनाई है।	1x3=3	विश्लेषणात्मक (Analytical)
7.	निम्नलिखित वाक्य के काल लिखिए— (i) मैं रोज प्रातः घूमने जाता हूँ। (ii) वह बाजार से कुछ सामान लाया था। (iii) रमेश आज पढ़ने नहीं जाएगा।	1x3=3	विश्लेषणात्मक (Analytical)
8.	निम्नलिखित पद्यांश के आधार पर दिए गए प्रश्नों के उत्तर दीजिए— बात सभी ने यह है मानी, हवा सुबह की बड़ी सुहानी। सदा ताज़गी देती है यह, आलस को हर लेती है यह। यह रोगी न होने देती, तनिक न सेहत खोने देती। सुबह सैर पर जाकर देखो, हवा निराली पाकर देखो। अगर सैर पर नित जाओगे, अच्छी सेहत तुम पाओगे। प्रश्न (क) इस कविता में किसका गुणगान किया गया है? (i) सुबह की ताज़गी भरी हवा का (ii) सुबह-सुबह योगाभ्यास करने का (iii) सुबह-सवेरे कसरत करने का (iv) इन सभी का (ख) सुबह की हवा के बारे में क्या बताया गया है? (i) सुबह की हवा ताज़गी देती है। (ii) यह स्वस्थ रखती है। (iii) यह अच्छी सेहत देती है। (iv) उपर्युक्त सभी। (ग) सुबह सैर पर जाने से क्या लाभ मिलेगा? (i) व्यक्ति धनवान बनेगा (ii) अच्छा स्वास्थ्य मिलेगा (iii) अच्छे दोस्त बनेंगे (iv) इनमें से कोई नहीं।	1x3=3	समझ (Understanding)







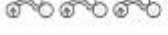













ARMY PUBLIC SCHOOL GWALIOR
CLASS - VI
ACADEMIC SESSION 2023-24
REVISION WORKSHEET (SELF –ASSESSMENT)

Subject: Mathematics

Assignment No. : 6

Allotment Date: 20 November 2023

S. NO.	QUESTIONS	MARKS	NATURE
1	1 cm is equal to i) 0.1 m ii) 0.01 m iii) 0.10 m iv) 0.001 m	1	Critical Thinking
2	The collection of observations that are gathered initially is called i) raw data ii) pure data iii) processed data iv) disposed data	1	Understanding
3	The comparison of decimal starts with i) fraction part ii) whole part iii) decimal part iv) none of the above	1	Informative
4	A pictorial symbol should be i) clear ii) self-explanatory iii) convey essential facts iv) all of the above	1	Informative
5	15 litres and 15 ml is equal to (a) 15.15 litres (b) 15.150 litres (c) 15.0015 litres (d) 15.015 litres	1	Analytical Skill
6	The fifth tally mark is drawn diagonally across the i) first one ii) first two iii) first three iv) first four	1	Understanding
7	The place value of 5 in 0.04532 is i) 5 ii) 5/100 iii) 5/1000 iv) 5/10000	1	Understanding
8	To make observations easily understandable and clear, the data can be presented in i) tabular form ii) pictograph iii) bar graph iv) all of the above	1	Analytical Skill

9	Decimals can be used in representing units of i) money ii) length iii) weight iv) all of the above	1	Informative																																								
10	The sum of two numbers is 100. If one of them is 78.01, find the other.	2	Critical Thinking																																								
11	Which is greater? i) 0.099 or 0.19 ii) 3.3 or 3.300	2	Understanding																																								
12	With the help of an example present what do you understand by an array or arrayed data?	2	Informative																																								
13	Find the sum in each of the following: (i) $0.007 + 8.5 + 30.08$ (ii) $280.69 + 25.2 + 38$	3	Analytical Skill																																								
14	In a Mathematics test, the following marks were obtained by 40 students. Arrange these marks in a table using tally marks and Find how many students obtained marks equal to or more than 7? <table border="1" data-bbox="252 1070 903 1305"> <tbody> <tr><td>8</td><td>1</td><td>3</td><td>7</td><td>6</td><td>5</td><td>5</td><td>4</td><td>4</td><td>2</td></tr> <tr><td>4</td><td>9</td><td>5</td><td>3</td><td>7</td><td>1</td><td>6</td><td>5</td><td>2</td><td>7</td></tr> <tr><td>7</td><td>3</td><td>8</td><td>4</td><td>2</td><td>8</td><td>9</td><td>5</td><td>8</td><td>6</td></tr> <tr><td>7</td><td>4</td><td>5</td><td>6</td><td>9</td><td>6</td><td>4</td><td>4</td><td>6</td><td>6</td></tr> </tbody> </table>	8	1	3	7	6	5	5	4	4	2	4	9	5	3	7	1	6	5	2	7	7	3	8	4	2	8	9	5	8	6	7	4	5	6	9	6	4	4	6	6	3	Understanding
8	1	3	7	6	5	5	4	4	2																																		
4	9	5	3	7	1	6	5	2	7																																		
7	3	8	4	2	8	9	5	8	6																																		
7	4	5	6	9	6	4	4	6	6																																		
15	Following pictograph shows the number of tractors in five villages. <table border="1" data-bbox="252 1384 903 1724"> <thead> <tr> <th>Villages</th> <th>Number of Tractors</th> <th> = 1 Tractor</th> </tr> </thead> <tbody> <tr> <td>Village A</td> <td></td> <td></td> </tr> <tr> <td>Village B</td> <td></td> <td></td> </tr> <tr> <td>Village C</td> <td></td> <td></td> </tr> <tr> <td>Village D</td> <td></td> <td></td> </tr> <tr> <td>Village E</td> <td></td> <td></td> </tr> </tbody> </table> Observe the pictograph and answer the following questions. (a) Which village has the minimum number of tractors? (b) Which village has the maximum number of tractors? (c) How many more tractors village C has as compared to village B?	Villages	Number of Tractors	 = 1 Tractor	Village A			Village B			Village C			Village D			Village E			1 1 2	Problem Solving																						
Villages	Number of Tractors	 = 1 Tractor																																									
Village A																																											
Village B																																											
Village C																																											
Village D																																											
Village E																																											
16	Tanuj walked 8.62 km on Monday, 7.05 km on Tuesday and some distance on Wednesday. If he walked 21.01 km in three days, how much distance did he walk on Wednesday?	5	HOT																																								



ARMY PUBLIC SCHOOL GWALIOR
CLASS - VI
ACADEMIC SESSION 2023-24
REVISION WORKSHEET (SELF –ASSESSMENT)

Subject: Science

Assignment No. : 6

Allotment Date: 20 November 2023

S.NO.	QUESTIONS	MARKS	NATURE										
Q1	Multiple choice questions: i. Natural sources of light. – a) touch b) moon c) sun ii. _____ is a device which converts chemical energy into electrical energy.- a) bulb b) current c) electric cell	1x2=2	Information										
Q2	Fill in the blanks: i. _____ is a material that allows an electric current to pass through it . ii. _____ formed due to reflection by mirrors. iii. _____ is a thin wire fixed in the middle of a bulb connected to the two supporting wires. iv. Light travels in a _____ .	4x1=4											
Q3	Match the following : <table style="width: 100%; border: none;"><tr><td style="width: 50%; text-align: center;">A</td><td style="width: 50%; text-align: center;">B</td></tr><tr><td>i. A combination of cell</td><td>insulator</td></tr><tr><td>ii. Pin hole camera</td><td>battery</td></tr><tr><td>iii. Wood</td><td>man made source of light</td></tr><tr><td>iv. Candle</td><td>a device to image the sun</td></tr></table>	A	B	i. A combination of cell	insulator	ii. Pin hole camera	battery	iii. Wood	man made source of light	iv. Candle	a device to image the sun	4X0.5 =2	Understanding
A	B												
i. A combination of cell	insulator												
ii. Pin hole camera	battery												
iii. Wood	man made source of light												
iv. Candle	a device to image the sun												
Q4	i. What are luminous and non-luminous objects?? ii. Why is the handle of electrician's screw driver made of plastic? ? iii. Write down four man-made sources of light. ? iv. Why shouldn't the two terminals of an electric cell be joined directly?	4x2=8	HOT										
Q5	i. What is the direction of the current in the electric circuit?. ii. What do we need in order to see a shadow?. iii. Why does a cell stop producing electricity after some time??	3x2=6	Interdisciplinary										

Q6	i. Define pinhole camera.? ii. What is the difference between image and shadow? iii. Give some uses of conductors and insulators.?	3x2=6	Critical thinking
Q 7.	<p>Read the following passage and answer the following: Kaleidoscope, optical device consisting of mirrors that reflect images of bits of coloured glass in a symmetrical geometric design through a viewer. The design may be changed endlessly by rotating the section containing the loose fragments. The name is derived from the Greek words <i>kalos</i> (“beautiful”), <i>eidos</i> (“form”), and <i>skopein</i> (“to view”).</p> <p>The kaleidoscope was invented by Sir David Brewster about 1816 and patented in 1817. Sold usually as a toy, the kaleidoscope also has value for the pattern designer.</p> <p>The kaleidoscope illustrates the image-forming properties of combined, inclined mirrors. If an object is placed between two mirrors inclined at right angles, an image is formed in each mirror. Each of these mirror images is in turn reflected in the other mirror, forming the appearance of four symmetrically placed objects. If the mirrors are inclined at 60°, a hexagonally symmetrical pattern results from one object producing six regularly placed images.</p> <p>A simple kaleidoscope consists of two thin, wedge-shaped mirror strips touching along a common edge or of a single sheet of bright aluminum bent to an angle of 60° or 45°. The mirrors are enclosed in a tube with a viewing eyehole at one end. At the other end is a thin, flat box that can be rotated; it is made from two glass disks, the outer one ground to act as a diffusing screen. In this box are pieces of coloured glass, tinsel, or beads. When the box is turned or tapped, the objects inside tumble into an arbitrary grouping, and when the diffusing screen is illuminated, the sixfold or eightfold multiplication creates a striking symmetrical pattern. The number of combinations and patterns is effectively without limit.</p> <p>(1) Who invented Kaleidoscope? (2) What do you mean by Kaleidoscope?</p>	2x2=2	Communication Skills



ARMY PUBLIC SCHOOL GWALIOR
CLASS - VI
ACADEMIC SESSION 2023-24
REVISION WORKSHEET (SELF –ASSESSMENT)

Subject: Social Science

Assignment No. : 6

Allotment Date: 20 November 2023

S. NO.	QUESTIONS	MARKS	NATURE
1	Why is the biosphere important for living organisms?	4m	Information
2	What is a dynasty?	3x1=3m	Understanding
3	From where have we taken the National Emblem of our country?	4m	HOTS
4	What were the means adopted by Ashoka to spread the message of 'dhamma'?	3x1=3m	Interdisciplinary
5	Fill in the blanks – 1. Royal princes often went to the provinces as_____ 2. The two continents that lie entirely in the southern hemisphere are _____ and _____. 3. The _____ desert is the world's largest hot desert.	3x1=3m	Analytical Skill
6	Answer the following questions in about 20-30 words. 1. What is lithosphere ? 2.Name some of the important cities in the Mauryan empire?	2x2=4m	Critical Thinking and Problem Solving
7	Answer the following questions- 1. What were the problems that Ashoka wanted to solve by introducing 'dhamma'? 2.How is North America linked to the South America? 3. Name the research station of India In Antarctica.	3x2=6m	Evaluation
8	'Map Activity- On an outline political map of India, mark the following- i) Pillar edicts of Ashoka- Sarnath, Meerut, Sanchi ii) Famous cities of Mauryan Empire- Pataliputra, Ujjain, Taxila	3m	Presentation Skills



ARMY PUBLIC SCHOOL GWALIOR
CLASS - VI
ACADEMIC SESSION 2023-24
REVISION WORKSHEET (SELF –ASSESSMENT)


Subject: Sanskrit

Assignment No. : 6

Allotment Date: 20 November 2023

क्रम सं.	प्रश्न	अंक	प्रकृति						
1	अधोलिखित शब्दानां अर्थाः लिखत (नीचे दिए गए शब्दों के लिखिए।) (क) शीतलं (ख) चिरम् (ग) व्यजनानि (घ) पुष्पोत्सवः (ङ) विपुलम् (च) नियुद्धम्	6	सूचनात्मक संचार कौशल (Informative Comm. Skills)						
2	मञ्जूषातः विलोमपदानि चित्वा लिखत- (क)सुखम्----- (ख)दूरे----- (ग)निर्धनम्----- (घ)क्षमम्----- (ङ)ग्रीष्मे----- (च)सरसा-----	6	गंभीर सोच और समस्या समाधान (Critical Thinking and Problem Solving)						
3	मञ्जूषातः पर्यायवाचिपदानि चित्वा लिखत। (मञ्जूषा की सहायता से पर्यायवाची शब्दों को चुनकर लिखिए।) <table border="1" style="width: 100%; text-align: center;"><tr><td>रविः</td><td>जर्जरम्</td><td>वस्त्राणि</td><td>पृथ्वी</td><td>अधिकम्</td><td>पिपासा</td></tr></table> (क) वसनानि _____	रविः	जर्जरम्	वस्त्राणि	पृथ्वी	अधिकम्	पिपासा	6	अंतःविषयी (Interdisciplinary)
रविः	जर्जरम्	वस्त्राणि	पृथ्वी	अधिकम्	पिपासा				

	<p>(ख) सूर्यः _____</p> <p>(ग) तृषा _____</p> <p>(घ) विपुलम् _____</p> <p>(ङ) जीर्णम् _____</p> <p>(च) धरित्री _____</p>		
4	<p>प्रश्न - श्लोकांशान् योजयत-</p> <p>(क) गृहं जीर्णं न वर्षासु</p> <p>(ख) हलेन च कुदालेन</p> <p>(ग) पादयोर्न पदत्राणे</p> <p>(घ) धरित्री सरसा जाता</p>	4	समझ (Understanding)
5	<p>प्रश्न . कोष्ठकात् उचितं शब्दं चित्वा रिक्तस्थानानि पूरयत। (कोष्ठक से उचित शब्द चुनकर रिक्त स्थान की पूर्ति करिये)</p> <p>(क) _____ वानराः।</p> <p>(ख) _____ फलम्।</p> <p>(ग) _____ वस्त्रम्।</p>	3	मूल्यांकन (Evaluation)
6	<p>प्रश्न- विशेषणं विशेष्येण सह मेलयत (विशेषण को विशेष्य साथ मिलाइए।)</p> <p>(i) मधुराणि</p> <p>(ii) हरितानि</p> <p>(iii) सुन्दरम्</p> <p>(iv) मधुरा</p> <p>(v) चपलः</p>	5	विश्लेषणात्मक (Analytical)



**ARMY PUBLIC SCHOOL GWALIOR
CLASS - VI**


**ACADEMIC SESSION 2023-24
REVISION WORKSHEET (SELF –ASSESSMENT)**

**Subject: Health and Physical Education
Allotment Date: 20 November 2023**

Assignment No. : 6

S.NO	QUESTIONS	MARKS	SKILLS/ COMPETENCIES
1.	<p>Tick The Correct Answer</p> <p>Q-1 Full form of AFI IS? a. ATHLETICS FEDERATION OF INDIA. b. ATHLETICS FEDERATION OF IMPHAL. c. ATHLETICS FIELD OF IINDIA. d. ATTRACTIVE FEDERATION OF INDIA.</p> <p>Q-2 How many athletes run on a relay team? a.3 b.5 c.7 d.4</p> <p>Q-3 Which of the following is a field event? a. 1500m b. 1600m c. Javelin d. 200m</p> <p>Q-4 Which of the following is track event? a. Long jump b. High jump c. Shot put d. 100m</p>	4	INFORMATION
2	<p><u>Fill in the blanks</u></p> <p>Q-5 100 meter considered a _____. a) Sprint b) Middle race c) Long distance d) Field event</p> <p>Q-6- _____ is the famous sprinter in the world. a) Usain bolt b) Bob jones c) Hema das d) Preeti singh</p> <p>Q-7 100m, 200m 400m 800 meter sprints come under_____. a) Long distance race b) Shorts distance relay c) marathon</p>	3	Knowledge

	d) sprints		
3	<u>True False</u> Q-08- A marathon consider as a long distance race. A. True B. False Q-9- Discus throw is considered a jump event. A. True B. False Q-10 Javelin throw consider a field event. A. True B. False	3	Understanding



ARMY PUBLIC SCHOOL GWALIOR
CLASS - VI



ACADEMIC SESSION 2023-24
REVISION WORKSHEET (SELF –ASSESSMENT)

Subject: Art and Work Education

Assignment No. : 6

Allotment Date: 20 November 2023

S. NO.	QUESTIONS	MARKS	NATURE
1	What kind of math is used in mandalas? A. Rhombus geometry B. Square geometry C. Triangle geometry D. Circle geometry	1 mark	Creative Skills
2	A mandala, which is Sanskrit for _____. A. Discoid object B. Domicile C. Barbarian D. Locale	1 mark	Creative Skills
3	What paint do you use for mandalas? A. Anti-corrosive paint. B. Acrylic paint C. Emulsion paint D. Enamel paint	1 mark	Creative Skills
4	Which one is not a component of a Mandala art? A. Symmetry B. Geometry C. Balance D. Colour	1 mark	Creative Skills
5	Strength, high energy and passion represent by which colour in mandala art? A. ORANGE B. YELLOW C. GREEN D. RED	1 mark	Creative Skills
6.	Which Colour material is best for Mandala? A. Gel pens B. Sketch pens C. Fountain pens D. Pencil colour	1 mark	Creative Skills
7	Which pen is used for mandala art? A. Pitt Artist Pens B. Ball pens C. Sketch pens D. Fountain pens	1 mark	Creative Skills
8	Which one is not a type of Mandalas? A. Teaching Mandala B. Learning Mandala C. Healing Mandala D. Sand Mandala	1 mark	Creative Skills

9	<p>_____tend to represent the universe, often carrying meanings related to life and energy.</p> <p>A. Bell B. Sun C. Triangle D. Lotus flower</p>	1 mark	Creative Skills
10	<p>_____ represent action and energy, and when facing downward, they represent creativity and the pursuit of knowledge.</p> <p>A. Bell B. Sun C. Triangle D. Lotus flower</p>	1 mark	Creative Skills



ARMY PUBLIC SCHOOL GWALIOR
CLASS - VI
ACADEMIC SESSION 2023-24
REVISION WORKSHEET (SELF –ASSESSMENT)

Subject: Yoga

Assignment No. : 6

Allotment Date: 20 November 2023

QUESTIONS	MARKS	SKILLS
Fill in the blanks 1] _____ is abstinence from stealing. [satya/ asteya] 2.] Aparigrah is the _____ [non- possessiveness / greed]. 3.] _____ is restraint of the sex organ and other senses [Brahmacharya/ Asteya]	3x1=3	INFORMATIVE
True and False: 1. Yama has the 5 limbs of itself. 2. Satya and Asteya are the limbs of Yama. 3. Aprigrah is not a good practice.	3x1=3	CRITICAL THINKING
Multiple Choice Questions: 1] <i>What is the</i> practice of is conservation and mastery of all the energy systems and powers of our being.? A] Aparigraha B] Brahmacharya C] Ahimsa D] Niyama 2] Which among these is the correct translation of Ahimsa? A] Non-Violence B] Observances C] Truthfulness D] Surrender to divine 3] What does Asteya means? A] Truthfullness B] Non-stealing C] Non-coveting D] All of these 4] Yoga helps in understanding _____? A] Aprigrah B] Brahmacharya C] Both D] None of these	4x1=4	ANALYTICAL THINKING



ARMY PUBLIC SCHOOL GWALIOR
CLASS - VI




ACADEMIC SESSION 2023-24
REVISION WORKSHEET (SELF –ASSESSMENT)

Subject: Karate (Martial Art)

Assignment No. : 6

Allotment Date: 20 November 2023

S.No.	QUESTIONS	Marks
1.	<p>What is the Japanese name of counter punch ?</p> <p>A. Punch B. Gyaku Tsuki C. Oei Tsuki D. Uke</p> <p>What is the meaning of Tsuki?</p> <p>A. Punch B. Upper Punch C. Lower Punch D. Block</p> <p>Gadan barai Uke is called.....</p> <p>A. Uke B. Block C. Lower Block D. None of these</p> <p>Step gyaku is called?</p> <p>A. Reverse hand punch B. Chudan gari C. Upper punch D. Kentekigari</p>	1x10=10
2.	<p>FILL IN THE BLANKS-</p> <p>Japanese name of counter punch is (Gadan barai Uke,gyaku tsuki)</p> <p>Partners training i is usefull for(kumite,kata)</p> <p>Gari is the japeese name of(kick,punch)</p>	
3.	<p>TRUE AND FALSE-</p> <p>Step gyaku tsuki is called triple punch.</p> <p>Training in pai is useful for kata</p> <p>Running basic is useful in kata</p>	



**ARMY PUBLIC SCHOOL GWALIOR
CLASS - VI**

**ACADEMIC SESSION 2023-24
REVISION WORKSHEET (SELF –ASSESSMENT)**


Subject: Music and Dance

Assignment No. : 6

Allotment Date: 20 November 2023

S. NO.	QUESTIONS	MARKS	NATURE
1	What is a pli� in dance? a) A jump b) A bending of the knees	1	Understanding
2	Which body part do dancers primarily use for balance in most dance movements? a) Hands b) Feet	1	Information
3	What is the term for a quick turn on one foot in dance? a) Pirouette b) Plank	1	Understanding
4	Which dance style often involves using specialized shoes with metal taps to create rhythmic sounds? a) Ballet b) Tap dance	1	Information
5	What is the purpose of stretching before dancing? a) To improve flexibility and prevent injuries b) To make the dance routine more challenging	1	Understanding
6	What do you mean by prayer ? a) Worship to God b) separation from God	1	Understanding
7	Tu pyar ka Sagar , sagar _____ ka tu hai ? a) Jaya b) Daya	1	Information
8	What do you mean by the term "Ibadat karo"? a) Worship b) Love	1	Critical Thinking
9	Complete the line So _____ you can't get around it. a) wide b) deep	1	Understanding

10	What do you mean by the term " Uska gungan karo"? a) Recite the name of God b) Help Others	1	Knowledge
-----------	--------------------------------------------------------------------------------------------------	----------	-----------



ARMY PUBLIC SCHOOL GWALIOR
CLASS - VI
ACADEMIC SESSION 2023-24
REVISION WORKSHEET (SELF –ASSESSMENT)

Subject: ATL

Assignment No. : 6

Allotment Date: 20 November 2023

S. NO.	QUESTIONS	MARKS	NATURE
1.	Choose the correct answer.		
A)	What is Design Thinking? a. A process for creating software applications b. A creative problem-solving approach c. A design methodology for industrial products d. A project management methodology	1	Understanding
B)	What is the main goal of design thinking? a. To design products and services. b. To create a cognitive style of thinking like a designer. c. To provide a general theory of design. d. To approach complex problems in a designerly way.	1	Understanding
C)	What is the first stage in the Design Thinking process? a. Define b. Ideate c. Empathize d. Prototype	1	Understanding
D)	What are the different uses of the term design thinking? a. A specific cognitive style of thinking like a designer. b. A general theory of design. c. A set of pedagogical resources d. All of the above.	1	Understanding
2.	State whether these statements are true or false-		
A)	To solve complex problems is the goal of Design Thinking?	1	Analytical Thinking
B)	Design Thinking is a Non-Linear Process?	1	Understanding
C)	One doesn't needs to have professional training in design to become a design thinker.	1	Understanding

3.	Fill in the blanks-		
A)	In Design Thinking, the process of creating a tangible representation of ideas is known as _____.	1	Understanding
B)	To understand the users and their needs is the primary purpose of the _____ stage in Design Thinking.	1	Understanding
C)	_____ stage in the Design Thinking process involves defining the problem statement based on the user's needs.	1	Understanding



ARMY PUBLIC SCHOOL GWALIOR
CLASS - VI
ACADEMIC SESSION 2023-24
REVISION WORKSHEET (SELF –ASSESSMENT)

Subject: Computer

Assignment No. : 6

Allotment Date: 20 November 2023

S.NO.	QUESTIONS	MARKS	NATURE
1.	<p>Tick the correct answer.</p> <ol style="list-style-type: none">Google Chrome is a full-featured _____ software designed by Google.<ol style="list-style-type: none">Web ServerWeb BrowserWeb Page_____ is a free online language translation service which instantly translates text into other languages.<ol style="list-style-type: none">Google WriterGoogle ReaderGoogle Translate_____ is a blog-publishing service by Google by which we can publish our ideas, opinions and stories online.<ol style="list-style-type: none">WriterBloggerDocs_____ is an interactive mapping program that covers the vast area of the Earth.<ol style="list-style-type: none">Google PixelGoogle GlassGoogle Earth	1X4=4	Interdisciplinary
2.	<p>Fill in the blanks.</p> <ol style="list-style-type: none">Google was founded by _____ and _____._____ is a web-based e-mail application offered by Google._____ is a time management app created by Google.	1X3=3	Analytical Skill
3.	<p>Answer the following.</p> <ol style="list-style-type: none">What do you mean by Google Apps?How does Google Maps work?What is the utility of Google Classroom?	1 X3=3	Analytical Skill