



**ARMY PUBLIC SCHOOL GWALIOR**  
**CLASS - II**  
**ACADEMIC SESSION 2023-24**  
**REVISION WORKSHEET (SELF –ASSESSMENT)**



Subject: English

Assignment No. : 6

Allotment Date: 20 November 2023

S. NO.	QUESTIONS	MARKS 20	NATURE												
1.	<p><b>Read the passage carefully and answer the following questions:</b> Zebras belong to the horse family. They have stripes all over their body. Zebras eat grass and leaves. A baby zebra is called a foal. Its mother is called a mare and father is called a stallion. Zebras have strong bodies and legs. They have big ears. They can run very fast. A big herd of zebras is made of many zebra families.</p> <p><u>A.1. Choose the correct option for the following.</u></p> <p>(i). Zebras eat _____.</p> <p>a. grass and leaves.    b. other animals    c. fruits</p> <p>(ii) A baby zebra is called a _____.</p> <p>a. mare                  b. foal                  c. cub</p> <p><u>A.2. Fill in the blanks.</u></p> <p>(iii) Zebras have big _____.</p> <p>(iv) Zebras belong to the _____ family.</p> <p><u>A.3. Answer the following question in one word.</u></p> <p>(v). What do Zebras have all over their body?</p> <p>_____</p> <p>_____</p>	5x1=5	Information												
2.	<p><b>Match the words with their opposites:</b></p> <table style="width: 100%;"><thead><tr><th style="text-align: center;"><u>Words</u></th><th style="text-align: center;"><u>Opposites</u></th></tr></thead><tbody><tr><td>(i) sad</td><td>always</td></tr><tr><td>(ii) polite</td><td>evening</td></tr><tr><td>(iii) never</td><td>happy</td></tr><tr><td>(iv) morning</td><td>goes</td></tr><tr><td>(v) comes</td><td>impolite</td></tr></tbody></table>	<u>Words</u>	<u>Opposites</u>	(i) sad	always	(ii) polite	evening	(iii) never	happy	(iv) morning	goes	(v) comes	impolite	5x0.5=2.5	Literacy skills
<u>Words</u>	<u>Opposites</u>														
(i) sad	always														
(ii) polite	evening														
(iii) never	happy														
(iv) morning	goes														
(v) comes	impolite														

3.	<b>Fill in the blanks with is/ am/ are:</b> (i) I _____ tired. (ii) They _____ not fighting. (iii) The bell _____ ringing. (iv) There _____ a child on the swing. (v) Twinkle and Sia _____ cousins.	5x0.5=2.5	<b>Problem Solving</b>
4.	<b>Answer the following questions:</b>  Q1. Who were Tia and Rohan? Ans _____ _____ _____  Q2. What did the bird tell Shaheen? _____ _____ _____  Q3. How does Tarun clean the tables? _____ _____ _____ _____	3x2=6	<b>Understanding</b>
5.	<b>Answer the following questions in one word:</b>  1. What are doing words called? _____  2. Which article do we use when a noun begins with a vowel sound? _____  3. What is 'below'? (Preposition/ Adjective) _____  4. What do we use when a noun is in singular? (has/have) _____	4x1=4	<b>Inquiry</b>



**ARMY PUBLIC SCHOOL GWALIOR**  
**CLASS - II**  
**ACADEMIC SESSION 2023-24**  
**REVISION WORKSHEET (SELF –ASSESSMENT)**



**Subject: Hindi**


**Assignment No. : 6**

**Allotment Date: 20 November 2023**

क्रम सं	प्रश्न	अंक	प्रश्न के प्रकार
प्र 1 –	<p>निम्नलिखित गद्यांश को ध्यान पूर्वक पढ़िए।</p> <p>काफी सालों पहले की बात है, गरीब राकेश अपनी बीवी और पाँच साल की बेटी टीना के साथ एक झोंपड़ी में रहा करता था। राकेश पेशे से मोची था, और दिन भर में उसकी बस इतनी ही कमाई होती थी जिससे उस दिन उसके खाने पीने की व्यवस्था हो सके।</p> <p>उपर्युक्त गद्यांश के आधार पर निम्न प्रश्नों के उत्तर दीजिए।</p> <p>१. खाली स्थान भरिए।</p> <p>क. राकेश एक ----- में रहता था।</p> <p>ख. उसकी ----- साल की बेटी थी।</p> <p>२. निम्न प्रश्नों के उत्तर दीजिए।</p> <p>क. राकेश का पेशा क्या था ?</p> <p>_____</p> <p>_____</p> <p>ख. राकेश की बेटी का क्या नाम था ?</p> <p>_____</p> <p>_____</p>	4x1=4	बोधोत्प्रेरक
प्र –2	<p>एक के अनेक लिखिए।</p> <p>१. पेंसिल - .....</p> <p>३. बगीचा - .....</p>	2x1=2	सूचनापरक
प्र-3	<p>उलटे अर्थ वाले शब्द लिखिए।</p> <p>१. बैठना x .....</p> <p>२. पीछे x .....</p>	2x1=2	गहन सोच और समस्या समाधान

<p>प्र-4</p>	<p>निम्न शब्दों के अर्थ लिखो ।</p> <p>१. फुदकना - -----</p> <p>२. हरषाती - -----</p> <p>४. बुलावा - -----</p>	<p>3x1=3</p>	<p>भाषाई कौशल</p>
<p>प्र-5</p>	<p>ज और ज़ से एक-एक शब्द लिखिए ।</p> <p>१. ज - -----</p> <p>२. ज़ - -----</p>	<p>2x1=2</p>	<p>गहन सोच</p>
<p>प्र-6</p>	<p>विशेषता बताने वाले शब्दों पर गोला लगाइए ।</p> <p>१. मेरे घर में सुन्दर बगीचा है ।</p> <p>२. गिलास में साफ़ पानी भरा है ।</p> <p>३. घर में पाँच कमरे हैं ।</p>	<p>3x1=3</p>	<p>भाषाई/ व्याकरणिक कौशल</p>
<p>प्र-7</p>	<p>नीचे दिए गए प्रश्नों के उत्तर लिखिए ।</p> <p>१. बुलबुल बच्चों को क्या खिला रही थी?</p> <p>.....</p> <p>.....</p> <p>.....</p> <p>२. पायल के माता-पिता क्यों उदास हो गए ?</p> <p>.....</p> <p>.....</p> <p>.....</p> <p>३. बच्चा तितली से क्या चाहता है ?</p> <p>.....</p> <p>.....</p> <p>.....</p> <p>४. ताई जी ने खाने के लिए क्या बनाया था?</p> <p>.....</p> <p>.....</p>	<p>4x1=4</p>	<p>विश्लेषणात्मक</p>

	..... .....		
--	----------------	--	--




**ARMY PUBLIC SCHOOL GWALIOR**  
**CLASS - II**  
**ACADEMIC SESSION 2023-24**  
**REVISION WORKSHEET (SELF –ASSESSMENT)**



Subject: Mathematics

Assignment No. : 6

Allotment Date: 20 November 2023

S. NO.	QUESTIONS	MARKS 20	NATURE
1	<b>Fill in the blanks:</b> (i). The sign of division is _____. (ii). When a number is multiplied by 0, the answer is _____. (iii). 1 metre is equal to _____ cm. (iv). An ice cream cone is an example of _____. (v). When a figure is divided into three equal parts, then each part is called _____.	5X1=5	Understanding
2	<b>Write 'True' or 'False':</b> (i). A square has all four sides equal. ( ) (ii). Subtraction is also called repeated addition. ( )	2X1=2	Analytical thinking
3	<b>Tick the correct answer from the given options:</b> (a) The standard unit of measuring length is _____. (i) millimetre (ii) meter (iii) Centimetre (iv) Kilometre  (b) Divisor $\times$ Quotient= _____. (i) Dividend (ii) Remainder (iii) Product (iv) Sum  (c) A cuboid has _____. (i) 7 faces (ii) 8 faces (iii) 6 faces (iv) 5 faces	3X1=3	Critical thinking
4	<b>Solve the following questions: -</b> (i) Colour the part(s) to show half. 	4X1=4	Interdisciplinary

(ii) Find the product of-

$$\begin{array}{r} 10 \\ \times 7 \\ \hline \end{array}$$

$$\begin{array}{r} \phantom{10} \\ \times 7 \\ \hline \end{array}$$

\_\_\_\_\_

\_\_\_\_\_

(iii) Write the multiplication fact for the following-

$$6+6+6+6= \underline{\hspace{2cm}}$$

(iv) Write one example of cylinder-\_\_\_\_\_

5

**Solve the following questions.**

(i). There are 13 flowers. Each has 3 petals. How many petals are there?

(ii). Divide 16 flowers among 4 boys by repeated subtraction.

(iii). Make a cube and mention its faces, edges and vertices.

**2X3=6**

Problem Solving

--	--	--	--





**ARMY PUBLIC SCHOOL GWALIOR**  
**CLASS - II**  
**ACADEMIC SESSION 2023-24**  
**REVISION WORKSHEET (SELF –ASSESSMENT)**

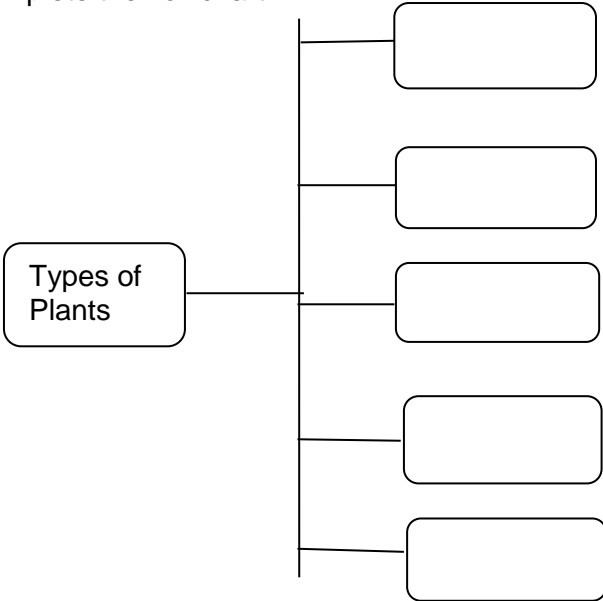


Subject: EVS

Assignment No. : 6

Allotment Date: 20 November 2023

S.NO.	QUESTIONS	MARKS 20	NATURE
1.	Tick the correct answer:  1. People who live in igloos are called _____. a. Gypsies      b. Villages      c. Eskimos  2. Cross the road when light is _____. a. Green      b. Red      c. Yellow  3. They look after our health. a. Nurse      b. Doctor      c. Both a and b  4. It is the festival of lights. a. Holi      b. Diwali      c. Eid	4X1=4	Understanding
2.	Fill in the blanks:  a) We should not touch electrical appliances with _____ hands.  b) Birthday of Mahatma Gandhi is on _____.	2X1=2	Analytical skill
3.	State whether the following statements are 'True/False'. a) E-mail is used to send an official message to your office. _____. b) The area around our house is called bank. _____	2x1=2	Analytical skill
4.	Match the following questions. A                      B a) Spices              Punjab b) Mint                  Cumin c) Baisakhi              Zebra crossing d) Safety rule              Herbs	4x0.5=2	Analytical skill
5.	Give two examples of each of the following:  a) Temporary house: _____  _____	4X1=4	Information

	<p>b) Road transport:</p> <p>_____</p> <p>_____</p>		
6.	<p>Define the following terms:</p> <p>a) Kutcha house</p> <p>_____</p> <p>_____</p> <p>_____</p> <p>_____</p> <p>b) Spices</p> <p>_____</p> <p>_____</p> <p>_____</p> <p>_____</p>	2x1=2	Observation
7.	<p>Complete the flowchart.</p>  <pre> graph LR     A[Types of Plants] --- B[ ]     A --- C[ ]     A --- D[ ]     A --- E[ ]     A --- F[ ] </pre>	2x1=2	Understanding
8.	<p>How do the plants keep the air fresh and clean?</p> <p>_____</p> <p>_____</p> <p>_____</p> <p>_____</p> <p>_____</p> <p>_____</p> <p>_____</p>	1x1=1	HOTS

9.	Why are leaves important for plants? _____ _____ _____ _____	1x1=1	Thinking and Writing Skills
----	--	-------	-----------------------------





(ii)  
track

Field and

5.

2X1=2

Informative and  
General  
Awareness

Q5. Answer the following questions in one word.




1.This marine animal has big eyes, rounded body and  
eight hands, it is an-

\_\_\_\_\_



2.This small sea animal has a shell that protects it from  
attack by other animals. It is a-

\_\_\_\_\_



**ARMY PUBLIC SCHOOL GWALIOR**  
**CLASS - II**  
**ACADEMIC SESSION 2023-24**  
**REVISION WORKSHEET (SELF –ASSESSMENT)**



**Subject: Computer**

**Assignment No. : 6**

**Allotment Date: 20 November 2023**

S.NO.	QUESTIONS	MARKS	NATURE
1.	<p><b>Tick the correct answer.</b></p> <p>(i) _____ helps us to fill colors in our drawing.</p> <p>a) Crop b) Color palette c) Skew d) Rotate</p> <p>(ii) _____ tool is used as sticker.</p> <p>a) Stamp b) Text c) Line d) Paint</p> <p>(iii) _____ is the topmost bar in Word window</p> <p>a) keyboard b) Title bar c) cursor d) None</p> <p>(iv) _____ is a small vertical flashing line on the screen where you type the text.</p> <p>a) Cursor b) Title bar c) File tab d) Ribbon</p>	4x0.5=2	Information
2.	<p><b>Fill in the blanks-</b></p> <p>a) _____ tool is used to select a part or whole drawing.</p> <p>b) _____ tool is used to paste pre-drawn images in the drawing canvas.</p> <p>c) The text appears slant if we select _____ option.</p> <p>d) _____ program is used to draw shapes, figures and cartoons</p>	2x0.5=2	Understanding

3.	<p><b>Write 'T' for True or 'F' for False against the statements:-</b></p> <p>a) Save command is present in Quick Access Toolbar.</p> <p>b) We cannot change the style, size and color of the text in Word.</p> <p>c) We can fill color in a closed shape.</p> <p>d) Paint tool is used to add stickers to the drawing.</p>	2x0.5=2	Interdisciplinary
4.	<p><b>Answer in one word / sentence.</b></p> <p>a) What is the use of stamp tool?          Ans. _____          _____          _____</p> <p>b) What is the use of Magic tool?          Ans. _____          _____          _____</p> <p>c) Why do we change font color?          Ans. _____          _____          _____</p> <p>d) Name the buttons present on Quick Access Toolbar.          Ans. _____          _____          _____</p>	4x1=4	Critical Thinking and Problem Solving