


**ARMY PUBLIC SCHOOL GWALIOR**  
**CLASS - I**  
**ACADEMIC SESSION 2023-24**  
**REVISION WORKSHEET (SELF –ASSESSMENT)**


**Subject: English**

**Assignment No. : 6**

**Allotment Date: 20 November 2023**

S.N	QUESTIONS	MARKS	SKILLS/ COMPETENCIES
Q.1	<p>Read the following passage carefully and answer the question given below.</p> <div style="text-align: center;"></div> <p>Aarti is Manu's best friend. She is getting ready to go to Manu's birthday party in the evening. It was his tenth birthday. She bought a big book of stories as a birthday gift for Manu. Aarti wants to wrap it in red colour paper. She knows that red is Manu's favourite colour. She can't find any red paper. Aarti is sad. Looking at Aarti's sad face her mother told her to wrap the gift in her red scarf ! Aarti was delighted.</p> <p>A.1 Tick (✓) the correct option from the passage:</p> <p>(i) Who is Manu's best friend?</p> <p>a. Riya <input type="checkbox"/>                      b. Aarti <input type="checkbox"/></p> <p>c. Rita <input type="checkbox"/>                        d. Meena <input type="checkbox"/></p>	5X1=5	Language and Communication, Cognitive



<p><b>Q.III</b></p>	<p><b>Fill in the blanks with is, am or are:</b></p> <ol style="list-style-type: none"> <li>1. I ..... a student.</li> <li>2. The car ..... on the road</li> <li>3. The stars ..... shining.</li> <li>4. Diya .....six years old.</li> <li>5. They ..... soldiers.</li> </ol>		
<p><b>Q.IV</b></p>	<p><b>Observe the picture given below and answer the questions followed:</b> A Park</p>  <p><b>From the given help box fill in the blanks given below:</b> [ boy, trees, park, children, slide]</p> <ol style="list-style-type: none"> <li>(i) It is a picture of a .....</li> <li>(ii) There are four big ..... in a park.</li> <li>(iii) There is one ..... in a park.</li> <li>(iv) A ..... is enjoying on a swing.</li> <li>(v) The ..... are having fun in the park.</li> </ol>	<p>5 X 1 = 5</p>	<p>Analytical</p>



**ARMY PUBLIC SCHOOL GWALIOR**  
**CLASS - I**  
**ACADEMIC SESSION 2023-24**  
**REVISION WORKSHEET (SELF –ASSESSMENT)**

**Subject: Hindi**

**Assignment No. : 6**

**Allotment Date: 20 November 2023**

सं ख्या	प्रश्न/उत्तर	अंक	प्रकृति
प्र.1	<p>आज रानी पिकनिक पर जा रही है। वह चिड़ियाघर घूमने जा रही है। वह सभी जानवरों को देखने के लिए उत्साहित है। रानी का पसंदीदा जानवर जिराफ है। वह उसकी लंबी गर्दन और धब्बों से प्यार करती है। रानी को उम्मीद है कि वह आज जिराफों को खाना खिला पाएगी। वह तस्वीरें लेने के लिए अपना कैमरा साथ लेकर जा रही है। चिड़ियाघर में रंग - बिरंगी चिड़ियों को देखना बहुत अच्छा लगता है। वहाँ बहुत से चंचल हिरन भी हैं।</p> <p><b>उपरोक्त गद्यांश के आधार पर निम्नलिखित प्रश्नों के उत्तर दीजिए।</b></p> <p><b>अ) सही वाक्य के सामने (✓) तथा गलत वाक्य के सामने (x) का निशान लगाएं:</b></p> <p>क ) रानी आज मोल देखने जा रही है। <input type="checkbox"/></p> <p>ख ) रानी को हाथी देखना अच्छा लगता है। <input type="checkbox"/></p> <p><b>ब) खाली स्थान भरो:</b></p> <p>क ) चिड़ियाघर में ----- चिड़ियों को देखना अच्छा लगता है। ( चंचल / रंग-बिरंगी )</p>	8X0.5=4	बोधात्मक







\_\_\_\_\_

प्र-6

निम्नलिखित प्रश्नों के उत्तर दीजिए - प्रश्न . मोर कहाँ सोता था?

4x1=5


उत्तर . \_\_\_\_\_

प्रश्न . लौकी के बीज के लिए पानी कौन लाया ?

उत्तर . \_\_\_\_\_

प्रश्न . मैना किससे डर गई ?

उत्तर . \_\_\_\_\_



**ARMY PUBLIC SCHOOL GWALIOR**  
**CLASS - I**  
**ACADEMIC SESSION 2023-24**  
**REVISION WORKSHEET (SELF –ASSESSMENT)**

Subject: Mathematics

Assignment No. : 6

Allotment Date: 20 November 2023

S.NO	QUESTIONS	MARKS	SKILLS																								
1.	<p><b>Add the following</b></p> <table border="1" style="display: inline-table; margin-right: 20px;"><tr><td>3</td><td>6</td></tr><tr><td>+</td><td>3</td></tr><tr><td> </td><td> </td></tr></table> <table border="1" style="display: inline-table;"><tr><td>5</td><td>0</td></tr><tr><td>+</td><td>0</td></tr><tr><td> </td><td> </td></tr></table> <p><b>Subtract the following</b></p> <table border="1" style="display: inline-table; margin-right: 20px;"><tr><td>8</td><td>5</td></tr><tr><td>-</td><td>2</td></tr><tr><td> </td><td> </td></tr></table> <table border="1" style="display: inline-table;"><tr><td>2</td><td>8</td></tr><tr><td>-</td><td>8</td></tr><tr><td> </td><td> </td></tr></table>	3	6	+	3			5	0	+	0			8	5	-	2			2	8	-	8			4×1=4	Computational skills
3	6																										
+	3																										
5	0																										
+	0																										
8	5																										
-	2																										
2	8																										
-	8																										
2.	<p>Arrange the numbers in descending order.</p> <p>.</p> <p>(i) 63, 19, 62, 48 _____</p> <p>(ii) 38, 68, 49, 74 _____</p>	5×1=2	Computational skills																								



3.	<p><b>Fill in the boxes.</b></p> <p>1. <math>4 - 2 =</math> <input type="text"/></p> <p>2. <math>2 \times 7 =</math> <input type="text"/></p> <p>3. <math>3 + 8 =</math> <input type="text"/></p> <p>4. <math>3 - 3 =</math> <input type="text"/></p> <p>5. <math>5 \times 5 =</math> <input type="text"/></p>	$5 \times 1 = 5$	Problem solving								
4	<p><b>Q3. Fill in the boxes using multiplication tables.</b></p> <p>(i) <math>4 \times \underline{\hspace{1cm}} = 8</math></p> <p>(ii) <math>\underline{\hspace{1cm}} \times 8 = 32</math></p> <p>(iii) <math>2 \times \underline{\hspace{1cm}} = 20</math></p> <p>(iv) <math>5 \times \underline{\hspace{1cm}} = 35</math></p> <p>(v) <math>\underline{\hspace{1cm}} \times 9 = 45</math></p>	$5 \times 1 = 5$	Critical thinking								
5.	<p><b>Solve the following word problems.</b></p> <p>(i) Julie has 97 pencils her friend has 25 pencils. How many toffees do they have altogether?</p> <table border="1" data-bbox="529 1625 753 1860"> <tbody> <tr> <td>T</td> <td>O</td> </tr> <tr> <td></td> <td></td> </tr> <tr> <td></td> <td></td> </tr> <tr> <td></td> <td></td> </tr> </tbody> </table>	T	O							$2 \times 2 = 4$	Problem solving
T	O										

(ii) There were 84 boys playing in the park 36 of them went home. How many boys are left now ?

T	O





**ARMY PUBLIC SCHOOL GWALIOR**  
**CLASS - I**  
**ACADEMIC SESSION 2023-24**  
**REVISION WORKSHEET (SELF –ASSESSMENT)**

**Subject: EVS**

**Assignment No. : 6**

**Allotment Date: 20 November 2023**

S.N	QUESTIONS	MARKS	NATURE
1	<p>Tick (✓) the correct option.</p> <p>(1) It is a plant product.</p> <p>a. Fruits                      b. Vegetables                      c. (a) and (b) both</p> <p>(2) We wear _____ during summer season.</p> <p>a. shorts                      b. sweater                      c. gloves</p> <p>(3) We should wear a _____ in the car.</p> <p>a. helmet                      b. seatbelt                      c. None</p> <p>(4) Tick the place of your neighbourhood.</p> <p>a. School                      b. Bank                      c. (a) and (b) both</p> <p>(5) We wear gumboots in the _____ season.</p> <p>a. winter                      b. rainy                      c. Summer</p>	5X.1=5	Information
2	<p>(a) Draw a picture of a traffic light.</p> <p style="text-align: center;"></p>	2	Aesthetic, Analytical
	<p>(b) Draw two sharp things used by the tailors.</p> <p style="text-align: center;"></p>	2X1=2	

<p><b>3</b></p>	<p>Name the following:</p> <p>1. A place to play.....</p> <p>2. A place where you go if you are sick .....</p> <p>3. A sharp object used by tailors.....</p>	<p>3X1=3</p>	<p>Interdisciplinary</p>								
<p><b>4</b></p>	<p>Match the following:</p> <table border="0" style="width: 100%;"> <tr> <td style="width: 50%;"><b>Column A</b></td> <td style="width: 50%;"><b>Column B</b></td> </tr> <tr> <td>1. Play Tabla</td> <td>108</td> </tr> <tr> <td>2. Stamps.</td> <td>Music room</td> </tr> <tr> <td>3. Ambulance</td> <td>Post office</td> </tr> </table>	<b>Column A</b>	<b>Column B</b>	1. Play Tabla	108	2. Stamps.	Music room	3. Ambulance	Post office	<p>3X1=3</p>	<p>Critical Thinking and Problem Solving</p>
<b>Column A</b>	<b>Column B</b>										
1. Play Tabla	108										
2. Stamps.	Music room										
3. Ambulance	Post office										
<p><b>5</b></p>	<p>Answer in one word:</p> <p>Q.1 Name two people who wear special uniforms. Ans. ....</p> <p>Q.2 We should cross the road at____. Ans. ....</p> <p>Q.3. Name any three animal products. Ans.....</p> <p>Q.4 In which class do you study? Ans .....</p> <p>Q.5 What is the name of your school principal? Ans. ....</p>	<p>5X1=5</p>	<p>HOTS</p>								







**ARMY PUBLIC SCHOOL GWALIOR**  
**CLASS - I**  
**ACADEMIC SESSION 2023-24**  
**REVISION WORKSHEET (SELF –ASSESSMENT)**

**Subject: G.K**

**Assignment No. : 6**

**Allotment Date: 20 November 2023**


S.N	QUESTIONS	MARKS	NATURE
1	<p><b>Fill in the blanks using given help box:</b></p> <p>( Plants, Pizza, Square, Nurse, Summer )</p> <ol style="list-style-type: none"> <li>..... takes care of patients in a hospital.</li> <li>..... is the traditional dish of Italy</li> <li>We wear cotton clothes in ..... season.</li> <li>..... need sunlight, air and water to grow</li> <li>..... shape has four corners and four sides.</li> </ol>	5X1=5	Information
2	<p><b>Recognize the picture and write the correct word:</b></p> <ol style="list-style-type: none"> <li>  <p>Rainy, Summer</p> </li> <li>  <p>Anger, Surprise</p> </li> <li>  <p>Doraemon, Mickey</p> <p>Mouse</p> </li> <li>  <p>Happiness, Fear</p> </li> </ol>	5X1=5	Interdisciplinary

5.



Cobbler,

Plumber



**ARMY PUBLIC SCHOOL GWALIOR**  
**CLASS - I**  
**ACADEMIC SESSION 2023-24**  
**REVISION WORKSHEET (SELF –ASSESSMENT)**

**Subject: Computer**

**Assignment No. : 6**

**Allotment Date: 20 November 2023**

S.NO.	QUESTIONS	MARKS	NATURE
1.	<p><b>Tick the correct answer.</b></p> <p>(i) Data is a collection of _____ words, numbers and images.</p> <p>a) Simple b) Organized c) unorganized</p> <p>(ii) Computer takes instructions from us in the form of _____.</p> <p>a) Microwave b) Memory c) Data</p> <p>(iii) _____ Tool is used to draw straight and slant lines.</p> <p>a) Oval b) Rectangle c) Line</p> <p>(iv) A mouse is a _____ device.</p> <p>a) Holding b) Pointing c) Typing</p>	4x0.5=2	Information

2.	<b>Fill in the blanks-</b> a) Computer stores the work in its _____. b) _____ is the meaningful and organized form of data. c) Enter key is also called _____ key. d) _____ tool is used to make a shape with any number of sides.	4x0.5=2	Understanding
3.	<b>Write 'T' for True or 'F' for False against the statements:-</b> a) Mouse has a larger memory than humans. b) Memory is a collection of unorganized words. c) We cannot drag pictures using a mouse. d) Colors group is at the right side of the ribbon.	4x0.5=2	Interdisciplinary
4.	Answer the following questions in one word/sentence. a) How many Alphabet keys are there on the Keyboard? Ans. _____  b) What is the use of Paint program? Ans. _____ _____ _____  c) Which tool is used to make a shape with any number of sides? Ans. _____  d) What is Data? Ans. _____ _____	4x1=4	Critical Thinking and Problem Solving