



**ARMY PUBLIC SCHOOL GWALIOR**  
**CLASS - VII**  
**ACADEMIC SESSION 2023-24**  
**WORKSHEET (SELF –ASSESSMENT)**



Subject: English

Assignment No. : 5

Allotment Date: 25 October 2023

S. No.	QUESTIONS	MARKS	NATURE
1	Write a suitable adverb to complete the sentences. 1. The umbrella was kept ..... 2. Mrs Chopra rang the bell ..... 3. Jiggy ..... Makes mistakes. 4. The child slept .....	4 Marks	Informative and understanding
2	Fill in the blanks using modals: a) ..... I go out? b) Sky is clear now but it ..... rain. c) You ..... not tease.	3 Marks	Understanding
3	Try to compose few lines of poem on Trees.	4 Marks	HOT
4	The passion of Mr. Gessler wasn't fruitful. How?	3 Marks	Interdisciplinary
5	Punctuate the following sentences using full stops and capital letters wherever appropriate. a) the man bought the newspaper, he was an avid reader of the hindus b) the mediterranean sea is a favourite holiday destination for European tourists c) jill ran up the hill with jack they needed to fetch a pail of water	3 Marks	Analytical Skill
6	Freedom is life. Write a paragraph with reference to 'Chandni'.	4 Marks	Critical Thinking
7	Answer the following questions in about 20-30 words. a) Why did the author visit the shop so infrequently? b) What was Mr Gessler's complaint against "big firms"? c) Why did Chandni refuse to join the group of wild goats?	3×2 = 6 Marks	Evaluation
8	What are the games or human activities which use trees or in which trees also 'participate'?	3 Marks	Communication Skills



ARMY PUBLIC SCHOOL GWALIOR  
CLASS - VII  
ACADEMIC SESSION 2023-24  
WORKSHEET (SELF -ASSESSMENT)




Subject: Hindi

Assignment No. : 5

Allotment Date: 25 October 2023

क्रम सं.	प्रश्न	अंक	प्रकृति
1.	निम्नलिखित शब्दों का अर्थ लिखिए— बेचैन, ढब, ताना, झिझक, मिश्रित, विविधता, फ़र्क, वंचित।	0.5x8=4	सूचनात्मक संचार कौशल (Informative Communication Skills)
2.	निम्नलिखित प्रश्नों के उत्तर लिखिए— (क) खानपान के मामले में स्थानीयता का क्या अर्थ है? (ख) आँख में तिनका पड़ने के बाद घमंडी की क्या दशा हुई? (ग) घमंडी की आँख से तिनका निकालने के लिए उसके आसपास लोगों ने क्या किया? (घ) खानपान की मिश्रित संस्कृति से लेखक का क्या मतलब है?	4	गंभीर सोच और समस्या समाधान (Critical Thinking and Problem Solving)
3.	(क) यक्ष ने युधिष्ठिर से कितने प्रश्न किए? (ख) संसार में सबसे बड़े आश्चर्य की बात क्या है? (ग) कीचक का वध किसने किया? (घ) सूर्यदेव ने अक्षयपात्र किसे दिया था?	4	अंतःविषयी (Interdisciplinary)
4.	निम्नलिखित विषयों में से किसी एक पर लगभग 60-80 शब्दों में अनुच्छेद लिखिए— (i) अभ्यास का महत्व (ii) मेरे विद्यालय का पुस्तकालय	5	समझ (Understanding)
5.	निम्नलिखित विषयों में से किसी एक विषय पर पत्र लिखिए— (i) स्वस्थ रहने के उपाय बताते हुए अपनी छोटी बहन को पत्र। (ii) कुसंगति से बचकर रहने के लिए शिक्षा देते हुए अपने छोटे भाई को पत्र।	5	मूल्यांकन (Evaluation)

6.	निम्नलिखित संज्ञा शब्दों से विशेषण बनाइए— (i) मिठास (ii) स्वाद (iii) घाव (iv) कल्पना	1x4=4	विश्लेषणात्मक (Analytical)
7.	निम्नलिखित क्रिया शब्दों से वाक्य बनाइए— (i) पढ़ना - ..... (ii) जीतना - ..... (iii) सुनना - ..... (iv) माँगना - .....	1x4=4	विश्लेषणात्मक (Analytical)



**ARMY PUBLIC SCHOOL GWALIOR**  
**CLASS - VII**  
**ACADEMIC SESSION 2023-24**  
**WORKSHEET (SELF –ASSESSMENT)**

**Subject: Mathematics**

**Assignment No. : 5**

**Allotment Date: 25 October 2023**

S. No.	QUESTIONS	MARKS	NATURE
1	A rational number can be represented in the form of: (a) $p \times q$ (b) $\frac{p}{q}$ (c) $p + q$ (d) $p - q$	1	Informative
2	What is the standard form of the rational number $\frac{14}{-8}$ ? (a) $\frac{14}{8}$ (b) $-\frac{7}{8}$ (c) $\frac{7}{4}$ (d) $-\frac{7}{4}$	1	Informative
	Write a rational number equivalent to $\frac{3}{8}$ . (a) $\frac{1}{4}$ (b) $\frac{8}{3}$ (c) $\frac{6}{16}$ (d) $\frac{6}{9}$	1	Understanding
4	If $\frac{p}{q}$ is a rational number, then q can't be _____ (a) 1    (b) 0    (c) -1    (d) none of these	1	Informative
5	Two rational numbers are equal if they have the same _____ form. (a) Denominator    (b) numerator    (c) standard form    (d) None	1	Understanding
6	Which one of the following is not an equivalent rational number of $\frac{3}{7}$ ? (a) $\frac{6}{21}$ (b) $\frac{9}{21}$ (c) $\frac{12}{28}$ (d) $\frac{6}{14}$	1	Analytical
7	Additive inverse of $-\frac{7}{9}$ is _____. (a) $-\frac{7}{9}$ (b) $-\frac{9}{7}$ (c) $\frac{7}{9}$ (d) $\frac{9}{7}$	1	Problem solving
8	The rational number $\frac{-11}{-12}$ lies in between _____ two integers on the number line. (a) 1 and 2    (b) 0 and 1    (c) -1 and -2    (d) 0 and -1	1	Critical Thinking
9	Which of the following rational numbers is equal to its reciprocal? (a) 1    (b) 2    (c) $\frac{1}{2}$ (d) 0	1	Informative

10	Subtract $-\frac{3}{7}$ from $-\frac{5}{8}$ .	2	Problem solving
11	Arrange the rational numbers $-\frac{7}{10}, \frac{5}{-8}, \frac{2}{-3}$ in the ascending order.	2	Construction
12	By what number should we multiply $-\frac{15}{11}$ , so that the product may be 15.	2	Analytical
13	The cost of $4\frac{1}{2}$ meters of cloth is Rs. $85\frac{1}{2}$ , find the cost of one meter cloth.	3	Understanding
14	Simplify $(-\frac{5}{8} \times \frac{3}{7} \times \frac{4}{-15}) + (\frac{4}{7} \times \frac{-2}{18})$ .	3	Problem Solving
15	If $\frac{a}{b}$ and $\frac{c}{d}$ are two rational numbers then product is $\frac{a \times c}{b \times d}$ . Then find the  (i) multiply: $\frac{4}{-9}, -\frac{3}{12}$  (ii) multiply: $\frac{1}{6}, \frac{4}{-7}$  (iii) difference of value of part (i) and (ii).	1+1+2=4	Case Study
16	Subtract the sum of $-\frac{5}{6}$ and $-\frac{13}{5}$ from the sum $2\frac{2}{3}$ and $-6\frac{2}{5}$ .	5	Problem Solving



**ARMY PUBLIC SCHOOL GWALIOR**  
**CLASS - VII**  
**ACADEMIC SESSION 2023-24**  
**WORKSHEET (SELF –ASSESSMENT)**




**Subject: Science**

**Assignment No. : 5**

**Allotment Date: 25 October 2023**

S.NO.	QUESTIONS	MARKS	NATURE
Q1.	<ul style="list-style-type: none"><li>• Multiple choice questions</li></ul> <ol style="list-style-type: none"><li>1. During the process of exhalation, the ribs move<ol style="list-style-type: none"><li>a) Down and inwards</li><li>b) Up and inwards</li><li>c) Down and outwards</li><li>d) Up and outwards</li></ol></li><li>2. Earthworm and frog breathe through their skin because of<ol style="list-style-type: none"><li>a) Moist and rough</li><li>b) Dry and rough</li><li>c) Dry and slimy</li><li>d) Moist and slimy</li></ol></li><li>3. Aquatic animals like fish excrete their wastes in gaseous form as<ol style="list-style-type: none"><li>a) Oxygen</li><li>b) Hydrogen</li><li>c) Ammonia</li><li>d) Nitrogen</li></ol></li><li>4. In desert plants, photosynthesis is a function of<ol style="list-style-type: none"><li>a) Stem</li><li>b) Leaves</li><li>c) Roots</li><li>d) Fruits</li></ol></li><li>5. The type of blood cell which prevents the flow of blood after an injury is<ol style="list-style-type: none"><li>a) WBC</li><li>b) RBC</li><li>c) Hemolymph</li><li>d) Platelets</li></ol></li></ol>	1X5=5	Information

Q2.	<ul style="list-style-type: none"> <li>Fill in the blanks</li> </ul> <ol style="list-style-type: none"> <li>Blood is red in colour due to the presence of a pigment called_____</li> <li>The _____ cells in our body fight against germs</li> <li>The accumulation of _____ causes muscle cramps</li> <li>Frogs breath both by _____ and _____</li> <li>_____ gas is released when human beings respire</li> </ol>	1x5=5	Observation										
Q3.	<ul style="list-style-type: none"> <li>Match the following</li> </ul> <table border="0" style="width: 100%;"> <tr> <td style="width: 50%;">1. Spiracles</td> <td>Transport of water</td> </tr> <tr> <td>2. Moist skin</td> <td>Absorption of water</td> </tr> <tr> <td>3. Xylem</td> <td>Transport of food</td> </tr> <tr> <td>4. Root hair</td> <td>Cockroach</td> </tr> <tr> <td>5. Phloem</td> <td>Frog</td> </tr> </table>	1. Spiracles	Transport of water	2. Moist skin	Absorption of water	3. Xylem	Transport of food	4. Root hair	Cockroach	5. Phloem	Frog	1x5=5	Knowledge based
1. Spiracles	Transport of water												
2. Moist skin	Absorption of water												
3. Xylem	Transport of food												
4. Root hair	Cockroach												
5. Phloem	Frog												
Q4.	<ul style="list-style-type: none"> <li>Answer the following question in one or two sentence.</li> </ul> <ol style="list-style-type: none"> <li>Define anaerobes give examples?</li> <li>Differentiate between transport of substances through xylem and phloem</li> </ol>	2x2=4	Analysis										
Q5.	<ul style="list-style-type: none"> <li>Answer the following question in 20-30 words.</li> </ul> <ol style="list-style-type: none"> <li>What is Transpiration?</li> <li>What is respiration without oxygen called? How do plants take in air?</li> </ol>	2x3=6	Evaluation										
Q6.	<ul style="list-style-type: none"> <li>Answer the following question 30-40 words.</li> </ul> <ol style="list-style-type: none"> <li>Why does an athlete breath faster during running?</li> </ol>	1x5=5	Higher order thinking										



**ARMY PUBLIC SCHOOL GWALIOR**  
**CLASS - VII**  
**ACADEMIC SESSION 2023-24**  
**WORKSHEET (SELF –ASSESSMENT)**



Subject: Social Science

Assignment No. : 5

Allotment Date: 25 October 2023

S. NO	QUESTIONS	MARKS	NATURE
1.	<b>Fill in the blank :</b> (a) The new castes emerging within varnas were called _____. (b) _____ were historical works written by the Ahoms. (c) The _____ mentions that Garha Katanga had 70,000 villages. (d) As tribal states became bigger and stronger, they gave land grants to _____ and _____. (e) As tribal states became bigger and stronger, they gave land grants to _____ and _____. (f) Shankara was an advocate of _____. (g) Ramanuja was influenced by the _____. (h) _____, _____ and _____ were advocates of Virashaivism.	08	Information and understanding
2.	What kinds of exchanges took place between nomadic pastoralists and settled agriculturists?	3	HOTS
3.	Describe the beliefs and practices of the Nathpanthis, Siddhas and Yogis.	3	Analytical skill
4.	Why do you think many teachers rejected prevalent religious beliefs and practices?	3	Communication Skill
5.	In what ways was the history of the Gonds different from that of the Ahoms? Were there any similarities?	5	Critical Thinking And problem Solving



<p><b>6.</b></p>	<p>Can you describe two methods of struggle that the women movements used to raise issues? If you had to organize a struggle against stereotypes, about what women can or cannot do, what method would you employ from the ones that you have read about? Why would you choose this particular method?</p>	<p><b>5</b></p>	<p><b>Inter disciplinary</b></p>
<p><b>7</b></p>	<p>As a class project, decide to focus on a particular news topic and cut out stories from different newspapers on this. Also, watch the coverage of this topic on TV news, compare two newspapers and write down the similarity – and differences in their reports. It might help to ask the following questions:  (a) What information is this article providing?  (b) What information is it leaving out?  (c) From whose point of view is the article being written?  (d) Whose point of view is being left out and why?</p>	<p><b>5</b></p>	<p><b>Evaluation</b></p>



ARMY PUBLIC SCHOOL GWALIOR  
CLASS - VII

ACADEMIC SESSION 2023-24  
WORKSHEET (SELF -ASSESSMENT)



Subject: Sanskrit


Assignment No. : 5

Allotment Date: 25 October 2023

Note: Do the answer in the given space only.

S. NO.	QUESTIONS	MARKS	NATURE
1.	प्रश्न 1. एकपदेन उत्तरत-  (क) दर्शना सह द्वारे का तिष्ठति स्म? ..... (ख) दर्शनायाः पतिः कीदृशः अस्ति? ..... (ग) अद्यत्वे शिक्षा केषां अधिकारः? ..... (घ) गिरिजायाः गृहसेविकायाः नाम किमासीत्? ..... (ङ) दर्शनायाः पुत्री कथं नृत्यति? .....	1*5= 5	Informative Skills
2.	सन्धिविच्छेदं पूरयत-  (क) ग्रामं प्रति = ग्रामम्+..... (ख) कार्यार्थम् = ..... +अर्थम् (ग) करिष्यत्येषा = करिष्यति +..... (घ) अप्येवम् = अपि+ ..... (ङ) स्वोदरपूर्ति = ..... +उदरपूर्ति	1*5=5	Thinking skill
3.	समानार्थकपदानि मेलयत- आश्चर्येण पठनस्य परिवारस्य प्रसन्नतया कालः कुटुम्बकस्य उल्लासेन समय अध्ययनस्य विस्मयेन	1*5=5	Understanding
4.	कोष्ठकात् समुचितं पदं चित्वा रिक्तस्थानानि पूरयत-  (क) ..... नमः। (हरिं, हरिये) (ख) ..... परितः कृषिक्षेत्राणि सन्ति। (ग्रामम्, ग्रामस्य) (ग) ..... नमः। (अम्बायाः, अम्बायै) (घ) ..... उपरि अभिनेता अभिनयं करोति। (मञ्चस्य, मञ्चम्) (ङ) ..... उभयतः पुत्रौ स्तः। (पितरम्, पितुः)	1*5=5	Analytical skill

5.	निम्न-अव्ययपदानि तेषां विपरीतार्थकैः सह मेलयत-  (क) अधः (ख) उच्चैः (ग) अद्य (घ) अत्र (ङ) अन्तः	बहिः तत्र नाचैः उपरि शवः	1*5=5	Critical thinking
6.	रेखाङ्कितपदानि अधिकृत्य उपसर्गपदं चित्वा लिखत।  (क) सः <u>अनुसरति</u> । (ख) जलम् <u>अवगच्छति</u> । (ग) सः <u>अनुस्मरति</u> । (घ) सः <u>आकलयति</u> । (ङ) सः <u>उत्सहते</u> ।	..... ..... ..... ..... .....		Memory skill



**ARMY PUBLIC SCHOOL GWALIOR**  
**CLASS - VII**  
**ACADEMIC SESSION 2023-24**  
**WORKSHEET (SELF –ASSESSMENT)**

Subject: Computer

Assignment No. : 5

Allotment Date: 25 October 2023

S.NO	QUESTIONS	MARKS-10	NATURE
1	Choose and write the correct option (MCQ):-	0.5x5=2.5	Information
i)	_____ is a popular Windows image format.  a) BMP  b) PICT		
ii)	When we open an image in Photoshop, it appears as a _____layer in Layers palette.  a) Foreground  b) Background		
iii)	We can hide a layer to _____remove elements in that layer from view.  a) temporarily b) permanently		
iv)	_____is the opposite of transparency.  a) Blend b) Color c) Opacity		
v)	_____a layer allows us to keep the rest of our image unchanged.  a) Merging b) Transforming c) Stacking		

2	<p>Fill in the blanks-</p> <p>a) _____ is a popular Macintosh image format.</p> <p>b) _____ are the key components to work with graphic objects in Photoshop.</p> <p>c) _____ Layers combine all the layers of an image into one background layer.</p> <p>d) By decreasing the _____ of a layer, its transparency increases.</p> <p>e) _____ modes specify how pixels in a layer should blend with the layers.</p>	0.5x 5=2.5	Understanding
3.	<p>Write 'T' for True and 'F' for False statements.</p> <p>a) We cannot combine, duplicate and hide layers in Photoshop.</p> <p>b) Layered Photoshop files act like several images combined into one.</p> <p>c) Photoshop image editor has one blending mode.</p>	0.5x3=1.5	Understanding
4.	<p><b>Answer the following questions:-</b></p> <p>a) What are layers in Photoshop?</p> <p>b) What is the use of hiding a layer?</p> <p>c) What is the use of renaming a layer?</p> <p>d) What do you mean by transforming a layer?</p> <p>e) What do you mean by blending modes of layer?</p> <p>f) Name the various tasks that you can do with layers.</p> <p>g) Differentiate between Merge layer and Flatten Layer.</p>	0.5 x 7=3.5	Evaluation




**ARMY PUBLIC SCHOOL GWALIOR**  
**CLASS - VII**  
**ACADEMIC SESSION 2023-24**  
**WORKSHEET (SELF –ASSESSMENT)**



**Subject: Subject: Music and Dance (Vocal & Instrumental)**

**Assignment No. : 5**

**Allotment Date: 25 October 2023**

S. NO.	QUESTIONS	MARKS	NATURE
1.	katthak is dance of which state? A) Uttar Pradesh B) Lucknow	1	Informative
2.	How many types of shastriya dance are there? A) Eight B) Seven	1	Informative
3.	Bharatnatyam is a dance of which state. A) Tamilnadu B) Rajasthan	1	Informative
4.	which one of there picture is odishi dance?  	1	Informative
5	How many beats (matra) in jhap taal?  A) 10	1	Informative

	B) 6		
6.	How many tali in jhap taal? A) 3 B) 4	1	Informative
7.	How many khali in jhap taal ? A) 3 B) 1	1	Informative
8.	How many vibhag in jhap taal? A) 2 B) 4	1	Informative
9.	What is the bhajan ? A) Devotional song. B) patriotic song.	1	Informative
10.	Which musical instrument is commonly used in traditional devotional bhajans? A) Flute B) Guitar	1	Informative



**ARMY PUBLIC SCHOOL GWALIOR**  
**CLASS - VII**  
**ACADEMIC SESSION 2023-24**  
**WORKSHEET (SELF –ASSESSMENT)**



Subject: ATL

Assignment No. : 5

Allotment Date: 25 October 2023

S. NO.	QUESTIONS	MARKS	NATURE
1.	Choose the correct answer.		
A)	What is Design Thinking?  a. A process for creating software applications b. A creative problem-solving approach c. A design methodology for industrial products d. A project management methodology	1	Understanding
B)	Which of the following is not a stage in the Design Thinking process?  a. Empathize b. Define c. Ideate d. Appraise	1	Understanding
C)	What is the first stage in the Design Thinking process?  a. Define b. Ideate c. Empathize d. Prototype	1	Understanding
D)	Which stage of the Design Thinking process involves generating a large quantity of ideas?  a. Empathize b. Define c. Ideate d. Prototype	1	Understanding



<b>2.</b>	<b>State whether these statements are true or false.</b>		
<b>A)</b>	To solve complex problems is the goal of Design Thinking?	<b>1</b>	<b>Analytical Thinking</b>
<b>B)</b>	Design Thinking is a Linear Process?	<b>1</b>	<b>Understanding</b>
<b>C)</b>	One needs to have professional training in design to become a design thinker.	<b>1</b>	<b>Understanding</b>
<b>3.</b>	<b>Fill in the blanks.</b>		
<b>A)</b>	In Design Thinking, the process of creating a tangible representation of ideas is known as _____.	<b>1</b>	<b>Understanding</b>
<b>B)</b>	To understand the users and their needs is the primary purpose of the _____ stage in Design Thinking.	<b>1</b>	<b>Understanding</b>
<b>C)</b>	_____ stage in the Design Thinking process involves defining the problem statement based on the user's needs.	<b>1</b>	<b>Understanding</b>



**ARMY PUBLIC SCHOOL GWALIOR**  
**CLASS - VII**  
**ACADEMIC SESSION 2023-24**  
**WORKSHEET (SELF –ASSESSMENT)**



**Subject: Work Education**

**Assignment No. : 5**

**Allotment Date: 25 October 2023**

S. No.	QUESTIONS	MARKS	NATURE
1	What are the elements of color?	2	Informative
2	What is color in design elements?	2	Informative
3	Why is color important in art?	2	Understanding
4	What is the Lippan art theory?	2	Informative
5	What is the origin of Lippan art?	2	Understanding



**ARMY PUBLIC SCHOOL GWALIOR**  
**CLASS - VII**  
**ACADEMIC SESSION 2023-24**  
**WORKSHEET (SELF –ASSESSMENT)**


Subject: Yoga

Assignment No. : 5

Allotment Date: 25 October 2023

QUESTIONS	MARKS	SKILLS
<p><b>Fill in the blanks</b></p> <p>1]Asana has the meaning _____ in Yoga[posture/unstable].</p> <p>2]Padmasana is a _____ Asana[standing/sitting].</p> <p>3] _____ is also known as Eagle pose [ matsyasana/ garudasana]</p>	3X1=3	INFORMATIVE
<p><b><u>True and False:</u></b></p> <p>1. Asana is a Sanskrit word meaning “posture,” “seat,” or “place.”.</p> <p>2. An asana can be performed as a still and static position.</p> <p>3. Asanas stabilises the core muscles .</p>	3X1=3	CRITICAL  THINKING
<p><b>Multiple Choice Questions:</b></p> <p>1] <i>Tree pose is known as?</i></p> <p>A] Padmasana</p> <p>B] Vrikshasana</p> <p>C] Both</p> <p>D] None</p> <p>2] Asanas can be of _____ types?</p>	4X1=4	ANALYTICAL  THINKING

<p>A] Sitting B] Standing C] Both D] None</p> <p>3] Mountain pose is known as ? A] Garudasana B] Tadasana C] Halasana D] All of these</p> <p>4] Asanas have the following benefits? A] Flexibility B] Fatigue C] Both D] None of these</p>		
--	--	--



**ARMY PUBLIC SCHOOL GWALIOR**  
**CLASS - VII**  
**ACADEMIC SESSION 2023-24**  
**WORKSHEET (SELF –ASSESSMENT)**

Subject: Karate  
Allotment Date: 25 October 2023

Assignment No. : 5

S.N	QUESTIONS	Point
1.	<p>How many parts of karate ?</p> <p>A. 2 B. 3 C. 4 D. 6</p>	1X10=10
2.	<p>What is the Japanese name of tap punch?</p> <p>A.. Gyaku tsuki B.. Tsuki C. Uke D. Gaidan Tsuki</p>	
3.	<p>What is the measurement of kumite competition area?</p> <p>A. 8 Meter B. 6 Meter C. 5 Meter D. 10 Meter</p>	
	<p>..... point is awarded by tap punch?</p>	

4.	A. 1 B. 2 C. 4 D. 5	
<b>FILL IN THE BLANKS</b>		
	..... point is score by any punch attack .(1,2)	
5.	Flying migari is used for self defence and .....(scoring,demonstration)	
6	Japaneese name of triple punch is .....(sanbon tsuki,nidan tsuki )	
<b>TRUE AND FALSE</b>		
7.	Dojo is the name of karate training place.  Mae gari is the japanese name of flying maegari.	
8.	Sensei is the japanese name of chief instructor.	
9.		
10.		



**ARMY PUBLIC SCHOOL GWALIOR**  
**CLASS - VII**  
**ACADEMIC SESSION 2023-24**  
**WORKSHEET (SELF –ASSESSMENT)**



Subject: Health and Physical Education  
Allotment Date: 25 October 2023

Assignment No. : 5

S.NO	MULTIPLE CHOICE QUESTIONS(QUESTION 1 TO 4)	SKILLS	MARKS:- 1X10=10
1.	1. What is the height of lower edge of board from the floor? A. 3.12 m. B. 4 m. C. 2.90 m. D 2.5 m.	Problem-solving	1
2.	2. What is the radius of center circle of basketball court? A. 1.80 m. B 1.15 m C 2.15 m D 3.15 m.	Initiative	1
3.	What is the weight of basketball? A. 600 to 650 gm. B. 750to 850 gm. C. 800 to 850 gm. D 900 to 950 gm.	Problem-solving	1
4.	What is the circumference of basketball? A. 58 to 60 cm. B. 40 to 45 cm. C. 75 to 78 cm. D. 35 to 38 cm.	Initiative	1
5.	<b>Fill in the blanks ( question 5 to 7)</b> Players may only hold the ball for__ second. (3 seconds, 4 seconds)	Leadership	1
6.	Breadth of boundary lines of basketball court _____? ( 5 cm , 3 cm)	Thinking	1
7.	_____height of lower edge of board from floor. (2.90 m., 3.10 m.)	Self-regulation	1

8.	<b>True &amp; False (question 8 to 10 )</b>  There are 7 substitute players in basketball team. A True B. False	Initiative	1
9.	Over arm pass is a terminology of basketball.  A. True B. False	Thinking	1
10.	There are 5 players in basketball team A. True B. False	Problem-solving	1