



ARMY PUBLIC SCHOOL GWALIOR
CLASS - V
ACADEMIC SESSION 2023-24
WORKSHEET (SELF –ASSESSMENT)



Subject: English

Assignment No. : 5

Allotment Date: 25 October 2023

S. NO.	QUESTIONS	MARKS	NATURE
1.	<p>Read the following stanza of the poem and answer the following questions:</p> <p>'Matilida Jane, you never look At any toy or picture-book, I show you pretty things in vain- You must be blind, Matilida jane!</p> <p>1) Tick the correct answer.</p> <p>i) Above stanza is from which poem? (a) Don't be afraid of the dark (b) A good play (c) Bessie's song to her doll (d) Trees are the kindest things</p> <p>ii) The poet of the poem is----- (a) Lewis Carroll (b) Harry Behn (c) Ruskin Bond (d) R.L.Stevenson</p> <p>2) Fill in the blank: a) Matilda Jane is a</p> <p>b) In this poem, a little girl, is speaking to her doll.</p>	3 marks	Reading and Understanding Skills

	<p>3) Write the rhyming words of the given words from the above stanza.</p> <p>a) look - _____</p> <p>b) vain - _____</p>		
2.	<p>Make sentences using following words:</p> <p>(i) Renowned-.....</p> <p>.....</p> <p>(ii) luscious-</p> <p>.....</p>	2 marks	Critical thinking
3.	<p>Fill in the blanks:</p> <p>(i) Ratnesh bought afor his father.</p> <p>(ii) Andrew had planned to go with his friends to pluck</p> <p>(iii) Mrs Jones lived in a</p>	3 marks	Understanding and Analytical skills
4.	<p>Answer the following question:</p> <p>(i) What would you do if your parents asked you to do some urgent work during your playtime? Give reason in support of your decision.</p> <p>_____</p> <p>_____</p> <p>_____</p> <p>_____</p>	2	HOTS
5.	<p>Answer the following questions in short.</p> <p>Q1. What did Andrew's mother ask him to do?</p> <p>.....</p>	2	Evaluation

	<p>.....</p> <p>.....</p> <p>.....</p> <p>Q2. What did grandma prepare for lunch on the first day of Raj's stay in Kolkata?</p> <p>.....</p> <p>.....</p> <p>.....</p> <p>.....</p>		
<p>6.</p>	<p>GRAMMAR</p> <p>Identify the tense used in the following sentences:</p> <p>(i) Ritesh plays football.</p> <p>(ii) Birds are flying to their nests.</p> <p>(iii) He was folding all the clothes.</p> <p>(iv) I had eaten my food yesterday.</p>	<p>4 marks</p>	<p>Interdisciplinary</p>
<p>7.</p>	<p>Write a letter to your friend congratulating him/her on his/her success.</p>	<p>4 marks</p>	<p>Communication skill</p>



ARMY PUBLIC SCHOOL GWALIOR
CLASS - V
ACADEMIC SESSION 2023-24
WORKSHEET (SELF –ASSESSMENT)




Subject: Hindi

Assignment No. : 5

Allotment Date: 25 October 2023

क्रम सं.	प्रश्न	अंक	प्रकृति
1.	निम्नलिखित शब्दों का अर्थ लिखिए— सूत्र - गगन - उर - शोभा - गुंजन - खिन्न..... - आजीविका - पौत्र -	0.5x 8=4	सूचनात्मक संचार कौशल)Informative Communication Skills)
2.	निम्नलिखित प्रश्नों के उत्तर दीजिए— (क (उपवन की शोभा किनसे होती है?)ख (दोबारा पानी लेने पर गांधी जी खिन्न क्यों हुए ?) ग (खद्वर किसे कहते हैं ?) घ (फूल क्या कहना चाह रहे हैं?	1 x 4=4	गंभीर सोच और समस्या समाधान)Critical Thinking and Problem Solving)
3.	निम्नलिखित प्रश्नों में से किसी एक प्रश्न का उत्तर दीजिए—)क) प्रकृति) फूल, पत्ते, पेड़, चिड़िया (हमें क्या-क्या सिखाती है?)ख) हस्तशिल्प और कुटीर उद्योगों को बढ़ावा देकर आप कैसे लोगों की सहायता करते हैं?	1 x 5=5	अंतःविषयी)Interdisciplinary)
4.	सही विकल्प का चयन कीजिए —)क (गांधी जी नेहरू जी के साथ किस शहर में थे ?) i) गुजरात में) ii) इलाहाबाद में)iii) पंजाब में) iv) दिल्ली में (ख) गांधी जी उत्तर प्रदेश की यात्रा पर किसे साथ ले गए थे) को) ii) मनु को) iii) कांति को) iv) सुबैया कोक) एक हमारा माली से तात्पर्य है) -i) उत्पन्न करने वाला) ii) स्वामी) iii) देखभाल करनेवाला) iv) माला पहननेवाला	1 x 3=3	समझ)Understanding)

5.	विशेषण और विशेष्य के सही जोड़े बनाइए— <table style="width: 100%; border: none;"> <tr> <td style="width: 50%;">विशेषण</td> <td style="width: 50%;">विशेष्य</td> </tr> <tr> <td>हमारा</td> <td>जल</td> </tr> <tr> <td>निर्मल</td> <td>आँखें</td> </tr> <tr> <td>कठोर</td> <td>विद्यालय</td> </tr> <tr> <td>रंगीन</td> <td>हृदय</td> </tr> <tr> <td>बड़ी-बड़ी</td> <td>पेंसिलें</td> </tr> </table>	विशेषण	विशेष्य	हमारा	जल	निर्मल	आँखें	कठोर	विद्यालय	रंगीन	हृदय	बड़ी-बड़ी	पेंसिलें	1x5=5	मूल्यांकन)Evaluation)
विशेषण	विशेष्य														
हमारा	जल														
निर्मल	आँखें														
कठोर	विद्यालय														
रंगीन	हृदय														
बड़ी-बड़ी	पेंसिलें														
6.	निम्नलिखित संज्ञा शब्दों से विशेषण बनाकर लिखिए— भारत - जंगल - दया - उपकार -	1x5=5	विश्लेषणात्मक)Analytical)												
7.	निम्नलिखित क्रियाओं से वाक्य बनाइए— तैरना..... - कूदना..... - हँसना - पढ़ना -	1x4=4	समझ)Understanding)												



ARMY PUBLIC SCHOOL GWALIOR
CLASS - V
ACADEMIC SESSION 2023-24
WORKSHEET (SELF –ASSESSMENT)



Subject: Mathematics

Assignment No. : 5

Allotment Date: 25 October 2023

S. NO.	QUESTIONS	MARKS	NATURE
1	Fill in the blanks. (a) $6 + 6 - 6 \div 6 \times 6 =$ _____ (b) $15 \times 5 - 60 \div 5 =$ _____ (c) $21 \div 7 + 16 - 5 \times 3 =$ _____ (d) $5 \times 50 + 57 - 57 \div 57 =$ _____ (d) $83.751 \div 1000 =$ _____	4x0.5=2	Understanding
2	State 'True' or 'False' for following statements. (a) $8 \times 9 \div 9 = (8 \times 9) \div 9$ (b) $45 \div 3 \times 5 = 45 \div (3 \times 5)$ (c) $15 \times 2 + 120 \div 20 - 8 < 15 \times 2 + 120 \div (20 - 8)$	1 x 3 =3	Interpretation
3	Tick the correct answer from the given options: 1 Which of the following operation is performed first in simplifying a numerical expression? [a] \div [b] \times [c] $+$ [d] $-$ 2. $8 \times 8 - 8 =$ [a] 0 [b] 1 [c] 56 [d] 64 3. Which of the following is simplified first? [a] Square bracket [b] Round bracket [c] Curly bracket [d] Bar	1x3=3	logical thinking
4	Solve the following questions: - Solve the following: (i) Simplify: (a) $[(64 - (12 + 13)) \div 3] + 15$ (ii) Find the value of $19.9 - 6.4 + 1.2 \times 1 + 8.6$. (iii) Solve 2.8×15.6 of $0.4 \div 4$	2x3=6	Interdisciplinary
5	What will be the numerical expression for: (a) Divide 108 by the product of 4 and 3. (b) Product of difference of 237 and 73 and the sum of 10 and 11. (c) Add 16 to 7 times the difference of product 10 and 5	2x3 =6	Problem Solving



ARMY PUBLIC SCHOOL GWALIOR
CLASS - V
ACADEMIC SESSION 2023-24
WORKSHEET (SELF –ASSESSMENT)



Subject: EVS

Assignment No. : 5

Allotment Date: 25 October 2023

S. NO.	QUESTIONS	MARKS	NATURE
Q1	<p>Fill in the blank</p> <p>I. Pasteurisation is method to preserve _____</p> <p>II. _____ is an method of preservation?</p>	2x0.5=1	Information
Q2	<p>Choose the correct option.</p> <p>1. High cost houses in villages are called-----</p> <p>a. Havelis</p> <p>b. Bungalows</p> <p>c. Multi storeyed apartment</p> <p>d. 2. Houseboats are found in..</p> <p>a. Kerala</p> <p>b. Kashmir</p> <p>Both a and b</p>	2X1=2	Understanding

	<p>1. High cost houses in villages are called-----</p> <p>A. Havelis B. Bungalows C. Multi storeyed apartment</p> <p>2. Houseboats are found in..</p> <p>A.Kerala B.Kashmir C. Both a and b</p>		
Q3	<p>Why is it important for children to live in a good, clean & happy neighbourhood?</p> <p>_____</p> <p>_____</p>	1X2=2	HOT
Q4	<p>i. Describe the various types of bees in a beehive?</p> <p>_____</p> <p>_____</p> <p>ii. Why does food get spoilt?</p> <p>_____</p> <p>_____</p>	2x2=4	Interdisciplinary
Q5	<p>i. Write any two differences between houses in cold and hot places.</p> <p>_____</p> <p>_____</p>	3x2=6	Analytical Skill

	<p>ii. What do you understand by pasteurisation ?</p> <hr/> <hr/> <p>iii Write any two differences between house boats and Caravans ?</p> <hr/> <hr/>		Evaluation
Q 6.	<p>i. List any three ways to control wastage of food?</p> <p>ii. Name largest slum of the world ?</p> <p>iii. What are key points to build our homes ?</p> <p>iv. Give example of some public property?</p> <p>v. What do social insects teach us ?</p> <hr/> <hr/>	5x1=5	Comprehension



ARMY PUBLIC SCHOOL GWALIOR
CLASS - V
ACADEMIC SESSION 2023-24
WORKSHEET (SELF –ASSESSMENT)



Subject: Computer

Assignment No. : 5

Allotment Date: 25 October 2023

S.NO.	QUESTIONS	MARKS	NATURE
1.	<p>Tick the correct answer:</p> <ol style="list-style-type: none">The number of rows in a single worksheet is _____.<ol style="list-style-type: none">105638410485761084756_____ bar shows the name of the opened workbook file.<ol style="list-style-type: none">FormulaTitleStatusBy default, Excel workbook are saved with _____ file extension.<ol style="list-style-type: none">.xls.xlsx.xlssThe Excel workbook contains sheets called _____.<ol style="list-style-type: none">WorksheetWorkbookSheet tab	0.5X4=2	Information
2.	<p>Write 'T' for True and 'F' for False statements.</p> <ol style="list-style-type: none">By default, workbook contains two worksheets in Excel 2016.Formula bar shows the formula we are using in last selected cell.Excel provides access to three different views of the worksheet.Excel automatically left-aligns the text data and right-aligns the numbers in a cell.	0.5X4=2	Interdisciplinary
3.	<p>Fill in the blanks.</p> <ol style="list-style-type: none">The intersection of a column and a row is called _____.There are _____ columns and _____ rows in a single worksheet.The cell reference of an active cell is displayed in the _____._____ is used to enter and edit formulas, and perform calculation on worksheet data.	0.5X4=2	Analytical Skill
4.	<p>Answer the following :-</p> <ol style="list-style-type: none">What is the use of Microsoft Excel?What is the purpose of generating a series?	2X2=4	Analytical Skill



ARMY PUBLIC SCHOOL GWALIOR
CLASS V
ACADEMIC SESSION 2023 -24
WORKSHEET (SELF –ASSESSMENT)



Subject: General Knowledge
Allotment Date: 25 October 2023

Assignment No. : 5

S. NO.	QUESTIONS	MARKS	NATURE
Q1	I. Match the following a. Vitamin A (a) Retarded growth b Vitamin B1 (b) Night blindness	1X4=4	Information
Q2	c. Vitamin B2 (c) Bleeding d. Vitamin k (d) Beri-Beri	1X6=6	
	Answer the following question. a. Name the largest naturally occurring substance..... b. Name the largest constituent of atmospheric air..... c. Name the largest gland in human body..... d. Where is the National Science Centre located..... e. What is the mixture of two metals called..... f. Name the smallest particle of an element.....	1X4=4	
	Q3 Identify the pictures		


(1)



(2)




(3)



(4)








ARMY PUBLIC SCHOOL GWALIOR
CLASS V
ACADEMIC SESSION 2023 -24
WORKSHEET (SELF –ASSESSMENT)



Subject: Art and Work Education
Allotment Date: 25 October 2023

Assignment No. : 5

S.NO	QUESTIONS	MARKS	SKILLS
1.	Which of these is the primary color? a) Green b) Orange c) Red d) Purple	1	Creativity
2.	Which of these is the Secondary color? a) Red b) Yellow c) Blue d) Orange	1	Creativity
3.	Which of these is the Tertiary color? a) Red Orange, Red Violet, Blue Green, Blue Violet, Yellow Orange and Yellow Green b) Red, Orange, and Yellow c) Blue, Green, and Purple d) Red yellow blue	1	Creativity
4.	_____ is a Warm Color. a) Blue b) Green c) Orange d) Purple	1	Creativity
5.	_____ is a Cool Color. a) Light purple b) Yellow c) Orange d) Pink	1	Creativity
6.	Pink is a Tertiary Color. a) True b) False	1	Creativity
7.	The combination of primary and secondary colors is known as tertiary colours. a) True	1	Creativity

	b) False		
8.	<p>Colors that cannot be produced by mixing other colors are termed _____ colors.</p> <p>a) Secondary b) primary c) warm d) Cool</p>	1	Creativity
9.	<p>Secondary colors are mixed from _____ colors.</p> <p>a) Two Secondary b) Two Primary c) Two Tertiary d) Two Cool</p>	1	Creativity
10.	<p>Which among these is the picture of Tertiary Colors?</p> <p>A</p>  <p>B</p>  <p>C</p> 	1	Creativity



ARMY PUBLIC SCHOOL GWALIOR
CLASS V
ACADEMIC SESSION 2023 -24
WORKSHEET (SELF –ASSESSMENT)



Subject: Health and Physical Education

Allotment Date: 25 October 2023

Assignment No. : 5

S.NO	QUESTIONS	MARKS	SKILLS/ COMPETENCIES
1	Shorts answer question 1. Court measurement of Handball ? a) 40x 40 M b) 40x20M c) 8x8 M d) 20x20 M	1	INFORMATION
2	2. 7M line called as ?. a) Penalty area b) Restricted Area c) Goal Line d) Throw line	1	INFORMATION
3	3. Father of Handball? a) Sunil chettri b) Edward ederson c) Karl Schlenez d) G.D sondhi	1	INFORMATION
4	4. Handball Started in which country? a. Germany b) USA c) Brazil d) Qatar	1	INFORMATION
5	FILL IN THE BLANKS: - _____ players play during a match in handball a. 4 b. 5 c. 6 d. 7	1	INFORMATION

6	<p>1. In _____ year Handball started?</p> <p>a. 1916 b. 1914 c. 1920 d. 1919</p>	1	INTERDISCIPLINARY
7	<p>2. Handball current champion is _____.</p> <p>A. Denmark B. Germany C. USA D. Sweden</p>	1	INTERDISCIPLINARY
8	<p>1. Handball first originated in india (True/False)</p>	1	INTERDISCIPLINARY
9	<p>9. Handball Play only in pools. (True/ False)</p>	1	UNDERSTANDING
10	<p>10. Handball current world championship held in 2023 (True/False)</p>	1	UNDERSTANDING



ARMY PUBLIC SCHOOL GWALIOR
CLASS V
ACADEMIC SESSION 2023 -24
WORKSHEET (SELF –ASSESSMENT)



Subject: Music and Dance

Allotment Date: 25 October 2023

Assignment No. : 5

S. NO.	QUESTIONS	MARKS	NATURE
1	Which two elements are typically featured in a Pure Dance Tarana in Kathak? a) Rhythmic footwork and storytelling b) Hand gestures and facial expressions	1	Understanding
2	What is the primary purpose of a Pure Dance Tarana in Kathak? a) To convey a narrative or story b) To showcase intricate footwork and rhythm patterns	1	Creative thinking
3	Which of the following best describes the musical accompaniment for a Pure Dance Tarana in Kathak? a) Live tabla and vocal percussion b) Recorded instrumental music	1	Understanding
4	In a Pure Dance Tarana, what is the predominant focus of the dancer's movements? a) Expressing emotions and storytelling b) Displaying complex and fast-paced footwork	1	Creative thinking
5	Which of the following Indian classical dance styles is known for incorporating Pure Dance Tarana as a prominent feature? a) Bharatanatyam b) Kathak	1	Understanding
6	What Is a Inspirational song is also called A) Motivational song B) Patriotic song	1	Understanding

7	Complete the lyrics “ Milke chalo miljulke chalo” A) Ek swarg utara jaae B) Chalo desh sanwara jaae	1	Creativity
8	Which swar comes after Pa ? A) Ni B) Dha	1	Knowledge
9	8 beats Taal is known as? A) Keherwa taal B) Dadra taal	1	Creativity
10	What is the first swar is called A) Re B) Sa	1	Knowledge