

6	Choose the correct options- i)I (have known/has known) Sara all my life. ii)The children (are saluting/is saluting) the flag.	2 Marks	Critical Thinking and Problem Solving
7	Answer the following questions in one word- i)Who gave a medal to Mala for an act of bravery? _____ ii)Where was Lakshmibai born? _____ iii)The childhood name of Rani Lakshmibai was _____	3 Marks	Evaluation



ARMY PUBLIC SCHOOL GWALIOR
CLASS - IV
ACADEMIC SESSION 2023-24
WORKSHEET (SELF -ASSESSMENT)

Subject: Hindi

Assignment No. : 5

Allotment Date: 25 October 2023

क्रमसं.	प्रश्न	अंक	प्रकृति
1.	इन शब्दों के लिए करने शब्द लिखो— i) बंसी _____ ii) शाखा _____ iii) आवाज _____ iv) प्रसन्न _____	1x4=4	सूचनात्मक संचार कौशल (Informative Communication Skills)
2.	सही विकल्प का चयन कीजिए— (क) बालक कदंब का पेड़ किस नदी के किनारे होने की बात कह रहा है? i) गंगा ii) यमुना iii) कावेरी ख) बालक कौन सा वाद्य यंत्र बजाना चाहता है? i) शहनाई ii) संख iii) बांसुरी ग) कविता का मुख्य भाव क्या है? i) बालक की शरारत ii) मान और बेटे का प्यार iii) खेल के प्रति प्यार घ) तब मां का हृदय बहुत----- हो जाता i) प्रसन्न ii) व्याकुल iii) अपराहन	1x4=4	समझ (Understanding)
3.	बाईं ओर लिखे मुहावरे को उसके अर्थ से रेखा खींचकर जोड़ें- i) आकाश से बर्तें करना क्रोध करना ii) नौ दो ग्यारह हो जाना बहुत ऊंचा होना iii) आंख दिखाना बचकर भाग जाना iv) प्राणों की बाजी लगाना मरने के लिए तैयार रहना	1x4=4	मूल्यांकन (Evaluation)
4	निम्नलिखित प्रश्नों के उत्तर लिखें- 1. बांसुरी बजाकर बच्चा किसे बुलाता है ? _____ _____ 2. बच्चा कहाँ और किस पर बैठकर कन्हैया बनने की बात कर रहा है ? _____ _____	1x2=2	विश्लेषणात्मक (Analytical)

5.	नीचे लिखें सयुंक्त व्यंजनों के तीन-तीन शब्द लिखो - म्म- रस्सी- न्न - श्व -	1x4=4	समझ (Understanding)
6.	मूल्य परक प्रश्न- अपने से बड़े का प्रेम और आशीर्वाद पाने के लिए हमें किस प्रकार के कार्य करने चाहिए ? _____ _____ _____ _____	1x2=2	HOTS
7.	कविता में से सामान तुकवाले शब्द छाँटकर लिखो - i) आ जा ----- ii) मीचे -----	1x2=2	CRITICAL THINKING SKILLS



ARMY PUBLIC SCHOOL GWALIOR
CLASS - IV
ACADEMIC SESSION 2023-24
WORKSHEET (SELF –ASSESSMENT)




Subject: Mathematics
Allotment Date: 25 October 2023

Assignment No. : 5

S. NO.	QUESTIONS	MARKS	NATURE
1	Fill in the blanks: (a) $1000\text{ cm} + 90\text{ cm} = \underline{\hspace{2cm}}$ m (b) $56\text{ mL} = \underline{\hspace{1cm}}$ L $\underline{\hspace{1cm}}$ mL (c) $7000\text{ g} = \underline{\hspace{2cm}}$ kg (d) $600000\text{ cm} = \underline{\hspace{2cm}}$ km	$4 \times 1 = 4$	Observation
2	Convert the following: (a) to meters (m): 4 km 8 hm (b) to grams(g): 34 kg	$2 \times 1 = 2$	Mental Ability
3	Complete the series: (a) 4.5, 5.5, 6.5, $\underline{\hspace{1cm}}$, $\underline{\hspace{1cm}}$ (b) 12.6, 12.7, 12.8, $\underline{\hspace{1cm}}$, $\underline{\hspace{1cm}}$	$2 \times 1 = 2$	Decision Making
4	Do as directed: (a) Express the following proper fractions as decimals. (i) $5/10$ (ii) $9/100$ (b) Write as a decimal and then as a fraction. (i) 3 and 4 hundredths (ii) 1 tenth 6 hundredths	$4 \times 1 = 4$	Understanding
5	Do as directed: (a) Add: 45 kg 456g and 23 kg 608 g (b) Subtract: 47 L 788 mL from 99 L (c) Multiply: 3 m 25 cm x 3	$4 \times 1 = 4$	Problem Solving

	(d) Divide: 500 m by 5		
6	Read the word problems and solve them: (a) A trip to Mathura from Delhi is 438 km 500 m. How much is it for a to-and-fro trip? (b) Sahil takes 50mg of butter each day. How much butter will he consume in the month of June?	4×1 = 4	Critical Thinking



ARMY PUBLIC SCHOOL GWALIOR
CLASS - IV
ACADEMIC SESSION 2023-24
WORKSHEET (SELF –ASSESSMENT)

Subject: EVS

Assignment No. : 5

Allotment Date: 25 October 2023

S. No	Questions:	Marks	Skills
Q1	Choose the correct option. i. It is an edible root. a. Carrot b Radish c. Beetroot. d. All of these ii. This flower is used to make perfumes. a. Rose b. Sunflower c. Broccoli d. Lotus iii. It is a famine food a. Cabbage. b. Yam. c Orchid. d. Marigold	3x1=3	Information
Q2	Give two examples of each of the following i. Flower we eat. ii. Famine food.	2x2=4	Understanding
Q3	Write one function of the one of the following i. Aerial root..... ii. Breathing root.....	2x2=4	Analysing
Q4	Answer the following questions. i. Why should we choose flowers carefully while gifting? _____ _____ _____ ii. Who are adivasi people? _____ _____ _____ iii. Who look after the plants on the roadside? _____ _____ _____	3x3=9	Critical thinking



ARMY PUBLIC SCHOOL GWALIOR
CLASS - IV
ACADEMIC SESSION 2023-24
WORKSHEET (SELF –ASSESSMENT)

Subject: Computer

Assignment No. : 5

Allotment Date: 25 October 2023

S.NO.	QUESTIONS	MARKS	NATURE
1.	<p>Tick the correct answer:</p> <ol style="list-style-type: none">1. The history of the Internet starts with the birth of _____. a. ARPANET b. Intranet c. Website2. _____ is a high-speed Internet connection. a. Mosaic b. Broadband c. Modem3. The company that provides Internet connection is called _____. a. IPS b. ISP c. SPI4. _____ is the latest web browser of Windows 10. a. Google Chrome b. Microsoft Edge c. Mozilla Firefox	0.5X4=2	Information
2.	<p>Write 'T' for True and 'F' for False statements.</p> <ol style="list-style-type: none">(i) All information available on the Internet is accurate.(ii) Many search engines use spider program.(iii) Hotmail is a popular web browser.(iv) We should always choose strong password to protect our account.	0.5X4=2	Interdisciplinary
3.	<p>Fill in the blanks.</p> <ol style="list-style-type: none">1. In 1969, the Department of Defense of USA developed _____2. _____ enables us to send and receive messages at a fast speed.3. A _____ is any web page name that lists as a result of a search.4. _____ was the first successful graphical web browser.	0.5X4=2	Analytical Skill

4.	Answer the following :- (i) What are the advantages of Internet? (ii) Name some web browsers available on the Internet.	2X2=4	Analytical Skill
-----------	---	-------	-------------------------



ARMY PUBLIC SCHOOL GWALIOR
CLASS - IV
ACADEMIC SESSION 2023-24
WORKSHEET (SELF –ASSESSMENT)

Subject: G.K

Assignment No. : 5

Allotment Date: 25 October 2023

S. NO.	QUESTIONS	MARKS	NATURE		
Q1	<p>Fill in the blanks.</p> <p>i. This is a thick continuous layer of foliage formed by the uppermost branches of a group of trees. Ans</p> <p>ii. It is a relative of the alligator from Central and South America that has heavily armoured undersides. They are usually smaller in size. Ans.</p> <p>iii. He was the first human to step on the moon. He was the part of Apollo 11 which was the first man mission to land on the moon. Ans.....</p> <p>iv. This machine is used to measure blood pressure of a patient. Ans.</p> <p>v. Plants produce it along with oxygen during the process of photosynthesis. Ans.....</p>	5x1=5	Information		
Q2	<p>Match the column A with column B:</p> <table style="width: 100%; border: none;"> <tr> <td style="width: 50%; vertical-align: top;"> <p>Column A.</p> <ul style="list-style-type: none"> •Train Accident. •First human to go into space •Golden Wattle •Small pores present on the the surface of a leaf • Instrument used to listen. the heart sound </td> <td style="width: 50%; vertical-align: top;"> <p>Column B</p> <ul style="list-style-type: none"> Australia Man-made disaster Stomata Stethoscope Yuri Gagarin </td> </tr> </table>	<p>Column A.</p> <ul style="list-style-type: none"> •Train Accident. •First human to go into space •Golden Wattle •Small pores present on the the surface of a leaf • Instrument used to listen. the heart sound 	<p>Column B</p> <ul style="list-style-type: none"> Australia Man-made disaster Stomata Stethoscope Yuri Gagarin 	5x1=5	Analysing
<p>Column A.</p> <ul style="list-style-type: none"> •Train Accident. •First human to go into space •Golden Wattle •Small pores present on the the surface of a leaf • Instrument used to listen. the heart sound 	<p>Column B</p> <ul style="list-style-type: none"> Australia Man-made disaster Stomata Stethoscope Yuri Gagarin 				







ARMY PUBLIC SCHOOL GWALIOR
CLASS - IV
ACADEMIC SESSION 2023-24
WORKSHEET (SELF –ASSESSMENT)

Subject: Art and Work Education
Allotment Date: 25 October 2023

Assignment No. : 5

S.NO	QUESTIONS	MARKS	SKILLS/COMPETENCIES
1.	What is the shape with four equal sides? a) Rectangle b) Square c) Triangle	1	Creativity
2.	Which of these is a basic shape? a) Cube b) Circle c) Sphere	1	Creativity
3.	A cube is a _____. a) One-dimensional shape b) Two-dimensional Shape c) Three-dimensional Shape	1	Creativity
4.	What is the shape of a football? a) Cube b) Sphere c) Cuboid	1	Creativity
5.	What is the shape of a birthday cap? a) Cone b) Square c) Circle	1	Creativity
6.	Texture is the physical feel of _____. a) smooth b) Coloured paper c) Painting	1	Creativity
7.	Which of these is a type of Texture? a) Pulp b) Bumpy c) Line	1	Creativity
8.	We can make Texture with dry brushing. True False	1	Creativity

9.	The sandpaper is very smooth. True False	1	Creativity
10.	Which among these is the picture of Texture?   	1	Creativity




ARMY PUBLIC SCHOOL GWALIOR
CLASS - IV
ACADEMIC SESSION 2023-24
WORKSHEET (SELF –ASSESSMENT)

Subject: Music and Dance
Allotment Date: 25 October 2023

Assignment No. : 5

S. No	QUESTIONS	MARKS	NATURE
1	What is the primary characteristic of Semi-Classical Dance? a) It blends classical dance elements with contemporary styles b) It strictly follows traditional classical dance forms	1	Understanding
2	Which of the following dance forms is often considered a part of Semi-Classical Dance? a) Kathak b) Bharatanatyam	1	Information
3	In Semi-Classical Dance, what kind of music is commonly used? a) Classical ragas and talas b) Contemporary or fusion music	1	Understanding
4	What role do expressions and emotions typically play in Semi-Classical Dance? a) They are essential for storytelling b) They are minimal, with the focus on technical movements	1	Creative thinking
5	Which of the following best describes the costume worn in Semi-Classical Dance? a) Elaborate traditional attire b) A fusion of traditional and modern costumes	1	Understanding
6	Where was Mahatma Gandhi born? a) Porbandar b) Rajkot	1	Knowledge
7	Mohandas Karamchand Gandhi was born on a. 2 October b) 5 October	1	Knowledge
8	What is Gandhiji's father's Name A) Mohandas B) Karamchand	1	Understanding

9	Which swar comes after dha a) Ga b) Ni	1	Knowledge
10	What is the first swar called a) sa b) pa	1	Creativity



ARMY PUBLIC SCHOOL GWALIOR
CLASS - IV
ACADEMIC SESSION 2023-24
WORKSHEET (SELF –ASSESSMENT)

Subject: Health and Physical Education
Allotment Date: 25 October 2023

Assignment No. : 5

S. No.	QUESTIONS	MARKS	SKILLS/ COMPETENCIES
1	Shorts answer the question: 1. Court measurement of Handball? a) 40× 40 M b) 40×20M c) 8×8 M d) 20×20 M	1	INFORMATION
2	2. 7M line called as ?. a) Penalty area b) Restricted Area c) Goal Line d) Throw line	1	INFORMATION
3	3. Father of Handball? a) Sunil chettri b) Edward ederson c) Karl Schlenez d) G.D sondhi	1	INFORMATION
4	4. Handball Started in which country? a) Germany b) USA c) Brazil d) Qatar	1	INFORMATION
5	FILL IN THE BLANKS: - _____ players play during a match in handball a) 4 b) 5 c) 6 d) 7	1	INFORMATION

6	In _____ year Handball started. a) 1916 b) 1914 c) 1920 d) 1919	1	INTERDISCIPLINARY
7	Handball's current champion is _____. a) Denmark b) Germany c) USA d) Sweden	1	INTERDISCIPLINARY
8	Handball first originated in India. (True/False)	1	INTERDISCIPLINARY
9	Handball is played only in pools. (True/ False)	1	UNDERSTANDING
10	Handball's current world championship was held in 2023. (True/False)	1	UNDERSTANDING