



	<p>(a) The squirrel brought lot of crunchy nuts._____</p> <p><b>B. Answer the following questions:</b></p> <p>(a) Who wants to sing in the party?</p> <p>.....</p> <p>.....</p> <p>(b) Which green does the poet want for the walls of her? house?</p> <p>.....</p> <p>.....</p>		
5.	<p>According to the poet,what is the importance of big trees?</p> <p>.....</p> <p>.....</p> <p>.....</p> <p>.....</p>	4x1=4	Critical Thinking



**ARMY PUBLIC SCHOOL GWALIOR**  
**CLASS - III**  
**ACADEMIC SESSION 2023-24**  
**WORKSHEET (SELF -ASSESSMENT)**



**Subject: Hindi**

**Assignment No. : 5**

**Allotment Date: 25 October 2023**

S. NO.	QUESTIONS	MARKS	NATURE
1	<p>नीचे दिए शब्दों के वर्ण - विच्छेद कीजिये -</p> <p>(i) भक्ति -</p> <p>(ii) ज़ीरो -</p> <p>(iii) ताकत -</p> <p>(iv) सच्ची -</p>	1x4=4	अंतःविषयात्मक
2	<p>सही / गलत का निशान लगाओ।</p> <p>(i) एक में दो शून्य लगाने से एक हजार बन जाता है। ( )</p> <p>(ii) शून्य कविता के कवि 'सूर्यकांत' हैं। ( )</p> <p>(iii) कवि उन्हें साथ बैठाने के लिए कह रहा है जिन्हें हम कुछ नहीं समझते। ( )</p>	1x3=3	विश्लेषण
3.	<p>निम्नलिखित गद्यांश को ध्यानपूर्वक पढ़कर दिए गए प्रश्नों के उत्तर दें -</p> <p>मोहन सुबह उठकर नहा-धोकर तैयार हुआ। फिर वह अपने स्कूल बैग में किताबें और कॉपी रखकर स्कूल के लिए निकल गया। आज मोहन को अपने नए स्कूल में जाना था। वह बहुत उत्सुक था। वह अपने नए स्कूल में अपने नए दोस्तों से मिलने और नए शिक्षकों से सीखने के लिए उत्सुक था।</p> <p>1. मोहन सुबह उठकर क्या करता है?</p> <p>.....</p> <p>.....</p> <p>2. मोहन अपने स्कूल बैग में क्या रखता है?</p> <p>.....</p> <p>.....</p> <p>.....</p>	1x5=5	बाधात्मक

	<p>3. मोहन आज कहाँ जा रहा है?</p> <p>.....</p> <p>.....</p> <p>4. मोहन अपने नए स्कूल में जाने के लिए क्यों उत्सुक है?</p> <p>.....</p> <p>.....</p> <p>5. नीचे दिए शब्दों के विलोम शब्द लिखें -</p> <p>(i) कल - .....</p> <p>(ii) शाम - .....</p>						
<p>4.</p>	<p>नीचे दिए शब्दों के अर्थ लिखिए -</p> <table border="0" style="width: 100%;"> <tr> <td style="width: 50%; text-align: center;">(क)</td> <td style="width: 50%; text-align: center;">(ख)</td> </tr> <tr> <td style="vertical-align: top;"> <p>1.शून्य</p> <p>2.ताकत</p> <p>3.निश्चय</p> <p>4.मतलब</p> </td> <td></td> </tr> </table>	(क)	(ख)	<p>1.शून्य</p> <p>2.ताकत</p> <p>3.निश्चय</p> <p>4.मतलब</p>		<p>1x4=4</p>	<p>सूचनात्मक</p>
(क)	(ख)						
<p>1.शून्य</p> <p>2.ताकत</p> <p>3.निश्चय</p> <p>4.मतलब</p>							
<p>5.</p>	<p>निम्नलिखित प्रश्नों के उत्तर दीजिये-</p> <p>(क) कवि किसकी ताकत को जान गया है ?</p> <p>.....</p> <p>.....</p> <p>.....</p>	<p>2x2=4</p>	<p>रचनात्मक</p>				

	<p>.....</p> <p>.....</p> <p>.....</p> <p>(ख) 'शून्य' कविता से आपको क्या शिक्षा मिलती है ?</p> <p>.....</p> <p>.....</p> <p>.....</p> <p>.....</p> <p>.....</p> <p>.....</p>		
--	--	--	--



**ARMY PUBLIC SCHOOL GWALIOR**  
**CLASS - III**  
**ACADEMIC SESSION 2023-24**  
**WORKSHEET (SELF –ASSESSMENT)**



**Subject: Mathematics**

**Assignment No. : 5**

**Allotment Date: 25 October 2023**

S. NO.	QUESTIONS	MARKS	NATURE
1.	<b>Fill in the blanks:</b> (i) ..... means part of a whole or one. (ii) In the fraction $5/11$ , the numerator is ..... (iii) $7/9$ and $8/9$ are the examples of ..... fraction. (iv) ..... is the standard unit for measuring length . (v) 1 metre (m) = ..... centimetres.	5x1=5	Problem Solving
2.	<b>Write whether the following statements are 'True' or 'False':</b> (i) 1 metre is equal to 1000cm. .... (ii) Equivalent fractions are those fractions that have the same value or represent the same part of an object. .... (iii) $3/4$ and $6/8$ are equal fractions. .... (iv) $5000\text{m} + 200\text{cm}$ is 5200 cm. .... (v) A handspan is an example of standard unit of measurement. ....	5x1=5	Mental Ability
3.	<b>Do as directed:</b> (I) Convert the following into centimetres. (a) 19 m 86 cm  (II) Convert the following into kilometres. (b) 19000 m	(6X1=6)	Critical Thinking

(III) Write <, > and =.

(a) 100mm ..... 1000cm

(b) 1000m ..... 1 km

(IV) Write the denominator and numerator of the following.

(a)  $\frac{4}{5} =$  Numerator ..... Denominator .....

(b)  $\frac{5}{11} =$  Numerator ..... Denominator .....

(V) Convert the following.

(a) 6500 g into kilograms and grams.

(b) 2 kg 780 g into grams.

<p><b>4.</b></p>	<p>Find the next two equivalent fractions of the following. (a) <math>\frac{2}{5}</math></p> <p>(b) <math>\frac{20}{50}</math></p>	<p><b>(2X1=2)</b></p>	<p><b>(Multiplication Skill)</b></p>
<p><b>5.</b></p>	<p>(I) Arrange the following in ascending order. <math>\frac{3}{5}</math>, <math>\frac{4}{5}</math>, <math>\frac{2}{5}</math>, <math>\frac{1}{5}</math></p> <p>(II) Arrange the following in descending order. <math>\frac{2}{3}</math>, <math>\frac{2}{5}</math>, <math>\frac{2}{7}</math>, <math>\frac{2}{4}</math></p>	<p><b>(2X1=2)</b></p>	<p><b>Logical Reasoning</b></p>



--	--	--	--




**ARMY PUBLIC SCHOOL GWALIOR**  
**CLASS - III**  
**ACADEMIC SESSION 2023-24**  
**WORKSHEET (SELF –ASSESSMENT)**




**Subject: EVS**

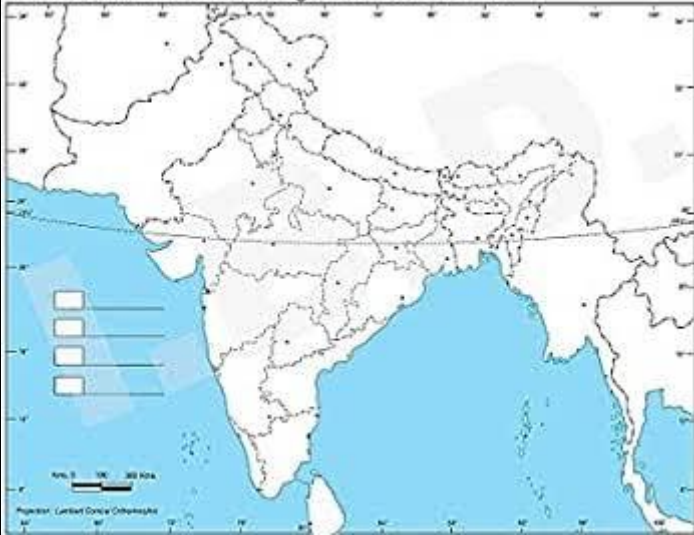
**Assignment No. : 5**

**Allotment Date: 25 October 2023**

S. NO.	QUESTIONS	MARKS	NATURE
1.	<p><b>A. <u>Read and choose the correct option:</u></b></p> <p>(a) The features of an ideal house are:</p> <p>(i) It should have windows with wire mesh. (ii) It should have a good drainage and sanitary conditions. (iii) It should have enough open space. (iv) All of the above</p> <p>(b) <b>Answer in one word:</b> (i) Dome shaped houses made up of blocks of ice are called .....</p> <p>(c) <b>Pick and encircle the odd one out :</b> Broom    Dustpan    Duster    Medicine    Mop</p> <p>(d) <b>Fill in the blanks:</b> Stilt houses are found in the areas which receive heavy ..... (i) rainfall (ii) flood (iii) Tsunami (iv) All of the above</p>	4x1=4	Understanding
2.	<p>(a) <b>Identify the following images and explain about it in brief :</b></p> <p>(i) </p> <p>.....</p>	3x2=6	Observation

	<p>(ii) </p> <p>.....</p> <p>(b) Draw a diagram of kutcha or pucca house. (any one type)</p>		
3.	<p><b>Match the following:</b></p> <p>(a) magnetic compass                      (i) A book of map</p> <p>(b) landmarks                                (ii) directions</p> <p>(c) Atlas                                        (iii) destination</p>	3x1=3	HOT
4.	<p><b>A. State whether the following statements are 'True' or 'False':</b></p> <p>(a) There are 28 states in India. _____</p> <p><b>B. Answer the following questions:</b></p> <p>(a) How should we dispose off household waste? _____</p> <p>(b) What is the difference between a plan and a sketch? _____</p>	3x1=3	Problem Solving
5.	<p><b>Locate the following in the given Indian map:</b></p> <p>(a) Northern most states</p> <p>(b) Southern most states</p> <p>(c) Eastern most states</p> <p>(d) Western most states</p>	4x1=4	Critical thinking

**INDIA - POLITICAL AND ADJACENT COUNTRIES.**





**ARMY PUBLIC SCHOOL GWALIOR**  
**CLASS - III**  
**ACADEMIC SESSION 2023-24**  
**WORKSHEET (SELF –ASSESSMENT)**



**Subject: Computer**  
**Allotment Date: 25 October 2023**

**Assignment No. : 5**

S.NO.	QUESTIONS	MARKS	NATURE
1	<p>Tick the correct answer</p> <p>(i) _____ in paint 3D are used to add texture and icons.</p> <p>a) Images b) Stamps c) Stickers</p> <p>(ii) Paint 3D is a drawing program developed by_____.</p> <p>a) Microsoft b) Google c) Facebook</p> <p>(iii) Click on _____ icon to add 3D text to the projects.</p> <p>a) Add text b) 2D text c) 3D text</p> <p>(iv) We can add 3D objects in our project from 3D_____.</p> <p>a) Library b) Filter c) Rotation</p>	4x0.5=5	Information
2	<p>Fill in the blanks-</p> <p>1. _____ is the area where we draw in paint 3D.</p> <p>2. _____ tools appear around an object when we</p>	4x0.5=2	Understanding

	<p>select it from 3D library.</p> <p>3. _____ option is used to add 3D text in paint 3D.</p> <p>4. We can erase a shape with _____ tool.</p>		
<b>3</b>	<p>Write True or False against the statements:-</p> <p>1. We can use filter tools to see the 3D effects.</p> <p>2. We can change the color of 3D objects according to our choice.</p> <p>4. Only 2D text can be added to a project in paint 3D.</p> <p>5. 3D shapes are known as flat shapes.</p>	4x0.5=2	Interdisciplinary
<b>4</b>	<p>Answer the following questions</p> <p>1. What the types of stickers available are in paint 3D?</p> <p>2. Why do we need rotation tool?</p> <p>3. What do you mean by 2D shape?</p> <p>4. What is the use of Fill tool?</p>	4x0.5=2	Critical Thinking and Problem Solving





**ARMY PUBLIC SCHOOL GWALIOR**  
**CLASS - III**  
**ACADEMIC SESSION 2023-24**  
**WORKSHEET (SELF –ASSESSMENT)**



**Subject: G.K**  
**Allotment Date: 25 October 2023**

**Assignment No. : 5**

S. NO.	QUESTIONS	MARKS	NATURE										
1.	<p><b>Fill in the blanks by choosing the correct options given below:</b> ( Dentist,Volcano, Venus,Rafflesia)</p> <p>(i) ..... is the hottest planet. (ii) ..... treats toothache. (iii) .....is the largest flower in the world. (iv) ..... forms hot molten rock called magma.</p>	4x0.5=2	<b>Information</b>										
2.	<p><b>Match the column 'A' with column'B':</b></p> <table style="width: 100%; border: none;"><tr><td style="text-align: center;">A</td><td style="text-align: center;">B</td></tr><tr><td>(i) Touch - me - not</td><td>(a) insect</td></tr><tr><td>(ii) Cardiologist</td><td>(b) mars</td></tr><tr><td>(iii) Flea</td><td>(c) heart specialist</td></tr><tr><td>(iv) Red planet</td><td>(d) sensitive plant</td></tr></table>	A	B	(i) Touch - me - not	(a) insect	(ii) Cardiologist	(b) mars	(iii) Flea	(c) heart specialist	(iv) Red planet	(d) sensitive plant	4x0.5=2	<b>Thinking Skill</b>
A	B												
(i) Touch - me - not	(a) insect												
(ii) Cardiologist	(b) mars												
(iii) Flea	(c) heart specialist												
(iv) Red planet	(d) sensitive plant												

<p>3.</p>	<p><b>State whether the following statements are 'True' or False':</b></p> <p>(i) The moon has no water or air on it. (    )</p> <p>(ii) Orthopedic treats skin problems. (    )</p> <p>(iii) We get fibre from Cotton plant (    )</p> <p>(iv) Mercury is the largest planet ( .    )</p>	<p>4x0.5=2</p>	<p>HOTS</p>
<p>4.</p>	<p><b>Answer the following questions in one word:</b></p> <p>(i) Name a non- metal which is used for making pencil leads.</p> <p>.....</p> <p>(ii) Which fibre is used for making sacs, bags and doormats.</p> <p>.....</p> <p>(iii) Name a metal which is used for making electric wire..</p> <p>.....</p> <p>(iv) Name the coldest planet.</p> <p>.....</p>	<p>4x0.5=2</p>	<p>Understanding</p>
<p>5.</p>	<p>Identify the following:</p> <p>(i)  .....</p> <p>(ii)  .....</p>	<p>4x0.5=2</p>	<p>Critical Thinking</p>



(iii)



.....

(iv)



.....



**ARMY PUBLIC SCHOOL GWALIOR**  
**CLASS - III**  
**ACADEMIC SESSION 2023-24**  
**WORKSHEET (SELF –ASSESSMENT)**




**Subject: Art and Craft**

**Assignment No. : 5**

**Allotment Date: 25 October 2023**

<b>S. NO.</b>	<b>QUESTIONS</b>	<b>MARKS</b>	<b>NATURE</b>
1.	What are the primary colours?	2	Knowledge
2.	What are the secondary colours?	2	Knowledge
3.	What are the Tertiary colours?	2	Knowledge
4.	What are the warm colours?	2	Knowledge
5.	What are the cool colours?	2	Knowledge



**ARMY PUBLIC SCHOOL GWALIOR**  
**CLASS - III**  
**ACADEMIC SESSION 2023-24**  
**WORKSHEET (SELF –ASSESSMENT)**




**Subject: Health and Physical Education**  
**Allotment Date: 25 October 2023**

**Assignment No. : 5**

S.NO	QUESTIONS	MARKS	SKILLS/ COMPETENCIES
1.	<p><b>Tick The Correct Answer</b></p> <p>Q-1 Full form of AIFF IS?</p> <p>a. ALL INDIA FOOTBALL FEDERATION b. ALL INDIA FOOTBALL FAN c. AMAZING FOOTBALL FEDERATION d. ALL INDIA FIT FOOT</p> <p>Q-2 How many players players as substitute in football match?</p> <p>a.3 b.5 c.7 d.1 only goal keeper</p> <p>Q-3 Indian Super League (ISL) was founded in the Year?</p> <p>a.2010 b.2011 c.2012 d.2013</p> <p>Q-4 Which is the oldest football competition in India?</p> <p>a. Federation Cup b. Aryan Cup c. Durand Cup d. Santosh Trophy</p>	4	<b>INFORMATION</b>
2	<p><b><u>Fill in the blanks</u></b></p> <p>Q-5 _____ is the colour of Indian football team?</p> <p>a) red b) blue</p>	3	

	<p>c) green d) black</p> <p>Q-6- _____ penalties taken in penalty shoot-out?</p> <p>a) 12 b) 4 c) 5 d) 6</p> <p>Q-7 what is the usual time allowed for half time interval in football?</p> <p>a) 10 min b) 15 min c) 1 hour d) 45 min</p>		<p><b>Knowledge</b></p>
<p><b>3</b></p>	<p><b><u>True False</u></b></p> <p>Q-08-Football can be play in rain?</p> <p><b>A.</b> True <b>B.</b> False</p> <p>Q-9- football is only played by 10 years old children?</p> <p>(a) True (b) False</p> <p>Q-10 Football can build sportsmen ship?</p> <p><b>B.</b> True <b>C.</b> False</p>	<p><b>3</b></p>	



**ARMY PUBLIC SCHOOL GWALIOR**  
**CLASS - III**  
**ACADEMIC SESSION 2023-24**  
**WORKSHEET (SELF –ASSESSMENT)**



**Subject: Dance and Music**  
**Allotment Date: 25 October 2023**

**Assignment No. : 5**

S. NO.	QUESTIONS	MARKS	NATURE
1.	TATKAAR is .....in the teentaal .  a) Handwork b) Footwork	1	Information
2.	.....the basic of teentaal .  a) Chakkar b) Tatkaar	1	critical Thinking
3.	PT Birju maharaj Ji belongs to which Art?  a)Dancer b)Musician	1	Understanding
4.	Dandiya is the .....dance.  a)Folk b)Western	1	Information

5.	<p>How Many sections in teentaal ?</p> <p>a)8</p> <p>b)4</p>	1	Critical thinking
6.	<p>The instruments with wires are called ?</p> <p>a) Strings Instrument</p> <p>b) Keys Instrument</p>	1	Information
7.	<p>The string instrument family example is ?</p> <p>a) Guitar</p> <p>b) Flute</p>	1	Information
8.	<p>Flute is an _____ Family instrument.</p> <p>a) Woodwinds</p> <p>b) Brass</p>	1	Critical thinking
9.	<p>_____ is Brass family instrument.</p> <p>a) Snare</p> <p>b) Trumpet</p>	1	Understanding

<b>10.</b>	All the families of instruments make ?  a) Orchestra b) Percussion	<b>1</b>	Understanding
------------	---	----------	---------------