



ARMY PUBLIC SCHOOL GWALIOR
CLASS - II
ACADEMIC SESSION 2023-24
WORKSHEET (SELF -ASSESSMENT)



Subject: English

Assignment No. : 5

Allotment Date: 25 October 2023

S. NO.	QUESTIONS	MARKS 20	NATURE
1.	<p>Write the meaning of the following words:</p> <p>(i) chase -</p> <p>(ii) twist -</p> <p>(iii) suddenly -</p> <p>(iv) stroke -</p> <p>(v) Nile -</p>	5x1=5	Information
2.	<p>Write the opposite of given words by adding suitable prefixes: (Prefixes- dis, un, im)</p> <p>(i) polite - _____</p> <p>(ii) appear - _____</p> <p>(iii) trust - _____</p> <p>(iv) proper - _____</p> <p>(v) kind - _____</p>	5x0.5=2.5	Literacy skills
3.	<p>Read the following sentences carefully and fill in the blanks with has/have:</p> <p>(i) I _____ brown eyes and black hair.</p> <p>(ii) All the girls of my class _____ toy cars.</p> <p>(iii) You _____ a big water bottle.</p> <p>(iv) A peacock _____ colourful feathers.</p> <p>(v) I _____ reached on time.</p>	5x0.5=2.5	Problem Solving
4.	<p>Answer the following questions:</p> <p>Q1. Where does the lion ask the fox to take Shaheen?</p> <p>Ans _____</p> <p>_____</p> <p>_____</p>	2x3=6	Understanding

	<p>Q2. What you should do if you meet a crocodile?</p> <hr/> <hr/> <hr/> <hr/>		
5.	<p>Choose the correct prepositions from the brackets-:</p> <p>1. The shop closes _____ 8 o'clock. (on/at) 2. The cat is sitting _____ the rug. (on/under) 3. The pencil is _____ the table. (on/for) 4. The cup is _____ her hand. (in/for)</p>	4x1=4	Inquiry



ARMY PUBLIC SCHOOL GWALIOR
CLASS - II
ACADEMIC SESSION 2023-24
WORKSHEET (SELF -ASSESSMENT)




Subject: Hindi

Assignment No. : 5

Allotment Date: 25 October 2023

क्रम सं	प्रश्न	अंक	प्रश्न के प्रकार
1	<p>निम्नलिखित वाक्यों में सही अथवा गलत का निशान लगाएँ।</p> <ol style="list-style-type: none">1. मिनी बारिश रुकने का इंतज़ार कर रही थी। ()2. मिनी ने मामा को ई-मेल लिखवाया। ()3. तितली के पंख रंग बिरंगे होते हैं। ()	3	बोधात्मक
2	<p>निम्नलिखित शब्दों के अर्थ लिखें।</p> <ol style="list-style-type: none">1. ई-मेल -----2. मँडराना -----3. हरषाती -----	3	जानात्मक
3	<p>सही सर्वनाम शब्द लिखकर रिक्त स्थान भरें।</p> <ol style="list-style-type: none">1. ----- दोनों साथ-साथ विद्यालय जाते हैं।2. ----- कल मेला जाएंगे।3. रीमा ----- कल क्यों नहीं आई?4. ----- खाना खाऊंगा।	4	रचनात्मक
4	<p>एक जैसी आवाज़ वाले शब्द लिखिए।</p> <ol style="list-style-type: none">1. हरषाती -----2. फूल -----3. कली -----4. खिली -----	4	सूचनात्मक

5	निम्नलिखित शब्दों के लिए एक नाम और लिखें। 1. सूर्य ----- 2. वर्षा ----- 3. गृह ----- 4. मेघ -----	4	विश्लेषणात्मक
6	आप अपने मित्रों को जन्मदिन पर बुलाने के लिए कैसे सूचना देंगे? दो वाक्यों में उत्तर लिखिए। ----- -----	2	उच्च स्तरीय चिंतन




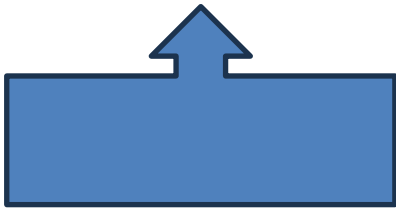
ARMY PUBLIC SCHOOL GWALIOR
CLASS - II
ACADEMIC SESSION 2023-24
WORKSHEET (SELF -ASSESSMENT)

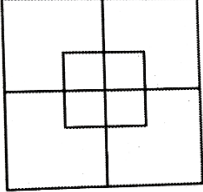
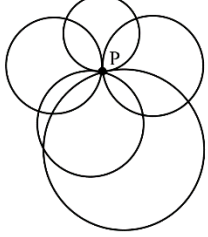



Subject: Mathematics

Assignment No. : 5

Allotment Date: 25 October 2023

S. NO.	QUESTIONS	MARKS 20	NATURE
1.	<p>Count and write the number of lines in the following figures-</p> <p>a) </p> <p>Horizontal lines - _____</p> <p>Vertical lines - _____</p> <p>Slant lines - _____</p> <p>b) </p> <p>Horizontal lines - _____</p> <p>Vertical lines - _____</p> <p>Slant lines - _____</p>	3x2=6	Critical thinking

<p>2.</p>	<p>Count and write-</p> <p>a) How many squares are there in the following figure?</p>  <p>_____</p> <p>b)</p>  <p>_____</p>	<p>$2 \times 2 = 4$</p>	<p>Creative thinking</p>																				
<p>3.</p>	<p>Complete the following table-</p> <table border="1" data-bbox="357 819 1058 1144"> <thead> <tr> <th>Shapes</th> <th>Faces</th> <th>Edges</th> <th>Vertices</th> </tr> </thead> <tbody> <tr> <td>1. Cone</td> <td>_____</td> <td>_____</td> <td>_____</td> </tr> <tr> <td>2. Cube</td> <td>_____</td> <td>_____</td> <td>_____</td> </tr> <tr> <td>3. Cylinder</td> <td>_____</td> <td>_____</td> <td>_____</td> </tr> <tr> <td>4. Cuboid</td> <td>_____</td> <td>_____</td> <td>_____</td> </tr> </tbody> </table>	Shapes	Faces	Edges	Vertices	1. Cone	_____	_____	_____	2. Cube	_____	_____	_____	3. Cylinder	_____	_____	_____	4. Cuboid	_____	_____	_____	<p>$4 \times 1 = 4$</p>	<p>HOTS</p>
Shapes	Faces	Edges	Vertices																				
1. Cone	_____	_____	_____																				
2. Cube	_____	_____	_____																				
3. Cylinder	_____	_____	_____																				
4. Cuboid	_____	_____	_____																				
<p>4.</p>	<p>. Fill in the blanks-</p> <p>a) A _____ has all four sides equal.</p> <p>b) A _____ has three sides.</p> <p>c) A _____ has no sides.</p> <p>d) A _____ is an example of cuboid.</p>	<p>$4 \times 1 = 4$</p>	<p>Understanding</p>																				
<p>5.</p>	<p>See the following pictures, identify the 3D shape it looks like and write the name of that 3D figure.</p>  <p>a) _____</p>	<p>$1 \times 2 = 2$</p>	<p>Problem solving</p>																				

b)





ARMY PUBLIC SCHOOL GWALIOR
CLASS - II
ACADEMIC SESSION 2023-24
WORKSHEET (SELF –ASSESSMENT)




Subject: EVS

Assignment No. : 5

Allotment Date: 25 October 2023

S.NO.	QUESTIONS	MARKS 20	NATURE
1.	<p>Tick the correct answer:</p> <p>1. Plants with weak stem are _____.</p> <p>a. Herbs b. Climbers c. All of these</p> <p>2. The part of a plant present below the ground is _____.</p> <p>a. Root b. Stem c. Branch</p> <p>3. It grows into a fruit.</p> <p>a. Seed b. Flower c. Leaves</p> <p>4. They are the 'Kitchen of a plant'.</p> <p>a. Leaves b. Root c. Shoot</p>	4X1=4	Understanding
2.	<p>Name the parts of the plants which perform the following functions:</p> <p>a) Produces fruits _____</p> <p>b) Has seeds inside it. _____</p> <p>c) Prepares food for the plant _____</p> <p>d) Absorbs water from the soil _____</p>	4X1 = 4	Analytical skill
3.	<p>Give two examples of each of the following:</p> <p>a) Herbs: _____ _____</p> <p>b) Shrubs: _____ _____</p>	2X2=4	Information

4.	<p>Complete the given flow chart:</p> <p>Parts of a Plant</p> <p>_____</p> <p>_____</p> <p>_____</p> <p>_____</p>	4x1=4	Observation
5.	<p>Why do plants prepare food only during the daytime?</p> <p>_____</p> <p>_____</p> <p>_____</p> <p>_____</p>	2x1=2	HOTS
6.	<p>Answer the following questions-</p> <p>1. Why are leaves important for plants?</p> <p>Ans - _____</p> <p>_____</p> <p>_____</p> <p>2. Where do plants store extra food?</p> <p>Ans - _____</p> <p>_____</p> <p>_____</p>	1x2=2	Thinking and Writing Skills







ARMY PUBLIC SCHOOL GWALIOR
CLASS - II
ACADEMIC SESSION 2023-24
WORKSHEET (SELF -ASSESSMENT)







Subject: G.K

Assignment No. : 5

Allotment Date: 25 October 2023

S.NO	QUESTIONS	MARKS	NATURE
1.	<p>Identify and name the given vegetables.</p>  <p>1. _____</p>  <p>2. _____</p>  <p>3. _____</p>  <p>4. _____</p>	4x0.5=2	Informative and General Awareness
2.	<p>Read the description and name the given places.</p>	3x1=3	Identification and General

	<ol style="list-style-type: none"> 1. Manpreet's father is an inspector. He works in this office. This office is called a _____ 2. Ananya's uncle has come here to buy some envelopes and stamps. This is a _____ 3. Rehana's mother is waiting for a bus here .This place is called a _____ 		Awareness
3.	<p>Name the following water animals.</p> <ol style="list-style-type: none"> 1. This is a playful water animal. _____ 2. This is the biggest water animal in the world. _____ 3. This is a very dangerous freshwater animal. _____ 4. This is a tiny marine animal, looks like a tiny horse. _____ 	4x0.5=2	Informative and General Awareness
4.	<p>Identify and name these things of First Aid box.</p> <div style="text-align: center;">  </div> <p>1. _____</p> <div style="text-align: center;">  </div> <p>2. _____</p> <div style="text-align: center;">  </div> <p>3. _____</p>	3x1=3	Identification and General Awareness



ARMY PUBLIC SCHOOL GWALIOR
CLASS - II
ACADEMIC SESSION 2023-24
WORKSHEET (SELF –ASSESSMENT)



Subject: Computer

Assignment No. : 5

Allotment Date: 25 October 2023

S.NO.	QUESTIONS	MARKS	NATURE
1.	<p>Tick the correct answer.</p> <p>(i) _____ helps us to fill colors in our drawing.</p> <p>a) Crop b) Color palette c) Skew</p> <p>(ii) _____ Feature is used to see only the selected part of the image.</p> <p>a) Crop b) Skew c) Save</p> <p>(iii) Dotted _____ shows that the object has been selected.</p> <p>a) Circle b) Rectangle c) Square</p>	3x1=3	Information
2.	<p>Fill in the blanks-</p> <p>a) _____ tool is used to select a part or whole drawing.</p> <p>b) _____ and _____ are the two tabs in Paint.</p> <p>c) _____ program is used to draw shapes, figures and cartoons.</p>	3x1=3	Understanding
3.	<p>Write 'T' for True or 'F' for False against the statements:-</p> <p>a) Save command is present in Quick Access Toolbar.</p> <p>b) Rotate feature creates a mirror image of the picture.</p>	4x1=4	Interdisciplinary

	<p>c) Resize is used to change the size of the drawing by making it smaller or bigger.</p> <p>d) Paint file can only be saved in PNG format.</p>		
--	--	--	--



ARMY PUBLIC SCHOOL GWALIOR
CLASS - II
ACADEMIC SESSION 2023-24
WORKSHEET (SELF –ASSESSMENT)




Subject: Art and Work Education

Assignment No. : 5

Allotment Date: 25 October 2023

S. NO.	QUESTIONS	MARKS	NATURE
1.	What are the primary colours? _____ _____	2	Observation
2.	What are the secondary colours? _____ _____	2	Understanding
3.	What are the tertiary colours? _____ _____	2	Knowledge
4.	What are the warm colours? _____ _____	2	Knowledge
5.	What are the cool colours? _____ _____	2	Knowledge



ARMY PUBLIC SCHOOL GWALIOR
CLASS - II
ACADEMIC SESSION 2023-24
WORKSHEET (SELF -ASSESSMENT)



Subject: Health and Physical Education

Assignment No. : 5

Allotment Date: 25 October 2023

S.NO.	QUESTIONS	MARKS	NATURE
1.	<p>Tick the correct answer.</p> <p>(i) Throwing is an action which involves the movement of your_____.</p> <p>a) hands b) head c) feet d) legs</p> <p>(ii) _____is used to grab/hold or catch the ball.</p> <p>a) shoulder b) legs c) foot d) hands</p> <p>(iii)Gross motor develops skills like</p> <p>a) catching b) rolling c) trapping d) all of these</p> <p>(iv) March Past is conducted for _</p> <p>a) small group b) 2-4 participants c) large group d) none of these</p>	4x1=4	Information
2.	<p>Fill in the blanks-</p> <p>a) March Past involves the movement of _____&_____.</p> <p>b) _____ is an outdoor game.</p> <p>c) _____ makes you fit and healthy.</p>	3x1=3	Understanding

3.	Write 'T' for True or 'F' for False against the statements:- a) March Past can be conducted for small group. b) Badminton is an outdoor game. c) Hockey is an indoor game.	3x1=3	Interdisciplinary
----	--	-------	-------------------



ARMY PUBLIC SCHOOL GWALIOR
CLASS - II
ACADEMIC SESSION 2023-24
WORKSHEET (SELF –ASSESSMENT)



Subject: Music and Dance
Allotment Date: 25 October 2023

Assignment No. : 5

S. NO.	QUESTIONS	MARKS	NATURE
1	How many classical dance forms are there in India ? a) 8 b) 9	1	Information
2	How many Gharanas are there in Kathak ? a) Four b) Six	1	Critical Thinking
3	PT Birju Maharaj ji belongs to which Art? a) Dance b) Music	1	Understanding
4	Dandiya is thedance. a) Folk b) Western	1	Information

5	How many sections are there in Teen taal ? a)8 b)4	1	Critical thinking
6	The wires in the musical instruments are called a) Strings b) Keys	1	Information
7	Example of an String Instrument a) Guitar b) Keyboard	1	Information
8	Complete the line- God's love is so _____. a) Wonderful b) Beautiful	1	Critical thinking
9	Jana Gana Mana In this phrase "Jana" refers to _____. a) People b) Mind	1	Understanding

10	National Anthem is written by _____. a) Rabindranath Tagore b) Mahatma Gandhi	1	Understanding
-----------	---	----------	---------------