



ARMY PUBLIC SCHOOL GWALIOR
CLASS - I
ACADEMIC SESSION 2023-24
WORKSHEET (SELF –ASSESSMENT)



Subject: English

Assignment No. : 5

Allotment Date: 25 October 2023

S.NO	QUESTIONS	MARKS	SKILLS
1.	Fill in the blanks with the 'he', 'she' or 'it': a. This is my school._____ is very big. b. My father is a doctor._____ works very hard. c. My grandmother teaches me._____ tells me stories too. d. My mother is very beautiful._____ cooks tasty food. e. I have a pet dog._____ brown and colour.	5×1=5	Analytical
2.	Write the meanings of the given words: a. hurt - _____ b. backyard - _____ c. needy - _____ d. fairy - _____	4 x 1 =4	Language and Communication, Cognitive
3.	Write the opposites of given words: a) Old _____ b) Love _____ c) Poor _____ d) Clever _____ e) Small _____	5×1=5	Analytical

4.	<p>Answer the following questions:</p> <p>Q1.With whom did Meena live? Ans. _____ _____</p> <p>Q2.What did moon fairy give to Meena? Ans. _____ _____</p> <p>Q3. What did Meena do when she find a parrot who was hurt? Ans. _____ _____</p>	3×2=6	Critical thinking
-----------	--	--------------	--------------------------



ARMY PUBLIC SCHOOL GWALIOR
CLASS - I
ACADEMIC SESSION 2023-24
WORKSHEET (SELF -ASSESSMENT)





Subject: Hindi

Assignment No. : 5

Allotment Date: 25 October 2023

संख्या	प्रश्न/उत्तर	अंक	प्रकृति
प्र.1	दसखड़ी बोलो ओर लिखो: क ----- ----- म ----- -----	4	बोधात्मक
प्र 2	लिखो किससे क्या बना माँ की रसोई में: 1. मटर - ----- 2. गोभी - ----- 3. चुकंदर- ----- 4. गाज - -----	4x1=4	गहन सोच
प्र-3	नीचे लिखे शब्दों के अर्थ लिखो: 1. मौखिक - _____ 2. धोबी - _____	4x1 =4	समस्या समाधान

	<p>3. चंचल - _____</p> <p>4. झुंड - _____</p>		
प्र-4	<p>सही शब्द लिखकर वाक्य पूरे करो।</p> <p>1 .तोते ने मोर को एक ----- दिया ।</p> <p>2 .छोटा बंदर बहुत था ।</p>	2 x1=2	भाषाई कौशल
प्र-5	<p>चित्रों के नाम लिखो</p> <div style="display: flex; justify-content: space-around; align-items: center;"> <div style="text-align: center;">  <p>-----</p> </div> <div style="text-align: center;">  <p>-----</p> </div> </div>	2x1=2	विश्लेषणात्मक
प्र-6	<p>निम्नलिखित प्रश्नों के उत्तर दीजिए -</p> <p>प्रश्न . गौरी और कौशल ने किसका बीज बोया?</p> <p>उत्तर .</p> <p>प्रश्न . पानी कौन लाया?</p> <p>उत्तर .</p> <p>प्रश्न .मोर कहाँ सोता था?</p> <p>उत्तर .</p> <p>प्रश्न . छोटा बंदर कैसा था?</p> <p>उत्तर .</p>	4x1=4	



ARMY PUBLIC SCHOOL GWALIOR
CLASS - I
ACADEMIC SESSION 2023-24
WORKSHEET (SELF -ASSESSMENT)




Subject: Mathematics

Allotment Date: 25 October 2023

Assignment No. : 5

S.NO	QUESTIONS	MARKS	SKILLS
1.	<p>Do multiplication as repeated addition</p> <p>_____ x _____ = _____ _____ + _____ + _____ + _____ = _____</p> <p>_____ x _____ = _____ _____ + _____ + _____ + _____ = _____</p> <p>_____ x _____ = _____ _____ + _____ + _____ + _____ + _____ = _____</p> <p>_____ x _____ = _____ _____ + _____ + _____ = _____</p> <p>_____ x _____ = _____ _____ + _____ + _____ + _____ + _____ + _____ = _____</p>	5×1=5	Computational skills

<p>2.</p>	<p>Complete the given table</p> <p>$4 \times 1 = 4$</p> <p>$4 \times 2 = \dots$</p> <p>$4 \times 3 = \dots$</p> <p>$4 \times 4 = 16$</p> <p>$4 \times 5 = 20$</p> <p>$4 \times 6 = \dots$</p> <p>$4 \times 7 = \dots$</p> <p>$4 \times 8 = 32$</p> <p>$4 \times 9 = \dots$</p> <p>$4 \times 10 = 40$</p>	<p>$5 \times 1 = 5$</p>	<p>Computational skills</p>
<p>3.</p>	<p>Fill in the boxes.</p> <ul style="list-style-type: none"> • $4 \times 2 =$ <input style="display: inline-block; width: 50px; height: 20px; vertical-align: middle;" type="text"/> • $2 \times 7 =$ <input style="display: inline-block; width: 50px; height: 20px; vertical-align: middle;" type="text"/> • $3 \times 8 =$ <input style="display: inline-block; width: 50px; height: 20px; vertical-align: middle;" type="text"/> • $3 \times 3 =$ <input style="display: inline-block; width: 50px; height: 20px; vertical-align: middle;" type="text"/> • $5 \times 5 =$ <input style="display: inline-block; width: 50px; height: 20px; vertical-align: middle;" type="text"/> • $5 \times 8 =$ <input style="display: inline-block; width: 50px; height: 20px; vertical-align: middle;" type="text"/> 	<p>$5 \times 1 = 5$</p>	<p>Problem solving</p>
<p>4.</p>	<p>Fill in the boxes with correct numbers</p> <ul style="list-style-type: none"> • $\dots \times 5 = 15$ • $4 \times \dots = 20$ • $\dots \times 2 = 8$ • $\dots \times 4 = 16$ • $3 \times \dots = 9$ 	<p>$5 \times 1 = 5$</p>	<p>Critical thinking</p>



ARMY PUBLIC SCHOOL GWALIOR
CLASS - I
ACADEMIC SESSION 2023-24
WORKSHEET (SELF –ASSESSMENT)


Subject: EVS

Assignment No. : 5

Allotment Date: 25 October 2023

S.NO	QUESTIONS	MARKS	SKILLS
1.	Fill in the blanks using the help box given below: (Bank, Policemen, playground, computer lab, railway station) a) _____ maintains law and order in the society. b) At school we learn to operate computer at _____. c) We deposit money in _____. d) We catch train at _____. e) We learn to play games at _____.	5×1=5	Application and analytical skills
2.	Match the following: 1. Story books a. Music room 2. Make paintings b. Postcards 3. Place of worship c. Library 4. Learn Music d. Art room 5. Post office e. Temple	5×1=5	Cognitive skills
3.	Write 'T' for true and 'F' for false in the given blanks below. a. We go to the hospital when we are ill. (.....) b. We buy grocery items from the bank. (.....) c. We play in the park. (.....) d. We deposit money in the bank . (.....) e. We should fight with our friends. (.....)	5×1=5	Analytical skills

4.	Answer the following questions: a. What is neighbourhood? Ans ._____ b. Who helps to maintain the law and order in the society? Ans ._____ c. What is the name of your school ? Ans ._____ d. Name any two places in your neighbourhood. Ans ._____ e. Name the different rooms of your school. Ans ._____	5×1=5	Language, critical thinking
-----------	--	-------	-----------------------------------








ARMY PUBLIC SCHOOL GWALIOR
CLASS - I
ACADEMIC SESSION 2023-24
WORKSHEET (SELF -ASSESSMENT)


Subject: G.K

Assignment No. : 5

Allotment Date: 25 October 2023

S.N	QUESTIONS	MARKS	SKILLS
Q.1	<p>Write the expression given by each face. Use the help box: (excitement, sadness, happiness, anger, surprise)</p> <div style="display: flex; flex-direction: column; align-items: center;"><div style="display: flex; align-items: center; margin-bottom: 20px;"><div style="margin-left: 20px;">-----</div></div><div style="display: flex; align-items: center; margin-bottom: 20px;"><div style="margin-left: 20px;">-----</div></div><div style="display: flex; align-items: center; margin-bottom: 20px;"><div style="margin-left: 20px;">-----</div></div><div style="display: flex; align-items: center; margin-bottom: 20px;"><div style="margin-left: 20px;">-----</div></div><div style="display: flex; align-items: center;"><div style="margin-left: 20px;">-----</div></div></div>	5 x 1 = 5	Social and emotional

Q.2	Draw any picture using different shapes and colour it.	5	Aesthetic & Creative



ARMY PUBLIC SCHOOL GWALIOR
CLASS - I
ACADEMIC SESSION 2023-24
WORKSHEET (SELF –ASSESSMENT)



Subject: Computer

Assignment No. : 5

Allotment Date: 25 October 2023

S.NO.	QUESTIONS	MARKS	NATURE
1.	<p>Tick the correct answer.</p> <p>(i) Data is a collection of _____ words, numbers and images.</p> <p>a) Simple b) Organized c) unorganized</p> <p>(ii) Computer takes instructions from us in the form of _____.</p> <p>a) Microwave b) Memory c) Data</p>	2x1=2	Information
2.	<p>Fill in the blanks-</p> <p>a) Computer stores the work in its _____.</p> <p>b) _____ is the meaningful and organized form of data.</p>	2x2=4	Understanding
3.	<p>Write 'T' for True or 'F' for False against the statements:-</p> <p>a) Mouse has a larger memory than humans. b) Memory is a collection of unorganized words. c) A computer does not forget anything. d) Information is unorganized form of data.</p>	4x1=4	Interdisciplinary



ARMY PUBLIC SCHOOL GWALIOR
CLASS - I
ACADEMIC SESSION 2023-24
WORKSHEET (SELF –ASSESSMENT)



Subject: Art and Work Education
Allotment Date: 25 October 2023

Assignment No. : 5

S. NO.	QUESTIONS	MARKS	NATURE
1	What are the primary colours? Ans _____.	2	Aesthetic ,creative skills
2	What are the secondary colours? Ans _____.	2	
3	What are the Tertiary colours? Ans _____.	2	
4	What are the warm colours? Ans _____.	2	
5	What are the cool colours? Ans _____.	2	



ARMY PUBLIC SCHOOL GWALIOR
CLASS - I
ACADEMIC SESSION 2023-24
WORKSHEET (SELF –ASSESSMENT)



Subject: Health and Physical Education
Allotment Date: 25 October 2023

Assignment No. : 5

S.NO.	QUESTIONS	MARKS	NATURE
1.	<p>Tick the correct answer.</p> <p>(i) Throwing is a action which involves the movement of your_</p> <p>a) hands b) head c) feet d) legs</p> <p>(ii) _____is used to grab/hold or catch the ball.</p> <p>a) shoulder b) legs c) foot d) hands</p> <p>(iii)Gross motor develops skills like</p> <p>a) catching b)rolling c)trapping d) all of these</p> <p>(iv)March Past is conducted for _</p> <p>a)small group b)2-4 participants c)large group d)none of these</p>	4x1=4	Information
2.	<p>Fill in the blanks-</p> <p>a)March Past involves the movement of _____&_____.</p> <p>b) _____ is an outdoor game.</p> <p>c) _____ makes you fit and healthy.</p>	3x1=3	Understanding

3.	Write 'T' for True or 'F' for False against the statements:- a) March Past can be conducted for small group. b) Badminton is an outdoor game. c) Hockey is an outdoor game.	3x1=3	Interdisciplinary
-----------	---	-------	-------------------



ARMY PUBLIC SCHOOL GWALIOR
CLASS - I
ACADEMIC SESSION 2023-24
WORKSHEET (SELF –ASSESSMENT)



Subject: Music and Dance

Assignment No. : 5

Allotment Date: 25 October 2023

S. NO.	QUESTIONS	MARKS	NATURE
1	Gandhi Jayanti celebrated on ? a) 2 October b) 5 October	1	Information
2	Who is the father of nation? a)Subhash Chandra Boss b)Mahatma Gandhi	1	Critical Thinking
3	What is the full name Gandhi ji? a)MohanDas Karamchand Gandhi b)Narendra Modi	1	Understanding
4	Which is the basic taal of kathak? a)Teentaal b)Dadra taal	1	Information
5	Gandhi Jayanti is thefestival? a)National b)Colour	1	Critical thinking
6	Folk music tells about ? a) The states. b) The house	1	Information

7	Complete the line saare jahan se acha , Hindustan? a)Humara b)Tumhara	1	Information
8	Complete the line Choti Chotl gaiya , chote chote? a) Gaiya b) Gwaal	1	Critical thinking
9	What helps to play Rhytm witwith hands? a) Clapping b) kicking	1	Understanding
10	Choto so mero madan? a) Gopal b) Laal	1	Understanding