

ARMY PUBLIC SCHOOL GWALIOR
CLASS - X
ACADEMIC SESSION 2023-24
REVISION WORKSHEET (SELF –ASSESSMENT)

Subject: English

Assignment No. : 5

Allotment Date: 12 September 2023

S.NO	QUESTIONS	MARKS	NATURE
01	How can you say that tea was first drunk in China?	6	Information
02	<p><u>Read the given extract and answer the questions that follow:</u></p> <p>The train pulled out of the station. Pranjol buried his nose in his detective book again. Rajvir too was an ardent fan of detective stories, but at the moment he was keener on looking at the beautiful scenery. It was green, green everywhere. Rajvir had never seen so much greenery before. Then the soft green paddy fields gave way to tea bushes. It was a magnificent blue. Against the backdrop of densely wooded hills, a sea of tea bushes stretched as far as the eye could see. Dwarfing the tiny tea plants were tall sturdy shade trees and amidst the orderly rows of bushes busily moved doll-like figures. In the distance was an ugly building with smoke billowing out of tall chimneys.</p> <p>2.1 What was Rajvir an ardent fan of? 2.2 Who were the doll-like figures? 2.3 How has a building at a distance been described? 2.4 Where was Rajvir headed towards?</p>	4	Understanding
03	What is the importance of breads for the Goans?	5	HOTS
04	Scientists contribute to make the world a better place. Griffin is an antithesis to this statement. Justify.	5	HOTS
05	<p><u>Read the following extract and answer the questions that follow:</u></p> <p>No use to say 'O there are other balls': An ultimate shaking grief fixes the boy As he stands rigid, trembling, staring down All his young days into the harbour where His ball went.</p> <p>5.1 The boy remembers his _____ days. 5.2 How does the boy feel when he loses his ball? 5.3 Where has the boy lost his ball? 5.4 Where is the boy standing? 5.5 The boy who has lost ball is in the state of...</p>	5	Analytical Skills
06	'Amanda is alone but not lonely in the world she envisions.' Justify the statement with reference to any one image she pictures in her mind.	5	Critical Thinking and Problem

	<p style="text-align: center;">OR</p> <p>The forest undergoes tremendous transformation overnight. Discuss with reference to the poem "The Trees".</p>		Solving
07	<p>GRAMMAR</p> <p>The following passage has not been edited. There is one error in each line. Write the incorrect word and the correction against each line.</p> <p>1) In Himalayas, the desert is turning green _____ Climate change in an Indian region of _____ Ladakh has shrunk glaciers or has made _____ rainfall and temperature unpredictable. Water has _____. _____ needed to irrigating the fields. _____</p> <p>2) In the prisoner's room a candle is _____ Burning dimly. A prisoner himself _____ sat by the table. Only him back, _____ The hair by his head, and his _____ hands are visible from outside. _____ .</p>	10	Evaluation



ARMY PUBLIC SCHOOL GWALIOR
CLASS - X
ACADEMIC SESSION 2023-24
REVISION WORKSHEET (SELF –ASSESSMENT)

Subject: Hindi

Assignment No. : 5

Allotment Date: 12 September 2023

S. NO.	QUESTIONS	MARKS	NATURE
1	<p>निम्नलिखित अपठित गद्यांश को ध्यान से पढ़ें और प्रश्नों का उत्तर दें :</p> <p>भारत में हरित क्रांति का मुख्य उद्देश्य देश को खाद्यान्न मामले में आत्मनिर्भर बनाना था, लेकिन इस बात की आशंका किसी को नहीं थी कि रासायनिक उर्वरकों और कीटनाशकों का अंधाधुंध इस्तेमाल न सिर्फ खेतों में, बल्कि खेतों से बाहर मंडियों तक में होने लगेगा। विशेषज्ञों के मुताबिक रासायनिक उर्वरकों और कीटनाशकों का प्रयोग खाद्यान्न की गुणवत्ता के लिए सही नहीं है, लेकिन जिस रफ्तार से देश की आबादी बढ़ रही है, उसके मद्देनजर फसलों की अधिक पैदावार जरूरी थी। समस्या सिर्फ रासायनिक खादों के प्रयोग की ही नहीं है। देश के ज्यादातर किसान परंपरागत कृषि से दूर होते जा रहे हैं।</p> <p>दो दशक पहले तक हर किसान के यहाँ गाय, बैल और भैंस खूटों से बँधे मिलते थे। अब इन मवेशियों की जगह ट्रैक्टर-ट्राली ने ले ली है। परिणामस्वरूप गोबर और घूरे की राख से बनी कंपोस्ट खाद खेतों में गिरनी बंद हो गई। पहले चैत-बैसाख में गोहूँ की फसल कटने के बाद किसान अपने खेतों में गोबर, राख और पत्तों से बनी जैविक खाद डालते थे। इससे न सिर्फ खेतों की उर्वरा-शक्ति बरकरार रहती थी, बल्कि इससे किसानों को आर्थिक लाभ के अलावा बेहतर गुणवत्ता वाली फसल मिलती थी।</p> <p>(क) हमारे देश में हरित क्रांति का उद्देश्य क्या था?</p> <p>(ख) खाद्यान्नों की गुणवत्ता बनाए रखने के लिए किनका प्रयोग सही नहीं था?</p> <p>(ग) विशेषज्ञ हरित क्रांति की सफलता के लिए क्या आवश्यक मानने लगे और क्यों?</p> <p>(घ) हरित क्रांति ने किसानों को परंपरागत कृषि से किस तरह दूर कर दिया?</p> <p>(ङ) हरित क्रांति का मिट्टी की उर्वरा शक्ति पर क्या असर हुआ?</p> <p>निम्नलिखित गद्यांश को ध्यानपूर्वक पढ़कर दिए गए प्रश्नों के उत्तर दीजिए चंपारण सत्याग्रह के बीच जो लोग गांधी जी के संपर्क में आए वे आगे चलकर देश के निर्माताओं में गिने गए। चंपारण में गांधी जी न सिर्फ सत्य और अहिंसा का सार्वजनिक हितों में प्रयोग कर रहे थे बल्कि हलुवा बनाने से लेकर सिल पर मसाला</p>	5	Understanding
		5	

	<p>पीसने और चक्की चलाकर गेहूँ का आटा बनाने की कला भी उन बड़े वकीलों को सिखा रहे थे, जिन्हें गरीबों की अगुवाई की जिम्मेदारी सौंपी जानी थी। अपने इन आध्यात्मिक प्रयोगों के माध्यम से वे देश की गरीब जनता की सेवा करने और उनकी तकदीर बदलने के साथ देश को आजाद कराने के लिए समर्पित व्यक्तियों की एक ऐसी जमात तैयार करना चाह रहे थे जो सत्याग्रह की भट्टी में उसी तरह तपकर निखरे, जिस तरह भट्टी में सोना तपकर निखरता और कीमती बनता है।</p> <p>गांधी जी की मान्यता थी कि एक प्रतिष्ठित वकील और हज़ामत बनाने वाले हज़ामत में पेशे के लिहाज़ से कोई फ़र्क नहीं, दोनों की हैसियत एक ही हैं। उन्होंने पसीने की कमाई को सबसे अच्छी कमाई माना और शारीरिक श्रम को अहमियत देते हुए उसे उचित प्रतिष्ठा व सम्मान दिया था। कोई काम बड़ा नहीं, कोई काम छोटा नहीं, इस मान्यता को उन्होंने प्राथमिकता दी ताकि साधन शुद्धता की बुनियाद पर एक ठीक समाज खड़ा हो सके। आज़ाद हिंदुस्तान आत्मनिर्भर, स्वावलंबी और आत्म-सम्मानित देश के रूप में विश्व-बिरादरी के बीच अपनी एक खास पहचान बनाए और फिर उसे बरकरार भी रखे।</p> <p>(क) किसी काम या पेशे के बारे में गांधी जी की मान्यता क्या थी?</p> <p>(ख) गांधी जी सबसे अच्छी कमाई किसे मानते थे?</p> <p>(ग) चंपारण सत्याग्रह के दौरान गांधी जी आध्यात्मिक प्रयोग क्यों कर रहे थे?</p> <p>(घ) गांधी जी लोगों को शारीरिक श्रम का महत्त्व किस तरह समझा रहे थे?</p> <p>(ङ) शारीरिक श्रम को महत्त्व देने और हर काम को समान समझने के पीछे गांधी जी की दूरदर्शिता क्या थी?</p>		
2	<p>दिए गए संकेत बिंदुओं की सहायता से विषय ' मन के हारे हार है मन के जीते जीत ' पर 150 शब्दों में अनुच्छेद लिखिए।</p> <ul style="list-style-type: none"> • निराशा अभिशाप • दृष्टिकोण परिवर्तन • सकारात्मक सोच 	5	Critical Thinking
3	<p>बिजली के खराब मीटर की शिकायत करते हुए बिजली विभाग के अधिशासी अभियंता को शिकायती पत्र लिखिए।</p>	5	Communication skill
4	<p>निम्नलिखित पंक्तियों का काव्य-सौंदर्य स्पष्ट कीजिए-</p> <p>1. हरि आप हरो जन री भीर । द्रोपदी री लाज राखी, आप बढ़ायो चीर।</p>	6	Understanding

5	<p>भगत कारण रूप नरहरि, धर्यो आप सरीर।</p> <p>2. बूढतो गजराज राख्यो, काटी कुणजर पीर । दासी मीराँ लाल गिरधर, हरो म्हारी भीर</p> <p>नीचे दिए गए प्रश्नों के सही विकल्प छाँटिए ।</p> <p>1. आमरण में कौन सा समास है।</p> <p>A) अव्ययीभाव समास</p> <p>B) तत्पुरुष समास</p> <p>C) कर्मधारय समास</p> <p>D) द्विगु समास</p> <p>2. नीलगगन – शब्द में समास बताइए</p> <p>A) तत्पुरुष समास</p> <p>B) द्विगु समास</p> <p>C) कर्मधारय समास</p> <p>D) बहुव्रीहि समास</p> <p>3. पंचतंत्र – शब्द में समास पहचानिए</p> <p>A) द्वंद्व समास</p> <p>B) अव्ययीभाव समास</p> <p>C) कर्मधारय समास</p> <p>D) द्विगु समास</p> <p>4. नर-नारी – शब्द में समास बताइए</p> <p>A) द्वंद्व समास</p>	5	Critical Thinking
---	--	---	-------------------

	<p>B) द्विगु समास</p> <p>C) बहुव्रीहि समास</p> <p>D) तत्पुरुष समास</p> <p>5. महादेव – शब्द में समास छाँटिए</p> <p>A) द्विगु समास</p> <p>B) बहुव्रीहि समास</p> <p>C) तत्पुरुष समास</p> <p>D) द्वंद्व समास</p> <p>लाइट वाशिंग पाउडर ' नामक उत्पाद हेतु लगभग 50-60 में एक विज्ञापन तैयार कीजिए।</p>		
6	<p>निम्नलिखित प्रश्नों के उत्तर 60 - 70 शब्दों में लिखिए ।</p>	3	Analytical Thinking
7	<p>ततार्रा -वामीरो की त्यागमयी मृत्यु के पश्चात कौन -सा सुखद परिवर्तन आया ?</p> <p>प्रकृति को प्रायः सहनशील माना जाता है । लेखक ने यह क्यों लिखा है कि -"नेचर की सहनशक्ति की एक सीमा होती है"।</p> <p style="text-align: center;">X</p>	6	Evaluation

--	--	--	--



**ARMY PUBLIC SCHOOL GWALIOR
CLASS - X**

**ACADEMIC SESSION 2023-24
REVISION WORKSHEET (SELF –ASSESSMENT)**

Subject: Mathematics

Assignment No. : 5

Allotment Date: 12 September 2023

S. N.	QUESTIONS	MARKS	NATURE
1	If the distance between the points A(-3,-14) and B(a,-5) is 9 units then a=? (a) 5 (b) 6 (c) 7 (d) -3	1	Understanding
2	The line segment joining L(9,2) and N(3,6) is a diameter of a circle with a center C .then the radius of the circle is ; (a) 5 (b) $\sqrt{6}$ (c) $\sqrt{7}$ (d) $\sqrt{13}$	1	Understanding
3	If the mid-point of the line segment joining the points P(6,b-2) and Q(-2,4) is (2,-3) then the value of b is: (a) -5 (b) -6 (c) -7 (d) - 8	1	Evaluation
4	If (3,2) ,(6,3),(x,y) and (6,5) are the vertices of a parallelogram, then the value of x+y is:: (a) 15 (b)16 (c) 17 (d) 18	1	Application
5	. If cosec A-cotA =1/3 ,then the value of cosec A+cotA =? (a) 1 (b) 2 (c) 3 (d) 4	1	Analytical Thinking
6	. If $\sin\theta = \frac{a}{b}$, then $\cos\theta$ is equal to (a) $\frac{b}{\sqrt{b^2 - a^2}}$ (b) $\frac{\sqrt{b^2 - a^2}}{a}$ (c) $\frac{\sqrt{b^2 - a^2}}{b}$ (d) $\frac{a}{\sqrt{b^2 - a^2}}$	1	Analytical Thinking
7	. If $\tan A + \cot A = 4$, $\tan^4 A + \cot^4 A =$ (a) 196 (b) 194 (c) 192 (d) 190	1	Application
8.	$(\cos^4 A - \sin^4 A)$ is equal to: (a) $1 - 2 \cos^2 A$ (b) $2 \sin^2 A - 1$ (c) $\sin^2 A - \cos^2 A$ (d) $2 \cos^2 A - 1$	1	Analytical Thinking
9	If $5 \tan \theta = 4$, then find the value of $(5 \sin \theta - 4 \cos \theta) / (5 \sin \theta + 4 \cos \theta)$ is = (a) 1 (b) 0 (c) 3 (d) 4	1	Evaluation
10	Directions: In the following questions, a statement of assertion (A) is followed by a statement of reason (R). Mark the correct choice as: (a) Both assertion (A) and reason (R) are true and reason (R) is the correct explanation of assertion (A). (b) Both assertion (A) and reason (R) are true but reason	2	Competency based

	<p>(R) is not the correct explanation of assertion (A). (C) Assertion (A) is true but reason (R) is false. (d) Assertion (A) is false but reason (R) is true.</p> <p>Assertion: The point (-1,6) divides the line segment joining the points (-3,10) and (6,-8) in the ratio 2:7 internally.</p> <p>Reason: Mid point of the line segment PQ whose co-ordinate are P(x₁,y₁) and Q(x₂,y₂) is given by</p> $R\left(\frac{x_1+x_2}{2}, \frac{y_1+y_2}{2}\right)$		
11	. If $\sin A + \sin^2 A = 1$, then $\cos^2 A + \cos^4 A = ?$	2	problem solving
12.	Find the value of $\sin^2 60^\circ - 2 \tan 45^\circ - \cos^2 30^\circ = ?$	2	Analytical Thinking
13	Find the perimeter of a triangle with vertices (0,4) ,(0,0) and (3,0).	2	HOTS
14.	In what ratio is the line segment joining (-2,-3) and (3,7) divided by y-axis.	2	Analytical Thinking Problem solving
15.	. Prove that : $\frac{\sin A - 2 \sin 3A}{2 \cos 3A - \cos A} = \tan A$	3	Analytical Thinking
16.	Find the value of $(1 + \tan^2 \theta) (1 - \sin \theta) (1 + \sin \theta)$	3	Evaluation Problem solving
17.	$\frac{1 - \sin A}{1 + \sin A} + \frac{1 + \sin A}{1 - \sin A} = ?$	3	Application
18.	If four vertices of a parallelogram taken in order are (-3, -1), (a, b), (3, 3) and (4, 3). Then a : b = ?	3	Problem solving
19.	. If the points A(2, 3), B(5, k) and C(6, 7) are collinear, then find the value of k	3	Critical thinking and Problem solving
20.	<p>The class X students school in krishnagar have been allotted a rectangular plot of land for their gardening activity. Saplings of Gulmohar are planted on the boundary at a distance of 1 m from each other. There is triangular grassy lawn in the plot as shown in the figure. The students are to sow seeds of flowering plants on the remaining area of the plot.</p> <ol style="list-style-type: none"> 1. Taking A as origin, find the coordinates of P and Q 2. Find the distance between P and Q (Using distance formula) 3. Find the perimeter of triangle PQR <p>(OR)</p>	1+1+2	Competency based

	Find the nature of the triangle.		
21.	Prove that $(1+\cot\theta-\operatorname{cosec}\theta)(1+\tan\theta+\sec\theta) = 2$.	5	HOTS



ARMY PUBLIC SCHOOL GWALIOR
CLASS - X
ACADEMIC SESSION 2023-24
REVISION WORKSHEET (SELF –ASSESSMENT)


Subject: Science

Assignment No. : 5

Allotment Date: 12 September 2023

S. NO.	QUESTIONS	MARKS	NATURE
1	Q1. What is the magnification of the images formed by plane mirrors and why? Q2. Define water of crystallisation Q3. Define Respiration. Q4. What do you mean by reflex action?	1 1 1 1	Information
2	Q4. How asexual reproduction is different from sexual reproduction? Q5. If the image formed by a spherical mirror for all positions of the object placed in front of it is always erect and diminished , what type of mirror is it? Draw a labelled ray diagram to support your answer. Q6. Name a device that you can use to maintain a potential difference between the ends of a conductor. Explain the process by which this device does so.	3 3 3	Understanding
3	Q7. An object is placed at a distance of 12 cm in front of a concave mirror of radius of curvature 30 cm. List four characteristics of the image formed by the mirror. Q8. What are the different types of indicators, list their effects on acids and base separately.	3 3	HOT
4	Q9. Describe any three methods of asexual reproduction. Q10. Explain presbyopia and astigmatism.	3 3	Interdisciplinary
5	Q11. Explain chlor alkali process also write the uses of its products. Q12. What is POP , write its preparation process and uses.	3 3	Analytical Skill
6	Q13. Cerebral hemispheres are largest part of the brain. They are most specialized and complex part of the brain. Each hemisphere has association areas which stores information and experience. Reflex actions are nerve mediated, autonomic involuntary actions that occur without the will of an animal. Spinal cord controls reflex actions. Based on the above given information answer the following questions: (a) Which is the largest part of human brain? What is the unique feature of that? (b) What is the function of association areas in cerebral hemisphere?	4	Critical Thinking and Problem Solving

	<p>(c) (i) What are reflex actions? Give examples (ii) What controls the reflex actions? OR Which part of the human brain is: (i) Site of intelligence and memory (ii) Responsible for maintaining the posture and balance of the body?.</p>		
7	<p>Q13. A person uses convex lens spectacles. What vision defect does he have? Draw a diagram (i) to show the defective eye (ii) to show the correction with the lens.</p>	5	Evaluation




**ARMY PUBLIC SCHOOL GWALIOR
CLASS - X**


**ACADEMIC SESSION 2023-24
REVISION WORKSHEET (SELF –ASSESSMENT)**


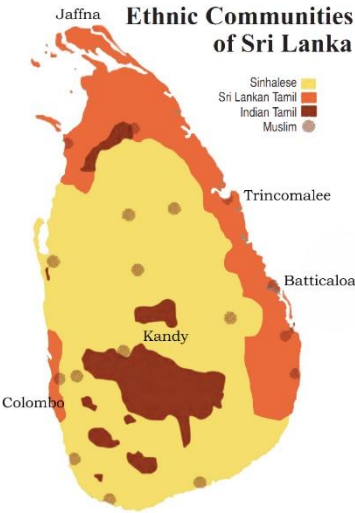
Subject: Social Science


Assignment No. : 5

Allotment Date: 12 September 2023

S. NO.	QUESTIONS	MARKS	NATURE																							
1.	<p>COMPARISON OF COUNTRIES</p> <table border="1"> <thead> <tr> <th rowspan="2">Country</th> <th colspan="3">Monthly incomes of citizens (in Rupees)</th> </tr> <tr> <th>I</th> <th>II</th> <th>III</th> </tr> </thead> <tbody> <tr> <td>A</td> <td>5,500</td> <td>7,500</td> <td>19,000</td> </tr> <tr> <td>B</td> <td>11,500</td> <td>10,500</td> <td>10,000</td> </tr> <tr> <td>C</td> <td>1,000</td> <td>1,000</td> <td>30,000</td> </tr> <tr> <td>D</td> <td>3,500</td> <td>3,500</td> <td>25,000</td> </tr> </tbody> </table> <p>As per the data given above which country has a comparatively equitable distribution of income?</p> <p>a) Country A b) Country B c) Country C d) Country D</p>	Country	Monthly incomes of citizens (in Rupees)			I	II	III	A	5,500	7,500	19,000	B	11,500	10,500	10,000	C	1,000	1,000	30,000	D	3,500	3,500	25,000	1	Understanding
Country	Monthly incomes of citizens (in Rupees)																									
	I	II	III																							
A	5,500	7,500	19,000																							
B	11,500	10,500	10,000																							
C	1,000	1,000	30,000																							
D	3,500	3,500	25,000																							
2.	 <p>The given image on a memorial stone, Goa Museum, tenth century CE showing the evidences of _____</p> <p>a) War between gods b) Oceanic trade c) The crisis of food d) Death due to potato famine</p>	1	Critical Thinking and Problem Solving																							
3.	<p>Rajesh, an ambitious entrepreneur, opened a wholesale store to sell locally-made textiles. He relied on the services of Priya, a skilled logistics coordinator, who efficiently organized the transportation and storage of the goods. Additionally, Rajesh sought assistance from Ankit, a knowledgeable banker, who provided financial support to</p>	1	Understanding																							

	<p>expand his business. Together, they exemplified the vital role of tertiary sector activities in supporting the production and trade of goods. Which sector of the economy includes activities such as transportation, storage, communication, banking, and trade?</p> <p>a) Quaternary sector b) Tertiary sector c) Primary sector d) Secondary sector</p>		
<p>4.</p>	<p>Look at the world map given below and answer the following question.</p>  <p>Which of the following deductions can DEFINITELY be made from the map?</p> <p>Argentina is the largest federal country in South America. Germany has states that share power with the centre. Asia has the maximum number of federal nations. China does not have provincial administrations.</p>	<p>1</p>	<p>Critical Thinking and Problem Solving</p>
<p>5.</p>	<p>Which of the following statements accurately distinguishes the prudential and moral reasons for power sharing?</p> <p>a) Prudential reasons emphasize the unity of the nation, while moral reasons prioritize the exercise of power by the minority. b) Prudential reasons argue for the legitimacy of a government through citizen participation, while moral reasons highlight the negative consequences of power sharing. c) Prudential reasons advocate for imposing the will of the majority community, while moral reasons highlight the oppressive nature of power sharing. d) Prudential reasons focus on reducing social conflict and ensuring political stability, while moral reasons emphasize the value of power sharing in a democratic system.</p>	<p>1</p>	<p>Understanding</p>
<p>6.</p>	<p>Write any one major reason for the depletion of forest cover in India.</p>	<p>1</p>	<p>Information</p>
<p>7.</p>	<p>“The destruction of biodiversity is highly correlated with the loss of cultural diversity.” Give fact to support this statement.</p>	<p>1</p>	<p>Understanding</p>

8.	 <p>i) Who is being portrayed in the given image? ii) What steps of the given person made people hostile towards him?</p>	1	Critical Thinking and Problem Solving
9.	<p>Study the map thoroughly and answer the following –</p>  <p>a) Which language is the prominent language of Sri Lanka? b) The minorities where demanding which area as an independent Eelam. c) “The distrust between the two communities turned into widespread conflict. It soon turned into a civil war.” What were the steps of government which led to civil war?</p>	3	HOTS
10.	<p>Why do we use averages? Are there any limitations to their use? Illustrate with your own examples related to development.</p>	3	Information
11.	<p>“Tertiary sector activities help in the development of the primary and secondary sectors.” Evaluate the statement. OR “ ‘Primary sector’ was the most important sector of economic activity at the initial stages of development.” Evaluate the statement.</p>	3	Information
12.	<p>How did the Greek war of independence mobilize nationalist feelings among the educated elite across Europe? Explain. OR How did ideas of national unity in early nineteenth-century Europe allied to the ideology of liberalism? Explain.</p>	5	Analytical Skill

<p>13.</p>	<p>Analyse the given picture and answer the following questions:</p>  <p>a) "Floods are the rising resistance against the multi-purpose projects." Examine the statement.</p> <p>b) How is Water Harvesting a viable alternative both socially and economically? Explain</p> <p>c) Mention any two steps which must be taken during flood condition.</p>	<p>5</p>	<p>HOTS</p>
<p>14.</p>	<p>What are the main key features of federalism? Explain</p>	<p>5</p>	<p>Information</p>
<p>15.</p>	<p>Read the case given below carefully and answer the questions that follow:</p> <p style="text-align: center;">The Independence Day Pledge, 26 January, 1930</p> <p>'We believe that it is the inalienable right of the Indian people, as of any other people, to have freedom and to enjoy the fruits of their toil and have the necessities of life, so that they may have full opportunities of growth. We believe also that if any government deprives a people of these rights and oppresses them, the people have a further right to alter it or to abolish it. The British Government in India has not only deprived the Indian people of their freedom but has based itself on the exploitation of the masses, and has ruined India economically, politically, culturally, and spiritually. We believe, therefore, that India must sever the British connection and attain Purna Swaraj or Complete Independence'.</p> <p>(i) What was considered as an inalienable right? 1</p> <p>(ii) Why did Indians ask for Purna Swaraj? 1</p> <p>(iii) Examine the views of Indians towards the British Government in reference to this passage. 2</p> <p style="text-align: center;">OR</p> <p>Explain the significance of the Lahore Session of Congress (1930).</p>	<p>4</p>	<p>Evaluation</p>

16.

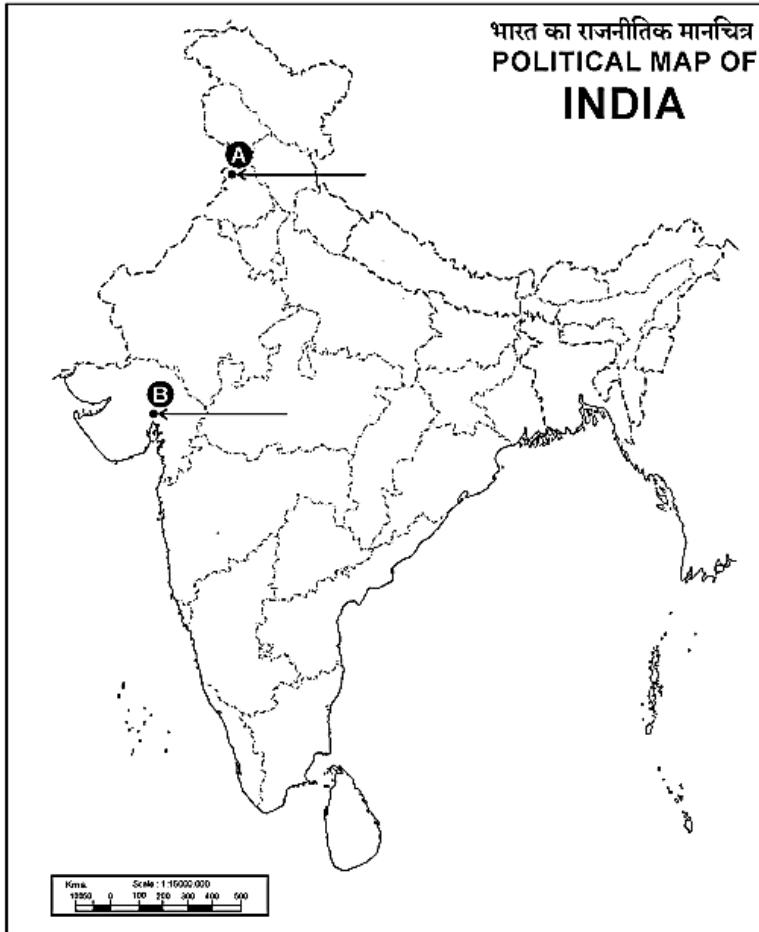
(Map Work)

a) Two places A and B have been marked on the given outline map of India. Identify them and write their correct names on the lines drawn near them.

- A. The place where the Jallianwala Bagh incident took place.
- B. The place where Gandhiji organized 'Satyagraha' in favour of cotton mill workers.

b) On the same outline map of India locate and label any TWO of the following with suitable Symbols.

- (i) Hirakund Dam
- (ii) An area having arid soil
- (iii) Kaziranga National Park



4

Information



ARMY PUBLIC SCHOOL GWALIOR
CLASS - X



ACADEMIC SESSION 2023-24
REVISION WORKSHEET (SELF –ASSESSMENT)

Subject: Work Education

Assignment No. : 4

Allotment Date: 12 September 2023

S.NO	QUESTIONS	MARKS
1.	The word 'Kond' means – (a) The blue fountain (b) The green tree (c) The green mountain (d) The red chilli	1
2.	The word 'Gond' comes from theexpression (a) Dravidian (b) Roman (c) Carnatic (d) Sanskrit	1
3.	Why the Gond People paint every natural thing as a form of respect and reverence? (a) because they are playful. (b) They are God fearing. (c) They are religious. (d) They believe that everything is inhabited by a spirit.	1
4.	Gond paintings can best be described as ‘..... work’. (a) Brush (b) Bubble (c) lines (d) None of the above	1
5.	In Gond paintings there has to be the use of vivid colours (a) Dull (b) bright (c) hue (d) tint	1
6.	Who are Pardhan Gonds ? (a) Singers (b) Actors (c) Players (d) Fighters	1
7.	. Wall paintings are Known asin Hindi. (a) भित्ति चित्र (b) मिट्टी चित्र (c) दिघना	1
8.	Floor paintings by Gonds are also known as in Hindi. (a) Digna (b) Ligna (c) Chikna (d) sukhna	1
9.	Which two tribes are predominant in Madhya Pradesh ? (a) Oreo and Halba	1

	(b) Munda and Lohra (c) Gond and Korku (d) Halba and Asur	
10.	Gond is the largest tribes in India. (a) Correct (b) Incorrect (c) may be (d) I am not sure.	1



ARMY PUBLIC SCHOOL GWALIOR
CLASS - X
ACADEMIC SESSION 2023-24
REVISION WORKSHEET (SELF –ASSESSMENT)



Subject: Computer

Assignment No. : 4

Allotment Date: 12 September 2023

S.NO.	QUESTIONS	MARKS	NATURE
1	<p>Choose and write the correct option (MCQ):-</p> <p>(i). For Import/Export data operation. Click on :</p> <ul style="list-style-type: none">(a) Home Tab(b) External Data Tab(c) Import/Export Tab(d) None of these <p>(ii) What plugs in the network card located in every computer connected in LAN?</p> <ul style="list-style-type: none">(a) Ethernet cables(b) Switch(c) Hub(d) Port <p>(iii) To apply filter, you need to apply : :</p> <ul style="list-style-type: none">(a) Encryption(b) Sort(c) Criteria(d) Glue <p>(iv) This does not assign a specific frequency to each user on the communication network:-</p> <ul style="list-style-type: none">(a) GSM(b) CDMA(c) TDMA(d) None of these.	$\frac{1}{2} \times 4=2$	Information
2	<p>Fill in the blanks-</p> <p>(i) Sorting option is under _____ group.</p> <p>(ii) 2G, 3G and 4G are _____ internet access technologies.</p>	$\frac{1}{2} \times 4=2$	Understanding and Problem Solving

	<p>(iii) To establish a wired network, one requires – cards, network software, _____ and Ethernet cables.</p> <p>(iv) A wireless network interface card bears an _____.</p>		
3	<p>Write short notes on following-</p> <p>(i) Server</p> <p>(ii) WLL</p> <p>(iii) Access Point</p> <p>(iv) Encryption</p>	$\frac{1}{2} \times 4 = 2$	Critical Thinking
4	<p>Answer the following questions -</p> <p>(i) Find out and write names of the file types in which access data can be exported?</p> <p>(ii) Give any two advantages of connecting computers into network.</p> <p>(iii) Write any two differences between Peer to Peer networking and Client Server Networking.</p> <p>(iv) Write three features of WLL technology..</p>	$1 \times 4 = 4$	HOT



**ARMY PUBLIC SCHOOL GWALIOR
CLASS - X**



**ACADEMIC SESSION 2023-24
REVISION WORKSHEET (SELF –ASSESSMENT)**

Subject: Music (Vocal, Dance)

Assignment No. : 4

Allotment Date: 12 September 2023

S. NO.	QUESTIONS	MARKS	NATURE
1	How many beats (matra) in Dadra taal? A) 10 B) 6	2	Informative
2	How many tali in Dadra taal? A) 3 B) 1	2	Informative
3	How many khali in Dadra taal ? A) 3 B) 1	2	Informative
4	How many vibhag in Dadra taal? A) 2 B) 3	2	Informative
5	How many types of mudras? A) 2 B) 3	2	Informative
6.	Joint hand gesture is made with how many hands? A) 1 B) 2	2	Informative
7.	What is the posture made with both hands called? A) Sanyukta mudra B) Asanyukta mudra	2	Informative
8.	How many numbers of Sanyukta hasta mudra have? A)28 B)2	2	Informative
9,	What is the gesture made with one hand called? A)Sanyukta mudra B) Asanyukta mudra	2	Informative

10	Which of these is called joint hand posture?	2	Informative
-----------	---	----------	--------------------



**ARMY PUBLIC SCHOOL GWALIOR
CLASS - X**

**ACADEMIC SESSION 2023-24
REVISION WORKSHEET (SELF –ASSESSMENT)**

Subject: Health and Physical Education

Assignment No. : 4

Allotment Date: 12 September 2023

S.N	QUESTIONS	NATURE	MARKS
1	MCQ A) How many players from each team are allowed to be on the field of Handball? i) 7 ii) 5 iii) 6 iv) 8	Understanding)	4×1=4
	B) What size is Handball court? i) 20 X 30 m ii) 20 X 40 m iii) 20 X 50 m iv) 20 X 60 m	Informatory	
	C) Penalties are thrown from what distance? i) 11 m ii) 9 m iii) 7 m iv) 4 m	Analytical	

	<p>D) Who is Babacar Fall?</p> <p>i) American Handball Player</p> <p>ii) Former president of European Handball Federation</p> <p>iii) Italian Handball Coach</p> <p>iv) Architect of African Handball</p>	Information	
2.	<p>B) Fill In The Blanks :-</p> <p>i) _____ is one of the best handballer in history.</p>	Informatory	3×1=3
	<p>ii) The playing area is _____ m.</p>	Informatory	
	<p>iii) After Three-minute suspensions, player get a _____ card.</p>	Understanding	
3.	<p>True/False</p> <p>i. Germany is cradle of the Handball?</p> <p>True</p> <p>False</p>	Understanding	3×1=3
	<p>ii. Beach Handball does not exist?</p> <p>True</p> <p>False</p>	Understanding	
	<p>iii. There is no shot clock?</p> <p>True</p> <p>False</p>		

