



**ARMY PUBLIC SCHOOL GWALIOR**  
**CLASS - VI**  
**ACADEMIC SESSION 2023-24**  
**REVISION WORKSHEET (SELF –ASSESSMENT)**

Subject: English

Assignment No. : 4

Allotment Date: 12 September 2023

S. NO.	QUESTIONS	MARKS	NATURE
1.	<p><b>Read the Passage carefully.</b></p> <p>Once there was a miser who sold all his possessions and, with the money, bought a great lump of gold, dug a deep hole at the edge of the garden, and there he buried his gold. Once a day, thereafter, the miser went to the garden, dug up his gold, and embraced it lovingly. One of the miser's workmen wondered why his master spent so much time in the garden. One day, he hid behind a tree and soon discovered the secret of the hidden treasure. That night, when the miser was fast asleep, the workman crept into the garden and stole the lump of gold. When the miser found that his gold was gone, he tore his hair and cried aloud in his despair. A neighbour came running to see what the matter was, and the grief-stricken miser told him what had happened. Then the neighbours said, "Pray to stop your weeping. Go and find a stone. Place the stone in the hole and imagine that it is your lump of gold. The stone will serve your purpose, for you never meant to use the gold anyway." "To a miser, what he has is of no more use than what he has not."</p> <p><b>Complete the following statements by selecting the most appropriate options from the ones given below.</b></p> <p>(i) How did the miser get the lump of gold?</p> <p>a. By selling all he had b. While digging the garden? c. From his ancestors d. From his neighbour</p> <p>(ii) Why did miser spend so much time in the garden?</p> <p>a. He was a nature lover. b. He liked watching children playing in the garden. c. To keep an eye on his hidden treasure. d. To change the place of his lump of gold.</p> <p>(iii) By whom was the gold stolen?</p> <p>a. A thief b. His neighbour c. The miser's workman d. The miser himself</p> <p>(iv) The neighbour advised the miser to put a stone in the hole</p>	5	Informative and Understanding

	<p>because ____.</p> <p>a. Gold is like a stone only.</p> <p>b. The miser would never use the gold, hence no difference between the two.</p> <p>c. The stone will become gold after some time.</p> <p>d. For a wise man, gold and stone have equal worth.</p> <p>(v) Choose the most appropriate title for this story.</p> <p>a. Gold and Stone</p> <p>b. The Miser and His Gold</p> <p>c. The Miser and His Neighbour</p> <p>d. The Miser and His workman</p>		
2.	<p><b>Read the given passage carefully and answer the questions that follow:</b></p> <p>When asked what it was like being a woman in her field she replied, "I really never, ever thought, while pursuing my studies or doing anything else, that I was a woman, or a person from a small city, or a different country. I pretty much had my dreams like anyone else and I followed them. And people who were around me, fortunately, always encouraged me and said, 'If that's what you want to do, carry on'."</p> <p>(i) What was Kalpana Chawla's dream?</p> <p>(ii) How did she fill it?</p> <p>(iii) How did other people react to Kalpana's plans?</p> <p>(iv) Find a word from the above extract that means the same as to 'continuing'.</p>	4	Problem Solving
3.	<p><b>Read the given passage carefully and answer the questions that follow:</b></p> <p>Beauty is heard  In the night,  wind sighing, rain falling,  Or a singer chanting  Anything in earnest.</p> <p>(i) How are sounds produced?</p> <p>a. by blowing winds and the falling raindrops.</p> <p>b. by children's noise.</p> <p>c. by musical songs.</p> <p>(ii) What effect do blowing of winds and falling of raindrops create?</p> <p>a. depressing</p> <p>b. musical</p> <p>c. soothing</p> <p>(iii) What does the phrase 'in earnest' mean here?</p> <p>a. proudly</p> <p>b. happily</p> <p>c. sincerely</p>	3	Critical Thinking
4.	<p>You are Srikant Verma, a student of class VI-C of Blooming Dale Public School, Pune. You lost your English Textbook in the school premises. Giving details of the book, draft a notice (in about 50 words) to be put up on the school notice board. Announce a suitable reward for the finder. Put the notice in a</p>	5	Communication Skills

	box.		
5.	<b>Find the error and correct the given sentences:</b> (i) You might respect your elders. (ii) Would you prosper! (iii) We ought to paid our taxes.	3	Analytical Skill
6.	<b>Fill in the blanks with the correct forms of the adjectives given in the brackets.</b> (a) Who was the ----- (powerful) king of the Maurya Dynasty? (b) I have -----(little) knowledge of History. (c) Of the two beaks , Kanchunjunga and Nanda Devi, which one is ----- (high).	3	Interdisciplinary
7.	<b>Answer the following questions in about 20-30 words.</b> (a) Why did Taro run in the direction of the stream? (b) Why was the little man's face wrinkled and frowned?	2x2=4	Evaluation
8.	What do you learn from the story 'The Shepherd Treasure'? Is it possible to follow it in our practical life?	3	HOT



**ARMY PUBLIC SCHOOL GWALIOR**  
**CLASS - VI**  
**ACADEMIC SESSION 2023-24**  
**REVISION WORKSHEET (SELF –ASSESSMENT)**

Subject: Hindi

Assignment No. : 4

Allotment Date: 12 September 2023

क्र.सं.	प्रश्न	अंक	प्रकृति														
1.	निम्नलिखित शब्दों का अर्थ लिखिए- वाकई, उत्सुक, साँकल, देगची, पगडंडी	5	सूचनात्मक संचार कौशल (Informative Comm. Skills)														
2.	निम्नलिखित प्रश्नों के उत्तर दीजिए- (क) नागराजन के अलबम के हिट हो जाने के बाद राजप्पा के मन की दशा क्या हुई? (ख) अलबम चुराते समय राजप्पा किस मानसिक स्थिति से गुजर रहा था? (ग) लेखक ने राजप्पा के टिकट इकट्ठा करने की तुलना मधुमक्खी से क्यों की?	6	गंभीर सोच और समस्या समाधान (Critical Thinking and Problem Solving)														
3.	सही मिलान कीजिए। <table style="width: 100%; border: none;"><tr><td style="text-align: center;">वर्ग-I</td><td style="text-align: center;">वर्ग-II</td></tr><tr><td>(i) पुरुषवाचक सर्वनाम</td><td>(क) कौन</td></tr><tr><td>(ii) निश्चयवाचक सर्वनाम</td><td>(ख) जो-सो</td></tr><tr><td>(iii) अनिश्चयवाचक सर्वनाम</td><td>(ग) यह, वह</td></tr><tr><td>(iv) प्रश्नवाचक सर्वनाम</td><td>(घ) अपने आप</td></tr><tr><td>(v) संबंधवाचक सर्वनाम</td><td>(ङ) कोई</td></tr><tr><td>(vi) निजवाचक सर्वनाम</td><td>(च) मैं, तुम</td></tr></table>	वर्ग-I	वर्ग-II	(i) पुरुषवाचक सर्वनाम	(क) कौन	(ii) निश्चयवाचक सर्वनाम	(ख) जो-सो	(iii) अनिश्चयवाचक सर्वनाम	(ग) यह, वह	(iv) प्रश्नवाचक सर्वनाम	(घ) अपने आप	(v) संबंधवाचक सर्वनाम	(ङ) कोई	(vi) निजवाचक सर्वनाम	(च) मैं, तुम	6	अंतःविषयी (Interdisciplinary)
वर्ग-I	वर्ग-II																
(i) पुरुषवाचक सर्वनाम	(क) कौन																
(ii) निश्चयवाचक सर्वनाम	(ख) जो-सो																
(iii) अनिश्चयवाचक सर्वनाम	(ग) यह, वह																
(iv) प्रश्नवाचक सर्वनाम	(घ) अपने आप																
(v) संबंधवाचक सर्वनाम	(ङ) कोई																
(vi) निजवाचक सर्वनाम	(च) मैं, तुम																
4.	निम्नलिखित वाक्यों में से सर्वनाम छाँटकर लिखिए। (i) वह मुंबई में रहती थी। (ii) इस कमरे में कौन बैठा है?	4	समझ (Understanding)														

	(iii) बाहर कोई आया है। (iv) जैसी करनी, वैसी भरनी।		
5.	निम्नलिखित विषयों में से किसी एक पर 40-50 शब्दों में संवाद लिखिए। (i) गृहस्वामिनी और नौकरानी के बीच बातचीत। (ii) शिक्षक और छात्र के बीच बातचीत।	5	मूल्यांकन (Evaluation)
6.	निम्नलिखित विषयों में से किसी एक पर लगभग 200 शब्दों में एक निबंध लिखिए। (i) समय का सदुपयोग (ii) जल ही जीवन है।	4ए	विश्लेषणात्मक (Analytical)





**ARMY PUBLIC SCHOOL GWALIOR**  
**CLASS - VI**  
**ACADEMIC SESSION 2023-24**  
**REVISION WORKSHEET (SELF –ASSESSMENT)**

Subject: Sanskrit

Assignment No. : 4

Allotment Date: 12 September 2023

क्रम सं.	प्रश्न	अंक	प्रकृति
1.	<p>निम्नगद्यांशान् पठित्वा प्रश्नान् उत्तरत- (निम्न गद्यांश को पढ़कर प्रश्नों के उत्तर दीजिए।)</p> <p>राष्ट्रीय-ध्वजः त्रिवर्णध्वजः अस्ति। अस्मिन् ध्वजे सर्वोपरि केशर-वर्णः, मध्ये श्वेतवर्णः, निम्नभागे च हरितवर्णः भवति। मध्ये श्वेतभागे अशोकचक्रम् अस्ति। अशोकचक्रम् अस्माकम् राष्ट्रीय-चिह्नम् अस्ति। भारतीयाः राष्ट्रीध्वस्य सम्मानं कुर्वन्ति।</p> <p><b>(क) एकपदेन उत्तरत- (एक पद में उत्तर दीजिए।)</b></p> <p>(i) अस्माकं राष्ट्रीय-ध्वजे कति वर्णाः सन्ति?</p> <p>(ii) राष्ट्रीय-ध्वजे सर्वोपरि कः वर्णः अस्ति?</p> <p><b>(ख) पूर्णवाक्येन उत्तरत- (पूर्ण वाक्य में उत्तर दीजिए-)</b></p> <p>(i) अस्माकम् राष्ट्रीय-चिह्नम् किम् अस्ति?</p> <p><b>(ग) प्रदत्तविकल्पेभ्यः उचितम् उत्तरं चिनुत- (दिए गए विकल्पों से उचित उत्तर चुनिए।)</b></p> <p>(i) 'ध्वजे' अस्य किं विशेषणपदम् अत्र प्रयुक्तम्?</p> <p>(क) अस्य (ख) अस्या (ग) अस्याम् (घ) अस्मिन्</p> <p>(ii) 'अशोकचक्रम्' अस्य किं क्रियापदम् अत्र प्रयुक्तम्?</p> <p>(क) असि (ख) स्तः (ग) सन्ति (घ) अस्ति</p> <p>(iii) 'युष्माकम्' अस्य किं विलोमपदम् अत्र प्रयुक्तम्?</p> <p>(क) अस्मत् (ख) अस्मासु (ग) अस्मभ्यम् (घ) अस्माकम्</p> <p>(iii) 'कुर्वन्ति' अस्य क्रियापदस्य किं कर्तृपदम् अत्र प्रयुक्तम्?</p> <p>(क) भारतीयाः (ख) राष्ट्रध्वजस्य (ग) सम्मानम् (घ) निम्नभागे</p>	5	सूचनात्मक संचार कौशल (Informative Comm. Skills)

<p>2.</p>	<p>मञ्जूषासहायतया अधोलिखितान् संवादान् पूर्यत्- (मञ्जूषा की सहायता से निम्नलिखित संवादों को पूरा कीजिए)-</p> <div style="border: 1px solid black; padding: 5px; margin: 10px 0;"> <p><b>मञ्जूषा-</b> पालयिष्यामि, लेखम्, विषयः, पठ, पठिष्यामि</p> </div>  <p>पिता - त्वं किं पठसि? पुत्रः - एकं (i) .....। पिता - लेखस्य विषयः कः? पुत्रः - व्यायामः। पिता - शोभनः (ii) .....। पुत्रः - अस्मिन् लेखे प्रातः व्यायामेन के लाभाः सन्ति इति विस्तृतरूपेण लिखिताः। पिता - तदा तु त्वम् अवश्यम् एव (iii) .....। पुत्रः - अहं न केवलं (iv) ..... अपितु स्वजीवने (v) ..... अपि।</p>	<p>5</p>	<p>गंभीर सोच और समस्या समाधान (Critical Thinking and Problem Solving)</p>
<p>3.</p>	<p>चित्राणि दृष्ट्वा मञ्जूषायाः सहायतया च एकपदेन उत्तराणि लिखत- (चित्रों को देखकर मञ्जूषा की सहायता से एकपद में उत्तर लिखिए)-</p> <div style="border: 1px solid black; padding: 5px; margin: 10px 0;"> <p><b>मञ्जूषा -</b> कन्या, त्रयः, उद्यानस्य, पुष्पम्, आम्</p> </div>  <p>(क) उद्याने कति वृक्षाः सन्ति? (ख) एतद् कस्य चित्रम् अस्ति? (ग) का दोलायाम् उपविशति? (घ) उद्याने का विकसन्ति? (ङ) किं अत्र भित्तिकम् अस्ति?</p>	<p>5</p>	<p>अंतःविषयी (Interdisciplinary)</p>
<p>4.</p>	<p>भिन्नप्रकृतिकं पदं चिनुत। (भिन्न प्रकृति का शब्द चुनिए।) (i) गङ्गा, लता, यमुना, नर्मदा (ii) उद्यानम्, कुसुमम्, फलम्, चित्रम्</p>	<p>4</p>	<p>समझ (Understanding)</p>

	(iii) लेखनी, तूलिका, चटका, पाठशाला (iv) आम्रम्, कदलीफलम्, मोदकम्, नारगडम्।		
5.	निम्नलिखित शब्दानाम् अर्थानाम् लिखत। (निम्नलिखित शब्दों के अर्थ लिखिए।) (i) सौचिकः (ii) स्थालिकाः (iii) खनित्रम् (iv) शोभनम् (v) पर्यटनाय	5	मूल्यांकन (Evaluation)
6.	अधोलिखित धातूनां रूपाणि लिखत। (अधोलिखित धातुओं के रूप लिखिए।) यथा - लिख् लिखति (i) अस् (ii) स्मृ (iii) मिल् (iv) धाव्	4	विश्लेषणात्मक (Analytical)
7.	शुद्धम् अशुद्धम् वा लिखत (शुद्ध-अशुद्ध लिखिए)- (i) 7 - पञ्च (ii) 9 - नव	2	समझ (Understanding)





**ARMY PUBLIC SCHOOL GWALIOR**  
**CLASS - VI**  
**ACADEMIC SESSION 2023-24**  
**REVISION WORKSHEET (SELF –ASSESSMENT)**


**Subject: Mathematics**

**Assignment No. : 4**

**Allotment Date: 12 September 2023**

S. NO.	QUESTIONS	MARKS	NATURE
1.	In which quadrilateral each angle is a right angle and whose all sides are equal? (i) square (ii) rectangle (iii) rhombus (iv) parallelogram	1	Critical Thinking
2.	Which of the following starts from an initial point and extends indefinitely in one direction? (i) line (ii) line segment (iii) ray (iv) curve	1	Understanding
3.	How many minimum line segments are required to form a polygon? (i) 3 (ii) 2 (iii) 1 (iv) 4	1	Informative
4.	If a number is divisible by two co-prime numbers then it is divisible by their (i) product also (ii) sum also (iii) difference also (iv) all of the above	1	Informative
5.	Which direction will you face if you start facing east and make $\frac{1}{2}$ of a revolution clockwise? (i) west (ii) north (iii) south (iv) north east	1	Analytical skill
6.	An angle is made of two rays starting from a common initial point, which is called as (i) arms (ii) vertex (iii) region (iv) none of these	1	Understanding
7.	Which number is the smallest among the given numbers? (i) -5 (ii) -2 (iii) 0 (iv) 1	1	Understanding
8.	If a number moves farther from zero on the right side of the number line then the value of the number will be (i) increased (ii) decreased (iii) same (iv) double	1	Analytical skill

9.	Which triangle has all its three sides unequal? (i) isosceles (ii) scalene (iii) right angled (iv) equilateral	1	Informative
10.	Draw a rough sketch of a regular hexagon. Connecting any three of its vertices, draw a triangle. Identify the type of the triangle you have drawn.	2	Critical Thinking
11.	Find all the prime factors of 850 and arrange them in increasing order.	2	Understanding
12.	When we have one positive and other negative integer, which mathematical operation will be followed and which sign will be taken, demonstrate by taking an example.	2	Informative
13.	By taking an example present a successor and a predecessor of a negative integer on a number line with the reason behind it.	3	Analytical skill
14.	Find: $50 - (-40) + (-25) - (+30)$	3	Understanding
15.	Shikha is rowing a boat due north-east. In which direction will she be rowing if she turns it through: (i) a straight angle (ii) a complete angle (iii) which type of angle is formed between north-east and east and north east and north- west?	1 1 2	Problem Solving
16.	Three tankers contain 403 litres, 434 litres and 465 litres of diesel respectively. Find the maximum capacity of a container that can measure the diesel of the three containers exact number of times.	5	HOT



**ARMY PUBLIC SCHOOL GWALIOR**  
**CLASS - VI**  
**ACADEMIC SESSION 2023-24**  
**REVISION WORKSHEET (SELF –ASSESSMENT)**

**Subject: Science**

**Assignment No. : 4**

**Allotment Date: 12 September 2023**

S.No.	QUESTIONS	MARKS	NATURE										
1.	<b>Multiple choice questions:-</b> (i) Steamline is found in – (a) Earthworm      (b) cockroaches      (c) fish (ii) The process in which heavier and lighter components of a mixture by wind or by blowig air is called- (a) Threshing      (b) winnowing      (c) handpicking	1x2=2	Informative										
2.	<b>Fill in the blanks:-</b> (i) Gold is an example of _____ substance . (ii) Plants with fibrous roots have _____ venation. (iii) _____ is the disease caused by vitamin B1. (iv) _____ is an example of hinge joint.	1x4=4	Understanding										
3.	<b>Match the following :-</b> <table style="width: 100%; border: none;"> <tr> <td style="text-align: center;"><b>A</b></td> <td style="text-align: center;"><b>B</b></td> </tr> <tr> <td>(i) Ball and socket</td> <td>(a) pistil</td> </tr> <tr> <td>(ii) Iodine solution</td> <td>(b) tealeaves</td> </tr> <tr> <td>(iii) ovary</td> <td>(c) pelvic</td> </tr> <tr> <td>(iv) filtration</td> <td>(d) starch</td> </tr> </table>	<b>A</b>	<b>B</b>	(i) Ball and socket	(a) pistil	(ii) Iodine solution	(b) tealeaves	(iii) ovary	(c) pelvic	(iv) filtration	(d) starch	0.5x4=2	Analytical skill
<b>A</b>	<b>B</b>												
(i) Ball and socket	(a) pistil												
(ii) Iodine solution	(b) tealeaves												
(iii) ovary	(c) pelvic												
(iv) filtration	(d) starch												
4.	(i) What do you mean by transpiration? (ii) What do you mean by bristles? (iii) What do you mean by roughage? (iv) Write difference between herbs and shrubs?	2x4=8	HOT										
5.	(i) Define Decantation. (ii) Define reticulate venation. (iii) What do you mean by threshing?	3x2=6	Interdisciplinary										
6.	(i) Draw structure of pistil and labeled it. (ii) What do you mean by vitamins? (iii) Explain bird?	2x3=6	Analytical skill Critical thinking & Problem Solving Evaluation										
7.	<b>Read the following passage and answer the following:-</b> We cannot move some joints between bones in our head. Such joints are called fixed joints. There is a joint between the upper jaw and the rest of the head which is a fixed joint. All the bones in our body form a frame work to give a shape to our body. This framework is called the skeleton. We can have some idea about the shape and number of bones in some parts of our body by feeling them. One way we could know this shape better would be to look at X-Ray images of the human body. Sometimes when we are hurt, or have an accident, doctors use these X-ray images to find out about	1x2=2	Communication skills										

any possible injuries that might have happened to the bones. The X-Rays show the shapes of the bones in our bodies. Our wrist is flexible because it is made up of several small bones called carples.

Take a deep breath and hold it for a little while. Feel your chest bones and the Back bone by gently pressing the middle of the chest and back at the same time. We see that the ribs are curiously bent. They join the chest bone and the backbone together to form a Box. This is called the rib cage. There are 12 ribs on each side of chest. Some important internal parts of our body lie protected inside this cage. Backbone is made up of many small bones called vertebrae. The backbone consists of 33 Vertebrae. The rib cage is joined to these bones.

(i) Human wrist is made up of small bones called

- (a) Vertebrae
- (b) Rib bones
- (c) Carples
- (d) None of the above

(ii) Our backbone consists of \_\_\_\_\_ vertebrae.

- (a) 24
- (b) 12
- (c) 38
- (d) 33



**ARMY PUBLIC SCHOOL GWALIOR**  
**CLASS - VI**  
**ACADEMIC SESSION 2023-24**  
**REVISION WORKSHEET (SELF –ASSESSMENT)**

**Subject: Social Science**

**Assignment No. : 4**

**Allotment Date: 12 September 2023**

S. NO.	QUESTIONS	MARKS	NATURE
1.	<b>Choose the correct answer:-</b> (i) Which is the third nearest planet to the sun? a. Mercury      b. Venus      c. Earth (ii) A religious poem or song in praise of a god a. Hymns      b. Vedas      c. Sacrifice (iii) The frigid zone lies near- a. The Poles      b. The Equator      c. The Tropic of Cancer (iv) The cycle of the seasons is caused due to a. Rotation      b. Revolution      c. Gravitation (v) Christmas is celebrated in summer in- a. Japan      b. India      c. Australia	5	Informative
2.	<b>Fill in the blanks-</b> (i) A .....refers to the supreme ruler of a kingdom or an area. (ii) Most Harappan ses are made of ..... (iii) The earth travels around the sun in.....orbit. (iv) The sun's rays fall vertically on the Tropic of..... on 21st June.	4	Understanding
3.	<b>Write 'T' for true and 'F' for false statements:-</b> (i) 'Rajas' who let the 'Ashvamedha' horse pass through their lands were invited to the sacrifice. (ii) Dr. Bhimrao Ambedkar belonged to the 'Mahar' caste. (iii) Many cities in 'Mahajanapadas' were fortified. (iv) The charioteer sprinkled sacred water on the king.	4	Understanding
4.	Write the name of four Vedas.	4	Interdisciplinary
5.	<b>Match the following:-</b> (i) Sukta      a. Slave (ii) Chariots      b. Well-said (iii) Yajna      c. Stone boulder (iv) Dasa      d. Used in battles (v) Megalith      e. Sacrifice	5	Analytical Skill
6.	<b>Answer the following questions:-</b> (i) What is an equinox? (ii) What is the difference between a Gram Sabha and a Gram Panchayat?	8	Critical Thinking and Problem Solving

	<p>(iii) What is meant by the 'solar system'? Name all the planets in the solar system.</p> <p>(iv) Give some important features of the Great Bath.</p>		
--	---------------------------------------------------------------------------------------------------------------------------------------------------------	--	--



**ARMY PUBLIC SCHOOL GWALIOR**  
**CLASS - VI**  
**ACADEMIC SESSION 2023-24**  
**REVISION WORKSHEET (SELF –ASSESSMENT)**

**Subject: Computer**

**Assignment No. : 4**

**Allotment Date: 12 September 2023**

S.NO.	QUESTIONS	MARKS	NATURE
1.	<p>Tick the correct answer:</p> <p>(i) Treating data according to the instructions and changing it into information is called: a) Output b) Processing c) Input</p> <p>(ii) Primary memory is also known as _____ memory. a) Backup b) Main c) Basic</p> <p>(iii) The collection of rows and columns is called _____. a) workbook b) worksheet c) Document</p> <p>(iv) A range name must start with a _____. a) Number b) Letter c) Symbol</p> <p>(v) ALU, CU, and MU are the parts of _____. a) Monitor b) Pen drive c) CPU</p>	0.5X5=2.5	Information
2.	<p>Write 'T' for True and 'F' for False statements.</p> <p>(i) Joystick is mainly used to play games on a computer.</p> <p>(ii) We cannot save worksheet data as a PDF and HTML file.</p> <p>(iii) Formula bar shows the formula we are using in active cell.</p> <p>(iv) RAM is used to store data permanently.</p> <p>(v) The output or result we get on a paper is called soft copy.</p>	0.5X5=2.5	Interdisciplinary

<b>3.</b>	Fill in the blanks.  (i) _____ is any data or instruction entered into the computer. (ii) Data that has been processed into a useful form is called _____. (iii) By using _____ feature, one can revert the last change. (iv) _____ are tiny, word-sized charts that can appear in a cell.	0.5X4=2	Analytical  Skill
<b>4.</b>	Answer the following :-  (i) How does a computer work? (ii) Why do we need to select cells in excel? (iii) How will you classify memory?	1X3=3	Critical Thinking and Problem Solving





**ARMY PUBLIC SCHOOL GWALIOR**  
**CLASS - VI**  
**ACADEMIC SESSION 2023-24**  
**REVISION WORKSHEET (SELF –ASSESSMENT)**

**Subject: Yoga**

**Assignment No. : 4**

**Allotment Date: 12 September 2023**

S. NO.	QUESTIONS	MARKS	NATURE
1.	<b>Fill in the blanks:-</b> (i) _____ is the Sanskrit term for do not. (ii) Yama is the _____ element of Ashtang Yoga [1st/4th]. (iii) _____ is a practice of letting go of all that is not needed and only possessing what is completely necessary. [Aparigraha/ Asteya]	3x1=3	Informative
2.	<b>True and False:-</b> (i) Yama has the 5 limbs of itself. (ii) Yamas describe the restraints needed to live an ethical life (iii) Saucha and Santosh are two of Yamas.	3x1=3	Critical thinking
3.	<b>Multiple Choice Questions:-</b> (i) What is the practice of letting go of all that is not needed and only possessing what is completely necessary ? A] Aparigraha B] Pranayam C] Asteya D] Niyama  (ii) Which among these is the correct translation of Ahimsa? A] Non-Violence B] Observances C] Truthfulness D] Surrender to divine  (iii) What does Asteya means? A] Non-stealing B] Non-violence C] Non-coveting D] All of these  (iv) What is practice of non-stealing of other's property or time? A] Asteya B] Satya C] Aparigraha D] None of these	4X1=4	Analytical Thinking






**ARMY PUBLIC SCHOOL GWALIOR**  
**CLASS - VI**  
**ACADEMIC SESSION 2023-24**  
**REVISION WORKSHEET (SELF –ASSESSMENT)**


Subject: Art and Work Education

Assignment No. : 4

Allotment Date: 12 September 2023

S. NO.	QUESTIONS	MARKS	NATURE
1.	How many types of shading in drawing are there? (i) Two (ii) Four <b>(iii) Five</b> (iv) One	1	Creative
2.	Shading is often used to create the illusion of _____. (i) Width (ii) Height <b>(iii) Depth</b> (iv) Length	1	Creative
3.	What can make an object three-dimensional? (i) Sketching (ii) Drawing <b>(iii) Shading</b> (iv) Painting	1	Creative
4.	In hatching technique a series of _____ lines are used. (i) Curved lines <b>(ii) Parallel straight lines</b> (iii) Zigzag lines (iv) Dotted lines	1	Creative
5.	Cross hatching is a type of which technique? (i) Drawing <b>(ii) Shading</b> (iii) Painting (iv) Sculpture	1	Creative
6.	Artists draw parallel lines in Cross hatching technique. (i) True (ii) <b>False</b>	1	Creative
7.	The scribbling is a drawing technique. (i) <b>True</b> (ii) False	1	Creative
8.	Stippling is the creation of a _____ simulating varying degrees of solidity or shading by using small dots. (i) Sketch <b>(ii) Pattern</b> (iii) Texture (iv) Painting	1	Creative
9.	Artists use layers of shading to achieve light, medium and _____ tones.	1	Creative

	(i) Spiral <b>(ii) Dark</b> (iii) Zigzag (iv) Texture		
10.	Which among these is the picture of Scribbling?  (i)   (ii)   (iii) 	1	Creative



**ARMY PUBLIC SCHOOL GWALIOR**  
**CLASS - VI**  
**ACADEMIC SESSION 2023-24**  
**REVISION WORKSHEET (SELF –ASSESSMENT)**

Subject: Karate

Assignment No. : 4

Allotment Date: 12 September 2023

S. NO.	QUESTIONS	MARKS
1.	<b>Multiple choice questions:</b> What is the meaning of bunkai? a. Attack b. Kata c. Kumite d. Combination of offence and defence	4x1=4
2.	What is the Japanese name of open hand block? a. Soto uke b. Uchi uke c. Koken uke d. Uke	
3.	What is the Japanese name of cat stance? a. Heikodachi b. Shikodachi c. Niquashi dachi d. Moto dachi	
4.	What is the meaning of karate-do? a. Fight b. Kick c. Block d. Fight with empty hands	
5.	<b>Fill in the blanks:</b> Bunkai is the combination of offence and _____. a. Defence b. Kick	3x1=3
6.	English name of niquashi dachi is _____. a. Catstance b. Dogstance	
7.	_____ is the way of karate a. Ous b. Namaste c.	
8.	<b>True and False:</b> Heikodachi is the attention position of karate. (True/False)	3x1=3
9.	Uchi uke is called open hand block. (True/False)	
10.	Niquashi dachi is known as cat Stance. (True/False)	



**ARMY PUBLIC SCHOOL GWALIOR**  
**CLASS - VI**  
**ACADEMIC SESSION 2023-24**  
**REVISION WORKSHEET (SELF –ASSESSMENT)**


Subject: Health and Physical Education

Assignment No. : 4

Allotment Date: 12 September 2023

S. NO.	QUESTIONS	MARKS	NATURE
1.	<p><b>Tick The Correct Answer:</b></p> <p>(i) How many players play during a match</p> <p>a.8 b.10 c.07 d.06</p> <p>(ii) Court Measurement of volleyball?</p> <p>a.20×10M b.12×16M c.12×9M d.18×9 M</p> <p>(iii) When did volleyball introduced</p> <p>a.1895 b.1888 c.1890 d. 1898</p> <p>(iv) Who is the father of volleyball?</p> <p>a.cooper b. James naimsmith c. Karl Schlenez d William G morgan</p>	4	Informative
2.	<p><b>Fill in the blanks:</b></p> <p>(i) Volleyball world cup 2019 organising by _____ (Brazil,Japan)</p> <p>(ii) Gurinder singh belongs _____ country (Nepal, india)</p> <p>(iii) _____ won the most Volleyball world cup title. ( Argentina,Russia)</p>	3	Understanding

3.	<b>True or False:</b> (i) 12 players from each team allowed to play at a time? a. True b. False  (ii) Germany won their world cup title in 2019? a. True b. False  (iii) Bruninho Rezende plays for Brazill? a. True b. False	3	Knowledge
----	----------------------------------------------------------------------------------------------------------------------------------------------------------------------------------------------------------------------------------------------------------------	---	-----------



**ARMY PUBLIC SCHOOL GWALIOR**  
**CLASS - VI**  
**ACADEMIC SESSION 2023-24**  
**REVISION WORKSHEET (SELF –ASSESSMENT)**

**Subject: ATL**

**Assignment No. : 4**

**Allotment Date: 12 September 2023**

S. NO.	QUESTIONS	MARKS	NATURE
1.	<p><b>Choose the correct answer–</b></p> <p>(i) What is true about Data Visualization?</p> <p>a. Data Visualization is used to communicate information clearly and efficiently to users by the usage of information graphics such as tables and charts.</p> <p>b. Data Visualization helps users in analyzing a large amount of data in a simpler way.</p> <p>c. Data Visualization makes complex data more accessible, understandable, and usable.</p> <p>d. All of the above</p>	1	Informative
	<p>(ii) Which are pros of data visualization?</p> <p>a. It can be accessed quickly by a wider audience.</p> <p>b. It can misrepresent information</p> <p>c. It can be distracting</p> <p>d. None Of the above</p>	1	Informative
	<p>(iii) Which are cons of data visualization?</p> <p>a. It conveys a lot of information in a small space.</p> <p>b. It makes your report more visually appealing.</p> <p>c. visual data is distorted or excessively used.</p> <p>d. None Of the above</p>	1	Informative
	<p>(iv) Data can be visualized using-</p> <p>a. graphs</p> <p>b. charts</p> <p>c. maps</p> <p>d. All of the above</p>	1	Informative
2.	<p><b>State whether these statements are true or false:</b></p> <p>(i) Data visualization decrease the insights and take slower decisions. ( )</p> <p>(ii) Healthcare professionals frequently use choropleth maps to visualize important health data. ( )</p> <p>(iii) The pictorial form of representing the data in Excel is</p>	3	Analytical Thinking

	called Charts. ( )		
3.	<b>Fill in the blanks:</b> (i) _____ is one type of chart that shows the data in tabular form or in column pattern. (ii) _____ is round in shape and is been cutted into slices. (iii) The basic unit of a worksheet into which you enter data in Excel is called a _____	3	Understanding





**ARMY PUBLIC SCHOOL GWALIOR**  
**CLASS - VI**  
**ACADEMIC SESSION 2023-24**  
**REVISION WORKSHEET (SELF –ASSESSMENT)**

**Subject: Music and Dance**

**Assignment No. : 4**

**Allotment Date: 12 September 2023**

S. NO.	QUESTIONS	MARKS	NATURE
1.	What happens when a dancer stands in front of a light source? (a) The dancer becomes invisible (b) The dancer's shadow is formed on the screen	1	Understanding
2.	In a dance performance, what creates beautiful patterns on the stage? (a) The dancer's costume (b) The reflection of light on the dancer's movements	1	Understanding
3.	When a dancer moves closer to the light source, what happens to their shadow? (a) The shadow becomes smaller (b) The shadow becomes larger	1	Creative Thinking
4.	In a dance routine, what is responsible for the changing shapes and sizes of shadows? (a) The dancer's costume (b) The dancer's movements and the position of the light source	1	Creative Thinking
5.	What is the name of the process where light bounces off a dancer's body and creates a reflection on a surface? (a) Shadow casting (b) Reflection of light	1	Understanding
6.	Prayer is.....? (a) Talking to God (b) Only for when I feel like it	1	Knowledge
7.	We should pray (i) Everyday (ii) Only when I have time	1	Understanding
8.	Complete the prayer " Gods love" (i) Its so wonderful (ii) Its so beautiful	1	Creative Thinking
9.	What is another word for prayer? (i) Worship (ii) Request	1	Knowledge
10.	'Gods Love' is a (i) Prayer (ii) song	1	Knowledge





**ARMY PUBLIC SCHOOL GWALIOR**  
**CLASS - VI**  
**ACADEMIC SESSION 2023-24**  
**REVISION WORKSHEET (SELF –ASSESSMENT)**

**Subject: G.K**

**Assignment No. : 4**

**Allotment Date: 12 September 2023**

S. NO.	QUESTIONS	MARKS	NATURE										
1.	<p><b>Choose the correct answer:-</b></p> <p>(i) It is a Japanese ankle length garment worn by both men and women-</p> <p>(a) Poncho                      (b) Kimono                      (c) Thawb</p> <p>(ii) The term used for scientists who study plants-</p> <p>(a) Zoologist                      (b) Botanist                      (c) Chemist</p>	0.5x2=1	Informative										
2.	<p><b>Fill in the blanks:-</b></p> <p>(i) _____ was the nickname of Lala Lajpat Rai.</p> <p>(ii) _____ is the longest river in the world.</p>	0.5x2=1	Understanding										
3.	<p><b>Match the following:-</b></p> <table style="width: 100%; border: none;"> <tr> <td style="width: 50%;">Column A</td> <td style="width: 50%;">Column B</td> </tr> <tr> <td>(i) Bhimbetka Cave</td> <td>(a) Param Vir Chakra</td> </tr> <tr> <td>(ii) The highest gallantry award</td> <td>(b) Dr. Bhimrao Ambedkar</td> </tr> <tr> <td>(iii) Father of Indian Constitution</td> <td>(c) Swimming</td> </tr> <tr> <td>(iv) Michael Phelps</td> <td>(d) Madhya Pradesh</td> </tr> </table>	Column A	Column B	(i) Bhimbetka Cave	(a) Param Vir Chakra	(ii) The highest gallantry award	(b) Dr. Bhimrao Ambedkar	(iii) Father of Indian Constitution	(c) Swimming	(iv) Michael Phelps	(d) Madhya Pradesh	0.5x4=2	Informative
Column A	Column B												
(i) Bhimbetka Cave	(a) Param Vir Chakra												
(ii) The highest gallantry award	(b) Dr. Bhimrao Ambedkar												
(iii) Father of Indian Constitution	(c) Swimming												
(iv) Michael Phelps	(d) Madhya Pradesh												
4.	<p><b>Identify the given picture and name them.</b></p> <div style="display: flex; justify-content: space-around; align-items: center;"> <div style="text-align: center;">  <p>(i) _____</p> </div> <div style="text-align: center;">  <p>(ii) _____</p> </div> </div>	2	Interdisciplinary										
5.	<p><b>Answer the following questions in one word:-</b></p> <p>(i) Which is the second largest continent in the world?</p> <p>(ii) Which is the highest mountain peak in the world?</p>	2	Critical thinking										
6.	<p><b>Short answer type question:-</b></p> <p>(i) Name the five oceans in the world?</p> <p>(ii) Name the lander and rover name of the Chandrayaan 2 mission?</p>	2	HOT										