



ARMY PUBLIC SCHOOL GWALIOR
CLASS - II
ACADEMIC SESSION 2023-24
REVISION WORKSHEET (SELF –ASSESSMENT)



Subject: English
Allotment Date: 12 September 2023

Assignment No. : 4

S. NO.	QUESTIONS	MARKS 20	NATURE
1.	Write the meaning of the following words: (i) peep - (ii) pretend - (iii) manners - (iv) rubbish - (v) pick -	5x1=5	Information
2.	Complete the spellings: (i) pa_nt_r (ii) p _ea s_ (iii) _ hro_ (iv) cl_ss_oom (v) c_ea_	5x0.5=2.5	Literacy skills
3.	Read the following sentences carefully and fill in the blanks with is/am/are: (i) Reena _____ wearing a pretty dress. (ii) My uncle _____ a dentist. (iii) The girls _____ playing. (iv) I _____ tired. (v) Those _____ my toys.	5x0.5=2.5	Problem Solving

<p>4.</p>	<p>Answer the following questions:</p> <p>Q1. Which line in the poem tells us that poet acts as if he is asleep?</p> <p>Ans _____</p> <p>_____</p> <p>_____</p> <p>_____</p> <p>Q2. Why is the teacher happy?</p> <p>_____</p> <p>_____</p> <p>_____</p> <p>_____</p>	<p>2x3=6</p>	<p>Understanding</p>
<p>5.</p>	<p>Fill in the blanks with has/have-:</p> <ol style="list-style-type: none"> 1. She _____ a pet. 2. Riya and Megha _____ the same book. 3. My mother _____ a beautiful bag. 4. My friends _____ a drum set. 	<p>4x1=4</p>	<p>Inquiry</p>



ARMY PUBLIC SCHOOL GWALIOR
CLASS - II
ACADEMIC SESSION 2023-24
REVISION WORKSHEET (SELF –ASSESSMENT)



Subject: Hindi

Assignment No. : 4

Allotment Date: 12 September 2023

संख्या	प्रश्न	अंक	प्रश्न के प्रकार
1.	निम्नलिखित शब्दों के वचन परिवर्तन करो । (i) ताला - (ii) बहन- (iii) गुड़िया -	3x1=3	बोधात्मक
2.	निम्नलिखित शब्दों के अर्थ लिखो - (i) इंतज़ार - (ii) दुबककर - (iii) संग्रहालय -	3x1=3	ज्ञानात्मक
3.	निम्नलिखित के शब्द बनाओ । (i) स + + क (ii) ज + ग + (iii) गु + ला + (iv) आ + का +	4x1=4	रचनात्मक
4.	दिए गए शब्दों का स्त्रीलिंग लिखो - (i) दादा - (ii) चूहा - (iv) बालक- (v) मोर -	4x1=4	सूचनात्मक
5	निम्नलिखित के उत्तर लिखिए - (i) इंडिया गेट किनकी याद में बनाया गया?	2x2=4	विश्लेषणात्मक

	<p>-----</p> <p>-----</p> <p>(ii) ताई जी ने खाने के लिए क्या-क्या बनाया था ?</p> <p>-----</p> <p>-----</p>		
6.	<p>आप पार्क में पिकनिक पर जाते समय किन-किन बातों का ध्यान रखेंगे?</p> <p>-----</p> <p>-----</p> <p>-----</p> <p>-----</p>	2x1=2	उच्चस्तरीय चिंतन



ARMY PUBLIC SCHOOL GWALIOR
CLASS - II
ACADEMIC SESSION 2023-24
REVISION WORKSHEET (SELF –ASSESSMENT)







Subject: Mathematics

Assignment No. : 4

Allotment Date: 12 September 2023

S. NO.	QUESTIONS	MARKS 20	NATURE
1	Fill in the blanks: (i) The sign of division is _____. (ii) $30 \div 6 =$ _____. (iii) We can write half as _____. (iv) $18 \div 3 =$ _____. (v) When a figure is divided into three equal parts, then each part is called _____.	5X1=5	Understanding
2	Write 'True' or 'False': (i) Fraction means part of one whole. () (ii) Division is repeated addition. ()	2X1=2	HOTS
3	Tick the correct answer from the given options: (a) Value of $20 \div 4$ is (i) 24 (ii) 16 (iii) 5 (iv) 10 (b) Divisor \times Quotient= _____. (i) Dividend (ii) Remainder (iii) Product (iv) Sum (c) Value of $72 \div 9$ is (i) 63 (ii) 8 (iii) 10 (iv) 81	3X1=3	Critical thinking

<p>4</p>	<p>Solve the following questions: -</p> <p>(i) Colour the part(s) to show half.</p>  <p>(ii) Colour the part(s) to show half.</p>  <p>(iii). Colour the part(s) to show one -third.</p>  <p>(iv). Colour the parts to show one-fourth.</p> 	<p>4X1=4</p>	<p>Interdisciplinary</p>
<p>5</p>	<p>Solve the following questions.</p> <p>(i) 60 flowers are to be put in 6 vases. How many flowers can be put in each vase?</p> <p>(ii) Draw a square, a circle, a triangle and a rectangle. Can we divide these shapes into equal or unequal parts?</p>	<p>2X3=6</p>	<p>Problem Solving</p>

	<p>(iii) There was a family function in which returned gifts were distributed among guests. If one gift cost is Rs.9 and no. of guests were 50 . Find the value of total expense on gifts?</p>		
--	--	--	--



ARMY PUBLIC SCHOOL GWALIOR
CLASS - II
ACADEMIC SESSION 2023-24
REVISION WORKSHEET (SELF –ASSESSMENT)







Subject: EVS

Assignment No. : 4

Allotment Date: 12 September 2023

S.NO.	QUESTIONS	MARKS 20	NATURE
1.	<p>Tick the correct answer:</p> <p>1. It is the festival of lights.</p> <p>a) Diwali b. Holi c. Eid</p> <p>2. Teacher's Day is celebrated on _____ every year-</p> <p>a. 26 January b. 2 October. c. 5 September</p> <p>3. _____ is pulled by a horse.</p> <p>a. Jeep b. Car c. Tonga</p> <p>4. To watch a cricket match we need a _____ -</p> <p>a. TV b. Radio c. Ambulance</p>	4X1=4	Understanding
2.	<p>Fill in the blanks:</p> <p>a) Ambulance carries _____.</p> <p>b) _____ transport is the fastest transport.</p> <p>c) _____ is the powdered colour used by people on Holi.</p> <p>d) _____ comes after the holy month of Ramzaan.</p>	4X1 = 4	Analytical skill
3.	<p>Give two examples of each of the following:</p> <p>a) National holidays: _____</p> <p>_____</p> <p>b) Road transport: _____</p> <p>_____</p>	4X1=4	Information

4.	<p>Identify the pictures and write their names.</p> <p>a)  _____</p> <p>b)  _____</p> <p>c)  _____</p> <p>d)  _____</p>	4x1=4	Observation
5.	<p>Why is water transport not so popular among travellers?</p> <p>_____</p> <p>_____</p> <p>_____</p> <p>_____</p>	2x1=2	HOTS
6.	<p>Answer the following questions-</p> <p>1. Which train sends household goods from one city to another?</p> <p>Ans - _____</p> <p>2. When do we celebrate the Children's Day?</p> <p>Ans - _____</p>	1x2=2	Thinking and Writing Skills



ARMY PUBLIC SCHOOL GWALIOR
CLASS - II
ACADEMIC SESSION 2023-24
REVISION WORKSHEET (SELF –ASSESSMENT)



Subject: G.K

Assignment No. : 4

Allotment Date: 12 September 2023

S.NO	QUESTIONS	MARKS	NATURE																								
1.	<p>Draw the shape that will come next.</p> <hr/> <hr/> <hr/>	4x1=4	Informative and general awareness																								
2.	<p>Colour the shape according to the pattern.</p>	5x1=5	Identification and general awareness																								
3.	<p>Fill in the missing numbers.</p> <table border="1" style="width: 100%; border-collapse: collapse; text-align: center;"> <tbody> <tr> <td>1.</td> <td>3</td> <td>6</td> <td></td> <td>12</td> <td></td> </tr> <tr> <td>2.</td> <td>100</td> <td>90</td> <td></td> <td>70</td> <td>60</td> </tr> <tr> <td>3.</td> <td>5</td> <td></td> <td>15</td> <td>20</td> <td></td> </tr> <tr> <td>4.</td> <td>1</td> <td>3</td> <td></td> <td>7</td> <td>9</td> </tr> </tbody> </table>	1.	3	6		12		2.	100	90		70	60	3.	5		15	20		4.	1	3		7	9	6x1=6	Informative and general awareness
1.	3	6		12																							
2.	100	90		70	60																						
3.	5		15	20																							
4.	1	3		7	9																						

	5.	3	7		15	19			
	6.	2		6	8				
4.	Fill in the missing alphabets.							5x1=5	Identification and general awareness
	1.	A	D		J				
	2.	Z		X		V			
	3.	AB		CD	DE				
	4.	A	C		G				
	5.	M		O		Q			



ARMY PUBLIC SCHOOL GWALIOR
CLASS - II
ACADEMIC SESSION 2023-24
REVISION WORKSHEET (SELF –ASSESSMENT)



Subject: Computer

Assignment No. : 4

Allotment Date: 12 September 2023

S.NO.	QUESTIONS	MARKS	NATURE
1.	<p>Tick the correct answer.</p> <p>(i) Click on the white space to the left of the line to select the _____.</p> <p>a) word b) line c) paragraph d) none</p> <p>(ii) _____ is the topmost bar in Word window</p> <p>a) keyboard b) Title bar c) cursor d) None</p> <p>(iii) _____ displays a drop-down menu of file commands such as New, Open and Save.</p> <p>a) Tabs b) Ribbon c) File Tab d) none</p> <p>(iv) _____ is a small vertical flashing line on the screen where you type the text.</p> <p>a) Cursor b) Tittle bar c) File tab d) Ribbon</p>	4x1=4	Information
2.	<p>Fill in the blanks-</p> <p>a) _____ displays groups of related commands in tabs.</p> <p>b) _____ is the process of saving work permanently.</p> <p>c) The text appears slant if we select _____ option.</p>	3x1=3	Understanding

3.	Write 'T' for True or 'F' for False against the statements:- a) To select a paragraph, triple click on it. () b) We cannot change the style, size and color of the text in Word. () c) The text appears darker if we select Italic option. ()	3x1=3	Interdisciplinary
----	--	-------	-------------------




ARMY PUBLIC SCHOOL GWALIOR
CLASS - II
ACADEMIC SESSION 2023-24
REVISION WORKSHEET (SELF –ASSESSMENT)



Subject: Art and Work Education
Allotment Date: 12 September 2023

Assignment No. : 4

S. NO.	QUESTIONS	MARKS	NATURE
1.	What are the primary colours?	2	Understanding
2.	What are the secondary colours?	2	Observation
3.	What are the cool colours?	2	Understanding
4.	What are the warm colours?	2	Problem solving
5.	Violet is another name for _____.	2	Understanding



ARMY PUBLIC SCHOOL GWALIOR
CLASS - II
ACADEMIC SESSION 2023-24
REVISION WORKSHEET (SELF –ASSESSMENT)



Subject: Health and Physical Education
Allotment Date: 12 September 2023

Assignment No. : 4

S.NO.	QUESTIONS	MARKS	NATURE
1.	<p>Tick the correct answer.</p> <p>(i) Throwing is an action which involves your _____. a) hands b) head c) feet d) legs</p> <p>(ii) _____ is used to grab or catch the ball. a) shoulder b) legs c) foot d) hands</p> <p>(iii) Catching is an action which is used to _____. a) Hit the ball b) throw the ball c) watch the ball d) grab the ball</p> <p>(iv) Physical activities help you to become _____. a) lazy b) active c) fatty d) lean</p>	4x1=4	Information
2.	<p>Fill in the blanks-</p> <p>a) When you throw a ball, it is known as _____.</p> <p>b) When you hold a moving ball, it is known as _____.</p> <p>c) _____ and _____, both are used in basketball.</p>	3x1=3	Understanding

3.	Write 'T' for True or 'F' for False against the statements. a) We throw a ball in a sitting position. b) Throwing the ball strengthen your arms. c) Physical activities should always be performed on a ground.	3x1=3	Interdisciplinary
----	---	-------	-------------------



ARMY PUBLIC SCHOOL GWALIOR
CLASS - II
ACADEMIC SESSION 2023-24
REVISION WORKSHEET (SELF –ASSESSMENT)



Subject: Music and Dance

Assignment No. : 4

Allotment Date: 12 September 2023

S. NO.	QUESTIONS	MARKS	NATURE
1	How many types of rhythm in Teen taal ? a) 3 b) 4	1	Knowledge
2	What is the slowest rhythm in Teen taal? a). Chaugun b). Ekgun	1	Critical Thinking
3	What is the fastest rhythm in Teen taal? a). Dugun b). Chougun	1	Knowledge
4	How many claps are there in Teen taal? a) 4 b) 3	1	Understanding
5	How many sections are there in Teen taal? a) 6 b) 4	1	Knowledge
6	Tu pyar ka sagar _____ daya ka tu hai a). Sagar b). Pyar	1	Knowledge

7.	The following refers to- Punjab , Sindh, Gujarat ,Maratha? a).States b). Rivers	1	Critical Thinking
8.	The following refers to- Yamuna ,Ganga a). Rivers b). States	1	Knowledge
9	Complete the line- Gehrai mile sagar ki , unchai mile _____ ki a). Asmaan b). Sagar	1	Critical Thinking
10.	Open the eyes of my heart _____. a). God b). Lord	1	Understanding