



ARMY PUBLIC SCHOOL GWALIOR
CLASS - VI
ACADEMIC SESSION 2023-24
WORKSHEET (SELF –ASSESSMENT)

Subject: English

Assignment No. : 3

Allotment Date: 25 August 2023

S. NO.	QUESTIONS	MARKS	NATURE
1.	Why did the other governors grow jealous of the shepherd?	4	Informative and Understanding
2.	Fill in the blanks with the correct form of the verbs given in bracket: (i) How many books you have.....(study) so far? (ii) The movie ended so late, so he(sleep). (iii) She has.....(be) ill for a week.	2X3=6	Understanding
3.	Describe a recent quarrel that you have had with your brother, sister or friend. How did it start? What did you quarrel about? Did it end?	4	HOT
4.	Why is it important to be thoughtful and caring towards our family like Taro?	3	Interdisciplinary
5.	Fill in the blanks with the words given in bracket: (heard, grazing, chasing, arrived) Once, there was a boy who became bored when he watched over the village sheep on the hillside. To entertain himself, he sang out, "Wolf! Wolf! The wolf is the sheep!" When the villagers the cry, they came running up the hill to drive the wolf away. But, when they....., they saw no wolf. The boy was amused when seeing their angry faces.	4	Critical Thinking and Problem Solving
6.	Answer the following questions in about 20-30 words. (a) Why did the Emperor reward Taro? (b) Why was everyone delighted to see the iron chest on the camel's back? (c) Why did the waterfall give Taro sake and others water?	2X3=6	Evaluation
7.	When did quarrel finally end? What lesson you learn from the poem "The Quarrel"?	3	Communication Skills



ARMY PUBLIC SCHOOL GWALIOR
CLASS - VI
ACADEMIC SESSION 2023-24
WORKSHEET (SELF -ASSESSMENT)



Subject: Hindi

Assignment No. : 3

Allotment Date: 25 August 2023

क्रम सं.	प्रश्न	अंक	प्रकृति
1.	निम्नलिखित शब्दों का अर्थ लिखिए- प्रकोप, बदहजमी, मौन, बूँद, अट्टहास	5	सूचनात्मक संचार कौशल (Informative Comm. Skills)
2.	निम्नलिखित प्रश्नों के उत्तर दीजिए- (क) माँ मोहन के 'ऐसे-ऐसे' कहने पर क्यों घबरा रही थी? (ख) संकट के समय के लिए कौन-कौन से नंबर याद रखे जाने चाहिए? ऐसे वक्त में पुलिस, फायर ब्रिगेड और डॉक्टर से तुम कैसे बात करोगे?	4	गंभीर सोच और समस्या समाधान (Critical Thinking and Problem Solving)
3.	निम्नलिखित समस्तपदों का विग्रह करते हुए समास का नाम लिखिए। (i) दाल-चावल (ii) नीलकमल (iii) चारपाई (iv) प्रतिदिन (v) राजपुत्र (vi) चौराहा	6	अंतःविषयी (Interdisciplinary)
4.	निम्नलिखित शब्दों से भाववाचक संज्ञाएँ बनाइए। (i) चोर (ii) बीमार (iii) मीठा	4	समझ (Understanding)

	(iv) बूढ़ा		
5.	<p>(क) निम्नलिखित शब्दों के दो-दो पर्यायवाची शब्द लिखिए।</p> <p>(i) आँख (ii) बादल (iii) ईश्वर (iv) कमल (v) चंद्रमा (ख)</p> <p>निम्नलिखित शब्दों के विलोम शब्द लिखिए।</p> <p>(i) गंदा (ii) धनी (iii) भारी (iv) अपना (v) भलाई</p>	5	मूल्यांकन (Evaluation)
6.	<p>(क) मायावी मारीच ने किसका रूप धारण किया?</p> <p>(ख) सीता के आभूषण किसने उठाए?</p> <p>(ग) दंडक वन के विषय में लिखिए।</p> <p>(घ) शूर्पणखा कौन थी?</p>	4	विश्लेषणात्मक (Analytical)
7.	कारक के सभी भेदों के नाम उदाहरण सहित लिखिए।	2	समझ (Understanding)



ARMY PUBLIC SCHOOL GWALIOR
CLASS - VI
ACADEMIC SESSION 2023-24
WORKSHEET (SELF -ASSESSMENT)

Subject: Sanskrit

Assignment No. : 3

Allotment Date: 25 August 2023

क्रम सं.	प्रश्न	अंक	प्रकृति
1.	शब्दानाम् अर्थानलिखत- सन्ततम्, प्रसार्य, कौतुकेन, सङ्गमः, जलविहारम्	5	Information
2.	रिक्तस्थानानि पूरयत- (i) त्वं.....पिबसि। (ii) छात्रः..... पश्यन्ति। (iii) वृक्षाः.....पिबन्ति। (iv) ताः..... लिखन्ति। (v) आवाम्.....गच्छावः।	5	Analytical Skill
3.	भिन्नप्रकृतिकं पदं चिनुत- (i) गङ्गा, लता, यमुना, नर्मदा। (ii) उद्यानम्, कुसुमम्, फलम्, चित्रम्। (iii) लेखनी, तूलिका, चटका, पाठशाला। (iv) आम्रम्, कदलीफलम्, मोदकम्, नारङ्गम्। (v) वृक्षः, तरु, पादपः, आकाशः।	5	Understanding
4.	यथा योग्यम् योजयत। (i) समुद्रतटः (ii) क्रीडनकम् (iii) दुग्धम् (iv) दीपकः (v) विद्या	5	Thinking skill
5.	लङ्कारे परिवर्तनं कुरुत। (i) सःहसति। (ii) ते वदतः। (iii) सा खादति। (iii) कन्ये धावतः।	5	Critical Thinking

	(iv) बालःभ्रमति।		
6.	शुद्धशब्दरूपाणि चित्वा लिखत। (i) देवान्, देविन्, देवीन्। (ii) रामषु, रामसु, रामेषु। (iii) फलाः, फलानि, फलान्। (iv) वृक्षाः, वृक्षानि, वृक्षाणि। (v) सूर्यः, सूर्या, सूर्याम्।	5	Memory skill



ARMY PUBLIC SCHOOL GWALIOR
CLASS - VI
ACADEMIC SESSION 2023-24
WORKSHEET (SELF –ASSESSMENT)


Subject: Mathematics

Assignment No. : 3

Allotment Date: 25 August 2023

S. NO.	QUESTIONS	MARKS	NATURE
1.	What is the angle name for one –fourth revolution?	1	Critical Thinking
2.	How many lines can pass through a given point?	1	Understanding
3.	How does a line segment differ from a line?	1	Informative
4.	What is a ray? How is it represented?	1	Informative
5.	Give reasons why a square can be thought of as a special rectangle?	1	Analytical skill
6.	Give two examples of parallel lines from your surroundings.	1	Understanding
7.	Draw rough diagram to illustrate the following : Open curve and Closed curve.	1	Understanding
8.	Where will the hour hand of a clock stop if it starts from 6 and turns through 1 right angle?	1	Analytical skill
9.	What kind of errors can occur if viewing the mark on the ruler is not proper?	1	Informative
10.	What an angle is called if it is larger than a right angle but smaller than a straight angle? Give an example also.	2	Critical Thinking
11.	Draw two triangles and measure their sides and check if the sum of the lengths of any two sides is always less than the third side.	2	Understanding
12.	List any two situations where the angles made are acute.	2	Informative
13.	Let PQ^- be the perpendicular to the line segment XY^- . Let PQ^- and XY^- intersect in the point A. What is the measure of $\angle PAY$?	3	Analytical skill
14.	Draw a rough sketch of a regular hexagon. Connecting any three of its vertices, draw a triangle. Identify the type of the triangle you have drawn.	3	Understanding
15.	Illustrate each one of the following with a rough diagram: (i) A closed curve that is not a polygon. (ii) An open curve made up entirely of line segments. (iii) A polygon with two sides.	1 1 2	Problem Solving
16.	Three boys step off together from the same spot. Their step measures 63 cm, 70 cm and 77 cm respectively. What is the	5	HOT

	minimum distance each should cover so that all can cover the distance in complete steps?		
--	--	--	--



ARMY PUBLIC SCHOOL GWALIOR
CLASS - VI
ACADEMIC SESSION 2023-24
WORKSHEET (SELF –ASSESSMENT)

Subject: Science

Assignment No. : 3

Allotment Date: 25 August 2023

S. NO.	QUESTIONS	MARKS	NATURE										
1.	Fill in the blanks: Leaves are green as they contain _____ pigment. (i) (ii) Plants with fibrous roots have _____ venation. (iii) _____ part of plant conduct food. (iv) _____ has a tap root.	1x4=4	Informative										
2.	Match the following : <table style="width: 100%; border: none;"><tr><td style="text-align: center;">A</td><td style="text-align: center;">B</td></tr><tr><td>(i) Climbers</td><td>a. Mustard</td></tr><tr><td>(ii) Shrubs</td><td>b. Grapes</td></tr><tr><td>(iii) Creepers</td><td>c. Rose</td></tr><tr><td>(iv) Herbs</td><td>d. Pumpkin</td></tr></table>	A	B	(i) Climbers	a. Mustard	(ii) Shrubs	b. Grapes	(iii) Creepers	c. Rose	(iv) Herbs	d. Pumpkin	0.5X4 =2	Understanding
A	B												
(i) Climbers	a. Mustard												
(ii) Shrubs	b. Grapes												
(iii) Creepers	c. Rose												
(iv) Herbs	d. Pumpkin												
3.	(i) What do you mean by transpiration? (ii) Name any two function of roots?	2x2=4	HOT										
4.	(i) Define venation with examples? (ii) Name any two modification of roots along with their functions and examples? (iii) Draw structure of stamen?	2x3=6	Interdisciplinary										
5.	(i) Draw structure of leaf and write down its fuction? (ii) What are the function of stem? Write 3 difference between herbs and shrubs? (iii) Describe the parts of a typical flower with the help of a diagram?	3x3=9	Analytical skill Critical thinking & Problem Solving Evaluation										
6.	How you can show that water is conducted through stem?	5	Communication skills										




ARMY PUBLIC SCHOOL GWALIOR
CLASS - VI
ACADEMIC SESSION 2023-24
WORKSHEET (SELF –ASSESSMENT)



Subject: Social Science
Allotment Date: 25 August 2023

Assignment No. : 3

S. NO.	QUESTIONS	MARKS	NATURE
1.	Describe the people of Harappan cities.	4	Informative
2.	What is a leap year?	3x1=3	Understanding
3.	Why did the 'rajas' of 'Mahajanapadas' build forts?	4	HOTS
4.	What kind of evidence from burials do archaeologists use to find out whether there were social differences amongst those who were buried?	3x1=3	Interdisciplinary
5.	Fill in the blanks – (i) A leap year has number of days. (ii) The daily motion of the earth is (iii) Scribes were people who knew how to	3x1=3	Analytical Skill
6.	Answer the following questions in about 20-30 words. a. What is a seal? b. What are Megaliths?	2x2=4	Critical Thinking and Problem Solving
7.	Answer the following questions – a. What do you mean by apartheid? b. Who were the 'Aryas' and the 'Dasas'?	3x2=6	Evaluation
8.	Why do you think we need the government to find solutions to many disputes or conflicts?	3	Communication Skills



ARMY PUBLIC SCHOOL GWALIOR
CLASS -VI
ACADEMIC SESSION 2023-24
WORKSHEET (SELF-ASSESSMENT)



Subject: Computer

Assignment No. : 3

Allotment Date: 25 August 2023

S. NO.	QUESTIONS	MARKS	NATURE
1	<p>Tick the correct answer:</p> <p>i) The collection of rows and columns is called.....</p> <p>a. workbook b. worksheet c. document.</p> <p>ii) The number of columns in a single worksheet is.....:</p> <p>a. 16384 b. 16385 c. 16358</p> <p>iii) We can also select a cell in a worksheet using thekeys.</p> <p>a. Ctrl b. Alt c. Arrow</p> <p>iv) We can make a worksheet look more attractive and legible by.....</p> <p>a. editing b. formatting c. correcting</p> <p>v) The formatting is used to format the data according to specified condition.</p>	1x5=5	Critical Thinking
2	<p>Write 'T' for True and 'F' for False statements.</p> <p>i) Border separates the data from surrounding cells.</p> <p>ii) Cells may contain four types of data.</p> <p>iii) We can change the font of numbers in excel.</p>	1x3=3	Understanding
3	<p>Fill in the blanks.</p> <p>i) By using feature, one can revert the last changes.</p> <p>ii) There are rows and columns in a single worksheet.</p>	1x2=2	Informative



ARMY PUBLIC SCHOOL GWALIOR
CLASS - VI
ACADEMIC SESSION 2023-24
WORKSHEET (SELF –ASSESSMENT)

Subject: Yoga

Assignment No. : 3

Allotment Date: 25 August 2023

S. NO.	QUESTIONS	MARKS	NATURE
1.	Fill in the blanks– a. Yama is the _____ element of Ashtang Yoga [1st/4th]. b. Ahimsa means to avoid _____ [violence /non-violence]. c. _____ is a practice of letting go of all that is not needed and only possessing what is completely necessary. [Aparigraha/ Asteya]	3x1=3	Informative
2.	True and False– a. Yama has the 5 limbs of itself. b. Yamas describe the restraints needed to live an ethical life. c. Saucha and Santosh are two of Yamas.	3x1=3	Critical thinking
3.	Multiple Choice Questions– a. What is the Sanskrit term for do not? (i) Yama (ii) Pranayam (iii) Tapas (iv) Niyama b. Which among these is the correct translation of Ahimsa? (i) Non-Violence (ii) Observances (iii) Truthfulness (iv) Surrender to divine c. What does Asteya means? (i) Non-stealing (ii) Non-violence (iii) Non-coveting (iv) All of these d. What is practice of non-stealing of other's property or time? (i) Asteya (ii) Satya (iii) Aparigraha (iv) None of these	4X1=4	Analytical Thinking



**ARMY PUBLIC SCHOOL GWALIOR
CLASS - VI**

**ACADEMIC SESSION 2023-24
WORKSHEET (SELF –ASSESSMENT)**

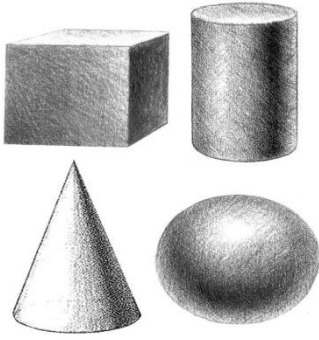
**Subject: Art and Work Education
Allotment Date: 25 August 2023**

Assignment No. : 3

S. NO.	QUESTIONS	MARKS	NATURE
1.	What is the shape with four equal sides? (i) Rectangle (ii) Square (iii) Triangle	1	Creative
2.	Which of these is a basic shape? (i) Cube (ii) Circle (iii) Sphere	1	Creative
3.	A cube is a _____. (i) One dimensional shape (ii) Two dimensional Shape (iii) Three dimensional Shape	1	Creative
4.	What is the shape of a football? (i) Cube (ii) Sphere (iii) Cuboid	1	Creative
5.	What is the shape of a birthday cap? (i) Cone (ii) Square (iii) Circle	1	Creative
6.	How many right angles does a rectangle have? (i) 1 (ii) 2 (iii) 4 (iv) 5	1	Creative
7.	A triangle is a 2D figure: (i) True (ii) False	1	Creative
8.	Which of these is a three dimensional shape? (i) Rectangle (ii) Cone (iii) Square	1	Creative
9.	Is Cuboid is a 3D form of rectangle? (i) True (ii) False	1	Creative

10.


What shapes are this?



- (i) 2D
- (ii) 4D
- (iii) **3D**
- (iv) Circle

1

Creative



ARMY PUBLIC SCHOOL GWALIOR
CLASS - VI
ACADEMIC SESSION 2023-24
WORKSHEET (SELF –ASSESSMENT)


Subject: Martial Art

Assignment No. : 3

Allotment Date: 25 August 2023

S. NO.	QUESTIONS	MARKS
1.	Multiple choice questions: What is the meaning of kata? (i) One-point attach and defence (ii) Extraction of fighting techniques from kata (iii) Pre-decided techniques of offence and defence (iv) All of the above	4x1=4
2.	What is the attention position of karate? (i) Heikodachi (ii) Shikodachi (iii) Tsuki	
3.	(iv) Uke What is the Japanese name of middle punch?	
4.	(i) Chudan Tsuki (ii) (ii) Tsuki (iii) (iii) Jodan Tsuki (iv) (iv) Uke Gaidan Tsuki is the Japanese name of (i) Lower punch (ii) (ii) Upper punch (iii) (iii) Lower block (iv) (iv) Kick	
5.	Fill in the blanks: _____ mawashi is used for two score (i) Chudan (ii) Jodan	3x1=3
6.	_____ Is the name of second pinana kata? (i) Pinan neidan (ii) Pinan shodan	
7.	There are _____ hippon. (i) Ten (ii) Twenty	

	True and False:	3x1=3
8	Meaning of Karate is Kata. (True / False)	
9.	Zenkutsu dachi is the most used dachi in kata (True / False)	
10.	Heikodachi is Japanese name of attention position of karate. (True / False)	



**ARMY PUBLIC SCHOOL GWALIOR
CLASS - VI**



**ACADEMIC SESSION 2023-24
WORKSHEET (SELF –ASSESSMENT)**

**Subject: Health and Physical education
Allotment Date: 25 August 2023**

Assignment No. : 3

S. NO.	QUESTIONS	MARKS	NATURE
1.	<p>Tick the correct answer:</p> <p>(i) How many players play during a match?</p> <p>a. 8</p> <p>b.10</p> <p>c.11</p> <p>d.12</p> <p>(ii) Who won the 2022 football cup?</p> <p>a.Brazil</p> <p>b.Portugal</p> <p>c.France</p> <p>d.Argentina</p> <p>(ii) Who is the runner-up of 2022 world cup?</p> <p>a.France</p> <p>b.Portugal</p> <p>c.Germany</p> <p>d. Argentina</p> <p>(iv) What is the time duration of football match?</p> <p>a.80 minutes</p> <p>b.90 minutes</p> <p>c.70 minutes</p> <p>d.95 minutes</p>	4	Informative



ARMY PUBLIC SCHOOL GWALIOR
CLASS - VI
ACADEMIC SESSION 2023-24
WORKSHEET (SELF –ASSESSMENT)

Subject: ATL

Assignment No. : 3

Allotment Date: 25 August 2023

S. NO.	QUESTIONS	MARKS	NATURE
1.	Choose the correct answer– (i) Soldering is done on wire joints to improve a. Conductivity b. Ductility c. Mechanical power	1	Informative
	(ii) Solder which is used for joining metal pieces is an alloy of a. Tin and Lead b. Zinc and lead c. Tin and zinc	1	Informative
	(iii) Soldering iron bit is made up of: a. Tin b. Steel c. Copper	1	Informative
	(iv) Soldering iron bit is made up of: a. Tin b. Steel c. Copper	1	Informative
2.	State whether these statements are true or false. (i) Soldering is done on wire joints to improve conductivity? (ii) Graphite is a good conductor of electricity? (iii) Glass is a good conductor of electricity?	3	Analytical Thinking
3.	Fill in the blanks: (i) _____ is the process by which metallic materials are joined with the help of another liquefied metal (solder). (ii) Full form of LED is _____. (iii) A _____ is used to melt the solder and heat the metal that is to be joined together.	3	Understanding



ARMY PUBLIC SCHOOL GWALIOR
CLASS - VI
ACADEMIC SESSION 2023-24
WORKSHEET (SELF –ASSESSMENT)



Subject: Music and Dance
Allotment Date: 25 August 2023

Assignment No. : 3

S. NO.	QUESTIONS	MARKS	NATURE
1.	Which musical form is associated with Tansen's legendary dance performances? (a) Hindustani classical music (b) Carnatic classical music	2	Informative
2.	Tansen, a prominent musician in Emperor Akbar's court, was renowned for his mastery in which style of dance? (a) Kathak (b) Bharatanatyam	2	Understanding
3.	What instrument is traditionally played to accompany Tansen's dance performances on music? (a) Sitar (b) Tabla	2	Creative Thinking
4.	In which historical era did Tansen showcase his mesmerizing dance skills on music? (a) Mughal Empire (b) Gupta Empire	2	Creative Thinking
5.	Tansen's legendary dance performances on music are often celebrated during which Indian festival? (a) Diwali (b) Tansen Jayanti	2	Understanding