



ARMY PUBLIC SCHOOL GWALIOR
CLASS - IV
ACADEMIC SESSION 2023-24
WORKSHEET (SELF –ASSESSMENT)

Subject: English

Assignment No. : 3

Allotment Date: 25 August 2023

S. NO.	QUESTIONS	MARKS	NATURE
1	<p>Read the following paragraph and answer the questions given below:</p> <p>Bears are found in Europe, Asia, Africa and America. They are massively built, with short tails and thick legs. Bears are not really carnivores. They eat almost anything, the chief exception in the polar bear, which in its natural state lives on fish and seals. However, in captivity, they seem to enjoy meat, vegetables, fruits, milk, rice and porridge. Bears are not quite as dangerous as people imagine them to be like most animals; they will do their best to avoid human beings. They have a special sense that is eyesight to see things.</p> <p>(1) Tick the correct answer of the following questions.</p> <p>a) Where are bears found?</p> <p>i). America ii). Australia iii) Arctic iv) None of the above</p> <p>(b) What does a bear eat in captivity?</p> <p>i) meat ii) chapatti iii) seal iv) trees</p> <p>(2) Find the opposites of the following words from the passage:</p> <p>a) harmless- _____ b) ordinary - _____</p> <p>(3) Complete the following sentences:</p> <p>a) Bears are not quite as dangerous as _____ _____</p> <p>b) Bears have a special _____ _____</p>	3 marks	Reading and understanding

2	<p>Make sentences with the given words:</p> <p>a) nutritious-</p> <p>_____.</p> <p>b) greedy -</p> <p>_____.</p>	2 marks	Critical thinking		
3	<p>Match the following words with their meanings:</p> <table border="0" style="width: 100%;"> <tr> <td style="width: 50%; vertical-align: top;"> <p>Words</p> <p>i) bald</p> <p>ii) short</p> <p>iii) perfect</p> </td> <td style="width: 50%; vertical-align: top;"> <p>Meanings</p> <p>a) brief</p> <p>b) completely free from fault</p> <p>c) not covered with leaves</p> </td> </tr> </table>	<p>Words</p> <p>i) bald</p> <p>ii) short</p> <p>iii) perfect</p>	<p>Meanings</p> <p>a) brief</p> <p>b) completely free from fault</p> <p>c) not covered with leaves</p>	3 marks	Understanding and analytical skill
<p>Words</p> <p>i) bald</p> <p>ii) short</p> <p>iii) perfect</p>	<p>Meanings</p> <p>a) brief</p> <p>b) completely free from fault</p> <p>c) not covered with leaves</p>				
4	<p>Imagine yourself to be the stranger of lesson- 'The Distinguished Stranger'. Do you think that you would have believed all that the philosopher told you?</p> <p>_____</p> <p>_____</p> <p>_____</p> <p>_____</p>	2 marks	HOTS		
5	<p>Answer the following questions in short:</p> <p>i) Where was the village fair held?</p> <p>Ans. _____</p> <p>_____</p> <p>ii) Who were called 'dirty people' by the visitor?</p> <p>Ans. _____</p> <p>_____</p>	2 marks	Evaluation		
6	<p>GRAMMAR</p> <p>Fill in the blanks as directed:</p> <p>i) The test was _____. (Fill with an adjective)</p> <p>ii) I want _____ (tell) you a secret. (Use infinitive form of the verb)</p> <p>iii) Sanya live/lives in Mumbai. (Tick the correct verb)</p> <p>iv) We stood _____ (wait) for the taxi. (Fill with the participle)</p>	4 marks	Interdisciplinary understanding		
7	<p>Write a letter your class teacher requesting her to give you two days leave.</p> <p>_____</p> <p>_____</p>	4 marks	Communication skill		

	<p data-bbox="264 168 659 174">_____</p> <p data-bbox="264 302 692 309">_____</p> <p data-bbox="264 369 692 376">_____</p> <p data-bbox="264 414 692 450">Respected _____</p> <p data-bbox="264 504 1019 510">_____</p> <p data-bbox="264 571 1019 577">_____</p> <p data-bbox="264 638 1019 645">_____</p> <p data-bbox="264 705 1019 712">_____</p> <p data-bbox="264 772 1019 779">_____</p> <p data-bbox="264 840 1019 846">_____</p> <p data-bbox="264 907 1019 913">_____</p> <p data-bbox="264 974 1019 981">_____</p> <p data-bbox="264 1041 1019 1048">_____</p> <p data-bbox="264 1108 1019 1115">_____</p> <p data-bbox="264 1176 724 1182">_____</p> <p data-bbox="264 1243 724 1249">_____</p> <p data-bbox="264 1310 724 1317">_____</p>		
--	--	--	--



ARMY PUBLIC SCHOOL GWALIOR
CLASS - IV
ACADEMIC SESSION 2023-24
WORKSHEET (SELF -ASSESSMENT)



Subject: Hindi
Allotment Date: 25 August 2023

Assignment No. : 3

संख्या	प्रश्न	अंक	प्रकृति
प्र 1	<p>सही उत्तर चुनकर सही का निशान लगाओ-</p> <p>क) झंडा फहराते समय हम उसका सम्मान कैसे करते हैं?</p> <p>झंडा गान गाकर() खड़े होकर() ताली बजाकर()</p> <p>ख) बर्फ काटने के लिए बर्चेद्री ने किस का इस्तेमाल किया?</p> <p>कैची का () फावड़े का() चाकू का()</p> <p>ग) कबूतर पर निशाना किसने साधा?</p> <p>शिकारी ने() चींटी ने() लड़की ने()</p>	3x1=3	बोधात्मक
प्र2	<p>प्रत्येक के लिए दो-दो पर्यायवाची शब्द लिखो वृ</p> <p>1 पेड़ _____</p> <p>2. शाम _____</p> <p>3. पानी _____</p>	3x1=3	ज्ञानात्मक
प्र 3	<p>निम्नलिखित शब्दों के अर्थ लिखो -</p> <p>1 पंचवर्षीय _____</p> <p>2 आरोहण _____</p> <p>3 घोषणा _____</p> <p>4 जिंदा _____</p>	4x1=4	रचनात्मक

प्र 4	क्रिया विशेषण शब्द चुनकर लिखो- 1. चींटी धीरे-धीरे झरने पर आई। _____ 2. कबूतर ने चींटी के पास पत्ता तेजी से फेंका। _____ 3. एक शिकारी उसी जगह पर आया। _____ 4. कबूतर शाम को चींटी से मिलने आया। _____	4x1=4	सूचनात्मक
प्र 5	(अ) निम्नलिखित प्रश्नों के उत्तर दो - (i) सफेद रंग क्या संदेश देता है? (ii) सागरमाथा के तक पर पहुंचकर बर्चेद्री ने क्या किया? (iii) पानी में गिरने पर चींटी क्यों घबरा गई? (iv) विशेषण किसे कहते हैं?	4x1=4	विश्लेषणात्मक
प्र 6	मूल्यपरक प्रश्न - असंभव से दिखने वाले कार्य कैसे संभव किए जा सकते हैं? _____ _____	2	उच्चस्तरीय चिंतन



ARMY PUBLIC SCHOOL GWALIOR
CLASS - IV
ACADEMIC SESSION 2023-24
WORKSHEET (SELF –ASSESSMENT)




Subject: Mathematics

Assignment No. : 3

Allotment Date: 25 August 2023

S. NO.	QUESTIONS	MARKS	NATURE
1	Fill in the blanks: (a) _____ is the only even prime number. (b) _____ is the smallest prime number. (c) The largest 1-digit prime odd number is _____ (d) The smallest composite odd number is _____	4×1 = 4	Observation
2	Find the product : (a) 176×29 (b) 3074×189	2×1 = 2	Mental Ability
3	Divide the following: (a) $7809 \div 5$ (b) $6260 \div 17$	2×1 = 2	Decision Making
4	Fill in the blanks: (a) $5674 \div 1 =$ _____ (b) _____ $\div 1 = 9455$ (c) $48 \div 48 =$ _____ (d) _____ $\div 3325 = 0$	4×1 = 4	Understanding
5	Do as directed: (a) Find the HCF of the following numbers:	4×1 = 4	Problem Solving

	<p>(i) 14,21</p> <p>(ii) 12,16</p> <p>(b) Find the LCM of the following numbers:</p> <p>(i) 10,15</p> <p>(ii) 24,30</p>		
<p>6</p>	<p>Read the word problems and solve:</p> <p>(a) A dealer purchases a second-hand car for Rs 1, 35,000 and spends Rs 95, 000 on it. He got Rs 3,00,000 for selling the car. How much did he save?</p> <p>(b) A gross of paper contains 144 sheets. Find the number of sheets in 2874 grosses.</p>	<p>4×1 = 4</p>	<p>Critical Thinking</p>



ARMY PUBLIC SCHOOL GWALIOR
CLASS - IV
ACADEMIC SESSION 2023-24
WORKSHEET (SELF –ASSESSMENT)




Subject: EVS

Assignment No. : 3

Allotment Date: 25 August 2023

S. NO.	QUESTIONS	MARKS	NATURE
Q1	Answer the following questions. What is occupation. _____ _____	1x1=1	Information
Q2	Describe the dignity of labour. _____ _____	2X1=2	Understanding
Q3	Who are professionals? _____ _____	2x1=2	HOTS
Q4	i) Name some occupations which are looked down upon by people in India. _____ _____ _____	2x2=4	Interdisciplinary

	<p>ii)What is the difference between women of ancient times and today's women?</p> <hr/> <hr/>		
Q5	<p>l) Write any one achievement of the following Indians</p> <p>a. Indira Gandhi _____</p> <p>b. Santosh Yadav _____</p> <p>c. Neerja Bhanot _____</p> <hr/>	3x2=6	<p>Analytical Skill</p>
	<p>i) Name the work done by these workers?</p> <p>a. Carpenter _____</p> <p>b. Electrician _____</p> <p>c. Painter _____</p>		<p>Critical Thinking and Problem Solving</p>
Q 6.	<p>Explain how the women in India are working in every field.?</p> <hr/> <hr/> <hr/>	5x1=5	<p>Communication Skills</p>






ARMY PUBLIC SCHOOL GWALIOR
CLASS - IV
ACADEMIC SESSION 2023-24
WORKSHEET (SELF –ASSESSMENT)

Subject: G.K

Assignment No. : 3

Allotment Date: 25 August 2023

S.NO	QUESTIONS	MARKS	SKILLS
1.	<p>Answer the following in one-word:</p> <p>(a) _____ oil of this spice is used to get relief from the toothache.</p> <p>(b) _____ is the largest of all lizard species that grows up in 3 metres in length.</p> <p>(c) _____ are the only organs in the human body that are capable of floating on water.</p> <p>(d) _____ is world's largest continent.</p> <p>(e) _____ was popularly known as Punjab Kesari.</p>	5	Informative and general awareness
2.	<p>Identify the following pictures.</p> <p></p> <p>(a) _____</p> <p></p> <p>(b) _____</p> <p></p>	5	Identification and general awareness

(c) _____



(d) _____



(e) _____



ARMY PUBLIC SCHOOL GWALIOR
CLASS - IV
ACADEMIC SESSION 2023-24
WORKSHEET (SELF –ASSESSMENT)


Subject: Computer

Allotment Date: 25 August 2023

Assignment No. : 3

S.NO.	QUESTIONS	MARKS	NATURE
1	<p>1. The colored wavy line which shows the spelling mistake is _____</p> <p>a) Blue b) Yellow c) Red</p> <p>2. Inserting _____ makes the document more attractive and presentable.</p> <p>a) Words b) Sentences c) Pictures</p> <p>3. _____ text means adjusting the text around the images accordingly.</p> <p>a) Inserting b) Wrapping c) Review</p> <p>4. Shapes command is available under _____ tab.</p> <p>a) Home b) Insert c) Review</p> <p>5. _____ feature displays first character of the paragraph in capital.</p> <p>a) WordArt b) Drop Cap c) Thesaurus</p>	5x0.5=2.5	Information
2	<p>A. Fill in the blanks:</p> <p>1. _____ a text means the text disappears from its original location.</p> <p>2. _____ reverses the case of letters or selected text.</p> <p>3. _____ provides many unique, decorative text styles.</p> <p>4. _____ feature increases the size of the first letter of a</p>	5x0.5=2.5	Understanding

	<p>paragraph.</p> <p>5. You can produce a _____ of the document displayed on screen.</p>		
3	<p>A. Write 'T' for True and 'F' for False statements.</p> <ol style="list-style-type: none"> 1. Copying removes the text from its original location. 2. We can press Ctrl+Z keys to use Undo feature. 3. Word provides many options to wrap the text around image. 4. We cannot move an image in the document. 	4x0.5=2	Interdisciplinary
4	<p>Answer the following questions</p> <ol style="list-style-type: none"> 1. What is the use of Undo feature in Word? 2. How are spelling and grammar mistakes identified in Word? 3. What is Thesaurus? How is it useful? 	3x1=3	Critical Thinking and Problem Solving



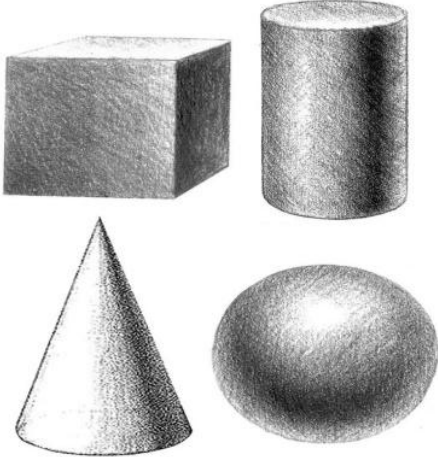
ARMY PUBLIC SCHOOL GWALIOR
CLASS - IV
ACADEMIC SESSION 2023-24
WORKSHEET (SELF –ASSESSMENT)

Subject: Art and Work Education

Assignment No. : 3

Allotment Date: 25 August 2023

S.NO	QUESTIONS	MARKS	SKILLS/ COMPETENCIES
1.	What is the shape with four equal sides? a) Rectangle b) Square c) Triangle	1	Creativity
2.	Which of these is a basic shape? a) Cube b) Circle c) Sphere	1	Creativity
3.	A cube is a _____. a) One dimensional shape b) Two dimensional Shape c) Three dimensional Shape	1	Creativity
4.	What is the shape of a football? a) Cube b) Sphere c) Cuboid	1	Creativity
5.	What is the shape of a birthday cap? a) Cone b) Square c) Circle	1	Creativity
6.	How many right angles does a rectangle have? a) 1 b) 2 c) 4 d) 5	1	Creativity
7.	A triangle is a 2D figure: a) true b) false	1	Creativity
8.	Which of these is a three dimensional shape? a) Rectangle b) cone	1	Creativity

	<p>c) square</p>		
9.	<p>Is Cuboid is a 3D form of rectangle?</p> <p>a) True b) False</p>	1	Creativity
10.	<p>What shapes are this?</p>  <p>a) 2D b) 4D c) 3D d) Circle</p>	1	Creativity



ARMY PUBLIC SCHOOL GWALIOR
CLASS - IV
ACADEMIC SESSION 2023-24
WORKSHEET (SELF –ASSESSMENT)




Subject: Physical Education

Assignment No. : 3

Allotment Date: 25 August 2023

S.N	QUESTIONS	MARKS	SKILLS/COMPETENCIES
1	Shorts answer question 1.what was chess originally called in india ? a) box game b) chaturanga c) 8x8 grid d) box chess	1	INFORMATION
2	2. name the most popular tag game in India. a) chain chain b) ice water c) pakadam pakdai d) kho kho	1	INFORMATION
3	3. played with seven stones is called? a)7 wonder b) 7 square c) Sitholia d) 7 chance	1	INFORMATION
4	4. a game with seven members in each team is called? a) kho kho b) football c) cricket d) realy 100 m	1	INFORMATION

5	<p>FILL IN THE BLANKS: -</p> <p>1. The _____ is a small oval shaped piece of wood.</p> <p>a) Lattoo</p> <p>b) Plastic ball</p> <p>c) Kancha</p> <p>d) Hand ball</p>	1	INFORMATION
6	<p>2. There are _____ player in each team of kho kho</p> <p>a) 7</p> <p>b) 4</p> <p>c) 8</p> <p>d) 9</p>	1	INTERDISCIPLINARY
7	<p>3. Jumping games good for student_____.</p> <p>A) Health</p> <p>B) Ground</p> <p>C) Cone</p> <p>D) Dress</p>	1	INTERDISCIPLINARY
8	<p>1) We can play recreational games indoor as well as outdoor. (True/False)</p>	1	INTERDISCIPLINARY
9	<p>9. we play games to be healthy and strong. (True/ False)</p>	1	UNDERSTANDING
10	<p>10.Junk food is good for health. (True/False)</p>	1	UNDERSTANDING



ARMY PUBLIC SCHOOL GWALIOR
CLASS - IV
ACADEMIC SESSION 2023-24
WORKSHEET (SELF –ASSESSMENT)

Subject: Dance and Music

Assignment No. : 3

Allotment Date: 25 August 2023

S. NO.	QUESTIONS	MARKS	NATURE
	What is the classical dance form associated with Lord Krishna? a) Kathak b) Bharatanatyam	1	Information
2	Which classical dance style often incorporates stories of Lord Krishna's life and exploits? a) Odissi b) Manipuri	1	Understanding
3	In which state of India is the classical Krishna dance form called "Krishnanattam" performed? a) Kerala b) Maharashtra	1	Critical Thinking
4	Which classical dance style is characterized by graceful movements depicting Krishna's divine love and playful nature? a) Kuchipudi b) Kathakali	1	Creative Thinking
5	Which musical instrument is commonly used in the accompaniment of classical Krishna dance performances? a) violin	1	Understanding

	b) Mridangam		
6	<p>What is another word for patriotic song?</p> <p>1) Anthem</p> <p>2) Folk song</p>	1	Information
7	<p>Complete the lyrics “ hum bharat ke _____?”</p> <p>1) Matwale</p> <p>2) Rakhwale</p>	1	Critical thinking
8	<p>Who wrote the lyrics of national anthem of India?</p> <p>1) Bankim Chandra Chatterjee</p> <p>2) Rabindranath Tagore</p>	1	understanding
9	<p>What is a patriotic person called?</p> <p>1) Patriot</p> <p>2) Freedom fighter</p>	1	Creative thinking
10	<p>What is the date of Independence day?</p> <p>1) 14 august</p> <p>2) 15 august</p>	1	Information