

ARMY PUBLIC SCHOOL GWALIOR
CLASS - IX
ACADEMIC SESSION 2023-24
WORKSHEET (SELF –ASSESSMENT)

Subject: English

Assignment No. : 3

Allotment Date: 20 July 2023

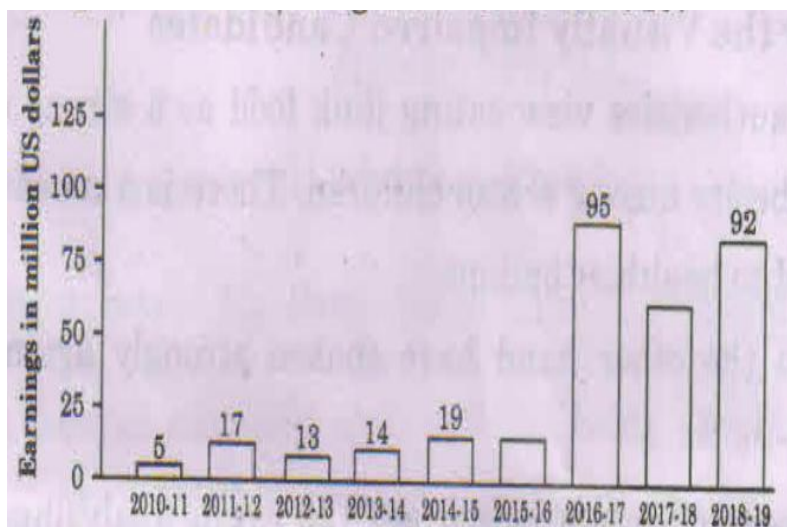
S. NO	QUESTIONS	MARKS	NATURE
Q.1	<p>Read the Passage carefully.</p> <p>Unconsciousness is a state where the person appears to be in deep sleep from which he/ she cannot be awoken. The individual does not respond to any external stimuli, like sprinkling cold water on the face, and for that matter even painful ones like piercing with a pin, tingling a nerve etc. This insensible state is brought about by some interference in the normal functioning of the brain and the nervous system.</p> <p>Unconsciousness when partial is called stupor and when complete is called coma. In cases of stupor, the individual can be roused with difficulty, but the eyelids cannot be opened due to resistance by the individual. In a coma, however, there is no response when an individual is being called, the lids can be opened without any resistance.</p> <p>The usual case of unconsciousness includes fainting, sunstroke, concussion (brain injury), etc. Fainting is caused by the temporary reduction in the blood supply to the brain because of fright, unexpected, good or bad news etc. People held up in stuffy places like elevators often faint. A sudden fall in blood pressure can also cause fainting. The individual appears pale, becomes weak and slow, breathing becomes shallow and skin turns cold and clammy.</p> <p>Excessive summer heat can make an individual faint. Prolonged exposure to sun may also cause sunstroke, which starts with headache, vomiting, dizziness, cramps, or dryness of the throat.</p> <p>Concussion commonly results in unconsciousness. Direct injury to the brain caused by either a blow on the head or a fall from a height etc may result in concussion. The patient may 'black out' for a short while in mild cases. Concussion and compression result in stupor or coma in more serious cases.</p> <p>An individual could suddenly become unconscious due to a heart attack. The initial signs are vomiting, profuse sweating and pain on the left side of the chest.</p> <p>Complete the following statements by selecting the most appropriate options from the ones given below.</p> <p>1. Deep sleep from which a person cannot be awoken is</p>	5 M	Understanding

	<p>called_____.</p> <p>a) consciousness b) unconsciousness c)conscious d) conscientiousness</p> <p>2. Unconsciousness is caused by_____.</p> <p>a)some intervals in the normal functioning of the brain b) some interference in the nervous system c) some intervening in the normal functioning of the brain d) some interference in the normal functioning of the brain and the nervous system</p> <p>3. Sunstroke is caused by_____</p> <p>a)prolonged exposure to sun b) longed exposure to sun c) longed exposure to moon d) prolonged explosive of sun</p> <p>4.Complete unconsciousness is termed as_____.</p> <p>a) b) fainting c) swooning d) coma</p> <p>5. The other word for 'something that causes reaction' is_____.</p> <p>a) concussion b) signs c) stimuli d) dizziness</p>		
<p>Q.2</p>	<p>Read the passage carefully.</p> <p>The story of Joanne Kathleen Rowling’s near magical rise to fame is almost as well known as the characters she creates.</p> <p>Rowling was constantly writing and telling stories to her younger stupor sister Dianne. “The first story I ever wrote down was about a rabbit called Rabbit.” Rowling said in an interview. “He got the measles and was visited by his friends including a giant bee called Miss Bee. And ever since Rabbit and Miss Bee, I have always wanted to be a writer, though I rarely told anyone so.</p> <p>However, my parents, both of whom come from impoverished backgrounds and neither of whom had been to college, took the view that my overactive imagination was an amusing personal quirk that would never pay a mortgage or secure a pension.</p> <p>A writer from the age of six, with two unpublished novels in the * drawer, she was stuck on a train when Harry walked into her mind fully formed. She spent the next five years constructing the plots of seven books, one for every year of his secondary school life.</p> <p>Rowling says she started writing the first book, Harry’ Potter and the Sorcerer’s Stone, in Portugal, where she was teaching English.</p> <p>At first nobody wanted to publish Harry Potter. She was told that plot was too complex. Refusing to compromise, she found a publisher.</p> <p>n 1997 Rowling received her first royalty cheque. By book three, she had skyrocketed to the top of the publishing world. A row of</p>	<p>5</p>	<p>Critical Thinking & Problem Solving</p>

zeroes appeared on the author's bank balance and her life was turned upside down. Day and night she had journalists knocking on the unanswered door of her flat.

Rowling's quality control has become legendary, as her obsession with accuracy. She's thrilled with Stephen Fry's taped version of the books and outraged that an Italian dust jacket showed Harry minus his glasses. "Don't they understand that the glasses are the clue to his vulnerability."

Annual earnings of J.K. Rowling from 2010 to 2019



On the basis of your understanding of the passage answer any five of the six questions given below. $1 \times 5 = 5$

- (i) Explain J.K. Rowling's 'near magical rise to fame'.
- (ii) What reason did the publishers give for rejecting Rowling's book?
- (iii) What was the drawback of achieving fame?
- (iv) Why was Rowling outraged with the Italian dust jacket?
- (v) Find a word in the last para that means the same as 'insecure/helpless'.
- (vi) According to the graph, how many years did it take Rowling to become very successful?

Q.3	You recently lost an expensive wristwatch belonging to your grandfather. You are now feeling afraid to confess. Express your feelings of anguish through a diary entry in 100-150 words.	5	Communication skill
Q.4	<p>The following passage has not been edited. There is one error in each line. Write the incorrect word and the correction against each line of the passage.</p> <p>The room in which the boys were feed a) _____</p> <p>was a large stone hall with a copper in b) _____</p> <p>one end: out of what the master, dressed c) _____</p> <p>in an apron.</p>	1x3	Analytical
Q.5	<p>Read the dialogue given below and then complete the report that follows.</p> <p>Father: What are you going to do?</p> <p>Son: I will phone the warden.</p> <p>Father: What's her name?</p> <p>Son: Jenny, she is a very helpful person.</p> <p>The father asked his son (a) _____ to do. The son (b) _____ phone the warden. On this the father asked what her name was.</p>	2	Interdisciplinary
Q.6	<p>Short Answer Type Questions</p> <p>Answer the following questions in 30-40 words only.</p> <ol style="list-style-type: none"> 1.What does Evelyn's narrative reveal about her? 2.What kind of a person was Kezia's father? 3.Why and how does the wind blow out weak fires? Who roar and flourish? 4.What finds an echo in the poet's heart and what starts weaving in his mind? Poem-The Rain on the Roof 5.Why did Mahendra become fond of Iswaran? 6.How did Iswaran tackle the elephant? 	2x6	Evaluation
Q.7	<p>Long Answer Type Questions</p> <p>Answer the following questions in 100-120 words.</p> <p>1.How did Kezia's efforts to please her father result in displeasing him very much? Elaborate</p> <p style="text-align: center;">OR</p> <p>What evidence do you have that Bismillah Khan and Evelyn both were perfect examples of wonders of grit and determination?</p> <p>2.How can you say that Iswaran was a fascinating storyteller?</p>	4x2	HOT



ARMY PUBLIC SCHOOL GWALIOR
CLASS - IX
ACADEMIC SESSION 2023-24
WORKSHEET (SELF –ASSESSMENT)

Subject: Hindi

Assignment No. : 3

Allotment Date: 20 July 2023

S. NO.	QUESTIONS	MARKS	NATURE
1	आपके विद्यालय से जम्मू कश्मीर भ्रमण हेतु-छात्रों का एक दल जा रहा है। इस यात्रा में शामिल होने के कारणों का उल्लेख करते हुए अपने पिता जी से अनुमति माँगते हुए पत्र लिखिए।	5	Information
2	बढ़ती गरमी और कम होती वर्षा के बारे में दो मित्रों के मध्य हुए संवाद का लेखन 50 से 60 शब्दों में कीजिए	6	Communication Skills
3	नीचे दिए गए शब्दों में उचित स्थान पर अनुनासिक का प्रयोग करके शब्दों को पुनः लिखिए- मुह, साप (ख (नीचे दिए गए शब्दों में उचित स्थान पर अनुस्वार का प्रयोग करते हुए शब्दों का मानक रूप लिखिए – बिदु, बधन निम्नलिखित शब्दों के प्रत्यय लिखिए चौकीदार – साप्ताहिक – पढ़ाकू- निम्नलिखित शब्दों के उपसर्ग लिखिए अत्याचार अधजला	2 2 3 3	Understanding

	कुचाल		
4	लेखक ने बुढ़िया के दुख का अंदाज़ा कैसे लगाया? स्पष्ट कीजिए।	5	Analytical Skill
5	निम्नलिखित में से किसी एक विषय पर 80 - 100 शब्दों में अनुच्छेद लिखिए जीवन में सरसता लाते त्योहार अथवा दिनोंदिन बढ़ती महँगाई	5	Critical Thinking and Problem Solving
6	निम्नलिखित प्रश्नों के उत्तर दीजिए- 1. नज़दीक से एवरेस्ट को देखकर लेखिका को कैसा लगा? 2. साउथ कोल कैंप पहुँचकर लेखिका ने अगले दिन की महत्त्वपूर्ण चढ़ाई की तैयारी कैसे शुरू की? 3. गिलहरी के घायल बच्चे का उपचार किस प्रकार किया गया?	9	Evaluation



ARMY PUBLIC SCHOOL GWALIOR
CLASS - IX
ACADEMIC SESSION 2023-24
WORKSHEET (SELF –ASSESSMENT)

Subject: Mathematics

Assignment No. : 3

Allotment Date: 20 July 2023

S. NO.	QUESTIONS	MARKS	NATURE
1	<p>The point of intersection of horizontal and vertical lines determining the position of a point in a cartesian plane is called:</p> <p>a. Origin</p> <p>b. X-axis</p> <p>c. Y-axis</p> <p>d. Quadrants</p>	1	Understanding
2	<p>The section formed by horizontal and vertical lines determining the position of the point in a cartesian plane is called:</p> <p>a. Origin</p> <p>b. X-axis</p> <p>c. Y-axis</p> <p>d. Quadrants</p>	1	Evaluation
3	<p>If the coordinates of a point are $(0, -4)$, then it lies in:</p> <p>a. X-axis</p> <p>b. Y-axis</p> <p>c. At origin</p>	1	Understanding

	d. Between x-axis and y-axis		
4	<p>If the coordinates of a point are (3, 0), then it lies in:</p> <p>a. X-axis</p> <p>b. Y-axis</p> <p>c. At origin</p> <p>d. Between x-axis and y-axis</p>	1	Interdisciplinary
5	<p>The solution of equation $x-2y = 4$ is:</p> <p>a. (0,2)</p> <p>b. (2,0)</p> <p>c. (4,0)</p> <p>d. (1,1)</p>	1	Analytical Skill
6	<p>If x coordinate of a point is zero, then the point lies on:</p> <p>a. First quadrant</p> <p>b. Second quadrant</p> <p>c. X-axis</p> <p>d. Y-axis</p>	1	Critical Thinking
7	<p>The linear equation $3x-11y=10$ has:</p> <p>a. Unique solution</p> <p>b. Two solutions</p> <p>c. Infinitely many solutions</p> <p>d. No solutions</p>	1	Evaluation
8.	<p>The graph of linear equation $x+2y = 2$, cuts the y-axis at:</p> <p>a. (2,0)</p>	1	Evaluation

	<p>b. (0,2)</p> <p>c. (0,1)</p> <p>d. (1,1)</p>		
9.	<p>Assertion reasoning-based question:</p> <p>Assertion: The graph of every linear equation in two variables is a straight line.</p> <p>Reason: $x = 0$ is the equation of the y-axis and $y = 0$ is the equation of the x-axis.</p> <p>Choose the correct answer out of the following choices:</p> <p>(a) Assertion and Reason both are correct statements and Reason is the correct explanation of Assertion.</p> <p>(b) Assertion and Reason both are correct statements but Reason is not the correct explanation of Assertion.</p> <p>(c) Assertion is correct statement but Reason is wrong statement.</p> <p>(d) Assertion is wrong statement but Reason is correct statement.</p>	1	Analytical Thinking
10	<p>The cost of a car is 10 times the cost of a bike. Write a linear equation in two variables to represent this statement.</p>	2	Interdisciplinary
11	<p>Express the $5 = 2x$ linear equations in the form $ax + by + c = 0$.</p>	2	Interdisciplinary
12.	<p>If Point (3, 4) lies on the graph of the equation $3y = kx + 7$, then find the value of k.</p>	2	Application
13	<p>Plot the following points and check whether they are collinear or not:</p> <p>(i) (1, 3), (-1, -1), (-2, -3)</p>	2	Application
14	<p>Without plotting the points indicate the quadrant in which they will lie, if</p> <p>(i) the ordinate is 5 and abscissa is -3</p> <p>(ii) the abscissa is -5 and ordinate is -3</p>	2	Analytical Thinking

	<p>(iii) the abscissa is – 5 and ordinate is 3</p> <p>(iv) the ordinate is 5 and abscissa is 3</p>										
15.	<p>Find the value of k, if $x = 1$, $y = 2$ is a solution of the equation $2x + 3y = k$.</p>	3	Evaluation								
16.	<p>Plot the points (x, y) given in the following table on the plane, choosing suitable units of distance on the axes.</p> <table border="1" style="margin-left: auto; margin-right: auto;"> <tr> <td>X</td> <td>-3</td> <td>0</td> <td>5</td> </tr> <tr> <td>Y</td> <td>4</td> <td>2</td> <td>-6</td> </tr> </table>	X	-3	0	5	Y	4	2	-6	3	Evaluation
X	-3	0	5								
Y	4	2	-6								
17.	<p>Write six solutions for the following equations: $2x+y = 7$</p>	3	Analytical thinking								
18.	<p>Plot the following points and write the name of the figure obtained by joining them in order: P (– 3, 2), Q (– 7, – 3), R (6, – 3), S (2, 2)</p>	3	Evaluation								
19.	<p>Read the Source/Text given below and answer the questions:</p> <p>Anil went to buy some vegetables, he bought 'x' kgs. of tomato and 'y' kgs. of potato. The total cost of vegetables comes out to be of Rs. 200. Now if the cost of 1 kg of tomato is Rs. 50 and 1 kg of potato is Rs. 20, then answer the following questions.</p> <p>I. Write equations represent the total cost. II. If Anil bought 'x' kgs of tomato and 2.5 kgs. of potato, then find the value of 'x'. III. At what point does the graph of $5x + 2y = 20$ cuts x-axis?</p>	4	Problem solving								
20.	<p>Show that the points A (0, 7), B (– 1, 20) and C (3, 32) lie on the graph of the linear equation $y = - 13x + 7$.</p>	5	Inter disciplinary								



ARMY PUBLIC SCHOOL GWALIOR
CLASS - IX
ACADEMIC SESSION 2023-24
WORKSHEET (SELF –ASSESSMENT)

Subject: Science

Assignment No. : 3

Allotment Date: 20 July 2023

S. NO.	QUESTIONS	MARKS	NATURE
1	Q1. Which speed is greater: 30 m/s or 30 km/h? Q2. Which of the following is a mixture? Salt, Air, Water, Alum, Sugar. Q3. Name the scientist who discovered the nucleus?	1 1 1	Information
2	Q4. What are chromosomes ? Where are they located? Write any one function of chromosomes. Q5. What is uniform acceleration? Q6. State three reasons why you think air is a mixture and water is a compound.	3 3 3	Understanding
3	Q7. What is the difference between uniform velocity and non-uniform velocity? Q8. What is the difference between colloids and suspensions?	3 3	HOT
4	Q9. Differentiate between a plant cell and an animal cell. Q10. A train starts from rest and accelerates uniformly at the rate of 5 m/s^2 for 5 sec. Calculate the velocity of train in 5 sec.	3 3	Interdisciplinary
5	Q11. Why are alloys regarded as mixtures? Q12. Which of the following will show Tyndall Effect and why? (a) Salt solution (b) Starch solution (c) Milk (d) Copper sulphate solution	3 3	Analytical Skill
6	Q12. A car starts from rest and acquires a velocity of 54 km/h in 2 sec. Find (i) the acceleration (ii) distance travelled by car assuming motion of car is uniform?	5	Critical Thinking and Problem Solving
7	Q13. What is Plasmolysis? Draw a well-labelled diagram of Plasmolysis.	5	Evaluation

	<p>(c) Decisions are taken after discussions and meetings</p> <p>(d) All of the above</p> <p>(iii) When did, General Pervez Musharraf led a military coup in Pakistan?</p> <p>(a) October 1999</p> <p>(b) July 1997</p> <p>(c) August 2000</p> <p>(d) April 2000</p> <p>(iv) Arrange the following in correct sequence.</p> <p>i. Military coup in Pakistan</p> <p>ii. Legal Framework Order in Pakistan</p> <p>iii. Mexico got its independence</p> <p>iv. Zimbabwe attained independence</p> <p>(a) iv, ii, iii, i</p> <p>(b) iii, iv, i, ii</p> <p>(c) i, iii, i, iv</p>	<p>1</p> <p>1</p>	
--	---	-------------------	--

	<p>(d) iv, iii, i, ii</p> <p>(v) Which one of the following is not followed in a democratic form of government?</p> <p>(a) Dignity of citizens</p> <p>(b) Assurance of political rights to the citizens</p> <p>(c) Restriction on freedom of speech and expression</p> <p>(d) Consultation in decision-making</p> <p>(vi) What are 'raw materials and money in hand' called?</p> <p>(a) Working capital (b) Fixed capital</p> <p>(c) Physical capital (d) Human capital</p> <p>(vii) Multiple cropping and modern farming methods</p> <p>(a) Increase agricultural productivity</p> <p>(b) Decrease agricultural productivity</p> <p>(c) Increase income level</p> <p>(d) All the above</p> <p>(viii) What is the main reason behind growing three</p>	<p>1</p> <p>1</p>	
--	--	---------------------------------	--


	<p>different crops in a year in Palampur?</p> <p>(a) The village has fertile land</p> <p>(b) The farmers are very hardworking</p> <p>(c) The village has well-developed system of irrigation</p> <p>(d) The farmers get enough rain during rainy season.</p> <p>(ix) Farmers of which states first tried out the modern farming method in India?</p> <p>(a) Punjab, Haryana and western Uttar Pradesh</p> <p>(b) Punjab, Haryana and eastern Uttar Pradesh</p> <p>(c) Punjab, Haryana and Rajasthan</p> <p>(e) Madhya Pradesh, Haryana and Rajasthan</p> <p>(x) When did the Green revolution take place in India?</p> <p>(a) In the early 1960s</p>	<p>1</p> <p>1</p>	
--	--	-------------------	--

	<p>(b) In the mid-1960s</p> <p>(c) In the late 1960s</p> <p>(d) In the late 1970s</p>	<p>1</p> <p>1</p>	
<p>2</p>	<p>(a) What are the advantages of having a healthy and educated population in the growth of production of crops?</p> <p>(b) Explain the meaning of representative democracy. How is it significant in the contemporary world?</p>	<p>3</p> <p>3</p>	<p>Understanding</p>

<p>3</p>	<p>(a) 'Democracy is all about political competition and power play. There is no scope for morality'. Justify the statement by giving arguments against democracy</p> <p>(b) "Every production is organised by combining land, labour, physical capital and human capital." Explain.</p>	<p>3</p> <p>3</p>	<p>HOT</p>
<p>4</p>	<p>(a) What is the relation between resources and development?</p> <p>Or</p> <p>(b) State the freedoms which are usually taken away when democracy is overthrown by a military regime.</p>	<p>3</p>	<p>Interdisciplinary</p>
<p>5</p>	<p>(a) Why are China, Estonia and Saudi Arabia not truly democratic countries? State any one reason for each of the countries.</p> <p>(b) Modern farming methods require more inputs which</p>	<p>5</p>	<p>Analytical Skill</p>

	are manufactured in industry. Do you agree?	5	
6	<p>Read the given extract and answer the following questions.</p> <p>In 1960, Govind was a farmer with 2.25 hectares of largely unirrigated land. With the help of his three sons Govind cultivated the land. Though they didn't live very comfortably, the family managed to feed itself with a little bit of extra income from one buffalo that the family possessed. Some years after Govind's death, this land was divided among his three sons. Each one now has a plot of land that is only 0.75 hectare in size. Even with improved irrigation and modern farming method, Govind's son are not able to make a living from their land. They have to look for additional work during part of the year.</p> <p>(a) What are the sources of income in Govind's family?</p> <p>(b) Govind's all three son belong to which category of farmers? Why?</p>	5	Critical Thinking and Problem Solving

	<p>(c) Suggest any two steps by which government can help them in improving their standard of living.</p>		
--	---	--	--



ARMY PUBLIC SCHOOL GWALIOR
CLASS - IX
ACADEMIC SESSION 2023-24
WORKSHEET (SELF -ASSESSMENT)

Subject: Computer

Assignment No. : 2

Allotment Date: 20 July 2023

S.NO.	QUESTIONS	MARKS	NATURE
1	<p>Choose and write the correct option (MCQ):-</p> <p>(i) What is a small graphical representation of an organism or theme?</p> <p>(a) Logo</p> <p>(b) Form</p> <p>(c) Button</p> <p>(d) Design</p> <p>(ii) Which button allows us to select an attractive layout from many ready-made available layouts?</p> <p>(a) Design</p> <p>(b) Navigation</p> <p>(c) AutoFormat</p> <p>(d) Form button</p> <p>(iii) Where are the previous, First, next and last record button located?</p> <p>(a) Title Bar</p> <p>(b) Create Tab</p> <p>(c) Navigation Bar</p> <p>(d) Show Table Window</p> <p>(iv) We can generate Reports and Queries from?</p> <p>(a) Tables</p> <p>(b) Forms</p> <p>(c) AutoFormat Data.</p> <p>(d) Database tools.</p>	1/2 x 5=2 1/2	Information

	<p>(v) Reports are?</p> <p>(a) Methods of presenting information in a formatted and organized manner, using the Table or Query as its source</p> <p>(b) Used to store data.</p> <p>(c) Used for entering data.</p> <p>(d) Used to search for records using criteria.</p>		
2	<p>Fill in the blanks-</p> <p>(i) To generate a Query, click on the Create tab and click on the _____ button.</p> <p>(ii) When you run a query, only those records, which match the _____ mentioned, will be displayed.</p> <p>(iii) To insert a long text in a field you should declare it as _____ data type.</p> <p>(iv) When you point at a field that has a Validation Rule the _____ is displayed.</p> <p>(v) The field properties can be easily set in the _____ View of the table.</p>	1/2 x 5=2 ½	Understanding
4	<p>Write True or False against the statements:-</p> <p>(i) Deleting fields in the Design View does not delete them from the table in the Datasheet View ()</p> <p>(ii) You cannot change the field data type in Datasheet view ()</p> <p>(iii) You can not specify criteria for a report. ()</p> <p>(iv) You cannot do the formatting in a Report. ().</p>	1/2 x 4=2	Interdisciplinary
5	<p>Answer the following questions -</p> <p>(i) What is the use of AutoFormat option in creating Reports?</p> <p>(ii) What is the advantage of a Form?</p> <p>(iii) Write down the steps to delete a field from Datasheet View?</p>	3x1= 3	HOT



ARMY PUBLIC SCHOOL GWALIOR
CLASS - IX
ACADEMIC SESSION 2023-24
WORKSHEET (SELF -ASSESSMENT)


Subject: Music/Dance (Vocal/Instrumental)

Assignment No. : 2

Allotment Date: 20 July 2023

S. NO.	QUESTIONS	MARKS	NATURE
1	How many Matras are those Taal kaharwa ? a) 8 (eight). b) 5 (five)	2	Informative
2	How many vibhags (parts) are there in taal kaharwa ? a) 2 (two). b) 4 (four)	2	Informative
3	which matras has clapping in Taal kaharwa ? a) 7 (seven) b) 1 (one).	2	Informative
4	which symbol is used for sam in taal kaharwa? a) 0 b) X.	2	Informative
5	which the rhythm of Taal kaharwa ? a) Da, Ge, Na, Ti, Na, ka, Dhi, Na. x. 0 b) Da, Dhin, Dhin, Da Da Dhin, Dhin, Da x. 0	2	Informative

6.	How many swaras are there in alankar number one ? a) 5 b) 7	2	Informative
7.	What is the 3rd swar in alankar? a) Sa b) Ga	2	Informative
8.	What is the group of swaras called? a) Alankar b) Nirankaar	2	Informative
9,	How many alankar you should learn in basic? a) 25 b) 7	2	Informative
10.	Alankar is word of which language? a) Arabic b) Sanskrit	2	Informative



ARMY PUBLIC SCHOOL GWALIOR
CLASS - IX
ACADEMIC SESSION 2023-24
WORKSHEET (SELF -ASSESSMENT)

Subject: Health and Physical Education
Allotment Date: 20 July 2023

Assignment No. : 2

S.N	QUESTIONS	NATURE	MARKS
1	MCQ A. What is the height of Antina ? i) 1.80 m. ii) 1.70 m. iii) 1.82 m. iv) 2.00 m.	Understanding)	4x1=4
	B) What is the distance between centre line and attack line? i) 2 m. ii) 3 m. iii) 4 m. iv) 5 m.	Informatory	

	<p>C) What is height of net in volleyball for women?</p> <p>i) 2.24 m.</p> <p>ii) 1.90 m.</p> <p>iii) 1.82 m.</p> <p>iv) 2.00 m.</p>	Analytical	
	<p>D) During Volleyball match players rotate in which direction?</p> <p>i) Clock wise</p> <p>ii) Anti clock wise</p> <p>iii) Circular</p> <p>iv) Anit clock wise and clock wise</p>	Information	
2.	<p>B) Fill In theBlanks: -</p> <p>i. When volleyball is played in the sand, it is called _____ volleyball.</p>	Informatory	3×1=3
	<p>ii. A ball is considered fair if it touches the endline or the _____.</p>	Informatory	
	<p>iii. A type of forearm pass is called a _____.</p>	Understanding	

3.	True/False i. The ball can be served any where behind the back line. True False	Understanding	3x1=3
	ii. The ball may hit any part of the body and still be a legal hit. True False	Understanding	
	iii. A volley ball team must win by a two-point advantages. True False		



ARMY PUBLIC SCHOOL GWALIOR
CLASS - IX
ACADEMIC SESSION 2023-24
WORKSHEET (SELF –ASSESSMENT)

Subject: Art and Work Education

Assignment No. : 2

Allotment Date: 20 July 2023

S. NO	QUESTIONS	MARKS	NATURE
1	What are the best objectives of still life?	2	Understanding
2	What are the rules of still life?	2	Evaluation
3	What is the role of still life?	2	Understanding
4	What is still drawing?	2	Understanding
5	What is still life study?	2	understanding

