


ARMY PUBLIC SCHOOL GWALIOR
CLASS - I
ACADEMIC SESSION 2023-24
WORKSHEET (SELF –ASSESSMENT)

Subject: English

Allotment Date: 20 July 2023

Assignment No. : 2

| S.N | QUESTIONS | MARKS | SKILLS/COMPETENCIES |
|-----|---|-------|---------------------------------------|
| A.1 | <p>Read the following passage and answer the question given below.</p> <p style="text-align: center;">School Carnival</p> <p>Rico's class went to the school carnival today. It was a lot of fun. Rico won two prizes. He won a blue balloon and a toy car. First , he played few games with his friends .Then, he got popcorn and lemonade with his friends finally he got to watch a magic show.</p> <p>A.1 Tick (✓) the correct option :</p> <p>(i) Rico's class went to the school</p> <p>a. Picnic b. Carnival c. Excursion</p> <p>(ii) He won a balloon.</p> <p>a. blue b. red c. green</p> <p>(iii) What Rico got to eat ?</p> <p>a. pastry b. sandwich c. popcorn</p> <p>(iv) Finally he got to watch show.</p> <p>a. magic b. puppet c. comic</p> <p>(v) Rico played games with his</p> | 5X1=5 | Language and Communication, Cognitive |

| | | | |
|-----|--|-----------|--|
| | a. teachers b. classmates c. friends | | |
| A.2 | <p>Answer in one word :</p> <p>Q.1 Where did Rico go ? Ans</p> <p>Q.2 How many prizes Rico win ? Ans</p> <p>Q.3 What Prizes Rico win ? Ans</p> <p>Q.4 Finally, Rico watched which show ? Ans</p> <p>Q.5 Where would you like to go for a picnic ? Ans</p> <p>Observe the picture given below and answer the questions followed :</p> <p>Observe the picture given below answer the questions given below:</p> <p style="text-align: center;">Park</p>  | 5 X 1 = 5 | Literacy Skills |
| B.1 | <p>From the given help box fill in the blanks given below (playing , painting, reading, football, swing)</p> <p>(i) One girl is making a</p> <p>(ii) The children are</p> <p>(iii) One boy is abook.</p> | 5X1=5 | Language and Communication,Thinking Skills |

| | | | |
|------------|--|--------------|--------------------------|
| <p>B.2</p> | <p>(iv) Two boys are playing with a</p> <p>(v) One girl is on the</p> <p>Answer the following in one sentence</p> <p>Q.i It is the picture of which place ? Ans.</p> <p>Q.ii How many trees are there in the picture ? Ans.</p> <p>Q.iii Who is painting a picture ? Ans.....</p> <p>Q.iv How many boys are playing football ? Ans.....</p> <p>Q.v Where is s boy reading book ? Ans.....</p> | <p>5X1=5</p> | <p>Critical thinking</p> |
|------------|--|--------------|--------------------------|






ARMY PUBLIC SCHOOL GWALIOR
CLASS - I
ACADEMIC SESSION 2023-24
WORKSHEET (SELF -ASSESSMENT)






Subject: Hindi

Assignment No. : 2

Allotment Date: 20 July 2023

| संख्या | प्रश्न / उत्तर | अंक | प्रकृति |
|--------|--|-----|----------|
| प्र.1 | मात्रा लगाकर शब्द पुरे करो । 1. __सतार _____ 2. नि_ध _____ 3. तबल__ _____ 4. अन__र _____ 5. नाच__ _____ 6. __कताब _____ | 3 M | गहनसोच |
| प्र.2 | दी गई मात्राओं के दो - दो शब्द लिखिए । ी = _____ ि = _____ | 4M | बोधात्मक |
| प्र.3 | पहचानो और मिलाओ ।  छतरी  विमान  आम | 5M | गहनसोच |

| | | | |
|--------------|---|-----------|---------------------|
| |  <p>हिरन</p>  <p>मछली</p> | | |
| <p>प्र.4</p> | <p>रिक्त स्थान भरो। (ताल ,तबला,गाना,सितार)</p> <ol style="list-style-type: none"> 1. निधि ____ लाई । 2. विकासने ____ गाया। 3. मिहिर ____ लाया। 4. विभा ____ परनाच। | <p>4M</p> | <p>मननकौशल</p> |
| <p>प्र.5</p> | <p>निम्नलिखित प्रश्न के उत्तर दीजिए ।</p> <p>प्र1: गीता की बड़ी बहन कौन थी?</p> <p>प्र2: कहानी का क्या नाम था?</p> <p>प्र3: ताल पर कौननाचा?</p> <p>प्र3: ऋचा क्या लाई?</p> | <p>4M</p> | <p>समस्यासमाधान</p> |











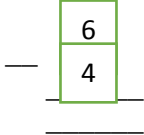
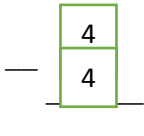
ARMY PUBLIC SCHOOL GWALIOR
CLASS - I
ACADEMIC SESSION 2023-24
WORKSHEET (SELF -ASSESSMENT)

Subject: Mathematics


Assignment No. : 2

Allotment Date: 20 July 2023

| S.N | QUESTIONS | MARKS | NATURE |
|-----|---|-------|-------------------|
| 1 | $4+4 = \underline{\quad}$ $6+3 = \underline{\quad}$ | 2X1=2 | Information |
| 2 | Fill in the placeholders: $7 - 0 = \underline{\quad}$ $\underline{\quad} - 1 = 8$ | 2X1=2 | Understanding |
| 3 | Subtract the objects and fill in the space provided:  $\underline{\quad} - \underline{\quad} = 2$   $\underline{\quad} - 3 = \underline{\quad}$   $6 - \underline{\quad} = \underline{\quad}$ | 3X1=3 | Interdisciplinary |

| | | | |
|----------|--|--------------|--|
| <p>4</p> | <p>Do solve the following:</p>    | <p>3X1=3</p> | <p>Analytical Skill</p> |
| <p>5</p> | <p>Subtract the following by drawing strokes :-</p>   | <p>2X1=2</p> | <p>Critical Thinking and Problem Solving</p> |
| <p>6</p> | <p>Answer the following questions:-</p> <p>How many doors and windows are there in your house? Count and write the total number of them altogether.</p> <p>Doors ___</p> <p>+ Windows ___</p> <p>_____</p> <p>_____</p> | <p>2X1=2</p> | <p>HOT</p> |
| <p>7</p> | <p>Solve the following:</p> <p>5+3 = _____</p> <p>4+3 = _____</p> <p>6-2 = _____</p> <p>6-6 = _____</p> | <p>4X1=4</p> | <p>Evaluation</p> |

| | | | |
|-----------------|--|--------------|--|
| <p>8</p> | <p>Solve the following word problems:-</p> <p>There are 4 monkeys sitting on a wall .5 monkeys are sitting on another wall. Find the total number of monkeys sitting on the walls.</p> $ \begin{array}{r} \square \\ + \square \\ \hline \hline \end{array} $ <p>Rani needs 6 pencils. She has 2 pencils. How many books should she buy more?</p> $ \begin{array}{r} \square \\ - \square \\ \hline \hline \end{array} $ | <p>2x1=2</p> | <p>Communication</p> <p>Skills and Problem Solving</p> |
|-----------------|--|--------------|--|





ARMY PUBLIC SCHOOL GWALIOR
CLASS - I
ACADEMIC SESSION 2023-24
WORKSHEET (SELF –ASSESSMENT)


Subject: EVS

Assignment No. : 2

Allotment Date: 20 July 2023

| S.N | QUESTIONS | MARKS | NATURE |
|-----|---|--------|-----------------------|
| 1 | Tick (√) the correct option. (i) We must trim our nails a. once a year b. once a month c. once a week (ii) We have sense organs. a. 7 b. 5 c. 8 (iii) I smell with my <p>a. nose b. eyes c. tongue</p> <p>(iv) It's taste is sour . a. sugar b. apple c. lemon</p> <p>(v) It is the largest sense organ of our body. a. skin b. nose c. ears</p> | 5X.1=5 | Information |
| 2 | (i) Draw two fruits that are yellow in colour::  | 2X1=2 | Aesthetic, Analytical |
| | (i) Draw two things that smells good:  | 2X1=2 | |

| | | | |
|---|--|-------|---|
| 3 | Name the following: 1.One sense organ 2.One physical exercise 3. One good habit | 3X1=3 | Interdisciplinary |
| 4 | Circle the odd one out: 1.apple mango tomato orange 2. eyes nose tongue hands 3.jumping running playing eating | 3X1=3 | Critical Thinking and Problem Solving |
| 5 | Answer in one word: 1.Write the name of the city in which you live? Ans _____ 2.Write the name of your favourite fruit. Ans _____ 3.Write the name of your school. Ans _____ 4.Write the name of one indoor game you like to play. Ans _____ 5.Which is the top most part of the human body. Ans _____ | 5X1=5 | HOTS |



ARMY PUBLIC SCHOOL GWALIOR
CLASS - I
ACADEMIC SESSION 2023-24
WORKSHEET (SELF –ASSESSMENT)


Subject: G.K

Assignment No. : 2

Allotment Date: 20 July 2023

| S.N | QUESTIONS | MARKS | NATURE | | | | | | | | | | |
|------------------------|---|----------|-------------------|------------------|------|-----------|------|------------------------|--------|-------|------------|-------|-----------|
| 1 | <p>Fill in the blanks from the given help box:</p> <p>(Bihu , Tiger, washing machine ,Tree house,Lohri)</p> <ol style="list-style-type: none"> 1. is our national animal. 2. festival of Punjab is celebrated on January 13. 3. is called the ship of desert. 4. An appliance in which we wash the clothes is called 5. festival is celebrated in Assam. | 5X.1=5 | Information | | | | | | | | | | |
| 2 | <p>Q.IV Answer the questions in one word:</p> <p>(Mango, House boat, Onam, Mango, Cow)</p> <p>Q.1 Write the name of the fruit which is yellow in colour. Ans.</p> <p>Q.2 Which is the national flower of our country.? Ans.</p> <p>Q.3 Write the name of animal which gives us milk.. Ans.....</p> <p>Q.4 A house which is built on a boat. Ans.....</p> <p>Q.5 People of Kerala celebrate which festival? Ans.....</p> | 5X1=5 | Interdisciplinary | | | | | | | | | | |
| 3 | <p>Match the columns:</p> <table style="width: 100%; border: none;"> <tr> <td style="width: 50%;">1. Sheep</td> <td style="width: 50%;">Milk</td> </tr> <tr> <td>2. National tree</td> <td>Holi</td> </tr> <tr> <td>3. Pongal</td> <td>Wool</td> </tr> <tr> <td>4. Festival of colours</td> <td>Banyan</td> </tr> <tr> <td>5.Cow</td> <td>Tamil Nadu</td> </tr> </table> | 1. Sheep | Milk | 2. National tree | Holi | 3. Pongal | Wool | 4. Festival of colours | Banyan | 5.Cow | Tamil Nadu | 5X1=5 | Cognitive |
| 1. Sheep | Milk | | | | | | | | | | | | |
| 2. National tree | Holi | | | | | | | | | | | | |
| 3. Pongal | Wool | | | | | | | | | | | | |
| 4. Festival of colours | Banyan | | | | | | | | | | | | |
| 5.Cow | Tamil Nadu | | | | | | | | | | | | |

| | | | |
|----------|---|-------|-----------------|
| 4 | Write (T) for true and (F) for false: 1. Holi is the festival of colours. (.....) 2. Cat loves to eat chilli. (.....) 3. Horse gives us milk. (.....) 4. Tiger is our national animal. (.....) 5. Mahavir Jayanti is celebrated as the birth mark of Lord Mahavira. (.....) | 5X1=5 | Thinking Skills |
|----------|---|-------|-----------------|



ARMY PUBLIC SCHOOL GWALIOR
CLASS - I
ACADEMIC SESSION 2023-24
WORKSHEET (SELF –ASSESSMENT)


Subject: Computer

Assignment No. : 2

Allotment Date: 20 July 2023

| S.NO. | QUESTIONS | MARKS | NATURE |
|-------|--|---------|---------------|
| 1 | <p>Tick the correct answer</p> <p>(i) _____ is a smart machine.</p> <p>a) Computer b) Bicycle c) human</p> <p>(ii) _____ is used to type words.</p> <p>a) Mouse b) Keyboard c) CPU</p> <p>(iii) We can listen to _____ on a computer.</p> <p>a) songs b) sums c) colors</p> <p>(iv) A computer mouse has _____ buttons.</p> <p>a) two b) three c) four</p> | 0.5X4=2 | Information |
| 2 | <p>Fill in the blanks-</p> <div style="border: 1px solid black; padding: 5px; width: fit-content; margin: 10px auto;">Joystick, Speakers, keys, Computer, unit, Keyboard</div> <p>(i) Keyboard has many buttons called as</p> | 0.5X6=3 | Understanding |

| | | | |
|----------|--|---------|---|
| | <p>_____.</p> <p>(ii) With the help of _____ we can play games.</p> <p>(iii) We can listen to songs with the help of _____.</p> <p>(iv) _____ is used for searching on the internet.</p> <p>(v) CPU stands for central processing _____.</p> <p>(vi) We can type words with the help of _____.</p> | | |
| 3 | <p>Write True or False against the statements:-</p> <p>(i) Nature has created man made things.</p> <p>(ii) A computer cannot do many things.</p> <p>(iii) A computer has three main parts.</p> <p>(iv) We can play games on a computer.</p> <p>(v) A computer can help us in chatting.</p> <p>(vi) The CPU has many buttons called keys.</p> | 0.5X6=3 | Interdisciplinary |
| 4 | <p>Answer in one word -</p> <p>(i) Name any two man- made things.</p> <p>(ii) Which part is known as the brain of the computer?</p> <p>(iii) We can type our names using which device?</p> <p>(iv) Write any one use of computer?</p> | 0.5X4=2 | Critical Thinking and Problem Solving |



ARMY PUBLIC SCHOOL GWALIOR
CLASS - I
ACADEMIC SESSION 2023-24
WORKSHEET (SELF -ASSESSMENT)




Subject: Art and Craft

Assignment No. : 2

Allotment Date: 20 July 2023

| S. NO. | QUESTIONS | MARKS | NATURE |
|--------|------------------------|-------|----------|
| 1. | Draw the zig-zagline ? | 2 | Creative |
| 2. | Draw the Dashes line? | 2 | Creative |
| 3. | Draw the Loops line? | 2 | Creative |
| 4. | Draw the Hills line ? | 2 | Creative |
| 5. | Draw the clouds line ? | 2 | Creative |



ARMY PUBLIC SCHOOL GWALIOR
CLASS - I
ACADEMIC SESSION 2023-24
WORKSHEET (SELF –ASSESSMENT)

Subject: Health and Physical Education

Assignment No. : 2

Allotment Date: 20 July 2023

| S.N | QUESTIONS | MARKS | SKILLS/COMPETENCIES |
|---------------|--|-------|---------------------|
| TRUE OR FALSE | | | |
| 1. | Running is an outdoor activity. (True/False) | 1 | INFORMATION |
| 2 | Jumping should be performed on ground.. (True/False) | 1 | INFORMATION |
| 3 | Jumping is risky on the floor. (True/False) | 1 | INFORMATION |
| 4 | Running is allowed in the classroom. (True/False) | 1 | INFORMATION |
| MCQ | | | |

| | | | |
|-----------------------------------|---|---|-------------------|
| 5 | We can practice jumping _____? A) On Ground B) Inside Classroom C) In the corridor D) None of the above | 1 | INTERDISCIPLINARY |
| 6 | Running should be perform in _____? A) Running Shoes B) Casual Shoes C) Slippers D) All of these | 1 | INFORMATION |
| Write the answer of the following | | | |
| 7 | Do you like running and jumping ? | 2 | UNDERSTANDING |
| 8 | What do you like more indoor games or outdoor games? | 2 | UNDERSTANDING |