



**ARMY PUBLIC SCHOOL GWALIOR**  
**CLASS – VI**  
**ACADEMIC SESSION 2022-23**  
**WORKSHEET (SELF –ASSESSMENT)**



**Subject: English**

**Assignment No. : 7**

**Allotment Date: 15 January 2023**

S. NO.	QUESTIONS	MARKS	SKILLS/ COMPETENCIES
1	What was the motive behind the story of the old man?	4 m	Information
2	Change the following sentences into indirect speech: 1. Poonam said, "I do not know how to make tea." 2. My uncle said to me, "I am tired now." 3. I said, "I am waiting for my sister to arrive."	3m	Understanding
3	Define in brief about deserts. Are there any deserts in India? If yes, name them and give details where are they found?	4m	HOTs
4	In the poem, "Whatif" why do you think she/he has these worries? Can you think of ways to get rid of such worries?	3m	Interdisciplinary
5	Punctuate the given sentences. 1. You're indian aren't you. 2. Rome is the capital of italy. 3. a lady will dress up to go shopping water the plants empty the dustbin answer the phone read a book and get the letters from the box	3m	Understanding
6	Vijay Singh cleverly handled the ghost. What values can be learnt by his acts from the story?	4m	Critical Thinking and Problem Solving
7	Answer the following questions in about 20-30 words. 1. What did the poet like and dislike about the schooling ,in the poem "Whatif "? 2. Where do rattlesnakes be found and what do they eat? 3. In what way is Pambupatti different from any other village?	3x2=6m	Evaluation
8	Develop the following hints into a story and give a suitable title.  A monkey jumped into a manger _____ went to sleep in the soft hay _____ the ox came there to eat the hay _____ the monkey snapped at him _____ 'You cannot eat the hay yourself', said the ox _____ the monkey snapped at him again _____ " what a mean creature you are!" said the ox.	3m	Communication Skills



**ARMY PUBLIC SCHOOL GWALIOR**  
**CLASS – VI**  
**ACADEMIC SESSION 2022-23**  
**WORKSHEET (SELF –ASSESSMENT)**




**Subject: Hindi**

**Assignment No. : 7**

**Allotment Date: 15 January 2023**

क्रम संख्या	प्रश्न	अंक	प्रकृति
1-	बाँस को बूढ़ा कब कहा जा सकता है? बूढ़े बाँस में कौन सी विशेषता होती है, जो युवा बाँस में पाई जाती है?	5	INFORMATIVE
2-	‘नौकरों को हमें वेतनभोगी मजदूर नहीं अपने भाई के समान मानना चाहिए। इसमें कुछ कठिनाई हो सकती है, फिर भी हमारी कोशिश सर्वथा निष्फल नहीं जाएगी।’ गांधी जी ऐसा क्यों कहते होंगे? तर्क के साथ समझाओ।	1x4=4	UNDERSTANDING
3-	निम्नलिखित लोकोक्तियां को शुद्ध करके लिखिए- 1. तरबूज को देखकर तरबूज रंग बदलता है। 2. सिपाही की दाढ़ी में तिनका। 3. आ गाय मुझे मार। 4. एक सेव सौ बीमार। 5. घोड़ा निकल गया पूँछ रह गई।	1x5=5	HOT

4-	<p>उचित विराम चिन्हों का प्रयोग कीजिए-</p> <ol style="list-style-type: none"> <li>1. पंडित नेहरू देश के प्रधानमंत्री थे</li> <li>2. सीता गीता और सुनीता बहने हैं</li> <li>3. वाह क्या टीवी है</li> <li>4. माता पिता की आज्ञा का पालन करना चाहिए</li> <li>5. शास्त्री जी ने कहा - जय जवान जय किसान</li> </ol>	5	<b>INTERDISCIPLINARY</b>
5-	<p>गांधीजी अपने साथियों की जरूरत के मुताबिक हर काम कर देते थे, लेकिन उनका खुद का काम कोई और करें यह उन्हें पसंद नहीं था। क्यों? सोचो और अपने विचार लिखो।</p>	5	<b>CRITICAL THINKING AND PROBLEM SOLVING</b>
6	<p>निम्नलिखित प्रश्नों के उत्तर दीजिए।</p> <ol style="list-style-type: none"> <li>1. लंदन में भोज पर बुलाए जाने पर गांधी जी ने क्या किया?</li> <li>2. राम ने थकी हुई सीता की क्या सहायता की?</li> <li>3. बांस की बुनाई मानव के इतिहास में कब आरंभ हुई होगी?</li> </ol>	3x2=6	<b>EVALUATION</b>



**ARMY PUBLIC SCHOOL GWALIOR**  
**CLASS – VI**  
**ACADEMIC SESSION 2022-23**  
**WORKSHEET (SELF –ASSESSMENT)**




**Subject: Mathematics**

**Assignment No. : 7**

**Allotment Date: 15 January 2023**

S No.	QUESTIONS	MARKS	NATURE
1	An equilateral triangle has lines of symmetry. (a) three (b) two (c) one (d) none of these	1	Application
2	Find the third proportion of 16 and 36.	1	Problem solving
3	The_____ of quantities in the ratio is important. (a) form (b) order (c) Area (d) none of these	1	Understanding
4	Simplify the ratio 42 : 63.	1	Application
5	A figure has line symmetry if a line can be drawn dividing the figure into two parts. (a) identical (b) fixed (c) divided (d) none of these	1	Understanding
6	Write 5 such English letters which have horizontal line of symmetry.	1	Problem solving
7	A human body has a line of symmetry.	1	Application
8	Fill in the missing number $\frac{5}{9} = \frac{(5 \times \dots)}{81}$	1	Interpretation
9	Find the number of lines of symmetry the following letters : a) H            b) X	2	Evaluation
10	Are the following statements true? a) 45 km : 60 km = 12 hours : 15 hours b) 7.5 litres : 15 litres = 5 kg : 10 kg	2	Evaluation
11	Draw the number of lines of symmetry in a regular pentagon.	2	Evaluation
12	The ratio of Julie's money to Pradeep's money is 4 : 6. If Julie has Rs. 500, how much money does Pradeep have?	2	Interpretation
13	If the ratio a : b = 2 : 3, and b : c = 3 : 4. Find the ratio a : c.	2	Understanding & problem solving
14	Divide 50 kg rice between Bob and John in the ratio of 2 : 3.	3	Problem solving
15	The LCM of two numbers is 160, and their ratio is 4 : 5. Find the largest of the two numbers.	3	HOTS
16	If 60 men do a piece of work in 27 days, then in how many days can 18 men do the same work?	3	Problem Solving
17	Draw the following shapes and find the number of lines of symmetry (a) Equilateral triangle (b) Rectangle	3	Understanding

	(c) Square (d) Parallelogram		
--	---------------------------------	--	--



**ARMY PUBLIC SCHOOL GWALIOR**  
**CLASS – VI**  
**ACADEMIC SESSION 2022-23**  
**WORKSHEET (SELF –ASSESSMENT)**



**Subject: Science**

**Assignment No. : 7**

**Allotment Date: 15 January 2023**

<b>S.NO</b>	<b>QUESTIONS</b>	<b>MARKS</b>	<b>SKILLS/ COMPETENCIES</b>
1.	1. What happens when a bar magnet is left to move freely? 2. State any two properties of magnets. Also write two used of magnets. 3.What are insulators? Give examples.	1 3 2	Evaluation
2.	What is compass? Describe the construction of the compass with the help of a labelled sketch. How is a compass used to find directions?	5	Communication
3.	What is the purpose of using an electric switch? Name some electric gadgets that have switches built into them.	3	Critical thinking
4.	What is electric cell? Draw a diagram of current in an electric circuit.	3	Observation
5.	What is smoke? How is smoke produced? Explains why, tall chimneys are installed in factories. State the importance of water vapour in air.	4 4	Inference
6.	What is air? State the composition of air. Write any two properties of air.	5	Interdisciplinary



**ARMY PUBLIC SCHOOL GWALIOR**  
**CLASS – VI**  
**ACADEMIC SESSION 2022-23**  
**WORKSHEET (SELF –ASSESSMENT)**



**Subject: Social Science**

**Assignment No. : 7**

**Allotment Date: 15 January 2023**

S.NO.	QUESTIONS	MARKS	NATURE
1.	South India was famous for ..... ,spices Especially pepper, and precious stones.	1	Understanding
2.	The most famous Kushana ruler was .....	1	Information
3.	The Kushanas were amongst the .....rulers of the subcontinent to issue gold coins.	1	Information
4.	The meaning of bhaj is .....	1	Information
5.	..... Inscription is of special kind known as a prashasti,a Sanskrit word,a meaning'in praise of'.	1	Understanding
6.	True/ False:  The word Aryavarta arose from Sanskrit.It referred to the culture of the Aryan people.	1	Information
7.	The preachers of bhakti preached in local languages.	1	Understanding
8.	Chinese pilgrims came to India to visit the places associated with the life of the Buddha and the famous monasteries.	1	Information
9.	Define Purana.	3	Critical Thinking

10.	Mention 3 authors who wrote about Harshavardhana.	3	HOTS
11.	What do you think Arvind would have to do if he was acting as Samudragupta?	5	HOTS
12.	Discuss the reasons why the Chinese pilgrims came to India.	3	Understanding
13.	What were the new administrative arrangements in this period?	5	Understanding
14.	Why do you think ordinary people were attracted to Bhakti?	3	Identification and location.





**ARMY PUBLIC SCHOOL GWALIOR**  
**CLASS – VI**  
**ACADEMIC SESSION 2022-23**  
**WORKSHEET (SELF –ASSESSMENT)**




**Subject: Sanskrit**

**Assignment No. : 7**

**Allotment Date: 15 January 2023**

S. NO.	QUESTIONS	MARKS	NATURE
1.	शब्दानाम् अर्थान् लिखत- आनय = आनेतुम् = धराम् = मातुलचन्द्र! = श्रावय =	1*5= 5	Information
2.	अधोलिखितानां पदानां समुचितान् अर्थान् मेलयत- क ख हस्ते अकस्मात् सहसा पृथ्वीम् धनम् करे आकाशम् द्रविणम् धराम् गगनम्	1*5=5	Analytical skill
3.	तत्समशब्दान् लिखत- मामा ..... मोर ..... तारा ..... कोयल ..... कबूतर .....	1*5=5	Understanding
4.	विकल्पेभ्यः उचितम् उत्तरं चित्वा रिक्तस्थानानि पूरयत - i) सः तत्र ..... । (पठन्ति, पठतः, पठति) ii) तौ खेलनाय ..... । (गच्छतः, गच्छन्ति, गच्छति) iii) नरेशः ..... सह गच्छति। (मित्रेण, मित्रस्य, मित्रम्) iv) सरोवरे ..... कमलम् अस्ति। (एकः, एका, एकम्) v) अलम् ..... । (विवादम्, विवादेन्, विवादः)	1*5=5	Thinking skill
5.	रञ्जितपदानि शुद्धानि कृत्वा वाक्यानि पुनः लिखत - (क) सः तत्र गच्छन्ति। _____	1*5=5	Critical thinking

	(ख) ते धावति। _____ (ग) वयं नृत्यामि। _____ (घ) रामः पठन्ति। _____ (ङ) तौ खेलन्ति। _____		
6.	अधोलिखितानि विलोम पदानि मेलयत -  (क) चतुरः क) प्रविशति (ख) आनेतुम् ख) सेवकः (ग) निर्गच्छति ग) मूर्खः (घ) स्वामी घ) नेतुम् (ङ) प्रसन्नः ङ) दुःखितः	1*5=5	Memory skill



**ARMY PUBLIC SCHOOL GWALIOR**  
**CLASS – VI**  
**ACADEMIC SESSION 2022-23**  
**WORKSHEET (SELF –ASSESSMENT)**




**Subject: G.K**


**Assignment No. : 4**

**Allotment Date: 15 January 2023**

S.NO	QUESTIONS	MARKS	SKILL
1	Which gave the quote of 'Ignorance is always afraid of change'?	1	Information
2	Complete the sentence containing similes or metaphors Maharana Pratap was as brave.....	1	Understanding
3	What is name of oldest language in Europe?	1	Information
4	What is name of oldest language in the world?	1	Information
5	What is the playing time of our national anthem?	1	Understanding
6	When do you celebrate Independence Day?	1	Evaluation
7	Who is of father of Artificial Intelligence?	2	Evaluation
8	What is Artificial Intelligence?	2	Understanding
9	Identify name the following pictures 	2	Critical thinking



10	When is National Youth Day celebrated?	2	Information
11	Complete the sentence containing similes or metaphors The classroom turns into .....	2	Information
12	Which gave the quote of 'Life should be great rather than long'?	2	Evaluation
13	Is water image same as mirror image? Why	2	Understanding
14	Solve any Sudoku from the newspaper and paste in note book?	2	Information
15	Name two alphabet whose mirror image is same as there original image?	2	Critical thinking
16	Write any four ancient languages of India.	2	Information
17	Write a short essay on role of Artificial intelligence in modern era.	4	Information



# ARMY PUBLIC SCHOOL GWALIOR

## CLASS - VI

ACADEMIC SESSION 2022-23

### WORKSHEET (SELF –ASSESSMENT)



Subject: Artificial Intelligence

Assignment No. : 4

Allotment Date: 15 January 2023

S. NO.	QUESTIONS	MARKS	NATURE
1.	Choose the correct answer.		
A)	What does the abbreviation HTML stand for? a. HyperText Markup Language b. HighText Markup Language c. HyperText Markdown Language. d. None of the above.	1	Understanding
B)	How many sizes of headers are available in HTML by default? a. 5 b. 1 c. 3 d. 6	1	Understanding
C)	What is the smallest header in HTML by default? a. H1 b. H2 c. H6 d. H4	1	Understanding
D)	HTML files are saved by default with the extension? a. .html b. .ht c. .h d. None of the above	1	Understanding
2.	State whether these statements are true or false.		
A)	We enclose HTML tags within {}.	1	Analytical Thinking
B)	<b> tag is used to change the font size?	1	Understanding
C)	<i> tag is used to make the font bold?	1	Understanding

<b>3.</b>	<b>Fill in the blanks.</b>		
<b>A)</b>	..... tag is called the root element of an HTML document.	<b>1</b>	<b>Understanding</b>
<b>B)</b>	.....tag is used to write a paragraph.	<b>1</b>	<b>Understanding</b>
<b>C)</b>	Title tag is placed inside ..... tag.	<b>1</b>	<b>Understanding</b>



# ARMY PUBLIC SCHOOL GWALIOR

## CLASS - VI

### ACADEMIC SESSION 2022-23

### WORKSHEET (SELF –ASSESSMENT)



Subject: Art & Work Education


Assignment No: 4

Allotment Date: 15 January 2023

S.NO	QUESTIONS	MARKS	SKILLS/ COMPETENCIES
1.	<p>Goddess Saraswati is a wife of which god?</p> <p>a) Brahma b) Vishnu c) Shiva d) Indra</p>	1	Creativity
2.	<p>As per hindu calendar, the celebration of Basant panchami takes place in which of the following month?</p> <p>a) Magha b) Phalgun c) Chaita d) Kartik</p>	1	Creativity
3.	<p>Which of the following is correct regarding goddess Saraswati?</p> <p>a) She is goddess of enlightenment b) She is goddess of dance c) She is a goddess of scripture d) She is goddess of rivers</p>	1	Creativity
4.	<p>In which color goddess Saraswati is dressed up in Basant panchami?</p> <p>a) Yellow b) Red c) Green d) Orange</p>	1	Creativity
5.	<p>Celebration of Basant panchami is to honor which goddess?</p> <p>a) Durga b) Parvati c) Saraswati d) Kali</p>	1	Creativity

6.	<b>Complementary colours are used to create_____.</b> <b>a) Contrast</b> <b>b) Value</b> <b>c) Density</b> <b>d) None of the above</b>	1	<b>Creativity</b>
7.	<b>_____ Material is not required in paper mache?</b> <b>a) Plastic putty</b> <b>b) Glue</b> <b>c) Chalk powder</b> <b>d) Coconut oil</b>	1	<b>Creativity</b>
8.	<b>Sultan Zain-ul-Abadin brought paper mache to Kashmir?</b> <b>a) True</b> <b>b) False</b>	1	<b>Creativity</b>
9.	<b>Which answer is an example of complementary colors?</b> <b>a) red–green</b> <b>b) Black -white</b> <b>c) White-red</b> <b>d) Black-blue</b>	1	<b>Creativity</b>
10.	<b>What is the complementary colour to orange?</b> <b>a) Blue</b> <b>b) Black</b> <b>c) White</b> <b>d) Pink</b>	1	<b>Creativity</b>





**ARMY PUBLIC SCHOOL GWALIOR**  
**CLASS – VI**  
**ACADEMIC SESSION 2022-23**  
**WORKSHEET (SELF –ASSESSMENT)**

**Subject: Health and Physical Education**

**Assignment No. : 4**

**Allotment Date: 15 January 2023**

<b>S.NO</b>	<b>QUESTIONS</b>	<b>MARKS</b>	<b>SKILLS/ COMPETENCIES</b>
1.	<p><b>Tick The Correct Answer</b></p> <p>Q-1- How many players play in Basketball match?</p> <p>a.12 b.10 c.05 d.14</p> <p>Q-2 Basketball is a famous game of?</p> <p>a.India b.USA c.France d.Argentina</p> <p>Q-3- Who is the father of Basketball?</p> <p>a.James naismith b.Ajmer singh c.Michael phelps d.Walter camp</p> <p>Q-4- Basketball invented in?</p> <p>a.1851 b.1871 c.1881 d.1891</p>	4	Informative

<p><b>2</b></p>	<p><b><u>Fill in the blanks</u></b></p> <p>Q-5- Basketball originated in _____ (USA,france)</p> <p>Q-6 There are _____ Rings in Basketball(1,2)</p> <p>Q-7 Kobe Bryant played for_____.(Canada,USA)</p>	<p><b>3</b></p>	<p><b>Interdisciplinary</b></p>
<p><b>3</b></p>	<p><b><u>True False</u></b></p> <p>Q-8- Only boys can play Basketball.?</p> <p style="padding-left: 40px;"><b>A.</b> True</p> <p style="padding-left: 40px;"><b>B.</b> False</p> <p>Q-9 Basketball is a indoor game?</p> <p style="padding-left: 40px;">i. True</p> <p style="padding-left: 40px;">ii. False</p> <p>Q-10-Basketball first played in Canada?</p> <p style="padding-left: 40px;"><b>A.</b> True</p> <p style="padding-left: 40px;"><b>B.</b> False</p>	<p><b>3</b></p>	<p><b>Understanding</b></p>



**ARMY PUBLIC SCHOOL GWALIOR**

**CLASS - VI**

**ACADEMIC SESSION 2022-23**

**WORKSHEET (SELF –ASSESSMENT)**




**Subject: Music/Dance**

**Assignment No. : 4**

**Allotment Date: 15 January 2023**

<b>S. No.</b>	<b>Questions</b>	<b>Marks</b>	<b>Nature</b>
1.	The successively ascending notes of swar is called a)aroha b)avroha	1×1=1	
2.	What do we sing in patriotic song? a)deshbhakti geet b)gazal	1×1=1	
3.	The successively descending notes of swar is called. a)avroha b)avroha	1×1=1	
4.	How many types of 'swar' are there in music? a)7 b)12	1×1=1	
5.	What type of song is 'Saare Jahan se Accha'? a)bhajan b) deshbhakti geet	1×1=1	
6.	Which colour is best for Vasant Panchmi?		

	a)green            b) yellow		
<b>7.</b>	Which flower is queen of India? a) lotus            b) rose		
<b>8.</b>	Lohri is celebrated during month of a)February        b)January		
<b>9.</b>	Lohri is celebrated by which state? a) Kerala         b) Punjab		
<b>10.</b>	What does lotus mudra represent? a) A symbol of purity        b) a symbol of love		



# ARMY PUBLIC SCHOOL GWALIOR

## CLASS - VI

### ACADEMIC SESSION 2022-23

### WORKSHEET (SELF –ASSESSMENT)



Subject: Computer

Assignment No. : 4

Allotment Date: 15 January 2023

S. NO.	QUESTIONS	MARKS	NATURE
1.	Choose the correct answer.		
A)	A single person who maintains many blogs is known as a..... e. Blogger f. User g. Programmer	1	Understanding
B)	The largest network that links millions of computers over the world is ..... e. ARPANET f. LAN g. Internet	1	Understanding
C)	A/An ..... Modem is a small box that uses a cable to connect to the computer. e. Internal f. External g. Middle	1	Understanding
D)	A program that helps in finding website, web pages and internet file is ..... e. Email f. Chat g. Search engine	1	Understanding
2.	State whether these statements are true or false.		
A)	A wireless modem is also known as dongle.	1	Analytical Thinking

<b>B)</b>	We should apply two factor authentication to all online accounts	<b>1</b>	<b>Understanding</b>
<b>C)</b>	Broadband provides a slow and inexpensive way to connect to the internet.	<b>1</b>	<b>Understanding</b>
<b>3.</b>	<b>Fill in the blanks.</b>		
<b>A)</b>	..... Search engine uses crawler-based technology.	<b>1</b>	<b>Understanding</b>
<b>B)</b>	..... is the example of video conferencing apps.	<b>1</b>	<b>Understanding</b>
<b>C)</b>	A ..... reads pages on websites in order to create a list or index of hits.	<b>1</b>	<b>Understanding</b>

