



**ARMY PUBLIC SCHOOL GWALIOR**  
**CLASS – I**  
**ACADEMIC SESSION 2022-23**  
**WORKSHEET (SELF –ASSESSMENT)**



Subject: English

Assignment No. : 7

Allotment Date: 15 January 2023

S.NO	QUESTIONS	MARKS	SKILLS
1.	<p><b>Fill in the blanks with the 'has' or 'have' :</b></p> <p>a. Tina and Vina ..... many toys. b. A dog ..... four legs. c. I ..... a new dress. d. Lata ..... curly hair.</p>	4×1=4	Language and Communication
2.	<p><b>Fill in the blanks with describing words using the given help box:</b></p> <p><b>(huge, tall, sweet, bright)</b></p> <p>a. Sugar is ..... b. An elephant is a ..... animal. c. The Sun is ..... d. A giraffe is a ..... animal.</p>	4×1=4	Cognitive
3.	<p><b>Fill in the blanks using 'a/an/the':</b></p> <p>a. Cat chased ..... mouse. b. .... apple is red in colour. c. .... Taj Mahal is in Agra. d. .... Earth revolves around the Sun.</p>	4×1=4	Thinking skills

4.	<b>Answer the following questions:</b>  <b>a.</b> What did Sona grow on her farm ? Ans. .....  <b>b.</b> Who could not climb trees ? Ans. .....  <b>c.</b> Who were Sona's friends ? Ans. .....  <b>d.</b> How did Mohit act to save himself ? Ans. .....	4×2=8	Language and Thinking
----	---	-------	-----------------------





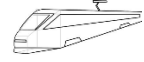

ARMY PUBLIC SCHOOL GWALIOR  
CLASS – I  
ACADEMIC SESSION 2022-23  
WORKSHEET (SELF –ASSESSMENT)




Subject: Hindi

Assignment No. : 7

Allotment Date: 15 January 2023

संख्या	प्रश्न/उत्तर	अंक	प्रकृति
प्र.1	<p>इन चित्रों के नाम लिखो :</p>  <p>-----</p>  <p>-----</p>  <p>-----</p>  <p>-----</p>	4x0.5=2	बोधात्मक
प्र 2	<p>दी गई कविता की पंक्तियों को पूरा करो :</p> <p>सूट पहनकर _____ ।</p> <p>_____ पर आया ।</p> <p>रिक्शा एक _____ करके ।</p> <p>उसने _____ रूकवाया ।</p>	4x1=4	गहन सोच
प्र-3	<p>नीचे लिखे शब्दों के अर्थ लिखो :</p> <p>पुत्र -</p>	4 x1=4	समस्या समाधान

	<p>अज्ञात -</p> <p>श्रम-</p> <p>श्रोता -</p>								
प्र-4	<p>शब्द सही जगह में लिखो :</p> <table border="1" style="margin-left: auto; margin-right: auto;"> <tr> <td>पर्व</td> <td>ड्रम</td> <td>क्रम</td> </tr> <tr> <td>डाइवर</td> <td>दर्पण</td> <td>ग्रह</td> </tr> </table>  <p>-----</p> <p>-----</p>	पर्व	ड्रम	क्रम	डाइवर	दर्पण	ग्रह	3 x1=3	भाषाई कौशल
पर्व	ड्रम	क्रम							
डाइवर	दर्पण	ग्रह							
प्र-5	<p>सही शब्द चुनकर वाक्य पूरे करो :</p> <p>मैं इन _____ की रक्षा करूँगा ।</p> <p>विभु बहुत _____ थे ।</p>	2x1=2	विश्लेषणात्मक						
प्र-6	<p>निम्नलिखित प्रश्नों के उत्तर दीजिए :</p> <p>प्रश्न 1. विभु कहाँ रहते थे ?</p> <p>उत्तर 1.</p> <p>प्रश्न 2. शिकारी क्यों आया ?</p> <p>उत्तर 2.</p>	5x1=5	बोधोत्प्रेरक						

<p>प्रश्न 3. ई रिक्शा वाला रिक्शा चलाते समय क्या कर रहा था ?</p> <p>उत्तर 3.</p> <p>प्रश्न 4. रत्ना ने ई रिक्शावाले से क्या कहा ?</p> <p>उत्तर 4.</p> <p>प्रश्न 5 . मानव और रत्ना क्यों खुश थे ?</p> <p>उत्तर 5.</p>		
--	--	--


















**ARMY PUBLIC SCHOOL GWALIOR**  
**CLASS – I**  
**ACADEMIC SESSION 2022-23**  
**WORKSHEET (SELF –ASSESSMENT)**



Subject: Mathematics

Assignment No. : 7

Allotment Date: 15 January 2023

S.NO	QUESTIONS	MARKS	SKILLS										
1.	<p>Fill in the blanks:</p> <p>(February, Wednesday, Saturday, 8<sup>th</sup>, July)</p> <p>a. Rainy season comes in the month of .....</p> <p>b. Spring season comes in the month of .....</p> <p>c. .... is the third day of the week.</p> <p>d. .... comes after Friday.</p> <p>e. August is the ..... month of the year.</p>	5×1=5	Computational skills										
2.	<p>Match the following:</p> <table border="1" style="margin-left: auto; margin-right: auto;"><tbody><tr><td>a. Two Rupees</td><td></td></tr><tr><td>b. Five Rupees</td><td></td></tr><tr><td>c. Ten Rupees</td><td></td></tr><tr><td>d. Fifty Rupees</td><td></td></tr><tr><td>e. Hundred Rupees</td><td></td></tr></tbody></table>	a. Two Rupees		b. Five Rupees		c. Ten Rupees		d. Fifty Rupees		e. Hundred Rupees		5×1=5	Computational skills
a. Two Rupees													
b. Five Rupees													
c. Ten Rupees													
d. Fifty Rupees													
e. Hundred Rupees													

<p>3.</p>	<p><b>Draw the shapes that come next :</b></p> <p>1. ○ △ ○ △      □ □</p> <p>2. △ ○ △ ○      □ □</p> <p>3. ⊕ ⊕ ○ ○ ⊕ ⊕      □ □</p> <p>4. ○ ○ ⊕ ⊕ ○ ○      □ □</p> <p>5. ○ ○ ○ ⊕ ⊕ ⊕      □ □ □</p>	<p>5×1=5</p>	<p>Problem solving</p>
<p>4.</p>	<p><b>Addition pattern of 4</b></p> <p>○ ○ ○ ○      □ □ □</p> <p>○ ○ ○ ○      □ □ □</p> <p><b>Subtraction pattern of 5</b></p> <p>○ ○ ○ ○ ○      □ □ □</p> <p>○ ○ ○ ○ ○      □ □ □</p> <p>○ ○ ○ ○ ○      □ □ □</p>	<p>5×1=5</p>	<p>Critical thinking</p>



**ARMY PUBLIC SCHOOL GWALIOR**  
**CLASS – I**  
**ACADEMIC SESSION 2022-23**  
**WORKSHEET (SELF –ASSESSMENT)**



**Subject: EVS**

**Assignment No. : 7**

**Allotment Date: 15 January 2023**

S.NO	QUESTIONS	MARKS	SKILLS
1.	Fill in the blanks using the help box given below: (astronauts, Ostrich , Root , Sea, water)  a. _____ is the largest bird. b. _____ part of plant is present below the ground. c. People who go to the space are _____. d. _____water is salty in taste. e. Aquatic animals live in _____.	5×1=5	Thinking Skills
2.	Tick ( ✓ ) the correct option:  a. It is a big hot ball of fire. (1) Moon (2) Sun (3) Clouds (4) Rainbow b. It is our National tree (1) Neem (2) Peepal (3) Banyan (4)Coconut c. Water is needed by _____. (1) Plants (2) Animals (3) Human beings (4) All of these d. _____water is salty in taste. e. (1) River (2) Pond (3) Lake (4) Sea f. It is a domestic animal. (1) Horse (2) Goat (3) Bullock (4) All of these	5×1= 5	Cognitive skills
3.	Write 'T' for true and 'F' for false in the given blanks below :  a. Insects have six legs. (.....) b. Aquatic animals live on land. (.....) c. We should not waste water. (.....) d. We see a rainbow in the sky after rain. (.....) e. The Ganga is the national river of India. (.....)	5×1=5	Critical thinking
4.	Answer the following questions :  a. What are herbs ? b. Write two ways to control wastage of water ? c. Write two examples of aquatic animals ? d. Write two main parts of a plant ? e. Write any four things that we get from animals ?	5×1=5	Language, Problem Solving





**ARMY PUBLIC SCHOOL GWALIOR**  
**CLASS – I**  
**ACADEMIC SESSION 2022-23**  
**WORKSHEET (SELF –ASSESSMENT)**



Subject: Computer

Assignment No. : 4

Allotment Date: 15 January 2023

S.NO	QUESTION	MARKS	NATURE
1.	<p><b>Write true and False :</b></p> <p>1. Tool bar contain all the drawing and editing tools. <input type="checkbox"/></p> <p>2. Lines tool is used to make free hand drawing. <input type="checkbox"/></p> <p>3. Paint tool is used to draw shapes . <input type="checkbox"/></p> <p>4. Quit tool is used to close the program. <input type="checkbox"/></p>	4x1=4	Understanding
2.	<p><b>Choose the correct answer.</b></p> <p>1. Fill button is present in the.....tool.</p> <p>a. Paint</p> <p>b. Text</p> <p>c. Magic</p> <p>2. .... is a free drwing and coloring program.</p> <p>a. MS Word</p> <p>b. Word Pad</p> <p>c. Tux Paint</p>	2x1=2	Analyzing

<b>3.</b>	<b>Answer the following question.</b>  1. What is Tux Paint?  _____ _____  _____ _____  2. What is thr use of shapes tool.  _____ _____  _____ _____	<b>2x2=4</b>	<b>Problem Solving</b>
-----------	--	--------------	------------------------








**ARMY PUBLIC SCHOOL GWALIOR**  
**CLASS – I**  
**ACADEMIC SESSION 2022-23**  
**WORKSHEET (SELF –ASSESSMENT)**








Subject: G.K

Assignment No. : 4

Allotment Date: 15 January 2023

S.NO	QUESTIONS	MARKS	SKILLS
1.	<p><b>Q.1 Write the names of following people from the help box given below.</b></p> <p>(Joe Biden, Mahatma Gandhi, Sarojini Naidu, Subhash Chandra Bose, Kamala Devi Harris)</p> <p>a.  .....</p> <p>b.  .....</p> <p>c.  .....</p> <p>d.  .....</p> <p>e.  .....</p>	5×1=5	Thinking, Social and Emotional

<p><b>2.</b></p>	<p>Match the following equipments with their related sports.</p> <p>a. </p> <p>b. </p> <p>c. </p> <p>d. </p> <p>e. </p> <p style="text-align: center;">Cricket</p> <p style="text-align: center;">Basketball</p> <p style="text-align: center;">Soccer</p> <p style="text-align: center;"><u>Badminton</u></p> <p style="text-align: center;">Hockey</p>	<p>5×1=5</p>	<p>Physical, Cognitive</p>
<p><b>3.</b></p>	<p><b>Complete the following words with the help of given help box.(Japan, Rajasthan, Football, Sitar, Piano )</b></p> <p>a. F ..... t b.....ll</p> <p>b. J ... p.... n</p> <p>c. P..... a ..... o</p> <p>d. R ..... j ..... s t ..... n</p> <p>e. S ..... t ..... r</p>	<p>5×1=5</p>	<p>Cognitive</p>
<p><b>4.</b></p>	<p><b>Draw and colour our 'National Flag'</b></p>	<p>5</p>	<p>Aesthetic, Patriotism</p>



**ARMY PUBLIC SCHOOL GWALIOR**  
**CLASS – I**  
**ACADEMIC SESSION 2022-23**  
**WORKSHEET (SELF –ASSESSMENT)**



Subject: Art and Work Education  
Allotment Date: 15 January 2023

Assignment No. : 4

S.NO	QUESTIONS	MARKS	SKILLS /COMPETENCIES
1	Draw a Tree and colour it.	5	Creative Skills
2	Make a Tree by paper folding Method.	5	Creative Skills



**ARMY PUBLIC SCHOOL GWALIOR**  
**CLASS – I**  
**ACADEMIC SESSION 2022-23**  
**WORKSHEET (SELF –ASSESSMENT)**



**Subject: Physical Education**  
**Allotment Date: 15 January 2023**

**Assignment No. : 4**

<b>S.N</b>	<b>QUESTIONS</b>	<b>MARKS</b>	<b>SKILLS/ COMPETENCIES</b>
1	<b>Multiple Choice</b> 1. Which of the followings types of dribbling you learn  A) Running dribble  B) Walking dribble  C) Jumping dribble  D) Dribbling with football	1	INFORMATION
2	2. What is the purpose of learning dribbling  A) Fitness with fun and games  B) Earn more chocolate  C) To cry  D) To get angry	1	INFORMATION
3	3. On which command children will start Dribbling  A) Go or whistle  B) Snatch  C) Push  D) Buy	1	INFORMATION

4	<p>4. In the game what you have to do when teacher will say Dribble?</p> <p>A. Jump  B. Stand up  C. Sit down  D. Start dribbling</p>	1	INFORMATION
5	<p>FILL IN THE BLANKS: -</p> <p>1. Dribbling should be done with _____</p> <p>A) Shoes  B) Sleepers  C) Football  D) Run and walk</p>	1	INFORMATION
6	<p>2. Dribbling games or activities make students legs _____</p> <p>A) Strong  B) Weak  C) Mad  D) Fat</p>	1	INTERDISCIPLINARY
7	<p>3. Dribbling games are good for student's_____.</p> <p>A) Health and fitness  B) Ground  C) Cone  D) Dress</p>	1	INTERDISCIPLINARY

8	1) We should exercise everyday for 30 mins. (True/False)	1	INTERDISCIPLINARY
9	9. We play games to be healthy and strong . (True/False)	1	UNDERSTANDING
10	10. Junk food is good for health. (True/False)	1	UNDERSTANDING





**ARMY PUBLIC SCHOOL GWALIOR**  
**CLASS – I**  
**ACADEMIC SESSION 2022-23**  
**WORKSHEET (SELF –ASSESSMENT)**



**Subject: Music and Dance**  
**Allotment Date: 15 January 2023**

**Assignment No. : 4**

S. No.	Questions	Marks	Nature
1.	Who is the goddess of music? A) mata parvati B) mata saraswati	1x1=1	
2.	how many types of swar are there in music? a) 7      b) 12	1x1=1	
3.	Name the taal which consists of 6 matras a) dadra    b) kehrwa	1x1=1	
4.	How many parts of taal are there? a) 10 b) 12	1x1=1  1x1=1	

<b>5.</b>	Which is the oldest music instrument a) veena b) sitar		
<b>6.</b>	Indian National flag is called a) tiranga b) panchranga	<b>1×1=1</b>	
<b>7.</b>	When is republic Day celebrated a) 26 january b) 26 february	<b>1×1=1</b>	
<b>8.</b>	Who is known as bapu? a) mahatma Gandhi b) sant tukaram	<b>1×1=1</b>	
<b>9.</b>	How many spikes are there in the ashok chakra of the indian flag? a) 24 b) 36	<b>1×1=1</b>	
<b>10.</b>	What is the meaning of white color in tiranga? a) purity, truth and peace b) prosperity	<b>1×1=1</b>	