



**ARMY PUBLIC SCHOOL GWALIOR**  
**CLASS – II**  
**ACADEMIC SESSION 2022-23**  
**WORKSHEET (SELF –ASSESSMENT)**



**Subject: English**

**Allotment Date: 15 February 2023**

**Assignment No. : 8**

| S.NO. | QUESTIONS   | MARKS20         | NATURE               |
|-------|---|-----------------|----------------------|
| 1     | Match the column with their opposites.<br><br>Column A                      Column B<br><br>1. big                              dull<br><br>2. found                          small<br><br>3. bright                          lost  | (3x .5=<br>1.5) | Information          |
| 2     | Match the column with similar meaning. (Synonyms)<br><br>Column A                      Column B<br><br>1. climbed                      courteous , smooth<br><br>2. ripe                              rise, go up<br><br>3. polite                          fully developed | (3x<br>.5=1.5)  | Understanding        |
| 3     | Fill in the blanks with suitable adverbs.<br><br>1. The soldier fought_____.<br><br>2. The clown laughed_____.<br><br>3. The old lady spoke_____  | (3x 1)=3        | Critical<br>thinking |
| 4     | Circle the prepositions in the following sentences.<br><br>1. My cousin jumped over the bushes.<br><br>2. The tourist looked over the hill.   | (3x1) =3        | Understanding        |

|          |  |          |                   |
|----------|--|----------|-------------------|
|          | 3. The pencil fell between the desks.  |          |                   |
| <b>5</b> | <p><b>Answer the following questions.</b></p> <p>(a) Where were the tree's feet and heads?</p> <p>.....</p> <p>.....</p> <p>(b) Who brought mangoes for Murali?</p> <p>.....</p> <p>.....</p> <p>(c) How did Bholaram greet everyone?</p> <p>.....</p> <p>.....</p> <p>(d) Who were Tia and Rohan?</p> <p>.....</p> <p>.....</p> | (4x1=4)  | Interdisciplinary |
| <b>6</b> | <p>Fill in the blanks by using the words in the brackets in the past tense.</p> <p>1. The cat _____ over the wall. (jump)</p> <p>2. Mother _____ at me I left for school. (wave)</p> <p>3. Rohan _____ the school late yesterday. ( reach)</p> <p>4. The cat _____ over the wall. ( jump)</p>                                    | (4x.5=2) | Analytical Skill  |

|   |  |         |                   |
|---|--|---------|-------------------|
| 7 | It's your birthday. Write a letter to invite your friends for a party. | (5x1=5) | Critical Thinking |
|---|--|---------|-------------------|



**ARMY PUBLIC SCHOOL GWALIOR**  
**CLASS – II**  
**ACADEMIC SESSION 2022-23**  
**WORKSHEET (SELF –ASSESSMENT)**



**Subject: Hindi**  
**Allotment Date: 15 February 2023**

**Assignment No. : 8**

| संख्या  | प्रश्नोत्तर   | अंक     | प्रकृति      |
|---------|---|---------|--------------|
| प्र - 1 | निम्नलिखित के शब्दार्थ लिखिए-<br>1. नीड़ - .....<br>2. नुकसान-.....<br>3. सूची-.....<br>4. प्रसन्नता - .....<br>5. उगते -.....  | 4x1=4   | बोधोत्प्रेमक |
| प्र - 2 | सही उत्तर चुनकर √ लगाओ -<br>1. शेरू दा कौन था ?<br>i) बड़ा शेर ii) चीता iii) बन्दर<br>2. शेरू दा के लिए गाजर कौन लाया?<br>i) बन्दर ii) खरगोश iii) तोता<br>3. चिड़िया कैसा गीत सुनाती है ?<br>i)लम्बा ii) मीठा iii) कड़वा<br>4. चिड़िया अपना घोंसला किससे बनाती है ?<br>i)तिनकों से ii)ईंटों से iii) कपड़ों से | 4x0.5=2 | सूचनापरक     |

|              |  |               |   |
|--------------|--|---------------|---|
| <p>प्र-3</p> | <p>लिंग बदलिए -</p> <ol style="list-style-type: none"> <li>1. चूहा .....</li> <li>2. चिड़ा .....</li> <li>3. भाई-.....</li> <li>4. बाघ-.....</li> </ol>  | <p>4x 1=4</p> | <p>गहन सोच और<br/>समस्या<br/>समाधान</p> |
| <p>प्र-4</p> | <ol style="list-style-type: none"> <li>1. चिड़िया सबको क्या सिखलाती है?<br/>.....<br/>.....</li> <li>2. चिड़िया दूर दूर तक क्यों जाती है?<br/>.....<br/>.....</li> <li>3. शेरू दा के लिए कौन कौन भोजन लाया?<br/>.....<br/>.....</li> <li>4. अपना थैला साथ में ले जाना क्यों जरूरी है?<br/>.....<br/>.....</li> </ol> | <p>4x1=4</p>  | <p>उच्चस्तरीय<br/>चिंतन</p>             |

|       |   |        |               |
|-------|---|--------|---------------|
| प्र-5 | निम्नलिखित गिनती को शब्दों में लिखिए<br>१२ - _____<br>७ - _____<br>१६ - _____<br>१० - _____   | 4x1=4  | विश्लेषणात्मक |
| प्र-6 | वाक्यों में आये नाम (संज्ञा) शब्दों पर गोला लगाओ-<br>1. दीपू खेल रहा है।<br>2. मुझे रसगुल्ला अच्छा लगता है।<br>3. हाथी चिंघाड़ रहा है।<br>4. मेरे पास चार पेंसिल हैं। | 4x.5=2 | सूचनापरक      |



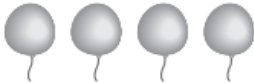


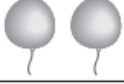













**ARMY PUBLIC SCHOOL GWALIOR**  
**CLASS – II**  
**ACADEMIC SESSION 2022-23**  
**WORKSHEET (SELF –ASSESSMENT)**



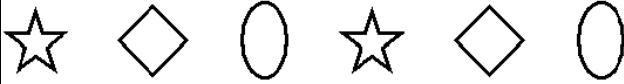
**Subject: Mathematics**  
**Allotment Date: 15 February 2023**

**Assignment No. : 8**

| S. NO. | QUESTIONS   | MARKS     | NATURE            |
|--------|---|-----------|-------------------|
|        |   | <b>20</b> |                   |
| 1      | Match the following<br><br>A<br><br>Currency<br><br>3 year<br><br>9,18,27<br><br>Vasant<br><br>9:30<br><br>B<br><br>36 months<br><br>rupee<br><br>March<br><br>36,45,54<br><br>half past nine | 5x1=5     | understand<br>ing |

|        |  |       |   |      |   |       |   |        |   |       |   |       |                 |
|--------|--|-------|---|------|---|-------|---|--------|---|-------|---|-------|-----------------|
| 2      | <p>Count the number of balloons and answer the following question</p> <table border="1" data-bbox="277 212 1094 663"> <tr> <td data-bbox="277 212 448 306">Pink</td> <td data-bbox="448 212 1094 306">  </td> </tr> <tr> <td data-bbox="277 306 448 396">Blue</td> <td data-bbox="448 306 1094 396">  </td> </tr> <tr> <td data-bbox="277 396 448 487">Green</td> <td data-bbox="448 396 1094 487">  </td> </tr> <tr> <td data-bbox="277 487 448 577">Yellow</td> <td data-bbox="448 487 1094 577">  </td> </tr> <tr> <td data-bbox="277 577 448 663">White</td> <td data-bbox="448 577 1094 663">  </td> </tr> </table> <p>1) How many <i>Green</i> balloons were used? <input data-bbox="881 705 1094 768" type="text"/></p> <p>2) Which color balloon was most used?<br/>How many? <input data-bbox="881 793 1094 856" type="text"/></p> <p>3) How many balloons were used in all to decorate the house? <input data-bbox="881 884 1094 947" type="text"/></p> <p>4) How many more <i>White</i> balloons were used than <i>Yellow</i>? <input data-bbox="881 974 1094 1037" type="text"/></p> <p>5) Were the same number of <i>Pink</i> and <i>Yellow</i> balloons used? <input data-bbox="881 1073 1094 1136" type="text"/></p> | Pink  |  | Blue |  | Green |  | Yellow |  | White |  | 5X1=5 | observatio<br>n |
| Pink   |   |       |   |      |   |       |   |        |   |       |   |       |                 |
| Blue   |   |       |   |      |   |       |   |        |   |       |   |       |                 |
| Green  |   |       |   |      |   |       |   |        |   |       |   |       |                 |
| Yellow |   |       |   |      |   |       |   |        |   |       |   |       |                 |
| White  |   |       |   |      |   |       |   |        |   |       |   |       |                 |
| 3      | <p>Do as directed:</p> <p>i. Fifty nine rupees and twenty paise = _____</p> <p>ii. Add the money-</p> <div data-bbox="305 1476 1045 1633">   <span style="margin-left: 20px;">=</span> <input data-bbox="938 1524 1045 1612" type="text"/> </div> <p>iii understand the pattern and complete it-</p>   | 5x1=5 | Problem solving   |      |   |       |   |        |   |       |   |       |                 |





\_\_\_\_\_

iv. Read the time in the clock



\_\_\_\_\_

Fill in the blanks-

v. 2 days after Monday is \_\_\_\_\_

vi. 2 week = \_\_\_\_\_ days

vii. Leap year has \_\_\_\_\_ days

viii.  $6 \div 6 = 1$

\_\_\_  $\div 6 = 2$

\_\_\_  $\div 6 = 3$

ix. RST TRS STR \_\_\_\_\_

x. Add:

$\square 468$

$+\square 372$   
\_\_\_\_\_

4

Solve the following problems-

$2.5 \times 2 = 5$

Critical  
thinking

1. Richa had ₹ 228. She spent ₹ 82 to buy flowers. How much money is left with her?

Ans:

2. Suman paid ₹ 30 to buy an ice cream and ₹ 70 for pizza. How much did she pay in all?

Ans:



**ARMY PUBLIC SCHOOL GWALIOR**  
**CLASS – II**  
**ACADEMIC SESSION 2022-23**  
**WORKSHEET (SELF –ASSESSMENT)**







**Subject: EVS**

**Assignment No. : 8**

**Allotment Date: 15 February 2023**

| S.NO. | QUESTIONS   | MARKS<br>20 | NATURE           |
|-------|---|-------------|------------------|
| 1.    | <p>Tick the correct answer:</p> <p>1. It is the season of butterflies.</p> <p>a. Spring      b. Summer      c. Winter</p> <p>2. How many planets are there in our solar system ?</p> <p>b. 10                      b.9                      c. 8</p> <p>3. National flower of India is_____.</p> <p>a. Rose              b.Lotus              c. Sunflower</p> <p>4. Which is not a recreational activity?</p> <p>a. Painting              b. Dancing              c. Doing home work</p> | 4X1=4       | Understanding    |
| 2.    | <p>Fill in the blanks:</p> <p>a. _____season is called 'The Fall' season.</p> <p>b. Earth is also called _____ planet.</p> <p>c. _____ air is good for our health.</p> <p>d. Jana Gana Mana is written by _____</p>   | 4X1 = 4     | Analytical skill |
| 3.    | <p>Give two examples of each of the following:</p> <p>a) Indoor games: _____</p> <p>_____</p> <p>b) Summer fruits: _____</p> <p>_____</p>   | 4X0.5 = 2   | Information      |


|    |  |       |                             |
|----|--|-------|-----------------------------|
|    | _____  |       |                             |
| 4. | <p>Identify the pictures and write their names.</p> <p style="text-align: center;"></p> <p>a)  _____</p> <p>b)  _____</p> <p>c)  _____</p> <p>d) _____</p> | 4x1=4 | Observation                 |
| 5. | <p>What is your favourite recreational activity? Which things are needed for this activity?</p> <p>_____</p> <p>_____</p> <p>_____</p> <p>_____</p>  | 2x1=2 | HOTS                        |
| 6. | <p>Answer the following questions-</p>   | 2x2=4 | Thinking and Writing Skills |

1. Write the uses of air?

Ans- .....  
.....  
.....  
.....

2. What should be kept in mind while storing water?

Ans - .....  
.....  
.....  
.....



**ARMY PUBLIC SCHOOL GWALIOR**  
**CLASS – II**  
**ACADEMIC SESSION 2022-23**  
**WORKSHEET (SELF –ASSESSMENT)**




**Subject: G.K**  
**Allotment Date: 15 February 2023**

**Assignment No. : 5**

| S No. | QUESTIONS   | MARK S20 | NATURE        |
|-------|---|----------|---------------|
| 1.    | <p>Fill in the blanks-</p> <p>A. This is a traditional dress of Scotland. _____</p> <p>B. You break it before using it _____</p> <p>C. This is a footover _____ used for crossing the road.</p> <p>D. It is a game of a ball and a pile of small seven flat .<br/>stones. _____</p> <p>E. _____ is the currency of Japan.</p> <p>F. The sound of a owl is _____</p> | 6x1=6    | Understanding |

|              |  |            |                   |          |         |            |        |              |                     |           |         |             |          |       |                |
|--------------|--|------------|-------------------|----------|---------|------------|--------|--------------|---------------------|-----------|---------|-------------|----------|-------|----------------|
| 2            | <p>Match the following</p> <table border="0" style="width: 100%;"> <tr> <td style="text-align: center;">Column 'A'</td> <td style="text-align: center;">Column 'B'</td> </tr> <tr> <td>(i) Fire</td> <td>a) Bray</td> </tr> <tr> <td>(ii) Dinar</td> <td>b) Fly</td> </tr> <tr> <td>(iii) Donkey</td> <td>c) Traditional game</td> </tr> <tr> <td>(iv) Duck</td> <td>d) Iraq</td> </tr> <tr> <td>(v) Kho kho</td> <td>e) Quack</td> </tr> </table> | Column 'A' | Column 'B'        | (i) Fire | a) Bray | (ii) Dinar | b) Fly | (iii) Donkey | c) Traditional game | (iv) Duck | d) Iraq | (v) Kho kho | e) Quack | 5x1=5 | Thinking skill |
| Column 'A'   | Column 'B'   |            |                   |          |         |            |        |              |                     |           |         |             |          |       |                |
| (i) Fire     | a) Bray  |            |                   |          |         |            |        |              |                     |           |         |             |          |       |                |
| (ii) Dinar   | b) Fly   |            |                   |          |         |            |        |              |                     |           |         |             |          |       |                |
| (iii) Donkey | c) Traditional game  |            |                   |          |         |            |        |              |                     |           |         |             |          |       |                |
| (iv) Duck    | d) Iraq  |            |                   |          |         |            |        |              |                     |           |         |             |          |       |                |
| (v) Kho kho  | e) Quack   |            |                   |          |         |            |        |              |                     |           |         |             |          |       |                |
| 3            | <p>State 'True' or 'False'-</p> <ol style="list-style-type: none"> <li>1. The sound of a crocodile is croak.(        )</li> <li>2. We should always wear a seat belt while riding a bike.(    )</li> <li>3. We read books in a _____</li> <li>4. Intelligent machines can learn, think and take decisions.(    )</li> <li>5. Rupiah is the official currency of Indonesia.(    )</li> </ol>  | 5x1=5      | Observation       |          |         |            |        |              |                     |           |         |             |          |       |                |
| Q.5          | <p>Answer the following questions-</p> <ol style="list-style-type: none"> <li>1. Which is the famous fruit of Nagpur?<br/>Ans- _____</li> <li>2. What should we follow while crossing the road?<br/>Ans- _____</li> <li>3. Write an example of Intelligent machine.<br/>Ans- _____</li> <li>4. Write the name of any 2 traditional games which you would like to play?<br/>Ans- _____<br/>_____</li> </ol>   | 4x1=4      | Interdisciplinary |          |         |            |        |              |                     |           |         |             |          |       |                |



**ARMY PUBLIC SCHOOL GWALIOR**  
**CLASS – II**  
**ACADEMIC SESSION 2022-23**  
**WORKSHEET (SELF –ASSESSMENT)**



**Subject: Computer**

**Allotment Date: 15 February 2023**

**Assignment No. : 5**

| S.NO | QUESTION   | MARKS   | Nature        |
|------|--|---------|---------------|
| 1.   | <p><b>Write True and False</b></p> <p>1. There is no difference between a normal machine and an AI-enabled machine. <input type="checkbox"/></p> <p>2. By default, Scratchjr is installed on our device. <input type="checkbox"/></p> <p>3. We use decomposition in our daily lives too. <input type="checkbox"/></p> <p>4. Growing patterns does not add anything to itself. <input type="checkbox"/></p> | 4x1=4   | Understanding |
| 2.   | <p><b>Choose the correct answer.</b></p> <p>1. We can download Scratchjr app for an iPad from .....</p> <p>a. BlueStakes</p> <p>b. Google Play</p> <p>c. App store</p> <p>2. To make the sprite move, use the .....blocks.</p> <p>a. Motion</p> <p>b. Looks</p> <p>c. Control</p>  | 4x0.5=2 | Analyzing     |



|           |  |              |                               |
|-----------|--|--------------|-------------------------------|
|           | <p>3. An AI-programmed machine develops human understanding and .....</p> <p>a. emotions</p> <p>b. behavior</p> <p>c. voice</p> <p>4. In Rock, Paper and Scissor game .....</p> <p>.....beats Rock by covering it.</p> <p>a. Scissor</p> <p>b. Wood</p> <p>c. Paper</p>  |              |                               |
| <p>3.</p> | <p><b>Guess and complete the name of the following.</b></p> <p>1. The skill or ability to deal with changing situations is called I _ T _ L _ I _ E _ C _.</p> <p>2. A smart music system with AI plays through human voices C _ M _ A _ _ S.</p> <p>3. S _ A _ E is the place where sprite moves.</p> <p>4. When we represent information using symbol or pictures, it is called C _ D _ N _.</p> | <p>4x1=4</p> | <p><b>Problem Solving</b></p> |