







ARMY PUBLIC SCHOOL GWALIOR
CLASS – I
ACADEMIC SESSION 2022-23
WORKSHEET (SELF –ASSESSMENT)


Subject: English

Assignment No. : 8

Allotment Date: 15 February 2023

S.NO	QUESTIONS	MARKS	SKILLS
1.	Write the meanings of the given words: a. precious - b. wail - c. together - d. dead -	4x1=4	Language and Thinking
2.	Fill in the missing letters to form the complete words: a. Sgrcn b. Bnn c. Rb t d. Ra it	4x1=4	Cognitive Language
3.	Answer the following questions: a. Who could not climb trees ? Ans. b. What is a robot ? Ans. c. Who were Sona's friends ? Ans.	4x2=8	Thinking Language and communication

	<p>d. What name did Jimmy give to his robot ?</p> <p>Ans.</p>		
4.	<p>Match the following pictures with the position words :</p> <p>1.  in</p> <p>2.  over</p> <p>3.  under</p> <p>4.  on</p>	$4 \times 1 = 4$	Cognitive







ARMY PUBLIC SCHOOL GWALIOR
CLASS – I
ACADEMIC SESSION 2022-23
WORKSHEET (SELF –ASSESSMENT)

Subject: Hindi

Assignment No. : 8

Allotment Date: 15 February 2023

संख्या	प्रश्न	अंक	प्रकृति
प्र 1.	<p>बिल्ली बच गई एक दिन ढोलू – मोलू दोनों अपने घर के पीछे खेल रहे थे। वहाँ एक कमरे में बिल्ली के दो छोटे - छोटे बच्चे थे। उन्हें भूख लगी हुई थी। ढोलू-मोलू ने दोनों बिल्ली के बच्चों की आवाज सुनी और अपने दादाजी को बुला कर लाए। दादा जी ने उन दोनों को एक एक कटोरी दूध पिलाया। वह दोनों आपस में खेलने लगे। इसे देखकर ढोलू - मोलू बोले बिल्ली बच गई दादाजी ने ढोलू-मोलू को शाबाशी दी। नैतिक शिक्षा – दूसरों की भलाई करने से खुशी मिलती है।</p> <p>प्र1.ढोलू- मोलू को कैसे पता चला कि बिल्ली के बच्चे भूखे हैं ?</p> <p>-----</p> <p>प्र 2 ढोलू मोलू ने मदद के लिए किस को बुलाया ?</p> <p>-----</p> <p>प्र 3 दूध पीने के बाद बिल्ली के बच्चे क्या करने लगे ?</p> <p>-----</p> <p>प्र 4 खाली स्थान भरो ।</p>	5x1=5	बोधार्थक

	<p>1. एक कमरे में बिल्ली के _____ छोटे छोटे बच्चे थे।</p> <p>2. बिल्ली के बच्चों को _____ लगी थी।</p>		
प्र2	<p>दिए गए शब्दों के अर्थ लिखो :</p> <p>ताँगा _____</p> <p>कुटिया _____</p> <p>वृक्ष _____</p> <p>बरखा _____</p>	4x1=4	अन्तः विषयात्मक
प्र 3	<p>चित्र देखो और बताओ कौन क्या लाया।</p> <div style="display: flex; justify-content: space-around; align-items: center;"> <div style="text-align: center;">  </div> <div style="text-align: center;"> <p>भालू</p> </div> </div> <div style="display: flex; justify-content: space-around; align-items: center; margin-top: 20px;"> <div style="text-align: center;">  </div> <div style="text-align: center;"> <p>खरगोश</p> </div> </div> <div style="display: flex; justify-content: space-around; align-items: center; margin-top: 20px;"> <div style="text-align: center;">  </div> <div style="text-align: center;"> <p>गिलहरी</p> </div> </div> <div style="display: flex; justify-content: space-around; align-items: center; margin-top: 20px;"> <div style="text-align: center;">  </div> <div style="text-align: center;"> <p>बंदर</p> </div> </div>	4x.5 =2	

<p>प्र 4</p>	<p>(अ) निम्नलिखित प्रश्नों के उत्तर दो -</p> <p>(i)दोबिना पेट्रोल इंजन के चलने वाले वाहनों के नाम लिखो ।</p> <p>.....</p> <p>.....</p> <p>.....</p> <p>.....</p> <p>(ii)शिकारी वहाँ क्यों आया?</p> <p>.....</p> <p>.....</p> <p>.....</p> <p>.....</p> <p>(iii) आँचल और सांवरी ने मेले में किसकी सवारी की।</p> <p>.....</p> <p>.....</p> <p>.....</p> <p>.....</p> <p>(iv) रत्ना ने ई-रिक्शा वाले को क्या कहा?</p> <p>.....</p> <p>.....</p> <p>.....</p> <p>.....</p>	<p>5x1=5</p>	<p>विश्लेषणात्मक</p>
--------------	--	--------------	----------------------

प्र . 5	<p>नीचे दिए अनुच्छेद को पूरा करो</p> <p>पिकनिक</p> <p>पिछले शनिवार को हम विद्यालय के तरफ से पिकनिक पर गए थे।</p> <p>हम सभी ----- में हंसते-गाते जा रहे थे।</p> <p>हम लगभग दस बजे ----- पहुंचे।</p> <p>हमने वहाँ पर बहुत प्रकार के ----- देखे।</p> <p>हमारे अध्यापको ने वहाँ पर रहने वाले -----</p> <p>- के बारे में बताया।</p>	4×1=4	भाषाई कौशल
---------	--	-------	---------------



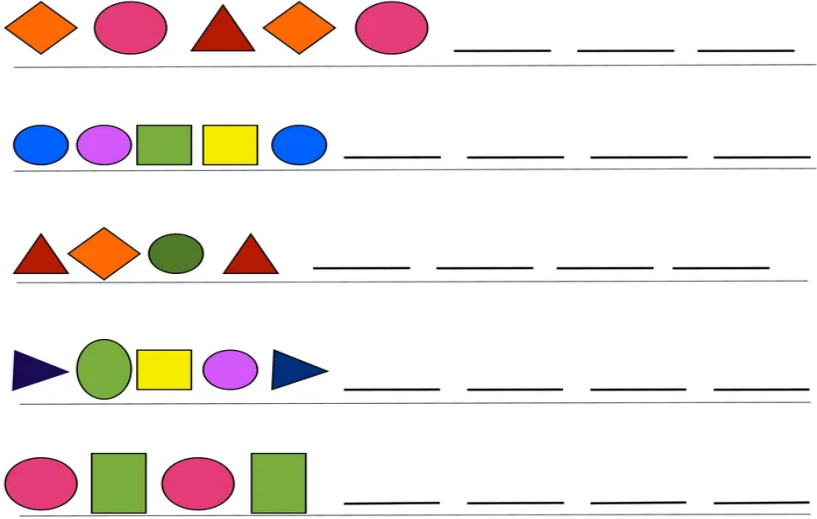












ARMY PUBLIC SCHOOL GWALIOR
CLASS – I
ACADEMIC SESSION 2022-23
WORKSHEET (SELF –ASSESSMENT)

Subject: Mathematics


Assignment No. : 8

Allotment Date: 15 February 2023

S.NO		MARKS	SKILLS
1.	Fill in the blanks using the given help box: (28, Eighth, July, October, 26 January) a. _____ comes between September and November. b. August is the _____ month of the year. c. _____ is the seventh month of the year. d. _____ days are there in four weeks. e. _____ is our Republic day.	5X1=5	Understanding
2.	Match the followings: a. Sunday 9 th month b. Saturday 7 th day of the week c. September 12 th month d. December 4 th month e. April 6 th day of the week	5×1=5	Cognitive

3	<p>Draw the pattern that comes next:</p> 	5X1=5	Problem Solving								
4.	<p>Peter likes to pick oranges and squeeze them into fresh juice that he can kindly share with his friends. The picture graph shows how many oranges he picked on certain days.</p> <table border="1" data-bbox="308 955 1039 1270"> <tr> <td>Monday</td> <td></td> </tr> <tr> <td>Wednesday</td> <td></td> </tr> <tr> <td>Friday</td> <td></td> </tr> <tr> <td>Saturday</td> <td></td> </tr> </table> <ol style="list-style-type: none"> 1) How many oranges did Peter pick on Wednesday and Friday? _____ 2) How many more oranges did he pick on Friday than on Saturday? _____ 3) How many more oranges did he pick on Friday than on Monday? _____ 4) On which day did Peter pick 5 oranges more than on Saturday? _____ 	Monday		Wednesday		Friday		Saturday		5x1=5	Critical thinking
Monday											
Wednesday											
Friday											
Saturday											

	<p>5) Peter needs 1orange for 1 litre of orange juice. How many liters of juice can he make on Saturday ?</p> <p>_____</p>		
--	--	--	--



ARMY PUBLIC SCHOOL GWALIOR
CLASS – I
ACADEMIC SESSION 2022-23
WORKSHEET (SELF –ASSESSMENT)

Subject: EVS

Assignment No. : 8

Allotment Date: 15 February 2023

S.NO	QUESTIONS	MARKS	SKILLS
1.	<p>Fill in the blanks using the given help box: (summer, jute, plant, eight, drink)</p> <p>a. We sweat a lot in _____ season.</p> <p>b. We get fibre from _____.</p> <p>c. We should _____ boiled or filtered water only.</p> <p>d. Spider have _____ legs.</p> <p>e. A _____ has a root, leaves, and a stem.</p>	5×1=5	Understanding
2.	<p>Match the followings:</p> <p>a. quilt 1.Housefly b. flightless bird 2.winter c. insect 3.Emu d. National tree 4.pigeon e. bird 5.Banyan</p>	5×1=5	Decision making

3.	Write 'T' for true and 'F' for false for the following statement: a. We see a rainbow after the rain. [] b. Sea water is salty in taste. [] c. Aeroplane has wings that move. [] d. Cow gives us wool. [] e. Root is present below the soil. []	5X1=5	Problem solving
----	---	-------	-----------------

4.	<p>Answer the following questions.</p> <p>Q.1 What is season?</p> <hr/> <hr/> <p>Q.2 Name three sources of water.</p> <hr/> <hr/> <p>Q.3 What does a seed grow into?</p> <hr/> <hr/> <p>Q.4 Name two vehicles that moves on land.</p> <hr/> <hr/> <p>Q.5 Where do wild animals live?</p> <hr/> <hr/>	5X1=5	Critical thinking
----	--	-------	-------------------








ARMY PUBLIC SCHOOL GWALIOR
CLASS – I
ACADEMIC SESSION 2022-23
WORKSHEET (SELF –ASSESSMENT)





Subject: G.K

Assignment No. : 5

Allotment Date: 15 February 2023

S.N	QUESTIONS	MARKS	SKILLS
Q.1	<p>Match the following</p> <p>1. Snake National Flag of India</p> <p>2. Charles Babbage Badminton</p> <p>3. Tulip Computer</p> <p>4. Tricolour Slithers</p> <p>5. Shuttlecock Flower</p>	5 x 1 = 5	Cognitive Skills
Q.2	<p>Identify the pictures and write the correct answer using the given help box: (Kamala Devi Harris, Vallabhbhai Patel, Kingfisher, Screw driver, Guitar)</p> <p>1. </p> <p>2. </p> <p>3. </p> <p>4. </p> <p></p>	5 x 1 = 5	Thinking Skills

	5.		
--	----	--	--

Q.3	<p>Write how the following animals move (Walks, Flies, Swims, Hops, Crawls)</p> <p>a.  _____ _____</p> <p>b.</p> <p>c.  _____</p> <p>d.  _____</p> <p>e.  _____ _____</p>	$5 \times 1 = 5$	Critical thinking
-----	--	------------------	-------------------

Q.4	<p>Answer the following questions in one word.</p> <p>a. Which tool is used to cut cloth? Ans.....</p> <p>b. Who was the founder of Azad Hind Fauj? Ans.....</p> <p>c. Who invented the traffic lights? Ans.....</p> <p>d. Which language is spoken in West Bengal? Ans.....</p> <p>e. Which one is the oldest language of India. Ans.....</p>	5 x 1 = 5	Problem solving
-----	--	-----------	-----------------



ARMY PUBLIC SCHOOL GWALIOR
CLASS – I
ACADEMIC SESSION 2022-23
WORKSHEET (SELF –ASSESSMENT)

Subject: Computer

Assignment No. : 5

Allotment Date: 15 February 2023

S.NO	QUESTION	MARKS	
1.	Write True and False 1. Artificial things are not found naturally. <input type="checkbox"/> 2. Tool bar contains all the drawing and editing tools. <input type="checkbox"/> 3. Patterns do not repeat over and over again. <input type="checkbox"/> 4. We do not need internet connection to open Auto Draw <input type="checkbox"/>	4x1=4	Understanding
2.	Choose the correct answer. 1. Artificial things are made by..... . a. nature b. robots c. Human 2. Thought Intelligence, a computer can play, talk and do many other things.	4x0.5=2	Analysing

	<ul style="list-style-type: none"> a. Simple b. Natural c. Artificial <p>3. Fill button is present in thetool.</p> <ul style="list-style-type: none"> a. Paint b. Text c. Magic <p>4.tool is used to paste pre-drawn images on canvas.</p> <ul style="list-style-type: none"> a. New b. Line c. Stamp 		
<p>3.</p>	<p>Guess and complete the name of the following.</p> <ul style="list-style-type: none"> 1. D __ A __ I __ G canvas is the largest part of the screen where we draw. 2. AI makes a M __ C __ I __ E think intelligently like humans. 3. Decomposition of a problem makes it easy to S __ L __ E. 4. For starting AutoDraw, we need a computer with I __ T __ R __ E __ T. 	<p>4x1=4</p>	<p>Problem Solving</p>