



ARMYPUBLICSCHOOLGWALIOR
CLASS - IV
ACADEMICSESSION2023-24
WORKSHEET (SELF-ASSESSMENT)



Subject: English

Assignment No.:1

Allotment Date: 29 April 2023

S. No.	Questions	Marks	Nature
1.	Vocabulary Write the meanings of the following words- 1.tired - 2.whispered- 3.gather - 4.earned- 5.shook -	5x1=5	Understanding
2.	Do as directed- 1.I saw a _____ of lions in jungle. (Fill in the blank with suitable collective noun). 2. My uncle lives in _____.(Fill in the blank with suitable proper noun) 3. _____ is the best policy. (Fill in the blank with suitable abstract noun) 4. I go to the _____ to study. (Fill in the blank with suitable common noun) 5. He is a man of _____.(Fill in the blank with suitable abstract noun)	5x1=5	Problem solving
3.	Identify and write the kind of sentences - 1. Have your medicines on time. 2.Which students wants to leave early today?	4x1/2=	Understanding

	<p>3. "Oh dear, I have lost all my money!"</p> <p>4. Her face grew white and her lips trembled.</p>		
4.	<p>Answer the following questions:</p> <p>1 Why did the boy want to keep himself warm?</p> <hr/> <hr/> <p>2. In what ways do trees help us? What can we do to save trees?</p> <hr/> <hr/> <p>3. Is the title of the story 'The Giving Tree' right? Why?</p> <hr/> <hr/> <p>4. Can you imagine the world without trees? Express your thoughts.</p> <hr/> <hr/>	4x2=8	HOT



आर्मी पब्लिक स्कूल ग्वालियर
कार्यपत्रिका अप्रैल माह 2023-24



कक्षा - 4

विषय - हिंदी

Subject: Hindi

Allotment Date: 29 April 2023

Assignment No.:1

संख्या	प्रश्न	अंक	प्रकृति
प्र 1.	<p>दिए गए गद्यांश को पढ़कर उसके नीचे लिखे प्रश्नों के उत्तर लिखो-</p> <p>प्रत्येक व्यक्ति के जीवन में विद्यालय का बहुत महत्त्व होता है। प्रत्येक शिक्षित व्यक्ति अपने जीवन में शिक्षा ग्रहण करने का आरंभ विद्यालय से ही करता है। विद्यालय में दी जाने वाली शिक्षा का स्तर अच्छा होगा तो विद्यार्थियों का स्तर भी अच्छा होगा। एक विद्यालय हजारों विद्यार्थियों के हृदय में ज्ञान का प्रकाश भर देते हैं। श्रेष्ठ अध्यापकों और अध्यापिकाओं को विद्यार्थी अपने जीवन में सदा स्मरण रखते हैं। वे अपने विद्यालयों को भी नहीं भूलते।</p> <p>प्र.1. प्रत्येक शिक्षित व्यक्ति क्या करता है?</p> <p>-----</p> <p>प्र.2. विद्यार्थियों का स्तर अच्छा कैसे होता है?</p> <p>-----</p> <p>प्र.3. विद्यालय कैसे प्रकाश भर देता है?</p> <p>-----</p>	3x1=3	बोधार्थक
प्र2	<p>इन शब्दों का वर्ण - विच्छेद करो -</p> <p>1 बच्चे _____</p> <p>2. चट्टानों _____</p> <p>3. पूर्ण _____</p>	3x1=3	ज्ञानार्थक

<p>प्र 3</p>	<p>निम्नलिखित शब्दों के अर्थ लिखो -</p> <p>1.साहस _____</p> <p>2.अभिलाषा _____</p> <p>3.तनिक _____</p> <p>4.न्योछावर _____</p>	<p>4x1=4</p>	<p>रचनात्मक</p>
<p>प्र 4</p>	<p>सही उत्तर के आगे सही का निशान लगाएं-</p> <p>1.विचारों के आदान-प्रदान का माध्यम है- व्याकरण () भाषा () लिपि ()</p> <p>2.लिखित भाषा का उदाहरण है- पत्र लेखन () समाचार () वाचन संवाद ()</p> <p>3.हिंदी भाषा की लिपि है- गुरुमुखी () देवनागरी () रोमन ()</p> <p>4.भाषा के रूप माने जाते हैं- चार () दो () तीन ()</p>	<p>4x1=4</p>	<p>सूचनात्मक</p>
<p>प्र 5</p>	<p>(अ) निम्नलिखित प्रश्नों के उत्तर दो -</p> <p>(i)भारत के बच्चों के कोई दो गुण लिखो।</p> <p>.....</p> <p>.....</p> <p>(ii)बच्चे कैसे लोगों की मदद करना चाहते हैं?</p> <p>.....</p> <p>.....</p> <p>(iii)भारत माँ की अभिलाषा कैसे पूरी की जा सकती है?</p> <p>.....</p> <p>.....</p> <p>(iv) वर्ण किसे कहते हैं ?</p> <p>.....</p> <p>.....</p> <p>.....</p>	<p>4x1=4</p>	<p>विश्लेषणात्मक</p>

प्र 6	मूल्यपरक प्रश्न – देश के जागरूक नागरिकों में कौन – कौन से गुण होने चाहिए ? <hr/> <hr/>	2	उच्चस्तरीय चिंतन
-------	---	---	---------------------



ARMYPUBLICSCHOOLGWALIOR
CLASS -IV
ACADEMIC SESSION 2023-24
WORKSHEET (SELF-ASSESSMENT)



Subject: Mathematics

Assignment No. : 1

Allotment Date: 29 April 2023

S. NO.	QUESTIONS	MARKS	NATURE
1	Fill in the blanks: (i) The place value for 4 in 34521 is (ii) The face value for 2 in 54729 is	2*1=2	Understanding
2	Write 'True' or 'False': (i) The place value of 7 in 67894 is 7000 () (ii) The face value of 6 in 125643 is 600 ()	2*1=2	HOTS
3	Tick the correct answer from the given options: (i) 10000 + 8000 + 20 + 3 is the expanded form of – (a) 1823 (b) 18023 (c) 10823 (ii) The correct break up for 60606 is (a) 6000+600+6 (b)60000+600+6 (c) 60000+6000+6 (iii) Eight thousand nine hundred thirty-six in figures is (a) 8396 (b) 8639 (c) 8936	3*1=3	Critical thinking
4	Solve the following questions: - (i) Write 734102 in expanded form (ii) Rearrange the following numbers in ascending order: 3001,432,14032,41231,42103 (iii) Write the greatest and smallest 4-digit numbers using all digits 8,5,6,3	3*1=3	Interdisciplinary

5	Solve the following questions: (i) Write the greatest 6-digit number formed by 5, 6, 9, 0, 3, 7. (ii) Write the smallest 6-digit number formed by 8,7,2,6,1,9 (iii) Round off each of the following numbers to the nearest hundreds. a. 416 b. 762 (iv) Round off each of the following numbers to the nearest thousands a. 3264 b. 8763 (v) List all the numbers which can be rounded off to the nearest tens as 96	5*2=10	Problem Solving
----------	--	---------------	-----------------



ARMYPUBLICSCHOOLGWALIOR
CLASS - IV
ACADEMICSESSION2023-24
WORKSHEET (SELF-ASSESSMENT)



Subject: Environmental Studies
Allotment Date: 29 April 2023

Assignment No.1

S. NO.	QUESTIONS	MARKS	NATURE
Q1	Choose an example of egg laying animal. a. Snake _____ b Hen _____ c. Both a and b _____	1x1=1	Information
Q2	Choose the correct option. 1. A joint family has ----- set/sets of family. a. one b. many c. none 2. Adopted children ----- inherited traits. a. carry b. don't carry	2X1=2	Understanding
Q3	Why do the children resemble with their parents? _____	2x1=2	HOT

Q4	<p>i.) How do you feel when you walk near a heap of garbage?</p> <p>Think of the children who spend the whole day picking things from such garbage.</p> <p>_____</p> <p>_____</p> <p>ii). Why do people adopt babies?</p> <p>_____</p> <p>_____</p>	2x2=4	Interdisciplinary
Q5	<p>i). For an activity find out the likes and dislikes of your family members. Observe the similarities and differences between them.</p> <p>_____</p> <p>_____</p> <p>_____</p>	3x2=6	Analytical Skill
	<p>ii).What kind of questions came to your mind after seeing the animals with their babies?</p> <p>_____</p> <p>_____</p>		Critical Thinking and Problem Solving
Q 6.	<p>i.) What are Planets?</p> <p>ii.) What is another name of Earth?</p> <p>iii). Who are cartographers?</p> <p>iv). Which negative impact of migration you will not like?</p> <p>v). Who is the head of paternal family?</p>	1x5=5	Comprehension



ARMY PUBLIC SCHOOL GWALIOR
CLASS - IV
ACADEMIC SESSION 2023-24
WORKSHEET (SELF –ASSESSMENT)



Subject: Computer
Allotment Date: 29 April 2023

Assignment No.1

S.NO.	QUESTIONS	MARKS-10	NATURE
1	Choose and write the correct option (MCQ):-	1/2x5=2.5	Information
i)	_____ protects the internal electronic components from damage. a) RAM b) ALU c) System Unit		
ii)	_____ controls each part of computer. a) Motherboard b) CPU c) CD-ROM		
iii)	Speed of a CPU is measured in _____. A) MHz B) GHz C) Both a and b		
iv)	_____ is a volatile memory. a) Hard Disk b) RAM c) ROM		
v)	_____ drives are used for holding data and instructions for future use. a) ROM b) CPU c) Disk		
2	Fill in the blanks- a) A _____ is a large circuit-board inside the system unit. b) CPU is also called _____ or _____. c) _____ is also called the primary memory. d) An _____ enhances the functionality of components of the computer. e) _____ port is used to connect the Internet and network cable.	1/2 x 5=2.5	Understanding

3.	<p>Write 'T' for True and 'F' for False statements.</p> <ul style="list-style-type: none"> a) Motherboard is also known as system board. b) Memory of the computer is measured in MHz. c) RAM stores the data permanently. d) Hard disk drive reads information stored on CDs/DVDs. 	$\frac{1}{2} \times 4=2$	Understanding
4.	<p>Answer the following questions:-</p> <ul style="list-style-type: none"> a) What do you mean by System unit? b) Write any two uses of motherboard in a computer. c) What are the uses of ports? Write down the names of some ports. 	$1 \times 3=3$	Evaluation





ARMY PUBLIC SCHOOL GWALIOR
CLASS - IV
ACADEMIC SESSION 2023-24
WORKSHEET (SELF –ASSESSMENT)



Subject: General Knowledge
Allotment Date: 29 April 2023

Assignment No.1

S.NO	QUESTIONS	MARKS	SKILLS
1.	<p>Fill in the blanks.</p> <p>a) It is a piece of land where grapevine are grown you can find such places in Maharashtra, Karnataka and Madhaya Pradesh. _____</p> <p>b) This spice is used in both green and dried form. It helps in digestion. _____</p> <p>c) A _____ makes burrow in the ground. It is smaller than a _____ that makes nest on the ground.</p> <p>d) This is the main organ of the nervous system _____.</p>	5	Informative and general awareness
2.	<p>Identify the following pictures.</p> <p>a)  _____</p> <p>b)  _____</p>	5	Identification and general awareness



c)



d)



e)








ARMY PUBLIC SCHOOL GWALIOR
CLASS -IV
ACADEMIC SESSION 2023-24
WORKSHEET (SELF –ASSESSMENT)



Subject: Art & Work Education
Allotment Date: 29 April 2023

Assignment No. 1

S.NO	QUESTIONS	MARKS	SKILLS
1.	How many types of Lines in Art are there? a) Two b) Four c) Five d) one	1	Creativity
2.	_____ lines convey action and excitement. a) curved lines b) slanted lines c) horizontal lines d) zigzag lines	1	Creativity
3.	What type of line is this?  a) curved lines b) slanted lines c) horizontal lines d) vertical lines	1	Creativity
4.	A _____ is one of the seven elements of art. a) Line b) Perspective c) Shading d) Painting	1	Creativity
5.	What type of line is this?  a) Zigzag line b) curved lines c) slanted lines d) horizontal lines	1	Creativity

6.	<p>Zigzag lines are a series of diagonal lines joined at ends.</p> <p>a) True b) False</p>	1	Creativity
7.	<p>Vertical lines are lines that move left and right.</p> <p>a) True b) False</p>	1	Creativity
8.	<p>Curved lines can be simply wavy or _____.</p> <p>a) Straight b) Spiral c) Slant d) Square</p>	1	Creativity
9.	<p>Diagonal lines are straight lines that _____ in any direction except horizontal or vertical.</p> <p>a) Straight b) Spiral c) Slant d) Zigzag</p>	1	Creativity
10.	<p>Which among these is the picture of Zigzag line?</p> <p>A</p>  <p>B</p>  <p>C</p> 	1	Creativity



ARMY PUBLIC SCHOOL GWALIOR
CLASS -IV
ACADEMIC SESSION 2023-24
WORKSHEET (SELF –ASSESSMENT)



Subject: Dance
Allotment Date: 29 April 2023

Assignment No.1

S.NO.	QUESTIONS	MARKS 10	NATURE
1	Choose the correct option: Kathak” is derived from Which Sanskrit word? A) katha B) natya	(1)	Information
2	What are the main two gharanas of Kathak dance? A) Delhi and Agra. B) Jaipur and Lucknow.	(1)	Understanding
3	World Dance Day is celebrated on which date? A) 29April B) 29 January	(1)	Information
4	What is tatkar? A) footwork B) hand gestures	(1)	Understanding
5	Which mudra is used while doing Namaskar in Kathak dance? A) Anjali B) kapot	(1)	Critical thinking
6	In what rhythm do EkgunTaatkar A) Vilambit B) Drut	(1)	

7	Kathak dance performed by ? A) Women only B) Women and men	(1)	Creative thinking
8	Where did Kathak dance originated? A)Hindu temple B) court	(1)	
9	How many gharanas are there in Kathak dance? A) 4 B) 5	(1)	
10	How many types of hand gestures in kathak dance ? A) 3 B) 2	(1)	



ARMY PUBLIC SCHOOL GWALIOR
CLASS -IV
ACADEMIC SESSION 2023-24
WORKSHEET (SELF –ASSESSMENT)



Subject: Health and Physical Education
Allotment Date: 29 April 2023

Assignment No. 1

S.NO	QUESTIONS	MARKS	SKILLS/ COMPETENCIES
1	Choose the correct option: 1. Which of the followings types of jumps you learn A) Standing jump B) Broad jumps C) Hurdle jump D) All of the above	1	Information
2	2. What is the purpose of recreational games A) Fitness with fun and games B) Earn more chocolate C) To cry D) To get angry	1	Information
3	3. On which command children will pick the bottle A) Take B) Snatch C) Push D) Buy	1	Information
4	4. In the opposite game what you have to do when teacher will say stand up? A) Jump B) Stand up C) Sit down D) Sleep	1	Information
5	Fill in the following blanks: - 1. Jump can be done on _____ A) Stairs B) Ground	1	Information

	<p>C) Road</p> <p>D) Bus stand</p>		
	<p>2 Jumping games make students legs _____</p> <p>A) Strong</p> <p>B) Weak</p> <p>C) Mad</p> <p>D) Fat</p>	1	Interdisciplinary
	<p>3. Jumping games good for student _____.</p> <p>A) Health</p> <p>B) Ground</p> <p>C) Cone</p> <p>D) Dress</p>	1	Interdisciplinary
6	<p>State whether True/False:</p> <p>1. We can play recreational games indoor as well as outdoor. (True/False)</p>	1	Interdisciplinary
	<p>2. We play games to be healthy and strong. (True/ False)</p>	1	Understanding
	<p>3. Junk food is good for health. (True/False)</p>	1	Understanding