



ARMY PUBLIC SCHOOL GWALIOR
CLASS - III
ACADEMIC SESSION 2022-23
WORKSHEET (SELF –ASSESSMENT)


Subject: English

Assignment No. : 5

Allotment Date: 15 November 2022

S. No.	Questions	Marks	Nature
1.	<p><u>Vocabulary</u></p> <p>Write the meanings of the following words -</p> <ol style="list-style-type: none">1. creatures -2. exotic -3. trouble -4. inventions -5. majestic -	5x1=5	Information
2.	<p>Do as directed -</p> <ol style="list-style-type: none">1. Fill in the blank with correct verb and past continuous tense. The cat _____ milk. (was/were, drink)2. In context with the poem Upside Down write a word that rhyme with: feeling - _____3. fast - _____ (staff/fats) (tick the correct anagram)4. Gravity also attracts a body towards another body that has mass. (underline the verb in simple present tense)5. There _____ a painting on the wall.(is/are)(choose correct verb)	5x1=5	Problem solving
3.	<p>Fill in the blanks -</p> <ol style="list-style-type: none">1. World Animal Day is celebrated on _____.	4x1/2=2	Understanding

	<p>2. _____ tress are important because they hold the wind in their branches. (According to poem- How Many Greens ?)</p> <p>3. Isaac Newton was born in _____ in _____.</p> <p>4. It's funny how _____ and creatures like that, can walk upside down. (According to poem- Upside Down)</p>		
<p>4.</p>	<p>Answer the following questions :</p> <p>1. According to the poet, where can such creatures easily walk? (According to poem- Upside Down)</p> <p>_____</p> <p>_____</p> <p>2. Who brings a pizza for all the animals and what was special about it?</p> <p>_____</p> <p>_____</p> <p>3. What pulls all things and living beings towards the earth and attracts two things towards each other?</p> <p>_____</p> <p>_____</p> <p>4. Whom would the poet like as her friends? (According to poem- How Many Greens)</p> <p>_____</p> <p>_____</p>	<p>4x2=8</p>	<p>HOT</p>



ARMY PUBLIC SCHOOL GWALIOR
CLASS - III
ACADEMIC SESSION 2022-23
WORKSHEET (SELF -ASSESSMENT)

Subject: Hindi

Assignment No. : 5

Allotment Date: 15 November 2022

संख्या	प्रश्न	अंक	प्रकृति
प्र 1.(क)	निम्न वाक्यों पर सही विराम चिन्ह लगाओ - (i) क्या तुम कल बाज़ार गए थे (ii) मीना सीमा और सरिता कक्षा तीन में पढ़ती है (iii) राजा एक अच्छा खिलाड़ी है निम्न वाक्यांश के लिए एक शब्द लिखो - (i) जो विद्यालय में पढ़ाए I (ii) जो मूर्ति बनाता है I	5x1=5	बोधात्मक
प्र 2	(क) निम्नलिखित पंक्ति में जो क्रिया शब्द नहीं है उस पर गोला लगाओ- (I) सोना पढ़ना जंगल	5x1=5	अन्तः विषयात्मक

	<p>(ii) पीछे मुस्कराना दौड़ना</p> <p>(iii) बैठना बगीचा आना</p> <p>(ख) शब्दों का क्रम ठीक करके सही वाक्य लिखो -</p> <p>(i) रात गई है हो</p> <p>(ii) रही है संजना सो</p>		
प्र 3.	<p>निम्नलिखित शब्दों के अर्थ लिखो -</p> <p>i) शून्य</p> <p>ii) राष्ट्रीय</p> <p>iii) तरणताल -</p> <p>iv) रक्षक</p> <p>v) न्यारा -.....</p>	5x1=5	
प्र 4.	<p>(अ) निम्नलिखित प्रश्नों के उत्तर दो -</p> <p>(i) आप दीवाली कैसे मनाते हैं?</p> <p>.....</p> <p>..</p> <p>.....</p> <p>..</p> <p>.....</p>	5x1=5	विश्लेषणात्मक

.....
.....
.....

(ii) कवि किन्हें साथ बैठाने के लिए कह रहा है ?


.....
.....
.....
.....
.....

(iii) शेरनी लोगों पर क्यों झपट रही थी ?

.....
.....
.....
.....
.....
.....
.....
.....
.....
.....
.....

(iv) ईशान के सुझाव पर नीलेश ने क्या उत्तर दिया ?

.....
.....
.....



ARMY PUBLIC SCHOOL GWALIOR
CLASS - III
ACADEMIC SESSION 2022-23
WORKSHEET (SELF -ASSESSMENT)

Subject: Mathematics

Assignment No. : 5

Allotment Date: 15 November 2022

S. No.	Questions	Marks	Nature
1.	<p>Do as directed:</p> <p>a. Divide the following :</p> <p style="padding-left: 40px;">$675 \div 5$</p> <p>b. Write the following fraction in words.</p> <p style="padding-left: 40px;">Three - tenths</p> <p>c. Convert the following :</p> <p style="padding-left: 40px;">7 m into centimetres</p>	5x1=5	Information

	<p>d. Subtract the following.</p> <p>81 km 350 m from 92 km 450 m</p> <p>e. Solve the following riddle and name the shape.</p> <p>I have no vertices but two edges. I am a curved shape with three faces.</p> <p>.....</p>		
<p>2.</p>	<p>Fill in the blanks:</p> <p>a. The opposite side of a _____ is equal.</p> <p>b. 300m, 600m, 900m, _____ , _____</p> <p>c. $560 \div 10 =$ _____</p> <p>d. 1 cm = _____ mm</p> <p>f. Ravi distributed 27 sweets among his friends. If he gave 3 sweets to each,how many friends were there? _____</p>	<p>5x1=5</p>	<p>Problem solving</p>
<p>3.</p>	<p>Frame a simple word problem for the following fact:</p> <p>a. $250 \div 5 = 50$</p> <p>.....</p> <p>.....</p>	<p>2x1=2</p>	<p>Understanding</p>

.....

b. Write the division fact for the given statement.

Divide 20 balloons among 4 children. Each child gets 5 balloons.

.....

4. Solve the following word problems:

a. From the sum of 300km 789 m and 234 km 500m, subtract 345 km 128 m.

.....

b. How many sentences of 4 words can be made from 404 words?

.....

4x2=8

HOT

.....
.....

.....
.....

.....
.....

.....
.....

.....
.....

c. A shoe - rack has 4 pairs of black shoes and 5 pairs brown shoes .What fraction of the shoes are brown?

.....
.....

.....
.....

.....
.....

.....
.....

.....
.....

.....
.....

d. Write the fraction whose numerator is 15 and denominator is 17.

.....
.....

.....



ARMY PUBLIC SCHOOL GWALIOR
CLASS - III
ACADEMIC SESSION 2022-23
WORKSHEET (SELF –ASSESSMENT)

Subject: EVS

Assignment No. : 5

Allotment Date: 15 November 2022

S. No.	Questions	Marks	Nature
1.	<p>Answer the following questions:</p> <p>(a) What will happen if plants do not get water? How does it affect the animals?</p> <p>.....</p> <p>.....</p> <p>.....</p> <p>.....</p> <p>(a) What is the difference between kucccha house and pucca house?</p> <p>.....</p> <p>.....</p> <p>.....</p> <p>.....</p>	3 x 2 =6	Information

	<p>.....</p> <p>.....</p> <p>.....</p> <p>.....</p> <p>.....</p> <p>.....</p> <p>.....</p> <p>.....</p> <p>(b) Why there is a cultural diversity in food in India?</p> <p>.....</p> <p>.....</p> <p>.....</p> <p>.....</p> <p>.....</p> <p>.....</p> <p>.....</p> <p>.....</p> <p>.....</p>		
2.	<p>Fill in the blanks:</p> <p>(a) _____ is a natural source of water.</p> <p>(b) Electricity made with the help of water is called_____.</p>	5x 1=5	<p>Understanding</p>

	<p>(c) Full form of ATM is _____.</p> <p>(d) _____ house floats in water.</p> <p>(e) _____ is used to kill the germs present in water.</p>		
3.	<p>State whether the following statements are 'True' or 'False':</p> <p>1. A magnetic compass always point towards the South direction. _____</p> <p>2. Burj Khalifa is not the tallest skyscraper of the world. _____</p> <p>3. The cooking method to prepare cakes and pastries is Baking. _____</p> <p>4. Sea water is good for plants and animals. _____</p>	4x1=4	Knowledge
4.	<p>Give two examples of each:</p> <p>1. Two animals that do not need much water _____, _____</p> <p>2. Any two cardinal directions _____, _____</p> <p>3. Two methods of cooking _____, _____</p>	5 x1=5	Interdisciplinary & Critical thinking

4. Two festivals on which we decorate our house _____,

5. Two things we get to eat from animals _____, _____



ARMY PUBLIC SCHOOL GWALIOR
CLASS - III
ACADEMIC SESSION 2022-23
WORKSHEET (SELF –ASSESSMENT)


Subject: Computer

Assignment No. : 3

Allotment Date: 15 November 2022

S.NO	QUESTION	MARKS	NATURE
1.	<p>Write true and False</p> <p>1. Word 2016 file is saved in.txt file extension. <input type="checkbox"/></p> <p>2. We can modify the documents by editing and formatting. <input type="checkbox"/></p>	2x1=2	Understanding
2.	<p>Choose the correct answer.</p> <p>1.is a free open source word processor.</p> <p>a. Word</p> <p>b. Writer</p> <p>c. Google Docs</p> <p>2.text is useful for marking information.</p> <p>a. Highlighting</p>	2x1=2	Analyzing

	<p>b. Formatting</p> <p>c. Selecting</p>		
4.	<p>Fill in the blanks.</p> <p>1. By default, word aligns text to the</p> <p>2.bar is situated at the bottom side of a word window.</p>	2x1=2	
3.	<p>Answer the following question.</p> <p>1. What is the use of saving a documents?</p> <p>_____</p> <p>_____</p> <p>2. What do you mean by formatting text.</p> <p>_____</p> <p>_____</p>	2x2=4	Problem Solving



ARMY PUBLIC SCHOOL GWALIOR
CLASS - III
ACADEMIC SESSION 2022-23
WORKSHEET (SELF –ASSESSMENT)

Subject: Music (Dance/Vocal)

Assignment No. : 3

Allotment Date: 15 November 2022

S.N O	Answer the following questions:	Marks	Skills
1.	Indian National flag is called? a. Tiranga b. Pachranga	1	Informative
2.	Who hoists National flag on Independence? (अ) Prime Minister of country (आ) Police	1	Informative
3.	How many spokes are there in chakra(wheel) of National flag? a. 30 b. 24	1	Informative
4.	When did India become a republic? a. 1950 b. 1947	1	Informative
5.	Which of these is a patriotic song? a. Ye desh hain veer jabano ka b. Mera joota hain japani	1	Informative
6.	How many swar are there in music? a.4 b. 7	1	Informative

7.	Which swar comes after Ga? a.Ma b. Sa	1	Informative
8.	Which riyaz do you do in sargam? a. Raag b. Swar	1	Informative
9.	Whether lay is important in music? (i) Yes (ii) No	1	Informative
10.	How many types of lay are there in music? a.3 b. 6	1	Informative