



**ARMY PUBLIC SCHOOL GWALIOR**  
**CLASS - II**  
**ACADEMIC SESSION 2022-23**  
**WORKSHEET (SELF –ASSESSMENT)**



**Subject: English**  
**Allotment Date: 15 November 2022**

**Assignment No. : 5**

S.NO.	QUESTIONS	MARKS20	NATURE
1	Match the column with their opposites.  Column A                      Column B  1. Comes                      always  2. Asleep                      goes  3. Never                      awake	(3x .5= 1.5)	Information
2	Match the column with similar meaning. (Synonyms)  Column A                      Column B  1. tiny                      to touch gently and slowly  2. stroke                      immediately  3. suddenly                      very small	(3x .5=1.5)	Understanding
3	Fill in the blanks with correct joining words given in the brackets.  1. Pia took guitar _____ played a nice tune. (but, and)  2. The park was closed, _____ I went home. (or, so)  3. The cat chased the rat _____ could not catch it. (so, but)  4. Is that a butterfly _____ a moth? (and, or)	(4x 1)=4	Critical thinking

4	<p>Write 'Yes' for the correct statement and 'No' for the false statements.</p> <p>1. Shaheen wants to live in the forest. (    )</p> <p>2. The butterfly is beautiful. (    )</p> <p>3. Shaheen says that all the animals are very good. (    )</p>	(3x1) =3	Understandi ng
5	<p><b>Answer the following questions.</b></p> <p>1. How does Tarun clean the tables?</p> <p>Ans- _____</p> <p>_____</p> <p>2. Why is the teacher happy?</p> <p>Ans. _____</p> <p>_____</p> <p>(3) Who loves to play in the shade of the mango tree?</p> <p>Ans. _____</p> <p>_____</p> <p>4. What did the bird bird tell Shaheen?</p> <p>Ans. _____</p> <p>_____</p>	4x2 =8	Critical thinking
6.	<p><b>Create an invitation letter – It's your birthday. You want to invite your friend for a party. Create an invitation letter.</b></p>	4x. 5=2	Creative thinking



**ARMY PUBLIC SCHOOL GWALIOR**  
**CLASS - II**  
**ACADEMIC SESSION 2022-23**  
**WORKSHEET (SELF -ASSESSMENT)**



Subject: Hindi

Assignment No. : 5

Allotment Date: 15 November 2022

संख्या		अंक	प्रकृति
प्र - 1	कविता की पंक्तियाँ पूरी करो-  रंग बिरंगे.....  ..... मँडराती हो ,  कली कली से.....  उनका रंग.....।	4x1=4	बोधार्थक
प्र -2	एक के अनेक लिखिए। १ . टुकड़ा .....  २. बगीचा .....  ३. घोंसला .....  ४. चिड़िया .....	4x0.5=2	सूचनापरक

<p>प्र-3</p>	<p>सही उत्तर चुनिए -</p> <p>1. मिनी ने किसको इ मेल लिखवाया -          (i) मां को (ii) चंदा को (iii) सूरज को          उत्तर-</p> <p>2. मिनी किसका इंतज़ार कर रही है?          (i) बारिश रुकने का (ii) भैया का (iii) सूरज निकलने का          उत्तर-</p> <p>3. किसके बच्चे उड़ गए?          (i) चिड़िया के (ii) बुलबुल के (iii) मैना के          उत्तर -</p>	<p>3x 1=3</p>	<p>गहन सोच और समस्या समाधान</p>
<p>प्र-4</p>	<p>निम्न शब्दों के अर्थ लिखो ।</p> <p>१. आकाश - -----</p> <p>२. युवा - -----</p> <p>३. मित्रता - -----</p> <p>४. उदास - -----</p>	<p>2x1=2</p>	<p>उच्चस्तरीय चिंतन</p>

<p>प्र-5</p>	<p>नीचे दिए गए प्रश्नों के उत्तर लिखो  </p> <p>१. सूरज दादा कहाँ छिप गए थे?</p> <p>.....</p> <p>.....</p> <p>२. तितली रंग कहाँ से लाती है?</p> <p>.....</p> <p>.....</p> <p>३. बुलबुल ने घोंसला कहाँ बनाया था?</p> <p>.....</p> <p>.....</p>	<p>3x2=6</p>	<p>विश्लेषणात्मक</p>
<p>प्र-6</p>	<p>अनुच्छेद लेखन</p> <p>मेरी प्रिय मिठाई</p> <p>1. ....</p> <p>2. ....</p> <p>.....</p> <p>3. ....</p> <p>4. ....</p> <p>5. ....</p>	<p>6x0.5=</p> <p>3</p>	<p>भाषाई कौशल</p>

	6. ....		
--	---------	--	--



**ARMY PUBLIC SCHOOL GWALIOR**  
**CLASS - II**  
**ACADEMIC SESSION 2022-23**  
**WORKSHEET (SELF -ASSESSMENT)**



**Subject: Mathematics**  
**Allotment Date: 15 November 2022**

**Assignment No. : 5**




S. NO.	QUESTIONS	MARKS	
1	Conversion of Units:  A. 7 L = _____ mL  B. 34000g = _____ kg  C. 80m = _____ cm  D. 39 kg = _____ g  E. 2400 cm = _____ m  F. 66000 mL = _____ L	20  6x0.5=3	Understanding

2.

Complete the following table :

3x1=3

Critical thinking

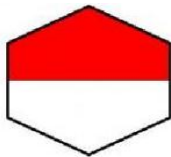
Shape	Faces	Edges	Vertices
 Sphere			
 Cube			
 Cylinder			

3

Write the fraction for the shaded area of each shape :

3x1=3

observation



\_\_\_\_\_



\_\_\_\_\_



\_\_\_\_\_



4.	Solve the following:	6X1=6	Problem solving
	<p>a. 55L 570 mL – 16L 283 mL = _____</p> <p>b. 395 kg 100g + 301 kg 413g = _____</p> <p>c. 999m 27 cm – 234m 07cm = _____</p> <p>d. 42kg 38 g + 41kg 27g = _____</p> <p>e. 93m 72cm – 72m 64cm = _____</p> <p>f. 255L 350 mL + 263 L 490 mL = _____</p>		
5	<p>Word Problems:</p> <p>1. A worker transferred 50 bags of rice weighing 38 kg 500 g each into a truck. The weight of empty truck is 1480 kg. What will be the weight of the truck with the bags? Solve-</p> <p>2. A jug 3 L and 450 mL of juice in it. How much juice is left in a jug if 2 L and 955 mL is consumed by some people ? Solve-</p>	2X2.5=5	Understanding



**ARMY PUBLIC SCHOOL GWALIOR**  
**CLASS - II**  
**ACADEMIC SESSION 2022-23**  
**WORKSHEET (SELF –ASSESSMENT)**



**Subject: EVS**  
**Allotment Date: 15 November 2022**

**Assignment No. : 5**

S.NO	QUESTIONS	MARKS20	NATURE
1.	<p>Tick the correct answer-</p> <p>1. It is the festival of lights-</p> <p>a. Holi                      b. Diwali                      c. Christmas</p> <p>2. They are the kitchen of a plant -</p> <p>a. Roots                      b. Leaves                      c. Flower</p> <p>3. _____-is not obtained from animals-</p> <p>a. Leather                      b.cotton                      c. Silk</p> <p>4. Teachers day is celebrated on-</p> <p>a. 25 Deember    b. 14 november                      C.September</p>	(4X.5)=2	Understanding
2.	<p>Name the parts of plants which perform the following functions-</p> <p>a. Has seeds inside it _____</p> <p>b. Absorb water from soil . _____</p> <p>c. Prepare food for the plants _____</p> <p>d. Produces fruits _____</p>	(4X1) = 4	Analytical skill
3.	<p>Encircle the correct option –</p> <p>1. Road transport includes <b>ship/car</b>.</p>	(4X.5) = 2	

	<p>2. <b>Tonga/Jeep</b> is pulled by a horse.  3. <b>Air/Water</b> transport is the fastest means of transport.  4. <b>Ambulance/Mail Van</b> carries patients.</p>		Information
4.	<p>Give two examples of each of the following-</p> <p>a. Fibers from plants. _____</p> <p>b. Dry fruits . _____</p> <p>c. Spices . _____</p> <p>d. things made of rubber. _____</p>	(2X2) = 4	Observation
5.	<p>Unscramble the letters to find the name of the given animals-</p> <p>a. It is the king of the jungle- N I L O _____</p> <p>b. It sings sweetly - O K U C O _____</p> <p>c. It runs fastest A E H C E T _____</p> <p>d. Largest land animal- A H L E P T N  _____</p>	(2x1)=2	Information
6.	<p>Answer the following questions-</p> <p>1. How is Gandhi Jayanti celebrated?</p> <p>Ans- .....</p> <p>.....</p> <p>2. Name some means of water transport.</p> <p>Ans –</p> <p>.....</p> <p>.....</p> <p>3. Why are leaves important for plants?</p> <p>Ans - .....</p> <p>.....</p>	(3x2)=6	Interdisciplinary



**ARMY PUBLIC SCHOOL GWALIOR**  
**CLASS - II**  
**ACADEMIC SESSION 2022-23**  
**WORKSHEET (SELF -ASSESSMENT)**



**Subject: Computer**  
**Allotment Date: 15 November 2022**

**Assignment No. : 3**

S.NO	QUESTION	MARKS	NATURE
1.	<b>Write true and False</b>  1. Ribbon displays group of related command in tab. <input type="checkbox"/>  2. The text appears slanted when we select Bold option. <input type="checkbox"/>  3. Storage is the process of saving work permanently. <input type="checkbox"/>  4. To select a word, triple click on it. <input type="checkbox"/>	4x1=4	<b>Understanding</b>
2.	<b>Choose the correct answer.</b>  1. ....program is used to type letters, words and sentence.  a. Word  b. Paint  c. Tux Paint  2. Shortcut key for saving a documents is .....  a. Ctrl+Z  b. Ctrl+R  c. Ctrl+S	2x1=2	<b>Analyzing</b>

<b>3.</b>	<b>Answer the following question.</b> 1. Why do we change font color?  _____  _____ 2. What happens if you click on bold and italic options.  _____  _____	<b>2x2=4</b>	<b>Problem Solving</b>






**ARMY PUBLIC SCHOOL GWALIOR**  
**CLASS - II**  
**ACADEMIC SESSION 2022-23**  
**WORKSHEET (SELF -ASSESSMENT)**



**Subject: General Knowledge**  
**Allotment Date: 15 November 2022**

**Assignment No. : 3**

S No.	QUESTIONS	MARKS20	NATURE
1.	<p>Read the description and name the given places.</p> <p>1. Manpreet's father is an inspector . he works in this office.This office is called-</p> <p>_____</p> <p>2. Ananya's uncle has come here to buy some envelops and stamps. This is a-</p> <p>_____</p> <p>3. Rehana's mother is waiting for a bus here .This place is called-</p> <p>_____</p> <p>4. Ria's elder brother always come here to read different types of books.This is a-</p> <p>_____</p> <p>5. Kavya is going to her village. She is waiting for a trainhere.This place is called-</p> <p>_____</p>	5x1=5	Understanding

2	<p>Match the following animals with their home-</p> <table border="0"> <tr> <td>1. Bird</td> <td>burrow</td> </tr> <tr> <td>2. Lion</td> <td>stable</td> </tr> <tr> <td>3. Dog</td> <td>nest</td> </tr> <tr> <td>4. Bear</td> <td>hole</td> </tr> <tr> <td>5. Horse</td> <td>Cave</td> </tr> <tr> <td>6. Sheep</td> <td>Den</td> </tr> <tr> <td>7. Rabbit</td> <td>pen</td> </tr> <tr> <td>8. Snake</td> <td>kennel</td> </tr> </table>	1. Bird	burrow	2. Lion	stable	3. Dog	nest	4. Bear	hole	5. Horse	Cave	6. Sheep	Den	7. Rabbit	pen	8. Snake	kennel	8x0.5=4	Thinking skill
1. Bird	burrow																		
2. Lion	stable																		
3. Dog	nest																		
4. Bear	hole																		
5. Horse	Cave																		
6. Sheep	Den																		
7. Rabbit	pen																		
8. Snake	kennel																		
3	<p>Name the following famous Indians-</p> <p>1</p>  <hr/>  <p>2.</p> <hr/>  <p>3.</p>	5x1=5	Observation																



4



5

---

Q4

Tick the correct answer –

1. Our eyes help us to -  
a) see                      b) hear
  
2. We can not see in the –  
a) Sun                      b) dark
  
3. Our \_\_\_ help us to taste.  
a) tongue                      b) nose
  
4. Our ear help us to \_  
a) Hear                      b) see
  
5. Our \_\_\_ help us to feel.  
a) Nose                      b)skin

5x1=5

interdisciplinary





**ARMY PUBLIC SCHOOL GWALIOR**  
**CLASS - II**  
**ACADEMIC SESSION 2022-23**  
**WORKSHEET (SELF -ASSESSMENT)**



**Subject: Music (Dance/Vocal)**  
**Allotment Date: 15 November 2022**

**Assignment No. : 3**

S.N O	Answer the following questions:	Marks	Skills
1.	Bhangara is the dance of which ststate? a. Punjab b. MP	1	Informative
2.	Which of the following is a 'classical' dance form? a. Hip-hop b. Kathak	1	Informative
3.	Gidda" is a popular folk dance from which state of In India? a. Hariyana b. Punjab	1	Informative
4.	Which of the following is a folk dance of Rajasthan? a. Ghumar b. Dandiya	1	Informative
5.	Dandiya' is mainly related to which state? a. Goa b. Gujarat	1	Informative
6.	What did washerman bring home in the rhyme? a. With Clothes b. With car	1	Informative
7.	Who counted the clothes of washer man in the rhyme? a. By children b. By machine	1	Informative
8.	How many times did washerman bring clothes in the rhyme? a. 6 times b. 4 times	1	Informative
9.	How many clothes did washerman bring home in the rhyme? a. 4 clothes b. 10 clothes	1	Informative
10.	How many swar in music? a. 7 b. 9	1	Informative



**ARMY PUBLIC SCHOOL GWALIOR**  
**CLASS - II**  
**ACADEMIC SESSION 2022-23**  
**WORKSHEET (SELF -ASSESSMENT)**



Subject: Art and Work Education  
Allotment Date: 15 November 2022

Assignment No. : 3

S.NO	QUESTIONS	MARKS	SKILLS/ COMPETENCIES
1.	<b>What is the shape with four equal sides?</b>  A. Rectangle B. Square C. Triangle	1	Creativity
2.	<b>Which shapes has three sides?</b> c. Heptagon d. Triangle e. Rectangle	1	Creativity
3.	<b>Which is a 3d Shape?</b> c. Cube d. Triangle e. Square	1	Creativity
4.	<b>What is the shape of a football?</b> A. Cube B. Sphere C. Cuboid	1	Creativity
5.	Violet is another name for ____.	1	Creativity

<b>6.</b>	<b>What is the shape of birthday cap?</b>  A. Cone B. Cube C. Sphere	<b>1</b>	<b>Creativity</b>
<b>7.</b>	<b>What are the Primary Colors?</b>	<b>1</b>	<b>Creativity</b>
<b>8.</b>	<b>What colours is the result of mixing red+Yellow+blue?</b> A. Violet B. Brown C. Orange	<b>1</b>	<b>Creativity</b>
<b>9.</b>	<b>A. The Color Wheel is a square. True or false?</b>	<b>1</b>	<b>Creativity</b>
<b>10.</b>	Blue,green and purple are cool colours. A. True B. False	<b>1</b>	<b>Creativity</b>