



**ARMY PUBLIC SCHOOL GWALIOR**  
**CLASS - I**  
**ACADEMIC SESSION 2022-23**  
**WORKSHEET (SELF –ASSESSMENT)**

**Subject: English**

**Assignment No. : 5**

**Allotment Date: 15 November 2022**

S.NO	QUESTIONS	MARKS	SKILLS
1.	Fill in the blanks with the correct words .Take help from the help box. (parrot, kite, plants, friends,)  a. After school, Viwan flies _____.  b. Viwan plays with his _____in the evening.  c. One day. Meena sees a _____ that is hurt.  d. The grains grow into _____.	4×1=4	Understanding
2.	Fill in the blanks with 'is', 'am', 'are'  a. You _____my friend. b. She _____ a girl. c. I _____ sleepy. d. We _____ scared. e. She _____ a nurse. f. They_____ playing. g. I _____ a girl. h. Birds _____ flying in the sky.	8×1/2 =4	Decision making
3.	Fill in the blanks with the words given in clue box. [ It, She, He] 1. We saw tiger in the zoo. _____ was really big. 2. This is Titu. _____ is my best friend. 3. Ravi is a boy. _____ is tall. 4. Parrot eats green chilli. _____ is a bird.	4×1=4	Problem solving
4.	Answer the following questions  Q1:What did Little Red Hen find in the field?  Q2:What did moon fairy gave to Meena?  Q3:Who gave the shining star to Meena?  Q4:Who gave the kite to Viwan?	4×2=8	Critical thinking








**ARMY PUBLIC SCHOOL GWALIOR**  
**CLASS - I**  
**ACADEMIC SESSION 2022-23**  
**WORKSHEET (SELF –ASSESSMENT)**

Subject: Hindi

Assignment No. : 5

Allotment Date: 15 November 2022

संख्या	प्रश्न/उत्तर	अंक	प्रकृति
प्र.1	<p style="text-align: center;">इन चित्रों में क्या काम हो रहा है</p> <div style="display: flex; justify-content: space-around;"><div style="text-align: center;"><p>गौरी----- रही है।</p></div><div style="text-align: center;"><p>संचित ----- रहा है।</p></div><div style="text-align: center;"><p>सीमा ----- रही है।</p></div><div style="text-align: center;"><p>भैया ----- रहा है।</p></div></div>	4x1=4	बोधार्थक
प्र 2	<p>एक जैसे अर्थ वाले शब्दों को मिलाओ</p> <p>बागपंछी</p> <p>घर बगीचा</p> <p>बंदर गृह</p> <p>पक्षी वानर</p>	4x.5 =2	गहन सोच
प्र-3	<p>नीचे लिखे शब्दों के अर्थ लिखो</p> <p>1. मौखिक - _____</p> <p>2. धोबी- _____</p>	4x 1=4	समस्या समाधान

	<p>3. चंचल - _____</p> <p>4. झुंड - _____</p>		
प्र-4	<p><b>सही शब्द लिखकर वाक्य पूरे करो।</b></p> <p>(रंग -बिरंगी, चंचल ,नारंगी, बंदर , )</p> <p>1. पेड़ पर बहुत से ..... बैठे थे ।</p> <p>2. संचित की पतंग ..... रंग की थी ।</p> <p>3. आसमान में..... पतंगें उड़ रही थी।</p> <p>4. छोटा बंदर बहुत ..... था ।</p>	4 x1=4	भाषाई कौशल
प्र-5	<p>चित्रों के नाम लिखो</p> <p></p> <p>_____</p> <p>_____</p>	2x1=2	विश्लेषणात्मक
प्र-6	<p><b>निम्नलिखित प्रश्नों के उत्तर दीजिए -</b></p> <p>प्रश्न . गौरी और कौशल ने किसका बीज बोया?</p> <p>उत्तर .</p> <p>प्रश्न . पानी कौन लाया?</p> <p>उत्तर .</p> <p>प्रश्न .मोर कहाँ सोता था?</p> <p>उत्तर .</p> <p>प्रश्न . छोटा बंदर कैसा था?</p> <p>उत्तर .</p>	4x1=4	



**ARMY PUBLIC SCHOOL GWALIOR**  
**CLASS - I**  
**ACADEMIC SESSION 2022-23**  
**WORKSHEET (SELF –ASSESSMENT)**



**Subject: Mathematics**

**Assignment No. : 5**

**Allotment Date: 15 November 2022**

S.NO	QUESTIONS	MARKS	SKILLS																								
1.	<p><b>Subtract the following</b></p> <table border="1" style="display: inline-table; margin-right: 20px;"><tr><td>3</td><td>6</td></tr><tr><td>-</td><td>3</td></tr><tr><td></td><td></td></tr></table> <table border="1" style="display: inline-table;"><tr><td>5</td><td>0</td></tr><tr><td>-</td><td>0</td></tr><tr><td></td><td></td></tr></table> <table border="1" style="display: inline-table; margin-right: 20px;"><tr><td>8</td><td>5</td></tr><tr><td>-</td><td>2</td></tr><tr><td></td><td></td></tr></table> <table border="1" style="display: inline-table;"><tr><td>2</td><td>8</td></tr><tr><td>-</td><td>8</td></tr><tr><td></td><td></td></tr></table>	3	6	-	3			5	0	-	0			8	5	-	2			2	8	-	8			5×1=5	Computational skills
3	6																										
-	3																										
5	0																										
-	0																										
8	5																										
-	2																										
2	8																										
-	8																										
2.	<p><b>Subtract the following numbers.</b></p> <table border="1" style="display: inline-table; margin-right: 20px;"><tr><td>9</td><td>5</td></tr><tr><td>-7</td><td>4</td></tr><tr><td></td><td></td></tr></table> <table border="1" style="display: inline-table;"><tr><td>3</td><td>9</td></tr><tr><td>-1</td><td>1</td></tr><tr><td></td><td></td></tr></table> <table border="1" style="display: inline-table; margin-right: 20px;"><tr><td>6</td><td>7</td></tr><tr><td>-1</td><td>9</td></tr><tr><td></td><td></td></tr></table> <table border="1" style="display: inline-table;"><tr><td>7</td><td>4</td></tr><tr><td>-</td><td>8</td></tr><tr><td></td><td></td></tr></table>	9	5	-7	4			3	9	-1	1			6	7	-1	9			7	4	-	8			5×1=5	Computational skills
9	5																										
-7	4																										
3	9																										
-1	1																										
6	7																										
-1	9																										
7	4																										
-	8																										

<p><b>3.</b></p>	<p><b>Fill in the boxes.</b></p> <p>1. <math>4 \times 2 =</math> <input type="text"/></p> <p>2. <math>2 \times 7 =</math> <input type="text"/></p> <p>3. <math>3 \times 8 =</math> <input type="text"/></p> <p>4. <math>3 \times 3 =</math> <input type="text"/></p> <p>5. <math>5 \times 5 =</math> <input type="text"/></p> <p>6. <math>5 \times 8 =</math> <input type="text"/></p>	<p><math>5 \times 1 = 5</math></p>	<p>Problem solving</p>
<p><b>4.</b></p>	<p>Write a division fact for the following.</p> <p>1. Divide 35 books among 5 children.        _____ <math>\div</math> _____ = _____</p> <p>2. Divide 16 apples among 4 boys.        _____ <math>\div</math> _____ = _____</p> <p>3. Divide 36 flowers among 3 girls.        _____ <math>\div</math> _____ = _____</p>	<p><math>2 \times 2.5 = 5</math></p>	<p>Critical thinking</p>



**ARMY PUBLIC SCHOOL GWALIOR**  
**CLASS - I**  
**ACADEMIC SESSION 2022-23**  
**WORKSHEET (SELF –ASSESSMENT)**

**Subject: EVS**

**Assignment No. : 5**

**Allotment Date: 15 November 2022**

S.NO	QUESTION	MARKS	SKILLS
1.	Fill in the blanks using the help box given below: (Computer room, seatbelt, bank, farmer,pilot)  a. A ..... grows crop for us. b. We should wear a ..... in the car. c. We deposit money in ..... d. We learn to operate computer in ..... e. A .....flies an aeroplane.	5×1=5	Thinking Skills
2.	Match the following  a. Story books                      a. Festival of lights b. Republic day                    b. Deliver Letters c. Furniture                        c. Library d. Diwali                              d. National festival e. Postman                          e. Carpenter	5×1=5	Cognitive skills
3.	Write 'T' for true and 'F' for false in the given blanks below.  a. We should open door for the strangers. (.....) b. Holi is our religious festival. (.....) c. A washerman washes our clothes. (.....) d. We should fight with our neighbours. (.....) e. We should not play with sharp things. (.....)	5×1=5	Critical thinking
4.	Answer the following questions  a. Who brings gift for children on Christmas ? b. Who controls the traffic ? c. What is the name of your school ? d. Name any three places in your neighbourhood. e. Why we should follow traffic rules ?	5×1=5	Language, Problem Solving













**ARMY PUBLIC SCHOOL GWALIOR**  
**CLASS - I**  
**ACADEMIC SESSION 2022-23**  
**WORKSHEET (SELF –ASSESSMENT)**

**Subject: G.K**

**Assignment No. : 3**

**Allotment Date: 15 November 2022**

S.N	QUESTIONS	MARKS	SKILLS
Q.1	Match the following  a. Rohit Sharma                      Plant b. Indigo                                India c. Soil                                      Cricket d. Triangle                              Colour e. Red fort                                Shape	5 x 1 = 5	Cognitive Skills
Q.2	Identify the pictures and write the correct answer using the given helpbox. (Winter, Chef, Hibiscus, Penguin, Rainy)  a.  _____  b.  _____  c.  _____  d.  _____  e.  _____	5 x 1 = 5	Thinking Skills

<p>Q.3</p>	<p>Write how the following animals move (Walks, Slithers, Swims, Hops, Crawls)</p> <p>a.  _____</p> <p>b.  _____</p> <p>c.  _____</p> <p>d.  _____</p> <p>e.  _____</p>	<p>5 x 1 = 5</p>	<p>Critical thinking</p>
<p>Q.4</p>	<p>Answer the following questions in one word.</p> <p>a. Which tool is used to trim nails ? Ans. ....</p> <p>b. Who is known as the 'Father of the computer ' ? Ans. ....</p> <p>c. What helps a bird to fly ? Ans. ....</p> <p>d. Who repairs our shoes and slippers ? Ans. ....</p> <p>e. Write any one thing that plants need to grow. Ans.....</p>	<p>5 x 1 = 5</p>	<p>Problem solving</p>





**ARMY PUBLIC SCHOOL GWALIOR**  
**CLASS - I**  
**ACADEMIC SESSION 2022-23**  
**WORKSHEET (SELF –ASSESSMENT)**


**Subject: Computer**

**Assignment No. : 3**

**Allotment Date: 15 November 2022**

S.NO	QUESTION	MARKS	NATURE
1.	<p><b>Write true and False</b></p> <p>1. Colors group is at the left side of the ribbon. <input type="checkbox"/></p> <p>2. Curve shape is used to draw straight lines. <input type="checkbox"/></p> <p>3. Oval shape is used to delete a drawing. <input type="checkbox"/></p> <p>4. We can type text in Paint program. <input type="checkbox"/></p>	4x1=4	Understanding
2.	<p><b>Choose the correct answer.</b></p> <p>1. ....contains different groups.</p> <p>a. Canvas</p> <p>b. Tab</p> <p>c. Ribbon</p> <p>2. ....tool is used to draw straight and slant lines.</p> <p>a. Line</p> <p>b. Circle</p> <p>c. Brush</p>	2x1=2	Analyzing

<b>3.</b>	<b>Answer the following question.</b> 1. What is the use of paint program  _____  _____  2. Which tool is used to make a shape with any number of sides.  _____  _____	<b>2x2=4</b>	<b>Problem Solving</b>
-----------	---	--------------	------------------------



**ARMY PUBLIC SCHOOL GWALIOR**  
**CLASS - I**  
**ACADEMIC SESSION 2022-23**  
**WORKSHEET (SELF –ASSESSMENT)**

**Subject: Music (Dance)**

**Assignment No. : 3**

**Allotment Date: 15 November 2022**

S.NO	Answer the following questions:	Marks	Skills
1.	How many rasa are there in music? a. 6 b. 9	1	Informative
2.	Which rasa is describe of laugh? a. Hasya rasa b. Shringaar rasa	1	Informative
3.	Hasya means anger? a. Fasle b. True	1	Informative
4.	Shringaar means? a. Love b. Hate	1	Informative
5.	Was navrasa made by Indians? a. Yes b. No	1	Informative
6.	Who is the god of sangeet ? a. Laxmi b. Saraswati	1	Informative
7.	How many parts are in Dadra tataal? a. 4 b. 2	1	Informative
8.	How many types of lay? a. 4 b. 3	1	Informative
9.	Goddess saraswati has which instrument in her hands? a. Tabla b. Veena	1	Informative

10.	How many mataras are there in Dadra taal? a. 6 b. 2	1	Informative
-----	---	---	-------------



**ARMY PUBLIC SCHOOL GWALIOR**  
**CLASS - I**  
**ACADEMIC SESSION 2022-23**  
**WORKSHEET (SELF –ASSESSMENT)**



Subject: Art and Work Education

Assignment No. : 3

Allotment Date: 15 November 2022

1.	<b>What is the shape with four equal sides?</b>  A. Rectangle B. Square C. Triangle	1	<b>Creativity</b>
2.	<b>Which shapes has three sides?</b> c. Heptagon d. Triangle e. Rectangle	1	<b>Creativity</b>
3.	<b>Which is a 3d Shape?</b> c. Cube d. Triangle e. Square	1	<b>Creativity</b>
4.	<b>What is the shape of a football?</b> A. Cube B. Sphere C. Cuboid	1	<b>Creativity</b>
5.	Violet is another name for _____.	1	<b>Creativity</b>
6.	<b>What is the shape of birthday cap?</b>  c. Cone d. Cube e. Sphere	1	<b>Creativity</b>

7.	What are the Primary Colors?	1	<b>Creativity</b>
8.	What colours is the result of mixing red+Yellow+blue? c. Violet d. Brown e. Orange	1	<b>Creativity</b>
9.	<b>A. The Color Wheel is a square. True or false?</b>	1	<b>Creativity</b>
10.	Blue,green and purple are cool colours. A. True B. False	1	<b>Creativity</b>