

ARMY PUBLIC SCHOOL GWALIOR
CLASS - V
ACADEMIC SESSION 2022-23
WORKSHEET (SELF –ASSESSMENT)

Subject: English

Assignment No. : 4

Allotment Date: 07 September 2022

Marks- 20

S. NO.	QUESTIONS	MARKS	NATURE
1	Name two things that Tom owned by the time the fence was whitewashed. How was he able to get his work done? _____ _____ _____	2	Information
2	Answer the following questions in short: (a) What are the things that we can see at night? (Poem- 'Don't be Afraid of the Dark') _____ _____ (b) What are the things that poet loved as a child? (Poem- 'A Good Play') _____ _____	2	Understanding
3	In which way does history, according to Nehru, help simple and ordinary people? _____ _____ _____ _____	2	Interdisciplinary
4	Which quality do you think is most important for holding a family together, according to the chapter, 'My Elder Brother'? _____ _____ _____ _____	2	Analytical Skill
5	Justify the following statements, giving any two reasons: (a) "Jijabai was not only a loving mother but also a very good administrator." (b) "Environmentalists want to save the Green Forest."	2	Critical Thinking and Problem Solving

6	What are the different types of : (a) Nouns (b) Pronouns (c) Adjectives	3	HOT
7	Explain the following with example: (a) Transitive verbs _____ _____ _____ (b) Intransitive verbs _____ _____ _____ (c) Direct and Indirect objects _____ _____ _____ _____ (d) Infinitives and Gerunds _____ _____ _____ _____	4	Evaluation
8	Write a 'Thank you note' to the stranger who had helped you at the railway station when you were lacking money and had no source to go back home. <p style="text-align: center;">OR</p> Write a letter to your friend asking him/her about his/her vacation time and telling him/her about the summer camp you recently attended.	3	Communication Skills



ARMY PUBLIC SCHOOL GWALIOR
CLASS - V
ACADEMIC SESSION 2022-23
WORKSHEET (SELF -ASSESSMENT)

Subject: Hindi

Assignment No. : 4

Allotment Date: 07 September 2022

Marks- 20

क्र०	प्रश्न	अंक	प्रश्नकाप्रकार
1.	<p>प्र०1. निम्नलिखित प्रश्नों के सही उत्तर लिखो</p> <p>(1) वाद्य-यंत्रों को किस-किस तरह बजाया जाता है?</p> <p>(2) शहनाई का आकार कैसा होता है?</p> <p>(3) एक सफल बल्लेबाज में क्या-क्या गुण होते हैं ?</p> <p>(4) 'टीम भावना' और 'खेल भावना' का क्या अर्थ है? विस्तार से लिखो।</p> <p>(5) चुगलखोरों ने युवक को बादशाह की नजरों से गिराने के लिए क्या किया?</p> <p>(6) बाल्याकाल में अब्राहम को किन कठिनाइयों का सामना करना पड़ा?</p> <p>(7) बादलों की गोद से निकलकर बूँद क्या सोचने लगी?</p> <p>(8) दीन दुखियों के कष्टों को कैसे दूर किया जा सकता है?</p> <p>(9) महात्मा बुद्ध ने नगर के संपन्न ने लोगों से क्या प्रश्न किया?</p> <p>(10) नगर सेठ का माथा लज्जा से क्यों झुक गया?</p>	10	बोधार्थक
2.	<p>प्र०2. निम्न शब्दों के अर्थ लिखो :</p> <p>1. व्याकुल - _____</p> <p>2. प्रतिद्वंद्वी - _____</p> <p>3. खजांची - _____</p> <p>4. विनम्र - _____</p> <p>5. प्रतिष्ठित - _____</p> <p>6. संताप - _____</p>	5	ज्ञानार्थक

	<p>7. दयानिधे- _____</p> <p>8. अनमनी - _____</p> <p>9. आश्वासन- _____</p> <p>10. शब्दशः- _____</p>		
3.	<p>प्र०3. दिए गए विशेषण शब्दों से भाववाचक संज्ञा बनाओ-</p> <p>विशेषण भाववाचक संज्ञा</p> <p>एक अच्छा नम्र शिष्ट ऊँचा कुशल</p> <p>(ii) वचन बदलो-</p> <p>सड़क - _____</p> <p>खिड़की - _____</p> <p>कठिनाई - _____</p> <p>कविता - _____</p> <p>महिला - _____</p>	6	सूचनात्मक
4.	<p>प्र०4. नीचे दिए गए शब्दों में से विलोम शब्द चुनकर लिखो-</p> <p>प्रशंसनीय ज्ञात आदर - उपस्थित- ज्ञात शक्तिशाली - उचित - उपलब्ध -</p> <p>(ii) इन संज्ञा शब्दों से विशेषण बनाकर लिखिए-</p> <p>भारत - अभिमान - प्यास - जंगल - शरीर - प्रतिभा -</p>	4	रचनात्मक

5.	<p>प्र०5. निम्नलिखित प्रश्नोंके उत्तर लिखो –</p> <p>प्र०1. संगीत हममें किन-किन गुणों का विकास करता है?</p> <p>उ०1. _____</p> <p>_____</p> <p>प्र०2. अब्राहम लिंकन के जीवन से हमें क्या प्रेरणा मिलती है ?</p> <p>उ०2. _____</p> <p>_____</p> <p>प्र०3. व्यक्ति के कौन-कौन से गुण उसे लक्ष्य तक पहुँचाते हैं? अपने विचार लिखो।</p> <p>उ०3. _____</p> <p>_____</p>	3	<p>विश्लेषणात्मक</p> <p>उच्चस्तरीयचिंतन</p>
6.	<p>प्र०6. . वाक्यांश के लिए एक शब्द लिखो-</p> <p>(1)सरकारी आय-व्यय की देखरेख करनेवाला –</p> <p>(2) भाषा को लिखने का ढंग –</p> <p>(3)खज़ाने की देखरेख करनेवाला -</p> <p>(4)जिसपर विश्वास किया जा सके –</p> <p>(5)ईमानदारी से काम करनेवाला –</p> <p>(6) परिवार से सीखी गई भाषा-</p> <p>(7) कार्यालयों में प्रयुक्त काम-काज की भाषा-</p>	7	<p>बोधात्मक</p>



ARMY PUBLIC SCHOOL GWALIOR
CLASS - V
ACADEMIC SESSION 2022-23
WORKSHEET (SELF –ASSESSMENT)

Subject: Mathematics


Assignment No. : 4

Allotment Date: 07 September 2022

Marks- 20

S. NO.	QUESTIONS	MARKS	NATURE
1	Fill in the blanks. (a) Two consecutive prime numbers whose difference is 2 is called _____ (b) Symbols in Roman numeral _____, _____ and _____ are never repeated (c) $2438 \times 309 =$ _____ (d) $CXLVI -$ _____ $= CIX$	4x0.5=2	Understanding
2	State 'True' or 'False' for following statements. (a) A factor cannot be greater than the number. (b) $CDXLIX > CDLX$ (c) When 0 is added to a given number, the sum is the number itself (d) The product of two numbers does not change when their order is changed.	4x0.5=2	Interpretation
3	Tick the correct answer from the given options: 1. The only even prime number is [a] 0 [b] 1 [c] 2 [d] 4 2. $IX + XV + XX = ?$ [a] 35 [b] 40 [c] 44 [d] 45 3. Which of the following cannot be greater than the divisor? [a] Quotient [b] Dividend [c] Remainder [d] All of these 4. The difference of a given number and 1 gives the _____ of the number. [a] predecessor [b] successor [c] same value [d] last term 5. $4000 \times 5000 =$ _____ [a] 2 lakhs [b] 20 lakhs [c] 2 crores [d] 2 millions 6. The number of zeroes in 100 million are	6x1=6	logical thinking

	[a] 7 [b] 8 [c] 9 [d] 10		
4	<p>Solve the following questions: -</p> <p>Solve the following:</p> <p>(i) Find the smallest number that is divisible by each of 9, 12 and 15 .</p> <p>(ii) Estimate the product of 389 x 888 by rounding off the 1st number down and second number up to the hundreds</p> <p>(iii) Find the dividend when Divisor = 429, Quotient = 5237, Remainder = 248?</p> <p>(iv) Find the LCM of 112, 140, 168 by prime factorisation method.</p> <p>(v) Divide the sum of 3427825 and 634891 by 373</p> <p>(vi) The rent of a house is ₹1,20,000 for a year. What will be the rent for 7 months?</p> <p>(vii) Subtract the face value of 6 from its place value in the numeral 46,732</p>	7x2=14	Interdisciplinary
5	<p>Solve the following questions:</p> <p>(i) Find the least number of stones so that heaps of 15, 20 and 30 stones can be made.</p> <p>(ii) Find the largest number which divides 209 and 260 leaving remainder 5 in each case.</p> <p>(iii) From the greatest 7-digit number, subtract the greatest and smallest number formed by using the digits 5, 8, 7, 3, 0, 1 (without repeating)</p> <p>(iv) A stadium has a capacity of 64070 person. How many person should be seated in 1 row if there are 86 rows?</p> <p>(v) Sampada like to celebrate her 10th birthday in an old age home. Her grandfather wants to spend ₹ 91,750 for warm clothes and food items. Her father also wants to donate ₹ 2,15,756 for the repair of the building. Each of them decide to write a cheque. Write the number name of the amount which they will fill in the cheque also mention the value depicted by her father and grandfather.</p> <p>(vi) 782 people donate ₹34,06,392 in a month for CRY foundation. How much money will 987 people donate in a month, assuming all of them donate in equal amounts? what value is depicted by the people?</p>	6x3 =18	Value Based Problem Solving



ARMY PUBLIC SCHOOL GWALIOR
CLASS - V
ACADEMIC SESSION 2022-23
WORKSHEET (SELF –ASSESSMENT)

Subject: EVS


Assignment No. : 4

Allotment Date: 07 September 2022

Marks- 20

S. NO.	QUESTIONS	MARKS	NATURE
Q1	Answer the following questions. i. Give any two examples of nocturnal animal. ii. What is echo?	1x2=2	Information
Q2	i. What do you understand by the term 'Pollination'? ii. What is displacement?	2X2=4	Understanding
Q3	i. Butterflies are very important part of the nature? ii. Why do snakes keep flickering their forked tongue?	2x2=4	HOT
Q4	i. What are Differently abled people? ii. Give any two differences between games and sports.	2x3=6	Interdisciplinary

	iii. What is Division of Labour?		
Q5	i. Differentiate between Dicots and Monocots?	3x3=9	Analytical Skill
	ii. Why does the government provide compensation?		Critical Thinking and Problem Solving
	iii. Distinguish between the sensory and motor nerves.		Evaluation
Q 6.	Discuss about the sleeping pattern of animals.	5x1=5	Communication Skills



ARMY PUBLIC SCHOOL GWALIOR
CLASS - V
ACADEMIC SESSION 2022-23
WORKSHEET (SELF –ASSESSMENT)

Subject: Computer

Assignment No. : 2

Allotment Date: 07 September 2022

Marks- 10

S. No.	Questions	Marks	Nature
1	Tick The Correct Answer	5x 1/2=2.5	Information
	A) The second generation computers used		
	a) transistors b) vacuum tube c) IC		
	B) The first calculating device was		
	a) Napier's bones b) Abacus c) Pascaline		
C) Deleted file goes into			
a) Music folder b) Recycle bin c) desktop			
D) The document we created is called a			
a) folder b) file c) text			
E) produces a personalized letter for more than one person.			
a) Maile Merge b) AutoCorrect c) AutoFormat			

2	<p>Fill in the blanks</p> <p>a) was invented by Blaise Pascal in 1642.</p> <p>b) invented Difference Engine and Analytical Engine.</p> <p>c) A computer represents files and folders with</p> <p>d) We can press keys to select all the files of a folder.</p> <p>e) To start Mail Merge, click on tab.</p>	5 x 1/2=2.5	Understanding
3	<p>Answer the following questions</p> <p>i) What is the use of Recycle Bin?</p> <p>ii) What is the main goal of fifth generation of computers?</p>	2 x 2.5 =5	HOT



ARMY PUBLIC SCHOOL GWALIOR
CLASS - V
ACADEMIC SESSION 2022-23
WORKSHEET (SELF –ASSESSMENT)




Subject: G.K

Assignment No. : 2

Allotment Date: 07 September 2022

Marks- 10

SNO		MARKS	NATURE
1.	<p>Fill in the blank.</p> <p>(a) The _____ industry in India is the second biggest agro-based industry. Uttar Pradesh has the largest number of this industry.</p> <p>(b) _____ is the major cash crop of India and accounts for 65% of the fibre used in the domestic textile industry.</p> <p>(c) An _____ of frog. (fill the collective noun used for groups of frog).</p> <p>(d) This movie is about the life of a professional badminton player who once ranked number one in sports _____</p>	4X1=4	Understanding

<p>2.</p>	<p>True or False</p> <p>(a) Pattachitra painting that originated in Odisha, this style of painting is done on cloth. The pictures are based on Hindu mythology.</p> <p>(b) Loss of sense of taste is a symptom of coronavirus disease.</p> <p>(c) Water poppy is a underwater plant which has rounded leaves and beautiful flowers float on water surface. It is a fresh water plant found in most part of the world.</p> <p>(d) Textile industry is not a agro-based industry</p> <p>.....</p>	<p>3x1=3</p>	<p>Analytical Skill</p>
<p>3.</p>	<p>Identify the following pictures</p> <div style="display: flex; justify-content: space-around; align-items: flex-start;"> <div style="text-align: center;">  <p>(a) _____</p> </div> <div style="text-align: center;">  <p>(b) _____</p> </div> <div style="text-align: center;">  <p>(c) _____</p> </div> </div>	<p>3x1=3</p>	