

ARMY PUBLIC SCHOOL GWALIOR
CLASS - II
ACADEMIC SESSION 2022-23
WORKSHEET (SELF -ASSESSMENT)



Subject: English

Assignment No. : 4


Allotment Date: 07 September 2022

Marks- 20

S.NO.	QUESTIONS	MARKS20	NATURE
1	Match the column with their opposites. Column A Column B 1. Love Noisily 2. Quietly False 3. True Hate	(3x .5= 1.5)	Information
2	Match the column with similar meaning. (Synonyms) Column A Column B 1. Happy Small 2. Nice Joyful 3. Little Good	(3x .5=1.5)	Understanding
3	Fill in the blanks with correct pronouns- 1. Ram is a good boy. ____ is my best friend. 2. Varun and Sohanare friends. _____ play football together. 3. Dog is a pet animal ____ is faithful	(4x 1)=4	Critical thinking

	<p>animal.</p> <p>4. Siya works hard. _____ is very intelligent.</p>		
4	<p>Put tick (√) and cross(x) against the statements that make a happy home and unhappy home.</p> <p>1. We say good night to every one in the family before going to bed. <input type="checkbox"/></p> <p>2. We fight with our brothers and sisters over small thing. <input type="checkbox"/></p> <p>3. We obey our parents. <input type="checkbox"/></p>	(3x1) =3	Understanding
5	<p>Answer the following questions.</p> <p>1. What has happened to the dog?</p> <p>Ans- _____</p> <p>_____</p> <p>2. Why does Abir thank Ruhan?</p> <p>Ans. _____</p> <p>_____</p> <p>(3) What is the name of Tia's school?</p> <p>_____</p> <p>_____</p>	4x2=8	Critical thinking

	<p>4. Who does Dad quietly work for?</p> <hr/> <hr/> <hr/>		
<p>6.</p>	<p>Creative writing My pet</p> <p>1. _____</p> <p>_____</p> <p>_____</p> <p>2. _____</p> <p>_____</p> <p>_____</p> <p>3. _____</p> <p>_____</p> <p>_____</p> <p>4. _____</p> <p>_____</p> <p>_____</p>	<p>4x.5=2</p>	<p>Creative thinking</p>



ARMY PUBLIC SCHOOL GWALIOR
CLASS - II
ACADEMIC SESSION 2022-23
WORKSHEET (SELF -ASSESSMENT)



Subject: Hindi

Assignment No. : 4

Allotment Date: 07 September 2022

Marks- 20

संख्या	प्रश्नोत्तर	अंक	प्रकृति
प्र - 1	किसने कहा ? १. हम इतने दिनों से पिटारी में ही बैठे हैं। २. हमारे ऊपर तो धूल जम गई है। ३. मेरी गोटियाँ भी मुझसे बिछुड़ गई हैं।	3x1=3	बोधात्मक
प्र - 2	वाक्यपूरेकरो- १. नमक बहुत----- दाम में बिक रहा था। २. बोझ कम हो जाने से गटरू---- हुआ। ३. ----तो बोझ से झुका जा रहा हूँ।	3x1=3	सूचनापरक
प्र-3	एक के अनेक लिखिए। पेंसिल..... झूला..... किताब बच्चा.....	4x 0.5=2	गहन सोच और समस्या समाधान

<p>प्र-4</p>	<p>मित्रों के साथ भाग-दौड़ कर खेलने से क्या फायदे होते हैं ?</p> <p>.....</p> <p>...</p> <p>.....</p> <p>...</p> <p>.....</p> <p>.....</p> <p>.....</p> <p>.....</p>	<p>2x1=2</p>	<p>उच्चस्तरीय चिंतन</p>
<p>प्र-5</p>	<p>नीचे दिए गए प्रश्नों के उत्तर लिखो </p> <p>१. साँवरी का मनपसंद खाना क्या था ?</p> <p>.....</p> <p>.....</p> <p>२. इब्नबतूता नाक और कान क्यों मल रहे थे ?</p> <p>.....</p> <p>.....</p> <p>३. व्यापारी ने बाजार से नमक क्यों खरीदा?</p> <p>.....</p> <p>.....</p>	<p>3x2=6</p>	<p>विश्लेशणात्मक</p>

7..	<p>अनुच्छेद लेखन मेरा बस्ता</p> <p>.....</p> <p>.....</p> <p>.....</p> <p>.....</p> <p>.....</p>	4x1=4	बोधात्मक
-----	--	-------	----------



ARMY PUBLIC SCHOOL GWALIOR
CLASS - II
ACADEMIC SESSION 2022-23
WORKSHEET (SELF -ASSESSMENT)



Subject: Mathematics
Allotment Date: 07 September 2022

Assignment No. : 4

Marks- 20

S. NO.	QUESTIONS	MARKS	NATURE
		20	
1	Fill in the blanks:- 1. is a sign of addition. 2. When we add zero to any number, the sum is the number 3. Subtraction means	4x1=4	Critical thinking
2	Add the following- (a) $\begin{array}{r} \text{T O} \\ 56 \\ +9 \\ \hline \end{array}$ (b) $\begin{array}{r} \text{T O} \\ 40 \\ +76 \\ \hline \end{array}$	0.5x2=1	Understanding
3	Word Problems 1. Pratibha read 64 pages of a novel on Saturday and 35 pages on Sunday. How many pages in all did she read in these 2 days? Solution-	2x2.5= 5	Problem solving

	<p>ii. Rahul scored 344 runs in a match while Ram scored 576 runs. Find the total runs scored by them. Solution-</p>														
4.	<p>Match the column</p> <table style="width: 100%; border: none;"> <thead> <tr> <th style="text-align: center;">A</th> <th style="text-align: center;">B</th> </tr> </thead> <tbody> <tr> <td>(i) $273 + 727$</td> <td>40</td> </tr> <tr> <td>(ii) $938 - 838$</td> <td>1000</td> </tr> <tr> <td>(iii) 5×8</td> <td>100</td> </tr> <tr> <td>(iv) $28 \div 4$</td> <td>36</td> </tr> <tr> <td>(v) 9×4</td> <td>7</td> </tr> </tbody> </table>	A	B	(i) $273 + 727$	40	(ii) $938 - 838$	1000	(iii) 5×8	100	(iv) $28 \div 4$	36	(v) 9×4	7	5X1=5	Observation
A	B														
(i) $273 + 727$	40														
(ii) $938 - 838$	1000														
(iii) 5×8	100														
(iv) $28 \div 4$	36														
(v) 9×4	7														
5.	<p>Fill in the blanks</p> <p>(i) $__ \times 4 = 4$</p> <p>(ii) $36 \div 4 = ____$</p> <p>(iii) $348 + 856 = ______$</p> <p>(iv) $7 \times 1 = ____$</p> <p>(v) divisor \times $______ =$ dividend</p>	5X1=5	Understanding												



**ARMY PUBLIC SCHOOL GWALIOR
CLASS - II
ACADEMIC SESSION 2022-23
WORKSHEET (SELF -ASSESSMENT)**



Subject: EVS

Assignment No. : 4


Allotment Date: 07 September 2022

Marks- 20

S.NO.	QUESTIONS	MARKS20	NATURE
1	Answer the following. 1.Why should we share household work in our family? 2.What is balance diet? 3.What is a family? 4.Why do we need a house?	(5X1)=5	Interdisciplinary

	<p>.....</p> <p>5.What is first aid??</p> <p>.....</p> <p>.....</p> <p>.....</p>		
2	<p>Tick the correct answer-</p> <p>1. We eat this meal in the afternoon.</p> <p>a. Breakfast b. Lunch c. Dinner d. Supper</p> <p>2. It is not a sense organ.</p> <p>a) Eyes b)Heart c) Nose</p> <p>3. A tent is made of.....</p> <p>a) Canvas b) Bricks c) Straw</p> <p>4.It gives us leather</p> <p>a. Camel b. Buffalo c. Crocodile d. All of these</p>	(4X.5)=2	Understanding
3	<p>Give two examples of --</p> <p>A Protective food 1. _____</p> <p>2. _____</p> <p>b. Woollen clothes 1. _____ 2. _____</p> <p>c.Junk food 1. _____ 2. _____</p> <p>d.Silk clothes 1. _____ 2. _____</p>	(4X1) = 4	Analytical skill
4.	<p>Write true or false:</p> <p>1. We get silk from silk plant. ()</p> <p>2. We keep our surroundings clean and green. ()</p>	(4X1) = 4	Information

	<p>3. We must follow the traffic rules on the road. ()</p> <p>4. We should not play with sharp objects.()</p>		
6.	<p>Fill in the blanks:</p> <p>(i) _____ clothes are light and cool.</p> <p>(ii) We eat _____ in the afternoon.</p> <p>(iii) People who live in igloos are called _____.</p> <p>(iv) We should not touch the electrical appliances with _____ hands.</p>	(3X1) = 3	Observation
7.	<p>What are uniforms? Name some people who wear uniform?</p>	(2x1)=2	Information



ARMY PUBLIC SCHOOL GWALIOR
CLASS - II
ACADEMIC SESSION 2022-23
WORKSHEET (SELF -ASSESSMENT)





Subject: G.K
Allotment Date: 07 September 2022
Marks- 10

Assignment No. : 2

S No.	QUESTIONS	MARKS 20	NATURE
1.	Name the famous monuments and landmark with given clues A. Which is the largest planet in our solar system _____ B. You can buy medicines from this store. It is a _____ shop. C. Elsa is a _____. D. Golghar is located at _____ E. _____ is called the festival of lights. F. _____ is an indoor game.	6x1=6	Understanding
2	Match the following Column 'A' (i) Cricket (ii) China (iii) Kangaroo (iv) Kerala (v) Onam Column 'B' a) Harvest festival b) Pitch c)Hyderabad d) COVID 19 e) Joey	8x0.5=4	Thinking skill

	(vi) Charminar (vii) Deadly virus (viii) Ring	f) Boxing g) Beijing h) Uttapam		
--	---	---------------------------------------	--	--

3	<p>Look at the pictures and name the indoor games</p> <p>1</p>  <hr/> <p>2</p>  <hr/>	5x1=5	Observation
---	--	-------	-------------

3



4



5



4

Identify and name the famous cartoon character

5X1 =5

Interdisciplinary

1



2



3



4



5





ARMY PUBLIC SCHOOL GWALIOR
CLASS - II
ACADEMIC SESSION 2022-23
WORKSHEET (SELF –ASSESSMENT)



Subject: Computer
Allotment Date: 07 September 2022
Marks- 10

Assignment No. : 2

S.NO	QUESTION	MARKS	
1.	<p>Write True or False</p> <p>1. Laptops are very big in size. <input type="checkbox"/></p> <p>2. A mouse is also known as pointing device. <input type="checkbox"/></p> <p>3. Computers can do only one type of work. <input type="checkbox"/></p> <p>4. Magic tool is used to add special effects in the drawing. <input type="checkbox"/></p>	4x1=4	Understanding
2.	<p>Choose the correct answer.</p> <p>1.is designed to be placed conveniently on our lap</p> <p>a. Desktop</p> <p>b. Laptop</p> <p>c. Tablet PC</p> <p>2.is the main storage device in a computer.</p>	4x0.5=2	Analyzing

- a. Hard disk
- b. DVD
- c. Pen drive

3. A.....is used to play games on a computer.

- a. Scanner
- b. Printer
- c. Joystick

4.tool is used to add text and numbers.

- a. Clock
- b. CPU meter
- c. Game

