



**ARMY PUBLIC SCHOOL GWALIOR**  
**CLASS - VI**  
**ACADEMIC SESSION 2022-23**  
**WORKSHEET (SELF –ASSESSMENT)**



**Subject: English**

**Assignment No. : 3**

**Allotment Date: 17 August 2022**

| S. NO. | QUESTIONS  | MARKS | NATURE                                |
|--------|--|-------|---------------------------------------|
| 1      | Define articles. Explain the kinds of articles.  | 4     | Information                           |
| 2      | <b>Read the following extract and answer the questions given below:</b><br>Beauty is in yourself.<br>Good deeds, happy thoughts<br>That repeat themselves<br>In your dreams,<br>In your work,<br>And even in your rest.<br><b>Questions:</b><br>1. Write the meaning of word “deeds.”<br>2. Name the poet.<br>3. Where the beauty does exists? | 3x1=3 | Understanding                         |
| 3      | <b>Do you have a ‘dream’, or something you very much wish to do?</b> Explain in about 100 words.   | 4     | HOT                                   |
| 4      | <b>Grammar</b><br><b>Fill in the blanks with correct form of verbs given in the bracket.</b><br>1. One of the thieves _____ been caught. (has).<br>2. Ram and Shyam _____ playing chess. (be)<br>3. Mahi as well as her teachers _____ very much concerned. (be)   | 3x1=3 | Interdisciplinary                     |
| 5      | <b>Fill in the blanks with words from the brackets.</b><br>1. That plug is faulty. You _____ not touch it. (must/could)<br>2. _____ I request you to show me this file? (May/ Should)<br>3. You _____ obey the rules. (must / ought to)  | 3x1=3 | Analytical Skill                      |
| 6      | <b>Answer the following questions in about 20-30 words.</b><br>1. When did “the unfriendly face ” of the visitor turn truly friendly?<br><br>2. Who visited the shepherd one day, and why?   | 2x2=4 | Critical Thinking and Problem Solving |

|          |  |       |                      |
|----------|--|-------|----------------------|
| <b>7</b> | <b>Answer the following questions in about 20-30 words.</b><br>1. Why do you think the writer visited Miss Beam's school?<br>2. Why does the poet want to know where the teachers go at four o'clock in the poem named 'Where Do All the Teachers Go '?<br>3. What does Kalpana Chawla say about pursuing a dream? | 3x2=6 | Evaluation           |
| <b>8</b> | Write a short paragraph on " The path from dreams to success does exist." Word Limit – 40-50 words.  | 3     | Communication Skills |



ARMY PUBLIC SCHOOL GWALIOR  
CLASS - VI  
ACADEMIC SESSION 2022-23  
WORKSHEET (SELF -ASSESSMENT)




Subject: Hindi

Assignment No. : 3

Allotment Date: 17 August 2022

| क्रमसंख्या | प्रश्न  | अंक   | प्रकृति       |
|------------|---|-------|---------------|
| 1          | कहानी के अनुसार मंगल ग्रह पर कभी आमजन-जीवन था। वह सब नष्ट कैसे हो गया? इसे लिखो-  | 5     | INFORMATIVE   |
| 2          | ‘सागर ने रस्ता छोड़ा, परबत ने सीस झुकाया’-साहिर ने ऐसा क्यों कहा है? लिखो।  | 1x4=4 | UNDERSTANDING |
| 3          | अनेक शब्दों के लिए एक शब्द लिखो।<br><br>(i) जिसका जन्म पहले हुआ हो _____<br><br>(ii) जिसका मूल्य न हो _____<br><br>(iii) जो अर्थशास्त्र का विद्वान हो _____<br><br>(iv) कम अक्ल वाला _____<br><br>(v) जो परीक्षा में पास हो _____ | 5     | HOT           |

|    |  |       |  |
|----|--|-------|--|
| 4  | <p>प्रश्न - निम्नलिखित शब्दों के समरूपी भिन्नार्थक रूप लिखे -</p> <p>(i) अनल , अनिल _____</p> <p>(ii) अलि, अली _____</p> <p>(iii) अंबा अंबु _____</p> <p>(iv) परिणाम , परिमाण _____</p> <p>(v) अपकार ,उपकार _____</p>                | 5     | INTERDISCIPLINARY  |
| 5. | कहानी में अंतरिक्ष यान को किसने भेजा था और क्यों?  | 5     | <p>CRITICAL</p> <p>THINKING AND</p> <p>PROBLEM SOLVING</p> |
| 6  | <p>निम्नलिखित प्रश्नों के उत्तर दीजिए -</p> <p>(i) गीत में सीने और बाँहों को फ़ौलादी क्यों कहा गया है?</p> <p>(ii) छोटू का परिवार कहाँ रहता था?</p> <p>(ii) छोटू को सुरंग में जाने की इजाज़त क्यों नहीं थी? पाठ के आधार पर लिखो।</p> | 3x2=6 | EVALUATION   |



**ARMY PUBLIC SCHOOL GWALIOR**  
**CLASS -VI**  
**ACADEMIC SESSION 2022-23**  
**WORKSHEET (SELF-ASSESSMENT)**

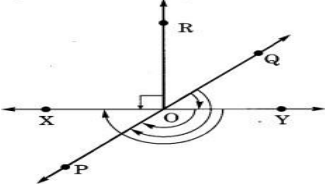


**Subject: Mathematics**

**Assignment No. : 3**

**Allotment Date: 17 August 2022**

| S. NO. | QUESTIONS  | MARKS | NATURE            |
|--------|--|-------|-------------------|
| 1      | What is the successor of $-7$ ?  | 1     | Understanding     |
| 2      | What is complete angle?  | 1     | Informative       |
| 3      | What is the measure of straight angle?   | 1     | Understanding     |
| 4      | Find the number of right angle turned through by the hour hand of a clock when it goes from 3 to 6.  | 1     | Application       |
| 5      | How many faces does a triangular trapezium have?   | 1     | Understanding     |
| 6      | Write the opposite of 50 km towards north?   | 1     | Reasoning         |
| 7      | Using the number line write the integer which is: 1 more than 2.   | 1     | Analytical skills |
| 8      | A quadrilateral having a pair of unequal opposite sides is called _____.   | 1     | Informative       |
| 9      | Represent the following on number line:<br>a) $-5$<br>b) $4$   | 1     | Informative       |
| 10     | What is the additive identity of $-20$ ?   | 1     | Understanding     |
| 11     | Draw the rough sketch of the following:<br>(a) Acute angle<br>(b) Reflex angle   | 2     | Problem solving   |
| 12     | Write all the integers between the following pair of integers:<br>(a) 0 and $-4$<br>(b) $-5$ and 5   | 2     | Evaluation        |
| 13     | State True or False:<br>(a) The opposite sides of a trapezium are parallel.<br>(b) All the sides of a parallelogram are of equal in length.<br>(c) The sum of two negative integers is a positive integer<br>(d) The lowest whole number is 0. | 2     | Evaluation        |
| 14     | Find the sum of the following integers:<br>(a) $(-8) + (+5) + (-3) + (-2)$<br>(b) $(-7) + (-9) + (+4) + (+3)$  | 2     | Problem solving   |

|    |   |   |                 |
|----|---|---|-----------------|
| 15 | All equilateral triangle are isosceles, but all isosceles triangle are not equilateral. Justify the statement.  | 2 | Problem solving |
| 16 | Ramesh thinks of an integer. He subtracts 12 from it and gets the result as $-6$ . What was the integer he thought of?  | 3 | Application     |
| 17 | In the given figure, name the following angles as acute, obtuse, right, straight or reflex.<br>  | 3 | Application     |
| 18 | Fill in the blanks:<br>a) A quadrilateral having both pairs of opposite sides parallel, is called a _____.<br>(b) A parallelogram whose each angle is a right angle is called a _____.<br>(c) The negative of a negative integer is a _____ integer.<br>(d) An integer when added to its opposite gives _____ as the sum. | 4 | HOTS            |



**ARMY PUBLIC SCHOOL GWALIOR**  
**CLASS - VI**  
**ACADEMIC SESSION 2022-23**  
**WORKSHEET (SELF –ASSESSMENT)**



**Subject: Science**

**Assignment No. : 3**

**Allotment Date: 17 August 2022**

| S.NO | QUESTIONS  | MARKS | SKILLS/COMPETENCIES |
|------|--|-------|---------------------|
| 1.   | i) Explain the process of photosynthesis.<br>ii) Define fibre and its types.   | 4     | Understanding       |
| 2.   | Explain the process of making fabric from fibres.  | 5     | Communication       |
| 3.   | i) Name the tiny openings on the surface of the leaf.<br>ii) Why did Gandhiji use to operate charkha for spinning?   | 3     | Interdisciplinary   |
| 4.   | i) Differentiate herb, shrub and tree with examples.<br>ii) How will you separate sand and water from their mixture?   | 5     | Evaluation          |
| 5.   | i) Name the part of the plant which produces its food. Name this process.<br>ii) What is root? List the main functions of root.<br>iii) Define the following terms:<br>a) solution<br>b) evaporation | 7     | Analytical thinking |
| 6.   | i) Classify the following fibres as natural or synthetic<br>Nylon, wool, cotton, silk, polyester, jute<br>ii) Write the names of the parts of a flower in sequence, from outside to inside.          | 6     | Inference           |



**ARMY PUBLIC SCHOOL GWALIOR**  
**CLASS - VI**  
**ACADEMIC SESSION 2022-23**  
**WORKSHEET (SELF –ASSESSMENT)**




**Subject: Social Science**  
**Allotment Date: 17 August 2022**

**Assignment No. : 3**

| S.NO. | QUESTIONS  | MARKS | NATURE            |
|-------|--|-------|-------------------|
| 1.    | What is a map?   | 1     | Understanding     |
| 2.    | The Ghoda is a tributary of the _____<br>River.  | 1     | Information       |
| 3.    | In a _____ the country's citizens are<br>allowed to elect whomever they want.            | 1     | Information       |
| 4.    | _____ maps provide more information.   | 1     | Information       |
| 5.    | Who were 'Dasas'?  | 1     | Understanding     |
| 6.    | True/ False:<br><br>Political maps show natural features of the earth.<br>( )            | 1     | Information       |
| 7.    | What is Government?  | 1     | Understanding     |
| 8.    | The impression of the seal is known as a<br>_____.                                       | 1     | Information       |
| 9.    | Do you think it is important for people to be<br>involved in decisions that affect them? | 3     | Critical Thinking |



|     |   |   |                              |
|-----|---|---|------------------------------|
| 10. | What was the citadel?   | 3 | HOTS                         |
| 11. | How do archaeologists know that cloth was used in the Harappan civilization?  | 5 | HOTS                         |
| 12. | What are cardinal points and intermediate directions?   | 3 | Understanding                |
| 13. | What does the government do for the welfare of its citizens?  | 5 | Understanding                |
| 14. | On an outline political map of India locate and mark the following:-<br>(a) Mohenjodaro<br>(b) Kalibangan<br>(c) Lothal | 3 | Identification and location. |



**ARMY PUBLIC SCHOOL GWALIOR**  
**CLASS - VI**  
**ACADEMIC SESSION 2022-23**  
**WORKSHEET (SELF –ASSESSMENT)**




**Subject: Sanskrit**

**Assignment No. : 3**

**Allotment Date: 17 August 2022**

| S.NO | QUESTIONS   | MARKS | SKILLS/COMPETENCIES |
|------|---|-------|---------------------|
| 1.   | शब्दनाम् अर्थानलिखत-<br>नौकाभिः, अतीव, दीर्घतमः, तस्मात्, भवेत्   | 5     | Information         |
| 2.   | भिन्नप्रकृतिकं पदं चिनुत-<br>(क) गङ्गा, लता, यमुना, नर्मदा।<br>(ख) उद्यानम्, कुसुमम्, फलम्, चित्रम्।<br>(ग) लेखनी, तूलिका, चटका, पाठशाला।<br>(घ) आम्रम्, कदलीफलम्, मोदकम् नारडम्।   | 4     | Analytical skill    |
| 3.   | तृतीयाविभक्तिप्रयोगेण रिक्तस्थानानि पूरयत-<br>(क) व्योम ..... सह गच्छति। (मित्र)<br>(ख) बालकः ..... सह पठन्ति। (बालिका)<br>(ग) तडागः ..... विभाति। (कमल)<br>(घ) अहमपि ..... खेलामि। (कन्दुक)<br>(ङ) अश्वाः ..... सह धावन्ति। (अश्व)<br>(च) मृगाः ..... सह चरन्ति। (मृग) | 6     | Understanding       |
| 4.   | यथायोग्यं योजयत-<br>समुद्रतटः            ज्ञानाय<br>क्रीडनकम्            पोषणाय<br>दुग्धम्                प्रकाशाय<br>दीपकः                पर्यटनाय<br>विद्या                 खेलनाय  | 5     | Thinking skill      |
| 5.   | निम्नधातूनां लट्लकारस्य प्रथमपुरुष-एकवचन-रूपाणि लिखत-<br>यथा- हस् - हसति<br>वद् - .....<br>गम् - .....<br>लिख् - .....<br>पठ् - .....<br>खेल - .....  | 5     | Critical thinking   |
| 6.   | विलोमपदानि योजयत-<br>क                        ख<br>सार्थकः                आगच्छति<br>कृष्णः                श्वेतः   | 5     | Memory sill         |

|  |                                |                                |  |  |
|--|--------------------------------|--------------------------------|--|--|
|  | अनुक्तम्<br>गच्छति<br>जागृतस्य | सुप्तस्य<br>उक्तम्<br>निरर्थकः |  |  |
|--|--------------------------------|--------------------------------|--|--|



**ARMY PUBLIC SCHOOL GWALIOR**  
**CLASS - VI**  
**ACADEMIC SESSION 2022-23**  
**WORKSHEET (SELF –ASSESSMENT)**




**Subject: General Knowledge**  
**Allotment Date: 17 August 2022**

**Assignment No. : 1**

| S NO. | QUESTIONS   | MARKS | NATURE        |
|-------|---|-------|---------------|
| 1.    | Disney's version follows the story of _____, a young girl with a cruel stepmother and a flurry of adorable forest friends.  | 1     | Informative   |
| 2.    | _____ is an award-winning story about a clever little mouse outwitting the creatures of the deep dark wood.   | 1     | Informative   |
| 3.    | Name the musical instrument. It is made of a trapezoidal wooden box having thirty bridges arranged in fifteen rows, two in each row and a set of four strings of metal which are stretched over each pair of bridges. | 1     | Evaluation    |
| 4.    | The movie _____ is about a farmer and ex-NASA pilot., Joseph Cooper, who is tasked to pilot a spacecraft, along with a team of researchers to find a planet for human beings when the Earth becomes uninhabitable.    | 1     | Understanding |
| 5.    | _____ is a sport of underwater diving in water-filled caves. It is an extreme sport of exploring flooded caves, or doing a scientific research.   | 1     | Informative   |
| 6.    | Name the movie. It is a 2018 American biographical drama film based on the life of Neil Armstrong.  | 1     | Evaluation    |
| 7.    | Name the sport. This sport involves moving through water in a small vessel with the aid of a double-bladed paddle.  | 1     | Evaluation    |
| 8.    | Michael Phelps is also known as _____, who was the most-decorated athlete in Olympic history with 28 medals, which included a record 23 gold.   | 1     | Understanding |
| 9.    | What is the another name of Usain Bolt?   | 1     | Informative   |
| 10.   | Which is the traditional dress of men in Bhutan?  | 1     | Evaluation    |
| 11.   | Name the traditional dress. It is a knee-length short dress with pleats at the back. It is worn by men in Scotland.   | 1     | Evaluation    |





**ARMY PUBLIC SCHOOL GWALIOR**  
**CLASS -VI**  
**ACADEMIC SESSION 2022-23**  
**WORKSHEET (SELF-ASSESSMENT)**




**Subject: Computer**

**Assignment No. : 1**

**Allotment Date: 17 August 2022**

| S. NO. | QUESTIONS   | MARKS | NATURE            |
|--------|---|-------|-------------------|
| 1      | <p>Tick the correct answer:</p> <p>i) The collection of rows and columns is called.....</p> <p>a. workbook b. worksheet c. document.</p> <p>ii) The number of columns in a single worksheet is.....:</p> <p>a. 16384 b. 16385 c. 16358</p> <p>iii) We can also select a cell in a worksheet using the .....keys.</p> <p>a. Ctrl b. Alt c. Arrow</p> <p>iv) We can make a worksheet look more attractive and legible by.....</p> <p>a. editing b. formatting c. correcting</p> <p>v) The ..... formatting is used to format the data according to specified condition.</p> <p>a. mixed b. conditional c. reference</p> | 1x5=5 | Critical Thinking |
| 2      | <p>Write 'T' for True and 'F' for False statements.</p> <p>i) Border separates the data from surrounding cells.</p> <p>ii) Cells may contain four types of data.</p> <p>iii) We can change the font of numbers in excel.</p>  | 1x3=3 | Understanding     |
| 3      | <p>Fill in the blanks.</p> <p>i) By using ..... feature, one can revert the last changes.</p> <p>ii) There are ..... rows and ..... columns in a single worksheet.</p>  | 1x2=2 | Informative       |



**ARMY PUBLIC SCHOOL GWALIOR**  
**CLASS - VI**  
**ACADEMIC SESSION 2022-23**  
**WORKSHEET (SELF –ASSESSMENT)**




**Subject: Music (Dance)**

**Assignment No. : 1**

**Allotment Date: 17 August 2022**

| <b>S.NO</b> | <b>Answer the following questions:</b>                                  | <b>Marks</b> | <b>Skills</b> |
|-------------|---|--------------|---------------|
| 1.          | What is an increasing order?<br>i. Aaroh<br>ii. Sur                     | 1            | Informative   |
| 2.          | Whose riyaz do you do in sargam?<br>i. swar<br>ii. raag                 | 1            | Informative   |
| 3.          | How many sur in Music<br>i. 10<br>ii. 7                                 | 1            | Informative   |
| 4.          | Which sur come after ree?<br>i. Dha<br>ii. Ga                           | 1            | Informative   |
| 5.          | What is the descending called?<br>i. Aaroh<br>ii. Avroh                 | 1            | Informative   |
| 6.          | Did Tansen make it rain?<br>i. No<br>ii. Yes                            | 1            | Informative   |
| 7.          | Where was Tansen born?<br>i. Gwalior<br>ii. Indore                      | 1            | Informative   |
| 8.          | What was Tansen's real name?<br>i. Ramsetu Pandey<br>ii. Ramtanu Pandey | 1            | Informative   |
| 9.          | How many sections are there in teen taal?<br>i. 7<br>ii. 4              | 1            | Informative   |
| 10.         | Tansen was a....<br>i. Photographer<br>ii. Musician                     | 1            | Informative   |



**ARMY PUBLIC SCHOOL GWALIOR**  
**CLASS - VI**  
**ACADEMIC SESSION 2022-23**  
**WORKSHEET (SELF –ASSESSMENT)**



**Subject: Health and Physical Education**  
**Allotment Date: 17 August 2022**

**Assignment No. : 1**

| S.N | QUESTIONS  | MARKS | SKILLS/COMPETENCIES |
|-----|--|-------|---------------------|
| 1   | <b>Multiple Choice</b><br>1. "FIFA" is Governing body which game?<br>i) Hockey<br>ii) Swimming<br>iii) Kho kho<br>iv) Football | 1     | INFORMATION         |
|     | 2. How many "LAW" in football ?<br>i) 12<br>ii) 23<br>iii) 17<br>iv) 19  | 1     | INFORMATION         |
|     | 3. The shape of the "Kho-Kho" field is?<br>i) Rectangular<br>ii) Square<br>iii) Diamond<br>iv) Circle                          | 1     | INFORMATION         |
|     | 5. Which is the first law in Football?<br>i) Ball<br>ii) Off side<br>iii) The field of play<br>iv) Free kick                   | 1     | INFORMATION         |
| 2   | <b><u>FILL IN THE BLANKS:-</u></b><br>6. Less than _____ players can not be allowed for a team to play match ( 4, 3, 7,)       | 1     | INTERDISCIPLINARY   |



|   |  |   |                   |
|---|--|---|-------------------|
|   | 7. Two yellow cards are equal to _____ which means sending off offense. ( white, Green card, orange, Red card) | 1 | INTERDISCIPLINARY |
|   | 8. Chaser in kho kho is also called.....? ( Runner, defence, home player )                                     | 1 | INTERDISCIPLINARY |
| 3 | <b>State true or False:</b><br><br>9. The " throw in" a method of restarting play .<br><br>_____               | 1 | UNDERSTANDING     |
|   | 10. Running team is divided in to three groups.....  | 1 | UNDERSTANDING     |



**ARMY PUBLIC SCHOOL GWALIOR**  
**CLASS -VI**



**ACADEMIC SESSION 2022-23**  
**WORKSHEET (SELF –ASSESSMENT)**


**Subject: Art & Work Education**

**Assignment No: 1**

**Allotment Date: 17 August 2022**

| S.NO | QUESTIONS  | MARKS | SKILLS/COMPETENCIES |
|------|--|-------|---------------------|
| 1.   | <b>What is the shape with four equal sides?</b><br><br>i) Rectangle<br>ii) Square<br>iii) Triangle                     | 1     | Creativity          |
| 2.   | <b>Which of these is a basic shape?</b><br><br>i) Cube<br>ii) Circle<br>iii) Sphere                                    | 1     | Creativity          |
| 3.   | <b>A cube is a _____.</b><br><br>i) One dimensional shape<br>ii) Two dimensional Shape<br>iii) Three dimensional Shape | 1     | Creativity          |
| 4.   | <b>What is the shape of a football?</b><br><br>i) Cube<br>ii) Sphere<br>iii) Cuboid                                    | 1     | Creativity          |
| 5.   | <b>What is the shape of a birthday cap?</b><br><br>i) Cone<br>ii) Square<br>iii) Circle                                | 1     | Creativity          |
| 6.   | <b>What is the Meaning of Paper Mache?</b><br><br>i) Chewed or crushed paper<br>ii) Coloured paper<br>iii) Stencils    | 1     | Creativity          |
| 7.   | <b>The ___type of paper Mache is most often used to create molded and sculpted pieces.</b><br><br>i) Pulp<br>ii) Strip | 1     | Creativity          |

|           |  |   |            |
|-----------|--|---|------------|
|           | iii) Rough   |   |            |
| <b>8.</b> | <b>Plastic putty is required in paper Mache.</b><br>i) True<br>ii) False | 1 | Creativity |
| <b>9.</b> | <b>Madhya Pradesh is famous for paper Mache.</b><br>i) True<br>ii) False | 1 | Creativity |



**ARMY PUBLIC SCHOOL GWALIOR**  
**CLASS -VI**  
**ACADEMIC SESSION 2022-23**  
**WORKSHEET (SELF –ASSESSMENT)**



Subject: Yoga

Assignment No: 1

Allotment Date: 17 August 2022


| S.NO | QUESTIONS   | MARKS | SKILLS/COMPETENCIES |
|------|---|-------|---------------------|
| 1.   | <p><b>Fill in the blanks:</b></p> <p>i) ..... is the component of<br/><br/>Yama[Dharna/Satya].</p> <p>ii) ..... is the meaning of 'YOGA'.<br/><br/>[Wholeness/Non-violence].</p> <p>iii) _____ is the total no. of step in Surya<br/><br/>namaskar[ 12/ 15]</p> <p>iv) _____ is the total no. of elements in yoga.<br/><br/>[8/10]</p> <p>v) _____ Asana is used for improving<br/>concentration. [Varkash/ padhasat asana]</p> | 5     | Information         |
| 2.   | <p><b><u>True and False:</u></b></p> <p>i) Yoga Sutras are given by Patanjali.</p> <p>ii) Ahinsa [non-violence] is the part of Niyam.</p>   | 2     | Understanding       |
| 3.   | <p><b>Multiple Choice Questions:</b></p> <p>i) Which among these is the meaning of Yama?</p> <p>a) Restraint<br/>b) Contentment<br/>c) Unity<br/>d) Non-of-these</p>  | 3     | Critical thinking   |

ii) Which among these is the correct translation of Niyam?

- a) Non-Violence
- b) Observances
- c) Truthfulness
- d) All of these

iii) What does Yoga means?

- a) Wholeness
- b) Physical Health
- c) Emotional Health
- d) All of these



**ARMY PUBLIC SCHOOL GWALIOR  
CLASS -VI  
ACADEMIC SESSION 2022-23  
WORKSHEET (SELF-ASSESSMENT)**



**Subject: Financial Literacy**

**Assignment No. : 1**

**Allotment Date: 17 August 2022**

| <b>S NO.</b> | <b>QUESTIONS</b>                                      | <b>MARKS</b> | <b>NATURE</b> |
|--------------|---|--------------|---------------|
| 1.           | What is financial literacy?                           | 2            | Understanding |
| 2.           | Why is financial literacy important?                  | 2            | Understanding |
| 3.           | What are the 4 steps to financial literacy?           | 2            | Understanding |
| 4.           | Write the three key components of financial literacy? | 2            | Understanding |
| 5.           | How can financial literacy change your life?          | 2            | Understanding |



**ARMY PUBLIC SCHOOL GWALIOR**  
**CLASS - VI**  
**ACADEMIC SESSION 2022-23**  
**WORKSHEET (SELF –ASSESSMENT)**

**Subject: Artificial Intelligence**

**Assignment No. : 1**

**Allotment Date: 17 August 2022**

| S. NO. | QUESTIONS   | MARKS | NATURE        |
|--------|---|-------|---------------|
| 1.     | <b>Choose the correct answer.</b>   |       |               |
| i)     | Which component/s are required to perform a dialog between human and a computer?<br>a. Human<br>b. Computer<br>c. Interaction<br>d. All           | 1     | Understanding |
| ii)    | Which of these is not true for HMI?<br>a. User experience is better<br>b. Student will become lazy<br>c. High cost<br>d. Data will be less secure | 1     | Understanding |
| iii)   | Who invented 3D printing?<br>a. Steve Mann<br>b. Dr. Kodama<br>c. Ivan Sutherland<br>d. Ralph Bauer   | 1     | Understanding |
| iv)    | In which year, QWERTY keyboard was introduced?<br>a. 1873<br>b. 1875<br>c. 1885<br>d. None of these   | 1     | Understanding |
| 2.     | <b>State whether these statements are true or false.</b>  |       |               |

|      |   |   |                     |
|------|---|---|---------------------|
| i)   | Command line interface uses graphics icon.  | 1 | Analytical Thinking |
| ii)  | Stylus is not the correct example of Touch Sensitive Interface.                         | 1 | Understanding       |
| iii) | Steve Mann is known as “Father of wearable computing”.                                  | 1 | Understanding       |
| 3.   | <b>Fill in the blanks.</b>  |   |                     |
| i)   | _____interface allows audio mode to interact with the computer system.                  | 1 | Understanding       |
| ii)  | _____tracked the user’s motion to convert them into instructions to the game character. | 1 | Understanding       |
| iii) | HMI stands for_____.  | 1 | Understanding       |
|      |   |   |                     |





**ARMY PUBLIC SCHOOL GWALIOR**  
**CLASS - VI**

**ACADEMIC SESSION 2022-23**  
**WORKSHEET (SELF –ASSESSMENT)**

**Subject: Martial Art**

**Assignment No. : 1**

**Allotment Date: 17 August 2022**

| S.no | Questions   | Marks     |
|------|---|-----------|
| 1.   | Multiple choice.<br>What is the attention position of karate?<br><br>A) Heikodachi<br>B) Shikodachi<br>C) Tsuki<br>D) Uke | 4 x 1 = 4 |
| 2.   | What is the Japanese name of middle punch?<br><br>A) Chudan Tsuki<br>B) Tsuki<br>C) Jodan Tsuki<br>D) Uke                 |           |
| 3.   | Gaidan Tsuki is the Japanese name of<br><br>A) Lower punch<br>B) Upper punch<br>C) Lower block<br>D) Kick                 |           |
| 4.   | What is the meaning of kata?<br><br>A) Fight<br>B) Punch<br>C) Pre decided techniques of offence and defence<br>D) Block  |           |
|      | Fill in the blanks.   | 3 x 1 = 3 |

|    |   |                         |
|----|---|-------------------------|
| 5. | <p>_____ mawashi is used for two score</p> <p>A) Chudan<br/>B) Jodan</p>          |                         |
| 6. | <p>_____ name is called training place.</p> <p>A) DOJO<br/>B) Tsuki</p>           |                         |
| 7. | <p>IPPON is called the fight of _____</p> <p>A) One Point<br/>B) Two Point</p>    |                         |
|    | <p>True and False</p>   |                         |
| 8. | <p>Meaning of Karate is Kata. (True, False)</p>                                   | <p>3 x 1 = 3</p>        |
| 9. | <p>Naidan tsuki is called tripple punch (True, False)</p>                         |                         |
| 10 | <p>Heikodachi is Japanese name of attention position of karate. (True, False)</p> | <p>Total marks = 10</p> |