

**ARMY PUBLIC SCHOOL GWALIOR**  
**CLASS - V**  
**ACADEMIC SESSION 2022-23**  
**WORKSHEET (SELF –ASSESSMENT)**



**Subject: English**

**Assignment No. : 3**

**Allotment Date: 17 August 2022**

S. NO.	QUESTIONS	MARKS	NATURE
1	How can you say that Jijabai was not only a loving mother but also a very good administrator? _____ _____ _____	2	Information
2	Answer the following questions based on the poem, 'Trees are the Kindest Things':  (a) How do cows and birds benefit from trees? _____ _____  (b) Why do the morning sunrays first fall on the trees? _____ _____	2	Understanding
3	What are the various things that we get from trees? How does trees help to balance the weather? _____ _____ _____	2	Interdisciplinary
4	Give reasons for the following: (a) Why did the water table go down? _____ _____  (b) Why did the environmentalists want to save the Green Forest? _____ _____	2	Analytical Skill
5	<u>Underline</u> the <b>pronouns</b> and <u>circle</u> the <b>verbs</b> in the following paragraph. Once, there was a man who visited foreign lands. When he returned, all he could talk about was the wonderful adventures he had and the great deeds he had done. One of the feats he told was about a leap he made in a city called Rhodes. "The leap was so great," the man said. "No other man can make such a leap. Many persons in Rhodes saw me and can prove I am telling the truth." "No need for witnesses," said one who was listening. "Suppose that this city is Rhodes, now show how far you can jump."	2	Critical Thinking  and Problem  Solving

	<b>(Note: Use Dictionary to find hard words)</b>		
<b>6</b>	Identify the characters and main events in the chapter, 'The Return of the Lion'.	3	HOT
<b>7</b>	Write the 1 <sup>st</sup> , 2 <sup>nd</sup> and 3 <sup>rd</sup> form of the verb of following words: (a) Rise _____ (b) Bend _____ (c) Catch _____ (d) Draw _____	4	Evaluation
<b>8</b>	Write a thank you note for a stranger who helped you at the bus stop when you were returning back from your school and couldn't contact your parents.	3	Communication Skills



**ARMY PUBLIC SCHOOL GWALIOR**  
**CLASS - V**  
**ACADEMIC SESSION 2022-23**  
**WORKSHEET (SELF –ASSESSMENT)**


**Subject: Hindi**

**Assignment No. : 3**

**Allotment Date: 17 August 2022**

क्र०	प्रश्न	अंक	प्रश्नकाप्रकार
1.	प्र०1. निम्नलिखित प्रश्नों के सही उत्तर लिखो  (1) अब्राहम लिंकन ने किस प्रथा का विरोध किया?  (2) अब्राहम लिंकन को किस देश का राष्ट्रपति चुना गया?  (3) अब्राहम पिता के साथ कहाँ जाता था ?  (4) बादशाह ने युवक का वेतन कितना तय किया?  (5) 2011 के विश्वकप में कौन सी टीम विजयी रही?	5	बोधात्मक
2.	प्र०2. निम्न शब्दों के अर्थ लिखो :  1. दूरदर्शिता - _____  2. प्रतिद्वंद्वी - _____  3. खजांची - _____  4. उपदेश - _____  5. प्रतिष्ठित - _____	3	ज्ञानात्मक
3.	प्र०3. दिए गए विशेषण शब्दों से भाववाचक संज्ञा बनाओ- <b>विशेषण भाववाचक संज्ञा</b>  एक अच्छा नम्र शिष्ट ऊँचा कुशल	4	सूचनात्मक

4.	<p>प्र०4. नीचे दिए गए शब्दों में से विलोम शब्द चुनकर लिखो-</p> <p>आदर -  उपस्थित-  प्रभावित -  शक्तिशाली -  उचित -  उपलब्ध -</p>	4	रचनात्मक
5.	<p>प्र०5. निम्नलिखित प्रश्नोंके उत्तर लिखो –</p> <p>प्र०1. एक सफल बल्लेबाज में क्या-क्या गुण होते हैं ?  उ०1. _____  _____</p> <p>प्र०2. अब्राहम लिंकन के जीवन से हमें क्या प्रेरणा मिलती है ?  उ०2. _____  _____</p> <p>प्र०3. व्यक्ति के कौन-कौन से गुण उसे लक्ष्य तक पहुँचाते हैं? अपने विचार लिखो।  उ०3. _____  _____</p>	3	विश्लेषणात्मक
6.	<p>प्र०6. . वाक्यांश के लिए एक शब्द लिखो-</p> <p>(1)सरकारी आय-व्यय की देखरेख करनेवाला –</p> <p>(2)किए हुए उपकार को माननेवाला –</p> <p>(3)खज़ाने की देखरेख करनेवाला -</p> <p>(4)जिसपर विश्वास किया जा सके –</p> <p>(5)ईमानदारी से काम करनेवाला -</p>	5	उच्चस्तरीयचिंतन



**ARMY PUBLIC SCHOOL GWALIOR**  
**CLASS - V**  
**ACADEMIC SESSION 2022-23**  
**WORKSHEET (SELF –ASSESSMENT)**

**Subject: Mathematics**

**Assignment No. : 3**

**Allotment Date: 17 August 2022**

S. NO.	QUESTIONS	MARKS	NATURE
1	Fill in the blanks. (a) $0 \div 249 =$ _____ (b) $693 \div$ _____ $= 693$ (c) $4675 \div$ _____ $= 1$ (d) $9345 \div 100$ : Q _____, R = _____	4x0.5=2	Understanding
2	State 'True' or 'False' for following statements. (a) A factor cannot be greater than the number. (b) Co-prime numbers are prime also. (c) 91 is a composite number. (d) If a number is divisible by 25, it must be divisible by 10.	4x0.5=2	HOTS
3	<b>Tick the correct answer from the given options:</b>  1.Dividend = Divisor x Quotient when remainder equals [a] 0 [b] 1 [c] Divisor [d] Quotient  2. The number of dozens if the number of objects is 1680 is [a] 80 [b] 120 [c] 140 [d] 160  3. What number should be multiplied by 68 to give 4216? [a] 48 [b] 62 [c] 76 [d] 82  4.Which of the number have only one factor? [a] 0 [b] 1 [c] 2 [d] 3 2.  5.Which of the following number is not divisible by 3? [a] 3162 [b] 7956 [c] 5482 [d] 8085	5x1=5	Critical thinking

4	<p><b>Solve the following questions: -</b></p> <p>(i) Find the quotient and remainder and also verify your answer. (a) <math>83254 \div 58</math> (b) <math>547802 \div 97</math></p> <p>(ii) Find the HCF of following numbers by long division method. (a) 210, 420 and 540</p> <p>(iii) Find the prime factors of 88 and 120</p> <p>(iv) Find the dividend when Divisor = 187, Quotient = 3078, , Remainder = 93</p> <p>(v) <math>72360 \div 81</math> find the quotient and remainder</p>	5x1=5	Interdisciplinary
5	<p><b>Solve the following questions:</b></p> <p>(i) If a number is divided by 573, it gives 391 as quotient and 305 as remainder. Find the number</p> <p>(ii) What should be added to 459684 so that it becomes exactly divisible by 187?</p> <p>(iii) The HCF of two numbers is 30 and their LCM is 2310. If one of the numbers is 210, find the other number</p>	2x3 =6	Problem Solving



**ARMY PUBLIC SCHOOL GWALIOR**  
**CLASS - V**  
**ACADEMIC SESSION 2022-23**  
**WORKSHEET (SELF –ASSESSMENT)**

**Subject: EVS**


**Assignment No. : 3**

**Allotment Date: 17 August 2022**

S. NO.	QUESTIONS	MARKS	NATURE
Q1	Answer the following questions.  i. Give any two examples of aquatic animals.  ii. Write any four names of the animals whose ears can be seen.	1x2=2	Information
Q2	i. What is echo?  ii. Why do the earthworms known as a friend of farmers?	2X2=4	Understanding
Q3	i. What is the use of Gobar gas?  ii. Why do snake keep flickering their forked tongue?	2x2=4	HOT
Q4	i. How do you feel when you walk near a heap of garbage? Think of the children who spend the	2x3=6	Interdisciplinary

	<p>whole day picking things from such garbage. ?</p> <p>ii. Give any three examples of animals that may have a very strong sense of sight, hearing and smell.</p> <p>iii. In the chapter you read that snakes do not have ears which you can see. Can the snake hear the 'been' or does it dance when the 'been' moves? What do you think?</p>		
<b>Q5</b>	<p>i. For an activity find a quiet place in your school. Tell one of your friends to stand at a short distance and ask him/her to say something softly. The rest of you should listen carefully. Then all of you put your hands behind your ears. Let the same child say something again as softly as before. In which case was the sound sharper? Ask your friends too?</p>	<b>3x3=9</b>	Analytical Skill
	<p>ii. What kind of questions came to your mind after seeing that animal show?</p>		Critical Thinking and Problem Solving
	<p>iii. Why do we need to sleep?</p>		Evaluation
<b>Q 6.</b>	Discuss the different ways of communication in animals?	<b>5x1=5</b>	Communication Skills





**ARMY PUBLIC SCHOOL GWALIOR**  
**CLASS - V**  
**ACADEMIC SESSION 2022-23**  
**WORKSHEET (SELF –ASSESSMENT)**

**Subject: Computer**

**Assignment No. : 1**

**Allotment Date: 17 August 2022**

S.NO.	QUESTIONS	MARKS	NATURE
1.	<p>Tick the correct answer:</p> <p>1. .... is used for controlling the position of the text. a. Ruler                      b. Tab                                      c. Columns</p> <p>2. .... refers to the intersection of a row and a column in the table. a. Record                      b. Cell                                      c. Label</p> <p>3. By default, Word aligns the table text to the ..... inside each cell. a. center                      b. right                                      c. left</p> <p>4. .... makes the text appear above the regular line of text. a. Subscript                      b. Shadow                                      c. Superscript</p> <p>5. .... produces a personalized letter for more than one person. a. Mail Merge                      b. AutoCorrect                                      c. AutoFormat</p>	1X5=5	Information
2.	<p>Write 'T' for True and 'F' for False statements.</p> <p>1. Word is a popular word processing program.</p> <p>2. You cannot insert a preset table in a Word document.</p> <p>3. Superscript and subscript are used only in mathematical formulas.</p>	3X1=3	Interdisciplinary

<b>3.</b>	Fill in the blanks. 1. To start Mail Merge, click on ..... tab.  2. To select everything in the cell, ..... on it.	1X2=2	Analytical Skill
-----------	---	-------	------------------



**ARMY PUBLIC SCHOOL GWALIOR**  
**CLASS - V**  
**ACADEMIC SESSION 2022-23**  
**WORKSHEET (SELF –ASSESSMENT)**

Subject: Art and Work Education  
Allotment Date: 17 August 2022

Assignment No. : 1

S.NO	QUESTIONS	MARKS	SKILLS/ COMPETENCIES
1.	<b>What is the shape with four equal sides?</b>  A. Rectangle B. Square C. Triangle	1	Creativity
2.	<b>Which shapes has three sides?</b> A. Heptagon B. Triangle C. Rectangle	1	Creativity
3.	<b>Which is a 3d Shape?</b> A. Cube B. Triangle C. Square	1	Creativity
4.	<b>What is the shape of a football?</b> A. Cube B. Sphere C. Cuboid	1	Creativity
5.	All colours are made from Red,Blue and Yellow. A. True B. False	1	Creativity
6.	<b>What is the shape of birthday cap?</b>  A. Cone B. Cube C. Sphere	1	Creativity

<b>7.</b>	<p>Secondary colours are created by mixing two_____.</p> <p>A .Netural colours</p> <p>B . Primary colours</p> <p>C .Interm Intermediate or Tertiary colours</p>	<b>1</b>	<b>Creativity</b>
<b>8.</b>	<p>What colours is the result of mixing red+Yellow+blue?</p> <p>A. Violet</p> <p>B. Brown</p> <p>C. Orange</p>	<b>1</b>	<b>Creativity</b>
<b>9.</b>	<p>Yellow,red ,and Orange are cool colours.</p> <p>A. True</p> <p>B. False</p>	<b>1</b>	<b>Creativity</b>
<b>10.</b>	<p>Blue,green and purple are cool colours.</p> <p>A. True</p> <p>B. False</p>	<b>1</b>	<b>Creativity</b>



**ARMY PUBLIC SCHOOL GWALIOR**  
**CLASS - V**  
**ACADEMIC SESSION 2022-23**  
**WORKSHEET (SELF –ASSESSMENT)**


**Subject: Music (Dance)**

**Assignment No. : 1**

**Allotment Date: 17 August 2022**

S.NO	Answer the following questions:	Marks	Skills
1.	Gaayan word is used for? A. Dance B. Instrument C. Singing	1	Informative
2.	How many classical Dance in India? A. 10 B. 8 C. 9	1	Informative
3.	The kalbeliya dance is popular in the state. A. Madhya pradesh B. Rajasthan C. Maharashtra	1	Informative
4.	_____ is the city of Swar Samrat Tansen. A. Bhopal B. Indore C. Gwalior	1	Informative
5.	Which of the following popular folk dances is associated with Maharastra state. A. Chakri B. Ghumar C. Lavni	1	Informative
6.	The combination of singing, dancing and playing instrument is called? A. Dance B. instrument C. Music	1	Informative
7.	Which is the purest form of classical dancing in North part of India. A.Kathak B.Mohiniattam C.Kuchipudi	1	Informative
8.	How many swaras are there in music? A. 9 B. 7 C. 4	1	Informative
9.	Which is the classical dance of Orissa? A. Mohiniattam B. Odissi	1	Informative

	C. Satriya		
10.	Who is called the swar Samrat? A. Zakir Hussain B. Pt. Birju maharaj C. Tansen	1	Informative



**ARMY PUBLIC SCHOOL GWALIOR**  
**CLASS - V**  
**ACADEMIC SESSION 2022-23**  
**WORKSHEET (SELF –ASSESSMENT)**

**Subject: Martial Art**

**Assignment No. : 1**

**Allotment Date: 17 August 2022**

S.no	Questions	Marks
1.	Multiple choice. What is the attention position of karate? <ul style="list-style-type: none"><li>• Heikodachi</li><li>• Shikodachi</li><li>• Tsuki</li><li>• Uke</li></ul>	4 x 1 = 4
2.	What is the Japanese name of middle punch? <ul style="list-style-type: none"><li>• Chudan Tsuki</li><li>• Tsuki</li><li>• Jodan Tsuki</li><li>• Uke</li></ul>	
3.	Gaidan Tsuki is the Japanese name of <ul style="list-style-type: none"><li>• Lower punch</li><li>• Upper punch</li><li>• Lower block</li><li>• Kick</li></ul>	
4.	Which word is used for greeting in karate? <ul style="list-style-type: none"><li>• Ous</li><li>• Tus</li><li>• Wos</li><li>• Cos</li></ul>	
5.	Fill in the blanks. _____ mawashi is used for two score <ul style="list-style-type: none"><li>• Chudan</li><li>• Jodan</li></ul> _____ name is called training place.	3 x 1 = 3
6.	<ul style="list-style-type: none"><li>• DOJO</li><li>• Tsuki</li></ul>	

7.	<p>The way of fight with empty hand is _____.</p> <ul style="list-style-type: none"> <li>• Karate-Do</li> <li>• Fight</li> </ul> <p>True and False</p>	3 x 1 = 3
8.	Meaning of Karate is Kata. (True, False)	
9.	Naidan tsuki is called tripple punch (True, False)	
10	Heikodachi is Japanese name of attention position of karate. (True, False)	
		Total marks = 10





**ARMY PUBLIC SCHOOL GWALIOR**  
**CLASS - V**  
**ACADEMIC SESSION 2022-23**  
**WORKSHEET (SELF –ASSESSMENT)**

**Subject: Health and Physical Education**  
**Allotment Date: 17 August 2022**

**Assignment No. : 1**

S.NO	QUESTIONS	MARKS	SKILLS/ COMPETENCIES
1.	<p><b>Tick The Correct Answer</b></p> <p>Q-1- Time duration of Kabaddi match ?</p> <p>a.60 Minutes b.50 Minutes c.40 Minutes d.30 Minutes</p> <p>Q-2 Kabaddi originated in which country?</p> <p>a.India b.Pakistan c.France d.Bhutan</p> <p>Q-3- Full form of PKL is?</p> <p>a.Pro kabaddi league b.Professional kabaddi league c.Pacific kabaddi league d.Point kabaddi league</p> <p>Q-4- How many players play in Kabaddi match?</p> <p>a.12 b.10 c.08 d.07</p>	4	Informative
2	<p><b><u>Fill in the blanks</u></b></p> <p>Q-5 Pro kabaddi league started</p>	3	Informative

	<p>in_____.(2015,2014)</p> <p>Q-6 There are_____ halves in Kabaddi(1,2)</p> <p>Q-7- Kabaddi originated in _____ (India,france)</p>		
<b>3</b>	<p><b><u>True False</u></b></p> <p>Q-8- Players play during the match of kabaddi? D. True E. False</p> <p>Q-09- Bangladesh is the current world champion of kabaddi? D. True E. False</p> <p>Q-10 Kabaddi is a body contact game.? C. True D. False</p>	<b>3</b>	Informative